



ARMY PUBLIC SCHOOL GWALIOR
CLASS - III
ACADEMIC SESSION 2022-23
WORKSHEET (SELF –ASSESSMENT)


Subject: English

Assignment No. : 3

Allotment Date: 17 August 2022

S. No.	Questions	Marks	Nature
1.	<p><u>Vocabulary</u></p> <p>Write the meanings of the following words -</p> <ol style="list-style-type: none">1. ferry -2. vast -3. grown-ups -4. courageous -5. fire- flies -	5x1=5	Information
2.	<p>Do as directed -</p> <ol style="list-style-type: none">1. + patient (Add prefixes 'im' or 'in').2. Laxmi Bai was the queen of Jhansi. was one of the leading figures of the Indian Rebellion of 1857.(Fill with the correct personal pronouns given in the bracket).3. pish (Unscramble the word).4. Look at the rainbow. It/He is very beautiful. (Tick the correct pronoun).5. I am going to DB Mall. (Circle the subject pronoun).	5x1=5	Problem solving
3.	<p>Fill in the blanks with is, am, are, has or have:</p> <ol style="list-style-type: none">1. I not a participant in the story telling competition.2. Riddhi a pretty dress.	4x1/2=2	Understanding

	<p>3. Do you a pen?</p> <p>4. We Indians.</p>		
<p>4.</p>	<p>Answer the following questions :</p> <p>1. Where had the traveller kept the penny?</p> <p>_____</p> <p>—</p> <p>_____</p> <p>—</p> <p>2. Why was the New Year celebration special for Bina?</p> <p>_____</p> <p>—</p> <p>_____</p> <p>—</p> <p>_____</p> <p>—</p> <p>3. What was the name given to the creature by Bina?</p> <p>_____</p> <p>—</p> <p>_____</p> <p>—</p> <p>4. How much would the boatman charge to ferry the traveller across the water?</p> <p>_____</p> <p>—</p> <p>_____</p> <p>—</p>	<p>4x2=8</p>	<p>HOT</p>



ARMY PUBLIC SCHOOL GWALIOR
CLASS - III
ACADEMIC SESSION 2022-23
WORKSHEET (SELF -ASSESSMENT)

Subject: Hindi

Assignment No. : 3

Allotment Date: 17 August 2022

संख्या	प्रश्न	अंक	प्रकृति
प्र 1.	<p>दिए गए गद्यांश को पढ़कर उसके नीचे लिखे प्रश्नों के उत्तर लिखो-</p> <p>अमित की राशन की दुकान थी। उसकी दुकान पर दालें, चावल और आटे से लेकर नमकीन, बिस्कुट आदि सब कुछ मिलता था। ऐसी कोई चीज़ न होगी जो उसकी दुकान पर न मिलती हो। एक बार दुकान पर रखी शहद की बोतल उलट गई। चारों ओर से कई मक्खियाँ उस बिखरे शहद पर टूट पड़ीं। सब कुछ भूलकर वे शहर चाटने लगीं। वे शहद चाटने में इतनी मगन हो गईं कि उन्हें पता ही नहीं चला कि कब उनके पैर शहद में चिपक गया है। अब उनके लिए उड़ना मुश्किल हो गया। उन्हें अपने लालच पर पछतावा होने लगा।</p> <p>अभ्यास के लिए नीचे लिखे प्रश्नों के उत्तर दीजिए :-</p> <p>(i) अमित की किस चीज़ की दुकान थी?</p> <p>_____</p> <p>(ii) अमित की दुकान पर मिलने वाली कोई दो चीज़ों के नाम लिखे?</p> <p>_____</p> <p>_____</p>	5x1=5	बोधात्मक

	<p>(iii) अमित की दुकान में किस चीज की बोतल उलट गई थी?</p> <hr/> <hr/> <p>(iv) किस को लालच का पछतावा होने लगा?</p> <hr/> <p>(v) शहद में मक्खियों का क्या चिपक गया था?</p> <hr/> <hr/> <hr/>		
प्र 2	<p>(अ) सही सर्वनाम चुन कर खाली स्थान में लिखें-</p> <p>(i) _____ तुम्हारी बहन हूँ। (हम/ मैं / तुम)</p> <p>(ii) माँ _____ बहुत ध्यान रखती है। (मेरे / मेरी / मेरा)</p> <p>(iii) _____ साथ ही रहेंगे। (मैं / तुम / हम)</p> <p>(ब) निम्नलिखित मुहावरों का अर्थ लिखे और मुहावरे का वाक्य में प्रयोग करें-</p> <p>(i) आँख का तारा होना - _____</p> <p>वाक्य- _____</p> <p>_____</p> <p>(ii) आग-बबूला होना- _____</p>	5x1=5	अन्तः विषयात्मक

	वाक्य- _____ _____		
प्र 3.	निम्नलिखित शब्दों के अर्थ लिखो - i) अँगोछा. ii) सादगी - iii) राष्ट्रपति iv) उत्साह - v) स्वयंसेवक	5x1=5	
प्र 4.	(अ) निम्नलिखित प्रश्नों के उत्तर दो - (i) व्यक्ति ने गज्जन की कैसे मदद की? (ii) व्यक्ति ने बाल्टी क्यों माँगी? 	5x1=5	विश्लेषणात्मक

.....

(iii) राजेंद्र बाबू कैसे व्यक्ति थे?

.....

.....

.....

(iv) गज्जन ने सभा में सामने बैठे व्यक्ति को गिलास पकड़ाया वह कौन थे?

.....

.....

.....


(ब) मूल्यपरक प्रश्न –

(i) आप राजेंद्र बाबू के किन गुणों को अपनाना चाहेंगे ?

.....

.....

--	--	--	--



ARMY PUBLIC SCHOOL GWALIOR
CLASS - III
ACADEMIC SESSION 2022-23
WORKSHEET (SELF –ASSESSMENT)

Subject: Mathematics

Assignment No. : 3

Allotment Date: 17 August 2022

S. No.	Questions	Marks	Nature
1.	<p>Solve the following questions :</p> <p>(a) Find the difference: (i) $2434 - 1123$ (ii) $7895 - 6689$ (iii) $2000 - 1435$</p> <p>(b) Multiply: (i) 33×24 (ii) 145×12 (iii) 100×10</p>	6x1=6	Problem solving
2.	<p>Choose the correct option:</p> <p>(i) What will come next 185, 160, 135, _____</p>	4x1=4	Information

	<p>(a) 120 (b) 100 (c) 110</p> <p>(ii) What must be subtracted from 9734 to get 5432? (a) 3482 (b) 4302 (c) 4382</p> <p>(iii) The number of times 12 in 108 is (a) 3 (b) 6 (c) 9</p> <p>(iv) The product of a number and one is always - (a) The number itself (b) the product (c) 0</p>		
<p>3.</p>	<p>Write down a word problem for the following facts:</p> <p>(i) $33 \times 14 = 462$ </p> <p>(ii) $522 - 120 = 402$ </p>	<p>2x1=2</p>	<p>Understanding</p>
<p>4.</p>	<p>Solve the following word problems:</p> <p>1. A fruit seller has 42 boxes. Each box has 27 fruits. How many fruits are there in the boxes? </p> <p>2. A jewellery box costs Rs. 5044. How much such 7 boxes will cost? </p>	<p>4x2=8</p>	<p>HOT</p>

.....

3. The sum of two numbers is 5089. If one of them is 3214, find the other number.

.....

.....

.....

.....

.....

.....

.....

.....

4. The price of a T.V set is Rs. 8000 and that of washing machine is Rs. 7741. Which costs more and by how much?

.....

.....


.....

.....

.....

.....

.....



ARMY PUBLIC SCHOOL GWALIOR
CLASS - III
ACADEMIC SESSION 2022-23
WORKSHEET (SELF -ASSESSMENT)

Subject: EVS

Assignment No. : 3

Allotment Date: 17 August 2022

S. No.	Questions	Marks	Nature
1.	<p>Answer the following questions:</p> <p>(a) Name different types of beaks. Describe any two.</p> <p>.....</p> <p>.....</p> <p>.....</p> <p>.....</p> <p>.....</p> <p>.....</p> <p>(b) What is the difference between vegetarians and vegans?</p> <p>.....</p> <p>.....</p>	3 x 2 =6	Information

	<p>.....</p> <p>.....</p> <p>(c) What is child labour? How can we help working children?.</p> <p>.....</p> <p>.....</p> <p>.....</p> <p>.....</p> <p>.....</p> <p>.....</p>		
<p>2.</p>	<p>Fill in the blanks:</p> <p>(a) _____ is a flightless bird.</p> <p>(b) Preying birds have large curved claws called_____.</p> <p>(c) The largest continent is _____.</p> <p>(d) _____ mends our shoes.</p> <p>(e) A diet that has all nutrients in correct proportion is called _____.</p>	<p>5x 1=5</p>	<p>Understanding</p>

3.	<p>State whether the following statements are 'True' or 'False':</p> <p>(a) There are seven continents in the world. _____</p> <p>(b) Ostriches have the largest eyes than of any land animal. _____</p> <p>(c) The largest bird in the world is Ostrich. _____</p> <p>(d) Our body is made up of 40 %of water. _____</p>	4x1=4	Knowledge
4.	<p>Give two examples of each:</p> <p>1. Any two continents _____, _____</p> <p>2. Community helpers _____, _____</p> <p>3. Fatty foods _____, _____</p> <p>4. Birds with long tube like beak _____, _____</p> <p>5. Perching birds _____, _____</p>	5 x1=5	<p>Interdisciplinary & Critical thinking</p>



ARMY PUBLIC SCHOOL GWALIOR
CLASS - III
ACADEMIC SESSION 2022-23
WORKSHEET (SELF -ASSESSMENT)

Subject: Computer


Assignment No. : 1

Allotment Date: 17 August 2022

S.NO	QUESTION	MARKS	
1.	<p>Write True or False</p> <p>1. Paint 3D is an updated version of MS Paint.</p> <p style="text-align: center;"><input type="checkbox"/></p> <p>2. We can change the colour of 3D objects according to our choice.</p> <p style="text-align: center;"><input type="checkbox"/></p> <p>3. 3D shapes are also known as flat shapes.</p> <p style="text-align: center;"><input type="checkbox"/></p> <p>4. Paint 3D stickers come in the form of shapes, traditional stickers and surface textures.</p> <p style="text-align: center;"><input type="checkbox"/></p>	4x1=4	Understanding
2.	<p>Choose the correct answer.</p>	4x0.5=2	Analyzing

- | | | | |
|--|--|--|--|
| | <ol style="list-style-type: none">1. In 2D and 3D, the D specifies.....involved in the shapes.<ol style="list-style-type: none">a. degreesb. dimensionsc. designs2.option is used for selecting a Filter colour, or the lighting source positing.<ol style="list-style-type: none">a. filterb. effectsc. select3. We can erase a shape with.....tool.<ol style="list-style-type: none">a. Eraserb. Removerc. Select4. We can use.....tools to see the 3D effect.<ol style="list-style-type: none">a. Stickerb. Filterc. Rotation | | |
|--|--|--|--|

3.	Answer the following Questions. 1. What is the use of paint 3D software? _____ _____ _____ _____ <hr/> 2. From where do we add 3D objects in a project? _____ _____ _____ _____ _____	2x2=4	Communication Skill
-----------	--	--------------	----------------------------




ARMY PUBLIC SCHOOL GWALIOR
CLASS - III
ACADEMIC SESSION 2022-23
WORKSHEET (SELF –ASSESSMENT)

Subject: G.K

Assignment No. : 1

Allotment Date: 17 August 2022

SNO.	QUESTIONS	MARKS	NATURE
1.	Unscramble the following words- 1.KOCCU - 2.ELE - 3.JAARTSAHN - 4.ANGOT -	4X1=4	Understanding


2.	True or False : 1. A choreographer teaches dance steps to the dancers. 2. The Covaxin is developed by Bharat Biotech. 3. The heart circulates the blood in our body about 1,500 times each day. 	3x1=3	Analytical Skill
3.	Match the following pictures with their names: - 1.  - Aloe Vera	3x1=3	

2.



- Charles babbage

3.



- Starfish



ARMY PUBLIC SCHOOL GWALIOR
CLASS - III
ACADEMIC SESSION 2022-23
WORKSHEET (SELF –ASSESSMENT)

Subject: Art and Work Education
Allotment Date: 17 August 2022

Assignment No. : 1

SNO.	QUESTIONS	MARKS	NATURE
1.	What is the shape with four equal sides? A. Rectangle B. Square C. Triangle	4X1=4	Understanding & Creativity
2.	Which shape has three sides? A. Heptagon B. Triangle C. Rectangle		
3.	Which is a 3d Shape? A. Cube B. Triangle C. Square		
4.	What is the shape of a football?		

	<p>A. Cube B. Sphere C. Cuboid</p>		
5.	<p>All colours are made from Red, Blue and Yellow.</p> <p>A. True B. False</p>		
6.	<p>What is the shape of birthday cap?</p> <p>A. Cone B. Cube C. Sphere</p>		
7.	<p>Secondary colours are created by mixing two_____.</p> <p>A .Netural colours B . Primary colours C .Interm Intermediate or Tertiary colours</p>		
8.	<p>What colours is the result of mixing Red+Yellow+Blue?</p> <p>A. Violet B. Brown C. Orange</p>		
9.	<p>Yellow, Red and Orange are cool colours.</p> <p>A. True B. False</p>		
10.	<p>Blue, green and purple are cool colours.</p> <p>A. True B .False</p>		



ARMY PUBLIC SCHOOL GWALIOR
CLASS - III
ACADEMIC SESSION 2022-23
WORKSHEET (SELF –ASSESSMENT)

Subject: Health and Physical Education
Allotment Date: 17 August 2022

Assignment No. : 1

1.	In dodge ball how many teams participate at a time? A) 1 B) 4 C) 3 D) 2	1	INFORMATION
2.	What is the purpose of recreational games? A) Fitness with fun and games B) Earn more chocolate C) To cry D) To get angry	1	INFORMATION
3.	On which command children will pick the bottle? A) Take B) Snatch c) Push D) Buy	1	INFORMATION

4.	<p>The team members/anyone playing a game are/is called a:-</p> <p>A) Player</p> <p>B) Audience</p> <p>C) Referee</p> <p>D) Conductor</p>	1	INFORMATION
5.	<p>FILL IN THE BLANKS: -</p> <p>Recreational games make students_____</p> <p>A) Sad</p> <p>B) Happy</p> <p>C) Mad</p> <p>D) Bored</p>	1	INTERDISCIPLINARY
6.	<p>Recreational games are good for student's_____.</p> <p>A) health</p> <p>B) ground</p> <p>C) cone</p> <p>D) dress</p>	1	INTERDISCIPLINARY

7.	<p>Recreational games can be helpful to encourage _____ and _____ among students during their leisure time.</p> <p>A) Play and activity B) Study and sit C) Sit and jump D) Run and walk</p>	1	INTERDISCIPLINARY
8.	<p><u>TRUE OR FALSE</u></p> <p>We can play recreational games indoor as well as outdoor. (True/False)</p>	1	INTERDISCIPLINARY
9.	<p>We play games to be healthy and strong.</p> <p>(True/False)</p>	1	UNDERSTANDING
10.	<p>Junk food is good for health. (True/False)</p>	1	UNDERSTANDING



ARMY PUBLIC SCHOOL GWALIOR
CLASS - III
ACADEMIC SESSION 2022-23
WORKSHEET (SELF –ASSESSMENT)


Subject: Martial Art

Assignment No. : 1

Allotment Date: 17 August 2022

1.	What is the attention position of karate? a) Heikodachi b) Shikodachi c) Tsuki d) Uke		
2.	What is the Japanese name of middle punch? a) Chudan Tsuki b) Tsuki c) Jodan Tsuki d) Uke		
3.	Gaidan Tsuki is the Japanese name of a) Lower punch b) Upper punch c) Lower block d) Kick	10X1=10	INFORMATION
4.	Which word is used for greeting in karate? a) Ous b) Tus c) Wos d) Cos		
Q.2	Fill in the blanks :		

5.	<p>_____ mawashi is used for two score</p> <p>a) Chudan b) Jodan</p>		
6.	<p>_____ name is called training place.</p> <p>a) DOJO b) Tsuki</p>		
7.	<p>The way of fight with empty hand is _____.</p> <p>a) Karate-Do b) Fight</p>		
Q.3	<p>True/False</p>		
8.	<p>Meaning of Karate is Kata. (True/ False)</p>		
9.	<p>Japanese name of punch is uke. (True/ False)</p>		
10.	<p>Heikodachi is Japanese name of attention position of karate. (True/ False)</p>		



ARMY PUBLIC SCHOOL GWALIOR
CLASS - III
ACADEMIC SESSION 2022-23
WORKSHEET (SELF –ASSESSMENT)

Subject: Music (Dance)

Assignment No. : 1

Allotment Date: 17 August 2022

S.NO	Answer the following questions:	Marks	Skills
1.	Do you like patriotic song? A. Yes B. No	1	Informative
2.	Which type of song "Aye mere watan ke logo" is? A. folksong B. Patriotic song	1	Informative
3.	Who sang this song "Aye mere watan ke logo"? A. Lata mangeskar B. Usha mangeskar	1	Informative
4.	Which type of song do we sing in Patriotic song? A. Gajal B. Patriotic	1	Informative
5.	Who wrote the song "Sare Jahan Se Sachha"? A. Muhammd Iqbal B. Rabindra Nath Tagore	1	Informative
6.	What is the meaning of 'Bhumi Pranam'? A. Asking permission from the earth before dancing B. Asking permission from the sky before dancing.	1	Informative

7.	How many Taalis are there in teen taal? A. 5 B. 3	1	Informative
8.	How many Khalis are there in teen taal? A. 1 B. 4	1	Informative
9.	How many sections are there in teen taal? A. 7 B. 4	1	Informative
10.	What is the other name of teen taal? A. Trio taal B. Tri taal	1	Informative