

ARMY PUBLIC SCHOOL GWALIOR
CLASS - II
ACADEMIC SESSION 2022-23
WORKSHEET (SELF –ASSESSMENT)



Subject: English

Assignment No. : 3

Allotment Date: 17 August 2022

S.NO.	QUESTIONS	MARKS20	NATURE
1	Match the words in the columns to form sentences. Column A Column B 1. The lamb is a) will become strong and brave 2. The poet will b) by the poet` 3. The lamb will be fed c) without his mother 4. After some days d) take care of the lamb	(4x.5=2)	Information
2	Match the words with their meaning. Column A Column B 1. Shelter a) to cover 2. Wrap b) a doctor for animals 3. Injured c) to protect 4. Vet d) hurt	(4x.5=2)	Understanding
3	Tick the correct describing words- 1.Piyush thinks it is a (bad/good) idea to help animals. 2. An elephant has (big/small) ears. 3. The 'Help Club has (many/no) children.	(3x 1)=3	Critical thinking
4	Fill in the blanks with correct pronouns- 1. Ram is a good boy. ____ is my best friend. 2. Varun and Sohanare friends. ____ play football together.	(4x.5) =2	Understanding

	<p>3. Dog is a pet animal ____ is faithful animal.</p> <p>4. Siyaworks hard. ____ is very intelligent.</p>		
5	<p>Answer the following questions.</p> <p>(a) What has happened to the dog?</p> <p>.....</p> <p>.....</p> <p>(b) Why does Abir thank Ruhan?</p> <p>.....</p> <p>.....</p> <p>(c) Where was the small lamb?</p> <p>.....</p> <p>.....</p>	(3x2=6)	Interdisciplinary
6	<p style="text-align: center;">Creative Writing My Pet</p> <p>1.</p> <p>2.</p> <p>3.</p> <p>4.</p> <p>5.</p>	(5x1=5)	Creative Thinking



ARMY PUBLIC SCHOOL GWALIOR
CLASS - II
ACADEMIC SESSION 2022-23
WORKSHEET (SELF -ASSESSMENT)



Subject: Hindi









Assignment No. : 3

Allotment Date: 17 August 2022

संख्या		अंक	प्रकृति
प्र - 1	<p>वाक्यपूरेकरो-</p> <p>१. नमकबहुत----- दाममेंबिकरहाथा।</p> <p>२. बोझकमहोजानेसेगटरू---- हुआ।</p> <p>३. ----तोबोझसेझुकाजारहाहूँ।</p> <p>४. गटरूरास्ते--- सोचताजारहाथा।</p>	4x1=4	बोधार्थक
प्र -2	<p>एककेअनेकलिखिए।</p> <p>१ . पेंसिल.....</p> <p>२. झूला.....</p> <p>३. किताब</p> <p>४. बच्चा.....</p>	4x0.5=2	सूचनापरक
प्र-3	<p>शब्दों को सही क्रम में लिखकर वाक्य दोबारा लिखो ।</p> <p>१. है बाहर मौसम सुहाना कितना ।</p> <p>.....</p> <p>.....</p> <p>.....</p> <p>२. मनु खेलेंगे और अब साँवरी साथ हमारे</p> <p>.....</p> <p>.....</p> <p>.....</p> <p>३. है कोई साथ नहीं खेलता हमारे ।</p> <p>.....</p> <p>.....</p> <p>.....</p>	3x 1=3	गहन सोच और समस्या समाधान

<p>प्र-4</p>	<p>निम्न शब्दों के अर्थ लिखो ।</p> <p>१. अचानक - -----</p> <p>२. नकली- -----</p> <p>३. दंग- -----</p> <p>४. तपाक- -----</p>	<p>2x1=2</p>	<p>उच्चस्तरीय चिंतन</p>
<p>प्र-5</p>	<p>नीचे दिए गए प्रश्नों के उत्तर लिखो ।</p> <p>१. पानी में जाकर रुई भारी क्यों हो गई?</p> <p>२. व्यापारी ने बाजार से नमक क्यों खरीदा?</p> <p>३. पायल के माता पिता क्यों उदास हो गए थे??</p>	<p>3x2=6</p>	<p>विश्लेशणात्मक</p>
<p>प्र-6</p>	<p>अनुच्छेद लेखन मेरा बस्ता</p> <p>1.</p> <p>2.</p> <p>3.</p> <p>4.</p> <p>5.</p>	<p>6x0.5=3</p>	<p>भाषाई कौशल</p>

	6.		
--	------------------	--	--

<p>3.</p>	<p>Circle the equation that describes the group of objects</p> <p>Circle the equation that describes the group of objects.</p> <div style="display: flex; justify-content: space-around;"> <div style="text-align: center;">  <p>5 x 4 = 5 x 2 = 3 x 2 = 4 x 2 =</p> <p>How many cherries are there? _____</p> </div> <div style="text-align: center;">  <p>2 x 4 = 2 x 8 = 2 x 6 = 4 x 8 =</p> <p>How many spider legs are there? _____</p> </div> </div> <hr/> <div style="display: flex; justify-content: space-around;"> <div style="text-align: center;">  <p>9 x 3 = 6 x 3 = 3 x 9 = 3 x 3 =</p> <p>How many penguins are there? _____</p> </div> <div style="text-align: center;">  <p>5 x 7 = 4 x 2 = 2 x 7 = 2 x 5 =</p> <p>How many roses are there? _____</p> </div> </div>	<p>4x1=4</p>	<p>Interdisciplinary</p>
<p>4.</p>	<p>Divide the food between the kids & write the division equation.</p> <div style="display: flex; justify-content: space-around;"> <div style="text-align: center;">  <p>____ ÷ ____ = ____</p> <p>How many bananas does each kid get? _____</p> </div> <div style="text-align: center;">  <p>____ ÷ ____ = ____</p> <p>How many muffins does each kid get? _____</p> </div> </div> <hr/> <div style="display: flex; justify-content: space-around;"> <div style="text-align: center;">  <p>____ ÷ ____ = ____</p> <p>How many pretzels does each kid get? _____</p> </div> <div style="text-align: center;">  <p>____ ÷ ____ = ____</p> <p>How many cherries does each kid get? _____</p> </div> </div>	<p>4x1=4</p>	<p>Understanding</p>



ARMY PUBLIC SCHOOL GWALIOR
CLASS - II
ACADEMIC SESSION 2022-23
WORKSHEET (SELF –ASSESSMENT)






Subject: EVS

Assignment No. : 3

Allotment Date: 17 August 2022

S.NO	QUESTIONS	MARKS20	NATURE
1.	Tick the correct answer- 1. It is used to built a kutcha house. a. Straw b. Cement c. Bricks d. Marble 2. People who live in Igloos are called - a. Gypsies b. Villages c. Eskimos d. None of these 3. We use the post office for buying- a. Tea b. Postcards c. Sweets d. None of these 4. It is not a place of worship. a. Shopping mall b. Temple C. Gurudwara d. All of these	(4X.5)=2	Understanding
2.	Name the type of house which- a. Floats on water _____ b. Similar houses in tall building . _____ c. Is made of blocks of ice _____ d. Movable from one place to another _____	(4X1) = 4	Analytical skill
3.	Encircle the correct option – 1. We must walk on pavement / busy road. 2. We should not play with sharp / soft objects. 3. Children should swim in the shallow / deep end of end of the pool. 4. Cross the road whe the light is green/red.	(4X.5) = 2	Information
4.	Give reasons for the following – a. Do not eat medicine on your own because.	(2X2) = 4	

	<p>.....</p> <p>.....</p> <p>b. We should not play on the road because-</p> <p>.....</p> <p>.....</p>		Observation
5.	<p>Write 2 uses of the following neighbourhood services-</p> <p>1. Bank –</p> <p>a.</p> <p>b.....</p> <p>2. Police station-</p> <p>a.....</p> <p>b.....</p>	(2x1)=2	Information
6.	<p>Answer the following questions-</p> <p>1. Why do we need a house?</p> <p>Ans-</p> <p>.....</p> <p>2. How can we become a good neighbours?</p> <p>Ans – a.</p> <p>b.....</p> <p>c.....</p> <p>d.....</p> <p>3. Why should we follow the safety rules?</p> <p>Ans -</p> <p>.....</p>	(3x2)=6	Interdisciplinary

4	<p>Identify and name the famous cartoon characters.</p> <p>1</p>  <hr/> <p>2</p>  <hr/> <p>3</p>  <hr/>	5X1 =5	Interdisciplinary

4



5



5

Match the sports with the arena where they are played

1. Track and Field

Boxing

2. Pitch

Swimming

3. Pool


Boxing

4. Ring

Cricket

4x1=4

Problem solving



ARMY PUBLIC SCHOOL GWALIOR
CLASS - II
ACADEMIC SESSION 2022-23
WORKSHEET (SELF -ASSESSMENT)



Subject: Computer

Assignment No. : 1

Allotment Date: 17 August 2022

S.NO	QUESTION	MARKS	
1.	<p>Write true and False</p> <p>1. TUX paint is paid drawing program.</p> <p style="text-align: center;"><input type="checkbox"/></p> <p>2. We can fill color in a closed shape.</p> <p style="text-align: center;"><input type="checkbox"/></p> <p>3. We can apply only one stamp on the canvas.</p> <p style="text-align: center;"><input type="checkbox"/></p> <p>4. Magic tool is used to add special effects in the drawing.</p> <p style="text-align: center;"><input type="checkbox"/></p>	4x1=4	Understanding
2.	<p>Choose the correct answer.</p> <p>1.tool is used to make freehand drawing</p> <p>a. Eraser</p> <p>b. Paint</p> <p>c. Lines</p> <p>2.tool is found in the magic tool.</p> <p>a. Paint</p> <p>b. Fill</p> <p>c. Line</p> <p>3.tool is used as a sticker.</p> <p>a. Stamp</p> <p>b. Text</p>	4x0.5=2	Analyzing

	<p>c. Line</p> <p>4.tool is used to add text and numbers.</p> <p>a. Clock</p> <p>b. CPU meter</p> <p>c. Game</p>		
3.	<p>Answer the following-</p> <p>1. What is the use of stamp tool?</p> <p>Ans- _____</p> <p>_____</p> <p>_____</p> <p>2. What is the use of Magic tool?</p> <p>Ans - _____</p> <p>_____</p> <p>_____</p> <p>_____</p>	2x2=4	Communication and Skills



ARMY PUBLIC SCHOOL GWALIOR
CLASS - II
ACADEMIC SESSION 2022-23
WORKSHEET (SELF -ASSESSMENT)



Subject: Art and Work Education
Allotment Date: 17 August 2022

Assignment No. : 1

S.NO	QUESTIONS	MARKS	SKILLS/ COMPETENCIES
1.	What is the shape with four equal sides? A. Rectangle B. Square C. Triangle	1	Creativity
2.	Which shapes has three sides? A. Heptagon B. Triangle C. Rectangle	1	Creativity
3.	Which is a 3d Shape? A. Cube B. Triangle C. Square	1	Creativity
4.	What is the shape of a football? A. Cube B. Sphere C. Cuboid	1	Creativity
5.	All colours are made from Red,Blue and Yellow. A. True B. False	1	Creativity
6.	What is the shape of birthday cap?	1	Creativity

	<p>A. Cone B. Cube C. Sphere</p>		
7.	<p>Secondary colours are created by mixing two</p> <p>A. Natural colours B. Primary colours C. Intermediate or Tertiary colours</p>	1	Creativity
8.	<p>What colours is the result of mixing red+Yellow+blue?</p> <p>A. Violet B. Brown C. Orange</p>	1	Creativity
9.	<p>Yellow, red and orange are cool colours.</p> <p>A. True B. False</p>	1	Creativity
10.	<p>Blue,green and purple are cool colours.</p> <p>A. True B. False</p>	1	Creativity



ARMY PUBLIC SCHOOL GWALIOR
CLASS - II
ACADEMIC SESSION 2022-23
WORKSHEET (SELF –ASSESSMENT)



Subject: Music (Dance)

Assignment No. : 1

Allotment Date: 17 August 2022

S.NO	Answer the following questions:	Marks	Skills
1.	Do you like Rhymes? A. Yes B. No	1	Informative
2.	Which shark comes after Baby shark? A. Mommy shark B. Daddy shark	1	Informative
3.	In which country was the video made ? A. India B. South Korea	1	Informative
4.	What do sharks eat? A. Fish B. Sand	1	Informative
5.	How many fish do the shark family chase in the video? A. 6 B. 4	1	Informative
6.	Does dance make us happy? A. No B. Yes	1	Informative

7.	Can you dance on road? A. Yes B. No	1	Informative
8.	How many beats in teen taal? A. 27 B. 16	1	Informative
9.	Can we dance on rhymes? A. Yes B. No	1	Informative
10.	What is the meaning of rain-rain go away? A. Come again some other day B. Come again- again	1	Informative



ARMY PUBLIC SCHOOL GWALIOR
CLASS - II
ACADEMIC SESSION 2022-23
WORKSHEET (SELF –ASSESSMENT)



Subject: Health and Physical Education
Allotment Date: 17 August 2022

Assignment No. : 1

S.NO	QUESTIONS	MARKS	SKILLS/ COMPETENCIES
1.	<p>Tick The Correct Answer</p> <p>Q-1 What do you call this exercise that does not allow you to move from one place to another?</p> <p>A)Leaping B)Jumping C)Aero plane move</p> <p>Q-2 What do you need to bend if you want to jump with both your feet?</p> <p>A)Knees B)Arms C)Neck</p> <p>Q-3 Jumping with one foot taking off and landing with the other foot is called _____</p> <p>A)Hopping B)Leaping C)Skipping</p> <p>Q-4 Jumping with one foot taking off and landing on the same foot.</p> <p>A)Hopping</p>	4	ONE LEG HOPPING

	<p>B)Leaping C)Jogging</p>		
2	<p><u>Fill in the blanks</u></p> <p>Q 5 _____ is a good exercise.</p> <p>Q 6While jumping we put our hands on our _____.</p> <p>Q 7While jumping we should wear our _____.</p>	3x1=3	
3	<p><u>True False</u></p> <p>Q-8 Jumping is done by hands</p> <p style="padding-left: 40px;">A. True</p> <p style="padding-left: 40px;">B. False</p> <p>Q-9 One leg hopping is done on one leg</p> <p style="padding-left: 40px;">A. True</p> <p style="padding-left: 40px;">B. False</p> <p>Q-10 While jumping we should wear shoes</p> <p style="padding-left: 40px;">A. True</p> <p style="padding-left: 40px;">B. False</p>	3x1=3	