

ARMY PUBLIC SCHOOL GWALIOR
CLASS - I
ACADEMIC SESSION 2022-23
WORKSHEET (SELF –ASSESSMENT)

Subject: English

Assignment No. : 3

Allotment Date: 17 August 2022

S.NO	QUESTIONS	MARKS	SKILLS
1.	<p>Fill in the blanks with the correct words .Take help from the help box.</p> <p>(healthy, break,good)</p> <p>a. We must eat_____ food.</p> <p>b. Junk food is not _____ for our health.</p> <p>c. It was _____ time at school.</p>	3×1=3	UNDERSTANDING
2.	<p>Circle the describing words (Adjectives).</p> <p>a. A small cat.</p> <p>b. We have a black car.</p> <p>c. A heavy bag.</p> <p>d. A beautiful flower.</p> <p>e. A colourful painting.</p> <p>f. She has a blue pen.</p>	6×1=6	Decision making
3.	<p>Complete the sentences using given special names.</p> <p>(Cinderella, India, Sachin)</p> <p>a. The name of our country is _____.</p> <p>b. _____ is a famous cricketer.</p> <p>c. My favourite fairy tale is _____.</p>	3×1=3	Problem solving

4.	Answer the following questions Q1:Name two healthy foods. Q2:Why should we eat fruits and vegetables? Q3:What food items has Rita brought? Q4:Why should we not eat junk food?	4×4=8	Critical thinking
----	---	-------	-------------------










ARMY PUBLIC SCHOOL GWALIOR
CLASS - I
ACADEMIC SESSION 2022-23
WORKSHEET (SELF -ASSESSMENT)



Subject: Hindi

Assignment No. : 3

Allotment Date: 17 August 2022


संख्या	प्रश्न/उत्तर	अंक	प्रकृति
प्र.1	<p>चित्र को सही नाम से जोड़ो</p> <p>तरबूज</p> <p>झूला</p> <p>कबूतर</p> <p>सूरज</p>	   	4x1=4 बोधात्मक
प्र 2	<p>रु या रू लिखकर नाम पूरे करो</p> <p> अम.....द</p> <p>माल</p> <p>पया</p>	4x1=4	गहन सोच



.....ई

प्र-3

नीचे दिए गए चित्रों के नाम लिखकर अनुच्छेद पूरा करो।

एक  था। घर की 
..... पर  के पेड़ की छाया
थी। राम छाया में बैठकर 
पढ़ता था। एक बार एक 
राम के ऊपर गिरा। राम के 
खराब हो गए। राम  पर
जाकर नहाया। फिर 
छा गए। पानी बरसा। राम ने बारिश में
एक  रख दिया। टब
भर गया।  

4

समस्या समाधान

प्र-4

निम्नलिखित प्रश्नों के उत्तर दीजिए

प्रश्न .कबूतर क्या-क्या खाता है ?

उत्तर .





प्रश्न .तरबूज का फल किस मौसम में अधिक पाया जाता है ?


उत्तर .

2 x 1 = 2

सूचनापरक

उच्चस्तरीय चिंतन

<p>प्र-5</p>	<p>नीचे दिए गए चित्रों के नाम लिखकर वाक्य पूरे करो</p> <p>बुलबुल का गाना सुन ।</p> <p>का खेल देख ।</p> <p> भाग गई ।</p> <p> उठा कर ला ।</p>	<p>4</p> <p>x.5=2</p>	<p>विश्लेषणात्मक</p>
<p>प्र-6</p>	<p>निम्नलिखित प्रश्नों के उत्तर दीजिए -</p> <p>प्रश्न . माली काका क्या-क्या लाए ?</p> <p>उत्तर .</p> <p>प्रश्न . शुभा को कैसा लगा ?</p> <p>उत्तर .</p> <p>प्रश्न . नई चुनरी किसने बनाई ?</p> <p>उत्तर .</p> <p>प्रश्न . गुटू भीतर कैसे आया ?</p> <p>उत्तर .</p>	<p>4x1=4</p>	<p>भाषाई कौशल</p>



ARMY PUBLIC SCHOOL GWALIOR
CLASS - I
ACADEMIC SESSION 2022-23
WORKSHEET (SELF –ASSESSMENT)


Subject: Mathematics

Assignment No. : 3

Allotment Date: 17 August 2022

S.N	QUESTIONS	MARKS	SKILLS
Q.1	Write the number names 52 - 75 - 30 - 66 - 100 -	1x 5 = 5	Cognitive Skills
Q.2	Arrange in ascending order 80, 43, 28, 34 65, 81, 36, 29 92, 54, 75, 33	1 x 3 = 3	Sequencing

Q.3	<p>Arrang in descending order</p> <p>88, 27, 100, 45</p> <p>59, 68, 83, 25</p> <p>98, 73, 44, 37</p>	1 x 3 = 3	Sequencing				
Q.4	<p>Add the following</p> <table style="width: 100%; border: none;"> <tr> <td style="text-align: center; width: 50%;"> $\begin{array}{r} 53 \\ + 26 \\ \hline \square \end{array}$ </td> <td style="text-align: center; width: 50%;"> $\begin{array}{r} 43 \\ + 50 \\ \hline \square \end{array}$ </td> </tr> <tr> <td style="text-align: center;"> $\begin{array}{r} 25 \\ + 16 \\ \hline \square \end{array}$ </td> <td style="text-align: center;"> $\begin{array}{r} 38 \\ + 38 \\ \hline \square \end{array}$ </td> </tr> </table>	$\begin{array}{r} 53 \\ + 26 \\ \hline \square \end{array}$	$\begin{array}{r} 43 \\ + 50 \\ \hline \square \end{array}$	$\begin{array}{r} 25 \\ + 16 \\ \hline \square \end{array}$	$\begin{array}{r} 38 \\ + 38 \\ \hline \square \end{array}$	1 x 4 = 4	Problem solving
$\begin{array}{r} 53 \\ + 26 \\ \hline \square \end{array}$	$\begin{array}{r} 43 \\ + 50 \\ \hline \square \end{array}$						
$\begin{array}{r} 25 \\ + 16 \\ \hline \square \end{array}$	$\begin{array}{r} 38 \\ + 38 \\ \hline \square \end{array}$						
Q.5	<p>Tick (✓) the smallest number and cross (x) the biggest number in each row</p> <p>1. 98, 42, 63, 29, 84</p> <p>2. 76, 100, 38, 55, 91</p>	1 x 2 = 2	Cognitive				
Q.6	<p>Word Problem</p> <p>1. In a class there are 31 boys and 17 girls. How many children are there in a class?</p>	1 x 3 = 3	Language, Thinking				





ARMY PUBLIC SCHOOL GWALIOR
CLASS - I
ACADEMIC SESSION 2022-23
WORKSHEET (SELF –ASSESSMENT)


Subject: EVS

Assignment No. : 3

Allotment Date: 17 August 2022

S.NO	QUESTION	MARKS	SKILLS
1.	<p>Fill in the blanks using the help box given below:</p> <p>(protect, villages, food, milk, three, warm)</p> <p>a. We need _____ and water to live. b. Most of us eat _____ meals a day. c. Food made from milk are called _____ products. d. Clothes _____ us from heat, cold and rain. e. Woollen clothes keep us _____. f. Kutcha houses are built in _____.</p>	6×1=6	Decision making
2.	<p>Name any two for each of the following:</p> <p>a. Junk food</p> <p>b. Milk products</p> <p>c. Dry fruits</p> <p>d. Leather items</p>	4×1=4	Thinking skills

<p>3.</p>	<p>Identify the type of house in the picture given below:</p> <div style="text-align: center;">  <p>_____</p> </div> <hr/> <div style="text-align: center;">  </div>	<p>2×1=2</p>	<p>Observation skills</p>
<p>4.</p>	<p>Answer the following questions</p> <p>Q1: Why do we need a house?</p> <p>Q2: What is leather? Name some items made of leather.</p> <p>Q3: Why do we need food?</p>	<p>3×2=6</p>	<p>Thinking skills</p>
<p>6.</p>	<p>HOTS (Higher Order Thinking Skills)</p> <p>Q1: What are the qualities of an ideal house?</p>	<p>2×1=2</p>	<p>Critical thinking</p>



ARMY PUBLIC SCHOOL GWALIOR
CLASS - I
ACADEMIC SESSION 2022-23
WORKSHEET (SELF –ASSESSMENT)

Subject: Computer

Assignment No. : 1

Allotment Date: 17 August 2022

S.NO	QUESTION	MARKS	
1.	<p>Write true and False</p> <p>1. Alphabet keys are used to type words. <input type="checkbox"/></p> <p>2. Spacebar is the shortest key on the keyboard. <input type="checkbox"/></p> <p>3. We keep index figure on the left mouse button. <input type="checkbox"/></p> <p>4. We cannot drag picture using a mouse. <input type="checkbox"/></p> <p>5. Pressing the left mouse button once is called single-click <input type="checkbox"/></p>	5x1=5	Understanding
2.	<p>Choose the correct answer.</p> <p>1. A.....is used to type into a computer.</p> <p>a. keyboard</p> <p>b. printer</p> <p>c. mouse</p> <p>2. There areAlphabet keys on the key board.</p> <p>a. 20</p> <p>b. 12</p>	4x0.5=2	Analyzing

	<p>c. 26</p> <p>3. Enter key is also called.....key.</p> <p>a. Exit</p> <p>b. Return</p> <p>c. Function</p> <p>4. A mouse is a.....device.</p> <p>a. holding</p> <p>b. pointing</p> <p>c. typing</p>		
<p>3.</p>	<p>Guess and complete the name of the following.</p> <p>1. We can type your name. A__P__A__ __T</p> <p>2. I can move the cursor to the nextline. E__T__R.</p> <p>3. I can erase the letters and the numbers from left. B__C__S__ __C__.</p>	<p>3x1=3</p>	<p>Problem Solving</p>








ARMY PUBLIC SCHOOL GWALIOR
CLASS - I
ACADEMIC SESSION 2022-23
WORKSHEET (SELF –ASSESSMENT)



Subject: G.K

Assignment No. : 1

Allotment Date: 17 August 2022

S.N	QUESTIONS	MARKS	SKILLS
Q.1	Answer in one word using the help box given below (Virat Kohli, Javelin throw, China, Taj Mahal ,United States) 1. Name the wonder of the world which is situated in India. 2. Neeraj Chopra is associated with which game ? 3. Statue of Liberty is in which country ? 4. The Great wall is situated in which country ? 5. Who is the ex captain of Indian cricket team ?	1 x 5 = 5	Thinking, Analytical
Q.2	Match the following  Boxing  Doraemon Donald Duck  Badminton  Mickey Mouse 	1 x 5 = 5	Cognitive




ARMY PUBLIC SCHOOL GWALIOR
CLASS - I
ACADEMIC SESSION 2022-23
WORKSHEET (SELF –ASSESSMENT)

Subject: Art and Work Education
Allotment Date: 17 August 2022

Assignment No. : 1

S.NO	QUESTIONS	MARKS	SKILLS/COMPETENCIES
1.	What is the shape with four equal sides? A. Rectangle B. Square C. Triangle	1	Creativity
2.	Which shapes has three sides? A. Heptagon B. Triangle C. Rectangle	1	Creativity
3.	Which is a 3d Shape? A. Cube B. Triangle C. Square	1	Creativity
4.	What is the shape of a football? A. Cube B. Sphere C. Cuboid	1	Creativity
5.	All colours are made from Red, Blue and Yellow. A. True	1	Creativity



ARMY PUBLIC SCHOOL GWALIOR
CLASS - I
ACADEMIC SESSION 2022-23
WORKSHEET (SELF –ASSESSMENT)

Subject: Health and Physical Education
Allotment Date: 17 August 2022


Assignment No. : 1

S.N	QUESTIONS	MARKS	SKILLS/ COMPETENCIS
1	Multiple Choice 1. Which of the followings types of jumps you learn A) Standing jump B) Broad jumps C) Hurdle jump D) All of the above	1	INFORMATION
2	2. What is the purpose of learning jumps A) Fitness with fun and games B) Earn more chocolate C) To cry D) To get angry	1	INFORMATION

3	<p>3. On which command children will start jumping</p> <p>A) Go or whistle</p> <p>B) Snatch</p> <p>C) Push</p> <p>D) Buy</p>	1	INFORMATION
4	<p>4. In the opposite game what you have to do when teacher will say stand up?</p> <p>A. Jump</p> <p>B. Stand up</p> <p>C. Sit down</p> <p>D. Sleep</p>	1	INFORMATION
5	<p>FILL IN THE BLANKS: -</p> <p>1. Jump should be done with _____</p> <p>A) Shoes</p> <p>B) Sleepers</p> <p>C) Barefoot</p> <p>D) Run and walk</p>	1	INFORMATION

6	<p>2. Jumping games or activities make students legs _____</p> <p>A) Strong</p> <p>B) Weak</p> <p>C) Mad</p> <p>D) Fat</p>	1	INTERDISCIPLINARY
7	<p>3. Jumping games good for student_____.</p> <p>A) Health and fitness</p> <p>B) Ground</p> <p>C) Cone</p> <p>D) Dress</p>	1	INTERDISCIPLINARY
8	<p>1) We should exercise everyday for 30 mins. (True/False)</p>	1	INTERDISCIPLINARY
9	<p>9. we play games to be healthy and strong. (True/ False)</p>	1	UNDERSTANDING

10	10.Junk food is good for health. (True/False)	1	UNDERSTANDING
-----------	--	---	---------------



ARMY PUBLIC SCHOOL GWALIOR
CLASS - I
ACADEMIC SESSION 2022-23
WORKSHEET (SELF –ASSESSMENT)

Subject: Music (Dance)

Assignment No. : 1

Allotment Date: 17 August 2022

S.NO	Answer the following questions:	Marks	Skills
1.	How many sur in Music? A.10 B.7	1	Informative
2.	Who is the famous Tablaplayer? A.ZakirHussain B.LataMangeshkar	1	Informative
3.	Which sur come after saa? A. dha B. ree	1	Informative
4.	What is Tanpura? A. Instrument B. Table\	1	Informative
5.	Who is God of sur A. Radha B. Sarswati	1	Informative
6.	How many beats in teen taal? A.17 B.16	1	Informative
7.	Who is god of dance? A. Lord Shiva	1	Informative

	B. Lord Hanuman		
8.	Does dance make our body fit? A. Yes B. No	1	Informative
9.	Does dance make us happy? A. Yes B. No	1	Informative
10.	Which one dance style is a kind of an exercise? A. Zumba B. Folk dance	1	Informative