



ARMY PUBLIC SCHOOL GWALIOR
CLASS - I
ACADEMIC SESSION 2022-23
WORKSHEET (SELF –ASSESSMENT)



Subject: English

Assignment No. : 2

Allotment Date: 20 July 2022

| S.N | QUESTIONS | MARKS | SKILLS/ COMPETENCIES |
|-----|---|---------------------------------------|--|
| 1. | Fill in the blanks from the help box given below (mango, morning, Grandmamma, lollypops) a. Rohit wakes up in the b. Mama gave Rohit asapling. c.is the keeper of the cupboard. d. There was a jar of in the cupboard. | 4 x 1 = 4 | Thinking Skills, language, cognitive |
| 2. | Answer the following questions Q.1 What gift papa gave to Rohit on his birthday? Ans. Q.2 When do you celebrate your birthday ? Ans. Q.3 Which is your favourite birthday gift ? Ans. Q.4 Write any five things that trees gives us Ans. | 2 x 1 = 2 2 x 2 =4 | Critical Thinking, language, Creative |



ARMY PUBLIC SCHOOL GWALIOR
CLASS - I
ACADEMIC SESSION 2022-23
WORKSHEET (SELF -ASSESSMENT)













Subject: Hindi

Assignment No. : 2

Allotment Date: 20 July 2022

| संख्या | प्रश्न / उत्तर | अंक | प्रकृति | | | | | | | | | | | | | | | | | | | | | | | | |
|--------|--|-------|---------|-------|---|---|-------|---|---|-------|---|---|-------|---|---|-------|---|---|-------|---|---|-------|---|---|-------|----|----------|
| प्र.1 | मात्रा लगाकर शब्द पुरे करो । 1. कछआ _____ 2. रल _____ 3. बल _____ 4. अनर _____ 5. फल _____ 6. नका _____ | 3M | गहन सोच | | | | | | | | | | | | | | | | | | | | | | | | |
| प्र.2 | दी गई मात्राओं के दो - दो शब्द लिखिए। <table border="1" style="margin-left: auto; margin-right: auto;"><tr><td>आ</td><td>।</td><td>_____</td></tr><tr><td>इ</td><td>ि</td><td>_____</td></tr><tr><td>ई</td><td>ी</td><td>_____</td></tr><tr><td>उ</td><td>ु</td><td>_____</td></tr><tr><td>ऊ</td><td>ू</td><td>_____</td></tr><tr><td>ऋ</td><td>ृ</td><td>_____</td></tr><tr><td>ए</td><td>ै</td><td>_____</td></tr><tr><td>ऐ</td><td>ौ</td><td>_____</td></tr></table> | आ | । | _____ | इ | ि | _____ | ई | ी | _____ | उ | ु | _____ | ऊ | ू | _____ | ऋ | ृ | _____ | ए | ै | _____ | ऐ | ौ | _____ | 4M | बोधात्मक |
| आ | । | _____ | | | | | | | | | | | | | | | | | | | | | | | | | |
| इ | ि | _____ | | | | | | | | | | | | | | | | | | | | | | | | | |
| ई | ी | _____ | | | | | | | | | | | | | | | | | | | | | | | | | |
| उ | ु | _____ | | | | | | | | | | | | | | | | | | | | | | | | | |
| ऊ | ू | _____ | | | | | | | | | | | | | | | | | | | | | | | | | |
| ऋ | ृ | _____ | | | | | | | | | | | | | | | | | | | | | | | | | |
| ए | ै | _____ | | | | | | | | | | | | | | | | | | | | | | | | | |
| ऐ | ौ | _____ | | | | | | | | | | | | | | | | | | | | | | | | | |

| | | | |
|--------------|---|-----------|----------------------|
| <p>प्र.3</p> | <p>पहचानो और मिलाओ।</p> <div style="display: flex; justify-content: space-around; align-items: center;"> <div style="text-align: center;">      </div> <div style="text-align: center;"> <p>किसान गिलास पिड़िया खटिया सितार आदमी हिरन पहिया गुड़िया बारिश</p> </div> <div style="text-align: center;">      </div> </div> | <p>5M</p> | <p>गहन सोच</p> |
| <p>प्र.4</p> | <p>रिक्त स्थान भरे ।</p> <ol style="list-style-type: none"> 1. निधि ____ लाई 2. विकास ने ____ गया 3. मिहिर ____ लाया 4. विभा ____ पर नाच | <p>2M</p> | <p>मनन कौशल</p> |
| <p>प्र.5</p> | <p>निम्नलिखित प्रश्न के उत्तर दीजिए ।</p> <p>प्र1: निधि क्या लाई ?</p> <p>प्र2: मिहिर क्या लाया ?</p> <p>प्र3: ताल पर कौन नाचा ?</p> | <p>6M</p> | <p>समस्या समाधान</p> |



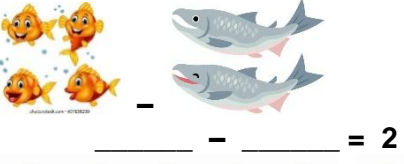




ARMY PUBLIC SCHOOL GWALIOR
CLASS - I
ACADEMIC SESSION 2022-23
WORKSHEET (SELF -ASSESSMENT)



Subject: Mathematics

Assignment No. : 2

Allotment Date: 20 July 2022

| S.N | QUESTIONS | MARKS | NATURE |
|-----|---|-------|-------------------|
| 1 | $3+3 = \underline{\quad}$ $8+2 = \underline{\quad}$ | 2X1=2 | Information |
| 2 | Fill in the placeholders: $5 - 0 = \underline{\quad}$ $\underline{\quad} - 0 = 8$ | 2X1=2 | Understanding |
| 3 | Subtract the objects and fill in the space provided:    $6 - \underline{\quad} = \underline{\quad}$ | 3X1=3 | Interdisciplinary |
| 4 | Do solve the following:   $0 + \underline{\quad} = \underline{\quad}$ | 3X1=3 | Analytical Skill |

| | | | |
|---|--|-------|---|
| 5 | <p>Subtract the following by drawing strokes :-</p> $\begin{array}{r} \square \\ 6 \\ - \square \\ 4 \\ \hline \end{array}$ $\begin{array}{r} \square \\ 4 \\ - \square \\ 4 \\ \hline \end{array}$ | 2X1=2 | Critical Thinking and Problem Solving |
| 6 | <p>Answer the following questions:-</p> <p>How many doors and windows are there in your house? Count and write the total number of them altogether.</p> <p>Doors ___ + Windows ___ _____ _____</p> | 2X1=2 | HOT |
| 7 | <p>Solve the following:</p> <p>5+3 = _____</p> <p>4+3 = _____</p> <p>6-2 = _____</p> <p>6-6 = _____</p> | 4X1=4 | Evaluation |
| 8 | <p>Solve the following word problems:-</p> <p>There are 7 birds sitting on one branch of a tree. 3 birds are sitting on another branch. Find the total number of birds sitting on the tree.</p> $\begin{array}{r} \square \\ + \square \\ \hline \end{array}$ <p>Simran needs 4 books. She has 3 books. How many books should she buy more?</p> $\begin{array}{r} \square \\ - \square \\ \hline \end{array}$ | 2x1=2 | Communication Skills and Problem Solving |



ARMY PUBLIC SCHOOL GWALIOR
CLASS - I
ACADEMIC SESSION 2022-23
WORKSHEET (SELF –ASSESSMENT)





Subject: EVS

Assignment No. : 2

Allotment Date: 20 July 2022

| S.N | QUESTIONS | MARKS | NATURE |
|-----|---|--------|-------------------|
| 1 | Colour the box (<input type="checkbox"/>) green if you do the following with your family and (<input type="checkbox"/>) red if you don't. 1. Play indoor games <input type="checkbox"/> 2. Watch movies <input type="checkbox"/> 3. Eat together <input type="checkbox"/> 4. Help each other <input type="checkbox"/> | 2X.5=2 | Information |
| 2 | Write Yes or No for the following: 1. Do you wash your hands before eating food? 2. Do you change your clothes daily? 3. Do you take bath yourself? 4. Do you brush your teeth twice a day? | 3X1=3 | Understanding |
| 3 | Q. Why should we wash fruits and vegetables before eating. ? Ans..... | 1X1=1 | Interdisciplinary |

| | | | |
|-----------------|--|--------------|--|
| <p>4</p> | <p>Identify the following types of families:</p> <div style="display: flex; justify-content: space-around; align-items: center;">   </div> <p>_____</p> <p>_____</p> | <p>2X1=2</p> | <p>Analytical Skill</p> |
| <p>5</p> | <p>1. Write any two ways by which you help your family:</p> <p>(1)</p> <p>(2)</p> | <p>2X1=2</p> | <p>Critical Thinking and Problem Solving</p> |
| <p>6</p> | <p>Colour the circle green for the good habits and red for the bad habits:</p> <ol style="list-style-type: none"> 1. I eat salad and fruits daily. 2. I keep my room neat and clean. 3. I put a finger in my nose. | <p>3X2=2</p> | <p>HOT</p> |
| <p>8</p> | <ol style="list-style-type: none"> 1. What should we do to keep our body clean ? 2. What is known as balanced diet ? 3. What is joint family ? 4. Write any two physical exercises that you usually do . | <p>4X2=8</p> | <p>Communication Skills</p> |