



**ARMY PUBLIC SCHOOL GWALIOR**  
**CLASS - IV**  
**ACADEMIC SESSION 2022-23**  
**WORKSHEET (SELF –ASSESSMENT)**

**Subject: English**

**Assignment No. : 1**

**Allotment Date: 20 April 2022**

S. NO.	QUESTIONS	MARKS	NATURE
1	How did the little boy play with the tree? <hr/>	2	Information
2	Fill in the blanks with the correct word.  i) Time went by and the boy grew -----.  ii) I have only ----- and apples.	2	Understanding
3	List out the benefits that we get from the trees?	2	Interdisciplinary

<p><b>4</b></p>	<p>Identify and write the kind of sentences .</p> <p>1. "I don't want to stay away from school."</p> <p>-----</p> <p>2. Have your medicines on time.</p> <p>-----</p>	<p>2</p>	<p>Analytical Skill</p>
<p><b>5</b></p>	<p>What you can do to save the trees? Write your views.</p>	<p>2</p>	<p>Critical Thinking and Problem Solving</p>
<p><b>6</b></p>	<p>Can you imagine the world without trees. Express your thoughts.</p>	<p>3</p>	<p>HOT</p>
<p><b>7</b></p>	<p>Answer the following questions briefly.</p> <p>(i) Why did the boy want money?</p> <p>ii) How did the boy make the boat?</p>	<p>4</p>	<p>Evaluation</p>
<p><b>8</b></p>	<p>Is the title of the story 'The Giving Tree' right? Why?</p>	<p>3</p>	<p>Communication Skills</p>



**ARMY PUBLIC SCHOOL GWALIOR**  
**CLASS - IV**  
**ACADEMIC SESSION 2022-23**  
**WORKSHEET (SELF –ASSESSMENT)**

Subject: Hindi

Assignment No. : 1

Allotment Date: 20 April 2022

S.NO	QUESTIONS	MARKS	SKILLS/COMPETENCIES
प्रश्न 1	<p>सही उत्तर के सामने [✓] लगाओ ।</p> <p>(क) चट्टानों किसकी प्रतीक है?</p> <p>(I) हिम्मत</p> <p>(II) बाधाओं</p> <p>(III) अभिलाषा</p> <p>(ख) ईद कब आती है?</p> <p>(I) रमजान के 7 रोजा के बाद</p> <p>(II) रमजान के 4 दिनों के बाद</p> <p>(III) रमजान के 3 रोजों के बाद</p> <p>(ग) स्वामी विवेकानंद के बचपन का नाम था?</p> <p>(I) नरेंद्र</p> <p>(II) आनंद</p> <p>(III) विवेक</p>	3	बोधोत्प्रेरक
प्रश्न 2	<p>निम्न शब्दों के अर्थ लिखो -</p> <p>1.स्रोत -</p> <p>2.प्रभात -</p> <p>3.तनिक -</p>	3	ज्ञानोत्प्रेरक
प्रश्न 3	<p>समानार्थी शब्दों को रेखा खींचकर मिलाओ -</p> <p>1.राह इच्छा, चाह</p> <p>2.काम आँधी, झंझा</p>	4	रचनात्मक

	3.तूफान 4.अभिलाषा	मार्ग, रास्ता कार्य ,कर्म		
प्रश्न 4	सही शब्द चुनकर वाक्य पूरा करो । ईदगाह, चतुर भिक्छुक की कहानी सुनाने का, आँधी- तूफान, साहस 1.केशव ----- हठ कर रहा था । 2.-----धार्मिक स्थान जहाँ ईद के दिन की नमाज अदा की जाती है । 3.भारत के बच्चों को----- नहीं रोक पाएगा । 4. कवि ने बच्चों को----- पुतले कहा है?		4	विश्लेषणात्मक
प्रश्न 5	प्रश्न 5 निम्नलिखित प्रश्नों के उत्तर लिखो प्रश्न -1 अमीना को हामिद की चिंता क्यों हो रही थी? उत्तर 1----- प्रश्न -2 भारत माँ की अभिलाषा कैसे पूरी की जा सकती है? उत्तर 2----- प्रश्न- 3 ईद के दिन बच्चे क्यों खुश थे? उत्तर 3----- प्रश्न- 4 शिकागो की सभा में तालियां क्यों गूँज रही थी? उत्तर 4----- प्रश्न- 5 भारत के बच्चों के कोई दो गुण लिखो । उत्तर 5----- प्रश्न- 6 स्वामी विवेकानंद का जन्म कब और कहाँ हुआ? उत्तर 6-----		6	उच्चस्तरीय चिंतन



**ARMY PUBLIC SCHOOL GWALIOR**  
**CLASS - IV**  
**ACADEMIC SESSION 2022-23**  
**WORKSHEET (SELF –ASSESSMENT)**

**Subject: Mathematics**

**Assignment No. : 1**

**Allotment Date: 20 April 2022**

S. NO.	QUESTIONS	MARKS	NATURE
1	<b>Fill in the blanks:</b> (i) The place value for 4 in 34521 is ..... (ii) The face value for 2 in 54729 is .....	<b>2*1=2</b>	Understanding
2	<b>Write 'True' or 'False':</b> (i) The place value of 7 in 67894 is 7000 ( ) (ii) The face value of 6 in 125643 is 600 ( )	<b>2*1=2</b>	HOTS
3	<b>Tick the correct answer from the given options:</b>  (i) 10000 + 8000 + 20 + 3 is the expanded form of - (a) 1823 (b) 18023 (c) 10823  (ii) The correct break up for 60606 is (a) 6000+600+6 (b)60000+600+6 (c) 60000+6000+6  (iii) Eight thousand nine hundred thirty-six in figures is (a) 8396 (b) 8639 (c) 8936	<b>3*1=3</b>	Critical thinking
4	<b>Solve the following questions: -</b>  (i) Write 734102 in expanded form		Interdisciplinary

	<p>(ii) Rearrange the following numbers in ascending order: 3001,432,14032,41231,42103</p> <p>(iii) Write the greatest and smallest 4-digit numbers using all digits 8,5,6,3</p>	<b>3*1=3</b>	
<b>5</b>	<p><b>Solve the following questions:</b></p> <p>(i) Write the greatest 6-digit number formed by 5, 6, 9, 0, 3, 7.</p> <p>(ii) Write the smallest 6-digit number formed by 8, 7, 2, 6, 1, 9</p> <p>(iii) Round off each of the following numbers to the nearest hundreds.</p> <p>a. 416</p> <p>b. 762</p> <p>(iv) Round off each of the following numbers to the nearest thousands</p> <p>a. 3264</p> <p>b. <b>8763</b></p> <p>(v) <b>List all the numbers which can be rounded off to the nearest tens as 960.</b></p>	<b>2*5=10</b>	Problem Solving



**ARMY PUBLIC SCHOOL GWALIOR**  
**CLASS - IV**  
**ACADEMIC SESSION 2022-23**  
**WORKSHEET (SELF –ASSESSMENT)**

**Subject: EVS**

**Assignment No. : 1**

**Allotment Date: 20 April 2022**

S.N	QUESTIONS	MARKS	SKILLS/COMPETENCIES
1.	<p><b>Tick ( ✓ ) the correct options :</b></p> <p>1. My paternal grandfather is my _____ father.</p> <p>a. Mother's b. Father's c. Friend's</p> <p>2. Mammals suckle their babies on their _____.</p> <p>a. Food                      b. Water                      c. Milk</p> <p>3. It is the master organ of our body.</p> <p>a. Brain                      b. Heart                      c. stomach</p> <p>4. We should always study in proper _____ .</p> <p>a. Light                      b. Day                      c. Night</p>	4X1=4	Information
2	<p><b>2. Which sense organ is used in the following cases.</b></p> <p>1. To smell a perfume -</p> <p>2. To taste an apple -</p> <p>3. To listen to a dog's barking -</p> <p>4. To read newspaper</p>	4x1=4	HOTS Analytical Skill
3.	<p><b>4. Give one word answer.</b></p> <p>1. The legal process of raising another child as your own. -</p>	5X1=5	Understanding

2. Animals give birth to their young ones. -
3. The process of keeping the eggs warm. -
4. An animal that hatches from the egg. -

4

**Answer the following :**

Q1. Why do we need a family?

---



---

Q2. How is the skeleton useful to us?

---



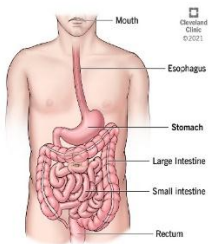
---

2x2=4

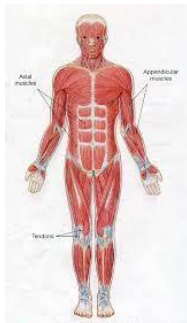
Communication Skills

5

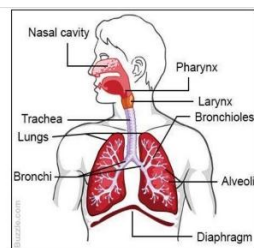
**Identify the following pictures and write the name.**




---




---




---

3X1=3

Evaluation