



**ARMY PUBLIC SCHOOL GWALIOR**  
**CLASS - VIII**  
**ACADEMIC SESSION 2021-22**  
**WORKSHEET (SELF –ASSESSMENT)**

**Subject: English**

**Assignment No. : 11**

**Allotment Date: 06 February 2022**

S. NO.	QUESTIONS	MARKS	SKILLS/ COMPETENCIES
1	Write an article on-“My vision for India@100years” in about 50 words.	4m	Information, Creative writing
2	What is internal summit? Justify the title-“The Summit Within”.	3m	Understanding and Critical thinking
3	Do you agree that power and stamina in the body doesn't depend on the size of the body? Answer in about 100 words.	4m	HOT
5	Rewrite the following sentences as directed in the brackets. 1. They rode a horse.(simple future tense) 2. His eyes are turning red.(present perfect continuous tense ) 3. She is feeling happy.(past perfect tense)	3m	Analytical Skill
6	Fill in the blanks with suitable modals given in brackets. 1. My father works hard so that his family _____ live well.(should/may) 2. One _____ (must/ will) be polite to one's parent. 3. Run fast lest you _____ miss the trophy.(would/should)	3m	Analytical skill
7	What message does the story of the fawn convey to the readers? Explain in 100 words.	4m	Critical Thinking
8	Answer the following questions in about 20-30 words. 1. What is the poet's advice to parents of school-going kids? 2. What advice does the scientist give to the handicapped? 3. Which insects break the silence of the winter? How?	3x2=6m	Evaluation

<b>9</b>	You are Manika. Write a letter to your friend in about 150 words telling her about the harms of drug abuse.	<b>3m</b>	Communication Skill and Creative Writing



**ARMY PUBLIC SCHOOL GWALIOR**  
**CLASS - VIII**  
**ACADEMIC SESSION 2021-22**  
**WORKSHEET (SELF –ASSESSMENT)**

**Subject: Hindi**

**Assignment No. : 11**

**Allotment Date: 06 February 2022**

S. NO.	QUESTIONS	MARKS-30	SKILLS/ COMPETENC IES
1	निम्नलिखित शब्दों के अर्थ लिखिए दबेल हवाला सरिता खोखल उपनाह	5	Information, Communicati on Skills
2	निम्नलिखित प्रश्नों के उत्तर दीजिए ( क ) घर के सामान्य काम हों या अपना निजी काम, प्रत्येक व्यक्ति को अपनी क्षमता के अनुरूप उन्हें करना आवश्यक क्यों है?  ( ख ) घायल होने के बाद भी बाज ने यह क्यों कहा, “मुझे कोई शिकायत नहीं है।” विचार प्रकट कीजिए?  ( ग ) पानी परात को हाथ छुयो नहीं, नैनन के जल सों पग धोए।” पंक्ति में वर्णित भाव का वर्णन अपने शब्दों में कीजिए	6	Critical Thinking and Problem Solving
3	( क ) सर्वनाम की परिभाषा उदारहण सहित लिखिए  (ख )अलंकार से आपका क्या अभिप्राय है ? इसका क्या महत्व है?	2  2	Critical thinking
4	किसी एक विषय पर पत्र लिखिए। जन्मदिन के उपहार के लिए कृतज्ञता प्रकट करते हुए चाचाजी को पत्र लिखिए। अथवा परीक्षा में प्रथम स्थान प्राप्त करने पर मित्र / सखी को बधाई-पत्र।	5	Analytical Skill, Understandin g

<b>5</b>	<p>(क) टोपी बनवाने के लिए गवरइया किस-किसके पास गई? टोपी बनने तक के एक-एक कार्य को लिखे।</p> <p>(ख) निर्धनता के बाद मिलनेवाली संपन्नता का चित्रण कविता की अंतिम पंक्तियों में वर्णित है। उसे अपने शब्दों में लिखिए।</p>	<p>2</p> <p>3</p>	<b>Evaluation,</b>
<b>6</b>	<p>(क) 1942 में नेताओं की गिरफ्तारी का जनता पर क्या प्रभाव पड़ा?</p> <p>(ख) दयानंद सरस्वती कौन थे? उन्होंने समाज सुधार के क्षेत्र में क्या-क्या कार्य किए</p>	<p>2</p> <p>3</p>	<b>Critical thinking</b>



**ARMY PUBLIC SCHOOL GWALIOR**  
**CLASS - VIII**  
**ACADEMIC SESSION 2021-22**  
**WORKSHEET (SELF –ASSESSMENT)**

Subject: Mathematics

Assignment No. : 11

Allotment Date: 06 February 2022

S. NO.	QUESTIONS	MARKS	NATURE
1	<p><b>Choose the correct alternatives in each of the following:</b></p> <p>If <math>x</math> and <math>y</math> are directly proportional, then which of the following is correct?</p> <p>(a) <math>x + y = \text{constant}</math>   (b) <math>x - y = \text{constant}</math>   (c) <math>xy = \text{constant}</math>   (d) <math>x/y = \text{constant}</math></p>	1	Informative
2	<p>If <math>x</math> and <math>y</math> are inversely proportional, then:</p> <p>(a) <math>x + y = \text{constant}</math>   (b) <math>x - y = \text{constant}</math>   (c) <math>xy = \text{constant}</math>   (d) <math>x/y = \text{constant}</math></p>	1	Informative
3	<p>If <math>x = 15</math> and <math>y = 1/30</math>, then <math>x</math> and <math>y</math> are:</p> <p>(a) Directly proportional (b) Inversely proportional (c) Neither directly nor inversely proportional (d) Cannot be determined</p>	1	Understanding
4	<p>If <math>x = ky</math> and when <math>y = 4</math>, <math>x = 8</math> then <math>k =</math></p> <p>(a) 1                      (b) 2                      (c) 3                      (d) 4.</p>	1	Evaluation
5	<p>3 knives cost Rs 63. What will 17 knives cost ?</p> <p>(a) Rs 357                (b) Rs 375                (c) Rs 537                (d) Rs 573</p>	1	Evaluation
	<p><b>Fill in the blanks.</b></p>		
6	<p>The perimeter of a square and its side is in _____ proportion.</p>	1	Analytical



17

A mixture of paint is prepared by mixing 1 part of red pigments with 8 parts of base. In the following table, find the parts of base that need to be added

<b>Parts of red pigment</b>	1	4	7	12	20
<b>Parts of base</b>	8	–	–	–	–

3

Critical thinking and problem solving

18

Rehman is making a wheel using spokes. He wants to fix equal spokes in such a way that the angles between any pair of consecutive spokes are equal. Help him by completing the following table:



<b>Number of spokes</b>	4	6	8	10	12
<b>Angle between a pair of consecutive spokes</b>	90°	60°	...	...	...

3

Interdisciplinary



**ARMY PUBLIC SCHOOL GWALIOR**  
**CLASS - VIII**  
**ACADEMIC SESSION 2021-22**  
**WORKSHEET (SELF –ASSESSMENT)**

**Subject: Science**

**Assignment No. : 11**

**Allotment Date: 06 February 2022**

S. NO.	QUESTIONS	MARKS	NATURE
Q.1	Answer the following questions. I. Name the nitrogen fixing bacteria in root nodules of leguminous plants. II. What is the nature of the image formed by the plane mirror? III. Name metal which is liquid at room temperature	1x3=3	Information
Q.2	I. State the two laws of reflection. II What is meant by term celestial objects? What is the brightest object in night sky?	2X2=4	Understanding
Q.3	I. What are the difference between plant cell and animal cell. II To conserve forests we should ban cutting down of trees completely. Do you agree? Give Reasons. III.Name the coloured part of eye. What is its function?	2x3=6	HOT



Q.4	<p>I. Name four endocrine glands and their functions.</p> <p>II. Explain how an earthquake occur.</p> <p>!!!. What do you mean by dispersion of light? What is rainbow?</p>	2x3=6	Interdisciplinary
Q.5	I. Why do stars appear to us like points, whereas Sun looks bigger?	3x2=6	Analytical Skill
	II. What will happen if two plane mirrors in combination are used?		Critical Thinking and Problem Solving
Q.6	Explain different modes of reproduction in detail .	5x1=5	Communication Skills and Evaluation



**ARMY PUBLIC SCHOOL GWALIOR**  
**CLASS - VIII**  
**ACADEMIC SESSION 2021-22**  
**WORKSHEET (SELF –ASSESSMENT)**

**Subject: Social Science**

**Assignment No. : 11**

**Allotment Date: 06 February 2022**

S.N	QUESTIONS	MARKS	SKILLS/ COMPETENCIES
Q1	What type of education was given to the children in pathshalas?	1	Understanding
Q2	Name two Indians who reacted against Western education.	1	Understanding
Q3	What is the literal meaning of servajanik?	1	Understanding
Q4	Who wrote the poem on untouchability? (a) Meerabai (b) Johrabai (c) Chand bardai (d) Soryabai	1	Information
Q5	William Adam toured the districts of (a) Bihar and Orissa (b) Bihar and UP (c) Bengal and Rajasthan (d) Orissa and Madhya Pradesh	1	Understanding
Q6	Who raised the slogan "Freedom is my birthright and I shall have it".	1	Information
Q7	What is meant by population composition?	1	Understanding
Q8	What products do industries plants in Jamshedpur produce?	1	Understanding
Q9	Define Ghettoisation.	1	Understanding
Q10	Who were the Moderates?	1	Information
Q.11	What are the similarities between IT industry in Bangalore and California?	3	Interdisciplinary

Q12	What did the Muslim League resolution of 1940 ask for?	3	Understanding
Q13	What are the causes for the uneven distribution of population in the world?	3	Critical Thinking
Q14	What is shifting cultivation? What are its disadvantages?	3	Understanding
Q15	Why cotton textile industry rapidly expanded in Mumbai?	4	Critical Thinking and Problem Solving
Q16	Discuss the reasons for the failure of the Revolt of 1857.	4	HOTS



**ARMY PUBLIC SCHOOL GWALIOR**  
**CLASS - VIII**  
**ACADEMIC SESSION 2021-22**  
**WORKSHEET (SELF -ASSESSMENT)**


Subject: Sanskrit

Assignment No. : 11

Allotment Date: 06 February 2022

S.NO	QUESTIONS	MARKS	NATURE
1	<p>विशेषण शब्दों के उचित रूप द्वारा रिक्त स्थान पूर्ति करिए -</p> <p>(क) महेशः ..... फलं खादति। (मधुर)</p> <p>(ख) वने ..... वृक्षाः सन्ति। (विशाल)</p> <p>(ग) सा ..... बालिका अस्ति । (चतुर)</p> <p>(घ) अहं ..... वस्त्राणि धारयामि। (नवीन)</p> <p>(ङ) ..... गजः शनैः शनैः चलति । (स्थूल)</p>	(5)	Information
2	<p>सन्धिविच्छेद करिए -</p> <p>(क) धनुष्टंकारः ----- + -----</p> <p>(ख) नायकः ----- + -----</p> <p>(ग) गिरीशः ----- + -----</p> <p>(घ) स्वागतम् ----- + -----</p> <p>(ङ) निर्गुणः ----- + -----</p>	(5)	Understanding
3	<p>समास विग्रह करिए -</p> <p>नीलोत्पलम् .....</p> <p>दशाननः .....</p> <p>गुरुशिष्यौ .....</p> <p>अनुरथम् .....</p> <p>सजनकम् .....</p>	(5)	Interdisciplinary

4	<p>निम्नलिखित पदों में प्रयुक्त प्रत्यय का नाम लिखिए -</p> <p>(क) पठितुम् -                      (ख) हसित्वा -                      (ग) दर्शनीय -</p> <p>(घ) कर्त्तव्य -                      (ङ) आचार्या -</p>	(5)	Analytical Skill																								
5	<p>अधोलिखित अव्ययों का अर्थ लिखकर संस्कृत में वाक्य बनाइये -</p> <table border="0" style="width: 100%; border-collapse: collapse;"> <thead> <tr> <th style="width: 5%;"></th> <th style="width: 15%; text-align: center;">अव्यय</th> <th style="width: 40%; text-align: center;">अर्थ</th> <th style="width: 40%; text-align: center;">वाक्य</th> </tr> </thead> <tbody> <tr> <td style="text-align: center;">1</td> <td>बहिः</td> <td>.....</td> <td>.....</td> </tr> <tr> <td style="text-align: center;">2</td> <td>श्वः</td> <td>.....</td> <td>.....</td> </tr> <tr> <td style="text-align: center;">3</td> <td>अधुना</td> <td>.....</td> <td>.....</td> </tr> <tr> <td style="text-align: center;">4</td> <td>उच्चैः</td> <td>.....</td> <td>.....</td> </tr> <tr> <td style="text-align: center;">5</td> <td>अपि</td> <td>.....</td> <td>.....</td> </tr> </tbody> </table>		अव्यय	अर्थ	वाक्य	1	बहिः	.....	.....	2	श्वः	.....	.....	3	अधुना	.....	.....	4	उच्चैः	.....	.....	5	अपि	.....	.....	(5)	Critical Thinking and Problem Solving
	अव्यय	अर्थ	वाक्य																								
1	बहिः	.....	.....																								
2	श्वः	.....	.....																								
3	अधुना	.....	.....																								
4	उच्चैः	.....	.....																								
5	अपि	.....	.....																								
6	<p>समय निर्देश करिये -</p> <p>11:00                      .....</p> <p>9:15                      .....</p> <p>8:45                      .....</p> <p>2:30                      .....</p> <p>4:45                      .....</p>	(5)	Evaluation																								



**ARMY PUBLIC SCHOOL GWALIOR**  
**CLASS - VIII**  
**ACADEMIC SESSION 2021-22**  
**WORKSHEET (SELF -ASSESSMENT)**

**Subject: Computer**  
**Allotment Date: 06 February 2022**

**Assignment No. : 11**

S.NO	QUESTION	MARKS	SKILLS/ COMPETENCIES
1.	<p><b>Write true and False</b></p> <p>1. Flash is a word processing software. <input type="checkbox"/></p> <p>2. The default background colour in photoshop is black. <input type="checkbox"/></p> <p>3. Visual Basic is Ideal for beginning programmers. <input type="checkbox"/></p> <p>4. The flash timeline contains tools that make up a movie. <input type="checkbox"/></p>	4x0.5=2	Understanding
2.	<p><b>Choose the correct answer.</b></p> <p>1. Nearly all current web browser support.</p> <p>a. Photoshop</p> <p>b. Flash</p> <p>c. CorelDraw</p>	4x0.5=2	Analyzing

2. A programming language based on the BASIC programming language is

- a. C++
- b. LOGO
- c. Visual Basic

3. The type of e-commerce used by individuals to sell products and services directly to other individual

- a. B2C
- b. B2E
- c. C2C

4. An illegal act involving internet and online is referred to as

- a.
- a. Computer Crime
- b. Cyber Crime
- c. Internet crime

<p><b>3.</b></p>	<p><b>Write short note on : .</b></p> <p>a. .What is the use of looping?</p> <hr/> <p>b. What does flash timeline contains.</p> <hr/> <hr/> <hr/>	<p><b>2x1=2</b></p>	<p><b>Information</b></p>
<p><b>4.</b></p>	<p><b>Answer the following question.</b></p> <p>1. What do you mean by computer security risk?</p> <hr/> <hr/> <p>2. Define B2C and B2B E-commerce?</p> <hr/> <hr/> <hr/>	<p><b>2x2=4</b></p>	<p><b>Communication And Skill</b></p>






**ARMY PUBLIC SCHOOL GWALIOR**  
**CLASS - VIII**  
**ACADEMIC SESSION 2021-22**  
**WORKSHEET (SELF –ASSESSMENT)**

**Subject: G.K**

**Assignment No. : 11**

**Allotment Date: 06 February 2022**

S. NO.	QUESTIONS	MARKS	SKILLS/ COMPETENCIES
1	<p>Q1. Objective type questions Fill in the blanks and rewrite the sentences.</p> <p>i) ----- is called the 'Father of India's Chemical Industry.'</p> <p>ii) Indian Railways is the largest employer in India and ----- largest employer in the world.</p> <p>iii) ----- is a test that uses powerful magnets, radiowaves, and a computer to make detailed pictures of vital organs inside our body.</p> <p>iv) ----- hold command over Business and Accountancy.</p> <p>v) House for Mr.Biswas was written by -----.</p> <p>vi) The -----has auditorium for 1800 students and other huge facilities.</p> <p>vii) Earth is part of ----- galaxy.</p> <p>viii) Vidyayaa Amrutam Ashnute means-----.</p> <p>ix) The Hon'ble Minister Dr. Harsh Vardhan has launched the ----- Program.</p> <p>x) GPS stands for-----.</p>	10	Information and Understanding



**ARMY PUBLIC SCHOOL GWALIOR**  
**CLASS - VIII**  
**ACADEMIC SESSION 2021-22**  
**WORKSHEET (SELF -ASSESSMENT)**

**Subject: Art Education**

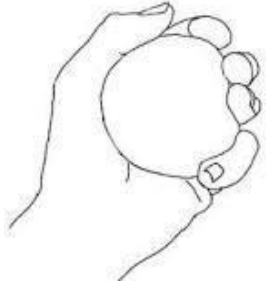
**Assignment No. : 11**

**Allotment Date: 06 February 2022**

<b>S.NO</b>	<b>QUESTIONS</b>	<b>MARKS</b>	<b>SKILLS/ COMPETENCIES</b>
1	<b>What paint do you use for mandalas?</b> (a) Anti-corrosive paint (b) Acrylic paint (c) Emulsion paint (d) Enamel paint	0.5	Creative Skills
2	<b>A mandala, which is Sanskrit for _____.</b> (a) Discoid object (b) Domicile (c) Barbarian (d) Locale	0.5	Creative Skills
3	<b>Which pen is used for mandala art?</b> (a) Pitt Artist Pens (b) Ball pens (c) Sketch pens (d) Fountain pens	0.5	Creative Skills
4	<b>Who invented still life?</b> (a) Leonardo da Vinci (b) Michelangelo (c) Jacopo de'Barbari (d) Vincent Van Gogh	0.5	Creative Skills
5	<b>Objects that are not the main focus of an image. The image or designs in the back are called_____.</b> (a) Positive Space (b) Negative Space	0.5	Creative Skills

	<p>(c) Contrast</p> <p>(d) Grid System</p>		
6	<p><b>A _____ is a drawing or painting that focuses on still objects.</b></p> <p>(a) Emotive</p> <p>(b) Still life</p> <p>(c) Perspective</p> <p>(d) Diagrammatic</p>	0.5	Creative Skills
7	<p><b>Graphite pencil, papers, pastels and water colours are used in-</b></p> <p>(a) Printmaking</p> <p>(b) Nature study</p> <p>(c) Carving</p> <p>(d) Sculpture</p>	0.5	Creative Skills
8	<p><b>What types of nature drawing is done without instruments?</b></p> <p>(a) Sketch</p> <p>(b) Wood carving</p> <p>(c) Final drawing</p> <p>(d) Sculpture</p>	0.5	Creative Skills
9	<p><b>Which of these is not the example of nature study?</b></p> <p>(a) Bird</p> <p>(b) Human figure</p> <p>(c) Wildlife</p> <p>(d) Sky</p>	0.5	Creative Skills
10	<p><b>Which of these is a basic skills of nature drawing?</b></p> <p>(a) Eye drawing</p> <p>(b) Prospective of drawing</p> <p>(c) Human proportion</p> <p>(d) None of these</p>	0.5	Creative Skills
11	<p><b>Gesture drawing is done in _____.</b></p> <p>(a) 10 seconds – 5 minutes</p> <p>(b) 15 seconds – 10 minutes</p> <p>(c) 3 seconds – 6 minutes</p>	0.5	Creative Skills

	(d) 7 seconds – 14 minutes		
12	<b>Gesture drawings are quick and fast drawings.</b> (a) True (b) False	0.5	Creative Skills
13	<b>Contour line describes edges of _____.</b> (a) Shapes and forms (b) Patterns (c) Textures (d) Colors	0.5	Creative Skills
14	<b>In how many steps we can make a gesture drawing?</b> (a) 6 (b) 8 (c) 4 (d) 10	0.5	Creative Skills
15	<b>Which among these is not the concept of landscape painting?</b> (a) Representational Landscape Art (b) Impressionistic Landscape Art (c) Contemporary Art (d) Abstract Landscape Art	0.5	Creative Skills
16	<b>We can see mountains, with narrow rivers, forests, villages and steep roads through which landscape?</b> (a) Mountain landscapes (b) Flat landscapes (c) Coastal landscapes (d) karst landscapes	0.5	Creative Skills
17	<b>Scholarly Landscape belongs to _____.</b> (a) Eugène Boudin (b) Nicolas Poussin (c) Paul Cézanne (d) André Derain	0.5	Creative Skills
18	<b>_____ Drawing consist of mountains, forests, cliffs, trees, rivers, valleys.</b> (a) Perspective (b) Emotive (c) landscape	0.5	Creative Skills

	(d) Life		
19	<p><b>We can see flat land, wide rivers, farms, cities and motorways through which landscape?</b></p> <p>(a) Mountain landscapes  (b) Flat landscapes  (c) Coastal landscapes  (d) karst landscapes</p>	0.5	Creative Skills
20	<p><b>What type of line picture is this?</b></p>  <p>(a) Pure contour line  (b) Cross contour line  (c) Gesture  (d) Blind contour line</p>	0.5	Creative Skills



**ARMY PUBLIC SCHOOL GWALIOR**  
**CLASS - VIII**  
**ACADEMIC SESSION 2021-22**  
**WORKSHEET (SELF –ASSESSMENT)**

Subject: Work Education

Assignment No. : 11





Allotment Date: 06 February 2022

S.NO	QUESTIONS	MARKS	SKILLS/ COMPETENCIES
1	<b>The meaning of Terracotta is _____.</b> (a) Depiction (b) Illustration (c) Delineation (d) Baked earth	0.5	Creative Skills
2	<b>What makes terracotta red?</b> (a) Iron (b) Sand (c) Water (d) None of above	0.5	Creative Skills
3	<b>Which place is famous for terracotta horses?</b> (a) Rewa division district (b) Narmadapuram district (c) Sagar division district (d) Bankura district	0.5	Creative Skills
4	<b>Who is named as the one who reinvents the forest?</b> (a) Giuseppe Penone Skills (b) Louise Nevelson (c) Ossip Zadkine (d) Eva Jospin	0.5	Creative Skills
5	<b>_____ is a form of woodworking by means of a cutting tool.</b> (a) Wood carving (b) Bone carving (c) Chip carving	0.5	Creative Skills

	(d) Fruit carving		
6	<p><b>Which one is not a Technique of wood carving?</b></p> <p>(a) Pattern</p> <p>(b) Friction</p> <p>(c) Detailing</p> <p>(d) Surfacing</p>	0.5	Creative Skills
7	<p><b>Which one is not a Fresco technique of Mural art?</b></p> <p>(a) Buon</p> <p>(b) Secco</p> <p>(c) Camaieu</p> <p>(d) Mezzo</p>	0.5	Creative Skills
8	<p><b>Which material is not used while making mural art?</b></p> <p>(a) Palette</p> <p>(b) Thread</p> <p>(c) Brushes</p> <p>(d) Paint</p>	0.5	Creative Skills
9	<p><b>Which one is the Famous cave where Mural Art is shown?</b></p> <p>(a) Fingal's Cave</p> <p>(b) Ajanta Caves</p> <p>(c) Mammoth Cave</p> <p>(d) Barton Creek Cave</p>	0.5	Creative Skills
10	<p><b>Which clay is used for mural art?</b></p> <p>(a) Ball clays</p> <p>(b) Resin clay</p> <p>(c) Stoneware clays</p> <p>(d) Porcelain clays</p>	0.5	Creative Skills
11	<p><b>An_____ is a framework around which the sculpture is built.</b></p> <p>(a) Sculpture</p> <p>(b) Armature</p> <p>(c) Wood Craft</p> <p>(d) Ceramics</p>	0.5	Creative Skills
12	<p><b>An armature is often made of heavy aluminum wire which is stiff.</b></p>	0.5	Creative Skills

	<p>(a) True</p> <p>(b) False</p>		
13	<p><b>Which material is not used while making armature?</b></p> <p>(a) Kerosene oil</p> <p>(b) Aluminum wire</p> <p>(c) Pliers</p> <p>(d) Wire cutte</p>	0.5	Creative Skills
14	<p><b>Armature wire is the best for _____.</b></p> <p>(a) Cubism</p> <p>(b) Sculpting</p> <p>(c) Contemporary</p> <p>(d) Impressionism</p>	0.5	Creative Skills
15	<p><b>Which state is famous for paper mache?</b></p> <p>(a) Madhya Pradesh</p> <p>(b) Uttar Pradesh</p> <p>(c) Uttarakhand</p> <p>(d) West Bengal</p>	0.5	Creative Skills
16	<p><b>Who brought paper mache to Kashmir?</b></p> <p>(a) Sultan Zain-ul-Abadin</p> <p>(b) Maqbool Fida Hussain</p> <p>(c) Raja Ravi Varma</p> <p>(d) Amrita Sher-Gil</p>	0.5	Creative Skills
17	<p><b>Paper mache was invented in _____.</b></p> <p>(a) India</p> <p>(b) China</p> <p>(c) Australia</p> <p>(d) Sweden</p>	0.5	Creative Skills
18	<p><b>Which material is not required in paper mache?</b></p> <p>(a) Plastic putty</p> <p>(b) Glue</p> <p>(c) Chalk powder</p> <p>(d) Coconut oil</p>	0.5	Creative Skills
19	<p><b>What is the meaning of Paper mache?</b></p> <p>(a) Chewed or crushed paper</p> <p>(b) Coloured paper</p> <p>(c) Sheets</p>	0.5	Creative Skills



	(d) Stencils		
20	Which among these is the picture of Paper Mache art?	0.5	Creative Skills
A			
B			
C			
D			






**ARMY PUBLIC SCHOOL GWALIOR**  
**CLASS - VIII**  
**ACADEMIC SESSION 2021-22**  
**WORKSHEET (SELF –ASSESSMENT)**

Subject: Music (Dance)

Assignment No. : 11

Allotment Date: 06 February 2022

S.NO	QUESTIONS	MARKS	SKILLS/ COMPETENCIES
1	<b>What is the common folk dance of Panjabi men's?</b> (a) Bhangda. (b) Bihu (c) Garba	1	Integrity
2	<b>Bihu is a popular folk dance associated with which state?</b> (a) Assam . (b) Bangal (c) Rajasthan	1	Integrity
3	<b>Which dance is known to have developed by NarahariBurhaBhakat?</b> (a) BhortalNritya . (b) Jago Nritya (c) Dandiya Raas	1	Integrity
4	<b>_____ a popular folk dance of women in Punjab region of Pakistan and India.</b> (a) Rai dance (b) Tamasha (c) Giddhais.	1	Integrity
5	<b>_____ is a folk dance in Assam which is performed by the Bodos.</b> (a) Hafiza (b) Rauf dance (c) Bagurumbra .	1	Integrity
6	<b>Hip-hop was a type of contemporary dance.</b>	1	Integrity

	<p>(a) True (b) False</p>		
7	<p><b>Contemporary dance combines the strong but controlled legwork of Ballet..</b></p> <p>(a) True (b) False</p>	1	Integrity
8	<p><b>This picture is of which type of dance of Assam?</b></p>  <p>(a) Bhortal dance . (b) Chhau (c) Kathak</p>	1	Integrity
9	<p><b>What is this picture about?</b></p>  <p>(a) Hip-hop dance (b) Folk dance (c) Contemporary dance</p>	1	Integrity
10	<p><b>This picture is of which dance?</b></p>  <p>(a) Giddhais.</p>	1	Integrity

	<b>(b)</b> Bhangda <b>(c)</b> Bihu		
--	---------------------------------------	--	--



**ARMY PUBLIC SCHOOL GWALIOR**  
**CLASS - VIII**  
**ACADEMIC SESSION 2021-22**  
**WORKSHEET (SELF –ASSESSMENT)**

**Subject: Music (Vocal)**

**Assignment No. : 11**

**Allotment Date: 06 February 2022**

S.No	Answer the following questions:	Marks	Skills
1.	What type of instrument is flute. a. Wind instrument b. String instrument	1	Informative
2.	which of the following is a string instrument. a. Guitar b. Tabla	1	Informative
3.	Who wrote the natyashastra. a. Bharat muni b. Bhatkhande	1	Informative
4.	Who wrote the sangeet ratnakar. a. Sarangdev b. Bharat muni	1	Informative
5.	How many matra in teentaal. a.16 b.8	1	Informative
6.	How many vibhag in teentaal. a. 2 b. 4	1	Informative
7.	Which matra is empty in teentaal. a. 9 b. 5	1	Informative
8.	What is north Indian classical music known as? a. Hindustani b. Carnatic	1	Informative
9.	Bhimsen joshi was the singer of which musical gharana? a. Kirana b. Gwalior	1	Informative
10	Which award has Bhimsen joshi ji received?  a. Bharat ratna b. Tansen award	1	Informative



**ARMY PUBLIC SCHOOL GWALIOR**  
**CLASS - VIII**  
**ACADEMIC SESSION 2021-22**  
**WORKSHEET (SELF -ASSESSMENT)**

**Subject: Health and Physical Education**

**Assignment No. : 11**

**Allotment Date: 06 February 2022**

<b>S.NO</b>	<b>MULTIPLE CHOICE QUESTIONS (1 to 4)</b>	<b>NATURE</b>	<b>MARKS 1X10</b>
1.	which is not the rules and regulations of football? a) offside b) penalty kick c) the throw- in d) none of the above	Informatory	1
2	Government agencies promoting games and sports in India a) Khelo India Scheme b) Arjun Award c) Dhyanchand Award d) all of the above	Analytical	1
3	How to Improve Your Social Health a) Develop Good Communication Skills. b) Build Healthy, Meaningful Relationships. c) Respect and Love Yourself. d) all of the above	Informatory	1

4	The serve in badminton should always be done a) underarm b) overarm c) below the server's waist d) both a & c	Understanding	1
5	<b>FILL IN THE BLANKS</b> A _____ is awarded for a foul committed by a defending player in his or her own penalty area.	Informatory	1
6	The Sports authority of India (SAI) was established by the government in _____	Understanding	1
7	Social health is commonly defined as your ability to form meaningful relationships with _____.	Understanding	1
8	<b>True and False ( question 8 to 10)</b> Any player may take the goal kick, placing the ball anywhere in the goal area.	Informatory	1
9	Arjun Award is given in Olympic games.	Informatory	1
10	Those who are lonely either lack relationships or lack the ability to adequately connect within those relationships.	Critical thinking	1



**ARMY PUBLIC SCHOOL GWALIOR**  
**CLASS - VIII**  
**ACADEMIC SESSION 2021-22**  
**WORKSHEET (SELF -ASSESSMENT)**

**Subject: Library**

**Assignment No. : 11**

**Allotment Date: 06 February 2022**

S.NO	QUESTIONS	MARKS	NATURE
	<b>Answer in five sentences</b>		
1	Which things should be kept in mind for making character? 1.....2.....3.....4.....5..... .....	01	Understanding
2	Why should you behave politely with others ? 1.....2.....3.....4.....5..... .....	01	Analysis
3	What is the use of continuous and regular study?	01	Analysis
4	How long did the researcher study the progress of the children?	01	Analysis
5	What was the reward for the children who waited ?	01	Understanding
6	Why has Dhoni been successful as a captain ?	01	Analysis
7	What is Dhoni,s greatest quality ?	01	Analysis
8	Write down five qualities of a good leader?	01	Analysis
9	What can we do around the house to save water ?	01	Understanding
10	What are the other resources around us ?	01	Understanding





**ARMY PUBLIC SCHOOL GWALIOR**  
**CLASS - VIII**  
**ACADEMIC SESSION 2021-22**  
**WORKSHEET (SELF -ASSESSMENT)**

**Subject: Discipline**  
**Allotment Date: 06 February 2022**

**Assignment No. : 11**

S. No	Question	Marks	Nature
1.	<p><b>Fill in the blanks-</b></p> <p>1. Two friends were walking in a _____ .</p> <p>2. They heard some _____ bustling in the nearby bushes.</p> <p>3. It is so important to take care of our _____.</p> <p>4. We can _____ our friends plants on their birthdays.</p>	04	Knowledge & Understanding
2.	<p><b>Choose the correct option/s-</b></p> <p>a.</p> <ul style="list-style-type: none"><li>i. We all are different.</li><li>ii. We all are same</li><li>iii. We all are similar</li><li>iv. We all are good friends</li></ul> <p>b. <b>How can we take care of our health?</b></p> <ul style="list-style-type: none"><li>i. By being active- Playing outside home on playground or in park</li><li>ii. You can ride by cycle to stay fit and healthy</li><li>iii. Eating healthy food each day</li><li>iv. Eating less of maggi, pasta, pizza and burger</li><li>v. Eating salads and fruits daily</li><li>vi. By helping mom in kitchen or small work like watering plants</li></ul>	03	Thinking Skills
3.		01	

	<p><b>Tick the correct answer/s-</b></p> <ul style="list-style-type: none"> <li>a. Friendship also means accepting our friends as they are</li> <li>b. We all should have different friends</li> <li>c. We all must make many friends</li> <li>d. We must take care of our eyes.</li> <li>e. We must remain attentive during on line classes.</li> </ul>		Thinking Skills
4.	<p><b>How can we take care of our mind-</b></p> <p><b>Choose all that apply-</b></p> <ul style="list-style-type: none"> <li>i. Reading good story books helps us to develop our thinking power</li> <li>ii. Watching good stuff on TV also helps us develop our thinking ability.</li> <li>iii. Our mind does not get good message when we watch a video where people shout or fight; so we should not watch such videos.</li> </ul> <p><b>How can we take care of our environment-</b></p> <p><b>Choose all that apply</b></p> <ul style="list-style-type: none"> <li>i. We can plant more plants</li> <li>ii. Gift our friends plants on their birthdays.</li> <li>iii. Plant trees on our birthday.</li> <li>iv. Use less plastic</li> <li>v. Keeping environment clean</li> </ul>	02	Knowing and understanding