



ARMY PUBLIC SCHOOL GWALIOR
CLASS - V
ACADEMIC SESSION 2021-22
WORKSHEET (SELF -ASSESSMENT)



Subject: English
Allotment Date: 06 February 2022

Assignment No. : 11

S. NO.	QUESTIONS	MARKS	NATURE
1	<p>Who are sailing in the 'Paper Boats' and what are they carrying? Write any three of your favourite childhood games.</p> <p>OR</p> <p>Write any five qualities of Mary Kom in form of a character sketch. Whom was she inspired from and why?</p> <hr/> <hr/> <hr/> <hr/> <hr/> <hr/>	2	Information
2	<p>Tenali Raman put the name of the king on top of the list of fools. Do you agree with Tenali Raman? Give reasons for your answer.</p> <p>OR</p> <p>Imagine you are the villager who believed that his visit to Hazrat Nizamuddin Aulia changed his life. Now write a letter to your friend about the incident.</p> <hr/> <hr/> <hr/> <hr/> <hr/> <hr/> <hr/> <hr/> <hr/> <hr/> <hr/> <hr/> <hr/> <hr/> <hr/> <hr/> <hr/> <hr/> <hr/> <hr/> <hr/> <hr/> <hr/> <hr/>	2	Understanding

3	<p>Taking ideas from “Foreign Lands”, explain that where would you like to go on adventure? Write a paragraph on places you would visit then.</p> <p>OR</p> <p>What are the five categories of the National Bravery Awards? Who gives the National Bravery Awards? Which is the highest gallantry Award?</p> <hr/> <hr/> <hr/> <hr/> <hr/> <hr/> <hr/> <hr/> <hr/> <hr/>	2	Interdisciplinary

4	<p>Write a short story about a young girl/boy and an act of bravery that she/he performed.</p> <p>OR</p> <p>Why did the villager visit Hazrat Nizamuddin? Why did the villager think that his exchange with Ameer Khusro was an unequal exchange?</p> <hr/> <hr/> <hr/> <hr/>	2	Analytical Skill
5	<p>Find about the Dakshin Gangotri and write any three adaptations or changes polar region people make to live in polar areas.</p> <p>OR</p> <p>Write a diary entry and explain about your some pleasant and unpleasant experiences when you entered your new school or new class. How much time it took for you to completely adjust with the new people around.</p> <hr/> <hr/> <hr/> <hr/> <hr/> <hr/> <hr/> <hr/>	2	Critical Thinking and Problem Solving

6	<p>What are three types of tenses? Make a chart to explain three tenses and its four sub-parts each.</p> <p>OR</p> <p>What are Conjunctions, Adverbs and Homophones? Give one example for each.</p> <hr/> <hr/> <hr/> <hr/> <hr/>	3	HOT
7	<p>What is the difference between Transitive and Intransitive verbs? Give one example for each.</p> <p>OR</p> <p>What do you understand by Prepositions? Make any three sentences using Prepositions.</p> <hr/> <hr/> <hr/> <hr/> <hr/> <hr/> <hr/>	3	Communication skills
8.	<p>What do you mean by degrees of comparison? Explain with examples, the three types of degrees of comparison.</p> <p>Definition: _____</p> <hr/> <hr/> <hr/> <p>Types:</p> <p>(i) _____</p> <p>(ii) _____</p> <p>(iii) _____</p>	4	Evaluation



ARMY PUBLIC SCHOOL GWALIOR
CLASS - V
ACADEMIC SESSION 2021-22
WORKSHEET (SELF -ASSESSMENT)




Subject: Hindi
Allotment Date: 06 February 2022

Assignment No. : 11

क्र.	प्रश्न	अंक	प्रश्न का आधार
1.	<p>सही प्रश्न के आगे (✓) लगाओ :</p> <p>I. चींटियों की तो जैसे फौज ही छावनी डाले हुए है?</p> <p>(i) पड़ाव डालना <input type="checkbox"/></p> <p>(ii) घर बनाना <input type="checkbox"/></p> <p>(iii) हथियार डालना <input type="checkbox"/></p> <p>II. शाखें कटने पर.....बच्चों की तरह रोते हैं।</p> <p>(i) पेड़ <input type="checkbox"/></p> <p>(ii) सपने <input type="checkbox"/></p> <p>(iii) पत्ते <input type="checkbox"/></p> <p>III. माँ ने बाजार से.....खरीदा।</p> <p>(i) काँच की चूड़ियाँ <input type="checkbox"/></p> <p>(ii) काँच का मर्तबान <input type="checkbox"/></p> <p>(iii) काँच की शीशियाँ <input type="checkbox"/></p> <p>IV. सचिन का जन्म.....1973 को मुंबई में हुआ।</p> <p>(i) 24 अप्रैल <input type="checkbox"/></p> <p>(ii) 26 मई <input type="checkbox"/></p> <p>(iii) 28 जून <input type="checkbox"/></p> <p>v. घटोत्कच.....का पुत्र था।</p> <p>(i) अर्जुन <input type="checkbox"/></p> <p>(ii) भीम <input type="checkbox"/></p> <p>(iv) सहदेव <input type="checkbox"/></p> <p>vi लोग झलकारी को क्या कह कर बुलाते थे ?</p> <p>(i) मोरनी <input type="checkbox"/></p> <p>(ii) हिरनी <input type="checkbox"/></p> <p>(iii) शेरनी <input type="checkbox"/></p>	3	बोधात्मक
2.	<p>निम्न शब्दों के अर्थ लिखो :</p> <p>(i) अंतर्राष्ट्रीय.....</p> <p>(ii) थिगलियाँ.....</p>	3	ज्ञानात्मक

	(iii) जलाशय..... (iv) बुलेट प्रूफ..... (v) पारायण..... (vi) आखर.....		
3.	निम्न लिखित शब्दों के लिए एक शब्द लिखो : (i) जो किसी से न डरे (ii) जो कठिनता से मिले (iii) जो वस्तु अपने देश कि हो (iv) जो सप्ताह में एक बार हो (v) जो शाक खाता है (vi) जिसमें कम बल हो (vii) जिसके पास धन न हो (viii) जो काम से जी चुराता है	4	सूचनात्मक
4.	दिए गए मुहावरों से वाक्य बनाओ : (i) कमर टूटना..... (ii) गाल बजाना..... (iii) कान भरना (iv) खून खौलना.....	4	रचनात्मक
5.	निम्नलिखित शब्दों के उत्तर दीजिये : (i) क्रिकेट के अलावा सचिन को क्या-क्या पसंद है? (ii) यदि घोंसले में गौरैया के बच्चे न होते तो क्या होता? (iii) कविता में कवि ने क्या विनती की है? (iv) काँच किन चीज़ों को मिलाकर बनाता है ? (v) भीम ने ब्राह्मण का आभार क्यों माना? (vi) अंग्रेजी फौजें किले में कैसे घुसीं?	3	विश्लेषणात्मक
6.	सही जोड़े बनाओ : अ ब (i) कायर 1. सम्बन्ध करक (ii) मीठाआम 2. पक्षी (iii) गीता हँसती है 3. विशेषण (iv) का, कि, के 4. वीर	3	उच्चस्तरीयचिंतन

	(v) कुल	5. वर्तमान काल		
	(vi) विहग	6. वंश		



ARMY PUBLIC SCHOOL GWALIOR
CLASS - V
ACADEMIC SESSION 2021-22
WORKSHEET (SELF -ASSESSMENT)



Subject: Mathematics
Allotment Date: 06 February 2022

Assignment No. : 11

S. NO.	QUESTIONS	MARKS	NATURE
1	<p>Fill in the blanks:</p> <p>(i) 1% means _____.</p> <p>(ii) Perimeter of rectangle = _____</p>	2x1=2	Understanding
2	<p>Write 'True' or 'False':</p> <p>(i) 1 cm is equal to 10 mm. ()</p> <p>(ii) 100 paise is equal to 10 rupee. ()</p>	2x1=2	HOTS
3	<p>Tick the correct answer from the given options:</p> <p>(i) The difference of 9 L 9 mL and 21 L 79 mL is.</p> <p>(a) 12 L 781 mL (b) 11 L 179 mL (c) 12 L 70 mL (d) 11 L 989 mL</p> <p>(ii) 1 m 4 dm is equal to</p> <p>(a) 14 cm (b) 140 mm (c) 140 cm (d) 14000 mm</p> <p>(iii) 20% of 250 kg is equivalent to _____</p> <p>(a) 150 g (b) 50 kg (c) 1500 g (d) 12.5 kg</p>	5x1=5	Critical thinking

	<p>(iv) 9 paise is written as_____</p> <p>(a) Rs 0.90 (b) Rs 0.09 (c) Rs 9.00 (d) Rs 0.9</p> <p>(v) The time 1315 hours is expressed as_____</p> <p>(a) 1:15 a.m. (b) 1:15 p.m. (c) 21 hours 55 minutes (d) 13 hours 15 minutes</p>		
4	<p>Solve the following questions: -</p> <p>Solve the following:</p> <p>(i) Find the perimeter of the rectangle- length 45cm ,breadth = 36 cm</p> <p>(ii) Convert 15 sq m into sq dm and sq cm.</p> <p>(iii) Convert 0.5 cu m into cu cm.</p> <p>(iv) Without actual addition , find the sum: 1+3+5+7+9+11+13+15+17.</p> <p>(v) Find the next triangular number : 36,45,.....</p>	5x1=5	Interdisciplinary
5	<p>Solve the following questions:</p> <p>(i) Draw the net of a cuboid 5 cm x 4 cm x 4 cm.</p> <p>(ii) Radhika runs around the rectangular field 80 m x 42 m. She takes 4 rounds. How much distance does she run?</p> <p>(iii) A bus leaves Delhi at 8:25 a.m. and reaches Agra at 12:10 p.m. Find the duration of time in hours and minutes.</p>	2x3 =6	Problem Solving



ARMY PUBLIC SCHOOL GWALIOR
CLASS - V
ACADEMIC SESSION 2021-22
WORKSHEET (SELF –ASSESSMENT)



Subject: EVS

Assignment No. : 11

Allotment Date: 06 February 2022

S.NO	QUESTIONS	MARKS	SKILLS/ COMPETENCIES
1.	Name the three river of Northern Plains.	2	Information
2.	What is the difference between a port and a harbour?	2	Understanding
3.	The Revolt of 1857 proved to be a turning going in Indian history ? How?	2	Interdisciplinary
4.	Define the following terms: a.Oasis b.Constitution	4	Analytical skills
5.	Why are the fundamental duties as important as the Fundamental Rights?	3	HOTS
	How is a satellite useful to us?	2	Critical thinking

			and problem solving
7.	What does the United Nations do?	2	Evaluation
8.	Our freedom came with a heavy price.Discuss	3	Communication skills



ARMY PUBLIC SCHOOL GWALIOR
CLASS - V
ACADEMIC SESSION 2021-22
WORKSHEET (SELF –ASSESSMENT)




Subject: Computer
Allotment Date: 06 February 2022

Assignment No. : 11

S.NO	QUESTION	MARKS	SKILLS/ COMPETENCIES
1.	<p>Choose the correct answer.</p> <p>1. The history of internet starts with the birth of .</p> <p>a. ARPANET</p> <p>b. Intranet</p> <p>c. website</p> <p>2. The collection of rows and column is called a</p> <p>a. Workbook</p> <p>b. worksheet</p> <p>c. Document</p> <p>3. The images can be added to a slide through</p> <p>a. Content layout</p> <p>b. Gallery</p> <p>c. Themes</p> <p>4. The command which is used to search for a particular word or text is.</p> <p>a. Format</p> <p>b. Find</p>	4x0.5=2	Analyzing

	c. Delete		
2.	Fill in the blanks . 1. Thewavy line shows the grammatical mistakes. 2. One page of presentation is called..... 3. A.....is a document on the web. 4. By default, there arecolumns in Excel worksheet.	4x1=4	Information
3.	Answer the following question. 1. What is ISP? 2. What is use of Excel? 	2x2=4	Communication And Skill



ARMY PUBLIC SCHOOL GWALIOR
CLASS - V
ACADEMIC SESSION 2021-22
WORKSHEET (SELF –ASSESSMENT)



Subject: G.K

Assignment No. : 11

Allotment Date: 06 February 2022

S.NO	QUESTIONS	MARKS	SKILLS/COMPETENCIES
1.	When using solar energy, what you call the device that absorbs sunlight?	1	Information
2.	Which country won the highest number of medals in the 2014 Commonwealth Games?	1	Understanding
3.	Which is the longest river on Earth?	1	Interdisciplinary
4.	a. Who is the author of the famous book The Girl with the Dragon Tattoo? b. Who discovered Penicillin medicine?	2	Analytical Skill
5	----- historical tower built at the 13th century in Delhi it is also the world's tallest brick minaret.	1	HOT
6.	Which language does not use any punctuation?	1	Critical Thinking and Problem Solving
7.	a.----- is the doctor who specialises in the treatment of cancer.	2	Identification

	b. The Jabalpur area in Madhya Pradesh is famous for ----- rock.		
8.	On which date is Labour Day celebrated?	1	Evaluation





ARMY PUBLIC SCHOOL GWALIOR
CLASS - V
ACADEMIC SESSION 2021-22
WORKSHEET (SELF -ASSESSMENT)






Subject: Art Education
Allotment Date: 06 February 2022



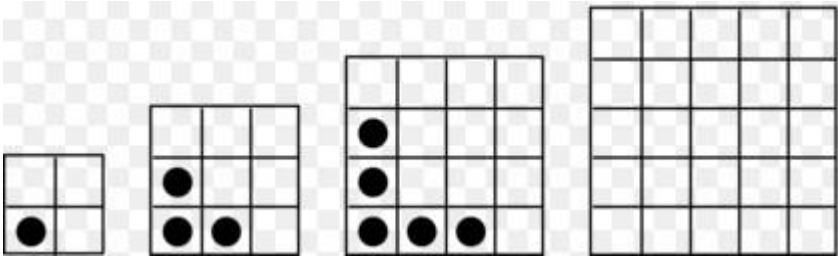
Assignment No. : 11


S.N	QUESTIONS	MARKS	NATURE
1.	Warli painting is a _____. A. White paint on red background B. Simple shapes and lines C. People dancing	1X0.5=0.5	Information
2.	White paint created in Warli Art using _____. Grounding rice into powder Mixing flour and salt Using acrylic or tempera Using chalk and water	1X0.5=0.5	Understanding
3.	The softer the lead, the _____ the mark will be. Darker Lighter Wider Softer	1X0.5=0.5	Information
4.	_____ are the basic Shapes A. Triangle, oval, square B. Square, rectangle, Circle C. Circle, oval, triangle D. Square, Triangle, Circle	1X0.5=0.5	Creativity

5.	<p>The lighter the value, the lead in the pencil is ____.</p> <p>A. Hard B. Soft C. Dark D. Wide</p>	1X0.5=0.5	Creativity
6.	<p>Mithila art is the another name of Madhubani Art.</p> <p>A. True B. False</p>	1X0.5=0.5	Creativity
7.	<p>dhubani art is learned from Grandfathers.</p> <p>A. True B. False</p>	1X0.5=0.5	Creativity
8.	<p>This is Blending.</p>  <p>A. True B. False</p>	1X0.5=0.5	Creativity
9.	<p>Is this a warli art?</p>  <p>A. Yes B. No</p>	1	Creativity
10.	<p>Pencils today are made of graphite.</p> <p>A. True B. False</p>	1	Creativity

11	<p>This is the</p>  <p>A. Light Source B. Core Shadow C. Cast Shadow D. Highlight</p>	1	Creativity
12	<p>Which state is known for its Warli paintings?</p> <p>A. Gujarat B. Rajasthan C. Maharashtra</p>	1	Creativity
13	<p>What type of scale shows the range of values from black to white and light to dark?</p>  <p>Monetary scale Proportion scale Pentatonic scale Value scale</p>	1	Creativity
14	<p>What is the shape of square?</p> <p>A. 2D B. 3D C. 5D D. Not any</p>	1	Creativity

15	<p>What is pictured here?</p>  <p>A wedding scene Dancers and a tarpa instrument player. Dancers and a bagpipe player Warli villagers celebrating a religious holiday</p>	1	Creativity
16	<p>How many sides triangle have?</p> <p>A. 4 B. 5 C. 3 D. 2</p>	1	Creativity
17	<p>This technique creates a gradation from light to dark</p> <p>A. Burnishing B. Shading C. Hatching D. Scumbling</p>	1	Creativity
18	<p>Which pencil is capable of making the darkest values?</p> <p>A. HB B. B C. 2B D. 4B</p>	1	Creativity

19	<p>This drawing is called a: 1 mark Shading</p>  <p>A. Still life B. Landscape C. Gesture drawing D. Contour drawing</p>	1	Creativity
20	<p>I have four sides and all sides are equal, who am I?</p> <p>A. Square B. Triangle C. Rectangle</p>	1	Creativity
21	<p>This artwork illustrates this Element of Art:</p>  <p>A. Pattern B. Colours C. Perspective D. Variety</p>	1	Creativity
22	<p>The sequence of figures shows a pattern. If the pattern repeats, how many small circles will figure 4 have?</p>  <p>A. 7 small circles B. 5 small circles</p>	1	Creativity

	<p>C. 9 small circles</p> <p>D. 6 small circles</p>		
23	<p>The sequence of figures shows a pattern. If the pattern repeats, how many small squares will figure 5 have?</p>  <p>A. 12 small squares</p> <p>B. 8 small squares</p> <p>C. 9 small squares</p> <p>D. 10 small squares</p>	1	Creativity
24	<p>Principle of art which refers to the decoration of the surface of art with repeated units.</p> <p>A. Contrast</p> <p>B. Rhythm</p> <p>C. Movement</p> <p>D. Pattern</p>	.1	Creativity



ARMY PUBLIC SCHOOL GWALIOR
CLASS - V
ACADEMIC SESSION 2021-22
WORKSHEET (SELF –ASSESSMENT)

Subject: Music (Dance)
Allotment Date: 06 February 2022

Assignment No. : 11

S.NO	QUESTIONS	MARKS	SKILLS/ COMPETENCIES
A.	Fill in the blanks:		
1.	Patriotic dance tells the story of the whole____. a. Nation b. World c. None of the above	1	Informative
2.	Dance is a type of art which generally involves the movement of____. a. Body b. Face c. None of the above	1	Informative
3.	____is the oldest dance form of India. a. Bhratanatyam b. Kathak c. Manipuri	1	Informative
4.	There are__ gharane in tabla. a. Six b. Seven c. Eight	1	Informative
5.	____is the famous flute player. a. Pt. Hari Prasad b. Pt. BirjuMaharaj c. Pt. ravishankar	1	Informative
B.	True/ False		
1.	Sattriya dance originated from Bihar. a. True b. False	1	Informative
2.	Natyashastra contain a treatise of performing arts. a. True b. False	1	Informative
3.	Patriotic dance encourages you to do something good for your own country. a. True b. False	1	Informative
4.	Tansenji was born in year 1506. a. True b. False	1	Informative
5.	There are two parts in Tabla. a. True b. False	1	Informative
C.	Multiple choice question:		
1.	What kind of performance is done on patriotic days? a. Classical dance	1	Informative

	<ul style="list-style-type: none"> b. Drama c. None of the above 		
2.	<p>What does pathya means?</p> <ul style="list-style-type: none"> a. Word b. Dance c. Music 	1	Informative
3.	<p>Traditionally which dance was performed by men?</p> <ul style="list-style-type: none"> a. Kuchipudi b. Kathakali c. Mohiniyattam 	1	Informative
4.	<p>Which dance is 500 years old?</p> <ul style="list-style-type: none"> a. Sattriya b. Kathak c. Bharatanatyam 	1	Informative
5.	<p>Where dancers did usually performed?</p> <ul style="list-style-type: none"> a. Temples b. Royal cottages c. Stage 	1	Informative
6.	<p>With the help of what we understand the rhythm of the song?</p> <ul style="list-style-type: none"> a. Metronome b. Lay c. Taal 	1	Informative
7.	<p>What was the name of Tansenji in childhood?</p> <ul style="list-style-type: none"> a. Tanna b. Munna c. Ravi 	1	Informative
8.	<p>How many matra are there in dadrataal?</p> <ul style="list-style-type: none"> a. Five b. Six c. Seven 	1	Informative
9.	<p>What is the first step to learn music?</p> <ul style="list-style-type: none"> a. Alankar b. Sargam c. Rhythm 	1	Informative
10.	<p>According to sangeetratnakar which varna groups are called alankars?</p> <ul style="list-style-type: none"> a. Regular varna group b. Regular lay c. Regular rhythm 	1	Informative



ARMY PUBLIC SCHOOL GWALIOR
CLASS - V
ACADEMIC SESSION 2021-22
WORKSHEET (SELF –ASSESSMENT)



Subject: Health and Physical Education
Allotment Date: 06 February 2022

Assignment No. : 11

S.NO	QUESTIONS	MARKS	SKILLS/ COMPETENCIES
1.	How many muscle in human body ? A. More than 600 B. 300 C. 200 D. 250	1	Informatory
2.	“FIFA” is Governing body of which game ? A. Hockey B. Swimming C. Kho-Kho D. Football	1	Analytical
3.	How many players in a Kho Kho team ? A. 8 B. 10 C. 12 D. 14	1	Informatory
4.	Which of the following is not a track event in athletics ? A. Long jump B. 100 mt C. Realy D. All of the above	1	Understanding
5.	Fill in the Blanks. Chaser in KHo – Kho is also called (Runner, defence, home player)	1	Informatory
6.	How many bones in human body (206, 100, 350, 600)	1	Analytical
7.	Less than players can not be allowed for a team to play football match. (5, 4, 6, 7)	1	Informatory
8.	True and false Yoga is a form of exercise (True/false)	1	Understanding
9.	Yoga is a Religion (True/false)	1	Critical thinking
10.	Running team is divided in to three groups exercise (True/false)	1	informatory



ARMY PUBLIC SCHOOL GWALIOR
CLASS - V
ACADEMIC SESSION 2021-22
WORKSHEET (SELF –ASSESSMENT)



Subject: Library

Assignment No. : 11

Allotment Date: 06 February 2022

S.NO	QUESTIONS	MARKS	NATURE
	Answer the following questions on the basis of the story ' given in the notes.		
1	How will you deal with a rude person ?	01	Analysis
2	What will you do if you are having a hard time?	01	Analysis
3	Why is patience so necessary for scientists ?	01	Understanding
4	Who was siddhartha ?	01	Analysis
5	What did Siddhartha see in the sky ?	01	Analysis
6	Why did he not give it to Devadutta ?	01	Understanding
7	What is perseverance?	01	Analysis
8	What did the king see in the cave ?	01	Analysis
9	Who is the creator of the universe ?	01	Analysis
10	.Does every religion worship its different god?	01	Understanding



ARMY PUBLIC SCHOOL GWALIOR
CLASS - V
ACADEMIC SESSION 2021-22
WORKSHEET (SELF –ASSESSMENT)



Subject: Discipline

Assignment No. : 11

Allotment Date: 06 February 2022

S. No	Question	Marks	Nature
1.	<p>Fill in the blanks-</p> <p>1.A friend in need is a friend _____.(indeed/ alldeed)</p> <p>2. A friend will always ____ and support his friends.(help/hate)</p> <p>3. Once there were ____ friends.(two/four)</p> <p>4. The puppy came out for his _____.(rescue/save)</p> <p>5.It is so important to take care of our _____</p> <p>6. We can _____our friends plants on their birthdays.</p>	06	Knowledge & Understanding
2.	<p>Choose the correct option-</p> <p>Antics means-</p> <p>i. Old</p> <p>ii. Funny, silly or strange</p> <p>iii. Similar</p> <p>iv. Famous</p>	01	Thinking Skills
3.	<p>Tick the correct answer-</p> <p>i. Friendship means helping our friends in need.</p> <p>ii. We all should have different friends</p> <p>iii. We all must make many friends</p> <p>iv. We must take care of our eyes.</p> <p>v. We must remain attentive during on line classes.</p>	01	Thinking Skills
4.	<p>How can we take care of our mind-</p> <p>Choose all that apply-</p> <p>i. Reading good story books helps us to develop</p>	02	Knowing and understanding

	<p>our thinking power</p> <p>ii. Watching good stuff on TV also helps us develop our thinking ability.</p> <p>iii. Our mind does not get good message when we watch a video where people shout or fight; so we should not watch such videos.</p>		
	<p>How can we take care of our environment- Choose all that apply</p> <p>i. We can plant more plants</p> <p>ii. Gift our friends plants on their birthdays.</p> <p>iii. Plant trees on our birthday.</p> <p>iv. Use less plastic</p> <p>v. Keeping environment clean</p>		