

ARMY PUBLIC SCHOOL GWALIOR
CLASS - III
ACADEMIC SESSION 2021-22
WORKSHEET (SELF –ASSESSMENT)



Subject: English

Assignment No. : 11

Allotment Date: 06 February 2022

S. NO.	QUESTIONS	MARKS	NATURE
1	Fill in the blanks with the correct form of verbs in the simple present tense: a. Mom.....my uniform. b. My friend.....tennis. c. The baby.....loudly. d. She.....the cake.	$\frac{1}{2} \times 4 = 2m$	Information
2	Write these expressions using _' or 's: a. the temple of Lord Krishna b. the toys of babies c. the books of girls d. the name of my uncle e. the dresses of women f. the number plate of my car	$\frac{1}{2} \times 6 = 3m$	Understanding
3	Choose the correct prepositions and fill in the blanks: a. There is a tree.....this building. (on/behind) b. Radhika fell.....the horse. (of/off) c. Subhash Chandra Bose was born.....23 rd January. (on/at) d. She's suffering.....fever. (from/of) e. This car is.....sale. (beside/for) f. This poem is written.....Keats. (by/at)	$\frac{1}{2} \times 6 = 3m$	HOT
4	Fill in the blanks with don't /doesn't/didn't : a. Pandas.....live in hot areas. b. Meera.....wash her uniform. c. My grandparents.....watch the English news when they were young. d. They.....study in the same class. e. You.....play tennis last evening. f. He.....pluck flowers.	$\frac{1}{2} \times 6 = 3m$	Interdisciplinary
5	Write down the meanings of the following words: a. stroll - b. realized - c. meadows - d. momentous -	$\frac{1}{2} \times 4 = 2m$	Analytical Skill



ARMY PUBLIC SCHOOL GWALIOR
CLASS - III
ACADEMIC SESSION 2021-22
WORKSHEET (SELF –ASSESSMENT)



Subject: Hindi

Assignment No. : 11

Allotment Date: 06 February 2022

संख्या	प्रश्नउत्तर	अंक	प्रकृति
प्र.1	सही वाक्यों के सामने सही (V) व गलत के सामने गलत (X) का निशान लगाएं। क. अंगुलिमाल संत था । () ख. राजस्थान की राजधानी जयपुर है । () ग. फूल हवा के बुलाने पर बाहर आते हैं । () घ. अंगुलिमाल एक सज्जन इंसान था । () राजन एक अमीर इंसान का बेटा था । ()	5	बोधोत्प्रेरक
प्र.2	वाक्यांश के लिए एक शब्द लिखो :- क. जो हिंसा करता है ख. सेवा करने वाला ग. जो किसी से न डरे	1.5	सूचनापरक
प्र.3	उचित क्रिया शब्द से स्थान भरें : क. दादी कहानी हैं । (सुनाना) ख. लड़का है । (सोना)	2	अंतः विषयात्मक

प्र.4	<p>राजन ने साँप की क्या मदद की ?</p> <hr/> <hr/> <hr/>	1	गहनसोचऔरसमस्यासमाधान
प्र.5	<p>निम्नलिखित शब्दों के उलटे अर्थ वाले शब्द लिखो :</p> <p>अंदर छोटा लेना प्रश्न</p>	2	उच्चस्तरीय चिंतन
प्र.6	<p>निम्नलिखित शब्दों के अर्थ लिखो:-</p> <p>क. आज्ञाकारी</p> <p>ख. अनगिन</p> <p>ग. दूभर</p> <p>घ. कल्याण</p>	4	विश्लेषणात्मक
प्र.7	<p>निम्नलिखित प्रश्नो उत्तर दो:-</p> <p>क डाकू का अंगुलिमाल नाम कैसे पड़ा ?</p> <hr/> <hr/> <hr/> <hr/>	4	भाषायीकौशल

ख फूल कविता में कौन किससे और क्या प्रश्न कर रहा है ?

.....

.....

.....

.....

ग चौकीदार ने घास की रस्सी क्यों बाँधी ?

.....

.....

.....

.....


घ तालाब ने साँप की तरफदारी क्यों की ?

.....

.....

.....

.....



ARMY PUBLIC SCHOOL GWALIOR
CLASS - III
ACADEMIC SESSION 2021-22
WORKSHEET (SELF –ASSESSMENT)



Subject: Mathematics

Assignment No. : 11

Allotment Date: 06 February 2022

S. NO.	QUESTIONS	MARKS	NATURE
1.	<p>True/False</p> <p>(i) There are 7 days in a week.</p> <p>(ii) 500 mL = 5 x 100 mL</p> <p>(iii) Data can be represented in the form of Pictographs.</p>	3X1/2=1.5	Information
2.	<p>Write the following fractional numbers:</p> <p>a) One by seven -</p> <p>b) Four – Sevenths -</p> <p>c) Thirteen over fifteen -</p>	3x1/2=1.5	Understanding

3.	Convert the following-		
i)	6987 g into kg and g	5x1=5	Analytical Skill Interdisciplinary
ii)	5 years into months		
iii)	15 m 35 cm into centimeters		

iv)	1350 m into kilometers 		
v)	5 L 350 mL into millilitres 		
4. i)	Do as directed: Find remainder when 817 is divided by 9. 	$3 \times 1 = 3$	Interdisciplinary
ii)	. Write in column and add:		

5 kg 435 g , 8 kg 250 g and 3 kg 8 g

.....

.....

.....

.....

iii)

Simplify:

$$(32 \div 4) + (13 + 5)$$

.....

.....

...

.....

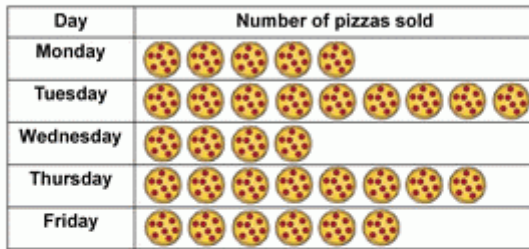
...


<p>5</p>	<p>Fill in the placeholders:</p> <p>i) Distance between Gwalior and Mumbai is measured in</p> <p>ii) □ $15.5 \times 3 = \dots\dots\dots$</p> <p>iii) $7009 \text{ g} = \dots\dots \text{ kg } \dots\dots \text{ g}$</p> <p>iv) comes after May.</p>	<p>$4 \times \frac{1}{2} = 2$</p>	<p>Critical Thinking and Problem Solving</p>
<p>6.</p>	<p>Read the given pictograph and answer the following questions:</p>	<p>$4 \times 1 = 4$</p>	<p>HOT</p>

Pizza pictograph

Data and Graphing Worksheet

Jake recorded the number of pizzas sold over five days.
Read the chart and answer the questions.



 = 5 pizzas

1. How many pizzas did he sell on Thursday? _____
2. Which day did he sell the least pizzas? _____
3. Which day did he sell the most pizzas? _____
4. Which day did he sell 25 pizzas? _____
5. How many pizzas did he sell on Monday and Wednesday? _____
6. Were more pizzas sold on Monday or Friday? _____
7. How many less pizzas were sold on Friday than Thursday? _____
8. How many pizzas did he sell in five days? _____

7.

Word Problems -

i) Gaurav invited 25 friends on his birthday party.

Only 15 friends came to attend the party. What fraction of the friends did not attend the party?

.....

.....

.....

.....

1x3=3

Evaluation

.....

.....

.....

ii) Rahul got ₹ 49.85 from his father. He bought a pen for ₹ 9.90. How much money was left with him?

.....

.....

.....

.....

.....

.....

iii) Priya travelled 7 km 800 m by car and 5 km 315 m by cycle. How much travel did she travel?


.....

.....

.....

.

	<p>.....</p> <p>.....</p> <p>.....</p> <p>..</p>		
--	--	--	--



ARMY PUBLIC SCHOOL GWALIOR
CLASS - III
ACADEMIC SESSION 2021-22
WORKSHEET (SELF –ASSESSMENT)



Subject: EVS

Assignment No. : 11

Allotment Date: 06 February 2022

S.N	QUESTIONS	MARKS	NATURE
1.	<p>Fill in the blanks by choosing the correct options :</p> <p>i) A..... delivers letters, cards, telegrams and money</p> <p>ii) It is our duty to keep our clean.(houses / cinema halls)</p>	2X1=2	Information
2.	<p>Answer the following-</p> <p>Why do we need directions?</p> <p>.....</p> <p>.....</p> <p>Name the four main directions.</p> <p>.....</p> <p>.....</p> <p>How should you behave with your neighbours?</p> <p>.....</p> <p>.....</p>	1x3=3	Understanding

3.	Name the neighborhood services which help to make our life easy. (any two)	1x2=2	Interdisciplinary
4.	Write true (T) or false (F) against the following statements: i) Neighbours celebrate festivals together. _____ ii) A light house is a landmark. _____ (iii) We should throw garbage in the open. _____	3X1=3	Analytical Skill
5.	Choose the correct option: (i) To report a theft, we go to a a) Bank b) office c) police station (ii) Number of main directions are – a) two b) three c) four	2X1=2	Critical Thinking and Problem Solving
6.	How can you help an elderly man living all alone in your neighbourhood?	1x2=2	HOT
7.	Answer the following questions: (i) Name the factors required for good home. (ii) What is a neighbourhood? (ii) What is a compass?	3X1=3	Evaluation

8.	<p>Answer the following questions :</p> <p>(i) What is the direction between south and west?</p> <p>.....</p> <p>.....</p> <p>(ii) Name any two national symbols.</p> <p>.....</p> <p>.....</p> <p>(iii) Name any two landmarks that you see on your way to market.</p> <p>.....</p> <p>.....</p>	3x1=3	Communication
----	--	-------	---------------



ARMY PUBLIC SCHOOL GWALIOR
CLASS - III
ACADEMIC SESSION 2021-22
WORKSHEET (SELF –ASSESSMENT)




Subject: Computer

Assignment No. : 11

Allotment Date: 06 February 2022

S.NO	QUESTIONS	MARKS	SKILLS/COMPETENCIES
1	<p><u>Tick the correct answer</u></p> <ol style="list-style-type: none">You enter the text with the help of a. Mouse b. Keyboard c. Printer..... is a flashing line on the screen. a. Insertion Point b. Ribbon c. Title barThe moving commands in LOGO are. a. PU&PD b. HT&ST c. FD&BK..... is the largest network of computers. a. Internet b. Multimedia c. DVDStarting position of the turtle is known as. a. Home b. Field c. Logo Prompt	5x0.5=2.5	Information
2	<p><u>Write 'T' for TRUE and 'F' for FALSE statements</u></p> <ol style="list-style-type: none">Word processor is a computer application which is used to create, edit, print and save a document...... LOGO is a programming Language. _____You cannot use graphical pictures with text in MS-Word. _____PU is used to lift the turtle pen up. _____Ctrl + C is used to save. _____	5x0.5=2.5	Understanding
3	<p><u>Fill in the blanks.</u></p> <ol style="list-style-type: none">Multimedia programs are available on _____.There are _____ tabs in WordPad._____ is a program used to create text document.The graphic area of LOGO is called _____._____ and _____ are the turning commands.	5x1=5	Analytical Skill



ARMY PUBLIC SCHOOL GWALIOR
CLASS - III
ACADEMIC SESSION 2021-22
WORKSHEET (SELF –ASSESSMENT)






Subject: G.K

Assignment No. : 11

Allotment Date: 06 February 2022

S. No.	QUESTIONS	MARKS- 20	NATURE
1	Tick the correct answer: 1) How many faces does a Cuboid have? a) 6 b) 5 c) 8 2) FIFA World Cup is associated with..... a) cricket b) hockey c) football	2X1/2=1	Information
2	Fill in the blanks : 1) A mural is a _____. 2) _____ stones are the bubbles of volcanic lava. 3) As blind as a _____. 4) I can make yummy shakes for you _____.	4X1/2=2	Understanding
3	Match the following: A i) Shanti Stupa ii) NP iii) Chess B a) India b) Leh c) no problem	3X1/2=1.5	Interdisciplinary
4	True or False: 1) Moon is the natural satellite of our planet earth. _____ 2) The energy we get from wind is called solar energy. _____ 3) Kabaddi is the national game of Bangladesh.	3X1/2=1.5	Analytical Skill

5	<p>Answer in one word:-</p> <p>1) Which key is used to rename a file or a folder?</p> <p>_____</p> <p>2) Which is the hottest planet of the solar system?</p> <p>_____</p>	2X1/2=1	HOTS
6	<p>Identify the given picture</p> <div style="display: flex; align-items: center; margin-bottom: 10px;">  <p>a) _____</p> </div> <div style="display: flex; align-items: center;">  <p>b) _____</p> </div>	2X1/2=1	Critical Thinking & Problem Solving
7	<p>1) Which musical instrument was Pandit Ravi Shankar an expert at playing?</p> <p>_____</p> <p>2) What is the name of the mascot of the 2016 Euro Cup?</p> <p>_____</p>	2X1/2=1	Evaluation
8	<p>1) Who was Neil Armstrong?</p> <p>_____</p> <p>_____</p> <p>_____</p>	1X1=1	Communication skills



ARMY PUBLIC SCHOOL GWALIOR
CLASS - III
ACADEMIC SESSION 2021-22
WORKSHEET (SELF –ASSESSMENT)




Subject: Health and Physical Education
Allotment Date: 06 February 2022

Assignment No. : 11

S.no	Question	Marks	Nature
1.	<p>Fill in the blanks.</p> <p>_____ is the most common and perceivable effect of eating junk food</p> <p>a) Fever b) Malaria c) Obesity d) None of the above</p> <p>_____ are the way of getting fuel for body.</p> <p>a) Food b) Nutrients c) Junk food d) Both A and B</p> <p>We should not run on _____.</p> <p>a) Playground b) Roads c) Running Ground d) None of the above.</p> <p>High blood pressure (hypertension) is the effect of _____.</p> <p>a) Malnutrition b) Obesity c) Both A and B d) None of the above</p> <p>Loss of vision cause by the deficiency of _____.</p> <p>a) Vitamin A b) Vitamin C c) Iodine d) Vitamin K</p> <p>Weight Loss is the sign of _____.</p> <p>a) Malnutrition b) Obesity c) Both A and B d) None of the above</p>	6x0.5=3	Informative
2.	<p>True and False</p> <p>Less Active or Less Playful is a sign of obesity. Diabetes is the effect of obesity.</p>	6x0.5=3	Understanding

<p>3.</p>	<p>We should gear up for bicycle rides. We should push others who are boarding the bus. A meal should have only one type of food items. We should follow balance diet. MCQ's</p> <p>A balance diet is which type of diet? a) That contains different types of foods b) That contains only one type of food c) That contains fast food d) All of the above</p> <p>Balance diet fulfil the requirement of what? a) Proteins b) Minerals c) Vitamins d) All of the above</p> <p>Why human suffer from Loss of appetite and digestion? a) They eat healthy food b) The don't have balanced diet c) They eat junk food d) Both B and C</p> <p>What is an important component of nutrients? a) Water b) Pizza c) Coca cola d) Burger</p> <p>What is the effect of obesity? a) High LDL cholesterol b) Low HDL cholesterol c) Type 2 diabetes d) All of the above</p> <p>Bone and tooth decay is caused due to the lack of what? a) Calcium b) Vitamin B1 c) Vitamin K d) Iodine</p> <p>What we should put on our helmet so drivers can see us better? a) Lights b) Reflecting stickers c) Animated stickers d) All of the above.</p> <p>What we should make sure while going on a bicycle ride? a) We are wearing nice clothes b) That our bicycle helmet fits us well c) Wash our bicycle d) Take Food.</p>	<p>8x0.5=4</p>	<p>Informative</p>
-----------	---	----------------	--------------------



ARMY PUBLIC SCHOOL GWALIOR
CLASS - III
ACADEMIC SESSION 2021-22
WORKSHEET (SELF –ASSESSMENT)







Subject: Art Education


Assignment No. : 11



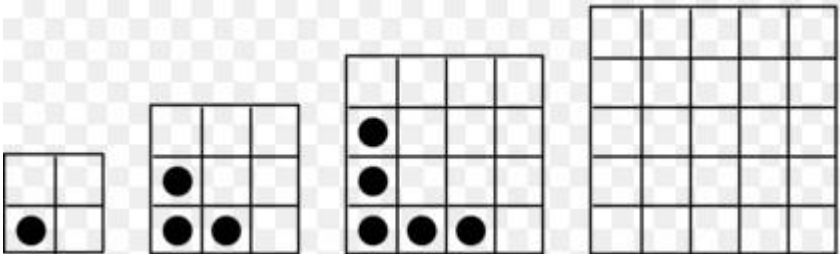
Allotment Date: 06 February 2022


S.N	QUESTIONS	MARKS	NATURE
1.	Warli painting is a _____. A. White paint on red background B. Simple shapes and lines C. People dancing	1X0.5=0. 5	Information
2.	White paint created in Warli Art using _____. A. Grounding rice into powder B. Mixing flour and salt C. Using acrylic or tempera D. Using chalk and water	1X0.5=0. 5	Understanding
3.	The softer the lead, the _____ the mark will be. A. Darker B. Lighter C. Wider D. Softer	1X0.5=0. 5	Information

4.	<p>_____ are the basic Shapes</p> <p>A. Triangle, oval, square</p> <p>B. Square, rectangle, Circle</p> <p>C. Circle, oval, triangle</p> <p>D. Square, Triangle, Circle</p>	1X0.5=0. 5	Creativity
5.	<p>The lighter the value, the lead in the pencil is ____.</p> <p>A. Hard</p> <p>B. Soft</p> <p>C. Dark</p> <p>D. Wide</p>	1X0.5=0. 5	Creativity
6.	<p>Green colour is a primary colour</p> <p>True</p> <p>False</p>	1X0.5=0. 5	Creativity
7.	<p>Red-Orange colour is a Tertiary Colors colour</p> <p>True</p> <p>False</p>	1X0.5=0. 5	Creativity
8.	<p>This is Blending.</p>  <p>A. True</p> <p>B. False</p>	1X0.5=0. 5	Creativity
9.	<p>Is this a warli art?</p>  <p>A. Yes</p> <p>B. No</p>	1	Creativity

10.	<p>Pencils today are made of graphite.</p> <p>A. True</p> <p>B. False</p>	1	Creativity
11	<p>This is the</p>  <p>A. Light Source</p> <p>B. Core Shadow</p> <p>C. Cast Shadow</p> <p>D. Highlight</p>	1	Creativity
12	<p>Which state is known for its Warli paintings?</p> <p>A. Gujarat</p> <p>B. Rajasthan</p> <p>C. Maharashtra</p>	1	Creativity
13	<p>What type of scale shows the range of values from black to white and light to dark?</p>  <p>A. Monetary scale</p> <p>B. Proportion scale</p> <p>C. Pentatonic scale</p> <p>D. Value scale</p>	1	Creativity

14	<p>What is the shape of square?</p> <p>A. 2D</p> <p>B. 3D</p> <p>C. 5D</p> <p>D. Not any</p>	1	Creativity
15	<p>What is pictured here?</p>  <p>A. A wedding scene</p> <p>B. Dancers and a tarpa instrument player.</p> <p>C. Dancers and a bagpipe player</p> <p>D. Warli villagers celebrating a religious holiday</p>	1	Creativity
16	<p>How many sides triangle have?</p> <p>A. 4</p> <p>B. 5</p> <p>C. 3</p> <p>D. 2</p>	1	Creativity
17	<p>This technique creates a gradation from light to dark</p> <p>A. Burnishing</p> <p>B. Shading</p> <p>C. Hatching</p> <p>D. Scumbling</p>	1	Creativity
18	<p>Which pencil is capable of making the darkest values?</p> <p>A. HB</p> <p>B. B</p> <p>C. 2B</p> <p>D. 4B</p>	1	Creativity

19	<p>This drawing is called a: 1 mark Shading</p>  <p>A. Still life B. Landscape C. Gesture drawing D. Contour drawing</p>	1	Creativity
20	<p>I have four sides and all sides are equal, who am I?</p> <p>A. Square B. Triangle C. Rectangle</p>	1	Creativity
21	<p>This artwork illustrates this Element of Art:</p>  <p>A. Pattern B. Colours C. Perspective D. Variety</p>	1	Creativity
22	<p>The sequence of figures shows a pattern. If the pattern repeats, how many small circles will figure 4 have?</p>  <p>A. 7 small circles B. 5 small circles</p>	1	Creativity

	<p>C. 9 small circles</p> <p>D. 6 small circles</p>		
23	<p>The sequence of figures shows a pattern. If the pattern repeats, how many small squares will figure 5 have?</p>  <p>A. 12 small squares</p> <p>B. 8 small squares</p> <p>C. 9 small squares</p> <p>D. 10 small squares</p>	1	Creativity
24	<p>Principle of art which refers to the decoration of the surface of art with repeated units.</p> <p>A. Contrast</p> <p>B. Rhythm</p> <p>C. Movement</p> <p>D. Pattern</p>	.1	Creativity



ARMY PUBLIC SCHOOL GWALIOR
CLASS - III
ACADEMIC SESSION 2021-22
WORKSHEET (SELF –ASSESSMENT)



Subject: Work Education

Assignment No. : 11

Allotment Date: 06 February 2022

S.N	QUESTIONS	MARKS	NATURE
1.	_____is another name of string puppet? A. Marionette B. Bear C. Human D. Dog	1	Information
2.	Tie and dye is_____. A. Textile Craft B. Fiber craft C. Needle craft D. None	1	Understanding
3.	.Origami is_____. A. Paper craft B. Textile craft C. Flower craft D. None	1	Information

4.	<p>What is it made of rangoli</p> <p>a) .Rice powder b) Vermilion c) Tumeric d) All of the above</p>	1	Creativity
5.	<p>Fashion is the self-expression of_____.</p> <p>A. Clothing B. Features C. Hairstyle D. All</p>	1	Creativity
6.	<p>We use puppets for Painting.</p> <p>A. True B. False</p>	1	Creativity
7.	<p>Finger puppets are hand puppets?</p> <p>A. True B. False</p>	1	Creativity
8.	<p>Puppets stimulate imagination encourage creative Play.</p> <p>A. False B. True</p>	1	Creativity
9.	<p>There were five colours used in the video multiplication flower.</p> <p>A. True B. False</p>	1	Creativity
10.	<p>We learn countings through the video multiplication flower.</p> <p>C. True D. False</p>	1	Creativity

11	How many colours used in the video Multiplication through flower craft? E. Five F. Three G. Two H. Four	1	Creativity
12	How many shape we used in video house making? A. 7 B. 4 C. 6 D. 1	1	Creativity
13	What is the Meaning of Paper Mache? A. Chewed or crushed paper B. Coloured paper C. Sheets D. Stencils	1	Creativity
14	What We learn through the video Multiplication through flower craft A. Counting B. Tables C. Addition D. Subtraction	1	Creativity
15	Blue pottery art is A. Ceramic craft B. Needle craft C. Textile craft D. None	1	Creativity
16	Which state is famous for puppets? A. Punjab B. Rajasthan C. Orissa D. Madhya Pradesh	1	Creativity

17	<p>Finger puppets can be used for?</p> <p>A. To tease others B. To learn counting using fingers C. Just for playing in playground</p>	1X0.5=0.5	Creativity
18	<p>'Wooden rose wood scoop' is a craft under which category</p> <p>a) House ware b) Leather work c) Fashion d) None</p>	1X0.5=0.5	Creativity
19	<p>Which state is famous for Kathputli (Dance) puppet?</p> <p>A. Rajasthan B. Maharashtra C. Tamil Nadu</p>	1X0.5=0.5	Creativity
20	<p>Clay modelling is a craft which comes under</p> <p>a) House ware b) Fashion c) Ceramics d) All</p>	1X0.5=0.5	Creativity
21	<p>What is the purpose of rangoli</p> <p>Decoration Bring good luck Desperation Sorrow</p>	1X0.5=0.5	Creativity
22	<p>How many types of rangoli are there?</p> <p>a. Three b. One c. Two.</p>	1X0.5=0.5	Creativity
23	<p>What is it made of rangoli.</p> <p>Rice powder Vermilion Tumeric All of the above</p>	1X0.5=0.5	Creativity

24	Rangoli art permanent? True False	1X0.5=0.5	Creativity
----	---	-----------	------------



ARMY PUBLIC SCHOOL GWALIOR
CLASS - III
ACADEMIC SESSION 2021-22
WORKSHEET (SELF –ASSESSMENT)



Subject: Discipline

Assignment No. : 11

Allotment Date: 06 February 2022

S. No	Questions	Marks	Nature
1.	<p>Fill in the blanks-</p> <p>1.A friend in need is a friend _____.(indeed/ alldeed)</p> <p>2. A friend will always _____ and support his friends.(help/hate)</p> <p>3. Once there were _____ friends.(two/four)</p> <p>4. The puppy came out for his _____.(rescue/save)</p> <p>5.It is so important to take care of our _____</p> <p>6. We can _____our friends plants on their birthdays.</p>	06	Knowledge & Understanding
2.	<p>Choose the correct option-</p> <p>Antics means-</p> <p>i. Old</p> <p>ii. Funny, silly or strange</p> <p>iii. Similar</p> <p>iv. Famous</p>	01	Thinking Skills
3.	<p>Tick the correct answer-</p> <p>i. Friendship means helping our friends in need.</p> <p>ii. We all should have different friends</p> <p>iii. We all must make many friends</p> <p>iv. We must take care of our eyes.</p> <p>v. We must remain attentive during on line classes.</p>	01	Thinking Skills
4.	<p>How can we take care of our mind-</p> <p>Choose all that apply-</p> <p>i. Reading good story books helps us to develop our thinking power</p> <p>ii. Watching good stuff on TV also helps us</p>	02	Knowing and understanding

	<p>develop our thinking ability.</p> <p>iii. Our mind does not get good message when we watch a video where people shout or fight; so we should not watch such videos.</p>		
	<p>How can we take care of our environment- Choose all that apply</p> <p>i. We can plant more plants</p> <p>ii. Gift our friends plants on their birthdays.</p> <p>iii. Plant trees on our birthday.</p> <p>iv. Use less plastic</p> <p>v. Keeping environment clean</p>		



ARMY PUBLIC SCHOOL GWALIOR
CLASS - III
ACADEMIC SESSION 2021-22
WORKSHEET (SELF –ASSESSMENT)




Subject: Music (Dance)

Assignment No. : 11

Allotment Date: 06 February 2022

S. No	Answer the following questions:	Marks	Skills
1.	Param Padam means_____. a. Lotus feet of Krishna b. Lotus feet of Brahma c. None of them	1	Informative
2.	Bharatanatyam is the_____ classical dance of India. a. Oldest b. Newest c. None of the above	1	Informative
3.	Britta dance is a _____ dance. a. Simple b. Complicated c. Unique	1	Informative
4.	Music has ___type of rhythm? a. one b. two c. three	1	Informative
5.	When the rhythm (lay) is simple, it is called____? a. Drut b. Madhya c. None of the above	1	Informative
B.	True/False		
6.	Kuchipudi originated from Kerala? a. True b. False	1	Informative
7.	Lord Krishna is nayak in Padam? a. True b. False	1	Informative
8.	Dadra Taal is played on guitar ? a. True b. False	1	Informative
9.	Pt. Ravi shankar is famous tabla player ? a. True b. False	1	Informative
10.	There are 6 matra in teen tal a. True b. False	1	Informative
C.	Multiple Choice Question:		
11.	Pallavi, Anupallavi are in what? a. Padam b. Shabdham c. Varnam	1	Informative
12.	How many mudras are used in Odissi dance?	1	Informative

	a. 50 b..40 c. 30		
13.	Gambhira dance is performed with what? a. Sincerity b. Honesty c. All of the ab	1	Informative
14.	Which is the traditional dance of West Bengal? a. Tusu dance b. Lathi c. Rabindrasangeet dance	1	Informative
15.	Which dance is performed after the recovery of some disease? a. Vrita dance b. Tusu dance c. Kirtan	1	Informative
16.	How many khali are there in Dadra Tal? a. one b. two c. three	1	Informative
17.	How many vibhag are there in Dadra Tal? a. One b. Two c. None of the above	1	Informative
18.	ow many khali are there in Teen Tal? a. one b. two c. three	1	Informative
19.	What is the khol of the tabla (right) made of? a. Wood b. Iron c. Plastic	1	Informative
20.	What is the shell (khol) of the Dagga (left) made of ? a. Wooden b. Iron c. Plastic	1	Informative



ARMY PUBLIC SCHOOL GWALIOR
CLASS - III
ACADEMIC SESSION 2021-22
WORKSHEET (SELF –ASSESSMENT)



Subject: Library

Assignment No. : 11

Allotment Date: 06 February 2022

S.NO	QUESTIONS	MARKS	NATURE
	Answer the following questions on the basis of the story given in the notes.		
1	Who was Sudha?	01	Comprehension
2	Where did Sudha meet the old woman?	01	Analysis
3	Why did the people praise Sudha?	01	Understanding
4	Who was there in the forest?	01	Comprehension
5	How was the water of the pool?	01	Understanding
6	What did the hunters do?	01	Analysis
7	How did the jackal cross the river?	01	Comprehension
8	How should we behave with others?	01	Understanding
9	Why did god give a hen to the farmer?	01	Analysis
10	. Why did the farmer kill the hen?	01	Comprehension