



ARMY PUBLIC SCHOOL GWALIOR

CLASS - II

ACADEMIC SESSION 2021-22

WORKSHEET (SELF –ASSESSMENT)



Subject: English

Assignment No. : 11

Allotment Date: 06 February 2022

| S.NO. | QUESTIONS | MARKS 20 | NATURE |
|-------|---|-----------|-------------------|
| 1 | Fill in the blanks. 1. Kishan lal was a _____ person. 2. _____ was the new friend of Kishan lal. 3. A person who attends to teeth is a _____. 4. The moon looks like a _____. | (4x1=4) | Information |
| 2 | Write True or False. 1. Blackie, the clever crow did not help Kishanlal. () 2. The national flower of India is the lotus. () 3. The three pigs decided to built house () 4. The town rewarded Blackie with a special medal. () | (4x0.5=2) | Understanding |
| 3 | Answer the following questions. (a). Name the three colors present in the national flag. (b).What did Kishanlal use to make a little bed for the crow? (c) Why was the thief angry with Kishanlal? (d) Why did the three pigs decided to build house? | (4x1=4) | Interdisciplinary |

| | | | | | | | | | | | | | | | | | |
|------------------|--|-----------|------------------|------------------|-------|-----------------|-------|-------------|------|--------------|--------|-------------|---------|--------------|---------------------------|-----------|---------------------------------------|
| 4 | <p>Fill in the blanks with suitable words.</p> <p>a. We should not _____ our time. (waste/waist)</p> <p>b. Samarth _____ in the notebook. (write/ is writing)</p> <p>c. There is a tree _____ the garden. (in/on)</p> <p>d. I _____ in the pool.(swim/ am swimming)</p> <p>e. A collection of birds is called _____. (flock/ crowd)</p> <p>f. Gujarat _____ Bihar are both states of India. (or / and)</p> | (6x0.5=3) | Analytical Skill | | | | | | | | | | | | | | |
| 5 | <p>Match the following words with their meanings:</p> <table border="0" style="width: 100%;"> <tr> <td style="width: 50%;">COLUMN A.</td> <td style="width: 50%;">COLUMN B</td> </tr> <tr> <td>(a) kind-hearted</td> <td>tired</td> </tr> <tr> <td>(b) set fire to</td> <td>brave</td> </tr> <tr> <td>(c) valiant</td> <td>burn</td> </tr> <tr> <td>(d) worn out</td> <td>caring</td> </tr> <tr> <td>(e) Nursery</td> <td>written</td> </tr> <tr> <td>(f) Composed</td> <td>a room for young children</td> </tr> </table> | COLUMN A. | COLUMN B | (a) kind-hearted | tired | (b) set fire to | brave | (c) valiant | burn | (d) worn out | caring | (e) Nursery | written | (f) Composed | a room for young children | (6x0.5=3) | Critical Thinking and Problem Solving |
| COLUMN A. | COLUMN B | | | | | | | | | | | | | | | | |
| (a) kind-hearted | tired | | | | | | | | | | | | | | | | |
| (b) set fire to | brave | | | | | | | | | | | | | | | | |
| (c) valiant | burn | | | | | | | | | | | | | | | | |
| (d) worn out | caring | | | | | | | | | | | | | | | | |
| (e) Nursery | written | | | | | | | | | | | | | | | | |
| (f) Composed | a room for young children | | | | | | | | | | | | | | | | |
| 6 | <p>Write 8 sentences on the given topic-</p> <p style="text-align: center;">My Family</p> <p>.....</p> <p>.....</p> <p>.....</p> <p>.....</p> <p>.....</p> <p>.....</p> <p>.....</p> <p>.....</p> | 8x0.5=4 | Creative Writing | | | | | | | | | | | | | | |



ARMY PUBLIC SCHOOL GWALIOR

CLASS - II

ACADEMIC SESSION 2021-22

WORKSHEET (SELF –ASSESSMENT)



Subject: Hindi






Assignment No. : 11

Allotment Date: 06 February 2022

| संख्या | प्रश्नकार | अंक | प्रकृति |
|--------|--|-----|----------|
| प्र.9 | निम्नलिखित शब्दों के शब्दार्थ लिखो १. बलवान- २. सभा . ३ तन- ४ चतुर. ५ हाथ मारना- | ५ | बोधत्मक |
| प्र.२ | सही उत्तर के सामने <input type="checkbox"/> लगाओ। १. बंदर कुएं के पास क्या खेल रहे थे? आंख मिचौनी छुपन छुपाई चोर पाही उत्तर २. सबसे पहले चाँद को कुएं में किसने देखा ? नैकू ने दुमकू ने मटरू ने उत्तर- ३. तेनालीराम ने कौओ की गिनती के लिए कितना समय मांगा ? २ दिन का ३ दिन का २ सप्ताह को उत्तर- ४ कृष्णदेव राय ने तेनालीराम को इनाम में क्या दिया? हीरो का हार हीरे की अंगूठी मोतियों की माला उत्तर- | २ | स्मरणपरक |


| | | | |
|-------|---|---|-------------------|
| | | | |
| प्र.३ | <p>इन्हें क्या कहते हैं? लिखो</p> <p>क जिस आसन पर राजा बैठता है -</p> <p>_____</p> <p>ख जो बहुत समझदार होता है -</p> <p>_____</p> | २ | अंतः विशयात्मक |
| प्र.४ | <p>पर्यायवाची शब्द-</p> <p>फूल-</p> <p>भौरें -</p> <p>हवा-</p> <p>तन-</p> | २ | सूत्रपरक |
| प्र.५ | <p>सही शब्द चुनकर वाक्य पूरे करो।</p> <p>१. राजा राज्य का _____ करना चाहते थे।</p> <p>२. चाँद को बचाने का _____ मिल गया</p> <p>३. राजा ने सबको सभा में हाजिर रहने की _____ दी थी</p> <p>४ _____ दुमकू चिल्लाया</p> | २ | अंतः विशयात्मक |
| प्र.६ | <p>इन प्रश्नों के उत्तर दो</p> <p>१. पांडवों की माता का क्या नाम था ?</p> <p>_____</p> <p>२. तेनाली राम दरबार में देर से क्यों पहुंचे?</p> <p>_____</p> <p>३ बसंत ऋतु का हवा पर क्या असर होता है</p> <p>_____</p> <p>४ कृष्णदेव ने तेनालीराम से क्या सवाल पूछा?</p> | ४ | बोधोत्प्रेरक |

| | | | |
|-----|---|---|-------------------|
| ५.७ | निम्नलिखित विषय पर ४ वाक्य लिखो - मेरा मित्र | ३ | अंतः विशयात्मक |
| | १ २ ३ ४ ५ | | |

| | | | |
|----------|---|--|--|
| Tomato |  | | |
| Capsicum |  | | |
| Carrot |  | | |
| Mushroom |  | | |
| Potato |  | | |

1) How many tomatoes are there?
2) Which kind of vegetable is minimum in number?
3) What is the total number of vegetables?

| | | | |
|----|---|--------------|--------------------|
| 6. | <p>Write True or False:-</p> <p>a) A leap year has 365 days. _____</p> <p>b) There are 30 days in November. _____</p> <p>c) If today is Saturday, tomorrow will be Monday. _____</p> | 3x1=3 | Information |
|----|---|--------------|--------------------|



ARMY PUBLIC SCHOOL GWALIOR

CLASS - II

ACADEMIC SESSION 2021-22

WORKSHEET (SELF –ASSESSMENT)



Subject: EVS

Assignment No. : 11

Allotment Date: 06 February 2022

| S. No. | QUESTIONS | MARKS 20 | NATURE |
|--------|---|-------------|---------------|
| 1 | <p>Fill in the blanks using given help box.</p> <p>(i) Taj Mahal was made by _____.</p> <p>(ii) Smoke from vehicles make _____ dirty.</p> <p>(iii) We carry an umbrella in the _____ season.</p> <p>(iv) _____ was the first man to step on the moon in 1969.</p> | 4x1=4 | Information |
| 2 | <p>Tick the correct answer-</p> <p>i) We can see the stars with the help of a _____ .</p> <p>a) glasses b) microscope c) telescope</p> <p>ii) In winter season, we see _____ .</p> <p>a) oil b) fog c) water</p> <p>iii) There are _____ states in India.</p> <p>a) 27 b) 28 c) 29</p> <p>iv) Earth day is celebrated on _____ .</p> <p>a) 3/2 b)22/04 c)29/10</p> | 0.5 x4=2 | Understanding |

| | | | |
|-----------------|--|---------------------|---------------------------------|
| <p>3</p> | <p>Write True or False:</p> <p>1. Burning of dry leaves causes pollution. _____</p> <p>2. Weather changes everyday. _____</p> <p>3. Stars are very near to the earth. _____</p> <p>4. Madhya Pradesh is the largest state in India. _____</p> | <p>4x1=4</p> | <p>Understanding</p> |
| <p>4</p> | <p>Define the following</p> <p>1. Sundial-</p> <p>2. Global warming-</p> | <p>2X2=4</p> | <p>Interdisciplinary</p> |
| <p>5</p> | <p>Answer the following questions-</p> <p>.1. How can we keep the water clean?</p> <p>Ans.</p> <p>2. Are monuments important? Why?</p> <p>Ans.</p> | <p>2x1=2</p> | <p>Analytical skill</p> |

| | | | |
|---|--|----------------|-------------|
| 6 | <p>Answer the following questions-</p> <p>1. Find out which country is the most polluted in the world and why?</p> <p>Ans.....</p> <p>2. What kind of changes occur in our food habits and dress according to seasons?</p> <p>Ans.....</p> <p>.....</p> | 2 x2= 4 | HOTS |
|---|--|----------------|-------------|



ARMY PUBLIC SCHOOL GWALIOR
CLASS - II



ACADEMIC SESSION 2021-22
WORKSHEET (SELF –ASSESSMENT)

Subject: Computer

Assignment No. : 11

Allotment Date: 06 February 2022

| S.NO | QUESTIONS | MARKS | SKILLS/ COMPETENCIES |
|-------------|---|------------------|---------------------------------|
| 1 | <p><u>Tick the correct answer</u></p> <p>1. is fixed inside the CPU.</p> <p>a. CD-ROM b. Hard Disk c. Pen Drive</p> <p>2. is a circular- shaped disc.</p> <p>a. Pen Drive b. Hard Disk c. CD-ROM</p> <p>3. is a small and portable storage device.</p> <p>a. Hard Disk b. DVD c. Pen Drive</p> <p>4. program is used to do calculation</p> <p>a. Calculator b. Notepad c. Both a. and b.</p> <p>5. In Notepad, the blinking line is known as</p> <p>a. Text Area</p> | 5x0.5=2.5 | Information |

| | | | |
|---|--|------------------|------------------|
| | b. Menu Bar c. Cursor | | |
| 2 | <p>Write “T” for True and “F” for False statements:</p> <ol style="list-style-type: none"> 1. You can type your name in Notepad. _____ 2. You can not type text in Paint program. _____ 3. Polygon tool is used to draw triangles. _____ 4. Curve tool is used to draw straight lines. _____ 5. You can do addition with a calculator. _____ | 5x0.5=2.5 | Understanding |
| 3 | <p><u>Fill in the blanks.</u></p> <ol style="list-style-type: none"> 1. is used to type letters, words and sentences. 2. Calculator is used to do 3. The hard disk is also called 4. A CD-ROM isin shape. 5. tool is used to write your name within a drawing. | 5x1=5 | Analytical Skill |
| | | | |



ARMY PUBLIC SCHOOL GWALIOR

CLASS - II

ACADEMIC SESSION 2021-22

WORKSHEET (SELF –ASSESSMENT)



Subject: G.K

Assignment No. : 11

Allotment Date: 06 February 2022

| S. NO. | QUESTIONS | MARKS 20 | NATURE |
|--------|---|-------------|----------------|
| 1. | Fill in the blanks 1 The water on Earth is constantly, 2. The water of the sea is and so cannot be used for drinking . 3. The two sides of a river are called its, 4. The soil along a riverbed is very..... | 4x1=4 | Understanding |
| 2. | Answer the following questions in one word? 1. What is the capital of Bangladesh? Ans. 2. . Whom does a veterinary doctor treat? Ans. 3.How many candies make a dozen.? Ans..... 4. How many runs make a century? Ans, 5. How many years are there in a silver jubilee? | 5x1=5 | Thinking skill |

Ans

3


Name the river that flows by these cities .

4x1=4


Observation



London



Varanasi



Kairo



Nasik



ARMY PUBLIC SCHOOL GWALIOR

CLASS - II

ACADEMIC SESSION 2021-22

WORKSHEET (SELF –ASSESSMENT)



Subject: Art Education


Assignment No. : 11


Allotment Date: 06 February 2022

| S.NO | QUESTIONS | MARKS | SKILLS/ COMPETENCIES |
|------|---|-------|-------------------------|
| 1. | What is the purpose of rangoli Decoration Bring good luck Desperation Sorrow | 5 | Creativity |
| 2. | What does Red light means? A. To go B. To drive C. To Run D. To Stop | 5 | Creativity |
| 3. | What is it made of rangoli. Rice powder Vermilion Turmeric All of the above | 5 | Creativity |
| 4. | | 5 | Creativity |





- A. Halogen light
- B. Traffic light
- C. Incandescent light
- D. Compact fluorescent lamps

| | | | |
|-----------|---|----------|-------------------|
| |  <ul style="list-style-type: none"> A. Halogen light B. Traffic light C. Incandescent light D. Compact fluorescent lamps | | |
| <p>5.</p> | <p>Is Rangoli art permanent?</p> <p>True False</p> | <p>5</p> | <p>Creativity</p> |
| <p>6.</p> | <p>How many types of rangoli are there?</p> <p>a. Three b. One c. Two.</p> | <p>5</p> | <p>Creativity</p> |
| <p>7.</p> | <p>Why do we use puppets?</p> <p>A. For teaching only</p> <p>B. for good visual representation to use while singing, dancing and</p> <p>C. Storytelling.</p> <p>Just for story telling</p> | <p>5</p> | <p>Creativity</p> |

| | | | |
|-----|--|---|------------|
| 8. | <p>? Which is not a types of wind chime? A. Tubular chimes B. Paper chimes C. Decorative chimes Gong chimes</p> | 5 | Creativity |
| 9. | <p>A _____ is a natural or artificial feature of the solid surface of the Earth or other planetary body.</p> <p>(a) Landform (b) Landscape (c) Hill (d)Valley</p> | 5 | Creativity |
| 10. | <p>A _____ is a flat land between two hills or mountains.</p> <p>1. Land 2. Valley 3. Forest 4. Water</p> | 5 | Creativity |
| 11 | <p>This picture is of what type of landform?</p>  <p>(a) Hill (b) Desert (c) Forest (d) Plateau</p> | 1 | |
| 12 | <p>What colour is used for zebra crossing? A. Violet & Indigo B. Black & White C. Green and Blue</p> | 1 | |

| | D. Pink and Grey | | |
|-----------|---|----------|--|
| 13 | Which of these is not the type of landforms? (a) Desert (b) Forest (c) Plateau (d) Water | 1 | |
| 14 | What is the place where there are large numbers of trees, animals and birds? (a) Forest (b) Desert (c) Water | 1 | |
| 15 | _____ angle paper plate makes the face of Bunny. (A) 45 degree (B) 90 degree (C) 100 degree | 1 | |
| 16 | What is the shape of eyes? (A) circle (B) rectangle (C) square | 1 | |
| 17 | _____ are the basic Shapes A. Triangle, oval, square B. Square, rectangle, Circle C. Circle, oval, triangle D. Square, Triangle, Circle | 1 | |
| 18 | What is the shape of eyes? (A) circle (B) rectangle (C) square | 1 | |
| 19 | . Yellow, red and orange are warm colours. A. True False | 5 | |

| | | | |
|------------------|---|-----------------|--|
| <p>20</p> | <p>Warli painting is a _____.</p> <p>A. White paint on red background</p> <p>B. Simple shapes and lines</p> <p>C. People dancing</p> | <p>5</p> | |
| <p>21</p> | <p>Is this a warli art?</p>  <p>A. Yes</p> <p>B. No</p> | <p>5</p> | |
| <p>22</p> | <p>What is pictured here?</p>  <p>A. A wedding scene</p> <p>B. Dancers and a tarpa instrument player.</p> <p>C. Dancers and a bagpipe player</p> <p>D. Warli villagers celebrating a religious holiday</p> | <p>1</p> | |
| <p>23</p> | <p>How many sides triangle have?</p> <p>A. 4</p> <p>B. 5</p> <p>C. 3</p> <p>D. 2</p> | <p>1</p> | |

| | | | |
|----|---|---|--|
| 24 | <p>Which pencil is capable of making the darkest values?</p> <p>A. HB</p> <p>B. B</p> <p>C. 2B</p> <p>D. 4B</p> | 1 | |
| 25 | <p>Wind chimes help to attract _____ and suppress ill luck.</p> <p>A. Negative energy</p> <p>B. positive energy</p> <p>C. no energy</p> <p>both A & B</p> | 5 | |
| 26 | <p>The lighter the value, the lead in the pencil is ____.</p> <p>A. Hard</p> <p>B. Soft</p> <p>C. Dark</p> <p>D. Wide</p> | 5 | |
| 27 | <p>_____ is the another name of string puppet?</p> <p>A. Marionette</p> <p>B. Bear</p> <p>C. Human</p> <p>D. Dog</p> | 5 | |
| 28 | <p>_____ State is famous for Kathputli Dance of puppets?</p> <p>Madhya Pradesh</p> <p>Rajasthan</p> <p>C Bihar</p> | 5 | |
| 29 | <p>_____ State is famous for Kathputli Dance of puppets?</p> <p>A. Madhya Pradesh</p> <p>B. Rajasthan</p> <p>C Bihar</p> | 5 | |



ARMY PUBLIC SCHOOL GWALIOR

CLASS - II

ACADEMIC SESSION 2021-22

WORKSHEET (SELF –ASSESSMENT)



Subject: Health and Physical Education

Assignment No. : 11

Allotment Date: 06 February 2022

| S. No | Questions | Marks | SKILLS/ COMPETENCIES |
|-------|---|-------|-------------------------|
| | Fill in the blanks | | |
| 1 | We should remember to wash our _____ after washroom. a) Face b) Legs c) Hands d) Hairs | | Understanding |
| 2 | We should wash our hand before _____. a) Bathing b) Toilet c) Eating food d) Going to play | | Informative |
| 3 | We should cut our nails _____ in a week. a) Once b) Twice c) Thrice d) Never | | Informative |
| 4 | Water carries _____ and _____ to cells. a) Proteins and carbs b) Nutrients and oxygen c) Vitamins and minerals d) None of the above | | Understanding |
| 5 | Water helps in flushing _____ products | | Informative |

| | | | |
|----|---|--|---------------|
| | <ul style="list-style-type: none"> a) Good products b) Necessary products c) Waste products d) All of the above | | |
| 6 | Drinking water can prevent _____. <ul style="list-style-type: none"> a) Dehydration b) Hydration c) Both A and B d) None of the above | | Understanding |
| 7 | True and False (i) Dehydration is the condition that can cause unclear thinking. (ii) Water does not keep our body temperature normal. (iii) Water protects body organs and tissue. (iv) We should not take bath regularly. (v) We should sleep tight. (vi) We should go to toilet without asking our teacher. | | Informative |
| 8 | | | Understanding |
| 9 | | | Informative |
| 10 | | | Understanding |
| 11 | | | Informative |
| 12 | | | Understanding |
| | MCQs | | |
| 13 | Where we should go to do toilet whenever we are out of our house? <ul style="list-style-type: none"> a) Anywhere b) On roads c) Public toilets d) All of the above | | Understanding |
| 14 | Toilets are crucial for _____ development of people. <ul style="list-style-type: none"> a) Healthy b) Unhealthy c) Both A and B d) None of the above | | Informative |
| 15 | How many bacteria stay alive after a toilet is flushed? <ul style="list-style-type: none"> a) 1 million b) 2 million c) 3 million d) 0 | | Understanding |
| 16 | We should floss our teeth ____ times a day. <ul style="list-style-type: none"> a) One b) Two c) Three d) Four | | Understanding |
| 17 | Dehydration result in | | Informative |

| | | | |
|----|---|--|---------------|
| | <ul style="list-style-type: none"> a) Mood change b) Body overheat c) Kidney stone d) All of the above | | |
| 18 | <p>What are the importance of water in body?</p> <ul style="list-style-type: none"> a) Regulates body temperature b) Moistens tissue in the eyes nose and mouth c) Protects body organs and tissues d) All of the above | | Understanding |
| 19 | <p>Constipation lead due to what?</p> <ul style="list-style-type: none"> a) Dehydration b) Lack of nutrients c) Over hydration d) None of the above | | Understanding |
| 20 | <p>How water give less burden on kidneys and liver?</p> <ul style="list-style-type: none"> a) By carrying oxygen to cells. b) By moistens tissue c) By flushing out waste products d) By regulating the body temperature. | | Understanding |



ARMY PUBLIC SCHOOL GWALIOR

CLASS - II

ACADEMIC SESSION 2021-22

WORKSHEET (SELF –ASSESSMENT)



Subject: Discipline

Assignment No. : 11

Allotment Date: 06 February 2022

| S. No | Question | Marks | Nature |
|-------|--|-------|---------------------------|
| 1. | <p>Fill in the blanks-</p> <p>1. Aman went for a _____ride.(cycle/ bicycle)</p> <p>2. He ____ his bicycle in his colony around the park. (rides/ plays)</p> <p>3. I can get ready on my _____. (own/self)</p> <p>4. I can pack ____ bag. (my/mine)</p> <p>5. I can _____ my tiffin in my bag. (keep/keeps)</p> <p>6. I can keep my _____ bottle in my bag.(water/bag)</p> <p>7. I can _____ on my own(read/write)</p> <p>8. I can _____ on my own.(read/write)</p> <p>9. I do my _____ on my own.(HW/CW)</p> <p>10. I _____ in class(answer/question)</p> | 10 | Knowledge & Understanding |

| | | | |
|--|---|---|---------------|
| | | | |
| | <p>Complete the sentence</p> <p>i. Let's learn to be _____.</p> <p>ii. Confidence is believe in _____.</p> | 2 | Observation |
| | <p>Choose all the correct answers-</p> <p>a. How can we take care of our heath?</p> <p>i. By being active- Playing outside home on playground or in park</p> <p>ii. You can ride by cycle to stay fit and healthy</p> <p>b. Choose which is healthy food?</p> <p>i. Home cooked food</p> <p>ii. Maggi, pasta, pizza and burger</p> <p>c. How can we help mom?</p> <p>iii. Eating salads and fruits daily</p> <p>iv. By helping mom in kitchen or small work like watering plants</p> | 3 | Understanding |



ARMY PUBLIC SCHOOL GWALIOR

CLASS - II

ACADEMIC SESSION 2021-22

WORKSHEET (SELF –ASSESSMENT)



Subject: Music (Dance/Instrument)

Assignment No. : 11

Allotment Date: 06 February 2022

| S.NO | QUESTIONS | MARKS | SKILLS/ COMPETENCIES |
|-----------|--|-------|-------------------------|
| A. | Fill in the blanks: | | |
| (a) | We should be _____ in class for better learning. a. Attentive b. Disciplined c. Good | 1 | Informative |
| (b) | _____ dance form is from North India. a. Kathak b. Manipuri c. Odissi | 1 | Informative |
| (c) | _____ inspires a feeling of pride. a. Patriotic song b. Patriotism c. None of the above | 1 | Informative |
| (d) | There are _____ types of rhythm in music a. One b. Two c. Three | 1 | Informative |
| (e) | The first matra in Taal is called _____. a. Sam b. Khali c. Vibhag | 1 | Informative |
| B. | True/False | | |
| (f) | Patriotic songs help us to feel relaxed a. True b. False | 1 | Informative |
| (g) | Natyashastra is the famous book in classical dance? a. True b. False | 1 | Informative |
| (h) | There are 10 types of swar in music a. True | 1 | Informative |

| | | | |
|----------|--|---|-------------|
| | b. False | | |
| (i) | Ustad Amjad Ali Khan is a great Tabla player. a. True b. False | 1 | Informative |
| (j) | The gattes of the tabla are made of plastic. a. True b. False | 1 | Informative |
| C | Multiple choice question: | | |
| (k) | In Kuchipudi female roles were played by? a. Men b. Women c. Children | 1 | Informative |
| (l) | In Odissi dance postures are just like what? a. Temple sculptures b. Simple postures c. None of the above | 1 | Informative |
| (m) | Which dance is a "story play"? a. Kathakali b. Bharatanatyam c. None of the above | 1 | Informative |
| (n) | Which is the national song of India? a. Vande Matram b. Sare jaha c. Kesari | 1 | Informative |
| (o) | What does dance express through people? a. Non- tolerance b. Patriotism c. Right conduct | 1 | Informative |
| (p) | What is speed in music called? a. Swar b. rhythm (Taal) c. Lay | 1 | Informative |
| (q) | Dadra taal is played with which singing style? a. Thumari b. Hori c. Gajal | 1 | Informative |
| (r) | Which is the western instrument on which Dadra Taal is played? a. Drums b. flute c. violin | 1 | Informative |
| (s) | How many years old is sattriya dance? a. 500 b. 400 c. 200 | 1 | Informative |
| (t) | From where Mohiniyattam dance originated? a. Kerala b. Kathakali c. Goa | 1 | Informative |



ARMY PUBLIC SCHOOL GWALIOR

CLASS - II

ACADEMIC SESSION 2021-22

WORKSHEET (SELF –ASSESSMENT)



Subject: Library

Assignment No. : 11

Allotment Date: 06 February 2022

| S.NO | QUESTIONS | MARKS | NATURE |
|------|--|-------|---------------|
| | Answer the following questions on the basis of the story given in the notes. FILL IN THE BLANKS | | |
| 1 | There was a bignear the ashram. | 01 | Understanding |
| 2 | Aruni was sent to the field . | 01 | Understanding |
| 3 | Aruni tried to The breach with mud. | 01 | Understanding |
| 4 | PUT A TICK MARK AGAINST THE CORRECT STATEMENTS : We should not remove bulbs from railway coaches() | 01 | Analysis |
| 5 | Railway property is our property. () | 01 | Analysis |
| 6 | Where does the oxygen come from ? | 01 | Analysis |
| 7 | What do the trees and plants give us ? | 01 | Understanding |
| 8 | Are trees and plants our very good friends ? | 01 | Understanding |
| 9 | Why is cleanliness very important ? | 01 | Understanding |
| 10 | What do the flies carry with them? | 01 | Understanding |