

**ARMY PUBLIC SCHOOL GWALIOR**  
**CLASS - I**  
**ACADEMIC SESSION 2021-22**  
**WORKSHEET (SELF –ASSESSMENT)**



**Subject: English**

**Assignment No. : 11**

**Allotment Date: 06 February 2022**

S.N	QUESTIONS	MARKS	NATURE														
1	<p>Circle the describing words in these sentences:-</p> <p>(i) This room is large.</p> <p>(ii) I am hungry.</p> <p>(iii) This cake is Yummy.</p> <p>(iv) This towel is wet.</p>	4x.5=2	Information														
2	<p>Match the opposite pairs:</p> <table style="width: 100%; border: none;"><tr><td style="width: 50%; vertical-align: top;">Column A</td><td style="width: 50%; vertical-align: top;">Column B</td></tr><tr><td>1. Weak</td><td>Down</td></tr><tr><td>2. Day</td><td>Sad</td></tr><tr><td>3. Happy</td><td>Strong</td></tr><tr><td>4. Rich</td><td>Bad</td></tr><tr><td>5. Up</td><td>Night</td></tr><tr><td>6. Good</td><td>Poor</td></tr></table>	Column A	Column B	1. Weak	Down	2. Day	Sad	3. Happy	Strong	4. Rich	Bad	5. Up	Night	6. Good	Poor	6X.5=3	Understanding
Column A	Column B																
1. Weak	Down																
2. Day	Sad																
3. Happy	Strong																
4. Rich	Bad																
5. Up	Night																
6. Good	Poor																
3	<p>Fill in the blanks and choose the correct Past Tense from the brackets.</p> <p>1. Sonam ..... (asked / ask) the teacher to explain addition again.</p> <p>2. My mother ..... (laugh / laughed) at my brother's joke.</p> <p>3. She ..... (complete / completed) her work on time.</p> <p>4. They ..... (look / looked) at the tall tree.</p>	5x.5=2.5	Interdisciplinary														

	5. Our class .....(enjoy/ enjoyed) a lot in the amusement park.		
4	Write word meaning. (i) Fondly : (ii) Hope : (iii) Riverbank : (iv) Founded : (v) Entertain :		Analytical Skill
5	Complete these sentences using 'and' or 'but'. 1. I like cakes ..... ice creams. 2. My grandma is old ..... healthy. 3. I like to swim ..... my friends like to skate. 4. Nida ..... I play on the swings. 5. 5 vowels ..... 21 consonants together make 26 letters of English Alphabet.	5x1=5	Critical Thinking and Problem Solving
6	Answer the following questions : Q1. Why did Pandit Nehru start wearing a rose on his jacket? _____ Q2. Who has caught the turtle? _____ Q3. What did Pandit Nehru love to do? _____	3X1=3	Evaluation

7	<p><b>Choose the correct option:</b></p> <p>(i) The clever _____ saves his friend.</p> <ul style="list-style-type: none"><li>• Turtle</li><li>• Jackal</li><li>• Lingo</li></ul> <p>(ii) A child had pinned a _____ on his jacket.</p> <ul style="list-style-type: none"><li>• Rose</li><li>• Flag</li><li>• Napkin</li></ul> <p>(iii) 14th November is celebrated as</p> <ul style="list-style-type: none"><li>• Parent's Day</li><li>• Children's Day</li><li>• Baby's Day</li></ul> <p>(iv) Friends are there to _____.</p> <ul style="list-style-type: none"><li>• Help and care</li><li>• Take and run away</li><li>• tease</li></ul>	4X.5=2	Communication Skills
---	--	--------	----------------------







**ARMY PUBLIC SCHOOL GWALIOR**  
**CLASS - I**  
**ACADEMIC SESSION 2021-22**  
**WORKSHEET (SELF –ASSESSMENT)**



**Subject: Hindi**

**Assignment No. : 11**

**Allotment Date: 06 February 2022**

संख्या	प्रश्न / उत्तर	अंक	प्रकृति
प्र.1	निम्नलिखित शब्दों के अर्थ लिखो   संभावना - चहचहाना - मृग - आश्रम - झटपट -	5x1=5	बोधार्थक
प्र 2	निम्नलिखित संख्याओं को गिनती से मिलाओ   ५ पंद्रह ८ तेरह १३ पाँच १५ आठ	4x0.5=2	गहन सोच
प्र-3	नीचे दिए गए चित्रों के नाम लिखो      	4x0.5=2	समस्या समाधान
प्र-4	नीचे दिए गए चित्रों में होने वाली क्रिया को पहचानकर क्रिया लिखिए	2x1=2	उच्चस्तरीय चिंतन



shutterstock.com - 1050642956



shutterstock.com - 121835962

\_\_\_\_\_

\_\_\_\_\_

प्र-5

नीचे दिए गए प्रश्नों के उत्तर लिखो ।

प्र ० 1. ज्ञान और अक्षय जंगल में क्यों गए ?

उ.

प्र ० 2. जंगल से आश्रम लौटते समय ज्ञान और अक्षय के साथ क्या हुआ ?

उ.

प्र ० 3. मँगरू ने ऊँट वाले की क्या मदद की ?

उ.

प्र ० 4. बबलू और गिल्लू अच्छे दोस्त कैसे बने ?

उ.

4x1=4

विश्लेषणात्मक

प्र-6




दिए गए चित्र का वर्णन करो (पाँच वाक्य लिखो)

-----  
-----

5x1=5

भाषाई कौशल

	<hr/> <hr/> <hr/>		
--	-------------------	--	--






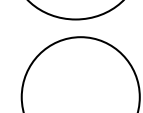


**ARMY PUBLIC SCHOOL GWALIOR**  
**CLASS - I**  
**ACADEMIC SESSION 2021-22**  
**WORKSHEET (SELF –ASSESSMENT)**


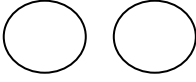
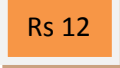
Subject: Mathematics

Assignment No. : 11

Allotment Date: 06 February 2022

S.NO	QUESTIONS	MARKS	NATURE
1)	Fill in the missing numbers :- 1) $5 + 5 = \underline{\quad} \times 5 = 10$ 2) $7 \times 3 = \underline{\quad} \times 7$ 3) $\underline{\quad} \times 2 = 12$	3×1=3	UnderstSanding
2)	Answer the following question :- 1) How many days are there in a week ?  _____	4×1=4	Interdisciplinary
	2) Which day comes between Wednesday and Friday?  _____		
	3) Which days are known as weekend days?  _____		
	4) What is the time between sunset and sunrise known as ?  _____		
3)	Which of the followings events take longer time :- 1) To drink a glass of milk / eat dinner . 2) To wash hands / take a bath.	2×1=2	Information
4)	Find the total cost of the items :-  1)  rs 3  rs 5 =  2)  rs 20  rs 15 = 	2×1=2	Critical thinking and problem solving
5)	<b>Word problems :-</b> 1) A car has 4 wheels. How many wheels 6 cars have? _____ 2) A week has 7 days. How many days 4 weeks have ? _____	2×1=2	Evaluation
6)	<b>Which two coins are needed to buy each of the</b>	2×1=2	Analytical skills


following items :-

1)    


2)    


7)

Look at the picture and answer the following question:-



- 1) How many carrots are there? \_\_\_\_\_
- 2) How many tomatoes are there? \_\_\_\_\_
- 3) Name the vegetable occurs the most? \_\_\_\_\_
- 4) Name the vegetable occurs the least? \_\_\_\_\_
- 5) How many total vegetables are there in the picture? \_\_\_\_\_

5×1=5

Communication skills







**ARMY PUBLIC SCHOOL GWALIOR**  
**CLASS - I**  
**ACADEMIC SESSION 2021-22**  
**WORKSHEET (SELF –ASSESSMENT)**



Subject: EVS

Assignment No. : 11

Allotment Date: 06 February 2022

S.N	QUESTIONS	MARKS	SKILLS/COMPETENCIES
1.	<p><b>Tick ( ✓ ) the correct options :</b></p> <p>1. Banana is a _____.</p> <p>a. fruit    b. stem    c. branch</p> <p>2. Tortoise is a _____.</p> <p>a. Toad    b. Tortoise    c. Earthworm</p> <p>3. The biggest water body is _____</p> <p>a. river    b. lake    c. ocean</p> <p>4. _____ cause rain</p> <p>a. Day    b. Clouds    c. Night</p>	4X1=4	Information
2	<p><b>A. Put a tick against the right statement and cross against the wrong statement:</b></p> <p>1. Land covers most part of the earth. _____</p> <p>2. Plants and animals need air to breathe. _____</p>	2X1=2	HOTS Analytical Skill
3.	<p><b>Match the following:</b></p> <p>1. Air bubbles </p> <p>2 Siling </p> <p>3. Rabbit <span style="margin-left: 200px;">Fingerling</span></p>	4X1=4	Understanding

	4. Fish Bunny		
4	<p><b>Answer the following :</b></p> <p>Q 1. Write two uses of air.</p> <p>Ans-----</p> <p>_____.</p> <p>Q.2 Name the animals from whom we get milk?</p> <p>Ans-----</p> <p>_____.</p> <p>Q.3 What is the name given to the Indian flag?Why?</p> <p>_____.</p> <p>_____.</p>	3x2=6	Communication Skills
5	<p><b>Fill in the blanks:-</b></p> <p>1. We keep water in a freezer to make it into _____.</p> <p>2. We are known as _____.</p> <p>3. _____ is a special sweet made during Holi.</p> <p>4. A school student wears _____.</p>	4X1=4	Evaluation



**ARMY PUBLIC SCHOOL GWALIOR**  
**CLASS - I**  
**ACADEMIC SESSION 2021-22**  
**WORKSHEET (SELF –ASSESSMENT)**




Subject: Computer

Assignment No. : 11

Allotment Date: 06 February 2022

S.NO	QUESTIONS	MARKS	SKILLS/COMPETENCIES
1	<p><b>A. <u>Tick the correct answer.</u></b></p> <p>1. _____ program is used to draw and colour objects.</p> <p>A. MS-Paint B. Notepad C. Calculator</p> <p>2. A mouse is a _____ device.</p> <p>A. Holding B. Pointing C. Typing</p> <p>3. _____ contains all the tools for drawing.</p> <p>A. Canvas B. Color Box C. Toolbox</p> <p>4. The small arrow that moves on the screen is called.</p> <p>A. Shape B. Picture C. Pointer</p> <p>5. _____ contains all the tools for drawing.</p> <p>A. Canvas B. Color Box C. Toolbox</p>	5x0.5=2.5	Information
2	<p><b><u>Write 'T' for TRUE and 'F' for FALSE statements</u></b></p> <p>1. You can draw pictures using a mouse. _____</p> <p>2. We keep index finger on the left button. _____</p> <p>3. Eraser tool is used to fill colour in the object.</p>	5x0.5=2.5	Understanding

	<p>_____</p> <p>4. Line tool is used to draw straight lines. _____</p> <p>5. Pressing and releasing the right mouse button is called double-click. _____</p>		
<b>3</b>	<p><b><u>Fill in the blanks.</u></b></p> <p>1. _____ is present on the top of Paint screen.</p> <p>2. _____ program is used to make drawings.</p> <p>3. _____ is used to make straight and slanting line.</p> <p>4. _____ is used to draw wavy lines.</p> <p>5. _____ is used to make circles and ovals.</p>	<b>5x1=5</b>	Analytical Skill








**ARMY PUBLIC SCHOOL GWALIOR**  
**CLASS - I**  
**ACADEMIC SESSION 2021-22**  
**WORKSHEET (SELF –ASSESSMENT)**



Subject: G.K

Assignment No. : 11

Allotment Date: 06 February 2022

S.NO	QUESTIONS	MARKS	NATURE
1.	<p><b>Answer the following :-</b></p> <p>4) Who is known as the father of nation in INDIA? _____</p> <p>5) How many spokes does the wheel on the Indian flag have? _____</p> <p>6) Which appliance helps in keeping food and drinks cold? _____</p> <p>7) In the film, The Angry Birds, which animals do the birds want to defeat? _____</p> <p>8) In which month do we celebrate New Year's Day? _____</p>	5×1=5	Information
2)	<p><b>Identify the pictures and write their names.</b></p> <p>5)  -----</p> <p>6)  -----</p> <p>7)  -----</p> <p>8)  -----</p> <p>9)  -----</p>	5×1=5	Understanding
3)	<p><b>Read the clues to complete the words</b></p> <p>1) This is the famous dish of Gujrat. D__K__A</p> <p>2) This machine provides hot water . __EY__R</p> <p>3) Mary kom is the player of this sport. B__I__G</p> <p>4) This is the largest country in the world.</p>	5×1=5	Interdisciplinary

R\_S\_\_A  
5) This state is famous for Idli Sambar .  
T\_MI\_N\_\_U

4)

Match the flag with their countries.

5×1=5

HOT



a) United States



b) Singapore




c) United Kingdom



d) Japan



e) UAE



**ARMY PUBLIC SCHOOL GWALIOR**  
**CLASS - I**  
**ACADEMIC SESSION 2021-22**  
**WORKSHEET (SELF –ASSESSMENT)**



**Subject: Health and Physical Education**  
**Allotment Date: 06 February 2022**

**Assignment No. : 11**

S.NO	QUESTIONS	MARKS	NATURE
	<b>Fill in the Blanks</b>	6x0.5=3	
1.	The toilet flushes the wastes _____ the sewer pipe. a) Up b) Down c) Left d) Right		Understanding
2.	We should keep toilet seats _____. a) Clean b) Dirty c) Both A and B d) None of the above		Informative
3.	The sewer pipe from the house also _____ the other waste.. a) Remove b) Collect c) Both A and B d) None of the above		Understanding
4.	Water helps in maintaining of body _____. a) Power b) Temperature c) Both A and B d) None of the above.	6x0.5=3	Informative
5.	Water also helps to excrete _____ out of body. a) Nutrients b) Fats c) Waste d) Proteins.	8x0.5=4	Understanding
6.	Water also maximizes _____ performance. a) Physical b) Mental c) Both A and B d) None of the above.		Understanding
	<b>True and False</b>		
7.	Saliva created with the help of water.		Informative
8.	Water lubricates joints.		
9.	We need more water in hot climate.		
10.	Flush toilets use water.		
11.	We should not keep the floor dry.		Informative

12.	We should dry our hands before stepping out. <b>MCQs</b>		
13.	Water protects ours. a) Kidneys b) Rids c) Spinal Cord d) Liver.		Informative
14.	When our body need more water? a) More physically active b) Running a fever c) Having diarrheal or vomiting d) All of the above.		Informative
15.	Water keeps our body on _____ temperature. a) High b) Normal c) Low d) None of the above.		informative
16.	We get rid of waste through Which process? a) Urination b) Perspiration c) Bowel d) All of the above		
17.	How can you keep yourself clean a) Keep toilet seats clean b) Keep floor dry c) Washing hands with soap d) All of the above		
18.	What type of waste toilet collect? a) Human urine b) Feces c) Toilet paper d) All of the above		
19.	What waste known as sewer? a) Soapy water b) Water left on dishes and clothes c) Both A and B d) None of the above		
20.	What are the things include in post defecation? a) Rinsing anus with water b) Rinsing inner buttocks with water c) Both A and B d) None of the above		





**ARMY PUBLIC SCHOOL GWALIOR**  
**CLASS - I**  
**ACADEMIC SESSION 2021-22**  
**WORKSHEET (SELF –ASSESSMENT)**



**Subject: Discipline**

**Assignment No. : 11**

**Allotment Date: 06 February 2022**

S.No	Question	Marks	Nature
1.	<p><b>Fill in the blanks-</b></p> <ol style="list-style-type: none"><li>1. Aman went for a _____ride.( cycle/ bicycle )</li><li>2. He ____ his bicycle in his colony around the park. (rides/ plays)</li><li>3. I can get ready on my _____. (own/self)</li><li>4. I can pack ____ bag. (my/mine)</li><li>5. I can _____ my tiffin in my bag. (keep/keeps)</li><li>6. I can keep my _____ bottle in my bag.(water/bag)</li><li>7. I can _____ on my own(read/write)</li><li>8. I can _____ on my own.(read/write)</li><li>9. I do my _____ on my own.(HW/CW)</li><li>10. I _____ in class(answer/question)</li></ol>	10	Knowledge & Understanding
	<p><b>Complete the sentence</b></p> <ol style="list-style-type: none"><li>i. Let's learn to be _____.</li><li>ii. Confidence is believe in _____.</li></ol>		
	<p><b>Choose all the correct answers-</b></p> <ol style="list-style-type: none"><li>a. How can we take care of our heath?<ol style="list-style-type: none"><li>i. By being active- Playing outside home on playground or in park</li><li>ii. You can ride by cycle to stay fit and</li></ol></li></ol>		

healthy

b. Choose which is healthy food?

- i. Home cooked food
- ii. maggi, pasta, pizza and burger

c. How can we help mom?

- iii. Eating salads and fruits daily
- iv. By helping mom in kitchen or small work like watering plants




**ARMY PUBLIC SCHOOL GWALIOR**  
**CLASS - I**  
**ACADEMIC SESSION 2021-22**  
**WORKSHEET (SELF –ASSESSMENT)**

**Subject: Music (Dance and Instrument)**  
**Allotment Date: 06 February 2022**

**Assignment No. : 11**

S.NO	QUESTIONS	MARKS	SKILLS/ COMPETENCIES
<b>A.</b>	<b>Fill in the blanks:</b>		
A.	There are ___ type of Navarasa. a. 9 b. 6 c. 7	1	Informative
B.	Birju Maharaj has his own school of _____. a. Painting b. Dancing c. Singing	1	Informative
C.	We perform patriotic dance on _____. a. 15th august b. 14th November c. 25th December	1	Informative
D.	Tabla has ___ parts. a. 1 b. 2 C. 3	1	Informative
E.	Dadra Tal has ___matra . a. 6 b. 7 c. 8	1	Informative
<b>B.</b>	<b>True/False</b>		
1.	Nataraja is known as God of dance. a. True b. False	1	Informative
2.	Sonal mansingh is an Odissi dancer? a. True b. False	1	Informative
3.	Ustad Zakir Hussain is a famous Tabla player. a. True b. False	1	Informative
4.	Every Tabla student learns Teen taal. a. True b. False	1	Informative
5.	Does Ustad Zakir Hussain play Sitar? a. True b. False	1	Informative
<b>C.</b>	<b>Multiple Choice Question:</b>		
1.	What does emotion in dance mean? a. Rasa b. Shabdham	1	Informative

	c. None of the above		
2.	Getting ready rasa is? a. Shringar b. Veera c. None of the above	1	Informative
3.	Who is the famous dancer of kathak? a. Pandit Birju Maharaj b. Sonal Mansingh c. None of the above	1	Informative
4.	Who is known as the father of Manipuri dance? a. Guru Bipin Singh b. Pandit Birju Maharaj c. Rukmini devi	1	Informative
5.	Whose story patriotic dance shows? a. Nation b. World c. None of the above	1	Informative
6.	What is important for patriotic dance? a. Patriotic song b. Patriotic speech c. None of the above	1	Informative
7.	What is peace rasa known as? a. Raudra b. Shanta c. Veera	1	Informative
8.	Without Navarasa classical dance is what? a. Complete b. Incomplete c. Important	1	Informative
9.	Mallika Sarabhai is a famous dancer of which dance? a. Bharatanatyam b. Kathak c. Odissi	1	Informative
10.	Patriotic dance encourages you to do what? Something good Something better None of the above	1	Informative



**ARMY PUBLIC SCHOOL GWALIOR**  
**CLASS - I**  
**ACADEMIC SESSION 2021-22**  
**WORKSHEET (SELF –ASSESSMENT)**



Subject: Library

Assignment No. : 11

Allotment Date: 06 February 2022

S.NO	QUESTIONS	MARKS	NATURE
	<b>Answer the following questions on the basis of the story given in the notes.</b> <b>FILL IN THE BLANKS</b>		
1	There was a big .....near the ashram.	01	Understanding
2	Aruni was sent to ..... the field .	01	Understanding
3	Aruni tried to ..... The breach with mud.	01	Understanding
4	<b>PUT A TICK MARK AGAINST THE CORRECT STATEMENTS :</b> We should not remove bulbs from railway coaches( )	01	Analysis
5	Railway property is our property. ( )	01	Analysis
6	Where does the oxygen come from ?	01	Analysis
7	What do the trees and plants give us ?	01	Understanding
8	Are trees and plants our very good friends ?	01	Understanding
9	Why is cleanliness very important ?	01	Understanding
10	What do the flies carry with them ?	01	Understanding