

ARMY PUBLIC SCHOOL GWALIOR
CLASS - VI
ACADEMIC SESSION 2021-22
WORKSHEET (SELF –ASSESSMENT)

Subject: English

Assignment No. : 10

Allotment Date: 15 January 2022

S. NO.	QUESTIONS	MARKS	NATURE
1	Why did the speaker find the old banyan tree exclusively his own? <hr/>	2	Information
2	Find words in the story, which show things striking violently against each other. 1. The cobra struck the crow, his snout ----- ----- against his body. 2. The birds dived at the snake, but ----- into each other instead.	2	Understanding
3	Bring out the relevance / significance of the banyan tree in the title of Ruskin Bond's story?	2	Interdisciplinary

4	<p>Pick the correct phrasal verbs and fill in the blanks to complete the sentences</p> <p>1. Sumedha ----- (called on/ called up) her friend to give her home-made cookies.</p> <p>2. He wanted to ----- (stay in /stay away) from the noisy crowd in the park.</p> <p>3. Nasreen likes to ----- (show around/ show off) her precious jewellery.</p> <p>4 Aditi ----- (blew out/ blew up) the candles before she cut the cake while the guests clapped.</p>	2	Analytical Skill
5	<p>Is it right to conquer a match through cheating?</p> <p>Explain it with reference to the story , A strange wrestling match’.</p>	2	Critical Thinking and Problem Solving
6	<p>“Had they been contented only to watch, all would have been well with both of them”. What does the author mean by this?</p>	3	HOT
7	<p>Answer the following questions briefly.</p> <p>i) Who really helped Vijay Singh in defeating the ghost? How?</p> <p>ii) What trick did the mongoose apply to overpower and kill the cobra?</p>	4	Evaluation

8	Give a character sketch of Vijay Singh. How did he outwit the ghost?	3	Communication Skills
---	---	---	-------------------------



ARMY PUBLIC SCHOOL GWALIOR

CLASS - VI

ACADEMIC SESSION 2021-22

WORKSHEET (SELF -ASSESSMENT)


Subject: Hindi

Assignment No. : 10

Allotment Date: 15 January 2022

क्रम संख्या	प्रश्न	अंक	प्रकृति
1-	बाँस को बूढ़ा कब कहा जा सकता है? बूढ़े बाँस में कौन सी विशेषता होती है, जो युवा बाँस में पाई जाती है?	5	INFORMATIVE
2-	‘नौकरों को हमें वेतनभोगी मजदूर नहीं अपने भाई के समान मानना चाहिए। इसमें कुछ कठिनाई हो सकती है, फिर भी हमारी कोशिश सर्वथा निष्फल नहीं जाएगी।’ गांधी जी ऐसा क्यों कहते होंगे? तर्क के साथ समझाओ।	1x4=4	UNDERSTANDING
3-	निम्नलिखित लोकोक्तियां को शुद्ध करके लिखिए- 1. तरबूज को देखकर तरबूज रंग बदलता है। 2. सिपाही की दाढ़ी में तिनका। 3. आ गाय मुझे मार। 4. एक सेव सौ बीमार। 5. घोड़ा निकल गया पूँछ रह गई।	1x5=5	HOT

4-	<p>उचित विराम चिन्हों का प्रयोग कीजिए-</p> <ol style="list-style-type: none"> 1. पंडित नेहरू देश के प्रधानमंत्री थे 2. सीता गीता और सुनीता बहने हैं 3. वाह क्या टीवी है 4. माता पिता की आज्ञा का पालन करना चाहिए 5. शास्त्री जी ने कहा - जय जवान जय किसान 	5	INTERDISCIPLINARY
5-	<p>गांधीजी अपने साथियों की जरूरत के मुताबिक हर काम कर देते थे, लेकिन उनका खुद का काम कोई और करें यह उन्हें पसंद नहीं था। क्यों? सोचो और अपने विचार लिखो।</p>	5	CRITICAL THINKING AND PROBLEM SOLVING
6	<p>निम्नलिखित प्रश्नों के उत्तर दीजिए।</p> <ol style="list-style-type: none"> 1. लंदन में भोज पर बुलाए जाने पर गांधी जी ने क्या किया? 2. राम ने थकी हुई सीता की क्या सहायता की? 3. बांस की बुनाई मानव के इतिहास में कब आरंभ हुई होगी? 	3x2=6	EVALUATION



ARMY PUBLIC SCHOOL GWALIOR

CLASS - VI

ACADEMIC SESSION 2021-22

WORKSHEET (SELF -ASSESSMENT)


Subject: Mathematics

Assignment No. : 10

Allotment Date: 15 January 2022

S. NO.	QUESTIONS	MARKS	NATURE
1	Six less than a number equals to two. What is the number?	1	Informative
2	The rule, which gives the number of matchsticks required to make the matchstick pattern L, is _____	1	Problem solving
3	If Meenu's present age is x years, what was her age in years, 10 years back?	1	Understanding
4	The salary of Hari Kishan is two times the salary of Manish (which in Rs. x), then the salary of Hari Kishan, in rupees, is	1	Evaluation
5	Which of the following is an equation in a variable? (a) $2 < 10$ (b) $3 > 12$ (c) $x - 1 = 0$ (d) $2 + 3 = 3 + 2$.	1	Understanding
6	The side of a regular hexagon is s cm. Find its perimeter.	1	Informative
7	Which of the following is not an expression with numbers only? (a) $2 \times (3 + 4)$ (b) $(2 + 3) \times 4$ (c) $2 \times 3 + 4 \times 5$ (d) $2x + 1$	1	Analytical skills and problem solving
8	If the side of an equilateral triangle is x, find its perimeter.	1	Informative
9	The expression for 'p multiplied by - 2' is	1	Informative

10	Write an algebraic expression for each of the following: (a) 3 subtracted from a number y . (b) 5 is added to three times a number x	2	Understanding & problem solving																						
11	Write an algebraic expression for the following expressions: (a) The sum of a number x and 4 is doubled. (b) One fourth of a number x is added to one third of the same number.	2	Problem solving																						
12	Complete the table and find the solution of the equation $19 - x = 13$	2	Problem solving																						
	<table border="1" style="margin-left: auto; margin-right: auto;"> <tbody> <tr> <td>x</td> <td>2</td> <td>3</td> <td>4</td> <td>5</td> <td>6</td> <td>7</td> <td>8</td> <td>9</td> <td>10</td> <td>----</td> </tr> <tr> <td>$19 - x$</td> <td></td> <td></td> <td></td> <td></td> <td></td> <td></td> <td></td> <td></td> <td></td> <td></td> </tr> </tbody> </table>	x	2	3	4	5	6	7	8	9	10	----	$19 - x$												
x	2	3	4	5	6	7	8	9	10	----															
$19 - x$																									
13	If Apala's present age is x years, what will be her age in years after 20 years from now?	2	Evaluation																						
14	The expression for ' x is divided by -2 and the result is added to 1 ' is	2	Evaluation																						
15	If $x = 3$, find the value of the following: (i) $x + 5$ (ii) $2x - 3$ (iii) $x - 7$	2	Understanding & problem solving																						
16	If $x = 2$, $y = 3$ and $z = 5$, find the value of; (a) $2x + y + z$ (b) $4x - y + z$ (c) $x - y + z$	3	Problem solving																						
17	State which of the following are equations with a variable? (a) $12 = x - 5$ (b) $2x > 7$ (c) $2x = 5$ (d) $5 + 7 = 3 + 9$	3	Critical Thinking & Problem solving																						
18	Think of a number, add 2 to it and then multiply the sum by 6, the result is 42.	3	problem solving																						



ARMY PUBLIC SCHOOL GWALIOR

CLASS - VI

ACADEMIC SESSION 2021-22

WORKSHEET (SELF -ASSESSMENT)


Subject: Science

Assignment No. : 10

Allotment Date: 15 January 2022

S. NO.	QUESTIONS	MARKS	NATURE
Q1	Answer the following questions. i. What is vermicomposting? ii. Name two processes responsible for making of clouds.	1x2=2	Information
Q2	a. Why air is called a mixture of gases? b. How do you observe three forms of water in (a) nature (b) at home ?	2X2=4	Understanding
Q3	i. Each tree can make its own manure. How? ii. What will happen if percentage of oxygen in air reaches 70%?	2x2=4	HOT

Q4	<p>a. How does water kept under the shade of a tree also gets evaporated?</p> <p>b. Do you think it is better to use compost instead of chemical fertilizers? Why?</p> <p>c. Why is air dissolved in water richer in oxygen than ordinary air?</p>	2x3=6	Interdisciplinary
Q5	<p>i. What are the consequences of large and prolonged rain? What are the major losses due to it?</p>	3x3=9	Analytical Skill
	<p>ii. What are the harmful effects of plastics? How we can minimize plastic wastes?</p>		Critical Thinking and Problem Solving
	<p>iii. How nature maintains a balance of carbon dioxide and oxygen in the atmosphere ?</p>		Evaluation
Q6	<p>What is meant by conservation of water? Suggest few methods to conserve water</p>	5x1=5	Communication Skills



ARMY PUBLIC SCHOOL GWALIOR

CLASS - VI

ACADEMIC SESSION 2021-22

WORKSHEET (SELF -ASSESSMENT)

Subject: Social Science

Assignment No. : 10

Allotment Date: 15 January 2022

S.NO.	QUESTIONS	MARKS	NATURE
1.	Who was Harshavardhana?	1	Understanding
2.	Kumara Devi, the mother of Samudra gupta belonged to the _____ gana.	1	Information
3.	The _____ at Aihole was built about 1400 years ago.	1	Information
4.	_____ developed a scientific explanation for eclipses.	1	Information
5.	How much land does Sekar own?	1	Understanding
6.	The people of Pudupet village earn their living by _____.	1	Information
7.	Define 'labour chowk'.	1	Understanding

8.	It is the _____ that decides on which day of the week the market has to remain closed.	1	Information
9.	What was the difference between the way in which Samudragupta treated the rulers of Aryavarta and Dakshinapatha?	3	Critical Thinking
10.	Have you heard of tsunami? What is this and what damage do you think it might have done to the life of fishing families like Aruna's?	3	HOTS
11.	How do hawkers manage their work?	3	Critical Thinking
12.	Write a short note on the lives of fishing families.	5	Understanding
13.	Who were the Pallavas and Chalukyas? Describe them in detail.	5	Understanding
14.	On an outline political map of India locate and mark the following:- (a) Ujjain (b) Aihole (c) Mathura	3	Identification and location.



ARMY PUBLIC SCHOOL GWALIOR
CLASS - VI
ACADEMIC SESSION 2021-22
WORKSHEET (SELF -ASSESSMENT)

Subject: Sanskrit


Assignment No. : 10

Allotment Date: 15 January 2022

S. No.	QUESTIONS	MARKS	NATURE
1	<p>निम्नलिखित हिन्दी शब्दों का संस्कृत अर्थ लिखें -</p> <p>क) चावल -----।</p> <p>ख) लड्डू -----।</p> <p>ग) नारियल -----।</p> <p>घ) शरीर -----।</p> <p>ङ) दामाद -----।</p>	5	Understanding
2	<p>निम्नलिखित हिंदी वाक्यों को संस्कृत वाक्यों में प्रयोग कीजिए -</p> <p>क) आपका क्या नाम है?-</p> <p>ख) कहां से आ रहे हैं ? -</p> <p>ग) जैसा आप चाहते हैं ।-</p> <p>घ) यहां बहुत भीड़ है । -</p>	5	Thinking Skill

	ड) बस नहीं मिली। -		
3	<p>निम्नलिखित प्रश्नों के उत्तर दें। -</p> <p>क) (त) का उच्चारण स्थान है। -</p> <p>ख) जिनका रूप सदा अपरिवर्तित रहता है, उन्हें कहते हैं -</p> <p>ग) रामानुजः का सन्धि विच्छेद करें -</p> <p>घ) 'अत्र' का अर्थ है -</p> <p>ड) 'मुनिनाम्' में विभक्ति है -</p>	5	Memory Skill
4	<p>श्लोकांशान् योजयत -</p> <p>क) मातुल ! किरसि सितपरिधानम् ।</p> <p>ख) तारक खचितम् श्रावय गीतिम् ।</p> <p>ग) त्वरितमेहि मां चन्द्रिकावितानम् ।</p> <p>घ) अतिशयविस्तृत कथन न स्नेहं ।</p> <p>ड) धवलं तव नीलाकाशः ।</p>	5	Analytical Skill
5	<p>मंजूषातः उचितम् अव्ययपदं चित्वा रिक्तस्थानानि पूरयत् -</p> <p>[इव, कपि, एव, च, उच्चैः]</p>	5	Critical Thinking

	<p>क) बालिका: बालिका:क्रीडाक्षेत्रे क्रीडन्ति ।</p> <p>ख) मेघा गर्जन्ति ।</p> <p>ग) बकःहंसः श्वेतः भवति ।</p> <p>घ) सत्यम् जयते ।</p> <p>ङ) अहं पठामि , त्वम् पठ ।</p>		
6	<p>प्रश्नानाम उत्तराणि लिखत -</p> <p>क) अजीजः गृहम् गन्तुम् किं वाञ्छति ?</p> <p>ख) स्वामी मूर्खः आसीत् चतुरः वा ?</p> <p>ग) अन्या मक्षिका कुत्र दंशति ?</p> <p>घ) मातुलचन्द्रः किं न किरति ?</p> <p>ङ) अस्मिन् पाठे कः माथुरः?</p>	5	Information



ARMY PUBLIC SCHOOL GWALIOR

CLASS - VI

ACADEMIC SESSION 2021-22

WORKSHEET (SELF -ASSESSMENT)

Subject: Computer

Assignment No. : 10

Allotment Date: 15 January 2022

S.NO.	QUESTIONS	MARKS-10	NATURE
1	Choose and write the correct option (MCQ):-	1/2x5=2.5	Information
a)	The most popular service of internet is i. Browsing ii. Surfing iii. E-mail		
b)	First email application was developed by i. Charles Babbage ii. Sabeer Bhatia iii. Ray Tomlinson		
c)	Domain name is separated into two parts by a i. Comma (,) ii. Colon (:) iii. Period (.)		
d)	@ symbol used in an email address is pronounced as i. All ii. As iii. At		

e)	The small chunks of email message which are broken by the internet are called i. Packets ii. Pouches iii. Boxes		
2	Fill in the blanks- a. E-mail is the most popular service of _____ b. An _____ is a unique address of each user. c. In the e-mail address, user name and domain name is separated by_____ d. You get an e-mail when you create an _____ e. Smileys are also called _____	1/2 x 5=2.5	Understanding
3	Answer the following questions:- a. What is an e-mail ? Give some advantages of an e-mail. b. Define E-mail account c. Name the different programs that are used to create and manage an e-mail.	2 2 1	Evaluation



ARMY PUBLIC SCHOOL GWALIOR

CLASS - VI


ACADEMIC SESSION 2021-22

WORKSHEET (SELF –ASSESSMENT)

Subject: G.K

Assignment No. : 10

Allotment Date: 15 January 2022

S. NO.	QUESTIONS	MARKS	NATURE
1.	Fill in the blanks: (a) Theis the oldest desert. (b)means you mostly feel good about yourself . (c) Instead of saying I can't do maths, we should say.....	3	Understanding
2.	State True or False: (a) The largest school in terms of pupil is the City Montessori School in Lucknow. () (b) The largest comic book published is called Turma Da Monica . () (c) Ayurvedic healers helps to develop fragrances. ()	3	Information
3.	Tick the correct answer: (a) Identify the type of business shown in the picture.  (i) Breakfast joint (ii) Bakery (iii) Photography (b) Who treats the injuries of animals?	2	Information

	(i) Fen Shui Consultant (ii) Veterinary Acupuncturist (iii) Food Chemist		
4.	Write any one slogan which make you feel good about yourself.	1	Critical thinking
5.	What is the job of Fragrance Chemist ?	1	Interdisciplinary



ARMY PUBLIC SCHOOL GWALIOR



CLASS - VI

ACADEMIC SESSION 2021-22

WORKSHEET (SELF –ASSESSMENT)

Subject: Music (Dance)

Assignment No. : 10

Allotment Date: 15 January 2022

S.NO	QUESTIONS	MARKS	SKILLS/ COMPETENCIES
1	<p>A dance performance and rising _____ emissions might seem to have little to do with one another.</p> <p>(a) Oxygen (b) Nitrogen (c) Carbon dioxide.</p>	1	Integrity
2	<p>What can lay the foundation for a sense of connection with the earth?</p> <p>(a) Movement. (b) Plants (c) Animals</p>	1	Integrity
3	<p>_____ allows us to gain a better understanding surrounding the events, challenges, and celebrations that helped to form the people who developed our art form.</p> <p>(a) Science (b) History. (c) Maths</p>	1	Integrity
4	<p>What is the movement of the body in a rhythmic way, usually to music and within a given space?</p> <p>(a) Dance. (b) Sports</p>	1	Integrity


	(c) Art		
5	<p>Stewart defines environmental dance to be 'an umbrella term for the plethora of dance and somatic practices concerned with the body's relationship to landscape and environment.</p> <p>(a) True. (b) False</p>	1	Integrity
6	<p>_____ Experience body and place in a profoundly different way to non-dancers.</p> <p>(a) Musicians (b) Dancers. (c) Artists</p>	1	Integrity
7	<p>Dancers develop highly attuned, conscious bodies that read, respond and acknowledge the interconnections between body and the natural world.</p> <p>(a) True. (b) False</p>	1	Integrity
8	<p>Which interpersonal nature of dance has the unique ability to transform people's understanding of the world around them?</p> <p>(a) Physical. (b) Psychological (c) None of the above</p>	1	Integrity
9	<p>Dance is not the movement of the body in a rhythmic way, usually to music and within a given space, for the purpose of expressing an idea or emotion, releasing energy.</p> <p>(a) True (b) False.</p>	1	Integrity
10	<p>What is this picture about?</p>	1	Integrity



(a) Kathak

(b) Environment dance.

(c) Hip hop



ARMY PUBLIC SCHOOL GWALIOR

CLASS - VI

ACADEMIC SESSION 2021-22


WORKSHEET (SELF –ASSESSMENT)

Subject: Library

Assignment No. : 10

Allotment Date: 15 January 2022

S.NO	QUESTIONS	MARKS	NATURE
	Answer in a word :		
1	With whom do you live at home ?	01	Analysis
2	Which kind of company should you avoid ?	01	Analysis
3	What is your first duty towards your parents?	01	Understanding
4	Where do you go to study ?	01	Analysis
5	What is your first act in the morning?	01	Analysis
	Answer in one sentence :	01	
6	Why do you respect your parents		Understanding
7	What are the benefits of serving parents ?	01	Analysis
8	What does your father do to earn money?	01	Analysis
9	What care should you take towards your clothes?	01	Understanding
10	Whom do you love most?	01	Analysis



ARMY PUBLIC SCHOOL GWALIOR

CLASS - VI

ACADEMIC SESSION 2021-22


WORKSHEET (SELF –ASSESSMENT)

Subject: Health and Physical Education

Assignment No. : 10

Allotment Date: 15 January 2022

S.NO	QUESTIONS	MARKS	SKILLS/COMPETENCIES
1.	Which exercise is most likely to help you jump higher (A) Body sautés (B) Push – up (C) Curl – ups (D) Long distance running	1	Informatory
2.	What is a foul (A) To push same one (B) To kick or slap same one (C) Trip same one (D) All of the above	1	Analytical
3.	Who invented the game of Basketball (A) Dixie scores (B) Adison KA2 (C) Jamed Naismith (D) Jordon P. Olswald	1	Informatory
4.	In Basketball if you shoot a free throw how many points is it worth ? (A) 3 Points (B) 2 Points (C) 1 Points (D) 4 Points	1	Understanding
5.	One points do you get for a free throw shoot True/False	1	Informatory
6.	The middle of the basketball court is called the side line. True/False	1	Understanding
7.	A Basketball game starts with jump ball. True/False	1	Understanding
8. Player's are on a team ? (4, 5, 6, 8)	1	Informatory
9. quarters are there played in game. (2, 5, 4, 3)	1	Informatory
10.	The team that has possession of the Basketball is on (Defense, foul, offence, holding)	1	Critical thinking



ARMY PUBLIC SCHOOL GWALIOR
CLASS - VI
ACADEMIC SESSION 2021-22
WORKSHEET (SELF –ASSESSMENT)

Subject: Discipline

Assignment No. : 10

Allotment Date: 15 January 2022

S.NO	QUESTIONS	MARKS	SKILLS/ COMPETENCIES
1.	<p>Tick the correct option-</p> <p>a. Confidence is</p> <ul style="list-style-type: none">i. Believe in yourselfii. Self- beliefiii. A skilliv. None of the above <p>b. We can become confident by-</p> <ul style="list-style-type: none">i. Firstly by telling our mind that “I can do it!”ii. When we like some good quality in someone, try to develop similar quality.iii. Don’t doubt your abilities; but strengthen them by taking responsibility’s.iv. All of the above <p>c. Confident people</p> <ul style="list-style-type: none">i. Believe in themselvesii. Learn from othersiii. Keep tryingiv. All of the above	03	Knowing and understanding
2.	<p>Complete the sentence</p> <ul style="list-style-type: none">i. Let’s learn to be _____.ii. Confidence is believe in _____.	03	Knowing and understanding

	iii. Believe in _____.		
3.	Give an example of taking a safe risk- <hr/> <hr/> <hr/>	02	Application and analysis
4.	Give your friends few tips to be confident. <hr/> <hr/> <hr/>	02	Application of knowledge