

ARMY PUBLIC SCHOOL GWALIOR
CLASS - III



ACADEMIC SESSION 2021-22
WORKSHEET (SELF –ASSESSMENT)

Subject: English

Assignment No. : 10

Allotment Date: 15 January 2022

S NO	QUESTIONS	MARKS	NATURE
1.	Underline the 'how' adverbs in these sentences- i. The children shouted loudly. ii. My uncle earns well.	2X1=2	Information
2.	Underline the 'when' adverbs in these sentences – (i) We should sleep early. (ii) I did not go to dance class yesterday. (iii) What's for dinner tonight, Mom?	3X1=3	Understanding
3.	Circle the correct adverbs: (i) Sara is playing happily/ neatly. (ii) Please talk badly/ quietly.	3X1=3	Interdisciplinary

4	Fill in the blanks with suitable adverbs : i) Where are you going ? (now/ yesterday) ii) It is sunny..... (tomorrow/ today) iii) The sky is(above/ below)	3X1=3	Analytical Skill
---	--	-------	------------------

5.	Write down the meanings of the following words: (i) bare - (ii) excellent -	2X1=2	Critical Thinking and Problem Solving
----	---	-------	---------------------------------------

6.	Write the names of the places where the following people work : a) A chef b) A nurse c) A sailor d) A teacher	2X1=2	2X1=2 HOT
----	---	-------	-----------

7	Complete the following blanks using suitable words from the poem ' Daisies ': (i) The poet sees the in the sky before going to bed . (ii) The poet imagines the moon to be a Who is sweet and	2X1=2	Evaluation
---	---	-------	------------

8.	<p>Answer the following questions:</p> <p>(i) What were Garima and Keshav's jobs in the house?</p> <p>.....</p> <p>.....</p> <p>.....</p> <p>.....</p> <p>(ii) What do we learn from the story "Garima Goes to School"?</p> <p>.....</p> <p>.....</p> <p>.....</p> <p>.....</p> <p>(iii) How did school authorities help Garima?</p> <p>.....</p> <p>.....</p> <p>.....</p> <p>.....</p>	3X1=3	Communication
----	--	-------	---------------



ARMY PUBLIC SCHOOL GWALIOR
CLASS - III



ACADEMIC SESSION 2021-22
WORKSHEET (SELF –ASSESSMENT)


Subject: Hindi

Assignment No. : 10

Allotment Date: 15 January 2022

संख्या	प्रश्नउत्तर	अंक	प्रकृति
प्र.1	सही वाक्यों के सामने सही (V) व गलत के सामने गलत (X)का निशान लगाएं। क. एंटीनेटो का घोडा अरबी था। () ख. राजा ने महल के बाहर एक घण्टा लगवाया था। () ग. एंटीनेटो जापान देश का धानी व्यक्ति था। () घ. राजा ने घोड़े को दाना-पानी दिया। ()	4	बोधोत्प्रेरक
प्र.2	निम्नलिखित शब्दों के लिंग बदल कर लिखो:- क. बकरा ख. चूहा ग. राजा घ. स्वामी	4	सूचनापरक
प्र.3	जिन शब्दों से किसी काम के करने या होने का पता चले उन्हें कहते हैं।	2	अंतः विषयात्मक
प्र.4	सही जोड़े बनाओ – धारीदार मोर रंगदार बाघ	2	गहनसोचऔरसमस्यासमाधान

<p>प्र.5</p>	<p>निम्नलिखित शब्दों के समान अर्थ वाले शब्द लिखो :</p> <p>क पक्षी</p> <hr/> <p>ख कमल</p> <hr/>	<p>2</p>	<p>उच्चस्तरीय चिंतन</p>
<p>प्र.6</p>	<p>निम्नलिखित शब्दों के अर्थ लिखो:-</p> <p>क. व्याकुल</p> <p>ख. अखरना</p> <p>ग. सूचना देना</p> <p>घ. मारे – मारे फिरना</p>	<p>4</p>	<p>विश्लेषणात्मक</p>
<p>प्र.7</p>	<p>निम्नलिखित प्रश्नों का उत्तर दो:-</p> <p>क बूढ़ा घोड़ा रस्सी क्यों खा गया ?</p> <hr/> <p>ख एंटीनेटो का सिर शर्म से क्यों झुक गया ?</p> <hr/>	<p>2</p>	<p>भाषायीकौशल</p>



ARMY PUBLIC SCHOOL GWALIOR
CLASS - III



ACADEMIC SESSION 2021-22
WORKSHEET (SELF –ASSESSMENT)

Subject: Mathematics

Assignment No. : 10

Allotment Date: 15 January 2022

S. NO.	QUESTIONS	MARKS	NATURE
1	Fill in the blanks by choosing the correct options- a) and Bar graphs are the visual forms of representation of the data. b) 1 litre = ml	2X1=2	Information
2	Convert :- a) 3kg into grams b) 7 litres into millilitres:- c) 8000grams into kilograms and grams :-	3x1=3	Understanding

3	4L is equivalent to mL	1X2=2	Interdisciplinary
---	------------------------------	-------	-------------------

4	<p>State whether the following statements are True or False:</p> <p>i) 5kg200g + 8Kg400g=13Kg600g</p> <p>ii) Milk is measured in Centimetres.</p> <p>iii) Data can be presented in the form of Tables, Pictographs and Bar graphs.</p> <p>.....</p>	3x1=3	Analytical Skill
---	--	-------	------------------

5	<p>James asked his friends their favourite colour.</p> <p>Green Blue Red Green Blue Blue Green Red Blue White</p> <p>BlueGreen Red Green Blue Red Blue Green</p> <table border="1" data-bbox="256 1738 1054 2186"> <thead> <tr> <th>COLOUR</th> <th>TALLY</th> <th>NUMBERS</th> </tr> </thead> <tbody> <tr> <td>GREEN</td> <td></td> <td></td> </tr> <tr> <td>BLUE</td> <td></td> <td></td> </tr> <tr> <td>RED</td> <td></td> <td></td> </tr> </tbody> </table>	COLOUR	TALLY	NUMBERS	GREEN			BLUE			RED			4X1=4	<p>Critical</p> <p>Thinking and</p> <p>Problem</p> <p>Solving</p>
COLOUR	TALLY	NUMBERS													
GREEN															
BLUE															
RED															


	<table border="1" style="width: 100%; height: 50px;"> <tr> <td style="width: 33%;">WHITE</td> <td style="width: 33%;"></td> <td style="width: 33%;"></td> </tr> </table>	WHITE				
WHITE						
<p>6</p>	<p>Complete the following statements-</p> <p>i) Heavier things are measured in (kilograms/millilitres)</p> <p>ii) Tallies are used for the 1,2,3,4 and 5. (numbers/ numbertnames)</p> <p>iii) There are 250grams in 500grams. (Two/Three)</p>	<p>3x1=3</p>	<p>Evaluation</p>			
<p>7</p>	<p>Word Problems :-</p> <p>i) The weight of a box of straw berries was 4Kg 250g.Raghav ate 450g.What is the weight of the remaining straw berries?</p> <p>.....</p> <p>.....</p> <p>.....</p>	<p>3x1=3</p>	<p>Communication Skills</p>			

.....
ii) A milkman has 7litres700ml milk. He sells 4litres 850ml
to
one person. How much milk is left with him?

.....
.....
.....

iii) Amit's cake weighs 2kg 9g and Amita's cake weighs
900
grams. Whose cake is heavier and how much ?

.....
.....
.....



ARMY PUBLIC SCHOOL GWALIOR
CLASS - III



ACADEMIC SESSION 2021-22
WORKSHEET (SELF –ASSESSMENT)

Subject: EVS

Assignment No. : 10

Allotment Date: 15 January 2022

S.NO	QUESTIONS	MARKS	NATURE
1.	Write True or False against the following statements: a) Raj Ghat is the Samadhi of Gandhiji. ----- b) Onam is the harvest festival of Tamilnadu. -----	2X1=2	Information
2.	Answer the following- What type of clay is used by the potter to make pots? Find out the different items made by potters. _____ _____	1x3=3	Understanding

3.	<p>Write the correct date of the following festivals:</p> <p>(i) Teacher's Day _____</p> <p>(ii) Independence Day _____</p>	1x2=2	Interdisciplinary
4.	<p>Match the following:</p> <p>a) Ashoka Chakra i) Kerala</p> <p>b) Madhubani Painting ii) 24 spokes</p> <p>c) Snake- boat race iii) Bihar</p>	3X1=3	Analytical Skill
5.	<p>Choose the correct options:</p> <p>(i) Jewellery made of clay is called _____ Jewellery.</p> <p>a) pots <input type="checkbox"/> b) terracotta <input type="checkbox"/> c) warli</p> <p><input type="checkbox"/></p> <p>(ii) Satyameva Jayate means _____.</p> <p>a) Truth alone save <input type="checkbox"/> b) Truth alone service <input type="checkbox"/></p> <p>c) Truth alone triumphs <input type="checkbox"/></p>	2X1=2	Critical Thinking and Problem Solving

6.	Why should we respect our national flag? <hr/> <hr/>	1x2=2	HOT
7.	Answer the following questions: (i) What is Mahavir Jayanti? <hr/> <hr/> (ii) What did the early man use pots for? <hr/> <hr/> (iii) Which city is known as the fastest growing city of Asia? <hr/>	3X1=3	Evaluation
8.	Answer the following questions: (i) Which river flows in Kolkata? <hr/>	3x1=3	Communicati on Skills

(ii) Which is the harvest festival of Assam?

(iii) Who composed the national anthem?



ARMY PUBLIC SCHOOL GWALIOR

CLASS - III



ACADEMIC SESSION 2021-22

WORKSHEET (SELF –ASSESSMENT)

Subject: Computer

Assignment No. : 10

Allotment Date: 15 January 2022

S.NO	QUESTIONS	MARKS	SKILLS/ COMPETENCIES
1	<p><u>Tick the correct answer</u></p> <p>1) You enter the text with the help of a. Mouse b. Keyboard c. Printer</p> <p>2) is a flashing line on the screen. a. Insertion Point b. Ribbon c. Title bar</p> <p>3)..... help to improve cognitive skills. a. System b. Games c. Application</p> <p>4) is the largest network of computers. a. Internet b. Multimedia c. DVD</p>	4x1=4	Information
2	<p><u>Write 'T' for TRUE and 'F' for FALSE statements</u></p> <p>1) Word processor is a computer application which is used to create, edit, print and save a document.</p> <p>2) MS – Paint is an example of Word processor.</p> <p>3) You cannot use graphical pictures with text in MS-Word. _____</p> <p>4) The Ribbon displays the name of the currently active document. _____</p>	4x0.5=2	Understanding
3	<p><u>Fill in the blanks.</u></p> <p>1) Multimedia programs are available on _____.</p> <p>2) Internet is a worldwide system of computer _____.</p> <p>3) _____ is a program used to create text document.</p> <p>4) Word file is saved with _____ extension</p>	4x1=4	Analytical Skill



ARMY PUBLIC SCHOOL GWALIOR
CLASS - III



ACADEMIC SESSION 2021-22
WORKSHEET (SELF –ASSESSMENT)

Subject: G.K

Assignment No. : 10

Allotment Date: 15 January 2022

S.N	QUESTIONS	MARKS	NATURE
1.	Fill in the blanks by choosing the correct options : i. _____ is a precious white metal used to make coins , jewellery etc (silver, gold, aluminium) ii. Taj mahal is made of _____ (brick, stone, marble)	2X1=2	Information
2.	Answer the following- Name our galaxy. _____ _____ _____.	1x1=1	Understanding
3.	Write true (T) or false (F) against the following statements: i) Kho Kho is the national sport of India. ii) Mona lisa was painted by Leonardo da Vinci.	2X1=2	Analytical Skill

4.	<p>Choose the correct option:</p> <p>i) _____ is the president of India.</p> <p>a) Shri Narendra Modi b) Shri Ram Nath Kovind c) Dr APJ Abdul Kalam</p>	1X1=1	Critical Thinking and Problem Solving
5.	<p>Name all the eight planets.</p> <p>_____</p> <p>_____</p> <p>_____</p>	1x2=2	HOT
6.	<p>Answer the following questions:</p> <p>(i) Name the constellation which is located in the northern sky.</p> <p>_____.</p> <p>_____.</p>	1X1=1	Evaluation
7.	<p>Answer the following questions:</p> <p>(i) Who lives in the white house in Washington, DC?</p> <p>_____</p> <p>_____</p>	1x1=1	Communication



ARMY PUBLIC SCHOOL GWALIOR

CLASS - III

ACADEMIC SESSION 2021-22

WORKSHEET (SELF –ASSESSMENT)




Subject: Health and Physical Education

Assignment No. : 10

Allotment Date: 15 January 2022

S. No	Question	Marks	Nature
1.	Fill in the blanks We should wash our hands _____ preparing food. a) After b) Before c) Both A and B d) None of the above	10x1=10 3x1=3	Informative Understanding
2.	Plaque is a film that _____ your teeth. a) Coats b) Stay c) Both A and B d) None of the above		Informative Understanding
3.	_____ stops plaque building up. a) Tooth brushing b) Eating healthy food c) Medicine d) All of the above		Understanding Understanding Informative
4.	True and false Plaque is good for our teeth.	3x1=3	Understanding
5.	Germs can spread easily.		
6.	Wasting food is a bad habit.		Informative
7.	MCQs What is destructive for earth's environment? a) Wasting food b) Eating food c) Preserving food d) All of the above	4x1=4	Informative informative
8.	Methane gas is how many times powerful than carbon pollution? a) 26x		

9.	b) 27x c) 24x d) 25x Personal hygiene includes what? a) Bathing b) Washing your hands c) Brushing your teeth d) All of the above		
10.	Personal hygiene helps in a) Prevent illnesses b) Prevent growth c) Prevent enemy's d) None of the above		



ARMY PUBLIC SCHOOL GWALIOR

CLASS - III

ACADEMIC SESSION 2021-22

WORKSHEET (SELF –ASSESSMENT)



Subject: Discipline

Assignment No. : 10

Allotment Date: 15 January 2022

S.NO	QUESTIONS	MARKS	SKILLS/ COMPETENCIES
1.	Tick the correct option- a. Confidence is i. Believe in yourself ii. Self- belief iii. A skill iv. None of the above b. We can become confident by- i. Firstly by telling our mind that "I can do it!" ii. When we like some good quality in someone, try to develop similar quality. iii. Don't doubt your abilities; but strengthen them by taking responsibility's. iv. All of the above	02	Knowing and understanding
2.	Complete the sentence i. Let's learn to be _____. ii. Confidence is believe in _____.	02	Knowing and understanding
3.	What does keep at it means- _____ _____ _____	02	Application and analysis
4.	Give your friends few tips to be confident. _____ _____ _____	04	Application of knowledge



ARMY PUBLIC SCHOOL GWALIOR

CLASS - III

ACADEMIC SESSION 2021-22

WORKSHEET (SELF –ASSESSMENT)



Subject: Music (Instrumental)

Assignment No. : 10

Allotment Date: 15 January 2022

S. No	Answer the following questions:	Marks	Skills
a.	How many matra are there in Dadra Taal? a. Six b. Eight c. Nine	1	Informative
b.	To understand the rhythm of a song, what do you need to understand first? a. Speed b. Lay c. Taal	1	Informative
c.	What is the speed of the song called in the language of music? a. Lay b. Swar c. Taal	1	Informative
d.	How many khali are there in Dadra Tal? a. one b. two c. three	1	Informative
e.	How many tali are there in Dadra Tal? a. One b. Two c. Three	1	Informative
f.	How many vibhag are there in Dadra Tal? a. One b. Two c. None of the above	1	Informative
g.	In music we understand the rhythm of the song with the help of ? a. Metronom b. Lay c. Taal	1	Informative
h.	How many parts are there in tabla ? a. Two b. Three c. Four	1	Informative
i.	What is the khol of the tabla (right) made of? a. Wood b. Iron c. Plastic	1	Informative

j.	What is the shell (khol) of the Dagga (left) made of ? 1. Wooden 2. Iron 3. Plastic	1	Informative
----	--	---	-------------



ARMY PUBLIC SCHOOL GWALIOR

CLASS - III

ACADEMIC SESSION 2021-22

WORKSHEET (SELF –ASSESSMENT)



Subject: Music (Dance)

Assignment No. : 10

Allotment Date: 15 January 2022

S. No.	Answer the following questions:	Marks	Skills
1.	Where is Bengal renowned all over? a. World b. Different countries c. None of the above	1	Informative
2.	What we will get in the culture of West Bengal? a. Richness b. Vintage c. None of the above	1	Informative
3.	What is another name of Brita dance? a. Vrita b. Kirtan c. chhau	1	Informative
4.	What kind of dance is Brita dance? a. Simple b. Complex c. Unique	1	Informative
5.	Which is the devotional dances of West Bengal? a. Gambhira dance b. Chhau dance c. Brita dance	1	Informative
6.	Gambhira dance is performed with what? a. Sincerity b. Honesty c. All of the above	1	Informative
7.	Which is the traditional dance of West Bengal? a. Tusu dance b. Lathi dance c. Rabindrasangeet dance	1	Informative
8.	Where else Rabindrasangeet dance is performed? a. Foreign countries b. Neighbouring countries c. None of the above	1	Informative
9.	Why do people come to West Bengal? a. Cherish the place b. Cherish the people c. Cherish the food items	1	Informative
10.	Which dance is performed after the recovery of some certain disease?	1	Informative

	<ul style="list-style-type: none">a. Tusu Danceb. Vrita Dancec. Kirtan Dance		
--	--	--	--



ARMY PUBLIC SCHOOL GWALIOR

CLASS - III

ACADEMIC SESSION 2021-22

WORKSHEET (SELF –ASSESSMENT)



Subject: Library

Assignment No. : 10

Allotment Date: 15 January 2022

S.NO	QUESTIONS	MARKS	NATURE
	Answer the following questions on the basis of the story 'KINDNESS' given in the notes.		
1	Who was Sudha ?	01	Comprehension
2	Where did Sudha meet the old woman ?	01	Analysis
3	What did the old woman ask for ?	01	Understanding
4	Why did the people praise Sudha ?	01	Comprehension
5	What did Sudha see in the moon ?	01	Understanding
6	What should we too be like Sudha ?	01	Analysis
7	Fill in the blanks : Every body wants to be	01	Comprehension
8	The girl was called	01	Understanding
9	Sudha was deeply.....	01	Analysis
10	Kindness is a great	01	Comprehension