

ARMY PUBLIC SCHOOL GWALIOR
CLASS -IV
ACADEMIC SESSION 2021-22
WORKSHEET (SELF- ASSESSMENT)



Subject: English

Assignment No. : 9

Allotment Date: 15 December 2021

S. NO.	QUESTIONS	MARKS	NATURE
1	How many players are required in the game of basketball? What is the height of hoop/basket in basketball? 	2	Information
2	What is the worth of a successful shot? Who controls the game of basketball? 	2	Understanding
3	What is the objective of the game of basketball? 	2	Interdisciplinary

4	When do the teams exchange basketball? <hr/> <hr/> How much time is allowed for half-basket? <hr/> <hr/>	2	Analytical Skill
5	What are four types of Adverbs? (i) _____ (ii) _____ (iii) _____ (iv) _____	2	Critical Thinking and Problem Solving
6	What do players use to redirect the ball into the basket? _____ _____ _____ _____ _____	3	HOT
7	Write an e-mail to your friend telling him/her how to play your favourite game. _____ _____ _____ _____ _____ _____ _____	3	Communication skills

8.	List any four rules of your favourite game. (i) _____ (ii) _____ (iii) _____ (iv) _____	4	Evaluation
-----------	---	----------	-------------------



ARMY PUBLIC SCHOOL GWALIOR
CLASS –IV
ACADEMIC SESSION 2021-22
WORKSHEET (SELF –ASSESSMENT)



Subject: H i n d i

Assignment No. : 9

Allotment Date: 15 December 2021

क्र .	प्रश्न	अंक	प्रश्न का प्रकार
1.	<p>सही प्रश्न के आगे (√) लगाओ :</p> <p>क. कवि ने धूप कि तुलना किस से की है ?</p> <p>(i) सोनपरी से <input type="checkbox"/></p> <p>(ii) कली से <input type="checkbox"/></p> <p>(iii) बादल से <input type="checkbox"/></p> <p>ख. कवि ने बादलों कोकहा है </p> <p>(i) अलसाए <input type="checkbox"/></p> <p>(ii) मस्त <input type="checkbox"/></p> <p>(iii) रंग-बिरंगे <input type="checkbox"/></p> <p>ग. धूप.....का खेल खेलती है </p> <p>(i) शतरंज का <input type="checkbox"/></p> <p>(ii) लुका-छिपी का <input type="checkbox"/></p> <p>(iii) लूडो का <input type="checkbox"/></p>	3	बोधार्थक

2.	<p>निम्न शब्दों के अर्थ लिखो :</p> <p>(i) कजरारे - _____</p> <p>(ii) संध्या - _____</p> <p>(iii) पग - _____</p>	3	ज्ञानात्मक
3.	<p>उचित विशेषण का उपयोग कर खाली स्थान भरो :</p> <p>(i)पलकें</p> <p>(ii)नयन</p> <p>(iii)गुब्बारे</p> <p>(iv)धूप</p> <p>निम्नलिखित शब्दों के समानार्थी शब्द लिखो :</p> <p>(i) संध्या - _____</p>	4	<p>रचनात्मक</p> <p>सूचनात्मक</p>
4.	<p>(ii) फूल - _____</p> <p>(iii) पग - _____</p> <p>(iv) कोमल - _____</p> <p>निम्नलिखित प्रश्नों के उत्तर दीजिये :</p> <p>(i) धूप सुबह से शाम तक क्या-क्या करती है?</p> <p>_____</p> <p>_____</p>	4	
5.	<p>(ii) यदि धूप सोती रह जाए तो क्या होगा?</p> <p>_____</p> <p>_____</p> <p>(iii) धूप थक कर क्या करती है?</p> <p>_____</p> <p>_____</p> <p>निम्नलिखित शब्दों के विलोम शब्द लिखो :</p>	3	विश्लेषणात्मक

6.	(i) डरपोक (ii) थोडा (iii) चतुर	3	उच्चस्तरीयचिंतन
----	--------------------------------------	---	-----------------



ARMY PUBLIC SCHOOL GWALIOR
CLASS - IV
ACADEMIC SESSION 2021-22
WORKSHEET (SELF –ASSESSMENT)



Subject: Mathematics

Assignment No: 9

Allotment Date: 15 December 2021

S.NO	QUESTIONS	MARKS	SKILLS/ COMPETENCIES
1	Fill in the blanks: (i) We cannot multiply a fraction by _____ (ii) Each fraction has _____ numbers.	2x1=2	Understanding
2	Write „True“ or „False“: (i) The number above the line is called numerator. () (ii) The number below the line is called denominator. ()	2x1=2	HOTS
3	Tick the correct answer from the given options: (i) 3/4 of 1 litre is _____ (a) 750mL (b) 250mL (c) 25mL (d) 200 mL (ii) Classify the fraction-3/8, 5/12, 4/10. (a) Proper fraction (b) Improper fraction (c) Mixed fraction (d) Unit fraction (iii) Classify the fraction-13/8, 16/3, 18/8. (a) Proper fraction (b) Improper fraction (c) Mixed fraction (d) Unit fraction	5x1=5	Critical thinking

	<p>(iv) When we add $\frac{2}{5}$ and $\frac{1}{5}$</p> <p>(a) $\frac{2}{5}$ (b) $\frac{3}{5}$ (c) $\frac{1}{5}$ (d) $\frac{5}{5}$</p> <p>(v) If 1 m cloth costs ₹ 100, how much will $\frac{3}{4}$ m cost?</p> <p>(a) ₹ 100 (b) ₹ 25 (c) ₹ 50 (d) ₹ 75</p>		
4	<p>Solve the following questions: -</p> <p>(i) Add: $\frac{4}{13}$ and $\frac{6}{13}$</p> <p>(ii) Subtract: $\frac{5}{8}$ from $\frac{3}{8}$</p> <p>(iii) Subtract $\frac{6}{11}$ from $\frac{2}{11}$</p> <p>(iv) Add $\frac{2}{7}$, $\frac{1}{7}$ and $\frac{3}{7}$</p> <p>(v) Add $\frac{2}{9}$ and $\frac{4}{9}$</p>	5x1=5	Interdisciplinary
5	<p>Solve the following questions:</p> <p>(i) A container has $\frac{7}{8}$ litre milk. $\frac{2}{8}$ litre milk is used. How much milk is left?</p> <p>(ii) Tiya read $\frac{1}{8}$ part of a book on Friday and $\frac{5}{8}$ on Saturday. What part of the book has she read?</p> <p>(iii) Convert $\frac{3}{8}$ kg into grams. Find the cost of $\frac{3}{8}$ kg apples at ₹ 16 per kg?</p>	2x3= 6	Problem Solving



ARMY PUBLIC SCHOOL GWALIOR
CLASS-IV
ACADEMIC SESSION 2021-22
WORKSHEET (SELF -ASSESSMENT)



Subject: EVS

Assignment No.:9

Allotment Date: 15 December 2021

S. NO.	QUESTIONS	MARKS	NATURE
1	<p>Fill in the blanks:</p> <p>i Railways are the _____ of our country.</p> <p>ii The Indian railways are divided into _____ Zones.</p> <p>iii India has a good _____ of roads railways, airways and waterways.</p>	3x1=3	Information
2	<p>Write True or False:</p> <p>i. The Americans introduced the railways in India. ()</p> <p>ii. India has 8 major ports. ()</p> <p>iii. Large roads that connect towns and cities are highways. ()</p>	3x1=3	Understanding

	<p>Choose the correct option:</p> <p>i. Indian railway network is the----- largest in Asia. a) First b) second c) third d) fourth</p> <p>ii. The type of transport we use does not depend on ----- a)Distance b) Time c) Climate d) Money</p> <p>iii. In India, we have roads connecting towns and cities call_____. a) Highways b) State highways c) Kuccha roads d) Pucca roads</p>	3x1=3	Interdisciplinary
4	<p>Define the terms:</p> <p>i. Metro: ----- -----</p> <p>ii. Cargo-planes ----- -----</p>	2x2=4	Analytical Skill
5	<p>What are the advantage and disadvantage of Airways?</p>	3x1=3	HOT
	<p>----- ----- ----- ----- -----</p>		

6	What is the difference between kuccha roads and pucca roads? ----- ----- ----- ----- ----- -----	2	Critical Thinking and Problem Solving
7	What kinds of goods are transported by water? ----- ----- ----- ----- -----	2	Evaluation



ARMY PUBLIC SCHOOL GWALIOR
CLASS - IV
ACADEMIC SESSION 2021-22
WORKSHEET (SELF – ASSESSMENT)



Subject: Computer
Allotment Date: 15 December 2021

Assignment No: 9


S.NO	QUESTIONS	MARKS	SKILLS/COMPE TENCIES
1	Tick the correct answer 1. Cut & Copy buttons are available on tab. Insert Home Format 2. Double clicking on a word will select. Word Sentence Paragraph 3. Shape command is available undertab. Home Insert Review 4. In Word 2010, there are types of alignments. Two Three Four	4x1=4	Information

2 **Write 'T' for TRUE and 'F' for FALSE statements** **2x1=2** Understanding

1. In Justify alignment, text is justified between left and right margins. ()
2. Ctrl + c is the shortcut command to copy the text. ()

3 **Fill in the blanks.** **4x1=4** Analytical Skill

1. Selected text appears..... on screen.
2. In alignment, text is justified between left and right margins.
3. To select a paragraph, you have to click..... times over the paragraph.
4. is the shortcut command to copy the text.




ARMY PUBLIC SCHOOL GWALIOR
CLASS -IV
ACADEMIC SESSION 2021-22
WORKSHEET (SELF –ASSESSMENT)



Subject: G.K

Assignment No. 9

Allotment Date: 15 December 2021

S. NO.	QUESTIONS	MARKS	SKILLS / COMPETENCIES
1.	<p>Fill in the blanks:</p> <p>i. Crops grown from June to September is called_____.crops.</p> <p>ii. _____and_____are rabi crops.</p> <p>iii. Rabi crops are grown from_____to _____.</p>	3x1=3 marks	Understanding, Information, interdisciplinary
2.	<p>State True / False:</p> <p>i. Cotton is a rabi crop. ()</p> <p>ii Maharashtra is known for oranges. ()</p> <p>iii Harvesting is the first step in cultivation of rice. ()</p>	3x1=3 marks	Information, Understanding, Analytical skills,
3.	<p>Tick the correct answer:</p> <p>i. Identify the step shown in the picture in cultivation of rice.</p>  <p>a) sowing the seed b) fertilizing the field c) winnowing the field</p> <p>ii. Identify the kharif crop. a)wheat b)rice c) mustard</p>	2x1=2 marks	Information, Understanding Interdisciplinary
4.	<p>Which state is the largest producer of rubber in India?</p> <p>_____</p>	1 marks	Information, Understanding

5.	What is the meaning of winnowing the seeds? -----	1 marks	Information
----	--	---------	-------------



ARMY PUBLIC SCHOOL GWALIOR
CLASS -IV
ACADEMIC SESSION 2021-22
WORKSHEET (SELF –ASSESSMENT)



Subject: Music (instrument)

Assignment No. 9

Allotment Date: 15 December 2021

S.No	Answer the following questions:	Marks	Skills
1.	According to whom the regular varan samuh is called Alankara? I. Sangeet ratnakar II. Pt. Paluskar III. None of them	1	Informative
2.	What is a regular varan samuh called in music? I. Alankar II. Taal III. Swar	1	Informative
3.	In simple words, what is the gati of swara according to the rules? I. Alankar II. Palta III. None of them	1	Informative
4.	What is the alankar called in other words? I. Palta II. Tihae III. Kayda	1	Informative
5.	What is the step in learning Alankar Music? I. Frist II. Secande III. None of them	1	Informative
6.	What is the first practice of classical music people ? I. Thumari II. Tappa III. Alankar	1	Informative
7.	Through the practice of Alankar, the students get the ability to play I. Swar Instrument II. Tabla III. Drum	1	Informative
8.	What does the practice of Alankar help people associated with Sangeet recognize ? I. Taal II. Swar III. Lay	1	Informative
9.	What is tabla puri made of ? I. Leather II. Wooden	1	Informative

	III. none of them		
10	What are the types of swar ? I. Seven II. Three III. Eight	1	Informative



ARMY PUBLIC SCHOOL GWALIOR
CLASS- IV
ACADEMIC SESSION 2021-22
WORKSHEET (SELF- ASSESSMENT)



Subject: Music (Dance)
Allotment Date: 15 December 2021

Assignment No: 9

S.NO.	Answer the following questions:	Marks	Skills
1.	What is Punjab known for? a. Rich traditional folk dance b. Rich traditional clothes c. None of the above	1	Informative
2.	Why Punjab's rich tradition is famous? a. For Music b. For Painting c. None of the above	1	Informative
3.	Punjabi dances are decorations of which dance? a. Folk dance b. Classical dance c. Western dance	1	informative
4.	In which type of dance punjabi dance comes? a. Religious dance b. Traditional dance C. All of the above	1	Informative
5.	Which Punjabi dance is for women? a. Giddah b. Bhangra c. None of the above	1	Informative
6.	Which Punjabi dance is for men and women both? a. Bhangra b. Malawi c. Julli	1	Informative
7.	When Punjabi folk dances are typically performed? a. Harvest and wedding b. Normal days c. None of the above	1	Informative
8.	What is the outfit of Bhangra? a. Lungi b. Dhoti c. Saree	1	Informative
9.	What is bhangra dance originally dedicated to? a. Harvesting b. Gods c. None of the above	1	Informative
10.	Which part of the body jerks in giddha dance?	1	Informative

	a. Hands b. Shoulders c. Legs		
--	-------------------------------------	--	--





ARMY PUBLIC SCHOOL GWALIOR
CLASS- IV
ACADEMIC SESSION 2021-22
WORKSHEET (SELF- ASSESSMENT)



Subject: Health and Physical Education
Allotment Date: 15 December 2021

Assignment No: 9

S.no	Question	Marks	Nature
1.	<p><u>Fill in the blacks</u></p> <p>Roads help us to reach our _____.</p> <p>a) <u>Home</u> b) <u>School</u> c) <u>Place</u> d) <u>All of the above.</u></p>	<p><u>10x1=10</u> <u>3x1=3</u></p>	<p><u>Understanding</u></p>
2.	<p><u>We should not run on _____.</u></p> <p>a) <u>Playground</u> b) <u>Roads</u> c) <u>Running Ground</u> d) <u>None of the above.</u></p>		<p><u>Informative</u></p>
3.	<p><u>We should not play on _____.</u></p> <p>a) <u>Grounds</u> b) <u>Parks</u> c) <u>Busy streets</u> d) <u>Playing fields.</u></p>		<p><u>Understanding</u></p>
4.	<p><u>True and False</u></p> <p><u>We should gear up for bicycle rides.</u></p>	<p><u>3x1=3</u></p>	<p><u>Informative</u></p>
5.	<p><u>We should push others who are boarding the bus.</u></p>		<p><u>Understanding</u></p>
6.	<p><u>We should wear hat under our bicycle helmet.</u></p>		<p><u>Understanding</u></p>

	<p><u>MCCQs</u></p> <p>7. <u>Which body part we should not stick out from a moving vehicle?</u></p> <p>a) <u>Head</u> b) <u>Hand</u> c) <u>Leg</u> d) <u>Both A and B.</u></p> <p>8. <u>What we should put on our helmet so drivers can see us better?</u></p> <p>a) <u>Lights</u> b) <u>Reflecting stickers</u> c) <u>Animated stickers</u> d) <u>All of the above.</u></p> <p>9. <u>What is the meaning of this Sign?</u></p>  <p>a) <u>Stop</u> b) <u>Go</u> c) <u>Wait</u> d) <u>None of the above</u></p> <p>10. <u>What does this sign mean?</u></p>  <p>a) <u>Do not Enter</u> b) <u>You Can enter</u> c) <u>Private area</u> d) <u>None of the above</u></p>	<p><u>4x1=4</u></p>	<p><u>informative</u></p> <p><u>Informative</u></p> <p><u>Informative</u></p> <p><u>Understanding</u></p>
--	--	---------------------	---



ARMY PUBLIC SCHOOL GWALIOR
CLASS -IV
ACADEMIC SESSION 2021-22
WORKSHEET (SELF –ASSESSMENT)




Subject: Library

Assignment No. 9

Allotment Date: 15 December 2021

S.NO	QUESTIONS	MARKS	NATURE
	Answer the following questions on the basis of the story 'Greed is not good' given in the notes.		
1	What did Midas want ?	01	Analysis
2	What was the boon that Mercury gave to midas ?	01	Analysis
3	What happened when Midas sat to dinner ?	01	comprehension
4	Why did Midas have to go thirsty?	01	Analysis
5	What is the moral of this story?	01	Analysis
	FILL IN THE BLANKS		
6	The more the greedy people.....the more they	01	Understanding
7	Greedy people are neverand	01	comprehension
8	It is not only poor people who are	01	comprehension
9	The king Midasthe god	01	Analysis
10	Greed always brings	01	Understanding



ARMY PUBLIC SCHOOL GWALIOR
CLASS -IV
ACADEMIC SESSION 2021-22
WORKSHEET (SELF -ASSESSMENT)



Subject: Discipline
Allotment Date: 15 December 2021

Assignment No. 9

S.NO	QUESTIONS	MARKS	SKILLS/COMPETENCIES
1.	Fill in the blanks i. Say please and _____. (thank you/ please) ii. Be _____ (polite/humble) iii. Raise your _____ (hand/voice) iv. Follow rules. (rule/code) v. Share with _____. (others/more) vi. Take _____. (turns/pride) vii. We must respect our _____. (parents/toys) viii. We must take care of our _____ (belongings/ games)	05	Knowing and Understanding

	<p>ix. We must always _____ elders. (respect/take care)</p> <p>x. Give respect _____ respect. (get/have)</p>		
2.	<p>Choose the correct answer-</p> <p>i. Respect is a a. Virtue b. Quality c. Goodness</p> <p>ii. We show respect to a. Everyone b. All c. Both a & b</p>	02	Knowing and understanding
3.	Write two respect words?	01	Thinking and written expression
4.	How do you show respect for your grandparents?	01	Thinking and written expression