

ARMY PUBLIC SCHOOL GWALIOR
CLASS - I





ACADEMIC SESSION 2021-22
WORKSHEET (SELF –ASSESSMENT)


Subject: English

Assignment No. : 9

Allotment Date: 15 December 2021

| S.N | QUESTIONS | MARKS | SKILLS/COMPETENCIES |
|-----|---|-------|---------------------|
| 1 | <p>Fill in the blanks using the words given in the box below.</p> <p>Weekend, Nitin, fence, cookies, wrapped</p> <p>a. All cousins met on the last _____.</p> <p>b. Mummy had baked some special _____.</p> <p>c. _____ was the seeker.</p> <p>d. Priya ran along the _____ and fell into the pool.</p> | 4X1=4 | Information |
| 2 | <p>Answer the following questions.</p> <p>Q1. Where did mummy arrange the party ?</p> <p>_____</p> <p>Q2. Which game did the children play ?</p> <p>_____</p> <p>Q3. Write three things hanging from the tree.</p> <p>_____</p> <p>_____</p> <p>Q4. What scared Priya ?</p> <p>_____</p> | 4X1=4 | Understanding |
| 4 | <p>Circle / underline describing words in these sentences.</p> | 4X1=4 | Analytical Skill |

| | | | |
|----|--|-------|---------------------------------------|
| | <p>a. I am hungry.</p> <p>b. There are dark clouds in the sky.</p> <p>c. Milk is good for health.</p> <p>d. Disha has curly hair.</p> | | |
| 5. | <p>Write two describing words that go with these nouns.</p> <p>Flower : _____, _____</p> <p>Apple : _____, _____</p> | 2X1=2 | Critical Thinking and Problem Solving |
| 6. | <p>Look at the following pictures and fill in the blanks with the appropriate position words.</p> <p>a. A bird is sitting _____ the branch. (in/on)</p>  <p>b. Raju is standing _____ the tree. (on/behind)</p>  | 2X1=2 | Evaluation |
| 7. | <p>Write the meaning of the following words .</p> <p>a. yummy -</p> <p>b. seeker -</p> <p>c. suddenly -</p> <p>d. screamed -</p> | 4x1=4 | Communication Skills |



ARMY PUBLIC SCHOOL GWALIOR

CLASS - I

ACADEMIC SESSION 2021-22



WORKSHEET (SELF -ASSESSMENT)

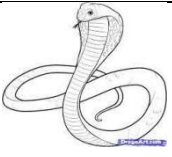


Subject: Hindi

Assignment No. : 9

Allotment Date: 15 December 2021

| संख्या | प्रश्न / उत्तर | अंक | प्रकृति |
|--------|---|----------|------------------|
| प्र.1 | अँ व अः की मात्रा लगाकर सही शब्द बनाओ 1 नम ऊट अत भवरा पुन | 5x.5=2.5 | बोधार्थक |
| प्र 2 | नीचे दिए गए शब्दों के विलोम शब्द लिखो 1 1. मोटा 2. दिन 3. बड़ा 4. सोना 5. हँसना 6. काला | 6x1=6 | गहन सोच |
| प्र-3 | नीचे दिए गए प्रश्नों के उत्तर लिखो 1 प्रश्न: मँगरू मुँह फुलाए क्यों बैठा था ? प्रश्न: माँ ने मँगरू को खाना क्यों नहीं दिया था ? प्रश्न: ऊँटवाले ने मँगरू से क्या कहा ? | 3x 1=3 | समस्या समाधान |
| प्र-4 | नीचे दिए गए चित्रों के नाम लिखो 1  -----  ----- | 4x1=4 | उच्चस्तरीय चिंतन |





प्र-5


नीचे दिए गए प्रश्नों के उत्तर लिखो 1

प्रश्न: मँगरू ने ऊँटवाले की क्या मदद की ?

2

विश्लेषणात्मक

प्र-6



दिए गए चित्र का वर्णन करो (पाँच वाक्य लिखो)

2.5

भाषाई कौशल



ARMY PUBLIC SCHOOL GWALIOR

CLASS - I

ACADEMIC SESSION 2021-22

WORKSHEET (SELF –ASSESSMENT)




Subject: Mathematics

Assignment No. : 9

Allotment Date: 15 December 2021

| S. NO. | QUESTIONS | MARKS | NATURE |
|--------|---|-------|-------------------|
| 1 | Tick(√) the correct word: (i) I sleep in the day / night . (ii) I eat my dinner in the day/night . (iii) I go to school in the morning/evening . (iv) I play in the morning / evening . | 4x1=4 | Information |
| 2 | Which of the following events take longer time? (i) To tie laces / eat breakfast . (ii) To play a cricket match / take a bath . (iii) To fill a bucket / fill a glass . (iv) Reach school by cycle / reach school by car . | 4x1=4 | Understanding |
| 3 | Answer the following questions: (i) Which day comes after Thursday? Ans _____ (ii) Which day is always a government holiday? | 4X1=4 | Interdisciplinary |

| | | | |
|--|--|--|--|
| | <p>Ans _____</p> <p>(iii) Which day comes between Monday and Wednesday?</p> <p>Ans _____</p> <p>(iv) Which day comes before Friday?</p> <p>Ans _____</p> | | |
|--|--|--|--|

| | | | |
|----------|---|-------|----------------------|
| 4 | <p>Fill in the blanks :-</p> <p>(i) There are _____ students in my class.</p> <p>(ii) I have _____ brothers.</p> <p>(iii) I am _____ years old.</p> <p>(iv) I have _____ sisters.</p> | 4x1=4 | Analytical Skill |
| 5 | <p>Count and fill in the boxes:</p>  <p>(i) There are _____ books.</p> <p>(ii) There are _____ crayons.</p> | 4x1=4 | Communication Skills |

(iii) There is _____pencil.

(iv) There are _____notebooks.



ARMY PUBLIC SCHOOL GWALIOR
CLASS - I







ACADEMIC SESSION 2021-22
WORKSHEET (SELF –ASSESSMENT)

Subject: EVS

Assignment No. : 9

Allotment Date: 15 December 2021

| S.N | QUESTIONS | MARK S | SKILLS/ COMPETENCIES |
|-----|---|---------------|------------------------------|
| 1. | <p>Tick (✓) the correct options :</p> <p>1. The biggest water body is _____.</p> <p>a. River b. Lake c. Ocean</p> <p>2. We see the blue sky far above the _____.</p> <p>a. Earth b. Sun c. Stars</p> <p>3. _____ cause rain.</p> <p>a. Day b. Clouds c. Night</p> <p>4. We cannot touch, _____ or taste air.</p> <p>a. Feel b. hold c. smell</p> | 3X1=3 | Information |
| 2 | <p>A. Put a tick against the right statement and cross against the wrong statement:</p> <p>1. The Sun rises in the west. _____</p> <p>2. Land covers most part of the earth. _____</p> <p>3. Plants and animals need air to breathe. _____</p> | 3X1=3 | HOTS Analytical Skill |

| | | | |
|------------------|---|--------------|------------------------------------|
| <p>3.</p> | <p>Match the following:</p> <p>1. Air bubbles </p> <p>2 Sailing </p> <p>3. Inflated tyres </p> <p>4. Storm </p> | <p>4X1=4</p> | <p>Understanding</p> |
| <p>4</p> | <p>Answer the following :</p> <p>Q 1. Write two uses of air.</p> <p>Ans----- <hr style="width: 50%; margin-left: 0;"/></p> <p>Q.2 Why can we not see stars during the day?</p> <p>Ans----- <hr style="width: 50%; margin-left: 0;"/></p> <p>Q.3 Write two uses of water</p> <hr style="width: 50%; margin-left: 0;"/> <hr style="width: 50%; margin-left: 0;"/> | <p>3x2=6</p> | <p>Communication</p> <p>Skills</p> |

5

Fill in the blanks:-

1. We keep water in a freezer to make it into _____.
2. Fish _____ in air which is present in water.
3. We see the blue sky far above the _____.
4. Very fast moving air is called _____.

4X1=4

Evaluation



ARMY PUBLIC SCHOOL GWALIOR

CLASS - I

ACADEMIC SESSION 2021-22

WORKSHEET (SELF –ASSESSMENT)



Subject: Computer


Assignment No. : 9

Allotment Date: 15 December 2021

| S.NO | QUESTIONS | MARKS | SKILLS/COMPETENCIES |
|------|---|-------|---------------------|
| 1 | <p><u>Tick the correct answer</u></p> <p>1. A mouse is a device. Holding Pointing Typing</p> <p>2. A is used for drawing and painting on computer. Mouse Keyboard CPU</p> <p>3. The small arrow that moves on the screen is called 'Shape' Picture Pointer</p> <p>4. Choose the correct spelling..... Pointing device Ponting devic Poiniting device</p> | 4x1=4 | Information |
| 2 | <p><u>Write 'T' for TRUE and 'F' for FALSE statements</u></p> <p>1. You can draw pictures using a mouse. ()</p> <p>2. Pressing the left mouse button is called single-click. ()</p> <p>3. Pressing and releasing the right mouse button is called double-click. ()</p> <p>4. We keep index finger on the left button. ()</p> | 4x1=4 | Understanding |
| 3 | <p><u>Identify the pictures</u></p> | 2x1=2 | Analytical Skill |



| | | | |
|--|--|--|--|
| | | | |
|--|--|--|--|



ARMY PUBLIC SCHOOL GWALIOR

CLASS - I

ACADEMIC SESSION 2021-22



WORKSHEET (SELF -ASSESSMENT)



Subject: G.K

Assignment No. : 9

Allotment Date: 15 December 2021

| S.NO | QUESTIONS | MARKS | NATURE |
|------|---|-------|---------------|
| 1. | <p>Tick the correct answer:</p> <p>Q 1. How many days make a fortnight ? a) 14 b) 15 c) 7</p> <p>Q 2. How many months in a year have 31 days ? a) 8 b) 6 c) 7</p> <p>Q 3. In a leap year ,how many days are there in February ? a) 28 b) 31 c) 29</p> <p>Q 4. In a year, how many months have 30 days ? a) 4 b) 5 c) 6</p> | 4x1=4 | Information |
| 2. | <p>Identify the pictures of the leaders and write their names</p> <p>.</p> <p></p> <p>_____</p> <p></p> <p>_____</p> | 4x1=4 | Understanding |



3.

Match the following sportspersons with the sports they play



1. **MS Dhoni**

badminton



2. **Saina Nehwal**

cricket



3. **Mary Kom**

lawn tennis







4. **Leander Paes**

boxing

4x1=4

Interdisciplinary

| | | | |
|----|--|-------|------------|
| 5. | <p>Look at the pictures of the flags and write the names of their countries .</p>  _____  _____  _____  _____ | 4x1=4 | HOT |
| 6. | <p>1. Write two sources of water.</p> <p>1. _____ 2. _____</p> <p>2 Write two names of musical instruments which you would like to play.</p> <p>1. _____ 2. _____</p> | 2x2=4 | HOT |
| 7. | <p>1. On which date do we celebrate New Year's Eve ?</p> <p>_____</p> <p>2. How many weeks are there in a year ?</p> <p>_____</p> | 2x1=2 | Evaluation |



ARMY PUBLIC SCHOOL GWALIOR

CLASS - I

ACADEMIC SESSION 2021-22

WORKSHEET (SELF –ASSESSMENT)




Subject: Health and Physical Education

Assignment No. : 9

Allotment Date: 15 December 2021

| S.no | Questions | Marks | Nature |
|------|---|------------------|---------------|
| 1. | Fill in the blacks Water helps in maintaining of body _____. a) Power b) Temperature c) Both A and B d) None of the above. | 10x1=10 3x1=3 | Understanding |
| 2. | Water also helps to excrete _____ out of body. a) Nutrients b) Fats c) Waste d) Proteins. | | Understanding |
| 3. | Water also maximizes _____ performance. a) Physical b) Metal c) Both A and B d) None of the above. | | Informative |
| 4. | True and False Saliva created with the help of water. | 3x1=3 | informative |
| 5. | Water lubricates joints. | | Understanding |
| 6. | We need more water in hot climate. | | Understanding |
| 7. | MCQ's Water protects our. a) Kidneys | 4x1=4 | Informative |

| | | | |
|-----|--|--|---------------|
| | <ul style="list-style-type: none"> b) Rids c) Spinal Cord d) Liver. | | |
| 8. | <p>When our body need more water?</p> <ul style="list-style-type: none"> a) More physically active b) Running a fever c) Having diarrheal or vomiting d) All of the above. | | Understanding |
| 9. | <p>Water keeps our body on _____ temperature.</p> <ul style="list-style-type: none"> a) High b) Normal c) Low d) None of the above. | | Informative |
| 10. | <p>We get rid of waste through Which process?</p> <ul style="list-style-type: none"> a) Urination b) Perspiration c) Bowel d) All of the above | | Informative |



ARMY PUBLIC SCHOOL GWALIOR
CLASS - I



ACADEMIC SESSION 2021-22
WORKSHEET (SELF –ASSESSMENT)

Subject: Discipline

Assignment No. : 9

Allotment Date: 15 December 2021

| S.NO | QUESTIONS | MARKS | SKILLS/COMPETENCIES |
|-------------|--|--------------|----------------------------|
| 1. | Fill in the blanks i. Say please and _____. (thank you/ please) ii. Be _____ (polite/humble) iii. Raise your _____ (hand/voice) iv. Follow rules. (rule/code) v. Share with _____. (others/more) vi. Take _____. (turns/pride) vii. We must respect our _____. (parents/toys) viii. We must take care of our _____ (belongings/ games) ix. We must always _____ elders. (respect/take care) x. Give respect _____ respect. (get/have) | 10 | Knowing and Understanding |



ARMY PUBLIC SCHOOL GWALIOR

CLASS - I

ACADEMIC SESSION 2021-22

WORKSHEET (SELF –ASSESSMENT)



Subject: Music (Dance)

Assignment No. : 9

Allotment Date: 15 December 2021

| S.no. | Answer the following questions: | Marks | Skills |
|-------|--|-------|-------------|
| 1. | Who is the famous dancer of Kathak? a. Rukmini Devi b. Pandit Birju Maharaj c. None of the above | 1 | Informative |
| 2. | Birju Maharaj has his own school of? a. Dancing b. Singing c. Painting | 1 | Informative |
| 3. | Guru Bipin Singh is a famous dancer of which dance? a. Manipuri b. Odissi c. Sattriya | 1 | Informative |
| 4. | Who is known as the father of Manipuri dance? a. Guru Bipin Singh b. Pandit Birju Maharaj c. None of the above | 1 | Informative |
| 5. | Sonal Mansingh is a famous dancer of? a. Odissi b. Kathakali c. Mohiniyattam | 1 | Informative |
| 6. | Sonal Mansingh is _____ women artist to win 'Balasaraswati'. a. 2 nd b. 3 rd c. 1 st | 1 | Informative |
| 7. | Mallika Saabhai is a famous dancer of? a. Bharatanatyam b. Kathak c. Kuchipudi | 1 | Informative |
| 8. | Mallika Sarabhai is a natural dancer and famous _____ dancer of India. a. Classical b. Western c. None of the above | 1 | Informative |
| 9. | Which dancer practices Hindustani Classical music? a. Pandit Birju Maharaj | 1 | Informative |

| | | | |
|-----|--|---|-------------|
| | b. Mallika Sarabhai c. None of the above | | |
| 10. | Guru Bipin Singh practiced dancing and _____? a. Painting b. Singing c. None of the above | 1 | Informative |



ARMY PUBLIC SCHOOL GWALIOR

CLASS - I



ACADEMIC SESSION 2021-22

WORKSHEET (SELF -ASSESSMENT)

Subject: Music (Instrumental)

Assignment No. : 9

Allotment Date: 15 December 2021

| S. No | Answer the following questions: | Marks | Skills |
|-------|---|-------|-------------|
| i) | How many matra are there in Dadra Taal? a. Six b. Eight c. Nine | 1 | Informative |
| ii) | Dadra taal is played with which singing style? a. Thumari b. Hori c. Gajal | 1 | Informative |
| iii) | On what matra is it tali in Dadra Tal? a. One b. Two c. Three | 1 | Informative |
| iv) | How many khali are there in Dadra Tal? a. one b. two c. three | 1 | Informative |
| (i) | How many tali are there in Dadra Tal? A. One B. Two C. Three | 1 | Informative |
| (ii) | How many vibhag are there in Dadra Tal? a. One b. Two c. None of the above | 1 | Informative |
| (iii) | How much matra is there in each vibhag in Dadra Tal ? a. Three b. Four c. Five | 1 | Informative |
| (iv) | Into how many parts is the matra of Dadra Tal divided? (i) Two (ii) Three (iii) Four | 1 | Informative |
| (v) | In what type of lay is Dadra Taal played? a. Vilambit b. Madya c. Drute | 1 | Informative |

| | | | |
|------|--|---|-------------|
| (vi) | On what matra is it khali in Dadra Tal ? 1. Four 2. Five 3. Six | 1 | Informative |
|------|--|---|-------------|



ARMY PUBLIC SCHOOL GWALIOR

CLASS - I

ACADEMIC SESSION 2021-22

WORKSHEET (SELF –ASSESSMENT)



Subject: Library

Assignment No. : 9

Allotment Date: 15 December 2021

| S.NO | QUESTIONS | MARKS | NATURE |
|------|---|-------|---------------|
| | Exercises on the basis of the story “everything in its place” given in the notes. | | |
| 1 | Put a tick mark against correct statements : Ajai keeps all things in proper places . | 01 | Comprehension |
| 2 | He faces difficulties while preparing for school. | 01 | Analysis |
| 3 | His mother is not happy with him. | 01 | Analysis |
| 4 | He helps in house- hold work . | 01 | Understanding |
| 5 | He keeps things of others also in proper places . | 01 | Analysis |
| 6 | He has to face difficulty in finding his things. | 01 | Understanding |
| 7 | Fill in the blanks : Ajai is a boy . | 01 | Understanding |
| 8 | Ajai his mother. | 01 | Analysis |
| 9 | It saves him a lot of and keeps his house | 01 | Analysis |
| 10 | He keeps all his things | 01 | Analysis |