

ARMY PUBLIC SCHOOL GWALIOR
CLASS -VII



ACADEMIC SESSION 2021-22
WORKSHEET (SELF –ASSESSMENT)

Subject: English

Assignment No.:8

Allotment Date: 15 November 2021

| S.NO | QUESTIONS | MARKS | SKILLS/ COMPETENCIES |
|------|---|-------|---------------------------------------|
| 1. | Write a short paragraph on “ Invention is the natural outcome of creative thinking ” in about 100 words. | 4m | Information |
| 2. | Read the following extract and answer the questions given below: Explore the meadow houses, The burrows in the ground, A nest beneath tall grasses, The ant’s amazing mound. Oh! Meadows have surprises And many things to tell; You may discover these yourself, If you look and listen well. Questions: Q1. Name the poem and poet. Q2. Which insect make amazing mounds? Q3. How can meadows beauty be discovered? | 3m | Understanding |
| 3. | Before fire brigades were set out, how people tried to put out fire. | 3m | HOT |
| 4. | Grammar Fill in the blanks with appropriate forms of verbs given in the brackets. The tense form is mentioned along with each sentence. a) Ravi ____ (study) for his science test. (Present continuous) b) She ____ (wait) for two hours, when I arrived. (Past perfect continuous) c) He ____ (arrive) at the office by 8 pm. (Future perfect) d) She ____ (go) to temple next morning. (Simple future) | 4m | Interdisciplinary |
| 5. | Fill in the blanks with the present or past participle form of verbs given in brackets. 1. The ____ (bake) cake was cut hurriedly. 2. She likes to admire the ____ (twinkle) stars. 3. The ____ (horrify) incident disturbed the child. | 3m | Analytical Skill |
| 6. | What did Mr. Wonka do to invent the new drug? | 4m | Critical Thinking and Problem Solving |

| | | | |
|----|---|--------|----------------------|
| 7. | Answer the following questions. a) How did the cat feel after it came down from the tree? b) How did Abbu Khan treat his goats? c) What kind of surprise could be found while walking on the grass? | 3x2=6m | Evaluation |
| 8. | Write a dialogue between you and your friend on the problem of pollution in about 80 words. | 3m | Communication Skills |



ARMY PUBLIC SCHOOL GWALIOR

CLASS -VII

ACADEMIC SESSION 2021-22

WORKSHEET (SELF –ASSESSMENT)



Subject: Hindi

Assignment No.:8

Allotment Date: 15 November 2021

| S. NO. | QUESTIONS | MARKS | SKILLS/ COMPETENCIES |
|--------|---|-------|---|
| 1 | एक तिनका कविता में किसके घमंडी होने की बात कही है? कवि की बेचैनी का क्या कारण था? | 5 | Information |
| 2 | खानपान की मिश्रित संस्कृति का क्या प्रभाव पड़ा है? | 5 | Understanding |
| 3 | घर में बातचीत करके पता कीजिए कि आपके घर में क्या चीजें पकती हैं और क्या चीजें बनी बनाई बाजार से आती हैं इनमें से बाजार से आने वाली कौन सी चीज है आप के मां पिता जी के बचपन में घर में बनती थी। | 5 | HOT |
| 4 | नीचे लिखे शब्दों के अर्थ लिखिए- भागमभाग , अजनबी , विविधता , दुर्गति , अक्षर | 4 | Interdisciplinary |
| 5 | एक तिनका कविता में कवि की समझ ने उसे क्या चेतावनी दी कि कवि का घमंड टूट गया? | 5 | Critical Thinking and Problem Solving |
| 6 | निम्न प्रश्नों के उत्तर लिखिए: 1 खानपान के मामले में स्थानीयता का क्या अर्थ है? 2 खानपान में बदलाव के कौन से फायदे हैं फिर लेखक इस बदलाव को लेकर चिंतित क्यों हैं? 3 आंखों में तिनका तिनका पढ़ने के बाद घमंडी की क्या दशा हुई? | 6 | Evaluation |



ARMY PUBLIC SCHOOL GWALIOR

CLASS -VII

ACADEMIC SESSION 2021-22

WORKSHEET (SELF –ASSESSMENT)



Subject: Mathematics


Assignment No.:8

Allotment Date: 15 November 2021

| S.NO | QUESTIONS | MARKS | SKILLS/ COMPETENCIES |
|------|--|-------|-------------------------|
| 1 | The money that is borrowed is known as _____. a) Interest b) Profit c) Loss d) Principal | 1 | Informative |
| 2 | The price at which an article is sold is called _____. a) C.P b) Discount c) S.P d) Loss | 1 | Informative |
| 3 | Which number is neither a positive or negative rational number- a) 2 b) 3 c) 7 d) 0 | 1 | Informative |
| 4 | Amount =Principal + _____ a) Profit b) Loss c) Interest d) Time | 1 | Informative |
| 5 | For what value of 'a' the number is $\frac{-11}{a}$ is not a rational number. a) -1 b)1 c)0 d)10 | 1 | Understanding |
| 6 | Find the additive inverse of $\frac{-2}{-13}$ a) $\frac{2}{13}$ b) $\frac{13}{2}$ c) $\frac{-13}{2}$ d) $\frac{-2}{13}$ | 1 | Understanding |

| | | | |
|-----------|---|----------|----------------------|
| 7 | Charge given on borrowed money is a)Principal b) Interest c) Amount d) Profit | 1 | Understanding |
| 8 | 25 % of 1 Kg is a)750g b)25kg c) 250g d) 25g | 1 | Analytical |
| 9 | If angles of a triangles are in the ratio 1:3:5,the value of the greatest angles is a) 90° b) 100° c) 180° d) 80° | 1 | Analytical |
| 10 | The rational number $\frac{-6}{-25}$ in standard form is a) $\frac{6}{25}$ b) $\frac{-6}{25}$ c) $\frac{-3}{-4}$ d) 1 | 1 | Understanding |
| 11 | Find the area of a square park whose perimeter is 96 cm a)576 cm ² b)626 cm ² c) 726 cm ² d)748 cm ² | 2 | Analytical |
| 12 | The height of a triangle whose base is 13 cm and area is 65 cm ² is a) 12 cm b) 15 cm c) 10 cm d) 20 cm | 2 | Analytical |
| 13 | If the length and the breadth of a rectangle of a rectangle are doubled then its area a)Becomes four times b) doubles c) becomes half d) remains same | 2 | Understanding |
| 14 | Find the sum $-4\frac{3}{4} + 2\frac{7}{12}$ a) $-2\frac{5}{4}$ b) $5\frac{5}{6}$ c) $-2\frac{1}{6}$ d) $4\frac{1}{3}$ | 2 | Evaluation |

| | | | |
|------------------|---|-----------------|--------------------------------|
| <p>15</p> | <p>Subtract</p> <p>$2\frac{1}{5}$ from $-3\frac{1}{6}$</p> <p>a) $4\frac{4}{3}$ b) $-5\frac{6}{4}$ c) 1 d) $-5\frac{11}{30}$</p> | <p>2</p> | <p>Evaluation</p> |
| <p>16</p> | <p>Construct a equilateral triangle PQR with equal sides as 4.5 cm.</p> | <p>2</p> | <p>Analytical skill</p> |
| <p>17</p> | <p>Draw the number line and represent $-\frac{7}{3}$ on it</p> | <p>2</p> | <p>Understanding</p> |
| <p>18</p> | <p>A wire of length 176 cm is first bent into a square and then and then into a circle. Which one will have more area?</p> | <p>3</p> | <p>Problem Solving</p> |
| <p>19</p> | <p>A rectangular piece of dimension 3 cm × 2 cm was cut from a rectangular sheet of paper of dimensions 6 cm × 5 cm .Find the ratio of the areas of the two rectangles.</p> | <p>3</p> | <p>Problem Solving</p> |



ARMY PUBLIC SCHOOL GWALIOR

CLASS -VII

ACADEMIC SESSION 2021-22

WORKSHEET (SELF –ASSESSMENT)



Subject: Science

Assignment No.:8

Allotment Date: 15 November 2021

| S.NO | QUESTIONS | MARKS | SKILLS |
|------|--|-------|---------------------------------------|
| Q1 | Answer the following questions i. Name the large muscular sheet below the chest cavity of in humans. ii. Name the organ that stores urine. | 1X2=2 | Information |
| Q2 | I. Differentiate between breathing and respiration. II. Why Arteries have thick & elastic muscular wall? | 2X2=4 | Understanding |
| Q3 | I. Why does a cockroach die when put in water? II. Why are white blood cells called soldiers of our body. | 2X2=4 | HOT |
| Q4 | I. Draw a well labelled diagram of human excretory system. II. What is pulse? III. What are the functions of blood in our body? | 2X3=6 | interdisciplinary |
| Q5 | I. Explain the mechanism of breathing in humans with an help of an activity. | 3X3=9 | Analytical |
| | II. What happens when the kidneys stop functioning partially or completely? How do doctors remove waste products from the body in such a case?. | | Critical thinking and problem solving |
| | III. Why do we suffer from muscle cramps after heavy physical activity? How can it be healed? | | Evaluation |
| Q6 | I. Discuss respiration in following animals-amoeba, Earthworm, frog, fish, and cockroach. | 5X1=5 | Communication skills |



ARMY PUBLIC SCHOOL GWALIOR

CLASS -VII

ACADEMIC SESSION 2021-22

WORKSHEET (SELF –ASSESSMENT)




Subject: Social Science

Assignment No.:8

Allotment Date: 15 November 2021

| S. NO. | QUESTIONS | MARKS | NATURE |
|--------|---|-------|---------------------------------------|
| 1 | Q1. Objective type questions Fill in the blanks and rewrite the sentences. i) Sankara was born in _____ in the 11 th century. ii) Tulsidas composed _____. iii) Mirabai was a disciple of _____. iv) Media is the plural form of the word _____. v) Mass media uses different technologies that are very _____. vi) Monsoon forests are also known as _____. vii) The Tropical grassland of Africa as _____. viii) The Tropical grassland of America are called as _____. | 8 | Information and Understanding |
| 2 | Why is Mediterranean known as 'Orchard of the world'? | 3 | HOTS |
| 3 | What is local media? How does it play an important role? | 3 | Interdisciplinary |
| 4 | Why do think many teachers rejected prevalent religious beliefs and practices? | 3 | Communication Skills |
| 5 | What were the major beliefs and practices of the Sufis? | 5 | Critical Thinking and Problem Solving |
| 6 | Which are two factors on which the growth of vegetation mostly depends? | 5 | Analytical Skill |
| 7 | On an outline political map of India locate the following places:- A)- Mark the bhakti centres of Eknath and Tukaram. B)- Mark the temperate evergreen forest of India. | 3 | Evaluation |



ARMY PUBLIC SCHOOL GWALIOR

CLASS -VII

ACADEMIC SESSION 2021-22

WORKSHEET (SELF –ASSESSMENT)




Subject: Sanskrit

Assignment No.:8

Allotment Date: 15 November 2021

| S. NO. | QUESTIONS | Marks | NATURE |
|--------|---|-------|-----------------|
| 1 | शब्दानाम् अर्थान् लिखत- निमील्य _____ गर्तः _____ मण्डूकस्य _____ समवायः _____ क्षीयन्ते _____ | 1x5=5 | Information |
| 2 | विभक्तिम् वचनं च लिखत- नरस्य _____ केयूराः _____ कीर्तिम् _____ मक्षिकायाः _____ राजसु _____ | 1x5=5 | Memory Skill |
| 3 | कोष्ठकात् उचितं पदं चित्वा रिक्तस्थानानि पूरयत- (क) बालिका मधुरं गायति। (एकम्, एका, एकः) (ख) कृषकाः कृषिकर्माणि कुर्वन्ति। (चत्वारः, चतस्रः, चत्वारि) (ग) पत्राणि सुन्दराणि सन्ति। (ते, ताः, तानि) (घ) धेनवः दुग्धं । (ददाति, ददति, ददन्ति) (ङ) वयं संस्कृतम् । (अपठम्, अपठन्, अपठाम) | 1x5=5 | Understanding |

| | | | |
|---|---|-------|------------------|
| | | | |
| 4 | <p>उपयुक्तकथनानां समक्षम् 'आम्', अनुपयुक्तकथनानां समक्षं 'न' इति लिखत-</p> <p>(क) विद्या राजसु पूज्यते।</p> <p>(ख) वाग्भूषणं भूषणं न।</p> <p>(ग) विद्याधनं सर्वधनेषु प्रधानम्।</p> <p>(घ) विदेशगमने विद्या बन्धुजनः न भवति।।</p> <p>(ङ) विद्या सर्वत्र कीर्तिम् तनोति ।</p> | 1x5=5 | Thinking skill |
| 5 | <p>एकपदेन प्रश्नानाम् उत्तराणि लिखत-</p> <p>(क) कः पशुः?</p> <p>(ख) का भोगकरी?</p> <p>(ग) के पुरुषं न विभूषयन्ति?</p> <p>(घ) का एका पुरुषं समलङ्करोति?</p> <p>(ङ) कानि क्षीयन्ते?</p> | 1x5=5 | Memory skill |
| 6 | <p>सन्धिविच्छेदम् कुरुत-</p> <p>रमेशः -</p> <p>अत्रैव -</p> <p>नयनम् -</p> <p>इत्यादि -</p> <p>सञ्चित् -</p> | 1x5=5 | Analytical Skill |



ARMY PUBLIC SCHOOL GWALIOR
CLASS -VII




ACADEMIC SESSION 2021-22
WORKSHEET (SELF –ASSESSMENT)

Subject: Computer

Assignment No.:8

Allotment Date: 15 November 2021

| S. No. | Questions | Marks | Nature |
|---------------|--|--------------|---------------|
| 1 | Tick The Correct Answer A) The tag in HTML that creates a new line is a) HTML tag b) c) <NL> B) The tag that creates a horizontal line a) / b) \ c) <HR> C) The format of an image that web browser can display is a) JPEG b) HTML c) MP4 D) The attribute used to mention the path of the image where it is located. a) JPG b) IMG c) SRC E) Which links are the links to pages within your own website? a) Internal links b) External links c) | 5x 1/2=2.5 | Information |
| 2 | Fill in the blanks a) IMG is the short form of _____ in an HTML document. b) SRC stands for _____. c) The _____ tag incorporates graphics in the HTML document. d) An e-mail link will allow visitors to send you an _____ directly. e) Internal links can be either _____ or _____. | 5 x 1/2=2.5 | Understanding |
| 3 | Answer the following question i) What are HTML tags? ii) Define the building blocks of a Table. | 2 x 2.5 =5 | HOT |



ARMY PUBLIC SCHOOL GWALIOR
CLASS -VII




ACADEMIC SESSION 2021-22
WORKSHEET (SELF –ASSESSMENT)

Subject: Art Education

Assignment No.:8

Allotment Date: 15 November 2021

| S.NO | QUESTIONS | MARKS | SKILLS/ COMPETENCIES |
|-------------|--|--------------|---------------------------------|
| 1 | _____ Drawing consist of mountains, forests, cliffs, trees, rivers, valleys. (a) Perspective (b) Emotive (c) landscape (d) Life | 1 | Creative Skills |
| 2 | Which among these is not the concept of landscape painting? (a) Representational Landscape Art (b) Impressionistic Landscape Art (c) Contemporary Art (d) Abstract Landscape Art | 1 | Creative Skills |
| 3 | Vincent Van Gogh belongs to _____. (a) Tormented Landscape (b) Spiritual Landscape (c) Obsessive Landscape (d) Dreamy Landscape | 1 | Creative Skills |
| 4 | We can see cliffs, the sea and tourist towns through which landscape? (a) Mountain landscapes (b) Flat landscapes (c) Coastal landscapes (d) karst landscapes | 1 | Creative Skills |
| 5 | We can see flat land, wide rivers, farms, cities and motorways through which landscape? (a) Mountain landscapes (b) Flat landscapes | 1 | Creative Skills |

| | | | |
|----|---|---|-----------------|
| | <p>(c) Coastal landscapes</p> <p>(d) karst landscapes</p> | | |
| 6 | <p>Dreamy Landscape belongs to _____.</p> <p>(a) Vincent Van Gogh</p> <p>(b) André Derain</p> <p>(c) Nicolas Poussin</p> <p>(d) Douanier Rousseau</p> | 1 | Creative Skills |
| 7 | <p>We can see mountains, with narrow rivers, forests, villages and steep roads through which landscape?</p> <p>(a) Mountain landscapes</p> <p>(b) Flat landscapes</p> <p>(c) Coastal landscapes</p> <p>(d) karst landscapes</p> | 1 | Creative Skills |
| 8 | <p>Which among these is not the element of a landscape?</p> <p>(a) Mass</p> <p>(b) Line</p> <p>(c) Volume</p> <p>(d) colour</p> | 1 | Creative Skills |
| 9 | <p>Scholarly Landscape belongs to _____.</p> <p>(a) Eugène Boudin</p> <p>(b) Nicolas Poussin</p> <p>(c) Paul Cézanne</p> <p>(d) André Derain</p> | 1 | Creative Skills |
| 10 | <p>Which landscape art picture is this?</p>  <p>(a) Representational Landscape Art</p> <p>(b) Impressionistic Landscape Art</p> <p>(c) Abstract Landscape Art</p> <p>(d) Contemporary Art</p> | 1 | Creative Skills |



ARMY PUBLIC SCHOOL GWALIOR
CLASS -VII





ACADEMIC SESSION 2021-22
WORKSHEET (SELF –ASSESSMENT)

Subject: Work Education

Assignment No.:8

Allotment Date: 15 November 2021

| S.NO | QUESTIONS | MARKS | SKILLS/COMPETENCIES |
|-------------|--|--------------|----------------------------|
| 1 | Blue pottery art is_____. (a) Ceramic craft (b) Needle craft (c) Textile craft (d) None of the above | 1 | Creative |
| 2 | Origami is_____. (a) Paper craft (b) Textile craft (c) Flower craft (d) None of the above | 1 | Creative |
| 3 | What is the Meaning of Paper Mache? (a) Chewed or crushed paper (b) Colored paper (c) Sheets (d) Stencils | 1 | Creative |
| 4 | Tie and dye is_____ craft. (a) Textile Craft (b) Fibre craft (c) Needle craft (d) None of the above | 1 | Creative |
| 5 | 'Wooden rose wood scoop' is a craft under which category. (a) House ware (b) Leather work | 1 | Creative |

| | | | |
|----|---|---|----------|
| | <p>(c) Fashion</p> <p>(d) None of the above</p> | | |
| 6 | <p>Fashion is the self expression of _____.</p> <p>(a) Clothing</p> <p>(b) Features</p> <p>(c) Hairstyle</p> <p>(d) All of the above</p> | 1 | Creative |
| 7 | <p>A trend or look that is spread across a population at a specific time and place is _____.</p> <p>(a) Fashion</p> <p>(b) Fashion trend</p> <p>(c) Adorning</p> <p>(d) None of the above</p> | 1 | Creative |
| 8 | <p>Clay modelling is a craft which comes under?</p> <p>(a) House ware</p> <p>(b) Fashion</p> <p>(c) Ceramics</p> <p>(d) All of the above</p> | 1 | Creative |
| 9 | <p>The example of ceramic is _____.</p> <p>(a) Earthenware</p> <p>(b) Bricks</p> <p>(c) Porcelain</p> <p>(d) All of the above</p> | 1 | Creative |
| 10 | <p>Which of these is the picture of textile craft?</p> <p>A</p>  <p>B</p>  | 1 | Creative |

c





ARMY PUBLIC SCHOOL GWALIOR
CLASS -VII



ACADEMIC SESSION 2021-22

WORKSHEET (SELF –ASSESSMENT)

Subject: Health and Physical Education

Assignment No.:8

Allotment Date: 15 November 2021

| S.NO | QUESTIONS | MARKS | SKILLS/ COMPETENCIES |
|------|---|-------|-------------------------|
| 1. | <p>Tick The Correct Answer</p> <p>Q-1- WHO Stands For ?</p> <ul style="list-style-type: none">A. Whole Health OrganisedB. World Healthy organizedC. World Health OrganizationD. Working Health Organization <p>Q-2 Health Means ?</p> <ul style="list-style-type: none">A. Our ability of remaining free from feverB. Our ability to remain free of illness and injuriesC. Our ability of not having any diseaseD. None of the above <p>Q-3- Good Health depend upon?.</p> <ul style="list-style-type: none">A. Health care FacilitiesB. Basis amenitiesC. Social conditionsD. All of these <p>Q-4- Signs of Mental illness are ?</p> <ul style="list-style-type: none">A. Abnormal changes in thinking perceptionB. Abnormal changes in feeling and memoryC. Both a and bD. Abnormal changes in behaviour towards | 4 | |
| 2 | <p><u>Fill in the blanks</u></p> <p>Q-5- Community education, also known as _____ (Community</p> | 3 | |

| | | | |
|-----------------|--|-----------------|--|
| | <p>based education and learning education, mental, Physical education)</p> <p>Q-6- The Purpose of community learning and development is_____ (To develop the capacity of individual and group, To develop the health, to develop the emotions)</p> <p>Q-7- Social Health is more than just the preventionand.....</p> <p style="padding-left: 40px;">A. Physical & social B. Social & community C. Mental illness and Social problems</p> | | |
| <p>3</p> | <p><u>True False</u></p> <p>Q-8- Social well being it is the ability of people to be free from want of basis necessities .</p> <p style="padding-left: 40px;">A. True B. False</p> <p>Q-9 Community education based on art education .</p> <p style="padding-left: 40px;">III. True B. False</p> <p>Q-10- community education also known as community based education and learning education</p> <p style="padding-left: 40px;">II. True III. False</p> | <p>3</p> | |



ARMY PUBLIC SCHOOL GWALIOR
CLASS -VII



ACADEMIC SESSION 2021-22

WORKSHEET (SELF –ASSESSMENT)

Subject: Music (Vocal)

Assignment No.:8

Allotment Date: 15 November 2021

| S. No | Answer the following questions: | Marks | Skills |
|-------|---|-------|-------------|
| C. | What is the sign of sum . ? a. X b. O | 1 | Informative |
| D. |is a semi classical style of Indian music. a. Thumri b. Dhrupad | 1 | Informative |
| E. | Alankar is an organized chain of group of.....connected together. a. swaras b. raga | 1 | Informative |
| F. | Arohana is the ascending scale of notes in raga. a.YES b.NO | 1 | Informative |
| G. | Avrohana is the ascending scale of notes in raga. a.YES b.NO | 1 | Informative |
| H. | In kehrwa taal there are 7 beats . a. YES b. NO | 1 | Informative |
| I. | How many parts are there in kehrwa taal? a. 1 b. 2 c. 3 | 1 | Informative |
| J. | Which form of music is folk music style? IV. Khyak V. Dhrupad VI. Lavani | 1 | Informative |
| K. | How many beats are there in rupak taal? a. 5 b. 6 c. 7 | 1 | Informative |
| L. | Ti Ti Na Dhi Na Dhi Na which taal bol is this. a. Rupak b. Dadra c. Tritaal | 1 | Informative |



ARMY PUBLIC SCHOOL GWALIOR

CLASS -VII

ACADEMIC SESSION 2021-22

WORKSHEET (SELF –ASSESSMENT)





Subject: Music (Dance)

Assignment No.:8

Allotment Date: 15 November 2021

| S.NO | QUESTIONS | MARKS | SKILLS/ COMPETENCIES |
|------|---|-------|-------------------------|
| 1 | Bihu is a popular folk dance associated with which state? (a) Assam. (b) Bengal (c) Rajasthan | 1 | Integrity |
| 2 | How many types of primary bihu festivals are there those are famous in Assam? (a) 4 (b) 8 (c) 3. | 1 | Integrity |
| 3 | This dance is performed by _____. (a) Young men and women. (b) Peacock (c) None of These | 1 | Integrity |
| 4 | How many types of folk dance are there in Assam? (a) 8 (b) 7 (c) 5. | 1 | Integrity |
| 5 | What is folk culture of the native people of Assam? (a) Fishing (b) Harvesting (c) Weaving and pottery. | 1 | Integrity |
| 6 | _____ is a folk dance in Assam which is performed by the Bodos. (a) Hafiza (b) Rauf dance (c) Bagurumbra. | 1 | Integrity |

| | | | |
|----|--|---|-----------|
| 7 | <p>Which god is worshiped after the folk dance in Assam which is performed by bodos?</p> <p>(a) Durga (b) VeerTeja (c) Bathow.</p> | 1 | Integrity |
| 8 | <p>Which dance is known to have developed by NarahariBurhaBhakat?</p> <p>(a) BhortalNritya. (b) Jago Nritya (c) Dandiya Raas</p> | 1 | Integrity |
| 9 | <p>BhortalNritya is done in a group of how many people?</p> <p>(a) Four or seven. (b) Five or seven (c) Six or seven</p> | 1 | Integrity |
| 10 | <p>This picture is of which type of dance of Assam?</p>  <p>(a) Bhortal dance. (b) Chhau (c) kathak</p> | 1 | Integrity |



ARMY PUBLIC SCHOOL GWALIOR

CLASS -VII

ACADEMIC SESSION 2021-22

WORKSHEET (SELF –ASSESSMENT)




Subject: Library

Assignment No.:8

Allotment Date: 15 November 2021

| S.NO | QUESTIONS | MARKS | SKILLS/ COMPETENCIES |
|-------------|--|--------------|---------------------------------|
| 1 | How did Vikram Batra display leadership qualities during the capture of point 5140 ? | 01 | Interpretation |
| 2 | How did Vikram Batra attain martyrdom? | 01 | Classification |
| 3 | Why has Dhoni been successful as a Captain? | 01 | Observation |
| 4 | What is Dhoni's greatest quality? | 01 | Analysis |
| 5 | Why did no officer want to be posted to Tihar jail? | 01 | Analysis |
| 6 | What happened in Tihar jail after kiran bedi took charge of it? | 01 | Analysis |
| 7. | Who in your school or class can be thought of as a leader? | 01 | Analysis |
| 8. | What do we learn from these leaders? | 01 | Responsibility |
| 9. | Write down five qualities of a good leader? | 01 | Responsibility |
| 10. | If you are made a prefect or a class monitor, how would you display leadership? | 01 | Self- Awareness |



ARMY PUBLIC SCHOOL GWALIOR

CLASS -VII

ACADEMIC SESSION 2021-22

WORKSHEET (SELF –ASSESSMENT)



Subject: Discipline

Assignment No.:8

Allotment Date: 15 November 2021

| S. No | Question | Marks | Nature |
|-------|--|-------|---------------------------|
| 1. | Fill in the blanks- 1. Two friends were walking in a _____ . 2. They heard some _____ bustling in the nearby bushes. 3. Suddenly a big black _____ came out of bushes. 4. The first friend was a good _____ he climbed on a tree very fast. 5. They decided not to come again in the _____ alone like this. 6. Yet they feel _____ of each other. | 06 | Knowledge & Understanding |
| 2. | Choose the correct option- i. We all are different. ii. We all are same iii. We all are similar iv. We all are good friends | 01 | Thinking Skills |
| 3. | Tick the correct answer- i. Friendship also means accepting our friends as they are ii. We all should have different friends iii. We all must make many friends | 01 | Thinking Skills |
| 4. | Complete the following lines- i. Hellen Keller could not see and hear but she completed her _____ with the support of her teacher and become a _____. | 02 | Knowing and understanding |

| | | | |
|--|---|--|--|
| | <p>ii. As a child and student Albert Einstein suffered from_____ . No one could ever believe that his</p> <p>iii. curious mind and scientific temperament would later give this_____ .</p> | | |
|--|---|--|--|