

**ARMY PUBLIC SCHOOL GWALIOR**  
**CLASS – IV**  
**ACADEMIC SESSION 2021-22**  
**WORKSHEET (SELF –ASSESSMENT)**



**Subject: English**

**Assignment No. : 8**

**Allotment Date: 15 November 2021**

S. NO	QUESTIONS	MARKS	SKILLS/COMPETENCIES
1	What is the cause of the tear in the ozone layer? What kind of gases are being produced? <hr/> <hr/> <hr/> <hr/> <hr/> <hr/>	2	Information
2	Complete the following sentences using words from the poem, "Pollution"  (i) _____! Wake up and _____ the responsibility.  (ii) If we don't stop cutting the _____, we shall not _____ with ease.	2	Understanding
3	Who is known as the Missile Man of India? List any two other scientists of India and their discoveries. <hr/> <hr/> <hr/> <hr/> <hr/> <hr/>	2	Interdisciplinary

4	<p>Give reasons why these scientists are famous with these names:</p> <p>(i) Shakuntala Devi, the Human Computer.</p> <hr/> <hr/> <p>(ii) Graham Bell, Father of Telephone</p> <hr/> <hr/>	2	<b>Analytical Skill</b>
5	<p>What are the various excuses that the cat gives to suit herself? List any two.</p> <hr/> <hr/> <hr/> <hr/> <hr/> <hr/>	2	<b>Critical Thinking and Problem Solving</b>
6	<p>What are three types of tenses? Give examples for each by writing a sentence for each one of them.</p> <hr/> <hr/> <hr/> <hr/> <hr/> <hr/> <hr/> <hr/>	3	<b>HOT</b>
7	<p>Write a short story on topic, "A family that lived on a boat".</p> <p>( word limit- 50 words)</p> <hr/> <hr/> <hr/>	3	<b>Communication skills</b>

<b>8.</b>	What are interjections? <hr/> Write any three sentences by using these interjections. Beware! _____ Hurray! _____ Alas! _____	<b>4</b>	<b>Evaluation</b>
-----------	--	----------	-------------------



**ARMY PUBLIC SCHOOL GWALIOR**  
**CLASS – IV**  
**ACADEMIC SESSION 2021-22**  
**WORKSHEET (SELF –ASSESSMENT)**



**Subject: Hindi**

**Assignment No. : 8**

**Allotment Date: 15 November 2021**

क्र .	प्रश्न	अंक	प्रश्न का प्रकार
1.	<p>सही प्रश्न के आगे (√) लगाओ :</p> <p>क. अल्फ्रान्सो कौन था?</p> <p>(i) किसान <input type="checkbox"/></p> <p>(ii) ज्योतिषी <input type="checkbox"/></p> <p>(iii) पंडित <input type="checkbox"/></p> <p>ख. नेहरु जी ने किस जेल में बगीचा लगाया ?</p> <p>(i) देहरादून जेल <input type="checkbox"/></p> <p>(ii) लखनऊ जेल <input type="checkbox"/></p> <p>(iii) अल्मोरा जेल <input type="checkbox"/></p> <p>ग. ग्लेन कनिंघम किस देश का नागरिक था ?</p> <p>(i) फ्रांस <input type="checkbox"/></p> <p>(ii) इंग्लैंड <input type="checkbox"/></p> <p>(iii) अमेरिका <input type="checkbox"/></p>	3	बोधदात्मक

2.	<p>निम्न शब्दों के अर्थ लिखो :</p> <p>(i) धावक - _____</p> <p>(ii) तिर्भीक - _____</p> <p>(iii) निहारना - _____</p>	3	ज्ञानात्मक
3.	<p>उचित विशेषण का उपयोग कर खाली स्थान भरें :</p> <p>(i) रास्ते में उसे.....हादसे से गुज़ारना पड़ा  </p> <p>(ii) उसके.....व्यवहार ने सबको प्रभावित किया  </p> <p>(iii) मौसम बहुत.....था  </p> <p>(iv) सब लोग कोई.....स्थान ढूँढने लगे  </p> <p>निम्नलिखित शब्दों के समानार्थी शब्द लिखो :</p> <p>(i) नफरत - _____</p>	4	रचनात्मक
4.	<p>(ii) आजादी - _____</p> <p>(iii) उपहार - _____</p> <p>(iv) सालाना - _____</p> <p>निम्नलिखित प्रश्नों के उत्तर दीजिये :</p> <p>(i) नेहरु जी किस के अनुयायी थे ?</p>	4	सूचनात्मक
5.	<p>_____</p> <p>_____</p> <p>(ii) ग्लेन कनिंघम ने समाज सेवा के क्षेत्र में क्या कार्य किया ?</p> <p>_____</p> <p>_____</p> <p>(iii) अल्फ़ान्सो को गाँव में क्यों रुकना पड़ा?</p> <p>_____</p> <p>_____</p>	3	विश्लेषणात्मक
	<p>वाक्यों में सही स्थान पर उचित विराम चिन्ह लगाओ :</p> <p>(i) अरे यहाँ मत बैठो</p> <p>(ii) वाणि बोली मेरी तबियत ठीक नहीं है</p>		

6	(iii) राम दिन रात मेहनत करता है	3	उच्चस्तरीयचिंतन
---	---------------------------------	---	-----------------



**ARMY PUBLIC SCHOOL GWALIOR**  
**CLASS - IV**  
**ACADEMIC SESSION 2021-22**  
**WORKSHEET (SELF –ASSESSMENT)**



**Subject: Mathematics**  
**Allotment Date: 15 November 2021**

**Assignment No: 8**

<u>S.NO</u>	<u>QUESTIONS</u>	<u>MARKS</u>	<u>SKILLS/ COMPETENCIES</u>
1	Fill in the blanks:  (i) 1 litre = _____ milliliters. (ii) 1 metre = _____ cm.	2x1=2	Understanding
2	Write 'True' or 'False':  (i) Distance between two cities is measured in kilometers. ( )  (ii) Estimate the cost of 1 L of milk is 50paise. ( )	2x1=2	HOTS
3	Tick the correct answer from the given options:  (i) 25 L 30 mL is equivalent to _____  (a) 25300 mL (b) 25003 mL (c) 25030 mL (d) 2530 mL  (ii) Length of a cricket bat is approximately.  (a) 1m (b) 20m (c) 5km (d) 50cm  (iii) Multiply: 14L 500 mL by 5 = _____  (a) 72 L 500 mL (b) 73 L 450 mL (c) 74 L 500 mL	5x1=5	Critical thinking

	<p>(d) 72 L 450 mL</p> <p>(iv) Divide: 18 L 180 mL by 9= _____</p> <p>(a) 6L 260 mL  (b) 2L 200 mL  (c) 2L 220 mL  (d) 7L 560 mL</p> <p>(v) If the cost of 1 litre of a cough syrup is Rs 480.40. Find the cost of 250 ml: _____</p> <p>(a) Rs 120.80  (b) Rs 120.10  (c) Rs 110.80  (d) Rs 120.30</p>		
<b>4</b>	<p><b>Solve the following questions: -</b></p> <p>(i) Add: 21 L 500mL and 15 L 300mL</p> <p>(ii) Subtract: 239m62cm from 458m 87cm</p> <p>(iii) Convert into centimetres: 618 m 38 cm</p> <p>(iv) Divide: 804 m 84 cm by 4</p> <p>(v) Multiply: 35 m 27 cm by 12</p>	<b>5x1=5</b>	Interdisciplinary
<b>5</b>	<p><b>Solve the following questions:</b></p> <p>(i) Rahim bought a 50-litre container of oil. He used 44 litres 300 ml of it. How much oil is left?</p> <p>(ii) Aayush drives 65 km 75 m in the morning and 18 km 960 m in the evening. How much does he drive altogether?</p> <p>(iii) It needs 87 m 50 cm cloth to stitch 25 dresses. How much cloth is needed for 1 dress?</p>	<b>2x3= 6</b>	Problem Solving





**ARMY PUBLIC SCHOOL GWALIOR  
CLASS – IV**



**ACADEMIC SESSION 2021-22  
WORKSHEET (SELF –ASSESSMENT)**


**Subject: EVS**

**Assignment No. : 8**

**Allotment Date: 15 November 2021**

<b>S. NO.</b>	<b>QUESTIONS</b>	<b>MARKS</b>	<b>SKILLS/COMPETENCIES</b>
<b>1</b>	<b>Fill in the blanks:</b> (i) .....is the capital of Punjab and Haryana. (ii) An .....is a book of maps. (iii) Burning garbage in the open creates .....pollution.	3x1=3	Information
<b>2</b>	<b>Write True or False:</b> (i) Vegetable peels are non-biodegradable wastes. ( ) (ii) Soil erosion can also cause land pollution. ( ) (iii) Farming is the main occupation of people in India. ( )	3x1=3	Understanding
<b>3</b>	<b>Choose the correct option:</b> (i) Which direction does the top of a map generally show? a) West b) East c) North (ii) What is the process of burning wastes in big furnaces called? a) Deforestation b) Incineration c) Immersion (iii) How many kinds of wastes are there? a) one b) two c) five	3x1=3	Interdisciplinary

4	<p><b>Define the terms:</b></p> <p>(i) Hygiene ----- ----- -----</p> <p>(ii) Key ----- ----- -----</p>	2x2=4	Analytical Skill
5	<p>How can we save our environment and natural resources by recycling?</p> <p>----- ----- ----- ----- ----- ----- ----- -----</p>	3x1=3	HOT
6	<p>Mention any 3 factors that causes air pollution?</p> <p>----- ----- ----- ----- -----</p>	2x1=2	Critical Thinking and Problem Solving
7	<p>Why do we need a map?</p> <p>----- ----- ----- ----- -----</p>	2x1=2	Evaluation



**ARMY PUBLIC SCHOOL GWALIOR  
CLASS – IV**



**ACADEMIC SESSION 2021-22  
WORKSHEET (SELF –ASSESSMENT)**

**Subject: Computer**

**Assignment No. : 8**

**Allotment Date: 15 November 2021**

S.NO	QUESTION	MARKS	SKILLS / COMPETENCIES
1.	<p><b>Write true and False</b></p> <p>(i) You cannot change the background of the desktop. <input type="checkbox"/></p> <p>(ii) A gadget is used to change the color of the desktop. <input type="checkbox"/></p> <p>(iii) The tile option displays the image in the center of the desktop. <input type="checkbox"/></p> <p>(iv) Desktop theme is used to change the color scheme of font size. <input type="checkbox"/></p>	4x1=4	Understanding
2.	<p><b>Choose the correct answer.</b></p> <p>(i) The background image that appears on your desktop</p> <p>a. Poster b. Wallpaper c. Painting</p> <p>(ii) An image that pops-up on the screen, when it is idle for sometime is.</p> <p>a. Desktop b. Screen c. Screensaver</p> <p>(iii) Background picture that can be positioned in.....ways.</p>	4x0.5=2	Analyzing

	<ul style="list-style-type: none"> <li>a. Four</li> <li>b. Five</li> <li>c. Six</li> </ul> <p>(iv) .....is not a part of default gadget.</p> <ul style="list-style-type: none"> <li>a. Clock</li> <li>b. CPU meter</li> <li>c. Game</li> </ul>		
<p><b>3.</b></p>	<p><b>Answer the following Questions.</b></p> <p>(i) What is screen saver?</p> <p>-----</p> <p>-----</p> <p>-----</p> <p>-----</p> <p>-----</p> <hr/> <p>(ii) Explain any two positions of the image on the screen.</p> <p>-----</p> <p>-----</p> <p>-----</p> <p>-----</p> <p>-----</p>	<p><b>2x2=4</b></p>	<p><b>Communication</b></p> <p><b>And</b></p> <p><b>Skill</b></p>



**ARMY PUBLIC SCHOOL GWALIOR**  
**CLASS -IV**  
**ACADEMIC SESSION 2021-22**  
**WORKSHEET (SELF –ASSESSMENT)**




**Subject: G.K**  
**Allotment Date: 15 November 2021**

**Assignment No. 8**

S. NO.	QUESTIONS	MARKS	SKILLS / COMPETENCIES
1.	<b>Fill in the blanks:</b> i. A _____ is a thick group of trees that form a more or less continuous layer of plants. ii. _____ is the single largest internal organ in the human body. iii. _____ is the author of the famous book The Boy in the Striped Pyjamas.	3x1=3 marks	Understanding, Information, interdisciplinary
2.	<b>State True / False:</b> i. Blue Poppy is the national flower of Pakistan. ( ) ii Neptune is the windiest planet of the solar system. ( ) iii Ratan Tata is the co- founder of Microsoft. ( )	3x1=3 marks	Information, Understanding, Analytical skills,
3.	<b>Tick the correct answer:</b> i. Which is the national flower of Australia? a) Golden wattle b) Iris c) Sunflower ii. Which Gothic horror story character is the author Bram Stoker well known for? a) John Boyne b) Bill Watterson c) Dracula	2x1=2 marks	Information, Understanding Interdisciplinary
4.	Who wears black belt in judoka jedi? ----- -----	1 marks	Information, Understanding

5.	Which food group give us more energy than carbohydrates? -----	1 marks	Information
----	---	---------	-------------







**ARMY PUBLIC SCHOOL GWALIOR**  
**CLASS -IV**  
**ACADEMIC SESSION 2021-22**  
**WORKSHEET (SELF –ASSESSMENT)**



**Subject: Art Education**  
**Allotment Date: 15 November 2021**


**Assignment No. 8**

S.NO	QUESTIONS	MARKS	SKILLS/ COMPETENCIES
1.	The area around, above or inside an object is called: a) Form b) Perspective c) Contrast d) Space	1	Creativity
2.	Identify the still life:  a)   b) 	1	Creativity

	<p>c) </p> <p>d) </p>		
3.	<p>A three-dimensional object is called:</p> <ul style="list-style-type: none"> <li>a) a square</li> <li>b) a mould</li> <li>c) a form</li> <li>d) a circle</li> </ul>	1	Creativity
4.	<p>The artist adds shading to make an object look _____.</p> <ul style="list-style-type: none"> <li>a) 3-D</li> <li>b) Lighter</li> <li>c) Brighter</li> <li>d) Heavier</li> </ul>	1	Creativity
5.	<p>What is the positive space in an artwork?</p> <ul style="list-style-type: none"> <li>a) the area behind an object</li> <li>b) the area taken up by the object</li> <li>c) the area in front of an object</li> <li>d) the area down by the object</li> </ul>	1	Creativity



6.	Which of these is a three-dimensional object? a) A drawing of a house b) The picture in a photograph c) The letters in a book d) A house	1	Creativity
7.	2D object such as a triangle has how many dimensions? a) 1 b) 2 c) 3 d) 4	1	Creativity
8.	The closer an object is the _____ it is. a) Larger b) Cooler c) Smaller d) Higher	1	Creativity
9.	The lightness and darkness of a colour. a) Tint b) Shade c) Intensity d) Value	1	Creativity
10.	The lines that describe the outer edges and surface edges of objects and figures is called _____. a) visual lines b) outlines c) contour lines d) horizon lines	1	Creativity



**ARMY PUBLIC SCHOOL GWALIOR**  
**CLASS -IV**  
**ACADEMIC SESSION 2021-22**  
**WORKSHEET (SELF- ASSESSMENT)**



**Subject: Work Education**  
**Allotment Date: 15 November 2021**

**Assignment No. : 8**

<b>S.N O</b>	<b>QUESTIONS</b>	<b>MARKS</b>	<b>SKILLS/ COMPETENCIES</b>
1.	Blue pottery art is- a) Ceramic craft b) Needle craft c) Textile craft d) None	1	<b>Creativity</b>
2.	Origami is- a) Paper craft b) Textile craft c) Flower craft d) None	1	<b>Creativity</b>
3.	What is the Meaning of Paper Mache? a) chewed or crushed paper b) Coloured paper c) Sheets d) Stencils	1	<b>Creativity</b>
4.	Tie and dye is- a) Textile Craft b) Fibre craft c) Needle craft d) None	1	<b>Creativity</b>
5.	Wooden rose wood scoop' is a craft under which category-	1	<b>Creativity</b>

	<ul style="list-style-type: none"> <li>a) House ware</li> <li>b) Leather work</li> <li>c) Fashion</li> <li>d) None</li> </ul>		
<b>6.</b>	<p>Fashion is the self expression of-</p> <ul style="list-style-type: none"> <li>a)Clothing</li> <li>b) Features</li> <li>c) Hairstyle</li> <li>d) All</li> </ul>	<b>1</b>	<b>Creativity</b>
<b>7.</b>	<p>A trend or look that is spread across a population at a specific time and place is-</p> <ul style="list-style-type: none"> <li>a) Fashion</li> <li>b) Fashion trend</li> <li>c) Adorning</li> <li>d) None</li> </ul>	<b>1</b>	<b>Creativity</b>
<b>8.</b>	<p>Clay modelling is a craft which comes under-</p> <ul style="list-style-type: none"> <li>a) House ware</li> <li>b) Fashion</li> <li>c) Ceramics</li> <li>d) All</li> </ul>	<b>1</b>	<b>Creativity</b>
<b>9.</b>	<p>The example of ceramic is-</p> <ul style="list-style-type: none"> <li>a) Earthenware</li> <li>b) Bricks</li> <li>c) Porcelain</li> <li>d) All</li> </ul>	<b>1</b>	<b>Creativity</b>
<b>10.</b>	<p>Studio pottery involves-</p> <ul style="list-style-type: none"> <li>a) Tableware</li> <li>b) Cookware</li> <li>c) Sculpture</li> <li>d) All</li> </ul>	<b>1</b>	<b>Creativity</b>



# ARMY PUBLIC SCHOOL GWALIOR

## CLASS- IV

### ACADEMIC SESSION 2021-22

#### WORKSHEET (SELF- ASSESSMENT)




**Subject: Music (instrument)**

**Assignment No: 8**

**Allotment Date: 15 November 2021**

S. No	Questions	Marks	Skills/ Competencies
1.	Which instrument is Dadra Taal played? I. Tabla II. Guitar III. Sitar	1	Informative
2.	Dadra Taal is played on which instrument other than Tabla? I. Dholak II. Sitar III. Flute	1	Informative
3.	Which is the western instrument on which Dadra Taal is played? I. Drums II. flute III. violin	1	Informative
4.	Dadra Taal is played with which type of singing? I. Gajal II. Western music III. None them	1	Informative
5.	Apart from Dadra Taal Geet, Ghazal, which part of singing is there? I. Classical music II. Instrumental music III. None of them	1	Informative
6.	Apart from classical music, Dadra Taal is played with? I. Thumari II. Tappa III. None of the above	1	Informative
7.	Dadra Taal is played on what other than Dholak, Drums, Tabla, Congo? I. Dhol II. Sarod III. Flute	1	Informative

8.	Who is the famous sarod player? I. Ustad zakir hussain II. Ustad amjad ali khan III. Pandit Ravi Shankar	1	Informative
9.	Flute instrument is played with? I. Mouth II. Hand III. none of them	1	Informative
10.	Which instrument does pandit Ravi Shankar play? I. Sitar II. Sarod III. Guitar	1	Informative



**ARMY PUBLIC SCHOOL GWALIOR**  
**CLASS- IV**



**ACADEMIC SESSION 2021-22**  
**WORKSHEET (SELF- ASSESSMENT)**

**Subject: Music (Dance)**

**Assignment No: 8**

**Allotment Date: 15 November 2021**

S.NO	Questions	Marks	Skills
1.	Classical art forms are known to be what? i. Great ii. Normal iii. None of the above	1	Informative
2.	Classical art forms are complete in..... i. Environment ii. Surrounding iii. None of the above	1	Informative
3.	What does environment connect of the performer? i. Inner-self ii. Feelings iii. None of the above	1	Informative
4.	What does environment lead towards? i. Spirituality ii. Blessings iii. faith	1	Informative
5.	What does these dance form teach? i. Value of human life ii. Value of air iii. None of the above 0	1	Informative
6.	In Bharatanatyam dance nature is represented by_____ i. Numbers ii. Alphabets iii. Dance	1	Informative
7.	In varnam, javali, padams importance of____is described. i. Environment ii. God iii. None of the above	1	Informative
8.	How many dances forms are are related to environment? i. 2 ii. 3 iii. 4	1	Informative

9.	Chaliyekunjan tells us about beauty of____ i. Nature ii. God iii. None of the above	1	Informative
10.	What does Madookashabdam tells you about? i. Animals and flowers ii. Humans iii. Insects	1	Informative



**ARMY PUBLIC SCHOOL GWALIOR**  
**CLASS -IV**  
**ACADEMIC SESSION 2021-22**  
**WORKSHEET (SELF- ASSESSMENT)**



**Subject: Library**  
**Allotment Date: 15 November 2021**

**Assignment No. : 8**

S.NO	QUESTIONS	MARKS	SKILLS/ COMPETENCIES
	<b>Answer the following questions on the basis of the story ' God loves us' given in the notes.</b>		
1	Why does god love us all ? ..... ..... .....	01	Comprehension
2	What does god give to those who love his creatures ? ..... ..... .....	01	Analysis
3	What kind of a person was Abu bin Adam ? ..... ..... .....	01	Comprehension
4	What did Abu see in his his room at midnight ? ..... ..... .....	01	Comprehension
5	What was the angel doing ? ..... ..... .....	01	Understanding



	<b>FILL IN THE BLANKS</b>		
6	God loves all his .....	01	Comprehension
7	All are .....in this eyes	01	Analysis
8	One night Abu was ..... in his room.	01	Analysis
9	Abu saw a dazzling .....in one .....	01	Comprehension
10	Abu's name was on the .....of the list	01	Understanding



**ARMY PUBLIC SCHOOL GWALIOR**  
**CLASS- IV**  
**ACADEMIC SESSION 2021-22**  
**WORKSHEET (SELF- ASSESSMENT)**



**Subject: Health and Physical Education**

**Assignment No: 8**

**Allotment Date: 15 November 2021**

S. No	Questions	Marks	Skill/Competencies
1	<b>Fill in the blanks.</b> Weight Loss is the sign of..... a) Malnutrition b) Obesity c) Both A and B d) None of the above	3x1=3	Understanding
2	High blood pressure (hypertension) is the effect of ..... a) Malnutrition b) Obesity c) Both A and B d) None of the above		Understanding
3	Loss of vision cause by the deficiency of.....  a) Vitamin A b) Vitamin C c) Iodine d) Vitamin K		Informative
	<b>True and False.</b>	3x1=3	
4	Less Active or Less Playful is a sign of obesity. (      )		Understanding
5	Diabetes is the effect of obesity. (      )		Understanding
6	Anemia is cause due to the lack of iron. (      )		Informative
	<b>MCQs</b>	4x1=4	

7	<p>What disease occur due to a lack of vitamin C?</p> <p>a) Scurvy  b) Ricket  c) Goiter  <b>d) Beriberi</b></p>		Understanding
8	<p>Which deficiency cause obesity?</p> <p>a) Iron  b) Calcium  c) Vitamin B12  <b>d) All of the above</b></p>		Understanding
9	<p>What is the effect of obesity?</p> <p>a) High LDL cholesterol  b) Low HDL cholesterol  c) Type 2 diabetes  <b>d) All of the above</b></p>		Understanding
10	<p>Bone and tooth decay is caused due to the lack of what?</p> <p>a) Calcium  b) Vitamin B1  c) Vitamin K  <b>d) Iodine</b></p>		Informative



**ARMY PUBLIC SCHOOL GWALIOR**  
**CLASS -IV**  
**ACADEMIC SESSION 2021-22**  
**WORKSHEET (SELF- ASSESSMENT)**



**Subject: Discipline**  
**Allotment Date: 15 November 2021**

**Assignment No. : 8**

<b>S. No</b>	<b>Questions</b>	<b>Marks</b>	<b>Skills /Competencies</b>
1.	<p><b>Fill in the blanks-</b></p> <p>(i) A friend in need is a friend _____.(indeed/ alldeed)</p> <p>(ii) A friend will always ____ and support his friends.(help/hate)</p> <p>(iii) Once there were ____ friends.(two/four)</p> <p>(iv) The squirrel and _____.(puppy/cat)</p> <p>(v) One day it started raining _____. (heavily/ very hard)</p> <p>(vi) The puppy came out for his _____.(rescue/save)</p>	06	Knowledge & Understanding
2.	<p><b>Choose the correct option-</b></p> <p>Antics means-</p> <p>(i) Old</p> <p>(ii) Funny, silly or strange</p> <p>(iii) Similar</p> <p>(iv) Famous</p>	01	Thinking Skills
3.	<p><b>Tick the correct answer-</b></p> <p>(i) Friendship means helping our friends in need.</p> <p>(ii) We all should have different friends</p> <p>(iii) We all must make many friends</p>	01	Thinking Skills
4.	<p><b>Complete the following lines-</b></p> <ul style="list-style-type: none"><li>Example 1. But the rock star,</li></ul>	02	Knowing and understanding

whose stage antics used to include  
\_\_\_\_\_ guitars, is older and wiser now.

- **Example 2.**

The crowds were once again entertained by the  
number-one tennis \_\_\_\_\_ antics on and off  
the court.