



ARMY PUBLIC SCHOOL GWALIOR

CLASS -III

ACADEMIC SESSION 2021-22

WORKSHEET (SELF –ASSESSMENT)



Subject: English

Assignment No.:8

Allotment Date: 15 November 2021

S NO	QUESTIONS	MARKS	NATURE
1.	Underline the correct options- i. I don't/doesn't like cakes. ii. You didn't/don't come to school yesterday.	2X1=2	Information
2.	Fill in the blanks by choosing the correct option from the brackets given below – (i) Please putparcels over.....(there/their) (ii) Most peoplewith their hands.(right/write) (iii) Have you heard the of the dog with no?(tail / tale)	3X1=3	Understanding
3.	Write the following verbs by adding — ing to them : (i) read - (ii) dance - (iii) say -	3X1=3	Interdisciplinary

4	<p>Use an apostrophe with – ‘s to show possession :</p> <p>i) Rohan - book</p> <p>ii) Aamir Khan - films</p> <p>iii) Cow - milk</p>	3X1=3	Analytical Skill
---	---	-------	------------------

5.	<p>Write down the meanings of the following words:</p> <p>(i) tiptoe-</p> <p>(ii) links-</p>	2X1=2	Critical Thinking and Problem Solving
6.	<p>Choose the correct options to answer the following questions:</p> <p>i) When was Mihir Sen born ?</p> <p>a) 23 December 1642 b) 18 October 1978</p> <p>c) 16 November 1930 d) 12 February 1876</p> <p>ii) Who is the poet of the poem ‘ Mother Moon ‘?</p> <p>a) Robert Frost</p> <p>b) Emily Dickinson</p> <p>c) Amelia Josephine Burr</p> <p>d) John Keats</p>	2X1=2	2X1=2 HOT
7	<p>Change the following sentences into present continuous tense:</p> <p>(i) He drinks mango shake</p> <p>(ii) Our teacher teaches us nicely</p>	2X1=2	Evaluation

8.	<p>Answer the following questions:</p> <p>(i) What was Sen's profession and where did he practice it?</p> <p>.....</p> <p>(ii) How did Mihir sen set a world record?</p> <p>.....</p> <p>(iii) Who are the children in the sky named 'Mother Moon'?</p> <p>.....</p>	3X1= 3	Communication
----	--	-----------	---------------

	<hr/> ख पास <hr/>		
प्र.6	निम्नलिखित शब्दों के अर्थ लिखो:- क. आज्ञाकारी ख. परिश्रमी ग. पर्यटक घ. दर्शनीय	4	विश्लेषणात्मक
प्र.7	निम्नलिखित प्रश्नों का उत्तर दो:- क जयपुर के विशेष व्यंजन कौनसे है ? <hr/> ख अंत में साँप ने क्या फैसला लिया और क्यों ? <hr/> <hr/>	2	भाषायीकौशल



ARMY PUBLIC SCHOOL GWALIOR

CLASS -III

ACADEMIC SESSION 2021-22

WORKSHEET (SELF -ASSESSMENT)



Subject: Mathematics

Assignment No.:8

Allotment Date: 15 November 2021

S.N	QUESTIONS	MARKS	NATURE
1.	Multiply- (i) ₹4.70x8 (ii) ₹8.90x4 	2X1=2	Information
2.	Add- L ML 7 308 + 4 200 ----- Add- L ML 7 937 +4 100 -----	2X1=2	Understanding

<p>3.</p>	<p>Convert the following rupees into paise-</p> <p>(i) ₹80</p> <p>.....</p> <p>.....</p> <p>(ii) ₹70.70</p> <p>.....</p> <p>.....</p>	<p>1x2=2</p>	<p>Interdisciplinary</p>
<p>4.</p>	<p>Convert-</p> <p>(i) 7 hours into minutes</p> <p>.....</p> <p>.....</p> <p>(ii) 4 years into days</p> <p>.....</p> <p>.....</p>	<p>3X1=3</p>	<p>Analytical Skill</p>
<p>5.</p>	<p>Subtract-</p> <p>(i) ₹68.45 from 80.10</p> <p>.....</p> <p>.....</p> <p>.....</p> <p>(ii) ₹55 P from 4.00</p> <p>.....</p> <p>.....</p> <p>.....</p>	<p>2X1=2</p>	<p>Critical Thinking and Problem Solving</p>
<p>6.</p>	<p>Complete the sentences given below-</p> <p>(i) There are days in a year.</p> <p>(ii) There areseconds in one hour.</p>	<p>1x2=2</p>	<p>HOT</p>

7.	Divide and fill in the blanks- (i) ₹42 ÷ 4 = (ii) ₹90.50 ÷ 8 = (iii) 85P ÷ 5 = (iv) ₹90.00 ÷ 7 =	4X1=4	Evaluation
8.	Word Problems- (i) Ram had a 50-rupee note with him. He spent ₹15.75 on dinner. How much money has he now? (ii) Write three events or activities which take more than one hour to complete. (iii) Ramesh bought a toy for ₹10.25 and a pair of shoes for ₹95.25. How much money did he spend?	3x1=3	Communication



ARMY PUBLIC SCHOOL GWALIOR

CLASS -III

ACADEMIC SESSION 2021-22

WORKSHEET (SELF –ASSESSMENT)



Subject: EVS


Assignment No.:8

Allotment Date: 15 November 2021

S.N	QUESTIONS	MARKS	NATURE
1.	Write True or False against the following statements: i) We travel long distances on foot. ----- ii) Horse and donkeys were used for carrying loads _____.	2X1=2	Information
2.	Answer the following- Give any three reasons why we need to travel. _____ _____ _____.	1x3=3	Understanding
3.	Differentiate between individual communication and mass communication. Give examples. _____ _____.	1x2=2	Interdisciplinary

4.	<p>Match the abbreviations to their full forms:</p> <p>i) STD Public Call Office ii) E- mail Subscriber Trunk Dialing iii) PCO Electronic mail</p>	3X1=3	Analytical Skill
5.	<p>Choose the correct option:</p> <p>(i) To watch a live match, we use a _____ . a) radio b) newspaper c) television</p> <p>(ii) The place where ships load and unload is called a _____. a) airport b) port c) station</p>	2X1=2	Critical Thinking and Problem Solving
6.	<p>Name the three-ancient means of communication.</p> <p>_____</p> <p>_____</p> <p>_____</p>	1x2=2	HOT
7.	<p>Answer the following questions:</p> <p>(i) Who invented radio and television? _____.</p> <p>(ii) Why did early man move from place to place? _____.</p> <p>(iii) How are large quantities of goods transported to other countries? _____.</p>	3X1=3	Evaluation

8.	Answer the following questions: (i) Why did early man move from place to place? (ii) What do you mean by Internet? (iii) Name the different means of transport man uses for travelling	3x1=3	Communication
----	---	-------	---------------



ARMY PUBLIC SCHOOL GWALIOR
CLASS -III



ACADEMIC SESSION 2021-22
WORKSHEET (SELF –ASSESSMENT)

Subject: Computer

Assignment No.:8

Allotment Date: 15 November 2021

S.N	QUESTIONS	MARKS	NATURE
1.	<p>Match the following:</p> <p>1. WordPad a. contains buttons like Bold and Italic</p> <p>2. Home tab b. program user to enter text</p> <p>3. Ctrl+O c.. opens a saved documents</p> <p>4. Ctrl+S d.. saves a documents</p>	4x1=4	Thinking and Understanding
2.	<p>Choose the correct answer.</p> <p>(i) There aretabs in WordPad.</p> <p>a) One</p> <p>b) Two <input type="checkbox"/></p> <p>c) Three <input type="checkbox"/></p> <p>(ii) We can double click to select a</p> <p>a) Paragraph <input type="checkbox"/></p> <p>b) Word <input type="checkbox"/></p>	2X1=2	HOT

c) Line



3.

Answer the following questions.

(i) What is insertion point?


(ii) Where is title bar located and what does it shows?

(iii) How do we enter text ?

(iv) Define WordPad ?

4X1=4

COMMUNICATION
SKILLS



ARMY PUBLIC SCHOOL GWALIOR
CLASS -III



ACADEMIC SESSION 2021-22
WORKSHEET (SELF –ASSESSMENT)

Subject: G.K

Assignment No.:8

Allotment Date: 15 November 2021

SNO.	QUESTIONS	MARKS	NATURE
1.	<p>Unscramble the following words-</p> <p>1. ALMSHI -</p> <p>2. DAAHARAHSML -</p> <p>3. RHAIB -</p> <p>4. SHILAMSYAA -</p>	4X1=4	Understanding
2.	<p>True or False: -</p> <p>1. Neil Armstrong was the first human to walk on the Moon in year 1969.</p> <p>.....</p> <p>2. The full form of BTW is be the world.</p> <p>.....</p>	3x1=3	Analytical Skill

3. The Jim Corbett National Park is India's first national

park.

.....

Match the following pictures with their names: -

3.

3x1=3

1.



- chimney

2.



- toaster

3.



- Amitabh Bachchan



ARMY PUBLIC SCHOOL GWALIOR
CLASS -III



ACADEMIC SESSION 2021-22
WORKSHEET (SELF –ASSESSMENT)

Subject: Work Education


Assignment No.:8

Allotment Date: 15 November 2021

S.NO	QUESTIONS	MARKS	SKILLS/COMPETENCIES
1.	Blue pottery art is- a) Ceramic craft b) Needle craft c) Textile craft a. d) None	1	Creativity
2.	Origami is- a) Paper craft b) Textile craft c) Flower craft d) None	1	Creativity
3.	What is the Meaning of Paper Mache? a) chewed or crushed paper b) Coloured paper c) Sheets d) Stencils A.	1	Creativity
4.	Tie and dye is-	1	Creativity

	<p>a) Textile Craft</p> <p>b) Fibre craft</p> <p>c) Needle craft</p> <p>d) None</p>		
5.	<p>Wooden rose wood scoop' is a craft under which category-</p> <p>a) House ware</p> <p>b) Leather work</p> <p>c) Fashion</p> <p>d) None</p>	1	Creativity
6.	<p>A.</p> <p>. Fashion is the self expression of-</p> <p>a)Clothing</p> <p>b) Features</p> <p>c) Hairstyle</p> <p>d) All</p>	1	Creativity
7.	<p>A trend or look that is spread across a population at a specific time and place is-</p> <p>a) Fashion</p> <p>b) Fashion trend</p> <p>c) Adorning</p>	1	Creativity

	1. d) None		
8.	Clay modelling is a craft which comes under- a) House ware b) Fashion c) Ceramics A. d) All	1	Creativity
9.	The example of ceramic is- a) Earthenware b) Bricks c) Porcelain d) All	1	Creativity
10.	Studio pottery involves- a) Tableware b) Cookware c) Sculpture a. d) All	1	Creativity



ARMY PUBLIC SCHOOL GWALIOR
CLASS -III







ACADEMIC SESSION 2021-22
WORKSHEET (SELF -ASSESSMENT)

Subject: Art Education

Assignment No.:8

Allotment Date: 15 November 2021

S.NO	QUESTIONS	MARKS	SKILLS/COMPETENCIE S
1.	The area around, above or inside an object is called: A. Form B. Perspective C. Contrast D. Space	1	Creativity
2.	Identify the still life: A.  B. 	1	Creativity

	<p>C. </p> <p>D. </p>		
3.	<p>A three-dimensional object is called:</p> <p>A. a square</p> <p>B. a mould</p> <p>C. a form</p> <p>D. a circle</p>	1	Creativity
4.	<p>The artist adds shading to make an object look _____.</p> <p>A. 3-D</p> <p>B. Lighter</p> <p>C. Brighter</p> <p>D. Heavier</p>	1	Creativity
5.	<p>What is the positive space in an artwork?</p> <p>A. the area behind an object</p> <p>B. the area taken up by the object</p> <p>C. the area in front of an object</p> <p>D. the area down by the object</p>	1	Creativity
6.	<p>Which of these is a three-dimensional object?</p> <p>A. A drawing of a house</p> <p>B. The picture in a photograph</p> <p>C. The letters in a book</p> <p>D. A house</p>	1	Creativity
7.	<p>2D object such as a triangle has how many dimensions?</p> <p>A. 1</p> <p>B. 2</p> <p>C. 3</p>	1	Creativity

	D .4		
8.	The closer an object is the_____ it is. A. Larger B. Cooler C. Smaller D. Higher	1	Creativity
9.	The lightness and darkness of a colour. A. Tint B. Shade C. Intensity D. Value	1	Creativity
10.	The lines that describe the outer edges and surface edges of objects and figures is called _____. A. visual lines B. outlines C. contour lines D. horizon lines	1	Creativity



ARMY PUBLIC SCHOOL GWALIOR

CLASS -III



ACADEMIC SESSION 2021-22

WORKSHEET (SELF –ASSESSMENT)


Subject: Health and Physical Education

Assignment No.:8

Allotment Date: 15 November 2021

S. No	Questions	Marks	Skills/ Competencies
1	Fill in the blanks _____ are the way that we get fuel. a) Food and nutrients b) Balance diet c) Seven balance diet d) None of these	1	Informative
2	A balanced diet is a diet that contains _____. a) All kinds of foods b) Single kind of foods c) Both A and B d) None of the above	1	Understanding
3	_____ are the essential factors for a balance diet. a) Carbs b) Protein c) Fats d) All of the above	1	Analytic skill
4	True and false Milk does not contain Proteins, Fats, Calcium.	1	Informative
5	Maize is not good for health.	1	Informative
6	Proteins, Fats, Calcium are very essential.	1	Understanding
7	MCQs	1	Understanding

	<p>Balance diet is required to fulfill the need of.</p> <ul style="list-style-type: none"> a) Calories b) Proteins c) Minerals d) All of the above 		
8	<p>Fibre are present in which food item?</p> <ul style="list-style-type: none"> a) Maize b) Milk c) Wheat d) Fruits 	1	Informative
9	<p>What are the important component present in water?</p> <ul style="list-style-type: none"> a) Nutrition b) Fats c) Proteins d) All of the above 	1	Informative
10	<p>What are the benefit of balance diet?</p> <ul style="list-style-type: none"> a) Fulfill the requirement of essential component b) Make us chubby c) Make us skinny d) None of the above 	1	Understanding



ARMY PUBLIC SCHOOL GWALIOR
CLASS -III



ACADEMIC SESSION 2021-22
WORKSHEET (SELF –ASSESSMENT)

Subject: Discipline

Assignment No.:8

Allotment Date: 15 November 2021

S. No	Question	Marks	Nature
1.	<p>Fill in the blanks-</p> <p>1.A friend in need is a friend _____.(indeed/ alldeed)</p> <p>2. A friend will always _____ and support his friends.(help/hate)</p> <p>3. Once there were _____ friends.(two/four)</p> <p>4. The squirrel and _____.(puppy/cat)</p> <p>5. One day it started raining _____. (heavily/ very hard)</p> <p>6. The puppy came out for his _____.(rescue/save)</p>	06	Knowledge & Understanding
2.	<p>Choose the correct option-</p> <p>Antics means-</p> <p>i. Old</p> <p>ii. Funny, silly or strange</p> <p>iii. Similar</p> <p>iv. Famous</p>	01	Thinking Skills
3.	<p>Tick the correct answer-</p> <p>i. Friendship means helping our friends in need.</p> <p>ii. We all should have different friends</p> <p>iii. We all must make many friends</p>	01	Thinking Skills

4.	<p>Complete the following lines-</p> <ul style="list-style-type: none">• Example 1. But the rock star, whose stage antics used to include _____ guitars, is older and wiser now.• Example 2. The crowds were once again entertained by the number-one tennis _____ antics on and off the court. <p>i.</p>	02	Knowing and understanding
----	--	----	---------------------------



ARMY PUBLIC SCHOOL GWALIOR

CLASS -III

ACADEMIC SESSION 2021-22

WORKSHEET (SELF –ASSESSMENT)



Subject: Music

Assignment No.:8

Allotment Date: 15 November 2021

S.NO.	Answer the following questions:	Marks	Skills
1.	Param padam means what? a. Lotus feet of krishna b. Lotus feet of Brahma c. None of the above	1	Informative
2.	What does padam means? a. Musical form b. Dance form c. None of the above	1	Informative
3.	Who is Nayak(Hero) in padam? a. Lord krishna b. Shiva c. None of the above	1	Informative
4.	Pallavi, anupallavi & one caranam are in what? a. Padam b. Shabdham c. Varnam	1	Informative
5.	What is included in movements of padam? a. Graceful b. Harsh c. None of the above	1	Informative
6.	Sometimes padam does not have what? a. Footwork b. Hand movements c. None of the above	1	Informative
7.	Who is sad in padam? a. Dassi b. Nayika c. None of the above	1	Informative
8.	Padams require slower moving steps, grace and expressions? a. True b. False	1	Informative

9.	Hand gestures are important in padam? a. True b. False	1	Informative
10.	Padam is important part of Bharatanatyam? a. True b. False	1	Informative



ARMY PUBLIC SCHOOL GWALIOR

CLASS -III

ACADEMIC SESSION 2021-22

WORKSHEET (SELF –ASSESSMENT)



Subject: Music (Dance)

Assignment No.:8

Allotment Date: 15 November 2021

S. No	Answer the following questions:	Marks	Skills
1.	Which instrument is Dadra Taal played? I. Tabla II. Guitar III. Sitar	1	Informative
2.	Dadra Taal is played on which instrument other than Tabla? I. Bholak II. Sitar III. Flute	1	Informative
3.	Which is the western instrument on which Dadra Taal is played? I. Drums II. flute III. violin	1	Informative
4.	Dadra Taal is played with which type of singing? I. Gajal II. Western music III. None them	1	Informative
5.	Apart from Dadra Taal Geet, Ghazal, which part of singing is there? I. Classical music II. Instrumental music III. None of them	1	Informative
6.	Apart from classical music, Dadra Taal is played with? I. Thumari II. Tappa III. None of the above	1	Informative
7.	Dadra Taal is played on what other than Dholak, Drums, Tabla, Congo? I. Dhol II. Sarod	1	Informative

	III. Flute		
8.	Who is the famous sarod player? I. Ustad zakir hussain II. Ustad amjad ali khan III. Pandit Ravi Shankar	1	Informative
9.	Flute instrument is played with? I. Mouth II. Hand III. none of them	1	Informative
10.	Which instrument does pandit Ravi Shankar play? I. Sitar II. Sarod III. Guitar	1	Informative



ARMY PUBLIC SCHOOL GWALIOR

CLASS -III

ACADEMIC SESSION 2021-22

WORKSHEET (SELF –ASSESSMENT)



Subject: Library

Assignment No.:8

Allotment Date: 15 November 2021

S.NO	QUESTIONS	MARKS	SKILLS/ COMPETENCIES
	Answer the following questions on the basis of the story 'TIT FOR TAT' given in the notes.		
1	Where was the sugar- cane field ?	01	Comprehension
2	How did the jackal cross the river?	01	Analysis
3	Why was the jackal soon satisfied ?	01	Understanding
4	Why could the camel not hide himself ?	01	Comprehension
5	Why was the jackal drowned ?	01	Understanding
6	How should we behave with others?	01	Analysis
	FILL IN THE BLANKS		
7	A camel and a jackal lived in a	01	Understanding

8	The camel was very.....	01	Analysis
9	The two were good	01	Comprehension
10	The jackal was	01	Analysis

