

ARMY PUBLIC SCHOOL GWALIOR
CLASS -I






ACADEMIC SESSION 2021-22
WORKSHEET (SELF –ASSESSMENT)

Subject: English

Assignment No.:8

Allotment Date: 15 November 2021

S.N	QUESTIONS	MARKS	SKILLS/COMPE TENCIES
1	<p>Fill in the blanks :</p> <p>1.Neha has sent Avni a _____.</p> <p>2.Neha’s birthday was on on _____.</p> <p>3. Avni had to dress up as a _____.</p> <p>4. Neha’s father had invited a _____.</p>	4X4=4	Information
2	<p>Answer the following questions in Yes or No .</p> <p>Q1. Was the caterpillar hiding under the table ? Ans. _____</p> <p>Q2. Was the caterpillar hiding under the bowl ? Ans. _____</p> <p>Q3. Was the caterpillar hiding under the window ? Ans. _____</p> <p>Q4. Did the caterpillar change into a butterfly ? Ans. _____</p>	4X1=4	Understanding

4	<p>Write word meaning.</p> <p>1. message _____</p> <p>2. confusing _____</p> <p>3. punctuation _____</p> <p>4. invitation _____</p>	4X1=4	Analytical Skill
5.	<p>Write the opposites for the following words-</p> <p>1. clean _____</p> <p>2. down _____</p>	2X1=2	Critical Thinking and Problem Solving
6.	<p>Answer the following questions :</p> <p>Q1. Who had sent birthday invitation to Avni ?</p> <p>_____</p> <p>Q2 . Who invited the clown?</p> <p>_____</p>	2X1=2	Evaluation
7.	<p>Write the correct action words for the following pictures.</p> <p> _____</p> <p> _____</p> <p> _____</p>	4X1=4	Communication Skills



shutterstock.com • 1046703559



ARMY PUBLIC SCHOOL GWALIOR

CLASS -I

ACADEMIC SESSION 2021-22

WORKSHEET (SELF –ASSESSMENT)

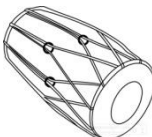





Subject: Hindi

Assignment No.:8

Allotment Date: 15 November 2021

संख्या	प्रश्न/उत्तर	अंक	प्रकृति
प्र.1	<p><u>सही शब्द चुनकर वाक्य की खाल जगह में लिखो –</u></p> <p>{ बंदर चंदन आरती जाखू संतरा }</p> <p>1. संतरा उठाकर चला गया । 2. पंडित जी ने मंथन को का टीका लगाया । 3. अंजली और मंथन मंदिर देखने गए । 4. अंजली ने गिरा दीया ।</p>	4x1=4	बोधदात्मक
प्र 2	<p>'अं' की मात्रा लगाकर सही शब्द बनाओ ।</p> <p>पंडित अगूर</p>	2x1=2	सूचनापरक
प्र-3	<p>नीचे दिए गए शब्दों के बहुवचन लिखो</p> <p>1. घोड़ा 2. आँख</p>	2x1=2	गहन सोच
प्र-3	<p>नीचे दिए गए प्रश्नों के उत्तर लिखो</p> <p>प्रश्न. पंडित जी मंदिर में क्या बजा रहे थे ? ----- -----</p> <p>प्रश्न. माता जी ने कचौड़ी कहाँ से मंगवाई ? ----- -----</p> <p>प्रश्न. पिचकारी किसने चलाई ? ----- -----</p>	4x 1=4	गहन सोच और समस्या समाधान

	<p>प्रश्न. छिपकर कौन बैठा था ?</p> <p>-----</p> <p>-----</p>		
प्र-4	<p>नीचे दिए गए चित्रों के नाम लिखो</p> <div style="display: flex; justify-content: space-around; align-items: flex-start;"> <div style="text-align: center;">  <p>-----</p> </div> <div style="text-align: center;">  <p>-----</p> </div> <div style="text-align: center;">  <p>-----</p> </div> <div style="text-align: center;">  <p>-----</p> </div> </div>	4x. 5=2	उच्चस्तरीय चिंतन
प्र-5	<p>नीचे दिए गए प्रश्नों के उत्तर लिखो</p> <p>प्रश्न. माताजी ने किस चीज के पकौड़े बनाए ?</p> <p>-----</p> <p>-----</p> <p>प्रश्न. छिपकर कौन बैठा था ?</p> <p>-----</p> <p>-----</p> <p>प्रश्न. अंजली और मंथन क्या देखकर डर गए ?</p> <p>-----</p> <p>-----</p> <p>प्रश्न. पिताजी का क्या शौक था ?</p> <p>-----</p> <p>-----</p>	4x1=4	विश्लेषणात्मक
प्र-6	<p>'अच्छी आदतें ' पर निबंध लिखो (चार पंक्तियाँ)</p> <p>-----</p> <p>-----</p> <p>-----</p> <p>-----</p>	4x. 5=2	भाषाई कौशल



ARMY PUBLIC SCHOOL GWALIOR
CLASS -I



ACADEMIC SESSION 2021-22
WORKSHEET (SELF –ASSESSMENT)

Subject: Mathematics

Assignment No.:8

Allotment Date: 15 November 2021

S. NO.	QUESTIONS	MARKS	NATURE
1	Arrange the following numbers in ascending order . (i) 45, 49, 68, 66, 55 = ____, ____, ____, ____, ____ (ii) 89, 95, 92, 98, 87 = ____, ____, ____, ____, ____ (iii) 55, 62, 68, 52, 60 = ____, ____, ____, ____, ____	3x1=3	Information
2	Split into tens and ones: (i) 67 = _____tens _____ones (ii) 89 = _____tens _____ones (iii) 62 = _____tens _____ones	3x1=3	Understanding
3	A) Kajal has 35 toffees. Rohit has 44 toffees. How many toffees do they have? Sol.	2x1=2	Interdisciplinary AnalyticalSkill

	<p>B) A box contains 68 chalks. 20 chalks are broken. How many chalks are not broken?</p> <p>Sol.</p>		
5	<p>Fill in the placeholders to complete the following (backward counting).</p> <p>(i) 50, 49, ____, ____, ____, 45, 44, 43, 42, 41.</p> <p>(ii) 68, ____, ____, ____, 64, 63, 62, 61.</p> <p>(iii) 89, 88, ____, ____, 85, 84, ____, 82, 81</p>	3X1=3	<p>Critical Thinking and Problem Solving</p>
6	<p>Write the following in expanded form.</p> <p>(i) 89 =</p> <p>(ii) 77 =</p> <p>(iii) 94 =</p>	3X1=3	HOT
7	<p>Write true or false for the following statements:</p> <p>(i) 96 is before 97. (_____)</p> <p>(ii) 73 is before 72. (_____)</p> <p>(iii) 85 is before 86. (_____)</p>	3x1=3	Evaluation

8	Write the number names of the: (i) 69 = _____ (ii) 87 = _____ (iii) 100 = _____	3x1=3	Communication Skills
----------	--	-------	----------------------



ARMY PUBLIC SCHOOL GWALIOR
CLASS -I



ACADEMIC SESSION 2021-22
WORKSHEET (SELF –ASSESSMENT)

Subject: EVS

Assignment No.:8

Allotment Date: 15 November 2021

S.N	QUESTIONS	MARKS	SKILLS/ COMPETENCIES
1.	<p>Tick (✓) the correct options :</p> <p>a 1.Amber light means</p> <p>a. STOP b. WAIT c. GO</p> <p>b 2.is a mammal.</p> <p>a. Alligator b. Shark c. Monkey</p>	2X1=2	Information
2	<p>a) Name two animals from whom we get milk.</p> <p>_____</p> <p>b) Name two plants you prefer to keep at home.</p> <p>_____</p>	2X1=2	HOT Analytical Skill Understanding
3	<p>Name these:-</p> <p>a) Biggest animal on land- _____</p> <p>b) Crawling animal- _____</p> <p>c) Our national bird- _____</p> <p>d) Our national animal- _____</p>	4X1=4	Critical thinking

4 Tick (✓) for the activity you should do and cross(x) for the activity we should not do:-

4X.5=2

Understanding



()



()



()



()

5	Answer the following : Q 1. Why should we plant more trees? Ans----- . Q2. What can happen if while walking on the road you don't hold your parents hand? Ans----- .	2X2=4	Communication Skills
6	Fill in the blanks:- 1. Plants give us _____ which we need to live. 2. _____ is there to manage traffic on the road. 3. Helpful things can turn unsafe within no time if we do not follow _____ rules. 4. The mammal is the _____.	4X1=4	Evaluation



ARMY PUBLIC SCHOOL GWALIOR
CLASS -I



ACADEMIC SESSION 2021-22
WORKSHEET (SELF –ASSESSMENT)


Subject: Computer

Assignment No.:8

Allotment Date: 15 November 2021

S.NO	QUESTION	MARKS	NATURE
1.	<p>Tick the correct answer.</p> <p>1. A..... is used to type into a computer.</p> <p>a. Mouse</p> <p>b. Printer</p> <p>c. Keyboard</p> <p>2. Alphabet keys are used to type.....</p> <p>a. Words</p> <p>b. Numbers</p> <p>c. Lines</p> <p>3.is the longest key on the keyboard.</p> <p>a. Enter</p> <p>b. Spacebar.</p> <p>c. Shift</p>	3x1=3	Understanding

<p>2.</p>	<p>Guess which key am I.</p> <p>1. I can type your name.</p> <table border="1" data-bbox="292 232 911 291"> <tr> <td>A</td> <td></td> <td>P</td> <td></td> <td>A</td> <td></td> <td></td> <td>T</td> </tr> </table> <p>2. I can move the cursor to the next line</p> <table border="1" data-bbox="292 427 681 486"> <tr> <td>E</td> <td></td> <td>T</td> <td></td> <td></td> </tr> </table> <p>3. I insert a blank space between the words.</p> <table border="1" data-bbox="292 633 906 692"> <tr> <td>S</td> <td></td> <td>A</td> <td></td> <td></td> <td>B</td> <td></td> <td>R</td> </tr> </table>	A		P		A			T	E		T			S		A			B		R	<p>3x1=3</p>	<p>Analyzing</p>
A		P		A			T																	
E		T																						
S		A			B		R																	
<p>3.</p>	<p>Write the number of these keys present on the keyboard .</p> <p>1. Enter key. <input data-bbox="711 927 895 983" type="text"/></p> <p>2. Alphabet keys <input data-bbox="711 1037 895 1093" type="text"/></p> <p>3. Function key <input data-bbox="711 1151 895 1207" type="text"/></p> <p>4. Number keys. <input data-bbox="711 1240 895 1296" type="text"/></p>	<p>4x1=4</p>	<p>Information</p>																					



ARMY PUBLIC SCHOOL GWALIOR

CLASS -I

ACADEMIC SESSION 2021-22

WORKSHEET (SELF –ASSESSMENT)



Subject: G.K

Assignment No.:8

Allotment Date: 15 November 2021

S. NO.	QUESTIONS	MARKS	NATURE
1.	<p>Tick the correct answer:</p> <p>1. What portion of the Earth's surface is covered with water?</p> <p>a)two-fourth b) three-fourth c) five-fourth</p> <p>2. Every year on Independence day, our Prime Minister hoists the national flag at _____</p> <p>a) Qutub Minar</p> <p>b) Gateway of India</p> <p>c) Red Fort</p>	2x1=2	Information
2.	<p>Write true or false for each of the following statement:</p> <p>1. Petronas Towers of Kuala Lumpur is in Malaysia. ()</p> <p>2. Guitar do not have strings. ()</p>	4x1=4	Understanding

3. In an orchestra, a number of instruments are played

together . ()

4. BurjKhalifa of Dubai is in UAE. ()

3.

Write the names of the following buildings :-








3x1=3


Interdisciplinary

<p>4.</p>	<p>Answer the following questions by reading clues:</p> <p>1. You are standing on a flat land which is between two hills or mountains.</p> <p>You are in a _____.</p> <p>2. You are at a place which is very hot and dry, and you can hardly see any plants around.</p> <p>You are in a _____.</p> <p>3. You are at a place where there are large number of trees, animals, and birds.</p> <p>You are in a _____.</p>	<p>3x1=3</p>	<p>Analytical Skill</p>
<p>5.</p>	<p>1. Write two sources of water.</p> <p>1. _____ 2. _____</p> <p>2 Write two names of musical instruments which you would like to play.</p> <p>1. _____ 2. _____</p>	<p>2x2=4</p>	<p>HOT</p>
<p>6.</p>	<p>Look at the signs and write what they say</p> <p>_____</p>  <p>-----</p>	<p>2x1=2</p>	<p>Critical Thinking and Problem Solving</p>



shutterstock.com · 362100779

7.	Complete the following words by using vowels. 1. DR _ W _ R 3. C H _ IR 2. S _ FA 4. FR _ DGE	2x1=2	Communication Skills
-----------	---	-------	----------------------



ARMY PUBLIC SCHOOL GWALIOR

CLASS -I

ACADEMIC SESSION 2021-22

WORKSHEET (SELF –ASSESSMENT)




Subject: Work Education

Assignment No.:8

Allotment Date: 15 November 2021

S.NO	QUESTIONS	MARKS	SKILLS/ COMPETENCIES
1	<p>A _____ is a natural or artificial feature of the solid surface of the Earth or other planetary body.</p> <p>(a) Landform (b) Landscape (c) Hill (d) Valley</p>	1	Creative Skills
2	<p>How many different kinds of landforms are there?</p> <p>(a) 3 (b) 2 (c) 5 (d) 8</p>		
3	<p>What is a place, which is higher than the nearby area and has a slope?</p> <p>(a) Hill (b) Valley (c) Water (d) land</p>		
4	<p>_____ is a place which is very hot and dry, it hardly has plants.</p> <p>(a) Land (b) Hill (c) Desert (d) Water</p>		
5	<p>What is the place where there are large numbers of trees,</p>		

	<p>animals and birds?</p> <p>(a) Forest (b) Desert (c) Water (d) Land</p>		
6	<p>A _____ is a raised flat piece of land.</p> <p>(a) Forest (b) Plateau (c) Water (d) Landscape</p>		
7	<p>A _____ is a flat land between two hills or mountains.</p> <p>(a) Land (b) Valley (c) Forest (d) Water</p>		
8	<p>Which of these is not the type of landforms?</p> <p>(a) Desert (b) Forest (c) Plateau (d) Water</p>		
9	<p>This picture is of what type of landform?</p>  <p>(a) Hill (b) Desert (c) Forest (d) Plateau</p>		
10	<p>Which of these is the picture of desert?</p>		



(a)



(b)



(c)



(d)



ARMY PUBLIC SCHOOL GWALIOR
CLASS -I








ACADEMIC SESSION 2021-22
WORKSHEET (SELF –ASSESSMENT)

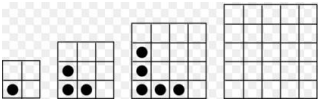

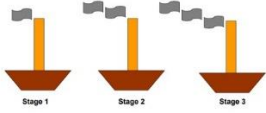
Subject: Art Education

Assignment No.:8

Allotment Date: 15 November 2021

S.NO	QUESTIONS	MARKS	SKILLS/COMPETENCIES
1.	<p>Principle of art which refers to the decoration of the surface of art with repeated units.</p> <p>a. Contrast b. Rhythm c. Movement d. Pattern</p>	1	Creativity
2.	<p>This artwork illustrates this Element of Art:</p>  <p>(i) Pattern (ii) Colours (iii) Perspective (iv) Variety</p>	1	Creativity
3.	<p>Colours and shapes that repeat in below image are called_____.</p>  <p>a. A pattern. b. A dash. c. A mood.</p>		Creativity

	d. Exotic.		
4.	<p>The pattern in this image below is made of?</p>  <p>a. Geometric forms b. Geometric shapes c. Organic shapes Organic forms</p>	1	Creativity
5.	<p>Is repetition regular or different patterns</p> <p>a. Regular. b. Different</p>	1	Creativity
6.	<p>The sequence of figures shows a pattern. If the pattern repeats, how many small squares will figure 5 have?</p>  <p>A. 12 small squares B. 8 small squares C. 9 small squares D. 10 small squares</p> <p>.</p>	1	Creativity
7.	<p>The sequence of figures shows a pattern. If the pattern repeats, how many bubbles will Stage 6 have?</p>  <p>a. 6 bubbles b. 4 bubbles c. 5 bubbles d. 7 bubbles</p>	1	Creativity

<p>8.</p>	<p>The sequence of figures shows a pattern. If the pattern repeats, how many small circles will figure 4 have?</p>  <p>A. 7 small circles B. 5 small circles C. 9 small circles D. 6 small circles</p>	<p>1</p>	<p>Creativity</p>
<p>9.</p>	<p>The sequence of 3 figures shows a pattern. If the pattern repeats, how many triangles will the figure 5 have?</p>  <p>(i) seven triangles (ii) six triangles (iii) four triangles (iv) five triangles</p>	<p>1</p>	<p>Creativity</p>
<p>10.</p>	<p>The sequence of figures shows a pattern. If the pattern repeats, how many smoke signs will Stage 4 have?</p>  <p>A. 3 smoke signs B. 4 smoke signs C. 5 smoke signs D. 6 smoke signs</p>	<p>1</p>	<p>Creativity</p>



ARMY PUBLIC SCHOOL GWALIOR

CLASS -I

ACADEMIC SESSION 2021-22

WORKSHEET (SELF –ASSESSMENT)




Subject: Health and Physical Education

Assignment No.:8

Allotment Date: 15 November 2021

S. No	Questions	Marks	Skill/ Competencies
	Fill in the blanks		
1	We should always know our _____ a) Address b) Mothers name c) Fathers name d) Name	1	Understanding
2	We should always cross the road from _____. a) Zebra crossing b) From any where c) Both A and B d) None of the above	1	Informative
3	Playing with _____ and _____ is not allowed. a) Fire and sharp b) Ball and bat c) Racquet and shuttle cock d) All of the above	1	Informative
	True/ False		
4	We should never clime a wall or a fence.	1	Informative
5	We should always talk to strangers.	1	Understanding
6	We should always walk on the pavement.	1	Understanding
	MCQ		
7	Which safety we should always promote? a) Fire	1	Informative

	<ul style="list-style-type: none"> b) Animal c) Human d) water 		
8	<p>If the vehicle is moving what thing we should never do?</p> <ul style="list-style-type: none"> a) Stick our head outside b) Stick our hand outside c) Both A and B d) None of the above 	1	Informative
9	<p>We should be aware from which hazards.</p> <ul style="list-style-type: none"> a) Electrical hazards b) Chemical hazards c) Ergonomic hazards d) Physical hazards 	1	Informative
10	<p>What thing we should always keep with us?</p> <ul style="list-style-type: none"> a) well-stocked first aid kit b) Amazing Toys c) Home address and phone number d) None of the above 	1	Understanding



ARMY PUBLIC SCHOOL GWALIOR

CLASS -I

ACADEMIC SESSION 2021-22

WORKSHEET (SELF –ASSESSMENT)



Subject: Discipline

Assignment No.:8

Allotment Date: 15 November 2021

S. No	Question	Marks	Nature
1.	<p>Fill in the blanks-</p> <ol style="list-style-type: none">Aman went for a _____ ride.(cycle/ bicycle)He ____ his bicycle in his colony around the park. (rides/ plays)He then ____ some girls of his school.(met/let)They all went in the _____ to play.(park/garden)While they were _____ they saw a puppy heard the sound of a puppy barking.(playing/dancing)They reached _____ him.(near/far)They saw the _____ puppy stuck in bushes.(little/small)The puppy was _____ for help.(crying/playing)Aman and his friends carefully _____ out the puppy.(took/picked)The puppy was _____ now.(happy/sad)	10	Knowledge & Understanding



ARMY PUBLIC SCHOOL GWALIOR

CLASS -I

ACADEMIC SESSION 2021-22

WORKSHEET (SELF -ASSESSMENT)



Subject: Music (Dance)

Assignment No.:8

Allotment Date: 15 November 2021

S.NO	Answer the following questions:	Marks	Skills
1.	How many types of navarasa are there? a. 9 b. 4 c. 3	1	Informative
2.	What is Nataraja? a. God of dance b. God of music c. none of the above	1	Informative
3.	Nine basic emotions of life is known as? a. Navarasa b. Nava c. Rasa	1	Informative
4.	What does emotion in dance mean? a. Rasa b. Shabdham c. None of the above	1	Informative
5.	Without Navarasa classical dance are? a. Complete b. Incomplete c. Important	1	Informative
6.	Getting ready Rasa is? a. Shringar b. Veera c. None of the above	1	Informative
7.	Laughing Rasa is? a. Hasya b. Veera c. None of the above	1	Informative
8.	Angry Rasa is known as? a. Raudra b. Veera c. None of the above	1	Informative
9.	Scary Rasa is known as? a. Bhayanaka b. Veera c. None of the above	1	Informative
10.	Peace Rasa is known as? a. Shantha b. Veera c. None of the above	1	Informative



ARMY PUBLIC SCHOOL GWALIOR

CLASS -I

ACADEMIC SESSION 2021-22

WORKSHEET (SELF –ASSESSMENT)




Subject: Music (Instrumental)

Assignment No.:8

Allotment Date: 15 November 2021

S.No	Answer the following questions:	Marks	Skills
a.	Which instrument is Dadra Taal played? I. Tabla II. Guitar III. Sitar	1	Informative
b.	Dadra Taal is played on which instrument other than Tabla? I. Bholak II. Sitar III. Flute	1	Informative
c.	Which is the western instrument on which Dadra Taal is played? I. Drums II. flute III. violin	1	Informative
d.	Dadra Taal is played with which type of singing? I. Gajal II. Western music III. None them	1	Informative
e.	Apart from Dadra Taal Geet, Ghazal, which part of singing is there? I. Classical music II. Instrumental music III. None of them	1	Informative
f.	Apart from classical music, Dadra Taal is played with? I. Thumari II. Tappa III. None of the above	1	Informative
g.	Dadra Taal is played on what other than Dholak, Drums, Tabla, Congo? I. Dhol II. Sarod III. Flute	1	Informative
h.	Who is the famous sarod player? I. Ustad zakir hussain II. Ustad amjad ali khan III. Pandit Ravi Shankar	1	Informative
i.	Flute instrument is played with? I. Mouth II. Hand III. none of them	1	Informative
j.	Which instrument does pandit Ravi Shankar play? I. Sitar II. Sarod III. Guitar	1	Informative



ARMY PUBLIC SCHOOL GWALIOR

CLASS -I

ACADEMIC SESSION 2021-22

WORKSHEET (SELF -ASSESSMENT)



Subject: Library

Assignment No.:8

Allotment Date: 15 November 2021

S.N O	QUESTIONS	MARK S	SKILLS/COMPETENCI ES
	Answer the following questions on the basis of the story ‘ Our Animal friends’ given in the notes.		
1	Name any three milk giving animals ?	01	Analysis
2	Name any three beautiful looking birds ?	01	Analysis
3	Name any three pet animals?	01	Analysis
4	Name any three wild animals ?	01	Analysis
5	Name any three animals used for riding ?	01	Analysis
6	Name any three insets?	01	Analysis
7	Put a tick mark against the correct answers The cat watches our houses. (Y)(N)	01	Understanding

8	The peacock crows in the morning. (Y)(N)	01	Analysis
9	The camel is used for riding . (Y)(N)	01	Analysis
10	The lion is a pet animal. (Y)(N)	01	Analysis