



ARMY PUBLIC SCHOOL GWALIOR
CLASS -VIII



ACADEMIC SESSION 2021-22
WORKSHEET (SELF –ASSESSMENT)

Subject: English

Assignment No. : 7

Allotment Date: 15 October 2021

S. NO.	QUESTIONS	MARKS	SKILLS/ COMPETENCIES
1	Write an article on topic ' A society free of violence is unimaginable ' in about 150 words.	4m	Information, Creative writing
2	Is fighting the only way of resolving differences of opinion? What else can be done to reach a mutually acceptable settlement?	3m	Understanding and Critical thinking
3	Do you agree that power and stamina in the body doesn't depend on the size of the body? Answer in about 100 words.	4m	HOT
5	Read the following sentences and identify the form of future tense of verbs underlined. 1. I will not attend the ceremony because I am too tired. (_____) 2. he will have prepared his speech by Tuesday. (_____) 3. They will have been sleeping for one hour. (future perfect continuous tense)	3m	Analytical Skill
6	Fill in the blanks with appropriate verbs in various forms of past tense as mentioned in brackets. 1. You were _____ (walk) down the road when I met you.(past continuous tense) 2. Diya _____ (give) the report card to her mother yesterday. (past perfect tense) 3. The little girl _____ (sing) well before she got a sore throat.(past perfect continuous)	3m	Analytical skill
7	All the problems can be solved at negotiation table. Explain in 100 words.	4m	Critical Thinking

8	Answer the following questions in about 20-30 words. 1. What is it that Ranji finds difficult to explain at home? 2. Why did the pool not dry even in the extreme summer? 3. The fight taught me an unforgettable lesson. How?	3x2=6m	Evaluation
9	Imagine that you returned from an excursion by your school. Write an account in the form of a diary entry and give details of the trip. Use the simple past or past continuous tense forms of verbs only.	3m	Communication Skill and Creative Writing



ARMY PUBLIC SCHOOL GWALIOR

CLASS -VIII

ACADEMIC SESSION 2021-22

WORKSHEET (SELF –ASSESSMENT)



Subject: Hindi

Assignment No. : 7

Allotment Date: 15 October 2021

S. NO.	QUESTIONS	MARKS-30	SKILLS/COMPETENCIES
1	निम्नलिखित शब्दों के अर्थ लिखिए दबेल हवाला फरमान कुमक लथपथ	5	Information, Communication Skills
2	निम्नलिखित प्रश्नों के उत्तर दीजिए (क) घर के सामान्य काम हों या अपना निजी काम, प्रत्येक व्यक्ति को अपनी क्षमता के अनुरूप उन्हें करना आवश्यक क्यों है? (ख) क्या बच्चों ने उचित निर्णय लिया कि अब चाहे कुछ भी हो जाए, हिलकर पानी भी नहीं पियेंगे? (ग) पहला बोलता सिनेमा बनाने के लिए फिल्मकार अर्देशिर एम . ईरानी को प्रेरणा कहाँसे मिली? उन्होंने आलम आरा फिल्म के लिए आधार कहाँ से लिया? विचार व्यक्त कीजिए।	6	Critical Thinking and Problem Solving
3	(क) सर्वनाम की परिभाषा उदाहरण सहित लिखिए। (ख) विशेषण की परिभाषा उदाहरण सहित दीजिए।	2 2	Critical thinking

4	<p>किसी एक विषय पर पत्र लिखिए। जन्मदिन के उपहार के लिए कृतज्ञता प्रकट करते हुए चाचाजी को पत्र लिखिए। अथवा परीक्षा में प्रथम स्थान प्राप्त करने पर मित्र / सखी को बधाई-पत्र।</p>	5	Analytical Skill, Understanding
5	<p>किसी एक विषय पर अनुच्छेद लिखिए। दीपावली अथवा मेरे जीवन का लक्ष्य</p>	5	Evaluation,
6	<p>(क) हर्ष किस राज्य का शासक था उसके राज्य में हुई घटनाओं का वर्णन कीजिए? (ख) भारत में इस्लाम का आगमन कैसे हुआ ?</p>	2 3	Critical thinking



ARMY PUBLIC SCHOOL GWALIOR
CLASS -VIII



ACADEMIC SESSION 2021-22
WORKSHEET (SELF –ASSESSMENT)

Subject: Mathematics

Assignment No. : 7

Allotment Date: 15 October 2021

S. NO.	QUESTIONS	MARKS	SKILLS/ COMPETENCIES
1	Which of the following numbers are not perfect cubes? (i) 216 (ii) 128	1	Analytical
2	How many measurements can determine a quadrilateral uniquely?	1	Understanding
3	Find the smallest number by which 243 must be multiplied to obtain a perfect cube.	1	Analytical
4	The diagonals of a square are _____ each other.	1	Analytical
5	Is 135 a perfect cube?	1	Understanding

6	If two diagonals are given, then we can construct a_____.	1	Critical thinking
7	To construct a quadrilateral, we need to know two diagonals and _____ sides.	1	Understanding
8	Find the cube root of 512.	1	Critical thinking
9	To construct a parallelogram we need to know_____.	1	Understanding
10	Find the smallest number by which 704 must be divided to obtain a perfect cube.	2	Understanding
11	Construct a square whose side is 5 cm.	2	Analytical thinking
12	Prakhar makes a cuboid of plasticine of sides 5 cm, 2 cm, 5 cm. How many such cuboids will be needed to form a cube.	2	Application and problem solving
13	Construct a rhombus ABCD in which AB = 5.8 cm and AC = 7.5 cm.	2	Analytical
14	Find the cube root of 17561 by prime factorisation method.	2	Critical thinking and problem solving.

15	Construct a rectangle whose diagonal is 5 cm and the angle between the diagonal is 50° .	2	Application and problem solving
16	What is the smallest number by which 2916 should be divided so that the quotient is a perfect cube.	3	HOTs
17	Construct a quadrilateral PQRS, given that QR = 4.5 cm, PS = 5.5 cm, RS = 5 cm and the diagonal PR = 5.5 cm and diagonal SQ = 7 cm.	3	HOTs
18	Find the smallest number by which 1323 may be multiplied so that the product is a perfect cube.	3	Application



ARMY PUBLIC SCHOOL GWALIOR
CLASS -VIII



ACADEMIC SESSION 2021-22
WORKSHEET (SELF –ASSESSMENT)


Subject: Science

Assignment No. : 7

Allotment Date: 15 October 2021

S. NO.	QUESTIONS	MARKS	SKILLS/ COMPETENCIES
Q.1	Answer the following questions. I. Which cell does not have nucleus? II. What is the name of the power house of the cell? III. What is the name of living substance present in cell?	1x3=3	Information
Q.2	I.Name the parts of the nucleus and state its function. II.What are cell organelles?	2X2=4	Understanding
Q.3	I. Which organism is more efficient in its functioning—unicellular or multicellular? Why? II. What would happen if animals have cell wall? III. Why plant cells need cell walls?	2x3=6	HOT

Q.4	<p>I. Differentiate between Leucoplast and chloroplast.</p> <p>II. State the difference between eukaryotes and prokaryotes.</p>	2x3=6	Interdisciplinary
Q.5	<p>I. Mother gives birth to a baby but the baby has characters of both parents. How?</p>	3x2=6	Analytical Skill
	<p>II. Explain briefly the external fertilisation.</p>		Critical Thinking and Problem Solving
Q.6	<p>Describe the male reproductive organs with the help of a labelled diagram.</p>	5x1=5	Communication Skills and Evaluation



ARMY PUBLIC SCHOOL GWALIOR

CLASS -VIII

ACADEMIC SESSION 2021-22

WORKSHEET (SELF –ASSESSMENT)



Subject: Social Science

Assignment No. : 7

Allotment Date: 15 October 2021

S. NO.	QUESTIONS	MARKS	SKILLS/ COMPETENCIES
1	<p>Q1. Objective type questions Fill in the blanks and rewrite the sentences.</p> <p>i) James Mill was the severe critic of _____</p> <p>ii) A madrasa was set up in Calcutta in _____.</p> <p>iii) The name associated with the establishment of Serampore Missionaries _____</p> <p>iv) William Adam toured the districts' _____ and _____</p> <p>v) Rabindranath Tagore started _____ in 1901</p> <p>vi) There was no system of Annual Exams in _____</p> <p>vii) Many British officials said that the knowledge of _____ was full of errors.</p> <p>viii) Macaulay saw India as an uncivilised country that needed to be _____</p> <p>ix) Serampore college is in _____</p> <p>x) William Jones was a _____</p> <p>xi) Hindu college was in _____</p>	11	Information and Understanding
2	<p>Name any two individuals who sharply attacked the Orientalists.</p>	2	HOTS

3	How did Tagore view his school name Shantiniketan?	2	Understanding
4	What is agriculture?	2	Communication skill
5	Define Shifting cultivation and its disadvantages.	3	Critical thinking
6	Why in India Agriculture is a primary activity?	3	Critical thinking
7	Distinguish between Subsistence farming and intensive farming .	3	Analytical Skill
8	Write a short notes on types of economic activities.	4	Evaluation



ARMY PUBLIC SCHOOL GWALIOR
CLASS -VIII



ACADEMIC SESSION 2021-22
WORKSHEET (SELF –ASSESSMENT)

Subject: Sanskrit

Assignment No. : 7

Allotment Date: 15 October 2021

S.NO.	QUESTIONS	MARKS	SKILLS/ COMPETENCIES
1	निम्नलिखित संख्याओं को संस्कृत में लिखिए क 19 ख 28 ग 53 घ 92 ङ 36	(5)	Information
2	संस्कृतभाषयां वाक्यप्रयोगं कुरुत- (क) विद्या (ख) तपः (ग) समाचरेत् (घ) परितोषः (ङ) नित्यम्	(5)	Understanding
3	अधोलिखितानि प्रश्नानाम् उत्तराणि एकपदेन लिखत- (क) नृणां संभवे कौ क्लेशं सहेते? (ख) आत्मवशं किं भवति? (ग) नीतिनवनीतम् पाठः कस्मात् ग्रन्थात् सङ्कलित? (घ) कीदृशीं वाचं वदेत्? (ङ) दुःखं किं भवति?	(5)	Interdisciplinary
4	शुद्धवाक्यानां समक्षम् आम् अशुद्धवाक्यानां समक्षं च नैव इति लिखत- (क) अभिवादनशीलस्य किमपि न वर्धते। (ख) मनुष्यः सदैव तदेव कर्म कुर्यात् येनान्तरात्मा तुष्यते। (ग) आत्मवशं तु सर्वमेव दुःखमस्ति। (घ) येन पितरौ आचार्यः च सन्तुष्टाः तस्य सर्वं तपः समाप्यते। (ङ) मनुष्यः सदैव मनः पूतं समाचरेत्।	(5)	Analytical Skill
5	मञ्जूषातः चित्वा उचिताव्ययेन वाक्यपूर्तिं कुरुत- अपि एव यथा नित्यं यादृशम्	(5)	Critical Thinking and Problem Solving

	<p>(क) तयोः प्रियं कुर्यात्।</p> <p>(ख) कर्म करिष्यसि। तादृशं फलं प्राप्स्यसि।</p> <p>(ग) वर्षशतैः निष्कृतिः न कर्तुं शक्या।</p> <p>(घ) तेषु त्रिषु तुष्टेषु तपः समाप्यते।</p> <p>(ङ) राजा तथा प्रजा।</p>		
6	<p>स्थूलपदान्यवलम्बय प्रश्ननिर्माणं कुरुत-</p> <p>(क) वृद्धोपसेविनः आयुर्विद्या यशो बलं न वर्धन्ते।</p> <p>(ख) मनुष्यः सत्यपूतां वाचं वदेत्।</p> <p>(ग) त्रिषु तुष्टेषु सर्वं तपः समाप्यते?</p> <p>(घ) मातापितरौ नृणां सम्भवे क्लेशं सहेते।</p> <p>(ङ) तयोः नित्यं प्रियं कुर्यात्।</p>	(5)	Evaluation



ARMY PUBLIC SCHOOL GWALIOR

CLASS -VIII

ACADEMIC SESSION 2021-22

WORKSHEET (SELF –ASSESSMENT)



Subject: Computer

Assignment No. : 7

Allotment Date: 15 October 2021

S. No.	Questions	Marks	SKILLS/ COMPETENCIES
1	Tick The Correct Answer	5x 1/2=2.5	Information
	A) A person who can write the program is known as a) Record b) Programmer c) Value		
	B) A natural number larger than a byte. a) Integer b) Character c) Float		
	C) The values that are assigning to the data a) Literal b) Data c) Query View		
	D) The shortcut key to save a query is a) Ctrl+S b) Ctrl+V c) Alt+S		
E) A box that allows readers to enter confidential or secret information a) Menu b) Password c) Frame			
2	Fill in the blanks a) _____ are the instructions for a computer. b) The _____ allows programmers to create simple as well as complex applications. c) The maximum length for a variable name is ____ characters. d) The data types can be classified into ____ and ____ Categories. e) ____ manipulates data by combining or computing result.	5 x 1/2=2.5	Understanding
3	Answer the following question i) What are the different features of visual basic 6? ii) Define: a. Computer language b. Programming language	2 x 2.5 =5	HOT



ARMY PUBLIC SCHOOL GWALIOR

CLASS -VIII

ACADEMIC SESSION 2021-22

WORKSHEET (SELF –ASSESSMENT)




Subject: G.K

Assignment No. : 7

Allotment Date: 15 October 2021

S. NO.	QUESTIONS	MARKS	SKILLS/ COMPETENCIES
1	<p>Q1. Objective type questions Fill in the blanks and rewrite the sentences.</p> <p>i) House for Mr Biswas was written by _____.</p> <p>ii) Cauvery has depleted _____ in the last 70 years.</p> <p>iii) The step dance evolved from traditional to _____ dance.</p> <p>iv) Gayo is a dance of _____.</p> <p>v) Barabati Stadium is in _____.</p> <p>vi) In year _____ Taliban destroyed the ancient statue of Buddha.</p> <p>vii) The director of the movie Jaws was _____.</p> <p>viii) _____ is also referred to as an illegal intrusion into computer system.</p> <p>ix) Cyber terrorism is defined as _____</p> <p>x) Harold Williams is considered one of the greatest _____ of all times.</p>	10	Information and Understanding



ARMY PUBLIC SCHOOL GWALIOR

CLASS -VIII

ACADEMIC SESSION 2021-22

WORKSHEET (SELF –ASSESSMENT)

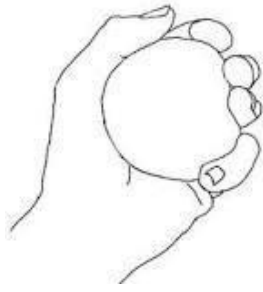


Subject: Art Education

Assignment No. : 7

Allotment Date: 15 October 2021

S.NO	QUESTIONS	MARKS	SKILLS/ COMPETENCIES
1	A gesture drawing is a laying in of the_____. (a) Balance of a model (b) Action of a model (c) Texture of a model (d) Size of a model	1	Creative skills
2	Gesture drawing is done in_____. (a) 10 seconds – 5 minutes (b) 15 seconds – 10 minutes (c) 3 seconds – 6 minutes (d) 7 seconds – 14 minutes	1	Creative skills
3	In how many steps we can make a gesture drawing? (a) 6 (b) 8 (c) 4 (d) 10	1	Creative skills
4	What is gesture drawing also called? (a) Pattern studies (b) Still life studies (c) Landscape studies (d) scribble studies	1	Creative skills
5	What do gesture drawing lines show? (a) Movement (b) Pattern (c) Color (d) Texture	1	Creative skills
6	Gestures can help create the_____. (a) Illusion of still life. (b) Illusion of texture. (c) Illusion of a living, breathing figure.	1	Creative skills

	(d) Illusion of sculpture.		
7	<p>Contour line describes edges of _____.</p> <p>(a) Shapes and forms (b) Patterns (c) Textures (d) Colors</p>	1	Creative skills
8	<p>Gesture drawings are quick and fast drawings.</p> <p>(a) True (b) False</p>	1	Creative skills
9	<p>Do gesture drawings have a lot of detail?</p> <p>(a) True (b) False</p>	1	Creative skills
10	<p>What type of line picture is this?</p>  <p>(a) Pure contour line (b) Cross contour line (c) Gesture (d) Blind contour line</p>	1	Creative skills



ARMY PUBLIC SCHOOL GWALIOR
CLASS -VIII



ACADEMIC SESSION 2021-22
WORKSHEET (SELF –ASSESSMENT)

Subject: Work Education

Assignment No. : 7

Allotment Date: 15 October 2021

S.NO	QUESTIONS	MARKS	SKILLS/COMPETENCIES
1	An_____ is a framework around which the sculpture is built. (a) Sculpture (b) Armature (c) Wood Craft (d) Ceramics	1	Creative Skills
2	Which wire is used for armature? (a) Aluminium (b) Copper (c) Metal (d) Zinc	1	Creative Skills
3	An armature is often made of heavy aluminium wire which is stiff. (a) True (b) False	1	Creative Skills
4	Aluminium armature wire is easy to_____. (a) Burn (b) Shape (c) Hanged (d) Tied	1	Creative Skills
5	Armature wire is the best for _____.	1	Creative Skills

	<p>(a) Cubism</p> <p>(b) Sculpting</p> <p>(c) Contemporary</p> <p>(d) Impressionism</p>		
6	<p>Which material is not used while making armature?</p> <p>(a) Kerosene oil</p> <p>(b) Aluminium wire</p> <p>(c) Pliers</p> <p>(d) Wire cutter</p>	1	Creative Skills
7	<p>The wire is affixed to a base which is usually made of _____.</p> <p>(a) Cardboard</p> <p>(b) Paper</p> <p>(c) Wood</p> <p>(d) Metal</p>	1	Creative Skills
8	<p>What should we use to make perfect circles for a bird cage armature?</p> <p>(a) Pencil</p> <p>(b) Plate</p> <p>(c) Compass</p> <p>(d) Bottle</p>	1	Creative Skills
9	<p>From which tool do we bend the aluminium wires?</p> <p>(a) Wire cutters</p> <p>(b) Pliers</p> <p>(c) Clippers</p> <p>(d) Hangar wire</p>	1	Creative Skills
10	<p>Which one is the picture of wire bird cage?</p> <p>(a)</p>	1	Creative Skills


(b)



(c)



(d)





ARMY PUBLIC SCHOOL GWALIOR

CLASS -VIII

ACADEMIC SESSION 2021-22

WORKSHEET (SELF –ASSESSMENT)




Subject: Music (Dance)

Assignment No. : 7

Allotment Date: 15 October 2021

S.NO	QUESTIONS	MARKS	SKILLS/COMPETENCIES
1	Contemporary dancing was starts in which century? (a) 28 th (b) 20 th (c) 24 th	1	Integrity
2	Who introduced the concept of contemporary dance? (a) Cunningham (b) Michael Jackson (c) Gregory Hines	1	Integrity
3	_____ Elements of contemporary dance are there. (a) 2 (b) 4 (c) 5	1	Integrity
4	Contemporary dance combines the strong but controlled legwork of Ballet. (a) True (b) False	1	Integrity
5	_____ is one of the most recognized dancers in the history of contemporary dance. (a) Isadora Duncan (b) Mikhail Baryshnikov (c) Martha Graham	1	Integrity
6	Hip-hop was a type of contemporary dance. (a) True	1	Integrity

	(b) False		
7	<p>Contemporary dancers focus on _____ using gravity to pull them down to the floor.</p> <p>(a) Hand work (b) floor work (c) body movement</p>	1	Integrity
8	<p>What is a torso twist that begins in the pelvis?</p> <p>(a) Rib cage (b) Spiral (c) femur</p>	1	Integrity
9	<p>What is graham named after?</p> <p>(a) named after teacher and choreographer <u>Merce Cunningham</u> (b) named after <u>Jose Limon</u> (c) named after <u>Martha Graham</u></p>	1	Integrity
10	<p>What is this picture about?</p>  <p>(a) Hip-hop dance (b) Folk dance (c) contemporary dance</p>	1	Integrity



ARMY PUBLIC SCHOOL GWALIOR

CLASS -VIII

ACADEMIC SESSION 2021-22

WORKSHEET (SELF –ASSESSMENT)




Subject: Music (Vocal)

Assignment No. : 7

Allotment Date: 15 October 2021

S.No	Answer the following questions:	Marks	SKILLS/ COMPETENCIES
1.	Bundelkhandifolk music is very popular in Jhanshi. a. Rai b. Lavani	1	Informative
2.is a semi classical style of Indian music. a. Thumri b. Dhrupad	1	Informative
3.	Alankar is an organized chain of group of.....connected together. a. swaras b. raga	1	Informative
4.	Arohana is the ascending scale of notes in raga. a.YES b.NO	1	Informative
5.	Avrohana is the ascending scale of notes in raga. a.YES b.NO	1	Informative
6.	In dadra taal there are 7 beats . a. YES b. NO	1	Informative
7.	How many parts are there in dadra taal? a. 1 b. 2 c. 3	1	Informative
8.	Which form of music is folk music style? a. Khyak b. Dhrupad c. Lavani	1	Informative
9.	How many beats are there in dadra taal? a. 5 b. 6 c. 7	1	Informative
10	Dha Dhe Na Dha Tu Na which taal bol is this. a. Rupak b. Dadra c. Tritaal	1	Informative



ARMY PUBLIC SCHOOL GWALIOR

CLASS -VIII

ACADEMIC SESSION 2021-22

WORKSHEET (SELF –ASSESSMENT)




Subject: Library

Assignment No. : 7

Allotment Date: 15 October 2021

S.NO	QUESTIONS	MARKS	SKILLS/ COMPETENCIES
1	Why is electricity considered as an important resource ?	01	Interpretation
2	What are the other resources around us ?	01	Classification
3	What would happen to our natural resources if we are not careful in conserving them ?	01	Observation
4	What can we do around the house to save water ?	01	Analysis
	Find out whether you are careful in saving resources by ticking Y or N		
1.	I switch off lights and fans when I leave a room. (Y)(N)	01	Responsibility
2.	I take only as much food on my plate as i really need. (Y)(N)	01	Responsibility
3.	I don't leave milk in my glass. I finish every drop of it . (Y)(N)	01	Responsibility
4.	I never waste food at a marriage or a birthday party. (Y)(N)	01	Self- Awareness
5.	While having bath, I never waste water unnecessarily. (Y)(N)	01	Understanding
6	If I find a water tank leaking at school, I inform my teacher without delay. (Y)(N)	01	Responsibility



ARMY PUBLIC SCHOOL GWALIOR

CLASS -VIII

ACADEMIC SESSION 2021-22

WORKSHEET (SELF –ASSESSMENT)




Subject: Health and Physical Education

Assignment No. : 7

Allotment Date: 15 October 2021

S.NO	MULTIPAL CHOICE QUESTIONS (1 to 4)	SKILLS/ COMPETENCIE S	MARKS 1X10
1.	Treat children to always treat animals A.Gently B. Calmly C. Both A &B D. None of the above	Informatory	1
2	Which among the following is not correct. a) Do not try to separate fighting animals. b) Avoid contact and interaction with unknown animals. c) Always feed and play with wild animals. d) Do not disturb an animal while it is feeding.	Analytical	1
3	If a child is bitten by a snake. a) Apply a pressure bandage b) Wash the affected area c) Do not use splint d) Make child run	Informatory	1

4	Always _____ your hands after touching animals. a) Sanitize b) Wash c) None of the above d) Both a and b	Understanding	1
5	Fill in the blanks (question 5 to 7) If a child is Bitten by a dog, wash the affected area under _____ running water.(hot,cold)	Informatory	1
6	If any cat bites or scratches must be thoroughly washed and _____.(infected, disinfected)	Understanding	1
7	Animals are often very protective of their _____.(food,water)	Understanding	1
8	True and False (question 8 to 10) Keep good hygiene by allowing children access to litter trays that the cat uses for toileting. _____	Informatory	1
9	Do not give any food or water when a child is Bitten by a dog._____	Informatory	1
10	Do apply antiseptic and cover the bite of dog with a clean dressing._____	Critical thinking	1



ARMY PUBLIC SCHOOL GWALIOR
CLASS -VIII



ACADEMIC SESSION 2021-22
WORKSHEET (SELF –ASSESSMENT)

Subject: Discipline

Assignment No. : 7

Allotment Date: 15 October 2021

S.No	Questions	Marks	SKILLS/ COMPETENCIES
1.	Fill in the blanks- i. It is so important to take care of our _____. ii. It is our _____ health. iii. It is our _____ health. iv. It is taking care of our _____. v. Taking care of your _____. vi. We can _____ our friends plants on their birthdays.	03	Knowledge & Understanding
2.	Choose the correct answers- How can we take care of our heath? i. By being active- Playing outside home on playground or in park ii. You can ride by cycle to stay fit and healthy iii. Eating healthy food each day iv. Eating less of maggi, pasta, pizza and burger v. Eating salads and fruits daily vi. By helping mom in kitchen or small work like watering plants	03	
3.	True and False		Thinking and

	<ul style="list-style-type: none"> i. We must take care of our eyes. ii. We must remain attentive during on line classes. 	01	Writing Skills
4.	<p>How can we take care of our mind- Choose all that apply-</p> <ul style="list-style-type: none"> i. Reading good story books helps us to develop our thinking power ii. Watching good stuff on TV also helps us develop our thinking ability. iii. Our mind does not get good message when we watch a video where people shout or fight; so we should not watch such videos. 	01	
5.	<p>How can we take care of our environment- Choose all that apply</p> <ul style="list-style-type: none"> i. We can plant more plants ii. Gift our friends plants on their birthdays. iii. Plant trees on our birthday. iv. Use less plastic v. Keeping environment clean 	02	