



ARMY PUBLIC SCHOOL GWALIOR
CLASS -V



ACADEMIC SESSION 2021-22
WORKSHEET (SELF –ASSESSMENT)

Subject: English

Assignment No. : 7

Allotment Date: 15 October 2021

S. NO.	QUESTIONS	MARKS	SKILLS/ COMPETENCIES
1	How does the poet write his name on the paper boats? Ans :	2	Information
2	Make sentences using given phrasal verbs: 1. give away: ----- 2. look away : ----- -----	2	Understanding
3	Tenali Raman put the name of the king on top of the list of fools. Do you agree with Tenali Raman? Give reasons for your answer. Ans	2	HOT

4	Write in brief about King Krishnadevaraya and his kingdom Vijayanagara .	2	Interdisciplinary
5	.Identify the verbs in the following sentences and write whether they are transitive or intransitive: i) We clean our room every day. ii) She laughed loudly.	2	Analytical Skill
6	What does the dialogue," I will buy them all" show about the king?	3	Critical Thinking and Problem Solving
7	Answer the following questions briefly. 1 What does the poet dream at night? Ans. 2 What was Tenali Raman doing in the garden ? Ans.	4	Evaluation
8	Write what all would you like to do with your friends and family on a rainy day. Express your thoughts.	3	Communication Skills



ARMY PUBLIC SCHOOL GWALIOR
CLASS -V



ACADEMIC SESSION 2021-22
WORKSHEET (SELF –ASSESSMENT)


Subject: Hindi

Assignment No. : 7

Allotment Date: 15 October 2021

क्र०	प्रश्न	अंक	प्रश्नकाप्रकार
1.	<p>प्र०1. निम्नलिखित प्रश्नों के सही उत्तर के सामने सही का निशान लगाओ :</p> <p>क. सचिन तेंदुलकर को क्रिकेट प्रेमी किस नाम से पुकारते हैं ?</p> <p>मास्टर ब्लास्टर <input type="checkbox"/></p> <p>लिटिल मास्टर <input type="checkbox"/></p> <p>उपर्युक्त दोनों <input type="checkbox"/></p> <p>ख. सचिन का नाम किसने रखा ?</p> <p>दादा जी ने <input type="checkbox"/></p> <p>पिता जी ने <input type="checkbox"/></p> <p>माता जी ने <input type="checkbox"/></p> <p>ग. सचिन के कोच का नाम बताइए ?</p> <p>रमाकांत अचरेकर <input type="checkbox"/></p> <p>सचिन देव वर्मन <input type="checkbox"/></p> <p>उपर्युक्त में से कोई नहीं <input type="checkbox"/></p>	3	बोधात्मक
2.	<p>प्र०2. निम्न शब्दों के अर्थ लिखो :</p> <p>क. मनोयोग - _____</p> <p>ख. अंतराष्ट्रीय - _____</p> <p>ग. प्रतिष्ठित - _____</p>	3	ज्ञानात्मक

3.	<p>प्र०3. विलोम लिखो :</p> <p>क. सम्मान - _____</p> <p>ख. आशा - _____</p> <p>ग. शिष्य - _____</p> <p>घ. पक्ष - _____</p>	4	रचनात्मक
4.	<p>प्र०4. नीचे लिखे शब्दों के समानार्थी शब्द लिखो :</p> <p>क. प्रभाव - _____</p> <p>ख. नज़ारा - _____</p> <p>ग. निर्णय - _____</p> <p>घ. जगत - _____</p>	4	सूचनात्मक
5.	<p>प्र०5. निम्नलिखित प्रश्नों के उत्तर लिखो :</p> <p>प्र० क. क्रिकेट के अलावा सचिन को क्या - क्या पसंद हैं ? उ० क. _____</p> <p>प्र० ख. सचिन का दाखिला शारदाश्रम में क्यों करवाया गया ? उ० ख. _____</p> <p>प्र० ग. सचिन पर सबसे अधिक प्रभाव किन - किन व्यक्तियों का पड़ा ? उ० ग. _____</p>	3	विश्लेषणात्मक
6.	<p>प्र०6. रेखा खींचकर खेलों के नाम को खिलाड़ियों के नाम जोड़ो :</p> <p>क. टेनिस विश्वनाथ आनंद</p> <p>ख. शतरंज धनराज पिल्लै</p> <p>ग. हॉकी सानिया मिर्जा</p>	3	उच्चस्तरीयचिंतन



ARMY PUBLIC SCHOOL GWALIOR
CLASS -V



ACADEMIC SESSION 2021-22
WORKSHEET (SELF –ASSESSMENT)

Subject: Mathematics

Assignment No. : 7

Allotment Date: 15 October 2021

S. NO.	QUESTIONS	MARKS	SKILLS/ COMPETENCIES
1	Fill in the blanks: (i) %(percent) = _____ . (ii) 50% of 1 = _____ .	2x1=2	Understanding
2	Write 'True' or 'False': (i) This is the correct pattern 3 5 7 9 11 () (ii) 1% means 1/200. ()	2x1=2	HOTS
3	Tick the correct answer from the given options: (i) 40% is equivalent to_____. (a) 40 (b) 4 (c) 0.4 (d) 0.04 (ii) Express 3/5 as percent_____. (a) 60% (b) 75% (c) 75.80% (d) 80.75% (iii) Express 36% as fraction_____.	5x1=5	Critical thinking

<p>4</p>	<p>Solve the following questions: -</p> <p>Solve the following:</p> <p>(i) Find 20% of Rs. 100.</p> <p>(ii) Find 100% of 1.</p> <p>(iii) Convert it into fraction: (a) 12% (b) 5 1/8 %</p> <p>(iv) Complete the pattern: db, db, db, db,.....</p> <p>(v) Write the next triangular number 528,561,.....</p>	<p>5x1=5</p>	<p>Interdisciplinary</p>
<p>5</p>	<p>Solve the following questions:</p> <p>(i) Given 21 coins of the same denomination and size, create two types of triangular patterns.</p> <p>(ii) In a meeting, 60% of the 100% employees supported the speaker. How many did not support?</p> <p>(iii) Ginnie read 200 pages of a novel consisting of 500 pages. What percent of the book has she read?</p>	<p>2x3 =6</p>	<p>Problem Solving</p>



ARMY PUBLIC SCHOOL GWALIOR
CLASS -V
ACADEMIC SESSION 2021-22
WORKSHEET (SELF –ASSESSMENT)

Subject: EVS

Assignment No. : 7

Allotment Date: 15 October 2021

S.NO	QUESTIONS	MARKS	SKILLS/COMPETENCIES
1.	Name any two rivers that flow through the Northern Plains. a) b)	2	Information
2.	Name the states across which the Deccan Plateau stretches.	2	Understanding
3.	Describe the climate of the coastal plains	2	Interdisciplinary
4.	Define the terms: i) Basin ii) Deccan	4	Analytical Skill
5	Why do we find many light house in the Western Ghats?	3	HOT
6.	What makes the Northern Plains fertile?	2	Critical Thinking and Problem Solving

7.	Write any two points why Deccan Plateau is important.	2	Evaluation
8.	Why is the land along eastern coast known as the Rice Bowl of India?	3	Communication Skills



ARMY PUBLIC SCHOOL GWALIOR

CLASS -V

ACADEMIC SESSION 2021-22

WORKSHEET (SELF –ASSESSMENT)




Subject: G.K

Assignment No. : 7

Allotment Date: 15 October 2021

S. NO.	QUESTIONS	MARKS	SKILLS/COMPETENCIES
1.	Fill in the blanks: (i)is known as the land of windmills. (ii) Dipika Pallikal is associated withsport. (iii) Mahavira was born in.....	3X1=3 marks	Understanding, Information, interdisciplinary
2.	State True / False: (i) Mecca, a city in Saudi Arabia is the holiest of Muslim cities. () (ii) Ganga is the longest river on the Earth. () (iii) Qingdao Haiwan Bridge is in China. ()	3X1=3 marks	Information, Understanding, Analytical skills,
3.	Tick the correct answer: (i) What is the capital of Goa? a) Amravati b) Lucknow c) Panaji (ii) Who wrote the book A House for Mr. Biswas? a) Amitav Ghosh b) VS Naipaul c) Dan Brown	2X1=2 marks	Information, Understanding Interdisciplinary
4.	On which river Howrah Bridge is made? _____	1 marks	Information, Understanding
5.	What is the full form of Wi-Fi? _____	1 marks	Information



ARMY PUBLIC SCHOOL GWALIOR

CLASS -V

ACADEMIC SESSION 2021-22


WORKSHEET (SELF –ASSESSMENT)



Subject: Art Education

Assignment No. : 7

Allotment Date: 15 October 2021

S.NO	QUESTIONS	MARKS	SKILLS/ COMPETENCIES
1.	<p>Principle of art which refers to the decoration of the surface of art with repeated units.</p> <p>A. Contrast B. Rhythm C. Movement D. Pattern</p>	1	Creativity
2.	<p>This artwork illustrates this Element of Art:</p>  <p>A. Pattern B. Colours C. Perspective D. Variety</p>	1	Creativity
3.	<p>Colours and shapes that repeat in below image are called_____.</p>		Creativity



- A. A pattern.
- B. A dash.
- C. A mood.
- D. Exotic.

4.

The pattern in this image below is made of?



- A. Geometric forms
- B. Geometric shapes
- C. Organic shapes
- Organic forms

5.

Is repetition regular or different patterns

- A. Regular.
- B. Different

6.

The sequence of figures shows a pattern. If the pattern repeats, how many small squares will figure 5 have?



- A. 12 small squares
- B. 8 small squares
- C. 9 small squares
- D. 10 small squares

1


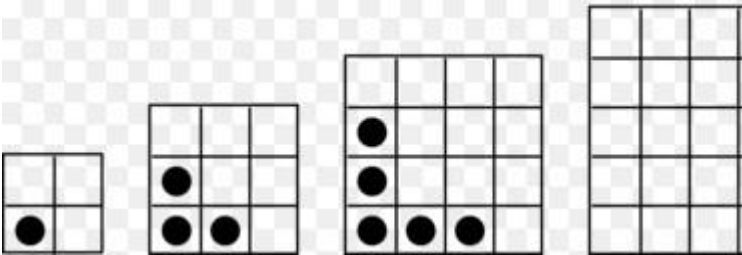

Creativity

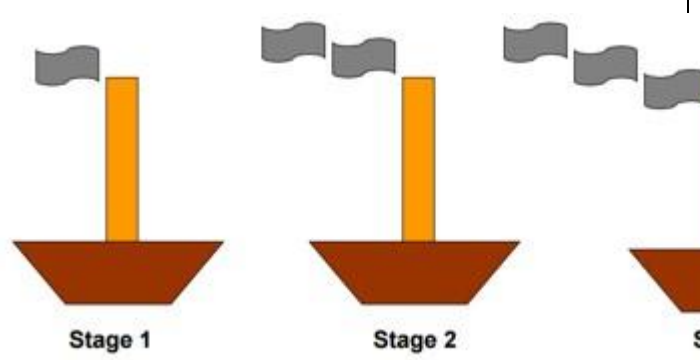
1


Creativity

1

Creativity

7.	<p>The sequence of figures shows a pattern. If the pattern repeats, how many bubbles will Stage 6 have?</p>  <p>A. 6 bubbles B. 4 bubbles C. 5 bubbles D. 7 bubbles</p>	1	Creativity
8.	<p>The sequence of figures shows a pattern. If the pattern repeats, how many small circles will figure 4 have?</p>  <p>A. 7 small circles B. 5 small circles C. 9 small circles D. 6 small circles</p>	1	Creativity
9.	<p>The sequence of 3 figures shows a pattern. If the pattern repeats, how many triangles will the figure 5 have?</p>  <p>A. seven triangles B. six triangles C. four triangles D. five triangles</p>	1	Creativity

<p>10.</p>	<p>The sequence of figures shows a pattern. If the pattern repeats, how many smoke signs will Stage 4 have?</p>  <p>Stage 1 Stage 2 Stage 3</p> <p>A. 3 smoke signs B. 4 smoke signs C. 5 smoke signs D. 6 smoke signs</p>	<p>1</p>	<p>Creativity</p>



ARMY PUBLIC SCHOOL GWALIOR
CLASS -V



ACADEMIC SESSION 2021-22
WORKSHEET (SELF –ASSESSMENT)

Subject: Work Education

Assignment No. : 7

Allotment Date: 15 October 2021

S.NO	QUESTIONS	MARKS	SKILLS/ COMPETENCIES
1.	What is the purpose of rangoli Decoration Bring good luck Desperation Sorrow	1	Creativity
2.	What designs are used in a rangoli Flowers Lamps Geometric All of the above	1	Creativity
3.	What is it made of rangoli. Rice powder Vermilion Turmeric All of the above	1	Creativity
4.	Where did it originate Europe Asia Australia India	1	Creativity
5.	Is Rangoli art permanent? True False	1	Creativity
6.	How many types of rangoli are there? a. Three b. One c. Two.	1	Creativity

7.	What's another word for rangoli?	1	Creativity
8.	What is the meaning of word rang in Rangoli?	1	Creativity
9.	Who started rangoli?	1	Creativity
10.	What are the common rangoli designs and motifs?	1	Creativity



ARMY PUBLIC SCHOOL GWALIOR

CLASS -V

ACADEMIC SESSION 2021-22

WORKSHEET (SELF –ASSESSMENT)




Subject: Health and Physical Education

Assignment No. : 7

Allotment Date: 15 October 2021

S.NO	MULTIPLE CHOICE QUESTIONS (1 to 4)	MARKS 1X10	SKILLS/COMPETENCIES
1.	What is the main purpose for the digestive system? A. To protect your organ's B. To provide you with nutrients and energy C. To pump blood and transport oxygen D. To control breathing	1	Informatory
2	How long does food stay in the stomach? A. 3hrs B. 2hrs. C. 6hrs. D. 4hrs.	1	Analytical
3	Where is the water removed from any undigested A. Small intestine B. Large intestine C. Stomach D. Liver	1	Informatory

4	<p>What is the function of teeth & tongue</p> <p>A. chemical digestion</p> <p>B. Break down</p> <p>C. Mechanical digestion</p> <p>D. They only chew food</p>	1	Understanding
5	<p>True/False</p> <p>The food pipe is structure in our digestive system (True/False)</p>	1	Informatory
6	<p>The saliva helps to mix with food in our mouth</p> <p>(True/false.)</p>	1	Understanding
7	<p>The main Function of excretory system is exit the waste material in our body</p> <p>(True/false.)</p>	1	Understanding
8	<p>Fill in the Blank</p> <p>..... liquid mix with food in our mouth</p> <p>(Milk, saliva, water)</p>	1	Informatory
9	<p>Food travels down the esophagus to the.....</p> <p>(Small intestine, mouth, stomach)</p>	1	Informatory
10	<p>Chemical used to..... digest food</p> <p>(enzyme, saliva)</p>	1	Critical thinking



ARMY PUBLIC SCHOOL GWALIOR
CLASS -V



ACADEMIC SESSION 2021-22
WORKSHEET (SELF –ASSESSMENT)

Subject: Music

Assignment No. : 7

Allotment Date: 15 October 2021

S. No	Answer the following questions:	Marks	SKILLS/COMPETENCIES
1.	What are the types of rhythm lay in classical music? a. 1 b. 2 c. 3	1	Informative
2.	When the rhythm (lay) is slow, it is called? a. Vilambit b. Chalat c. Druit	1	Informative
3.	When the rhythm (lay) is simple, it is called? a. Druit b. Madhya c. None of the above	1	Informative
4.	When the rhythm (lay) is faster than normal, it is called? a. Druit b. Madhya c. Vilambit	1	Informative
5.	What is called rhythm in music? a. To the same speed b. To vowels swar c. None of them	1	Informative
6.	According to Sangeet Ratnakar, which varna groups are called Alankaras? a. Regular varna group b. regular lay c. regular rhythm	1	Informative
7.	What is the first step in the learning of music? a. Alankar b. Sargam c. Rhythm	1	Informative
8.	What is Alankar number 1(one)? a. Sa, re, ga, ma, pa, dha, ni, sa, b. Sa sa, re re, ga ga, ma ma, pa pa, dha dha, ni ni, sa sa, c. None of them	1	Informative
9.	What is Alankar number 4(four)? a. Sa re ga, re ga ma, ga ma pa, ma pa dha, pa dha ni, dha ni sa, b. Sa re ga ma, re ga ma pa, ga ma pa dha, ma pa dha ni, pa dha ni sa,	1	Informative

	c. None of them.		
10.	What is speed in music called? a. Swar b. rhythm (Taal) c. Lay	1	ormative



ARMY PUBLIC SCHOOL GWALIOR

CLASS -V

ACADEMIC SESSION 2021-22

WORKSHEET (SELF –ASSESSMENT)



Subject: Music (Dance)

Assignment No. : 7

Allotment Date: 15 October 2021

S.NO	Answer the following questions:	Marks	SKILLS/COMPETENCIES
1.	Dance patterns are also known as a. Dance moves b. Dance c. None of them	1	Informative
2.	Dance pattern is combination of what? a. Quick and slow b. Steady c. None of them	1	Informative
3.	In dance pattern legs are usually what? a. Bent b. Straight c. Folded	1	Informative
4.	Styles of patterns in classical dance are very? a. Easy b. Different c. Complicated	1	Informative
5.	This dance form is delicate and elegant a. Kathakali b. Kuchipudi c. Bharatanatyam	1	Informative
6.	Bharatanatyam is traditionally performed by whom? a. Women b. Men c. Children	1	Informative
7.	Dance pattern in Bharatanatyam is arranged in which pattern? a. Geometric b. Numerical c. Alphabetical	1	Informative
8.	Kathakali is a dance drama performed by? a. Men b. Women c. Children	1	Informative
9.	What is the geometrical pattern of Kathakali? a. Square b. Hexagon c. None of the above	1	Informative
10.	Oddisi and Manipuri uses which kind of movements? a. Twisting b. Straight c. None of them	1	Informative



ARMY PUBLIC SCHOOL GWALIOR

CLASS -V

ACADEMIC SESSION 2021-22

WORKSHEET (SELF –ASSESSMENT)

Subject: Library

Assignment No. : 7

Allotment Date: 15 October 2021

S.NO	QUESTIONS	MARKS	SKILLS/ COMPETENCIES
	Answer the following questions on the basis of the story ' GOD IS ONE' given in the notes.		
1	Who is the creator of the universe ?	01	Analysis
2	Has God any body or form ?	01	Analysis
3	Does every religion worship its different God ?	01	comprehension
4	Does God reside in temple, masque, church or Gurudwara ?	01	Analysis
	Complete these sentences :		Analysis
5	God is	01	Understanding
6	God is theof the universe.	01	comprehension
7	No religion preaches.....	01	comprehension
8	Different religions are like so many they all lead to the same	01	Analysis
9	All religions worship the same	01	Understanding
10	Where do these worship and pray ? (a) Hindus..... (b) Muslims..... (c) Christians (d) Sikhs	01	Information



ARMY PUBLIC SCHOOL GWALIOR

CLASS -V

ACADEMIC SESSION 2021-22

WORKSHEET (SELF –ASSESSMENT)



Subject: Discipline

Assignment No. : 7

Allotment Date: 15 October 2021

S. No	Questions	Marks	SKILLS/COMPETENCIES
1.	<p>Fill in the blanks-</p> <p>i. It is so important to take care of our _____</p> <p>ii. It is our _____ health.</p> <p>iii. It is our _____ health.</p> <p>iv. It is taking care of our _____.</p> <p>v. Taking care of your _____.</p> <p>vi. We can _____our friends plants on their birthdays.</p>	03	Knowledge & Understanding
2.	<p>Choose the correct answers-</p> <p>How can we take care of our heath?</p> <p>i. By being active- Playing outside home on playground or in park</p> <p>ii. You can ride by cycle to stay fit and healthy</p> <p>iii. Eating healthy food each day</p> <p>iv. Eating less of maggi, pasta, pizza and burger</p> <p>v. Eating salads and fruits daily</p> <p>vi. By helping mom in kitchen or small work like watering plants</p>	03	
3.	<p>True and False</p> <p>i. We must take care of our eyes.</p> <p>ii. We must remain attentive</p>	01	Thinking and Writing Skills

	during on line classes.		
4.	<p>How can we take care of our mind- Choose all that apply-</p> <ul style="list-style-type: none"> i. Reading good story books helps us to develop our thinking power ii. Watching good stuff on TV also helps us develop our thinking ability. iii. Our mind does not get good message when we watch a video where people shout or fight; so we should not watch such videos. 	01	
5.	<p>How can we take care of our environment- Choose all that apply</p> <ul style="list-style-type: none"> i. We can plant more plants ii. Gift our friends plants on their birthdays. iii. Plant trees on our birthday. iv. Use less plastic v. Keeping environment clean 	02	

