



ARMY PUBLIC SCHOOL GWALIOR

CLASS -III

ACADEMIC SESSION 2021-22

WORKSHEET (SELF –ASSESSMENT)



Subject: English

Assignment No. : 7

Allotment Date: 15 October 2021

S NO	QUESTIONS	MARKS	NATURE
1.	Write the words which mean the same as the following- i. cried - ii. repaid -	2X1=2	Information
2.	Fill in the blanks by choosing the correct option from the brackets given below – (i) The fairy ordered (chips, tea and buns) (ii) lived in the zoo. (Beasts, Plants) (iii) The stork fed on (fishes/frogs)	3X1=3	Understanding
3.	Write the past and future forms of the following verbs: (i) read - (ii) dance - (iii) say -	3X1=3	Interdisciplinary

4	<p>Rewrite these sentences using short forms of underlined words:</p> <p>i) I <u>am</u> waiting for my friends. </p> <p>ii) Manya <u>did not</u> submit the form. </p> <p>iii) You <u>can not</u> climb this tree. </p>	3X1=3	Analytical Skill
5.	<p>Write down the meanings of the following words:</p> <p>(i) rage -</p> <p>(ii) witty -</p>	2X1=2	Critical Thinking and Problem Solving
6.	<p>Choose the correct options to answer the following questions:</p> <p>i) Where did the fairy visit?</p> <p>a) A zoo b) A park c) Fairyland d) A beach</p> <p>ii) Who was crying in the story 'The Clever Crab'?</p> <p>a) turtle b) stork b) fishes d) crab</p>	2X1=2	2X1=2 HOT
7	<p>Change the following sentences into simple past tense</p> <p>(i) Manu Makes noodles. </p> <p>(ii) You write poems. </p>	2X1=2	Evaluation

8.	<p>Answer the following questions:</p> <p>(i) Why was the stork crying?</p> <p>.....</p> <p>(ii) Which animals has the fairy mentioned in the poem named 'The Fairy at the Zoo'?</p> <p>.....</p> <p>(iii) How did the crab save himself?</p> <p>.....</p>	3X1=3	Communication
----	--	-------	---------------



ARMY PUBLIC SCHOOL GWALIOR

CLASS -III

ACADEMIC SESSION 2021-22

WORKSHEET (SELF –ASSESSMENT)




Subject: Hindi

Assignment No. : 7

Allotment Date: 15 October 2021

संख्या	प्रश्नउत्तर	अंक	प्रकृति
प्र.1	सही वाक्यों के सामने सही (v) व गलत के सामने गलत (X)का निशान लगाएं। क. हवा बदली को लेकर झरने में गई () ख. पानी बरसाकर बदली ने हलका महसूस किया () ग. बादल हवा की सहायता से इधर – उधर उड़ते हैं () घ . बादल सागर से पानी लाते हैं ()	4	बोधोत्प्रेरक
प्र.2	निम्नलिखित शब्दों के समानार्थी शब्द रूप लिखो:- क हवा ख. काया ग. पानी घ. सागर	4	सूचनापरक
प्र.3	अक्षरों के उस मेल को कहते हैं जिसका अर्थ होता है	2	अंतः विषयात्मक
प्र.4	सही जोड़े बनाओ – मटमैला पेड़ झूमते पानी	2	गहनसोचऔरसमस्या समाधान

प्र.5	<p>निम्नलिखित शब्दों के उलटे अर्थ वाले शब्द लिखो :</p> <p>क धुँधला</p> <hr/> <p>ख सुंदर</p> <hr/>	2	उच्चस्तरीय चिंतन
प्र.6	<p>निम्नलिखित शब्दों के अर्थ लिखो:-</p> <p>क. सागर</p> <p>ख. भेद</p> <p>ग. बदली</p> <p>घ. दर्पण</p>	4	विश्लेषणात्मक
प्र.7	<p>निम्नलिखित प्रश्नों का उत्तर दो:-</p> <p>क बदली ने अपनी सुंदरता कहाँ देखी?</p> <hr/> <p>ख ' बादल ' कविता में कौन किससे प्रश्न कर रहा है ?</p> <hr/>	2	भाषायीकौशल



ARMY PUBLIC SCHOOL GWALIOR

CLASS -III

ACADEMIC SESSION 2021-22

WORKSHEET (SELF –ASSESSMENT)



Subject: Mathematics

Assignment No. : 7

Allotment Date: 15 October 2021

S. NO.	QUESTIONS	MARKS	NATURE
1.	Fill in the placeholders: (i) $1935 \div 9 = \dots\dots$ (ii) One half is written as $\dots\dots\dots$	2X1=2	Information
2.	Find the fractions in which the denominator is 3 more than the numerator: $6/9, 7/4, 20/23, 17/13, 14/11, 4/9$ $\dots\dots\dots$ $\dots\dots$	2x1=2	Understanding
3.	Complete the sentence given below – i) There is no fraction whose denominator is $\dots\dots\dots$ ii) There are $\dots\dots\dots$ one-third in a whole.	1x2=2	Interdisciplinary
4.	Do as directed: i) Write a story for $1500 \div 5 = ?$	3x1=3	Analytical Skill

ii)

.....
.....
...
.....
.....

iii)

Complete the sentence:

Dividend = Divisor x Quotient +


Simplify:

$$(5 \times 300) + (65 + 1)$$

.....
...
.....
.....
.....
.....

5	<p>Fill in the placeholders:</p> <p>i) $18 \div 18 = \dots\dots\dots$</p> <p>ii) $2/5$ is read as $\dots\dots\dots$</p>	2x1=2	Critical Thinking and Problem Solving
6.	<p>Write the numerator of each of the following fractions -</p> <p>i) $3/7$ $\dots\dots\dots$</p> <p>ii) $4/8$ $\dots\dots\dots$</p>	2x1=2	HOT
7.	<p>Word Problems -</p> <p>i) A book seller has 15 books. He sold 7 books.</p> <p>What fraction of the books does he have now?</p> <p>$\dots\dots\dots$</p> <p>$\dots\dots\dots$</p> <p>$\dots\dots\dots$</p> <p>$\dots\dots\dots$</p> <p>$\dots\dots\dots$</p> <p>$\dots\dots\dots$</p> <p>$\dots\dots\dots$</p> <p>$\dots\dots\dots$</p> <p>ii) If 20 chocolates are shared equally by 5</p>	1x3=3	Evaluation

	<p>(i) $0 \div 20 = \dots\dots\dots$</p> <p>(ii) There are $\dots\dots\dots$ one- half in a whole.</p> <p>(iii) $(780 \div 10) + 5 = \dots\dots\dots$</p> <p>(iv) When the numerator and denominator are equal, the $\dots\dots\dots$ represents the whole or 1. (fraction/division)</p>		
--	---	--	--



ARMY PUBLIC SCHOOL GWALIOR

CLASS -III

ACADEMIC SESSION 2021-22

WORKSHEET (SELF –ASSESSMENT)



Subject: EVS

Assignment No. : 7

Allotment Date: 15 October 2021

S.N	QUESTIONS	MARKS	NATURE
1.	<p>Fill in the blanks by choosing the correct options :</p> <p>i)Cows and buffaloes live in a(shed /stable)</p> <p>ii)It is our duty to keep our clean.(houses / cinema halls)</p>	2X1=2	Information
2.	<p>Answer the following-</p> <p>Why do we need directions?</p> <p>.....</p> <p>.....</p> <p>Name the four main directions.</p> <p>.....</p> <p>.....</p> <p>How should you behave with your neighbours ?</p> <p>.....</p> <p>.....</p>	1x3=3	Understanding

3.	Name the neighborhood services which help to make our life easy. (any two)	1x2=2	Interdisciplinary
4.	Write true (T) or false (F) against the following statements: i) Neighbours celebrate festivals together. _____ ii) A light house is a landmark. _____ (iii) We should throw garbage in the open. _____	3X1=3	Analytical Skill
5.	Choose the correct option: (i) To report a theft, we go to a a) bank b) office c) police station (ii) Number of main directions are – a) two b) three c) four	2X1=2	Critical Thinking and Problem Solving
6.	How can you help an elderly man living all alone in your neighbourhood?	1x2=2	HOT
7.	Answer the following questions: (i) Name the factors required for good home. (ii) What is a neighbourhood? (ii) What is a compass?	3X1=3	Evaluation

8.	<p>Answer the following questions :</p> <p>(i) What is the direction between south and west?</p> <p>.....</p> <p>(ii) How can you help an elderly man living all alone in your neighbourhood?</p> <p>.....</p> <p>.....</p> <p>(iii) Name any two landmarks you see on your way to market.</p> <p>.....</p> <p>.....</p>	3x1=3	Communication
----	---	-------	---------------



ARMY PUBLIC SCHOOL GWALIOR

CLASS -III

ACADEMIC SESSION 2021-22

WORKSHEET (SELF –ASSESSMENT)



Subject: Computer

Assignment No. : 7

Allotment Date: 15 October 2021

S. NO	QUESTIONS	MARKS	NATURE
1	<p>Tick the correct answer</p> <ol style="list-style-type: none">1. It is a program used to draw pictures. MS-Word Notepad MS-Paint2. This tool is used to delete a part of any drawing. Eraser tool New tool Line tool3. The feature that stretches the one end of the drawing. Skew Stretch Flip4. The tool that shows the bigger and closer view of an Image. Stamp Text Zoom	4X1=4	Information

2	<p>Fill in the blanks-</p> <p>i) Selection Tool is used to the object from one place to another.</p> <p>ii) You must your image for future use.</p> <p>iii) will create the mirror image of a picture.</p> <p>iv)..... Tool is used to cut the selected part of the image.</p> <hr/>	4x1=4	Understanding
4	<p>Answer the following</p> <p>How do we draw in MS-Paint?</p> <p>.....</p> <p>.....</p>	2X1=2	Analytical Skill



ARMY PUBLIC SCHOOL GWALIOR

CLASS -III

ACADEMIC SESSION 2021-22

WORKSHEET (SELF –ASSESSMENT)



Subject: G.K

Assignment No. : 7

Allotment Date: 15 October 2021

SNO.	QUESTIONS	MARKS	NATURE
1.	<p>Fill in the blanks:</p> <p>1. city is known as the ‘City of mosques and muslin’.</p> <p>2. is nicknamed of Indian cricket player Virat Kohli.</p> <p>3. There are days in a leap year.</p> <p>4. won the Wimbledon Men’s Single title in 2016.</p>	4X1=4	Understanding
2.	<p>True or False:</p> <p>1. 5 is written in Roman numerals as V.</p> <p>.....</p> <p>2. Germany won the 2015 FIFA World Cup.</p> <p>.....</p> <p>3. The capital of France is Paris.</p>	3x1=3	Analytical Skill

3.

.....
Match the following:

1. rugby - Canada
2. ice hockey - India
3. chess - England

3x1=3



ARMY PUBLIC SCHOOL GWALIOR

CLASS -III

ACADEMIC SESSION 2021-22

WORKSHEET (SELF –ASSESSMENT)



Subject: Work Education

Assignment No. : 7

Allotment Date: 15 October 2021

S.NO	QUESTIONS	MARKS	SKILLS
1.	What is trophy? A. A trophy is a book B. A trophy is a fruit C. A trophy is a prize D. A trophy is a mobile	1	Creativity
2.	What is the oldest trophy in the world? A. Barcia Trophy B. Benson and Hedges C. C.K. Naidu Trophy D. The America's Cup	1	Creativity
3.	Rangaswami Cup related to which game? A. Hockey B. Cricket C. Basketball D. Chess	1	Creativity
4.	Which is not a type of trophy? A. Cloth Trophy B. Wooden Trophy C. Acrylic Trophy D. Metal Trophy	1	Creativity
5.	What is the bottom part of a trophy called? A. Base B. Value C. Scale D. Proportion	1	Creativity
6.	America cup is related to which game? A. Hockey B. Cricket C. Yatch Racing D. Badminton	1	Creativity
7.	Jules Rimet Trophy related to which game? A. National Hockey cup B. World Cricket cup C. World Soccer cup D. World chess cup	1	Creativity

8.	Air Racing game related to which trophy? A. Jawaharlal Challenge B. Barcia Trophy C. Benson and Hedges D. C.K. Naidu Trophy	1	Creativity
9.	Burdwan cup is related to which game? A. Cricket B. Yatch Racing C. Badminton D. Weight Lifting	1	Creativity
10.	Rugby Trophy related to which game? A. Webb Ellis Cup B. Jawaharlal Challenge C. Barcia Trophy D. Benson and Hedges	1	Creativity



ARMY PUBLIC SCHOOL GWALIOR

CLASS -III

ACADEMIC SESSION 2021-22


WORKSHEET (SELF –ASSESSMENT)



Subject: Art Education

Assignment No. : 7

Allotment Date: 15 October 2021

S.NO	QUESTIONS	MARKS	SKILLS
1.	Principle of art which refers to the decoration of the surface of art with repeated units. A. Contrast B. Rhythm C. Movement D. Pattern	1	Creativity
2.	This artwork illustrates this Element of Art:  A. Pattern B. Colours C. Perspective D. Variety	1	Creativity
3.	Colours and shapes that repeat in below image are called_____.	1	Creativity



- A. A pattern.
- B. A dash.
- C. A mood.
- D. Exotic.

4.

The pattern in this image below is made of?



- A. Geometric forms
- B. Geometric shapes
- C. Organic shapes
- Organic forms

1

Creativity

5.

Is repetition regular or different patterns

- A. Regular.
- B. Different

1

Creativity

6.


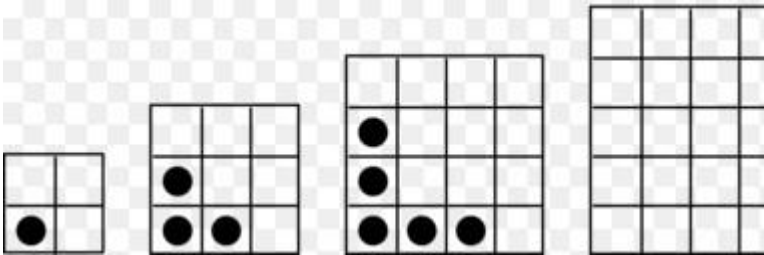

The sequence of figures shows a pattern. If the pattern repeats, how many small squares will figure 5 have?

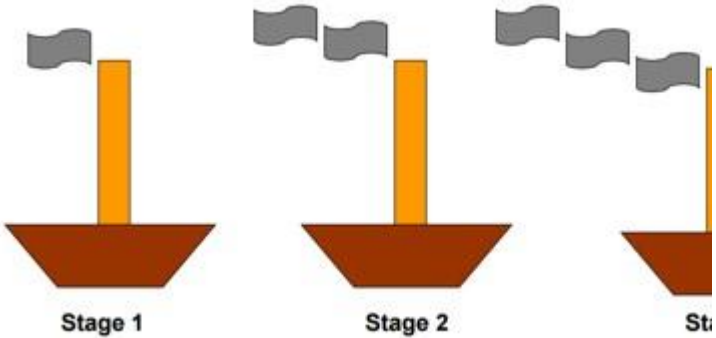



- A. 12 small squares
- B. 8 small squares
- C. 9 small squares
- D. 10 small squares

1

Creativity

	.		
7.	<p>The sequence of figures shows a pattern. If the pattern repeats, how many bubbles will Stage 6 have?</p>  <p>A. 6 bubbles B. 4 bubbles C. 5 bubbles D. 7 bubbles</p>	1	Creativity
8.	<p>The sequence of figures shows a pattern. If the pattern repeats, how many small circles will figure 4 have?</p>  <p>A. 7 small circles B. 5 small circles C. 9 small circles D. 6 small circles</p>	1	Creativity
9.	<p>The sequence of 3 figures shows a pattern. If the pattern repeats, how many triangles will the figure 5 have?</p>  <p>A. seven triangles B. six triangles C. four triangles D. five triangles</p>	1	Creativity

<p>10.</p>	<p>The sequence of figures shows a pattern. If the pattern repeats, how many smoke signs will Stage 4 have?</p> <div style="text-align: center;">  <p>Stage 1 Stage 2 Stage 3</p> </div> <p>A. 3 smoke signs B. 4 smoke signs C. 5 smoke signs D. 6 smoke signs</p>	<p>1</p>	<p>Creativity</p>



ARMY PUBLIC SCHOOL GWALIOR

CLASS -III

ACADEMIC SESSION 2021-22

WORKSHEET (SELF –ASSESSMENT)




Subject: Health and Physical Education

Assignment No. : 7

Allotment Date: 15 October 2021

S.NO	QUESTIONS	NATURE	MARKS
	Fill in the blanks		3x1=3
1.	We should do _____ before go to play ground a) Wash hands b) Eat food c) Both A and B d) None of the above	Informative	
2.	We should shut _____ before flushing. a) Lid b) Door c) Mouth d) None of the above	Informative	
3.	We should always keep things in bedroom _____. a) Unorganized b) Organized c) Dirty d) None of the above	Understanding	
	True and False		3x1=3
4.	We should wash our hand before and after lunch	Informative	
5.	We should not dry our hand before stepping out	Understanding	
6.	We obtain food from environment	Analytic skill	
	MCQs		4x1=4
7.	What things destroy environment?	Understanding	

	<p>a) Pollution b) Increase of science and technology c) Both A and B d) None of above</p> <p>8. We should wash our hand by using.</p> <p>a) Soap and Water b) Only water c) Hair Shampoo d) All of the above</p> <p>9. What thing we should always carry to our school?</p> <p>a) Mobile phone b) Hand sanitizer c) Soap d) None of the above</p> <p>10 How we should keep our homes?</p> <p>a) Dirty b) Clean c) Both A and B d) None of the above</p>	<p>Informative</p> <p>Informative</p> <p>Understanding</p>	
--	--	--	--



ARMY PUBLIC SCHOOL GWALIOR

CLASS -III

ACADEMIC SESSION 2021-22

WORKSHEET (SELF –ASSESSMENT)




Subject: Discipline

Assignment No. : 7

Allotment Date: 15 October 2021

S. No	Questions	Marks	Nature
1.	<p>Fill in the blanks-</p> <p>i. It is so important to take care of our _____</p> <p>ii. It is our _____ health.</p> <p>iii. It is our _____ health.</p> <p>iv. It is taking care of our _____.</p> <p>v. Taking care of your _____.</p> <p>vi. We can _____ our friends plants on their birthdays.</p>	06	Knowledge & Understanding
2.	<p>Choose the correct answers-</p> <p>How can we take care of our heath?</p> <p>i. By being active- Playing outside home on playground or in park</p> <p>ii. You can ride by cycle to stay fit and healthy</p> <p>iii. Eating healthy food each day</p> <p>iv. Eating less of maggi, pasta, pizza and burger</p> <p>v. Eating salads and fruits daily</p> <p>vi. By helping mom in kitchen or small work like watering plants</p>	03	
3.	<p>True and False</p> <p>i. We must take care of our eyes.</p> <p>ii. We must remain attentive during on line classes.</p>	01	Thinking and Writing Skills



ARMY PUBLIC SCHOOL GWALIOR



CLASS -III

ACADEMIC SESSION 2021-22

WORKSHEET (SELF –ASSESSMENT)

Subject: Music

Assignment No. : 7

Allotment Date: 15 October 2021

S. No	Answer the following questions:	Marks	Skills
1.	What are the types of rhythm lay in classical music? a. 1 b. 2 c. 3	1	Informative
2.	When the rhythm (lay) is slow, it is called? a. Vilambit b. Chalat c. Drut	1	Informative
3.	When the rhythm (lay) is simple, it is called? a. Drut b. Madhya c. None of the above	1	Informative
4.	When the rhythm (lay) is faster than normal, it is called? a. Drut b. Madhya c. Vilambit	1	Informative
5.	What is called rhythm in music? a. To the same speed b. To vowels swar c. None of them	1	Informative
6.	According to Sangeet Ratnakar, which varna groups are called Alankaras? a. Regular varna group b. regular lay c. regular rhythm	1	Informative
7.	What is the first step in the learning of music? a. Alankar b. Sargam c. Rhythm	1	Informative
8.	What is Alankar number 1(one)? a. Sa, re, ga, ma, pa, dha, ni, sa,	1	Informative

	<p>b. Sa sa, re re, ga ga, ma ma, pa pa, dha dha, ni ni, sa sa,</p> <p>c. None of them</p>		
9.	<p>What is Alankar number 4(four)?</p> <p>a. Sa re ga, re ga ma, ga ma pa, ma pa dha, pa dha ni, dha ni sa,</p> <p>b. Sa re ga ma, re ga ma pa, ga ma pa dha, ma pa dha ni, pa dha ni sa,</p> <p>c. None of them.</p>	1	Informative
10.	<p>What is speed in music called?</p> <p>a. Swar</p> <p>b. rhythm (Taal)</p> <p>c. Lay</p>	1	Informative



ARMY PUBLIC SCHOOL GWALIOR

CLASS -III

ACADEMIC SESSION 2021-22

WORKSHEET (SELF –ASSESSMENT)


Subject: Music (Dance)

Assignment No. : 7

Allotment Date: 15 October 2021

S.NO.	Answer the following questions:	Marks	Skills
1.	This dance form originated in Italy. a. Ballet b. Salsa c. None of them	1	Understanding
2.	The word Ballet in Italian means a. To learn b. To dance c. To speak	1	Understanding
3.	Ballet is which kind of dance. a. Artistic dance b. Special dance c. None of them	1	Understanding
4.	Yangko dance is a dance form of a. Japan b. China c. India	1	Understanding
5.	Yangko dance is which kind of dance. a. Folk dance b. Classical dance c. None of them	1	Understanding
6.	This dance is a Latin dance a. Salsa b. Tango c. Freestyle	1	Understanding
7.	How many styles of salsa are there? a. 1 b. 3 c. 2	1	Understanding
8.	Instrument used in salsa dance is a. Clave b. Drama c. Piano	1	Understanding
9.	This dance is also called b-boying or breaking a. Break dance b. Contemporary	1	Understanding

	c. Robotics		
10.	How many elements are in break dance? a. 2 b. 3 c. 4	1	Understanding



ARMY PUBLIC SCHOOL GWALIOR



CLASS -III

ACADEMIC SESSION 2021-22

WORKSHEET (SELF –ASSESSMENT)

Subject: Library

Assignment No. : 7

Allotment Date: 15 October 2021

S.N O	QUESTIONS	MARKS	SKILLS
	Answer the following questions on the basis of the story 'The foolish farmer' given in the notes.		
1	Why did god give a hen to the farmer ?	01	Comprehension
2	What did the Farmer's neighbour suggest ?	01	Thinking
3	Why did the farmer kill the hen ?	01	Comprehension
4	What are the two lessons this story teaches ?	01	Cognitive skills
5	Complete the following sentences : The Farmer was	01	Understanding
6	He was a hard- working, simple and	01	Analysis
7	Some of his Neighbours were naturally	01	Comprehension

8	The neighbor's idea appealed to the	01	Understanding
9	We should learn to work harder if	01	Analysis
10	We must think twice before we	01	Critical analysis

