

**ARMY PUBLIC SCHOOL GWALIOR**  
**CLASS -II**  
**ACADEMIC SESSION 2021-22**  
**WORKSHEET (SELF –ASSESSMENT)**



Subject: English

Assignment No. : 7

Allotment Date: 15 October 2021

.NO.	QUESTIONS	MARKS20	NATURE
1	<p><b>Fill in the blanks-</b></p> <p>1. .... is the planet on which we live on. (Earth / Mars)</p> <p>2. ....is the national bird of India. (Peacock / Parrot)</p> <p>3. All the thieves was sent to the .....( Prison / Home)</p> <p>4. Dr Salim Ali is called the ..... man of India.(Bird / Iron)</p>	(4x1=4)	Information
2	<p>(a) Write the rhyming words used in the poem.</p> <p><b>If I could be an Astronaut</b></p> <p>Wish - .....</p> <p>There - .....</p> <p>Fish - .....</p> <p>Cars -.....</p>	(4x0.5=2)	Understanding

3	<b>Answer the following questions.</b> (a).Name the planets that the child would not like to visit .  .....  .....  (b).What did the old man give Jack?  .....  .....  (c)Which bird makes a humming sound?  .....  .....	(3x2=6)	Interdisciplinary
4	<b>Fill in the blanks with suitable describing words.</b>  a. Radha is very .....girl. ( talkative / four ) b. Disha has ..... hair.( curly / bitter) c. Mother cooks ..... Dishes. ( tasty / long) d. Eat ..... fruits daily. ( big / fresh)	(4x1=4)	Analytical Skill
5	<b>Match the following words with their meanings:</b>  COLUMN A.    COLUMN B  (a) Escape                          Find or learn something for the first time  (b) nasty                          runaway	(4x1=4)	Critical  Thinking and  Problem  Solving

	(c) Discover	a person who can travel in space		
	(d) Astronaut	unkind, rude		



**ARMY PUBLIC SCHOOL GWALIOR**  
**CLASS -II**  
**ACADEMIC SESSION 2021-22**  
**WORKSHEET (SELF -ASSESSMENT)**




**Subject: Hindi**

**Assignment No. : 7**

**Allotment Date: 15 October 2021**

संख्या	प्रश्न र	अंक	प्रकृति
प्र.1	निम्नलिखित शब्दों के अर्थ लिखो I -आवश्यकता - ii -जीवित - iii दृउपहार-	3	बोधत्मक
प्र.2	वाक्य पूरे करो - 1. रशीद को रोने की आवाज ःःःः दी - 2. कोई चोटःःः है तो दर्द होता है - 3. रशीद कुल्हाड़ी लेकरःःः दिया- 4. वह लकड़ियां ःःःः शहर जाता है -	2	सूचनपरक
प्र.3	सही उत्तर के सामने $\sqrt{\quad}$ लगाओ 1. बंदर कैसा था ? I ) शरारती                      ii) हटी                      iii) भोला 2. बंदर का दोस्त कौन था ? i) खरगोश                      ii) कुत्ता                      iii) बच्चा 3. बच्चा क्या खाना चाहता था ? i) रोटी                      ii) मिठाई                      iii) फल	3	अंतः विशयात्मक

<p>प्र.4</p>	<p>बहुवचन लिखिए</p> <p>1. गलती -</p> <p>2. लकड़ी-</p> <p>3. कुल्हाड़ी-</p> <p>4. दवाई-</p>	<p>2</p>	<p>रूचन परक</p>
<p>प्र.5</p>	<p>उल्टे अर्थ वाले शब्द लिखो</p> <p>i) साफ -</p> <p>ii) सूखा-</p> <p>iii) जीवित-</p> <p>iv) बेचना</p>	<p>2</p>	
<p>प्र.5</p>	<p>शब्दों से वाक्य बनाओ</p> <p>i)</p> <p>शरीर-.....</p> <p>.....-</p> <p>ii)</p> <p>दर्द.....</p> <p>.....-</p> <p>iii) हरा</p> <p>भरा.....</p> <p>.....-</p>	<p>4</p>	<p>अंतः विशयात्मक</p>
<p>प्र.6</p>	<p>निम्नलिखित प्रश्नों के उत्तर लिखिये-</p> <p>1. बंदर ने खेत से पत्ता गोभी क्यों उखाड़ी ?</p> <p>उत्तर-.....</p> <p>.....</p> <p>2. रशीद के पिता रोज जंगल क्यों जाते थे ?</p> <p>उत्तर-.....</p> <p>.....</p> <p>-</p>	<p>4</p>	<p>बोधायत्मक</p>



**ARMY PUBLIC SCHOOL GWALIOR**  
**CLASS -II**  
**ACADEMIC SESSION 2021-22**  
**WORKSHEET (SELF -ASSESSMENT)**



**Subject: Mathematics**  
**Allotment Date: 15 October 2021**

**Assignment No. : 7**

S. NO.	QUESTIONS	MARKS	NATURE
		<b>20</b>	
1	<b>Fill in the blanks:-</b>  1. Fraction means _____ of a whole.  2. Four ____ makes a whole.  3. ____ half makes a whole.	<b>3x1=3</b>	<b>Understanding</b>
2.	<b>Write the ordinal number for-</b>  1. 4- 2. 6- 3. 9- 4. 5-	<b>4x1=4</b>	<b>Critical thinking</b>
3.	<b>Write even or odd</b>  a) 15- b) 44- c) 53- d) 95- e) 57- f) 88- -----	<b>6x0.5=3</b>	<b>Understanding</b>

4.	<p><b>Do as directed:</b></p> <p>(a) Choose the smallest odd number</p> <p>1 , 13, 22, 56 , 45 _____</p> <p>(b) Choose the greatest even number</p> <p>13, 86, 23, 75, 98 _____</p> <p>(c) Write odd numbers between 19 and 22. _____</p> <p>(d) Write the even numbers between 33 and 37_____.</p>	4x1=4	Problem solving
5	<p><b>Match the following:</b></p> <p>(a) 39                      even number</p> <p>(b) 44                      One fourth</p> <p>(c) <math>\frac{1}{4}</math>                      odd number</p>	3x1=3	Interdisciplinary
5.	<p><b>Answer the following questions-</b></p> <p>1.What do you mean by ordinal numbers?</p> <p>Ans-</p> <p>B. What do you mean by odd numbers?</p> <p>Ans-</p>	3x1=3	HOTS



**ARMY PUBLIC SCHOOL GWALIOR**  
**CLASS -II**  
**ACADEMIC SESSION 2021-22**  
**WORKSHEET (SELF –ASSESSMENT)**

Subject: EVS

Assignment No. : 7


Allotment Date: 15 October 2021

S.No.	QUESTIONS	MARKS	NATURE
		<b>20</b>	
1	<p><b>Fill in the blanks using given help box.</b></p> <div style="border: 1px solid black; padding: 5px; width: fit-content; margin: 10px auto;">Zebra crossing , email , post box , track</div> <p>(i) .....is sent using a computer. (ii) We post our letters or greeting cards in the..... (iii) Trains travels on..... (iv) We should cross the road using the.....</p>	<b>4x1=4</b>	<b>Information</b>
2	<p><b>Tick the correct answer-</b></p> <p>1. The fastest means of communication is .....</p> <p>a. newspaper      b. TV      c. letter</p> <p>2. The fastest means of transport is.....</p> <p>a. aeroplane      b.boat      c.ice</p>	<b>2x1=2</b>	<b>Understanding</b>





<b>5</b>	<b>Answer the following questions-</b>  1. Which is the oldest method used for communication?  Ans.....  .....  2. Name any three types of water vehicles.  Ans.....  .....	<b>2x1=2</b>	<b>Analytical skill</b>
<b>6</b>	<b>Answer the following questions-</b>  1. Why should we not play on the road?  Ans.....  .....  2. How did people travel in the earlier days?  Ans.....  .....	<b>2 x2= 4</b>	<b>HOTS</b>



**ARMY PUBLIC SCHOOL GWALIOR**  
**CLASS -II**  
**ACADEMIC SESSION 2021-22**  
**WORKSHEET (SELF –ASSESSMENT)**




**Subject: Computer**  
**Allotment Date: 15 October 2021**

**Assignment No. : 7**

S. NO.	QUESTIONS	MARKS	NATURE
1	<p><b>Tick the correct answer</b></p> <p>1. Monitor is also known as .....</p> <p>i) EDU ii) VDU iii) CDU Ans-</p> <p>2. Information displayed on the monitor is called-</p> <p>i) Softcopy ii) Hardcopy iii) Plaincopy Ans-</p> <p>3. A monitor looks like a .....</p> <p>i) Microwave ii) Car iii) Television Ans-</p>	3x1=3	Information
2	<p><b>Fill in the blanks:-</b></p> <p>1. A _____ is used to display text, pictures and videos. 2. The monitor has a _____ button to switch it on or off. 3. A monitor looks like a _____ device.</p>	3X1=3	Understandin g

3	<b>Write T for 'True' and F for 'False' statements:-</b> 1. A monitor looks like television. ( ) 2. A monitor is used to type words. ( ) 3. CRT and LCD are two types of monitor. ( ) 4. A monitor is also known as VDU. ( )	4x1=4	Understandin g
---	--	-------	-------------------




**ARMY PUBLIC SCHOOL GWALIOR**  
**CLASS -II**  
**ACADEMIC SESSION 2021-22**  
**WORKSHEET (SELF –ASSESSMENT)**




**Subject: G.K**  
**Allotment Date: 15 October 2021**

**Assignment No. : 7**

S. NO.	QUESTIONS	MARKS 20	NATURE
1.	<p><b>Tick the correct answer:</b></p> <p>1) We chop vegetable on _____ a) Tray b) chopping board c) sieve Ans-</p> <p>2) Rubber is made from _____ a) Leaf b) fibre c) latex Ans-</p> <p>3) A reddish brown dye is obtained from- a) Latex b) henna plant c) banana tree Ans-</p> <p>4. Which is the cleverest minister in Akbar's court? A) Tenali ram b) Birbal c) Todarmal Ans-</p>	4x1=4	Understanding

<p><b>2.</b></p>	<p><b>Answer the following-</b>  Q. 1Write any 5 sports name?    Ans-1.....  2.....  3.....  4.....  5.....</p> <p>Q. 2.. Write any 2 movie names in which animals starred in?    Ans- 1.....  2.....</p> <p>Q.3 Write two uses of coconut.    Ans- 1.....  2.....</p>	<p><b>3x2=6</b></p>	<p>Critical Thinking</p>
<p><b>3</b></p>	<p>Fill in the blanks :  1)White spotted dog is starred in the film _____  2. ____ is used to filter tea and other liquid .  3. Babe :Pig in the city is filmed on a _____.</p>	<p><b>3x1=3</b></p>	<p>Problem solving</p>
<p><b>5</b></p>	<p><b>State True/ False</b></p> <p>1 Mint is not a medicinal plant. ( )  2. Stuart Little movie is filmed on a rat. ( )  3.It is not safe to chat with strangers( )  4. Neem tree is used to make different medicines.( )</p>	<p><b>4x1=4</b></p>	<p>Interdisciplinary</p>
<p><b>6.</b></p>	<p><b>Identify the given picture -</b></p>  <p>_____</p>	<p><b>3x1=3</b></p>	<p>understanding</p>





**ARMY PUBLIC SCHOOL GWALIOR**  
**CLASS -II**  
**ACADEMIC SESSION 2021-22**  
**WORKSHEET (SELF –ASSESSMENT)**




**Subject: Work Education**  
**Allotment Date: 15 October 2021**

**Assignment No. : 7**

S.N	QUESTIONS	MARKS	NATURE
1.	_____ is the another name of string puppet? A. Marionette B. Bear C. Human D. Dog	1X1=1	Information
2.	I am the tallest animal in the world. I am a _____. A.Lion B.Giraffe C.Elephant D.None of these	1X1=1	Understanding
3.	_____ angle paper plate makes the face of Bunny. (A) 45 degree (B) 90 degree (C) 100 degree	1X1=1	Information
4.	Birds fly with the help of their wings. A. True B. False	1X1=1	Creativity



5.	The shape of bird's wings are similar to circular. A. True B. False	1X1=1	Creativity
6.	We use puppets for Painting. A. True B. False	1X1=1	Creativity
7.	How many white paper plates are used in video Bunny Mask? A. 5 B.3 C.6 D.2	1X1=1	Creativity
8.	Which material we have not used while making House (Cut & Paste) video? A. Scissor B. Coloured papers C. Fevicol D. Thread	1X1=1	Creativity
9.	Which color paper is used to make bunny's ear? A.black Bwhite C.pink	1X1=1	Creativity
10.	How many oval shapes are used to make giraffe. A. 2 B. 4 C. 6 D. 5	1X1=1	Creativity



**ARMY PUBLIC SCHOOL GWALIOR**  
**CLASS -II**  
**ACADEMIC SESSION 2021-22**  
**WORKSHEET (SELF –ASSESSMENT)**




**Subject: Art Education**  
**Allotment Date: 15 October 2021**

**Assignment No. : 7**

S.N	QUESTIONS	MARKS	NATURE
1.	Warli painting is a _____. A. White paint on red background B. Simple shapes and lines C. People dancing	1X1=1	Information
2.	_____ are the basic Shapes A. Triangle, oval, square B. Square, rectangle, Circle C. Circle, oval, triangle D. Square, Triangle, Circle	1X1=1	Creativity
3.	The lighter the value, the lead in the pencil is _____. A. Hard B. Soft C. Dark D. Wide	1X1=1	Creativity
4.	Yellow, red and orange are warm colours. A. True D. False	1X1=1	Creativity
5.	White, green and cream are cool colours. A. True B. False	1X1=1	Creativity
6.	Is this a warli art?	1X1=1	Creativity



- A. Yes
- B. No

7	<p>Which state is known for its Warli paintings?</p> <ul style="list-style-type: none"> <li>A. Gujarat</li> <li>B. Rajasthan</li> <li>C. Maharashtra</li> </ul>	1X1=1	Creativity
8	<p>What is pictured here?</p>  <ul style="list-style-type: none"> <li>A. A wedding scene</li> <li>B. Dancers and a tarpa instrument player.</li> <li>C. Dancers and a bagpipe player</li> <li>A. D. Warli villagers celebrating a religious holiday</li> </ul>	1X1=1	Creativity
9	<p>How many sides triangle have?</p> <ul style="list-style-type: none"> <li>A. 4</li> <li>B. 5</li> <li>C. 3</li> <li>D. 2</li> </ul>	1X1=1	Creativity
10	<p>Which pencil is capable of making the darkest values?</p> <ul style="list-style-type: none"> <li>A. HB</li> <li>B. B</li> <li>C. 2B</li> <li>D. 4B</li> </ul>	1X1=1	Creativity



**ARMY PUBLIC SCHOOL GWALIOR**  
**CLASS -II**  
**ACADEMIC SESSION 2021-22**  
**WORKSHEET (SELF –ASSESSMENT)**




**Subject: Health and Physical Education**  
**Allotment Date: 15 October 2021**

**Assignment No. : 7**

S.no	Question	Nature	Marks
	<b>Fill in the blanks</b>		MM-10 3 x 1 = 3
1.	Food come from _____ and _____.  a) Stores and shops b) Plants and animals c) Both A and B d) None of the above	Informative	
2.	Food is prepared in _____ at home.  a) Bedroom b) Drawing room c) Kitchen d) None of the above	Analytic Skill	
3.	_____ substance that stimulate receptors on our taste buds.  a) Chemical b) Biological c) Colour d) None of the above	Informative	
	<b>True/False</b>		
4.	Does walking improve your concentration.	Understanding	3 x 1 = 3
5.	We have to use both feet while running.	Understanding	
6.	The shape of football ground is rectangular.	Informative	
	<b>MCQs</b>		
7.	Write down the names of equipment of calling the number game.  a) Lime powder	Analytic skill	4 x 1 = 4

8.	<p>b) Markers c) Different size of balls d) Stick</p> <p>How many players can be in one team in calling the number game?</p> <p>a) 5 b) 8 c) 9 d) 10</p>	Informative	
9.	<p>Where do we buy food from?</p> <p>a) Grocery store b) convenience stores c) farmers markets d) All of the above</p>	Informative	
10.	<p>How do we get food?</p> <p>a) By growing b) By rearing c) By catching d) All of the above</p>	Understanding	



**ARMY PUBLIC SCHOOL GWALIOR**  
**CLASS -II**  
**ACADEMIC SESSION 2021-22**  
**WORKSHEET (SELF –ASSESSMENT)**



**Subject: Discipline**  
**Allotment Date: 15 October 2021**

**Assignment No. : 7**

S.No	Questions	Marks	Nature
1.	<p><b>Fill in the blanks-</b></p> <p>i. It is so important to take care of our _____ (health/ car)</p> <p>ii. It is our _____ health. (physical/ mental)</p> <p>iii. It is our _____ health.(minds/toys)</p> <p>iv. It is taking care of our _____.(health/ friends)</p> <p>v. Taking care of your _____. (body/health)</p> <p>vi. We can _____our friends plants on their birthdays.(gift/borrow)</p>	06	Knowledge & Understanding
2.	<p><b>Choose all the correct answers-</b></p> <p>a. How can we take care of our heath?</p> <p>i. By being active- Playing outside home on playground or in park</p> <p>ii. You can ride by cycle to stay fit and healthy</p> <p>b. Choose which is healthy food?</p> <p>i. Home cooked food</p> <p>ii. maggi, pasta, pizza and burger</p> <p>c. How can we help mom?</p> <p>iii. Eating salads and fruits daily</p> <p>iv. By helping mom in kitchen or small work like watering plants</p>	03	
3.	<p><b>True and False</b></p>		

	<ul style="list-style-type: none"><li>i. We must take care of our eyes.</li><li>ii. We must remain attentive during on line classes.</li></ul>	01	Thinking and Writing Skills
--	--	----	-----------------------------



**ARMY PUBLIC SCHOOL GWALIOR**  
**CLASS -II**  
**ACADEMIC SESSION 2021-22**  
**WORKSHEET (SELF –ASSESSMENT)**



**Subject: Music (Dance)**  
**Allotment Date: 15 October 2021**

**Assignment No. : 7**

S.NO	Answer the following questions:	Marks	Skills
1.	We should be _____ in class for better learning. a. Attentive b. Disciplined c. Good	1	Informative
2.	Should not eat while dancing as it is. a. Disrespectful b. Manner less c. None of the above	1	Informative
3.	Should dress properly to dance class as it looks. a. Decent b. Perfect c. Neat	1	Informative
4.	If _____ is playing don't enter or exit the classroom a. Video b. Music c. Games	1	Informative
5.	Should stand behind the _____ as it gives space to teach and respect. a. Student b. Teacher c. None of the above	1	Informative
6.	We should not be afraid to ask questions as it helps to become a proper a. Dancer b. Musician c. Gamer	1	Informative
7.	Which student should stand in front, unless you know the dance? a. Short height b. Advanced c. None of them	1	Informative
8.	We should not leave class early and must talk to whom before class? a. Teacher b. Students c. Friends	1	Informative
9.	What should we listen carefully to understand the lyrics, rhythm and timing? a. Music b. Dance c. Steps	1	Informative
10.	How should we enter the class, if we come late? a. Slowly b. Quickly c. None of them	1	Informative






**ARMY PUBLIC SCHOOL GWALIOR**  
**CLASS -II**  
**ACADEMIC SESSION 2021-22**  
**WORKSHEET (SELF –ASSESSMENT)**

**Subject: Music (Dance)**

**Assignment No. : 7**

**Allotment Date: 15 October 2021**

Sr. No.	Answer the following questions:	Nature	Marks
<b>A.</b>	<b>Fill in the blanks:</b>		10
1.	In Bharatanatyam dancers have to express the song with____. a. Sadness b. Emotions c. Happiness	Informative	1
2.	Expressions in dance is known as____ a. Bhaav b. Jathi c. Taal	Informative	1
3.	The first volume(matra) of taal is called____ a. Sam b. Khali c. vibhag	Informative	1
<b>B.</b>	<b>True/ False:</b>		
4.	We represent rhythm with the clap. a. True b. False	Informative	1
5.	'Lakdikathi' song is all about a horse? a. True b. False	Informative	1
6.	Music plays important role in dance a. True b. False	Informative	1
<b>C.</b>	<b>True/False:</b>		
7.	During rainy season what do we see in sky which has seven colours. a. Rainbow b. Clouds c. Birds	Informative	1
8.	Wood in dance is used as a. Stick b. Door c. Floor	Informative	1
9.	What is the symbol for sam in taal? a. X b. 0 c. #	Perceptual	1
10.	What is the symbol for khali in rhythm? a. 1 b. 2 c. 0	Perceptual	1



**ARMY PUBLIC SCHOOL GWALIOR**  
**CLASS -II**  
**ACADEMIC SESSION 2021-22**  
**WORKSHEET (SELF –ASSESSMENT)**



**Subject: Library**  
**Allotment Date: 15 October 2021**

**Assignment No. : 7**

Sr. No	Answer the following questions on the basis of the story 'Cleanliness in the neighbourhood' given in the notes.	Nature	Marks
			10
1.	Why is cleanliness very important ? ..... a. .... .....	Thinking	1
2.	What may cause mosquitoes bite? ..... .....	Cognitive skills	1
3.	What do the flies carry with them? ..... .....	Analysis	1
4	How should be the house in which you live? ..... .....	Evaluation	1
5	Where should the rubbish be kept and thrown? ..... .....	Critical analysis	1
6	<b>FILL IN THE BLANKS WITH SUITABLE WORDS:</b> Stagnant water causes breeding of.....	Understandi ng	1
7	Mosquito bite causes.....	Comprehens ive	1
8	.....breeding garbage heaps.	Comprehens ive	1
9	Your house should be open enough to allow fresh air and.....	Analysis	1
10	Flies leave ..... On our food.	Thinking	1