

ARMY PUBLIC SCHOOL GWALIOR

CLASS -I

ACADEMIC SESSION 2021-22

WORKSHEET (SELF –ASSESSMENT)





Subject: English


Assignment No. : 7

Allotment Date: 15 October 2021

S.N	QUESTIONS	MARKS	SKILLS/COMPE TENCIES
1	<p>Complete the following sentences.</p> <p>1.The name of my school is-----.</p> <p>2.There are ----- Children in my class.</p> <p>3.My teacher`s name is ----- .</p> <p>4. My partner`s name is -----.</p>	4X4=4	Information
2	<p>Write Yes or No in the given boxes for the following sentences</p> <p>1.Yavi`s school has many class rooms. ()</p> <p>2.Her class room is red in color. ()</p> <p>3.Devansh has a blue colour bag. ()</p> <p>4.Gunjan has a green colour bag. ()</p> <p>5.Yavi likes to swim ()</p>	5X5=5	Understanding

3	<p>Write any five sentences about " My Birthday Party".</p> <p>(i)</p> <p>(ii)</p> <p>(iii)</p> <p>(iv)</p> <p>(v)</p>	5x5=5	Interdisciplinary
4	<p>Write word meaning.</p> <p>1.classmate</p> <p>2.compound</p> <p>3.pretty</p>	3X1=3	Analytical Skill
5	<p>Choose the right word to make correct sentences .</p>  <p>1.A dog lies(in/on) the rug.</p>  <p>2.A mouse is(in/on) the drawer.</p>	2X1=2	Critical Thinking and Problem Solving
6	<p>Match the words with their similar meaning :</p> <p>contented Listen</p> <p>hear large</p>	4X.5=2	HOT

	huge laden	loaded satisfied		
7	Answer the following questions : Q1. On which street did Mohanlal have his shop ? _____ Q2 . What did Tina’s mother give her in return for her kind deed ? _____		2X1=2	Evaluation
8	Write a rhyming word for each of the following words 1.caught 2.mop 3.bond		3X1=3	Communication Skills



ARMY PUBLIC SCHOOL GWALIOR

CLASS -I

ACADEMIC SESSION 2021-22

WORKSHEET (SELF –ASSESSMENT)







Subject: Hindi


Assignment No. : 7

Allotment Date: 15 October 2021

संख्या	प्रश्न/उत्तर	अंक	प्रकृति
प्र.1	<p>सही शब्द चुनकर वाक्य की खाली जगह में लिखो –</p> <p>{ मैदा ,बैलगाड़ी ,ऐनक ,शैतान ,तालाब }</p> <p>1.बैलगाड़ी _____के पास से गुजरी ।</p> <p>2.मैकू की _____ दूर जा पड़ी ।</p> <p>3.मैकू बड़ा _____ था ।</p> <p>4.एक _____ जा रही थी ।</p>	4x1=4	बोधात्मक
प्र 2	<p>ए या ऐ की मात्रा लगाकर सही शब्द बनाओ ।</p> <p>शतान बसन पदल पड़</p>	2x1=2	सूचनापरक
प्र-3	<p>नीचे दिए गए शब्दों के बहुवचन लिखो</p> <p>1.खीरा 2.केला</p>	2x1=2	
प्र-3	<p>नीचे दिए गए प्रश्नों के उत्तर लिखो</p> <p>नानी के घर के पास क्या – क्या था ?</p> <p>-----</p> <p>बैलगाड़ी पर कौन-कौन से जानवर सैर का मज़ा ले रहे थे ?</p>	4x 1=4	गहन सोच और समस्या समाधान

प्र-4	<p>नीचे दिए गए चित्रों के नाम लिखो</p>  <p>-----</p>  <p>-----</p>  <p>-----</p>  <p>-----</p>	4x.5=2	उच्चस्तरीय चिंतन
प्र-5	<p>नीचे दिए गए प्रश्नों के उत्तर लिखो</p> <p>1. नानी का घर कहा था ?</p> <p>-----</p> <p>2. बेलों पर क्या -क्या लगा था ?</p> <p>-----</p> <p>3. कौन कुछ न कुछ शरारत करता रहता था ?</p> <p>-----</p> <p>4. बेर किस रंग के थे ?</p> <p>-----</p>	4x1=4	विश्लेषणात्मक

प्र-6	दीपावली पर निबंध लिखो (चार पंक्तियाँ) ----- ----- ----- -----	4x.5=2	भाषाई कौशल
-------	---	--------	------------



ARMY PUBLIC SCHOOL GWALIOR

CLASS -I

ACADEMIC SESSION 2021-22


WORKSHEET (SELF –ASSESSMENT)



Subject: Mathematics

Assignment No. : 7

Allotment Date: 15 October 2021

S. NO.	QUESTIONS	MARKS	NATURE
1	<p>Fill in the placeholders using $>$, $<$ or $=$.</p> <p>(i) 35 _____ 38</p> <p>(ii) 49 _____ 43</p> <p>(iii) 23 _____ 23</p>	3x1=3	Information
2	<p>Split into tens and ones:</p> <p>(i) 39 = _____tens _____ones</p> <p>(ii) 42 = _____tens _____ones</p> <p>(iii) 50 = _____tens _____ones</p>	3x1=3	Understanding
3	<p>Identify the shape of the following objects and write the name of their shapes.</p> <p>(i)  _____</p>	2x1=2	Interdisciplinary AnalyticalSkill



(ii) _____

5

Write the following using symbols.

- (i) Nine is smaller than twelve. _____
(ii) Thirty two is less than 40. _____
(iii) Four is less than eight. _____

3X1=3

Critical Thinking
and Problem
Solving

6

Complete the following pattern.

- (i) 32, 37, 42, 47, _____, _____, _____
(ii) 77, 80, 83, 86, _____, _____, _____
(iii)  _____, _____, _____

3X1=3

HOT

7

Fill in the blanks:

- (i) 39 is between 40 and _____.
(ii) The number between 32 and 34 is _____.
(iii) 28 is between 27 and _____.

3x1=3

Evaluation

8

Write the number names of the following :

- (i) 38 = _____
(ii) 45 = _____

3x1=3

Communication
Skills

	(iii) 50 = _____		
--	------------------	--	--



ARMY PUBLIC SCHOOL GWALIOR

CLASS -I

ACADEMIC SESSION 2021-22

WORKSHEET (SELF –ASSESSMENT)








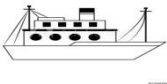

Subject: EVS

Assignment No. : 7

Allotment Date: 15 October 2021

S.N	QUESTIONS	MARKS	SKILLS/COMPETENCIE S
1.	<p>Tick (√) the correct options :</p> <p>a 1. You must throw garbage</p> <p>a. through a window b. in a garbage bin c. on the floor Most of</p> <p>b 2.We the work at home.</p> <p>a. care b. dare c. share</p>	2X1=2	Information
2	<p>Write down which means of transport will be used to cover the following distances choosing words from the given box. (aeroplane, car, bus, ship, cycle)</p> <p>1. To go to school <u>bus</u> .</p> <p>2. Your city to nearby city <u>car</u> .</p> <p>3. Kolkata to Andaman <u>ship</u> .</p> <p>4. Delhi to London <u>aeroplane</u> .</p>	4X1=4	HOT Analytical Skill Understanding
3	<p>Write two magic words.</p> <p>_____</p> <p>_____</p>	1X2=2	Interdisciplinary
4	<p>Tick (√) for good habits and cross (X)for</p>	4X.5=2	

	 <p>()</p>  <p>()</p>  <p>()</p>  <p>()</p>		Understanding
5	<p>Choose the correct option:</p> <p>Missionaries of Charity was founded by</p> <p>a. Mother Teresa b. Mother Mary c. Jesus Christ</p> <p>You can go to a nearby market by</p> <p>a. hot air balloon b. bicycle c. ship</p>	2X1=2	Critical Thinking and Problem Solving
6	<p>Answer the following :</p> <p>Q 1. Name the three means of transport with two examples of each.</p> <p>Ans-----</p> <p>--- .</p>	2X1=2	Communication Skills

	<p>Q2. What will you say before entering your Principal Sir's or Madam's room ?</p> <p>Ans-----</p>		
7	<p>Fill in the blanks:-</p> <p>1. When you get a gift from others, you must say.....</p> <p>2. We can stay if we keep ourselves clean.</p> <p>3. She lived most of her life in</p>	3X1=3	Evaluation
8	<p>Land transport:-</p>  <p>Water transport:-</p>  <p>Air transport:-</p> 	3X1=3	<p>Analytical Skill</p> <p>Understanding</p>



ARMY PUBLIC SCHOOL GWALIOR

CLASS -I

ACADEMIC SESSION 2021-22

WORKSHEET (SELF –ASSESSMENT)




Subject: Computer

Assignment No. : 7

Allotment Date: 15 October 2021

S. NO	QUESTIONS	MARKS	NATURE
1	<p><u>Tick the correct answer</u></p> <p>1. Machines make our work Boring Easy Difficult</p> <p>2. Is a smart machine. Computer Cloud Human</p> <p>3. We can play.....on a computer Games Machines Flowers</p> <p>4. Computer can solve..... for you Sums Paint Drawing</p>	4X1=4	Information

2	<p><u>Identify the following pictures.</u></p> <p>1. _____</p> <div data-bbox="523 277 801 479" data-label="Image"> </div> <hr/> <p>2. _____</p> <div data-bbox="344 846 654 1016" data-label="Image"> </div>	2X2=4	Understanding																									
4	<p>Fill in the blanks in the following:-</p> <p>1. A computer is a</p> <table border="1" data-bbox="309 1429 1037 1473"> <tr> <td>M</td> <td></td> <td>C</td> <td></td> <td>I</td> <td></td> <td>E</td> </tr> </table> <p>2. Computer can tell you a</p> <table border="1" data-bbox="301 1541 842 1585"> <tr> <td>S</td> <td></td> <td>O</td> <td></td> <td>Y</td> </tr> </table> <p>3. A computer never makes</p> <table border="1" data-bbox="338 1664 940 1709"> <tr> <td>M</td> <td></td> <td>S</td> <td>T</td> <td></td> <td>K</td> <td>E</td> <td></td> </tr> </table> <p>4. A computer can show you a</p> <table border="1" data-bbox="306 1787 820 1832"> <tr> <td>M</td> <td></td> <td>V</td> <td></td> <td>E</td> </tr> </table>	M		C		I		E	S		O		Y	M		S	T		K	E		M		V		E	4X0.5=2	Analytical Skill
M		C		I		E																						
S		O		Y																								
M		S	T		K	E																						
M		V		E																								



ARMY PUBLIC SCHOOL GWALIOR

CLASS -I

ACADEMIC SESSION 2021-22

WORKSHEET (SELF –ASSESSMENT)



Subject: G.K

Assignment No. : 7

Allotment Date: 15 October 2021

S. NO.	QUESTIONS	MARKS	NATURE
1.	<p>Tick the correct answer:</p> <p>1. Which part of the computer is known as its brain ?</p> <p>a) Printer b) mouse c) CPU</p> <p>2. Which of the following activities cannot be played on a computer ?</p> <p>a) Playing music</p> <p>b) Heating chapati</p> <p>c) painting</p>	2x1=2	Information
2.	<p>Write true or false for each of the following statement:</p> <p>1. A female koala bear carry her baby in a pouch on her belly. ()</p> <p>2. Turtles do have teeth. ()</p>	4x1=4	Understanding

3. Most frogs have long tails and only a few have small tails. ()


4. Lions belong to dog family. ()

3.

Write the names of the following shapes.







3x1=3

Interdisciplinary

4.

Answer the following questions about the poems related to the following pictures.



1.

Where did the lamb follow Marry?



2.

Who fell down and hurt his head in this poem?






3.

What did Jack jump over?

3x1=3

Analytical Skill

<p>5.</p>	<p>Write two ways by which we can keep the earth clean.</p> <p>1. _____</p> <p>2. _____</p>	<p>2x1=2</p>	<p>HOT</p>
<p>6.</p>	<p>Look at the wall clock pictures given below, and find out the time.</p> <div style="display: flex; justify-content: space-around; align-items: flex-start;"> <div style="text-align: center;">  <p>_____</p> </div> <div style="text-align: center;">  <p>_____</p> </div> </div>	<p>2x1=2</p>	<p>Critical Thinking and Problem Solving</p>
<p>7.</p>	<p>Answer the following questions.</p> <p>1. Which animal is called the ships of the desert?</p> <p>_____</p> <p>2. What part of their body do elephants use for lifting objects, fighting, digging, gathering food and stripping the bark from the trees?</p> <p>_____</p>	<p>2x1= 2</p>	<p>Evaluation</p>
<p>8.</p>	<p>Complete the following sentences in your own words.</p> <p>1. _____ is my favourite festival.</p> <p>2. I celebrate it with my _____.</p> <p>3. On this day, we wear _____.</p> <p>4. We celebrate it by _____.</p>	<p>2x1=2</p>	<p>Communication Skills</p>



ARMY PUBLIC SCHOOL GWALIOR

CLASS -I

ACADEMIC SESSION 2021-22

WORKSHEET (SELF –ASSESSMENT)



Subject: Work Education

Assignment No. : 7

Allotment Date: 15 October 2021

S.NO	QUESTIONS	MARKS	SKILLS/COMPETENCIES
1.	What is the purpose of rangoli Decoration Bring good luck Desperation Sorrow	1	Creativity
2.	What designs are used in a rangoli Flowers Lamps Geometric All of the above	1	Creativity
3.	What is it made of rangoli. Rice powder Vermilion Tumeric All of the above	1	Creativity
4.	Where did it originate Europe Asia Australia India	1	Creativity
5.	Is Rangoli art permanent? True False	1	Creativity
6.	How many types of rangoli are there? a. Three b. One c Two.	1	Creativity

7.	What's another word for rangoli?	1	Creativity
8.	What is the meaning of word rang in Rangoli?	1	Creativity
9.	Who started rangoli?	1	Creativity
10.	1. What are the common rangoli designs and motifs?	1	Creativity



ARMY PUBLIC SCHOOL GWALIOR

CLASS -I

ACADEMIC SESSION 2021-22

WORKSHEET (SELF –ASSESSMENT)






Subject: Art Education

Assignment No. : 7

Allotment Date: 15 October 2021

S.NO	QUESTIONS	MARKS	SKILLS/COMPETENCIES
1.	Madhubani', a style of folk paintings, is popular in which of the following states in India? A. Uttar Pradesh B. Rajasthan C. Bihar D. Madhya Pradesh	1	Creativity
2.	Which colours are mostly used in Madhubani Paintings? A. Bright B. Dark C. Primary D. Secondary	1	Creativity
3.	Who were the artists who created the Madhubani Painting? A. Men B. Women C. Animals	1	Creativity
4.	What is the framework of Madhubani Painting made of? A. Turmeric powder B. Ginger Paste C. Garlic Paste D. Rice paste	1	Creativity
5.	Which of these not a madhubani painting?  A.	1	Creativity

	<p>B. </p> <p>C. </p> <p>D. </p>		
<p>6.</p>	<p>Madhubani art belongs to which country?</p> <p>A. UAE</p> <p>B. Pakistan</p> <p>C. India</p> <p>D. USA</p>	<p>1</p>	<p>Creativity</p>
<p>7.</p>	<p>You can easily identify Madhubani art by its</p> <p>A. Colourful geometric designs.</p> <p>B. Eyes, that are big and sideways.</p> <p>C. The colours of the dyes that make the paint.</p> <p>D. Depiction of queen Sita.</p>	<p>1</p>	<p>Creativity</p>
<p>8.</p>	<p>Which elements is not used in Madhubani?</p> <p>A. Line</p> <p>B. Colour</p> <p>C. Shape</p> <p>D. Value</p>	<p>1</p>	<p>Creativity</p>
<p>9.</p>	<p>What kind of an art is Madhubani Art?</p> <p>A. Abstract art</p> <p>B. Folk art</p> <p>C. Pop art</p> <p>D. Realistic art</p>	<p>1</p>	<p>Creativity</p>
<p>10.</p>	<p>What is the another name of Madhubani Art?</p>	<p>1</p>	<p>Creativity</p>

	A. Mithila Art B. Pattachitra Painting C. Tanjore Art D. Kalamkari		
--	--	--	--



ARMY PUBLIC SCHOOL GWALIOR

CLASS -I

ACADEMIC SESSION 2021-22

WORKSHEET (SELF –ASSESSMENT)



Subject: Health and Physical Education

Assignment No. : 7

Allotment Date: 15 October 2021

S.NO	QUESTION	NATURE	MARKS
A	Fill in the blanks		3x1=3
1.	We should wash our hand before _____. a) Before eating b) Before playing c) Both A and B d) None of the above	Informative	
2.	We Should eat lots of _____ and _____. a) Chocolate and Ice cream b) Pizza and burger c) Fruits and vegetables d) None of the above	Understanding	
3.	Rinsing your mouth and brushing is important to prevent _____. a) COVID-19 b) Cavity c) Dengue d) Cold and Cough	Informative	
B	True and False		3x1=3
4.	We should think twice before throwing food away.	Analytic skill	
5.	We should not wash our hands after blowing our nose, coughing or sneezing	Understanding	
6.	Brushing stimulate germs	Informative	
C	MCQs		4x1=4
7.	What we Should always make before buying food. a) Shopping list	Informative	

8.	<p>b) Food to eat c) Both A and B d) None of the above</p> <p>What we should do regularly.</p> <p>a) Take bath b) Play games c) Eat junk food d) All of the above</p>	Understanding	
9	<p>How we can prevent gum cavity?</p> <p>a) By Brushing teeth b) Eating food c) Taking bath d) None of the above</p>	Informative	
10	<p>How we can avoid food wastage?</p> <p>a) Avoid buying too much food b) Store food correctly c) By making shopping list d) All of the above</p>	Informative	



ARMY PUBLIC SCHOOL GWALIOR

CLASS -I

ACADEMIC SESSION 2021-22

WORKSHEET (SELF –ASSESSMENT)



Subject: Discipline

Assignment No. : 7

Allotment Date: 15 October 2021

S.No	Questions	Marks	Nature
1.	<p>Fill in the blanks-</p> <p>i. It is so important to take care of our _____ (health/ car)</p> <p>ii. It is our _____ health. (physical/ mental)</p> <p>iii. It is our _____ health.(minds/toys)</p> <p>iv. It is taking care of our _____.(health/ friends)</p> <p>v. Taking care of your _____. (body/health)</p> <p>vi. We can _____our friends plants on their birthdays.(gift/borrow)</p>	06	Knowledge & Understanding
2.	<p>Choose all the correct answers-</p> <p>a. How can we take care of our heath?</p> <p>i. By being active- Playing outside home on playground or in park</p> <p>ii. You can ride by cycle to stay fit and healthy</p> <p>b. Choose which is healthy food?</p> <p>i. Home cooked food</p> <p>ii. maggi, pasta, pizza and burger</p> <p>c. How can we help mom?</p> <p>iii. Eating salads and fruits daily</p> <p>iv. By helping mom in kitchen or small work like watering plants</p>	03	
3.	<p>True and False</p> <p>i. We must take care of our eyes.</p> <p>ii. We must remain attentive during on line classes.</p>	01	Thinking and Writing Skills



ARMY PUBLIC SCHOOL GWALIOR



CLASS - I

ACADEMIC SESSION 2021-22

WORKSHEET (SELF –ASSESSMENT)

Subject: Music (Dance)

Assignment No. : 7

Allotment Date: 15 October 2021

S.NO	QUESTIONS	MARKS	SKILLS
1.	This festival is celebrated in southern part of India? a. Hampi Dance Festival b. Garba festival c. Konark festival	1	Informative
2.	Hampi Festival is celebrated in which month of the year? a. October and November b. January c. December	1	Informative
3.	Hampi dance festival is celebrated with a. Dance b. Singing c. None of the above	1	Cultural fit
4.	Khajuraho Festival is celebrated in which month? a. February and march b. April c. september	1	Informative
5.	This festival is celebrated for weeks. a. Mukteshwar Dance Festival b. Khajuraho Dance Festival c. Natyanjali Dance Festival	1	Cultural fit
6.	Khajuraho Dance Festival is organized in front of which temple? a. Chitragupta Temple b. Chidambaram c. None of the above	1	Cultural fit
7.	This festival is one of the famous dance festival of India? a. Taj Mahotsav b. Sirpur Dance and Music Festival c. None of the above	1	Informative
8.	Taj Mahotsav is celebrated for how many days? a. 10 b. 20 c. 5	1	Cultural fit
9.	Taj Mahotsav takes place in? a. Agra b. Mumbai c. Chennai	1	Informative
10.	Khajuraho dance festival is celebrated in a. M.P (Madhya Pradesh) b. U.P (Uttar Pradesh) c. None of the above	1	Cultural fit



ARMY PUBLIC SCHOOL GWALIOR



CLASS -I

ACADEMIC SESSION 2021-22


WORKSHEET (SELF –ASSESSMENT)

Subject: Music (Instrumental)

Assignment No. : 7

Allotment Date: 15 October 2021

S.NO	QUESTIONS	MARKS	SKILLS
1.	How many types of Swar are there in music? a. Seven b. Eight c. Nine	1	Informative
2.	What is the quantity {matra} in teen taal? (vi) 16 (vii) 17 (viii) 19	1	Informative
3.	What is the full name of "sa swara" in music? a. Shadja b. Rishabh c. Nishad	1	Informative
4.	What is the full name of "ni swara" in music? a. Shadja b. Rishabh c. Nishad	1	Informative
5.	How many types of saptak are there in music? a. 3 b. 4 c. 5	1	Informative
6.	What quantity is "khali" in teen taal ? a. 9 b. 2 c. None of the above	1	Informative
7.	What is the quantity in each vibhag in teen taal ? (i) 4 (ii) 5 (iii) 6	1	Informative
8.	What is the full name of "ga swara" in music ? a. Gandhar b. Nishad c. Madhyam	1	Informative
9.	What is the symbol of vibhag in music ? a. b. X c. 0	1	Informative
10.	Which instrument does Ustad Amjad Ali Khan play ? a. Sitar b. Sarod c. Guitar	1	Informative



ARMY PUBLIC SCHOOL GWALIOR

CLASS -I

ACADEMIC SESSION 2021-22

WORKSHEET (SELF –ASSESSMENT)



Subject: Library

Assignment No. : 7

Allotment Date: 15 October 2021

S.N O	QUESTIONS	MARKS	SKILLS / COMPETENC IES
	Answer the following questions on the basis of the story “Let us keep the earth clean” given in the notes.		
1	What should you do first getting up in the morning ?	01	Comprehension
2	After taking bath, what should you do ?	01	Analysis
3	Should you do your home work regularly ?	01	Analysis
4	Should you take your bath every day ?	01	Understanding
5	How should you keep yourself that all like and love you ?	01	Analysis
6	Write two good habits?	01	Understanding
7	Fill in the blanks with the given words : All neat and clean children .	01	Understanding
8	Taking a bath in theevery day is a good	01	Analysis

	habit.		
9 Of Ankur are always cut.	01	Analysis
10	We must our hair	01	Analysis