

ARMY PUBLIC SCHOOL GWALIOR
CLASS -X
ACADEMIC SESSION 2021-22
WORKSHEET (SELF-ASSESSMENT)



Subject: English

Assignment No. : 6

Allotment Date: 15 September 2021

S. NO.	QUESTIONS	MARKS	NATURE																																				
1	Rivers are considered sacred in our country, but they have been reduced to drains in the cities. You are deeply concerned about the plight of our rivers. As Nikhil/ Neha write a letter to the editor of a national daily voicing your concern regarding the plight of a river near your city. (120 words).	6	Information																																				
2	<p>Given alongside is a graph that pertains to the percentage of the population living below that poverty line across different states of India in two years: 1973-74 and 1999-2000. Use the information provided to write a paragraph on the age old problem of poverty in India. Mention the regional trends and the way the scenario has changed over the years. (100-120 words)</p> <table border="1"> <caption>Percentage of population living below the poverty line (1973-74 vs 1999-2000)</caption> <thead> <tr> <th>State</th> <th>1973-74 (%)</th> <th>1999-2000 (%)</th> </tr> </thead> <tbody> <tr><td>Orissa</td><td>65</td><td>45</td></tr> <tr><td>Bihar</td><td>58</td><td>40</td></tr> <tr><td>Madhya Pradesh</td><td>58</td><td>35</td></tr> <tr><td>Uttar Pradesh</td><td>55</td><td>30</td></tr> <tr><td>Maharashtra</td><td>50</td><td>25</td></tr> <tr><td>West Bengal</td><td>60</td><td>25</td></tr> <tr><td>Tamil Nadu</td><td>50</td><td>20</td></tr> <tr><td>Karnataka</td><td>50</td><td>18</td></tr> <tr><td>Rajasthan</td><td>42</td><td>15</td></tr> <tr><td>Andhra Pradesh</td><td>45</td><td>15</td></tr> <tr><td>Gujarat</td><td>48</td><td>15</td></tr> </tbody> </table> <p>Note : Uttar Pradesh includes the present Uttarakhand, Madhya Pradesh includes Chhattisgarh and Bihar includes Jharkhand.</p>	State	1973-74 (%)	1999-2000 (%)	Orissa	65	45	Bihar	58	40	Madhya Pradesh	58	35	Uttar Pradesh	55	30	Maharashtra	50	25	West Bengal	60	25	Tamil Nadu	50	20	Karnataka	50	18	Rajasthan	42	15	Andhra Pradesh	45	15	Gujarat	48	15	6	Analytical Skill
State	1973-74 (%)	1999-2000 (%)																																					
Orissa	65	45																																					
Bihar	58	40																																					
Madhya Pradesh	58	35																																					
Uttar Pradesh	55	30																																					
Maharashtra	50	25																																					
West Bengal	60	25																																					
Tamil Nadu	50	20																																					
Karnataka	50	18																																					
Rajasthan	42	15																																					
Andhra Pradesh	45	15																																					
Gujarat	48	15																																					
3	<p>MCQs based on letter to the editor. Choose the correct options.</p> <ol style="list-style-type: none"> What is the purpose of writing a letter to the editor? <ol style="list-style-type: none"> To express one's request. To give warning about the issue. To express one's opinion or give comments. To inform the readers about a certain issue. Which of the following is not the correct tone for the letter to the editor? <ol style="list-style-type: none"> personal formal amusing serious What would you do if you do not want the newspaper or magazine to publish your name? <ol style="list-style-type: none"> Request the newspaper or magazine not to publish your name. File a legal action against the newspaper or magazine. 	3	Communication Skill																																				

<p>4</p>	<p>Choose the correct options to fill in the blanks to complete the note.</p> <p>Nearly 92 lakh children, who had either dropped out of schools or never (a) , will now get elementary education as it (b) on the part of the local authorities and the State governments to ensure that all children in 6-1 years age group (c)</p> <p>(a) (i) had been to any educational institution (ii) have been to any educational institution (iii) been to any educational institution (iv) has been to any educational institution</p> <p>(b) (i) can be blinding (ii) will be blinding (iii) is blinding (iv) has been blinding</p> <p>(c) (i) get schooling (ii) will be schooled (iii) get schooled (iv) have schooling</p>	<p>3</p>	<p>Interdisciplinary</p>
<p>5</p>	<p>Choose the correct options and fill in the blanks to complete the narration of the conversation given below.</p> <p>Teacher: That is a beautiful painting, Garima! Garima: Thank you, Ma'am! Teacher: You have used colours nicely. But tell me, why have you coloured the field light green this side of the fence and dark green on the other side? You could have made the colour darker more gradually. Garima: But Ma'am, isn't there a saying that the grass is always greener on the other side of the fence? The teacher saw Garima painting a beautiful picture. She(i) ----. Garima thanked her teacher. The teacher complimented her on her use of colours. However, she was puzzled as to why Garima (ii) ----- the field light green one side of the fence and dark green on the other. Garima replied that she was just following the saying that (iii)----- on the other side of the fence.</p> <p>i) a. exclaimed what a beautiful painting it was b. said what a beautiful painting it was c. asked how Garima made such a beautiful picture d. told Garima that it was a beautiful picture</p> <p>ii) a. coloured b. had coloured c. was colouring d. had been colouring</p> <p>iii) a. the grass was always greener b. grass was always greener c. the grass is always greener d. the grass are always greener</p>	<p>6</p>	<p>Interdisciplinary</p>

<p>6</p>	<p>Read the extract given below and answer the questions that follow: “Stop that sulking at once, Amanda! You’re always so moody, Amanda! Anyone would think that i nagged at you, Amanda!”</p> <ol style="list-style-type: none"> 1. Who is the speaker of these lines? 2. What kind of a girl was Amanda? 3. Did she really sulk? 4. Find a word from the stanza that means ‘teased’. 	<p>4</p>	<p>Understanding</p>
<p>7</p>	<p>The poem [The Ball Poem] deals with a child understanding loss for the first time. Matches and championships too, deal with a different sense of loss.</p> <p>Explain how games and sports are a good way to train children to take losses in their stride</p>	<p>6</p>	<p>HOT</p>
<p>8</p>	<p>Answer the following questions in 30-40 words:</p> <ol style="list-style-type: none"> a) What are some of the things you now know about <ol style="list-style-type: none"> i) the people of Coorg? ii) the main crop of Coorg? iii) the sports it offers to tourists? b) ‘Describe the scene which took place after the arrival of Mr. Jaffers, the constable, in the story ‘Footprints without Feet’. 	<p>6</p>	<p>Evaluation</p>



ARMY PUBLIC SCHOOL GWALIOR
CLASS -X
ACADEMIC SESSION 2021-22
WORKSHEET (SELF-ASSESSMENT)



Subject: Hindi


Assignment No. : 6

Allotment Date: 15 September 2021


S. NO.	QUESTIONS	MARKS	
	<p>प्रश्न:- 1आपको विधालय में खेलने का अवसर नहीं मिलता ।कह दिया जाता है कि छात्र संख्या अधिक होने से सबके लिए व्यवस्था नहीं हो सकती । प्रधानाचार्य को पत्र लिखकर इस समस्या पर चर्चा कीजिए और एक उपाय भी सुझाइए ।</p>	5	Information
2	<p>प्रश्न: -2 प्रस्तुत गद्यांश को पढ़कर दिए गए प्रश्नों के उत्तर लिखिए-</p> <p>पानी ही इस सृष्टि का जन्मदाता है ।जल से ही सब कुछ पैदा हुआ है ।जन्म से मरण तक मनुष्य के जीवन के सभी कर्मकांडों, यज्ञों आदि में जल का बहुत महत्त्व है ।तीर्थों पर जाकर निर्मल सरोवरों और बहती नदियों में स्नान का अपना ही महत्त्व है ।जल दिव्य गुणयुक्त है ।इसका ठीक प्रयोग शरीर और मन को स्वस्थ बनाता है, परिणामस्वरूप हमारे चेहरे पर एक मुस्कराहट होती है ।जल के अभाव में मनुष्य के प्राण कंठ तक आ जाते हैं और सभी काम अधूरे रह जाते हैं ।जल के बिना सृष्टि की कल्पना भी नहीं की जा सकती ।जल को सम्मान का पर्यायवाची भी माना जाता है ।परमात्मा की अनंत सामर्थ्य से आकाश, वायु, अग्नि, जल और पृथ्वी आदि तत्व उत्पन्न हुए हैं और उसमें पूर्वोक्त कर्म के अनुसार शरीर की उत्पत्ति हुई है ।</p> <p>मनुष्य के शरीर में 70 % पानी की मात्रा का विस्तार है ।पशु-पक्षियों का जीवन जल से निर्धारित है ।पेड़-पौधों को पानी की आवश्यकता मौसम पर निर्भर है</p>	5	Understanding

	<p>।पेड़-पौधे जितना पानी लेते हैं ,वे वातावरण में उसे रिसने की क्रिया द्वारा छोड़ते भी है ।इससे जलवायु में भी सुधार होता है ।इस प्रकार जीवन में जल का बहुत महत्त्व होता है ।</p> <p>प्रश्न- क . प्रस्तुत गद्यांश के आधार पर पेड़-पौधों का क्या महत्व है?</p> <p>प्रश्न- ख . प्रस्तुत गद्यांश का केन्द्रीय भाव दो -तीन वाक्यों में लिखिए?</p> <p>प्रश्न- ग. मनुष्य के लिए जल किस प्रकार महत्वपूर्ण है?</p> <p>प्रश्न- घ. सृष्टि में पानी का क्या महत्व है?</p> <p>प्रश्न- ङ . प्रस्तुत गद्यांश का उचित शीर्षक दीजिए ?</p>		
3	<p>प्रश्न :- 3 ' हरिहर काका ' कहानी में लेखक ने किन -किन मुद्दों को उठाने का प्रयास किया है ?</p>	5	HOT
4	<p>प्रश्न: - 4 निम्नलिखित प्रश्नों के उत्तर निर्देशानुसार लिखिए -</p> <p>क - सुनीता (परिश्रमी और होशियार) लड़की है ।कोष्ठक में दिए गए पदबन्ध का प्रकार बताइए-</p> <p>ख - (ततारा की तलवार) एक विलक्षण रहस्य थी ।कोष्ठक में दिए गए पदबन्ध का प्रकार बताइए-</p> <p>ग - उसे जूते खरीदने थे, इसलिए वह बाज़ार गया ।(वाक्य का प्रकार बताइए)</p> <p>घ - मेहनत ना करने के कारण वह फेल हो गया । (वाक्य का प्रकार बताइए)</p> <p>ङ - ' दाँतों पसीना आना ' मुहावरे का वाक्य में प्रयोग कीजिए -</p>	5	Interdisciplinary
5	<p>प्रश्न :- 5 पवन गारमेट्स के मालिक की ओर से कपड़ों की सेल का</p>	5	Analytical Skill

	विज्ञापन 25 से 30 शब्दों में तैयार कीजिए ।		
6	प्रश्न:- 6 लेखक को अपनी माँ द्वारा दी गई कौन सी सीख सदैव याद आती थी और क्यों?	5	Critical Thinking and Problem Solving
7	प्रश्न: - 7 निम्नलिखित शब्दों का समास विग्रह करके समास का नाम भी लिखिए- दशानन ,आजन्म, सुख-दुःख, यशप्राप्त ,पंजाब ।	5	Evaluation
8	प्रश्न: - 8 ' स्वतंत्रता का महत्त्व ' विषय पर एक अनुच्छेद लिखिए-- संकेत बिन्दु- भूमिका , पराधीनताएक अभिशाप, स्वतंत्रता के लाभ , उपसंहार ।	5	Communication Skills



ARMY PUBLIC SCHOOL GWALIOR
CLASS -X
ACADEMIC SESSION 2021-22
WORKSHEET (SELF-ASSESSMENT)



Subject: Mathematics

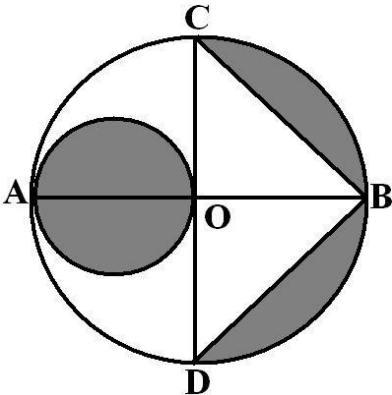
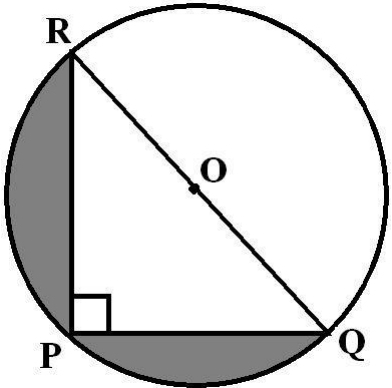
Assignment No. : 6

Allotment Date: 15 September 2021

CH. 7&12: COORDINATE GEOMETRY & AREA RELATED TO CIRCLE

S. NO.	QUESTIONS	MARKS	NATURE
1	The points A(0, -2), B(3, 1), C(0, 4) and D(-3, 1) are the vertices of a (a) parallelogram (b) rectangle (c) square (d) rhombus	1	Understanding
2	The points A(0, 6), B(-5, 3) and C(3, 1) are the vertices of a triangle Which is (a) Isosceles (b) equilateral (c) scalene (d) right angled	1	Understanding
3	If the points A(2, 3), B(5, k) and C(6, 7) are collinear, then the value of k is a) 4 (b) 6 (c) 3/2 (d) 11/4	1	Understanding
4	If P(-1, 1) is the middle point of the line segment joining A(-3, b) and B(1, b + 4) then the value of b is (a) 1 (b) -1 (c) 2 (d) 0	1	Interdisciplinary
5	y-axis divides the join of P(-4, 2) and Q(8, 3) in the ratio (a) 3 : 1 (b) 1 : 3 (c) 2 : 1 (d) 1 : 2	1	Analytical Skill

6	<p>x-axis divides the join of A(2, -3) and B(5, 6) in the ratio</p> <p>(a) 3 : 5 (b) 2 : 3 (c) 2 : 1 (d) 1 : 2</p>	1	Critical Thinking and Problem Solving
---	--	---	---------------------------------------

7.	<p>The point P(1, 2) divides the join of A(-2, 1) and B(7, 4) are in the ratio of</p> <p>(a) 3 : 2 (b) 2 : 3 (c) 2 : 1 (d) 1 : 2</p>	1	Application
8.	<p>A point P divides the join of A(5, -2) and B(9, 6) are in the ratio 3 : 1. The coordinates of P are</p> <p>(a) (4, 7) (b) (8, 4) (c) (11/2, 5) (d) (12, 8)</p>	1	Analytical Thinking
9	<p>In the given fig. AB is the diameter of a circle with centre O and OA = 7 cm. Find the area of the shaded region.</p> <p>(a) 64.5 cm² (b) 61.5 cm² (c) 66.5 cm² (d) none of these</p> 	1	Understanding
10	<p>Find the area of the shaded region in the given figure, if PR = 24 cm, PQ = 7 cm and O is the centre of the circle.</p> <p>(a) 164.54 cm² (b) 161.54 cm² (c) 162.54 cm² (d) none of these</p> 	1	Interdisciplinary

11.	<p>□□ A sector of 56°, cut out from a circle, contains 17.6 cm^2. Find the radius of the circle.</p> <p>(a) 6 cm (b) 7 cm (c) 5 cm (d) 8 cm</p>	1	Interdisciplinary
12.	<p>A pendulum swings through an angle of 30° and describes an arc 8.8 cm in length. Find the length of the pendulum.</p> <p>(a) 16 cm (b) 16.5 cm (c) 16.8 cm (d) 17 cm</p>	1	Interdisciplinary
13.	<p>The fourth vertex of the rectangle whose three vertices taken in order are (4,1), (7, 4), (13, -2) is</p> <p>(a) (10, -5) (b) (10, 5) (c) (8, 3) (d) (8, -3)</p>	2	Evaluation
14.	<p>If four vertices of a parallelogram taken in order are (-3, -1), (a, b), (3, 3) and (4, 3). Then $a : b =$</p> <p>(a) 1 : 4 (b) 4 : 1 (c) 1 : 2 (d) 2 : 1</p>	2	Analytical Thinking
15.	<p>If the origin is the mid-point of the line segment joined by the points (2,3) and (x,y), then the value of (x,y) is</p> <p>(a) (2, -3) (b) (2, 3) (c) (-2, 3) (d) (-2, -3)</p>	2	Evaluation
16.	<p>The perimeter of a triangle with vertices (0, 4), (0, 0) and (3, 0) is:</p> <p>(a) 5 (b) 12 (c) 11 (d) 7</p>	2	Evaluation
17.	<p>Line formed by joining (-1,1) and (5, 7) is divided by a line $x + y = 4$ in the ratio of</p> <p>a) 1 : 4 (b) 1 : 3 (c) 1 : 2 (d) 3 : 4</p>	2	Analytical thinking
18.	<p>The difference between the circumference and radius of a circle is 37 cm. The area of the circle is</p> <p>(a) 111 cm^2 (b) 184 cm^2 (c) 154 cm^2 (d) 259 cm^2</p>	2	Problem solving
19.	<p>The circumference of two circles are in the ratio 2 : 3. The ratio of their areas is</p> <p>(a) 2 : 3 (b) 4 : 9 (c) 9 : 4 (d) none of these</p>	2	Interdisciplinary

20.	On increasing the diameter of circle by 40%, its area will be increased by (a)40% (b) 80% (c) 96% (d) none of these	2	Evaluation
21.	The circumference of a circle is 88 cm. Find the area of the sector whose central angle is 72° (b) 123 cm^2 (b) 123.5 cm^2 (c) 123.4 cm^2 (d) none of these	3	Critical thinking

22.	<p>On decreasing the radius of the circle by 30%, its area is decreased by</p> <p>(a)30% (b) 60% (c) 45% (d) none of these</p>	3	HOTS
23.	<p>The area of the square is the same as the area of the circle. Their perimeter re in the ratio</p> <p>(a)1 : 1 (b) π : 2 (c) 2 : π (d) none of these</p>	3	HOTS
24.	<p>The minute hand of a clock is 15 cm long. Calculate the area swept by it in 20 minutes. Take</p> <p>$\pi=3.14$</p> <p>(a) 116 cm² (b) 166 cm²(c) 616 cm²(d) none of these</p>	3	HOTS



ARMY PUBLIC SCHOOL GWALIOR
CLASS -X
ACADEMIC SESSION 2021-22
WORKSHEET (SELF-ASSESSMENT)



Subject: Science

Assignment No. : 6

Allotment Date: 15 September 2021

S. NO.	QUESTIONS	MARKS	NATURE
1	Q1. Why is sodium kept immersed in kerosene oil?	1	Information
	Q2. Mention the purpose of blackening the interior of a solar cooker.	1	
	Q3. Which endocrine gland secretes the growth hormone?	1	
2	Q4. State the functions of any three of the structural and functional units of nervous system.	3	Understanding
	Q5. Describe the three parts of Human Brain.	3	
	Q6. Give reason for the following: (i) School bells are made up of metals. (ii) Electrical wires are made up of copper.		
3	Q7. Bio gas is an excellent fuel. Justify the statement by giving two reasons. Mention the main constituents of bio gas along with its percentage.	3	HOT
	Q8. What are amphoteric oxides? Give two examples of amphoteric oxides and reaction with acid and base.	3	
4	Q9. Differentiate between endocrine and exocrine glands.	3	Interdisciplinary
	Q10. Draw a well labelled diagram of Neuron.	3	
5	Q11. Differentiate between metals and non- metals on the basis of their chemical properties.	5	Analytical Skill
6	Q12. List any three hazards of nuclear waste. How does the disposal of nuclear waste pose a problem for the plant and animal life?	5	Critical Thinking and Problem Solving
7	Q13. Explain how auxins help in bending of plant stem towards light. Explain with help of an experiment.	3	Evaluation
	Q14. (a) How does construction of dams across the river get linked with production of greenhouse gases? (b) How do technological inputs improve the efficiency of biomass fuels?	3	



ARMY PUBLIC SCHOOL GWALIOR
CLASS -X
ACADEMIC SESSION 2021-22
WORKSHEET (SELF-ASSESSMENT)



Subject: Social Science


Assignment No. : 6

Allotment Date: 15 September 2021

S. NO.	QUESTIONS	MARKS	NATURE								
1	Define Nation-state.	1	Information								
2	Which of the following group of powers collectively defeated Napoleon ? (a) England , France, Italy, Russia (b) England, Austria, Spain, Russia (c) Austria, Prussia, Russia , Britain (d) Britain, Prussia, Russia , Italy	1	Understanding								
3	Suggest any two ways to reduce land and water degradation in industrial and suburban areas.	1	Understanding								
4	Complete the following table with correct information regarding cultivation of Rice: <table border="1" style="margin-left: 20px;"> <tr> <td style="width: 20%;">Wheat</td> <td style="width: 20%;">Type of Crop</td> <td style="width: 20%;">Temperature required for its growth</td> <td style="width: 20%;">Annual rainfall required for its growth</td> </tr> <tr> <td></td> <td>(A)- ?</td> <td>(B)-?</td> <td>50 to75 cm</td> </tr> </table>	Wheat	Type of Crop	Temperature required for its growth	Annual rainfall required for its growth		(A)- ?	(B)-?	50 to75 cm	1	Interdisciplinary
Wheat	Type of Crop	Temperature required for its growth	Annual rainfall required for its growth								
	(A)- ?	(B)-?	50 to75 cm								
5	Correct the following statement and rewrite it: The system of 'checks and balances' comes under Horizontal distribution of power sharing.	1	Critical Thinking and Problem Solving								
6	What was the significance of ' Broken Chains' ? (i) Being freed (ii) Heroism (iii) Readiness to fight (iv) Willingness to make peace	1	Critical Thinking and Problem Solving								
7	What do you mean by the word ethnic?	1	Understanding								
8	What is sustainable development?	1	Understanding								
9	What are intermediate goods ?	1	Understanding								
10	In the question given below, there are two statements marked as assertion (A) and reason (R) . Read the statements and choose the correct option . Assertion (A) Economic activities grouped into three categories are highly dependent. Reason (R) Primary and secondary activities cannot produce goods unless they are aided by the tertiary sector. Options (a) Both (A) and (R) are true and (R) is the correct explanation of (A). (b) Both (A) and (R) are true and (R) is not the correct explanation of (A).	1	Critical Thinking and Problem Solving								

	(c) (A) is true, but (R) is false. (d) (A) is false , but (R) is true.		
11	What were the provisions of Treaty of Vienna of 1815?	3	Information
12	State the essential conditions required for the cultivation of rubber.	3	Analytical Skill
13	Compare the employment conditions prevailing in the organised and unorganised sectors.	3	Analytical Skill
14	Why is tertiary sector is becoming more important than other sectors in India ? Give any three reasons.	3	Communication Skills

15	What changes did Napoleon introduce to make the administrative system more efficient in the territories ruled by him?	5	Information
16	Explain what is meant by the 1848 revolution of the liberals. What were the political, social and economic ideas supported by the liberals?	5	Information
17	What initiatives have been taken by government to ensure an increase in agriculture production?	5	Interdisciplinary
18	On an outline map of India locate and label the following with suitable symbols. (i) Rihand Dam (ii) A region of black soil (iii) Hirakud Dam	3	Information



ARMY PUBLIC SCHOOL GWALIOR
CLASS -X
ACADEMIC SESSION 2021-22
WORKSHEET (SELF-ASSESSMENT)



Subject: Health and Physical Education

Assignment No. : 6

Allotment Date: 15 September 2021

S.NO	Answer the following questions	NATURE	Marks 1X10=10
1.	A substance needed by the body for growth, energy, repair and maintenance is called a a: Nutrient b: Carbohydrate c: Calorie d: Fatty acid	Informative	1
2.	All of the following nutrients are found in food except... a: Plasma b: Proteins c: Carbohydrates d: Vitamins	Informative	1
3	Any substance or mixture of substances intended for preventing, destroying, repelling, or mitigating any pest is called a: Pesticides b: Virus c: Bacterium d: Ephedrine	Informative	1
4	A(n)_____ is a unit of energy that indicates the amount of energy contained in food. a: Label b: Food guide pyramid c: Calorie d: Basket	Analytical	1

5	Fill in the blanks (question no. 5 to 7) Eggs are rich in _____. (Protein, Calcium)	Interdisciplinary	1
6	Carbohydrates provide _____to our body. (Energy, Fat)	Interdisciplinary	1
7.	Our body needs _____ for muscle- building and for repairing worn–out tissues. (Protein, Minerals)	Informative	1
8.	True and False (question no. 8 to 10) Pesticides can cause short-term adverse health effects.	Informative	1
9.	In physics, electromagnetic radiation (EMR) consists of waves of the electromagnetic (EM) field, propagating through space, carrying electromagnetic radiant energy.	Informative	1
10	. A healthy eating plan also will lower your risk for heart disease and other health conditions.	Analytical	1



ARMY PUBLIC SCHOOL GWALIOR
CLASS -X
ACADEMIC SESSION 2021-22
WORKSHEET (SELF-ASSESSMENT)




Subject: Work Education

Assignment No. : 6

Allotment Date: 15 September 2021

S. NO.	QUESTIONS	MARKS	NATURE
1	Which state is famous for paper mache? A. Madhya Pradesh B. Uttar Pradesh C. Uttarakhand D. West Bengal	1 mark	Creative Skills
2	Who brought paper mache to Kashmir? A. Sultan Zain-ul-Abadin B. Maqbool Fida Hussain C. Raja Ravi Varma D. Amrita Sher-Gil	1 mark	Creative Skills
3	What is the Meaning of Paper Mache? A. chewed or crushed paper B. Coloured paper C. Sheets D. Stencils	1 mark	Creative Skills
4	The traditional method of making papier-mâché adhesive is to use a mixture of _____. A. water and wheat B. water and grains C. water and flour D. water and colour	1 mark	Creative Skills
5	The _____ type of paper mache is most often used to create molded and sculpted A. pieces. B. Pulp C. Strip	1 mark	Creative Skills


	D.Rough Glossy		
6.	The _____ form is used to cover existing surfaces, making hollow and flat pieces like pinatas and masks. A.Pulp B. Strip C. Rough D.Glossy	1 mark	Creative Skills
7	Paper mache was invented in _____. A.India B.China C. Australia D. Sweden	1 mark	Creative Skills
8	Who initiated the texture of plaster and stucco? A.French B. German C. Japanese D. Spanish	1 mark	Creative Skills
9	Which material is not required in paper mache? A.Plastic putty B. Glue C. Chalk powder D. Coconut oil	1 mark	Creative Skills
10	Which among these is the picture of Paper Mache art? A  B	1 mark	Creative Skills

C



D





ARMY PUBLIC SCHOOL GWALIOR
CLASS -X
ACADEMIC SESSION 2021-22
WORKSHEET (SELF-ASSESSMENT)



Subject: Art Education

Assignment No. : 6

Allotment Date: 15 September 2021

SR. NO.	ANSWER THE FOLLOWING QUESTION	NATURE	MARKS 1x10= 10
1	What do you mean by Aamad? a) Entrance b) Pranam c) Both	Informative	1
2	Aamad is performed in which classical dance? a) Bharatnatyam b) Kathak c) Manipuri	Informative	1
3	Is Aamad done in teen taal? a) yes b) No	Informative	1
4	Aamad is the ----- word? a) Persian b) Latin c) none of the above	Informative	1
5	----- is the first piece to show on the stage. a) Aamad b) Toda c) Tukda	Informative	1
6	Freedom means -----. a) Open mindedness b) No restrictions c) None of the above	Informative	1
7	What is the Writer name ? a) Robin klein b) Hardy c) Thomas	Informative	1
8	What does that girl named? a) Amanda b) Klein	Informative	1

	c) None of the above		
9	How many types of classical dance form are there? a) 8 b) 6 c) 7	Informative	1
10	For learning any kind of skill freedom is necessary. a) True b) False	Informative	1



ARMY PUBLIC SCHOOL GWALIOR
CLASS -X
ACADEMIC SESSION 2021-22
WORKSHEET (SELF-ASSESSMENT)



Subject: Computer
Allotment Date: 15 September 2021

Assignment No. : 6

S.NO.	QUESTIONS	MARKS	NATURE
1	<p>Choose and write the correct option (MCQ):-</p> <p>(i). For Import/Export data operation. Click on :</p> <ul style="list-style-type: none">(a) Home Tab(b) External Data Tab(c) Import/Export Tab(d) None of these <p>(ii) What plugs in the network card located in every computer connected in LAN?</p> <ul style="list-style-type: none">(a) Ethernet cables(b) Switch(c) Hub(d) Port <p>(iii) To apply filter, you need to apply : :</p> <ul style="list-style-type: none">(a) Encryption(b) Sort(c) Criteria(d) Glue <p>(iv) The mobile phones using this technology are able to be unlocked and mover between carriers:-</p> <ul style="list-style-type: none">(a) CDMA(b) GSM(c) WLL(d) None of these.	$\frac{1}{2} \times 4=2$	Information
2	Fill in the blanks-	$\frac{1}{2} \times 4=2$	Understanding and Problem Solving

	<p>(i) _____ does not assign specific frequency to each user on the communication network.</p> <p>(ii) For Applying number filters, in the Filter menu point to _____ options.</p> <p>(iii) A ____ is a name assigned to a column of data in a table.</p> <p>(iv) A wireless network interface card bears an _____.</p>		
3	<p>Write short notes on following-</p> <p>(i) DBMS</p> <p>(ii) Filtering</p> <p>(iii) Access Point</p> <p>(iv) Record Selector</p>	$\frac{1}{2} \times 4 = 2$	Critical Thinking
4	<p>Answer the following questions -</p> <p>(i) Find out and write names of the file types in which access data can be exported?</p> <p>(ii) Write two features of WLL technology.</p> <p>(iii) Write any two differences between Peer to Peer networking and Client Server Networking.</p> <p>(iv) Write down steps involved in sorting of data.</p>	$1 \times 4 = 4$	HOT