

ARMY PUBLIC SCHOOL GWALIOR
CLASS -VIII
ACADEMIC SESSION 2021-22
WORKSHEET (SELF- ASSESSMENT)

Subject: English
Allotment Date: 15 September 2021

Assignment No.: 6

S. NO.	QUESTIONS	MARKS	NATURE
1	Write an article on Hafeez Contractor, India's leading architect in about 150 words.	4m	Information
2	<p>Read the following extract and answer the questions given below:</p> <p>"It was evening. The garden hedge was all aflower. The fair maid came out and said," I will hire you with a smile."</p> <p>Her smile paled and melted into tears, and she went back alone into the dark."</p> <p>Questions:</p> <ol style="list-style-type: none"> 1. What does the expression 'The garden hedge was all aflower' mean? 2. Who came to the speaker? 3. What made the girl shed tears? 	3m	Understanding
3	What is the speaker's last bargain? In your opinion, what is more desirable than power, gold or beauty and why? Answer in about 100 words.	4m	HOT
5	<p>Tick the correct sentences.</p> <ol style="list-style-type: none"> 1. (a) The petrol is sold by the litre. (b) Petrol is sold by the litre. 2. (a) He ate the breakfast at the restaurant. (b) He ate breakfast at a restaurant. 3. (a) What a surprise! It is nice to see you. (b) What surprise! It is nice to see you. 	3m	Analytical Skill
6	<p>Fill in the blanks with appropriate modals.</p> <ol style="list-style-type: none"> 1. _____ I use your laptop to surf the internet? 2. I _____ definitely attend your parent's anniversary party. 3. Amit _____ come in the evening if you invite him personally. 	3m	Analytical skill

7	What are the different ways in which Tilly's parents could have reacted to her behaviour? What would you have done if you were in their place? Explain in 100 words.	4m	Critical Thinking
8	Answer the following questions in about 20-30 words. 1. Why was Mangal Pandey executed? 2. What made Princess September's sister so ugly? 3. Why couldn't Bipin Babu ignore what Parimal Ghose had said to him?	3x2=6m	Evaluation
9	Narrate the story of the ant and the cricket in about 100 words.	3m	Communication Skills



ARMY PUBLIC SCHOOL GWALIOR
CLASS -VIII
ACADEMIC SESSION 2021-22
WORKSHEET (SELF- ASSESSMENT)




Subject: Hindi
Allotment Date: 15 September 2021

Assignment No.: 6

S. NO.	QUESTIONS	MARKS	NATURE
		-30	
1	निम्नलिखित शब्दों के अर्थ लिखिए म्यान गारी बैरी आपा दिसी कर ज्ञान दुहेली झरती तिनका	5	Information, Communication Skills
2	निम्नलिखित प्रश्नों के उत्तर दीजिए (क) चिड़िया चोंच में तिनका दबाकर उड़ने की तैयारी में क्यों है वह तिनकों का क्या करती होगी लिखिए ? (ख) तलवार का महत्व होता है म्यान का नहीं उक्त उदाहरण से कबीर क्या कहना चाहते हैं स्पष्ट कीजिए ? (ग) कबीर घास की निंदा करने से क्यों मना करते हैं पड़े हुए दोहे के आधार पर स्पष्ट कीजिए ?	6	Critical Thinking and Problem Solving
3	(क) संज्ञा की परिभाषा उदाहरण सहित दीजिए। (ख) लिंग की परिभाषा तथा उसके भेदों के नाम लिखिए।	2 2	Interdisciplinary

4	नगर निगम अधिकारी को मोहल्ले की सफाई के लिए पत्र लिखिए ।	5	Analytical Skill, Understanding
5	किसी एक विषय पर अनुच्छेद लिखिए । पराधीन सपनेहु सुख नाही अथवा ऐसी वाणी बोलिए, मन का आपा खोय	5	Evaluation,
6	(क) राजा मिलंद कौन था उसकी प्रसिद्धि का क्या कारण था? (ख) गुप्त साम्राज्य का आरंभ कब हुआ उस के प्रवर्तक का क्या नाम था?	2 3	Analysis




ARMY PUBLIC SCHOOL GWALIOR
CLASS -VIII
ACADEMIC SESSION 2021-22
WORKSHEET (SELF- ASSESSMENT)

Subject: Mathematics
Allotment Date: 15 September 2021

Assignment No.: 6

S. NO.	QUESTIONS	MARKS	NATURE
1	If $21y57$ is a multiple of 9, where y is a digit. What is the value of y ?	1	Analytical
2	Express 0.000000000125 in the standard form.	1	Understanding
3	Represent $7/4$ on number line.	1	Understanding
4	Find five rational numbers between $2/3$ and $4/5$.	1	Analytical
5	Solve the equation: $2x-1=14-x$	1	Understanding
6	Explain how a square is a parallelogram.	1	Understanding
7	Find the probability of getting a prime number on throwing an unbiased dice.	1	Critical thinking
8	Write a Pythagorean triplet whose one member is 18.	1	Analytical
9	Find the addition of $2x-5$, and $7+5x$.	1	Understanding
10	Simplify: $3x(4x-5) + 3$ and find its value for $x=3$.	2	Analytical thinking
11	Using identity find: 103×98	2	Understanding

12	Three consecutive integers add up to 51. What are these integers?	2	Analytical									
13	The measure of two adjacent angles of a parallelogram are in the ratio 3:2.find the measure of each angle of the parallelogram.	2	Critical thinking and problem solving.									
14	Evaluate: $(1/2)^{-2}+(1/3)^{-2}+(1/4)^{-2}$	2	Understanding									
15	Complete the magic square given below so that the sum of the numbers in each row or in each column or along each diagonal is 15. <table border="1" style="margin: 10px auto; text-align: center; width: 150px;"><tr><td>8</td><td>1</td><td>A</td></tr><tr><td>B</td><td>5</td><td>C</td></tr><tr><td>D</td><td>E</td><td>F</td></tr></table>	8	1	A	B	5	C	D	E	F	2	Critical thinking and problem solving.
8	1	A										
B	5	C										
D	E	F										
16	Show that: $(a-b) (a+b) + (b-c) (b+c) + (c-a) (c+a) =0$	3	HOTs									
17	Sum of digits of a two digits number is 9.when we interchange the digits,it is found that the resulting new number is greater than the original number by 27.what is the number.	3	Application and problem solving									
18	Simplify the following i $(i) \left\{ \left(\frac{1}{4} \right)^{-3} - \left(\frac{1}{3} \right)^{-3} \right\} \div \left(\frac{1}{4} \right)^{-2}$ $(ii) \left(\frac{2}{3} \right)^{-6} \times \left(\frac{3}{2} \right)^{-4}$	3	Analytical									



ARMY PUBLIC SCHOOL GWALIOR
CLASS -VIII
ACADEMIC SESSION 2021-22
WORKSHEET (SELF- ASSESSMENT)




Subject: Science
Allotment Date: 15 September 2021

Assignment No.: 6

Revision: chapter -11, 12, and 13

S. NO.	QUESTIONS	MARKS	NATURE
Q1	Answer the following questions. i. What do you mean amplitude? ii. What is drag? iii. Name the force exerted on a ball of dough to make a flat chapati.?	1x3=3	Information
Q2	i. What is meant by atmospheric pressure? ii. Why are the soles of shoes and tyres of vehicles grooved? iii. Define frequency.?	2X3=6	Understanding
Q3	i. Suppose a bell is ringing in a vacuum. Will you be able to hear the sound? II. We know that there is a huge amount of atmospheric pressure on us. But we do not experience its effect why?	2x2=4	HOT

Q4	<p>i. What are the various types of friction? Explain</p> <p>ii. State the difference between contact force and non-contact force?</p> <p>iii. What are the methods to control noise pollution?</p>	2x3=6	Interdisciplinary
Q5	<p>i. Differentiate between musical sound and noise.?</p>	3x2=6	Analytical Skill
	<p>ii. Why it is easier to walk on soft sand if we have flat shoes rather than shoes with sharp heels (or pencil heels)?</p>		Critical Thinking and Problem Solving
Q.6	<p>i. What are the effects of force on an object?</p>	5x1=5	Communication Skills



ARMY PUBLIC SCHOOL GWALIOR
CLASS -VIII
ACADEMIC SESSION 2021-22
WORKSHEET (SELF- ASSESSMENT)

Subject: Social Science
Allotment Date: 15 September 2021

Assignment No.: 6

S. NO.	QUESTIONS	MARKS	NATURE
1	<p>Q1. Objective type questions Fill in the blanks and rewrite the sentences.</p> <p>i) The Champaran movement was against _____</p> <p>ii) The international demand for indigo was affected by the discovery of _____.</p> <p>iii) The British conquest of Bengal began with the Battle of _____</p> <p>iv) Haider Ali and Tipu Sultan were the rulers of _____</p> <p>v) Europeans see fine cloth from India carried by Arabs and they named the cloth as _____</p> <p>vi) Which cloth was woven in Surat and was valued in _____</p> <p>vii) _____ invented the spinning jenny.</p> <p>viii) People do not participate _____ in democracy.</p> <p>ix) Which country from 1850s came to be known as workshop of the world _____</p> <p>x) Name one important centre of Jamdani weaving in India _____</p> <p>xi) Choose their representatives through _____</p>	11	Information and Understanding
2	<p>Give one problem which arose with the new Munro system.</p>	3	HOTS

3	Why is Land considered an important resource?	3	Understanding
4	Define Jamdani .	3	Communication skill
5	What were the last days of the last Mughal Emperor ?	2	Critical thinking
6	Why did the wool and silk producers in England protest against the import of Indian textiles in 18 th Century?	4	Analytical Skill
7	How cotton industry in Britain affect textile producers in India.	2	Evaluation
8	In the map of India mark the states and Union Territories.	2	Map



ARMY PUBLIC SCHOOL GWALIOR
CLASS -VIII
ACADEMIC SESSION 2021-22
WORKSHEET (SELF- ASSESSMENT)

Subject: Sanskrit
Allotment Date: 15 September 2021

Assignment No.: 6

S.NO.	QUESTIONS	MARKS	NATURE
1	<p>मातरम् प्रति लिखितं पत्रं मंजूषा सहायतया पूरयत -</p> <p>(अभिनयम् ,सर्वेभ्यः, मुख्यातिथिः , अध्ययनम्, वार्षिकोत्सवः)</p> <p style="text-align: right;">गवालियर नगरात्</p> <p style="text-align: right;">10/9/2021</p> <p>पूजनीयाःमातृचरणाः !</p> <p>नमोनमः। अत्र कुशलं तत्रास्तु । मम विद्यालये ----- आसीत् ।</p> <p>तत्र अहं एकं ----- कृतवान् । मुख्यमंत्री महोदयः -----</p> <p>रूपेण आगतवान् । मम ----- सम्यक् चलति। गृहे -----</p> <p>नमोनमः ।</p> <p style="text-align: right;">भवदीयः</p> <p style="text-align: right;">राकेशः</p>	(5)	Information
2	<p>अधोलिखित संवादं मंजूषायां प्रदत्त पदैः पूरयत -</p> <p>(ऋतवः, वदतु, अहं, वदिष्यति , भारते)</p> <p>शिक्षकः - छात्राः! ----- कति ऋतवः भवन्ति ? कः ----- ?</p> <p>दिनेशः - श्रीमान्! ----- वदामि ।</p>	(5)	Understanding

	<p>शिक्षकः - न, मोहनः ----- ।</p> <p>मोहनः - भारते षट् ----- भवन्ति ।</p>		
3	<p>रेखांकित पदमाधृत्य प्रश्न निर्माणं कुरुत -</p> <p>(क) - तस्य मूर्ध्नि तिष्ठन्ति वायसः ।</p> <p>(ख) - क्षुधार्तः सिंहः कुत्रापि आहारं न प्राप्तवान् ।</p> <p>(ग) - भोजपत्रोपरि लेखनम् आरब्धम् ।</p> <p>(घ) - व्याघ्रः नद्याः जलेन व्याधस्य पिपासामशमयत् ।</p> <p>(ङ) - सर्वकारस्य घोषणा अस्ति ।</p>	(5)	Interdisciplinary
4	<p>समानार्थकपदानि मेलयत -</p> <p>(क) जगति वज्रात्</p> <p>(ख) कुलिशात् नेत्रेण</p> <p>(ग) प्रकृति संसारे</p> <p>(घ) चक्षुषा नदी</p> <p>(ङ) तटिनी स्वभावः</p>	(5)	Analytical Skill
5	<p>(क) - अव्यय किसे कहते हैं ?</p> <p>(ख) - विशेषण की अवस्थाएं उदाहरण सहित लिखिए ।</p>	(5)	Critical Thinking and Problem Solving
6	<p>निम्नलिखित पदों का प्रयोग करते हुए वाक्य बनाइये -</p> <p>(क) -विना</p> <p>(ख) - बहिः</p> <p>(ग) - उभयतः</p>	(5)	Evaluation

	(घ) - अनन्तरं		
	(ङ) - सह		



ARMY PUBLIC SCHOOL GWALIOR
CLASS -VIII
ACADEMIC SESSION 2021-22
WORKSHEET (SELF- ASSESSMENT)

Subject: C o m p u t e r
Allotment Date: 15 September 2021

Assignment No.: 6

S. No.	Questions	Marks	Nature
1	Tick The Correct Answer	5x 1/2=2.5	Information
	A) A row in a table is called a) Record b) Field c) Value		
	B) The character limit in Memo Data Type is a) 255 b) 65,535 c) 63,999		
	C) You can modify the design of the table in a) Datasheet View b) Design View c) Query View		
	D) The shortcut key to save a query is a) Ctrl+S b) Ctrl+V c) Alt+S		
	E) A box that allows readers to enter confidential or secret information a) Menu b) Password c) Frame		
2	Fill in the blanks a) A _____ is a collection of organized data. b) A row in a table is called _____. c) _____ are created and managed in a Relationship window. d) Run button is present on _____ tab. e) An _____ control is any type of input mechanism on a form.	5 x 1/2=2.5	Understanding
3	Answer the following question i) What do you mean by Sorting and Filtering? ii) Explain different input controls of a form.	2 x 2.5 =5	HOT



ARMY PUBLIC SCHOOL GWALIOR
CLASS -VIII
ACADEMIC SESSION 2021-22
WORKSHEET (SELF- ASSESSMENT)

Subject: G . K

Assignment No.: 6

Allotment Date: 15 September 2021

S. NO.	QUESTIONS	MARKS	NATURE
1	Q1. Objective type questions Fill in the blanks and rewrite the sentences. i) All the lines of _____ meet at the North Pole. ii) Oceans are highly polluted because of _____ activities. iii) The Nebula in the outer space is a _____ to plastic bags. iv) Nature loving routine is to _____ time with nature.	4	Information and Understanding
2	How many UNESCO Heritage sites are there in India?	2	HOTS Interdisciplinary
3	What were the main features of Mayan city ?	1	Understanding
4	Name of American space agency involved in space exploration.	1	Understanding
5	Where the Leopard of the air is found?	1	Understanding
6	Why different types of birds are found in a particular place ?	1	Analytical Skill



ARMY PUBLIC SCHOOL GWALIOR
CLASS -VIII
ACADEMIC SESSION 2021-22
WORKSHEET (SELF- ASSESSMENT)


Subject: Art Education
Allotment Date: 15 September 2021

Assignment No.: 6

S. NO.	QUESTIONS	MARKS	NATURE
1	<p>A portrait is a picture of_____.</p> <p>(a) The land (b) Person (c) A vase (d) A flower</p>	0.5	Creative Skills
2	<p>Mixing the colors blue and red in equal proportion will produce _____ of the following hues?</p> <p>(a) Maroon (b) Violet (c) Orange (d) Brown</p>	0.5	Creative Skills
3	<p>A type of balance in which both sides of a composition are balanced yet different is called_____.</p> <p>(a) Asymmetrical (b) Radial (c) Symmetrical (d) Geometric</p>	0.5	Creative Skills
4	<p>_____ is it called when you mix white with a colour.</p> <p>(a) A tan (b) A tint</p>	0.5	Creative Skills

	(c) A tent (d) A shade		
5	Strength, high energy and passion represent by _____ colour in mandala art. (a) Orange (b) Yellow (c) Green (d) Red	0.5	Creative Skills
6.	_____tend to represent the universe, often carrying meanings related to life and energy. (a) Bell (b) Sun (c) Triangle (d) Lotus flower	0.5	Creative Skills
7	A still life is a drawing or painting that focuses on still objects. (a) True (b) False	0.5	Creative Skills
8	Objects that are not the main focus of an image. The image or design in the back are called Positive Space. (a) True (b) False	0.5	Creative Skills
9	Another name of hatching technique is cross hatching. (a) True (b) False	0.5	Creative Skills
10	The way the viewer sees an image. It can be above, below, or at eye-level is called Grid System. (a) True (b) False	0.5	Creative Skills
11	When one object passes in front of another object to create layering is called Overlapping. (a) True (b) False	0.5	Creative Skills

12	Scribbling is built up by applying dots in different densities. (a) True (b) False	0.5	Creative Skills
13	Who invented still life? (a) Leonardo da Vinci (b) Michelangelo (c) Jacopo de'Barbari (d) Vincent Van Gogh	0.5	Creative Skills
14	How many skills are there in nature drawing. (a) 6 (b) 8 (c) 5 (d) 2	0.5	Creative Skills
15	Which of these is a basic skills of nature drawing? (a) Eye drawing (b) Prospective of drawing (c) Human proportion (d) None of these	0.5	Creative Skills
16	Which of these is not the example of nature study? (a) Bird (b) Human figure (c) Wildlife (d) Sky	0.5	Creative Skills
17	What types of nature drawing is done without instruments? (a) Sketch (b) Wood carving (c) Final drawing (d) Sculpture	0.5	Creative Skills
18	Graphite pencil, papers, pastels and water colours are used in- (a) Printmaking (b) Nature study (c) Carving	0.5	Creative Skills

	(d) Sculpture		
19	What is the nature study also known as? (a) Sculpture (b) Decorative art (c) Printmaking (d) Landscape art	0.5	Creative Skills
20	Picture shown above is of which technique?  (a) Hatching (b) Contour Hatching (c) Stippling (d) Scribbling	0.5	Creative Skills



**ARMY PUBLIC SCHOOL GWALIOR
CLASS -VIII**


**ACADEMIC SESSION 2021-22
WORKSHEET (SELF- ASSESSMENT)**

Subject: Work Education
Allotment Date: 15 September 2021

Assignment No.: 6

S. NO.	QUESTIONS	MARKS	NATURE
1	Blue pottery art is _____. (a) Ceramic craft (b) Needle craft (c) Textile craft (d) None	0.5	Creative Skills
2	_____ is the Meaning of Paper Mache. (a) Chewed or crushed paper (b) Coloured paper (c) Sheets (d) Stencils	0.5	Creative Skills
3	'Wooden rose wood scoop' is a craft under _____ category. (a) Houseware (b) Leather work (c) Fashion (d) None	0.5	Creative Skills
4	Studio pottery involves _____. (a) Tableware (b) Cookware (c) Sculpture (d) All	0.5	Creative Skills
5	_____ is a glazed or unglazed fired clay used	0.5	Creative Skills

	<p>especially for statuettes and vases and architectural purposes.</p> <p>(a) Terracotta (b) Plastic art (c) Woodcraft (d) Pottery</p>		
6	<p>The meaning of Terracotta is _____.</p> <p>(a) Depiction (b) Illustration (c) Delineation (d) Baked earth</p>	0.5	Creative Skills
7	<p>Qin Shi Huang invented Terracotta.</p> <p>(a) True (b) False</p>	0.5	Creative Skills
8	<p>Narmadapuram district is famous for terracotta horses.</p> <p>(a) True (b) False</p>	0.5	Creative Skills
9	<p>Sand makes terracotta red.</p> <p>(a) True (b) False</p>	0.5	Creative Skills
10	<p>The Aiyandar community in Tamil Nadu is also known for their terracotta work.</p> <p>(a) True (b) False</p>	0.5	Creative Skills
11	<p>Wood carving is a form of wood working by means of a cutting tool.</p> <p>(a) True (b) False</p>	0.5	Creative Skills
12	<p>Louise Nevelson is known as The master of shape.</p> <p>(a) True (b) False</p>	0.5	Creative Skills
13	<p>Which state is famous for wood carving?</p> <p>(a) Uttar Pradesh (b) Maharashtra (c) Mizoram</p>	0.5	Creative Skills

	(d) Arunachal Pradesh		
14	Which one is not a Fresco technique of Mural art? (a) Buon (b) Secco (c) Camaieu (d) Mezzo	0.5	Creative Skills
15	Which clay is used for mural art? (a) Ball clays (b) Resin clay (c) Stoneware clays (d) Porcelain clays	0.5	Creative Skills
16	Which one is the Famous cave where Mural Art is shown? (a) Fingal's Cave (b) Ajanta Caves (c) Mammoth Cave (d) Barton Creek Cave	0.5	Creative Skills
17	In which region of India Armamalai Cave located? (a) Gujarat (b) Tamil Nadu (c) Kerala (d) Rajasthan	0.5	Creative Skills
18	Which material is not used while making mural art? (a) Palette (b) Thread (c) Brushes (d) Paint	0.5	Creative Skills
19	Brushes were made up from the hair of : (a) Women (b) Animals (c) Birds (d) None of the above	0.5	Creative Skills
20	This is the picture of _____ .  (a) Bone carving (b) Chip carving (c) Fruit carving (d) Chainsaw carving	0.5	Creative Skills




ARMY PUBLIC SCHOOL GWALIOR
CLASS -VIII
ACADEMIC SESSION 2021-22
WORKSHEET (SELF- ASSESSMENT)

Subject: Health and Physical Education
Allotment Date: 15 September 2021

Assignment No.: 6

S.NO	MULTIPLE CHOICE QUESTIONS (1 to 4)	NATURE	MARKS 1X10
1.	Who is the father of nutrition and chemistry? A. Antoine Lavoisier B. Rutherford C. Benjamin D. Michael Faraday	Informatory	1
2	Who is the first nutritionist ? A. Antoine Lavoisier B. Michael Faraday C. Louis Pasteur D. Adelle Davis	Analytical	1
3	What are the goals of nutrition ? A. Stay hydrated B. Boost performance C. Improve recovery D. All of them	Informatory	1
4	Component of macro nutrients is- A. Sulfur B. Vitamins C. Minerals D. Fats	Understanding	1
5	Fill in the blanks (question 5 to 7) Birth date of Adelle Davis is _____. [25th feb, 5th may }	Informatory	1
6	Two hours before competition high _____ drink is recommended. [protein, carbohydrate]	Understanding	1

7	At least _____ gram of protein is required for recovery after competition. [20 g, 30 g]	Understanding	1
8	True and False (question 8 to 10) Flavour com-pound and and plant com-pound comes under non nutritive diet .	Informatory	1
9	The concept of metabolism, the transfer of food and oxygen into heat and water in the body, creating energy, was discovered in 1770.	Informatory	1
10	31st may 1930 Adele Davis died.	Critical thinking	1



ARMY PUBLIC SCHOOL GWALIOR
CLASS -VIII
ACADEMIC SESSION 2021-22
WORKSHEET (SELF- ASSESSMENT)



Subject: L i b r a r y

Assignment No.: 6

Allotment Date: 15 September 2021

S.NO	QUESTIONS	MARKS	NATURE
1	Why did Traf-o-data fail to take off ?	01	Comprehension
2	Why did the first version of windows flop ?	01	Analysis
3	How did bill gates become the richest man on forbes list at 40 ?	01	Analysis
4	Where did colonel sanders discover his famous recipe?	01	Analysis
5	Why was sanders forced to sell his service station ?	01	Understanding
6	From where was walt disne thrown out ?	01	Analysis
7	What is one of the greatest virtues that a person can possess ?	01	Comprehension
8	How many rejection did Sanders face before he was able to sell his first franchise?	01	Comprehension
9	How many attempts did Thomas Edison have to make before he was successful?	01	Understanding
10	When have you ever failed in anything and how did you deal with that failure?	01	Understanding



ARMY PUBLIC SCHOOL GWALIOR
CLASS -VIII
ACADEMIC SESSION 2021-22
WORKSHEET (SELF- ASSESSMENT)

Subject: Music (Dance)
Allotment Date: 15 September 2021


Assignment No.: 6

S. NO.	प्रश्न	अंक	प्रकृति
1.	संगीत की उत्पत्ति ----- काल से हुई। (अ) सिंधु घाटी सभ्यता (ब) वैदिक काल (स) कोई नहीं	0.5 marks	बोधात्मक
2.	तीन ताल में ----- मात्रा होती है। (अ) 16 (ब) 15 (स) 14	0.5 marks	
3.	तीन ताल में _____ मात्रा पर खाली आती है। (अ) 9 (ब) 8 (स) 12	0.5 marks	सूचनापरक
4.	तबला और कत्थक का प्रत्येक विद्यार्थी तीन ताल सीखता है (अ) हाँ (ब) नहीं	0.5 marks	
5	तीन ताल में 3 ताली होती है। (अ) हाँ	0.5 marks	अंतःविषयात्मक

	(ब) नहीं		
6.	स्वामी हरिदास भारतीय संगीत के इतिहास के महान संगीतकार हैं। (अ) हाँ (ब) नहीं	0.5 marks	
7.	निम्नलिखित में से कौन सा शास्त्रीय नृत्य है? (अ) कालबेलिया (ब) कत्थक (स) समकालीन	0.5 marks	गहनसोचऔर समस्यासमाधान
8.	कत्थक किस प्रकार का नृत्य है? (अ) शास्त्रीय नृत्य (ब) लोक नृत्य (स) वेस्टर्न	0.5 marks	
9.	कौन सा शास्त्र भरत मुनि द्वारा लिखा गया। (अ) समाजशास्त्र (ब) नाट्यशास्त्र (स) दर्शनशास्त्र	0.5 marks	उच्चस्तरीय चिंतन
10.	निम्नलिखित में से कौन सा महान संगीतकार है? (अ) संगीत सम्राट तानसेन (ब) अमीरों (स) दोनों में से कोई नहीं	0.5 marks	
11.	भारतीय संगीत का मूल स्रोत से माना जाता है। (अ) वेदों (ब) पुराण (स) रामायण	0.5 marks	बोधात्मक
12.	ब्रह्मा ने नारद मुनि को का वरदान दिया था। (अ) तबला	0.5 marks	

	(ब) संगीत (स) राग		
13.	भारतीय संगीत के मूल रूप से भेद किये जाते हैं। (अ) 8 (ब) 2 (स) 3	0.5 marks	सूचनापरक
14. सुगम संगीत की एक शैली हैं। (अ) शास्त्रीय संगीत (ब) भजन (स) पार्श्व संगीत	0.5 marks	
15.	संगीत में लय नहीं होती। हैं। (अ) सही (ब) गलत	0.5 marks	अंतःविषयात्मक
16.	लय तीन प्रकार की होती है। (अ) सही (ब) गलत	0.5 marks	
17.	म का विकृत स्वर ऊपर होता है। (अ) सही (ब) गलत	0.5 marks	गहनसोचऔर समस्यासमाधान
18.	सा और प के विकृत स्वर होते हैं। (अ) सही (ब) गलत	0.5 marks	
19.	भारतीय संगीत के भेद होते हैं। (अ) 6	0.5 marks	उच्चस्तरीय चिंतन

	(ब) 2 (स) 3		
20.	'म' स्वर का पूरा नाम है। (अ) मानव (ब) मन (स) मध्यम	0.5 marks	



ARMY PUBLIC SCHOOL GWALIOR
CLASS -VIII
ACADEMIC SESSION 2021-22
WORKSHEET (SELF- ASSESSMENT)

Subject: Discipline
Allotment Date: 15 September 2021

Assignment No.: 6

S.No	Questions	Marks	Nature
1.	Fill in the blanks- <ol style="list-style-type: none"> i. Being a teenager can be _____at times ii. You might feel like you have the _____of the world is on your shoulders. iii. Instead of seeing these as stressors, consider all the opportunities you have _____. iv. Keep your room clean and organized. v. Take care of _____ and clean up yourself. vi. Carly never let her friends _____. vii. The three boys got the project done they were_____. viii. Carly was very _____. 	04	Knowledge & Understanding
2.	How do you show your responsibility? <ol style="list-style-type: none"> i. _____ ii. _____ iii. _____ iv. _____ 	04	Thinking and Writing Skills
3	Choose the correct answer- <p>A voice spoke in the dream: "The present is nothing more than the outcome of the choices made in the past. The future will only be the results of the choices we make today."</p>	02	Thinking Skill

	<ul style="list-style-type: none">i. Whatever we are doing today, will make our future.ii. We can waste as much time as we want.iii. The future is unpredictableiv. The present can be made beautiful.		
--	---	--	--