

## ARMY PUBLIC SCHOOL GWALIOR

### CLASS -III

### ACADEMIC SESSION 2021-22

### WORKSHEET (SELF –ASSESSMENT)

Subject: English

Assignment No. : 6

Allotment Date: 15 September 2021

S.NO.	QUESTIONS	MARKS	NATURE
1.	Write the gender of the given words:  (i) groom - .....  (ii) stag - .....  (iii) nephew - .....  (iv) drake- .....	4X0.5=  2	Information
2.	Fill in the blanks by choosing the correct adjectives from the brackets given below -  (i) The Gwalior Fort is very ..... (large/easy) (ii) Mangoes are ..... (juicy/black) (v) Geeta has a ..... voice. (sweet/neat) (vi) Bhumi is the ..... girl in class 3. (thinnest/thinner) (vii) A rectangle has ..... Sides. (four/five) (viii) Your handwriting is ..... than mine. (neater/neat)	6X0.5=  3	Understanding

<p><b>3.</b></p>	<p>Write the plural forms of the following words:</p> <p>(i) story - .....</p> <p>(ii) wife - .....</p> <p>(iii) child - .....</p> <p>(iv) tooth - .....</p> <p>(v) tomato - .....</p> <p>(vi) knife - .....</p>	<p>6X0.5= 3</p>	<p>Interdisciplinary</p>
<p><b>4.</b></p>	<p>Fill in the blanks with is/am/are/was/were:</p> <p>i) I ..... going to the Mughal Gardens.</p> <p>ii) Who ..... your siblings?</p> <p>iii) How ..... you?</p> <p>iv) It ..... very hot and humid yesterday.</p> <p>v) What ..... your name?</p> <p>vi) Rahul ..... a smart boy.</p>	<p>6X0.5 =3</p>	<p>Analytical Skill</p>
<p><b>5.</b></p>	<p>Write down the meanings of the following words:</p> <p>(i) gaily - _____</p> <p>(ii) skims - _____</p> <p>(iii) pasture - _____</p> <p>(iv) cottage - _____</p>	<p>4X0.5= 2</p>	<p>Critical  Thinking and  Problem  Solving</p>

<p><b>6.</b></p>	<p>Choose the correct options to answer the following questions:</p> <p>i) Who are the palanquin bearers carrying in the palanquin?</p> <p>a) The bridegroom                      b) The bride</p> <p>c) The grandfather                      d) The mother</p> <p>ii) What did Jack see when he climbed up the beanstalk in the story 'Jack Discovers a New Land'?</p> <p>a) a turtle                      b) a stork</p> <p>b) a zoo                      d) a great castle</p>	<p>2X1=2</p>	<p>HOT</p>
<p><b>7.</b></p>	<p>Cross the wrong articles in the following sentences:</p> <p>(i) I will come back in a/an hour.</p> <p>(ii) Please give me a/the glass of water.</p>	<p>2X1=2</p>	<p>Evaluation</p>
<p><b>8.</b></p>	<p>Answer the following questions:</p> <p>(i) Why didn't the villagers come to help the shepherd boy the third time?</p> <p>.....</p> <p>.....</p> <p>(ii) Which words will you use to describe Jack?</p> <p>.....</p>	<p>3X1=3</p>	<p>Communication Skills</p>

.....  
.....  
.....

(iii) What is Sikkim famous for?

.....  
.....  
.....  
.....  
.....  
.....



## ARMY PUBLIC SCHOOL GWALIOR

### CLASS -III

### ACADEMIC SESSION 2021-22

### WORKSHEET (SELF –ASSESSMENT)

Subject: Hindi

Assignment No. : 6

Allotment Date: 15 September 2021

संख्या	प्रश्नउत्तर	अंक	प्रकृति
प्र.1	सही वाक्यों के सामने सही( V ) व गलत के सामने गलत ( X )का निशान लगाएं। क. जंगल के पास वाले गाँव में सलोनी अपनी माँ के साथ रहती थी   ( ) ख. बच्चे भारत माता का जयगान करेंगे  ( ) ग. खरगोश को जब एक उपाय सूझा तो वह रोने लगा  ( ) घ . गोपाल कृष्ण गोखले एक प्रसिद्ध इंजीनियर थे   ( )	4	बोधोत्प्रेरक
प्र.2	निम्नलिखित शब्दों क बहुवचन रूप लिखो:— क. गरदन ..... ख. दाल ..... ग. मूँगफली ..... घ. दाना .....	4	सूचनापरक
प्र.3	इन्हे क्या कहते है? लिखो : क. हाथ से काम करनेवाला _____ _____ ख. जो बीमार का इलाज करता है _____ _____	2	अंतः विषयात्मक

प्र.4	<p>निम्नलिखित शब्दों के दो –दो पर्यायवाची शब्द लिखो :</p> <p>क माता</p> <hr/> <p>ख चाँद</p> <hr/>	2	गहनसोचऔरसमस्यासमाधान
प्र.5	<p>निम्नलिखित शब्दों के उलटे अर्थ वाले शब्द लिखो :</p> <p>क कठिन</p> <hr/> <p>ख पुराना</p> <hr/>	2	उच्चस्तरीय चिंतन
प्र.6	<p>निम्नलिखित शब्दों के अर्थ लिखो:-</p> <p>क. कठिनाई .....</p> <p>ख. योजना.....</p> <p>ग. अर्पित .....</p> <p>घ. निरंतर .....</p>	4	विश्लेषणात्मक
प्र.7	<p>निम्नलिखित प्रश्नों का उत्तर दो:-</p> <p>क गाँव के लोग जंगल के रास्ते से शहर क्यों जाते थे?</p> <hr/> <p>ख गुरुजी जमींदार के घर क्यों रुके ?</p> <hr/>	2	भाषायीकोशल



**ARMY PUBLIC SCHOOL GWALIOR**

**CLASS -III**

**ACADEMIC SESSION 2021-22**

**WORKSHEET (SELF –ASSESSMENT)**

**Subject: Mathematics**

**Assignment No. : 6**

**Allotment Date: 15 September 2021**

<b>S. NO.</b>	<b>QUESTIONS</b>	<b>MARKS</b>	<b>NATURE</b>
<b>1</b>	Complete the following sentences:-  (i) Sum of two odd numbers is an ..... number.  (ii) Multiplication and division are called as _____ operations.	2X1=2	Information
<b>2</b>	Write the number names for the following numbers-  (i) 9854 – ..... .....  (ii) 2067 - ..... .....	2x1=2	Understanding
<b>3</b>	Write the Successor and Predecessor of the following	2x1=2	Interdisciplinary

	<p>numbers –</p> <p>(i) 4383 - ....., .....</p> <p>(ii) 7643 - ....., .....</p>		
<p><b>4</b></p>	<p>Do as directed :-</p> <p>(i) Multiply the following 23 x 58</p> <p>.....</p> <p>.....</p> <p>.....</p> <p>.....</p> <p>(ii) Find the difference between 3765 and 7615.</p> <p>.....</p> <p>.....</p> <p>.....</p> <p>.....</p> <p>(iii) Divide by repeated subtraction.</p>	<p>3x1=3</p>	<p>Analytical Skill</p>



	<p>40 divided by 10</p> <p>.....</p> <p>.....</p>		
5	<p>Fill in the blanks:-</p> <p>(i) <math>479 + 276 + 143 = \dots\dots\dots</math></p> <p>(ii) Place value of 8 in 8679 .....</p> <p>(iii) Short form of <math>8000 + 89 + 3 \dots\dots\dots</math></p> <p>(iv) <math>714/6 \dots\dots\dots</math></p>	$4 \times 1 = 4$	<p>Critical Thinking</p> <p>and Problem</p> <p>Solving</p>
6	<p>A steel chair cost 389Rs. Find the cost of 40 chairs.</p> <p>.....</p> <p>.....</p> <p>.....</p> <p>...</p>	$2 \times 1 = 2$	HOT
7	<p>Encircle the correct answer from the given options:-</p> <p>(i) The number of corners in a square are: -</p> <p>(a) 4 (b) 2 (c) 3</p>	$3 \times 1 = 3$	Evaluation

	<p>(ii) (ii) <math>5897 - 2897 = ?</math></p> <p>(a) 3000 (b) 3001 (c) none of these</p> <p>(iii) (iii) Even numbers are –</p> <p>(a) 21 ,77 (b) 0 ,48 (c) 74,89</p>		
8	<p>a) Name two objects that have triangular faces.</p> <p>(i)..... (ii) .....</p> <p>b) By how much is 700 greater than 309?</p> <p>.....</p> <p>.....</p>	2x1=2	Communication Skills



## ARMY PUBLIC SCHOOL GWALIOR

### CLASS -III

### ACADEMIC SESSION 2021-22

### WORKSHEET (SELF –ASSESSMENT)

Subject: EVS

Assignment No. : 6


Allotment Date: 15 September 2021

S.NO	QUESTIONS	MARKS	NATURE
1.	<p><b>Fill in the blanks with the right option:</b></p> <p>(i) Kutcha houses are usually found in .....</p> <p>(villages/parks)</p> <p>(ii) Our earth is also called a ..... planet.</p> <p>(blue/red)</p> <p>(iii) Parts of body that helps a bird to feed itself.....</p> <p>(beak/wings)</p> <p>(iii) The flat part of the leaf is .....</p> <p>(lamina/root)</p>	4X0.5=2	Information

<p><b>2.</b></p>	<p><b>Name the following:</b></p> <p>(i) Two energy giving foods .....</p> <p>(ii) Two junk foods .....</p> <p>(iii) Two sharp objects that can cause injury. ....</p> <p>.....</p> <p>(iv) Two sense organs .....</p> <p>(v) Two types of families .....</p> <p>(vi) Two indoor games .....</p> <p>.....</p>	<p>6X0.5=3</p>	<p>Understanding</p>												
<p><b>3.</b></p>	<p><b>Write the correct answer:</b></p> <p>(vii) Sharp claws of flesh-eating birds .....</p> <p>(viii) Animals that eat only flesh .....</p> <p>(ix) The children of uncle and aunts .....</p>	<p>3X1=3</p>	<p>Interdisciplinary</p>												
<p><b>4.</b></p>	<p><b>Match the following:</b></p> <table style="width: 100%; border: none;"> <tr> <td style="width: 50%;">colour of traffic light</td> <td style="width: 50%;">most beautiful part</td> </tr> <tr> <td>flower</td> <td>small family</td> </tr> <tr> <td>nuclear family</td> <td>red</td> </tr> <tr> <td>water</td> <td>taste buds</td> </tr> <tr> <td>mud houses</td> <td>a wonderful liquid</td> </tr> <tr> <td>tongue</td> <td>Rajasthan</td> </tr> </table>	colour of traffic light	most beautiful part	flower	small family	nuclear family	red	water	taste buds	mud houses	a wonderful liquid	tongue	Rajasthan	<p>6X0.5=3</p>	<p>Analytical Skill</p>
colour of traffic light	most beautiful part														
flower	small family														
nuclear family	red														
water	taste buds														
mud houses	a wonderful liquid														
tongue	Rajasthan														

<p><b>5.</b></p>	<p>i) Why should we play games?</p> <p>.....</p> <p>.....</p> <p>.....</p> <p>ii) What is first-aid?</p> <p>.....</p> <p>.....</p> <p>.....</p>	<p>2X1=2</p>	<p>Critical</p> <p>Thinking and</p> <p>Problem</p> <p>Solving</p>
<p><b>6.</b></p>	<p><b>True/False</b></p> <p>(i) We should touch electric switches with wet hands.</p> <p>.....</p> <p>(ii) Our body is a wonderful machine. ....</p> <p>(iii) The stem is the main part of the shoot and grows above the ground. ....</p> <p>(iv) We should drink ample amount of water. ....</p>	<p>4X0.5=2</p>	<p>HOT</p>
<p><b>7.</b></p>	<p><b>Choose the correct option:</b></p> <p>(i) A ..... does not make a nest.</p> <p>cuckoo      cow      peacock</p> <p>(ii) The process by which a liquid change into vapour is known as</p> <p>.....</p> <p>Evaporation      Condensation      None of these</p> <p>(iii) The Braille script consists of raised ..... which are touched to read.</p> <p>holes              dots              lines</p> <p>(iv) Dancing and singing are examples of .....</p> <p>performing arts      creative arts      None of these</p> <p>.</p>	<p>4X0.5=2</p>	<p>Evaluation</p>

<b>8.</b>	<b>Answer the following questions:</b>  (iv) What are sense organs? ..... .....  (v) How does water change its form in nature? ..... .....  (vi) What are pests? Give an example. ..... .....	3X1=3	Communication Skills
-----------	---	-------	----------------------



## ARMY PUBLIC SCHOOL GWALIOR

### CLASS -III

### ACADEMIC SESSION 2021-22



### WORKSHEET (SELF –ASSESSMENT)

Subject: Computer


Assignment No. : 6

Allotment Date: 15 September 2021

S. NO	QUESTIONS	MARKS	NATURE
1	<p><u>Tick the correct answer</u></p> <ol style="list-style-type: none"><li>Windows 7 was developed by..... Microsoft IBM HCL</li><li>The bar at the bottom of desktop is known as..... Scroll bar Title bar Taskbar</li><li>The small pictures on the desktop are called..... Pointers Icons Documents</li><li>.....button is present at the bottom left corner of the desktop. Icon Date &amp; time Start</li></ol>	4X1=4	Information

2	<p><u>Identify the following pictures.</u></p> <p>1. _____</p> <div data-bbox="564 259 791 470" data-label="Image"></div> <hr/> <p>2. _____</p> <div data-bbox="552 1050 730 1234" data-label="Image"></div>	2X2=4	Understanding
4	<p><u>Answer the following</u></p> <p>What is Windows 7?</p> <p>.....</p> <p>.....</p>	2X1=2	Analytical Skill





## ARMY PUBLIC SCHOOL GWALIOR

### CLASS -III

### ACADEMIC SESSION 2021-22

### WORKSHEET (SELF –ASSESSMENT)


Subject: G.K

Assignment No. : 6

Allotment Date: 15 September 2021

S. No.	Questions	Marks	Nature
1.	Fill in the blanks- i) The leaves of ..... are used to add flavour to food. ii) Malgudi Days is a collection of short stories by ..... iii) .....have hair-like structures on their sides which help them to get more oxygen. . iv) We celebrate Earth Day on ..... v) The ..... is the currency of UK.	5x0.5 =2.5	Information
2.	Match the following- i) the bell ii) Hyderabad iii) bhangra iv) The Jungle Book v) teeth a) thirty-two b) ding-dong c) Rudyard Kipling d) Punjab e) Telangana	5x0.5=2 .5	Problem solving
3.	In which sport has India won the most number of medals at the Olympics? .....	1x1=1	Understanding

	<p>.....</p>		
<p><b>4.</b></p>	<p>Answer the following questions-</p> <p>i) Name the plant whose leaves are used as a cure for various skin diseases.</p> <p>.....</p> <p>ii) Name the person in Jonathan Swift's novel who reaches a strange island after his ship sinks at sea.</p> <p>.....</p> <p>iii) Which part of our body has the maximum number of bones?</p> <p>.....</p> <p>iv) Name the currency of Indonesia.</p> <p>.....</p>	<p><b>4x1=4</b></p>	<p><b>HOT</b></p>



## ARMY PUBLIC SCHOOL GWALIOR

### CLASS -III

### ACADEMIC SESSION 2021-22

### WORKSHEET (SELF –ASSESSMENT)

Subject: Work Education


Assignment No. : 6


Allotment Date: 15 September 2021

S.N	QUESTIONS	MARKS	NATURE
1.	_____is the another name of string puppet? A. Marionette B. Bear C. Human D. Dog	1X0.5=0.5	Information
2.	Ornamental rangoli consists of images of_____. A. birds, animals, trees, petals, flower B. Circles, cones and lines C. None of these	1X0.5=0.5	Understanding
3.	.Origami is_____. A. Paper craft B. Textile craft C. Flower craft D. None	1X0.5=0.5	Information

4.	Rangoli is an _____ traditional art A. Ornamental B. form C. dominant D. Indian	1X0.5=0.5	Creativity
5.	_____is a type of rangoli art A. Ornamental B. form C. dominant D. Indian	1X0.5=0.5	Creativity
6.	We use puppets for Painting. A. True B. False	1X0.5=0.5	Creativity
7.	Finger puppets are hand puppets? A. True B. False	1X0.5=0.5	Creativity
8.	Puppets stimulate imagination encourage creative Play. A. False B. True	1X0.5=0.5	Creativity
9.	There were five colours used in the video multiplication flower. A. True B. False	1X0.5=0.5	Creativity
10.	We learn countings through the video multiplication flower. C. True D. False	1X0.5=0.5	Creativity
11	How many colours used in the video Multiplication through flower craft? E. Five F. Three G. Two H. Four	1X0.5=0.5	Creativity

12	How many shape we used in video house making? A. 7 B. 4 C. 6 D. 1	1X0.5=0.5	Creativity
13	What is the Meaning of Paper Mache? A. Chewed or crushed paper B. Coloured paper C. Sheets D. Stencils	1X0.5=0.5	Creativity
14	What We learn through the video Multiplication through flower craft A. Counting B. Tables C. Addition D. Subtraction	1X0.5=0.5	Creativity
15	How many types of rangolis are there? A. three B. five C. two	1X0.5=0.5	Creativity
16	Which state is famous for puppets? A. Punjab B. Rajasthan C. Orissa D. Madhya Pradesh	1X0.5=0.5	Creativity
17	Finger puppets can be used for? A. To tease others B. To learn counting using fingers C. Just for playing in playground	1X0.5=0.5	Creativity

18	<p>Which house is used by people who keep moving from one place to another like soldiers and campers?</p> <p>A. Tent B. Caravan C. Houseboat D. igloo</p>	1X0.5=0.5	Creativity
19	<p>Which state is famous for Kathputli (Dance) puppet?</p> <p>A. Rajasthan B. Maharashtra C. Tamil Nadu</p>	1X0.5=0.5	Creativity
20	<p>Which house picture is this?</p>  <p>A. Tent B. Caravan C. Houseboat D. igloo</p>	1X0.5=0.5	Creativity



## ARMY PUBLIC SCHOOL GWALIOR

### CLASS -III

### ACADEMIC SESSION 2021-22



### WORKSHEET (SELF –ASSESSMENT)

Subject: Art Education



Assignment No. : 6



Allotment Date: 15 September 2021

S.N	QUESTIONS	MARKS	NATURE
1.	Warli painting is a _____. A. White paint on red background B. Simple shapes and lines C. People dancing	1X0.5=0.5	Information
2.	White paint created in Warli Art using _____. A. Grounding rice into powder B. Mixing flour and salt C. Using acrylic or tempera D. Using chalk and water	1X0.5=0.5	Understanding
3.	The softer the lead, the _____ the mark will be. A. Darker B. Lighter C. Wider D. Softer	1X0.5=0.5	Information

4.	<p>_____ are the basic Shapes</p> <p>A. Triangle, oval, square</p> <p>B. Square, rectangle, Circle</p> <p>C. Circle, oval, triangle</p> <p>D. Square, Triangle, Circle</p>	1X0.5=0.5	Creativity
5.	<p>The lighter the value, the lead in the pencil is ____.</p> <p>A. Hard</p> <p>B. Soft</p> <p>C. Dark</p> <p>D. Wide</p>	1X0.5=0.5	Creativity
6.	<p>Yellow, red and orange are warm colours.</p> <p>A. True</p> <p>B. False</p>	1X0.5=0.5	Creativity
7.	<p>White, green and cream are cool colours.</p> <p>A. True</p> <p>B. False</p>	1X0.5=0.5	Creativity
8.	<p>This is Blending.</p>  <p>A. True</p> <p>B. False</p>	1X0.5=0.5	Creativity
9.	<p>Is this a warli art?</p>  <p>A. Yes</p> <p>B. No</p>	1X0.5=0.5	Creativity
10.	<p>Pencils today are made of graphite.</p> <p>A. True</p> <p>B. False</p>	1X0.5=0.5	Creativity



11	<p>This is the</p>  <p>A. Light Source B. Core Shadow C. Cast Shadow D. Highlight</p>	1X0.5=0.5	Creativity
12	<p>Which state is known for its Warli paintings?</p> <p>A. Gujarat B. Rajasthan C. Maharashtra</p>	1X0.5=0.5	Creativity
13	<p>What type of scale shows the range of values from black to white and light to dark?</p>  <p>A. Monetary scale B. Proportion scale C. Pentatonic scale D. Value scale</p>	1X0.5=0.5	Creativity
14	<p>What is the shape of square?</p> <p>A. 2D B. 3D C. 5D D. Not any</p>	1X0.5=0.5	Creativity

15	<p>What is pictured here?</p>  <p>A. A wedding scene B. Dancers and a tarpa instrument player. C. Dancers and a bagpipe player D. Warli villagers celebrating a religious holiday</p>	1X0.5=0.5	Creativity
16	<p>How many sides triangle have?</p> <p>A. 4 B. 5 C. 3 D. 2</p>	1X0.5=0.5	Creativity
17	<p>This technique creates a gradation from light to dark</p> <p>A. Burnishing B. Shading C. Hatching D. Scumbling</p>	1X0.5=0.5	Creativity
18	<p>Which pencil is capable of making the darkest values?</p> <p>A. HB B. B C. 2B D. 4B</p>	1X0.5=0.5	Creativity
19	<p>This drawing is called a: 1 mark Shading</p>  <p>A. Still life B. Landscape C. Gesture drawing D. Contour drawing</p>	1X0.5=0.5	Creativity

20	I have four sides and all sides are equal, who am I? A. Square B. Triangle C. Rectangle	$1 \times 0.5 = 0.5$	Creativity
----	--	----------------------	------------



## ARMY PUBLIC SCHOOL GWALIOR

### CLASS -III

### ACADEMIC SESSION 2021-22

### WORKSHEET (SELF –ASSESSMENT)

**Subject: Health and Physical Education**


**Assignment No. : 6**

**Allotment Date: 15 September 2021**

S.no	Question	Nature	Marks
1.	Fill in the blanks We should brush our teeth _____ a day. a) Twice b) Thrice c) Once d) None of the above	Informative	MM-10 $\frac{1}{2} \times 5 = 2.5$
2.	We should keep our nails _____ a) Clean b) Dirty c) Big d) None of the above	Informative	
3.	_____ and _____ processes highly depend on genetic, nutritional, and environmental factors. a) Growth and development b) Physical shape and life style c) Health and wealth d) None of the above	Understanding	
4.	Living things need _____ to live. a) Carbon dioxide b) Oxygen c) Nitrogen d) Hydrogen	Analytic skill	
5.	_____ is running at a slow speed.	Informative	

	<ul style="list-style-type: none"> <li>a) Jogging</li> <li>b) Running</li> <li>c) Walking</li> <li>d) None of the above</li> </ul>		$\frac{1}{2} \times 5 = 2.5$
	True/False		
6.	There are 3 stumps in cricket pitch.	Understanding	
7.	Short service line is 1.95m long.	Informative	
8.	Always flush toilet after use	Informative	
9.	We should not take bath regularly	Understanding	
10.	Jogging is an exercise	Analytic skill	
	MCQs		$\frac{1}{2} \times 10 = 5$
11.	Adolescence growth and development come at the age of. <ul style="list-style-type: none"> <li>a) 9 to 11 years</li> <li>b) 12 to 18 years</li> <li>c) Below 2 years</li> <li>d) 3 to 8 years</li> </ul>	Informative	
12.	While breathing our chest muscle moves. <ul style="list-style-type: none"> <li>a) Inwards and downwards</li> <li>b) Upwards and outwards</li> <li>c) Left and right</li> <li>d) None of the above</li> </ul>	Analytic skill	
13.	Which thing we should do always <ul style="list-style-type: none"> <li>a) Play</li> <li>b) Rest</li> <li>c) Both A and B</li> <li>d) None of the above</li> </ul>	Understanding	
14.	Which thing provide a hygiene barrier? <ul style="list-style-type: none"> <li>a) Clothing</li> <li>b) Shoes</li> <li>c) Clothing and shoes</li> <li>d) None of the above</li> </ul>	Informative	
15.	What is the length of basketball court? <ul style="list-style-type: none"> <li>a) 94ft</li> <li>b) 56ft</li> <li>c) 84ft</li> </ul>	Informative	

16	<p>d) 80ft</p> <p>What is the width of basketball court?</p>	Informative	
17.	<p>a) 57ft b) 60ft c) 50ft d) 77ft</p> <p>Body part used in jumping jack?</p>	Analytic skill	
18.	<p>a) Arms b) Waist c) Shoulders d) Elbow</p> <p>Which body parts are used in run in place?</p>	Analytic skill	
19.	<p>a) Leg b) Waist c) Hip d) All of the above</p> <p>What is the method of travelling on land?</p>	Understanding	
20.	<p>a) Running b) Jumping c) Walking d) Hoping</p> <p>Which is the deformation process of a metal that is widely used in the metal forming process.</p>	Informative	
	<p>a) Rolling b) Leaping c) Hoping d) Running</p>		



# ARMY PUBLIC SCHOOL GWALIOR

## CLASS -III




### ACADEMIC SESSION 2021-22

### WORKSHEET (SELF –ASSESSMENT)

Subject: Discipline

Assignment No. : 6

Allotment Date: 15 September 2021

S. No	Question	Marks	Nature
1.	<p><b>Match The Following-</b></p> <p></p> <p><i>Watering Plants</i></p> <p>a.</p> <p></p> <p><i>Folding clothes</i></p> <p>b.</p> <p></p> <p><i>Throwing Garbage</i></p> <p>c.</p>	02	Knowledge & Understanding




d

*Arranging Bed*

2.	<p><b>Write Y for Yes and N for No-</b></p> <ul style="list-style-type: none"><li>i. Do you take care of your things.</li><li>ii. Do you do your HW on your own</li><li>iii. The swallow helped prince</li><li>iv. The swallow was kind.</li></ul>	02	Thinking Skills
3.	<p><b>Tick the correct answer-</b></p> <p><b>a. Being Responsible is -</b></p> <p>A good quality Happiness</p> <p><b>b. Story ' The Happy Prince' is about-</b></p> <ul style="list-style-type: none"><li>c. Kindness</li><li>d. Happiness</li></ul>	02	Thinking Skills
4.	<p><b>Fill in the blanks-</b></p> <ul style="list-style-type: none"><li>i. The _____ Prince.(Happy, Sad)</li><li>ii. His eyes were made of _____(beautiful, ugly) blue sapphire _____.</li><li>iii. His statue was covered with beautiful _____ (gold/silver)leaves.</li><li>iv. There was a _____ (poor/rich) writer .</li><li>v. One day a little swallow flew over the _____ (city/town).</li><li>vi. Real happiness is found in making others_____ (happy/sad).</li></ul>	04	





## ARMY PUBLIC SCHOOL GWALIOR

### CLASS -III

### ACADEMIC SESSION 2021-22

### WORKSHEET (SELF –ASSESSMENT)

Subject: Music (Dance/Instrumental)

Assignment No. : 6

Allotment Date: 15 September 2021

Sr. No.	Answer the following questions:	Nature	Marks
<b>A.</b>	<b><u>Fill in the blanks:</u></b>		10
1.	The word "Gu" in Guru means_____. a. Darkness b. Light c. Colourful	Informative	½
2.	_____is used in Guru Vandana. a. Shlokas b. Song c. Music	Informative	½
3.	Guru Vandana is thanksgiving from a student to a_____ a. Teacher b. Painter c. Student	Informative	½
4.	The symbol for vihaag in the rhythm is _____. a.   b. X c. 0	Informative	½
5.	There are _____ of rythms. a. 5 b. 4 c. 6	Informative	½
<b>B.</b>	<b><u>True/ False:</u></b>		
6.	Table has two parts a. True b. False	Informative	½
7.	We represent the rhythm with the clap clap. a. True b. False	Informative	½

8.	Every Tabla student learns Teen Taal. a. True b. False	Informative	½
9.	The word “ru” in Guru means dispel (दूर करना) a. True b. False	Informative	½
10.	Mudras do not play important role in dance. a. True b. False	Informative	½
<b>C.</b>	<b><u>Multiple Choice Question:</u></b>		
11.	Kathak is a classical dance of? a. North India b. Kerala c. Assam	Informative	½
12.	Lavani is a dance form from? a. Maharashtra b. Kerala c. Assam	Informative	½
13.	Garba folk dance is from? a. Gujarat b. Jharkhand c. Tamil Nadu	Informative	½
14.	What does a guru give? a. Knowledge and wisdom b. Patience c. Perfection	Informative	½
15.	What are the two types of sitting position in bharatanatyam? a. Samapadam b. Natrajam c. Aramandi and Muzhumandi	Informative	½
16.	What is the symbol for the khali in the rhythm? a. 1 b. 2 c. 0	Informative	½
17.	What is the first volume (matra) of taali called? a. Sam b. Khali c. Vihaag	Informative	½
18.	What is the quantity (matra) in teen taal? a. 15 b. 16 c. 17	Informative	½
19.	Ustad zakhir Hussain is a famous player of? a. Tabla b. Drum c. Flute	Informative	½
20.	What is the symbol for sum in? a. X b. 0 c. #	Informative	½



**ARMY PUBLIC SCHOOL GWALIOR**

**CLASS -III**

**ACADEMIC SESSION 2021-22**

**WORKSHEET (SELF –ASSESSMENT)**

**Subject: Library**

**Assignment No. : 6**

**Allotment Date: 15 September 2021**

S.NO	QUESTIONS	MARKS	NATURE
	<b>Answer the following questions on the basis of the story 'The wooden horse of Troy' given in the notes.</b>		
1	Who were at war with each other? ..... .....	01	Comprehension
2	How did the Greeks reach troy ? ..... .....	01	Analysis
3	What was round the city ? ..... .....	01	Understanding
4	How long did the Greeks try to beat the Trojans? ..... .....	01	Comprehension
5	Who thought of a very clever plan? ..... .....	01	Understanding
6	What did he tell his men to do? ..... .....	01	Analysis
7	Why the horse was made hollow and big? ..... .....	01	Comprehension

8	What did the Greek army do? ..... .....	01	Understand ing
9	Who told them why it was made? ..... .....	01	Analysis
10	What did the Trojans do with the horse? ..... ..... .....	01	Compreh ension