

**ARMY PUBLIC SCHOOL GWALIOR**  
**CLASS -II**  
**ACADEMIC SESSION 2021-22**  
**WORKSHEET (SELF –ASSESSMENT)**



**Subject: English**  
**Allotment Date: 15 September 2021**

**Assignment No. : 6**

S.NO.	QUESTIONS	MARKS20	NATURE
1	<b>I. Fill in the blanks with correct answer.</b>  1. Our parents ..... us. (love , loves)  2. I ..... absent yesterday. ( was / were)  3. Nitin and Sonu ..... best friends. (are / is)  4. They ..... a big car. (has/ have)	(4x1=4)	Information
2	<b>(a) Write the rhyming words used in the poem.</b>  “A Prayer” and “The Magic Words”.  Dear-.....Ease-.....  Should-.....Day-.....	(4x0.5=2)	Understanding



	(c) aroma	tasty		
	(d) delicious	unhappy look		



**ARMY PUBLIC SCHOOL GWALIOR**  
**CLASS -II**  
**ACADEMIC SESSION 2021-22**  
**WORKSHEET (SELF –ASSESSMENT)**



**Subject: Hindi**  
**Allotment Date: 15 September 2021**

**Assignment No. : 6**

संख्या	प्रश्न-उत्तर	अंक	प्रकृति
प्र.1	नन्धलखित शब्दों के शब्दार्थ लिखो  1- शीतल-  2-तन -  3- सीख  4- त्योहार-	4	बाषात्मक
प्र.2	सही उत्तर के सामने □ लगाओ।  कद्ध बरगद के पेड़ पर किस का घोंसला थाः  1 हाथी का    2 चिड़िया का    3 मधुमक्खी का  यखद्ध चिड़िया ने रानी मधुमक्खी से क्या मांगा ढ  1 दवा            2 पानी            3 शहद	2	स्वनिपरक
प्र.3	खाली स्थान भरु - 1    गोलू और लालू में झूलने की ___ लग गई।  2. हाथी ने चिड़िया का _____ किया  3. दोनों की _____ हो गई।  4. हाथी की एक आंख में एक _____ घुस गया ढ	4	अंतः विशयात्मक



	<p>.....</p> <p>....</p> <p>5.....</p> <p>....."</p>		
--	--	--	--



**ARMY PUBLIC SCHOOL GWALIOR**  
**CLASS -II**  
**ACADEMIC SESSION 2021-22**  
**WORKSHEET (SELF –ASSESSMENT)**



**Subject: Mathematics**  
**Allotment Date: 15 September 2021**

**Assignment No. : 6**

S. NO.	QUESTIONS	MARKS	NATURE
		<b>20</b>	
1	<b>Fill in the blanks:-</b>  1. Number of 196 is .....  2. .... comes before 157  3. .... comes after 378  4. The place value of 7 in 978 is .....	<b>3×1=3</b>	<b>Understanding</b>
2	<b>Addition:</b>  (a) $\begin{array}{r} 242 \\ + 325 \\ \hline \hline \end{array}$  (b) $\begin{array}{r} 42 \\ + 59 \\ \hline \hline \end{array}$  <b>Subtract:-</b>  (c) $\begin{array}{r} 783 \\ - 421 \\ \hline \hline \end{array}$  (d) $\begin{array}{r} 53 \\ - 26 \\ \hline \hline \end{array}$	<b>4×1=4</b>	<b>problem solving</b>





6.	<b>Fill in the blanks:-</b>  1. 2groupsof3butterflies =2× _____  2. $81 \div 9 = \dots\dots\dots$  3. $776 = \dots\dots\dots + 70 + 6$	<b>3x1=3</b>	<b>information</b>
----	--	--------------	--------------------







**ARMY PUBLIC SCHOOL GWALIOR**  
**CLASS -II**  
**ACADEMIC SESSION 2021-22**  
**WORKSHEET (SELF –ASSESSMENT)**



**Subject: EVS**  
**Allotment Date: 15 September 2021**

**Assignment No. : 6**

S.No.	QUESTIONS	MARKS	NATURE
		<b>20</b>	
<b>1</b>	<b>Fill in the blanks</b>  (i) ..... Is an outdoor game. (ii) A ..... is a crowded place. (iii) Food helps us to grow ..... and ..... (iv) The ..... pumps blood to all the parts of the body.	<b>4x1=4</b>	<b>Information</b>
<b>2</b>	<b>Tick the correct answer-</b>  1. .... is worn in the in rainy season. a. raincoat      b. belt      c. frock  2. An igloo is made up of ..... a. mud      b. Steel      c. ice	<b>2x1=2</b>	<b>Understanding</b>



<p><b>5</b></p>	<p><b>Answer the following questions-</b></p> <p>1. What materials are used to make a pakka house?</p> <p>Ans .....</p> <p>.....</p> <p>2. Name some important neighborhood services.</p> <p>Ans .....</p> <p>.....</p>	<p><b>2x1=2</b></p>	<p><b>Analytical skill</b></p>
<p><b>6</b></p>	<p><b>Answer the following questions-</b></p> <p>1. What kind of game is important and why?</p> <p>Ans .....</p> <p>.....</p> <p>2. Who is a postman?</p> <p>Ans .....</p> <p>.....</p>	<p><b>2 x2 = 4</b></p>	<p><b>HOTS</b></p>



**ARMY PUBLIC SCHOOL GWALIOR**  
**CLASS -II**  
**ACADEMIC SESSION 2021-22**  
**WORKSHEET (SELF –ASSESSMENT)**




**Subject: Computer**  
**Allotment Date: 15 September 2021**

**Assignment No. : 6**

S. NO.	QUESTIONS	MARKS	NATURE																	
1	<p><b>Q.A Tick the correct answer-</b></p> <p>1. ....is designed in such a way that it fits conveniently on your lap. (a)Desktop (b)Laptop (c) Tablet PC Ans-</p> <p>2.An ___ is used to withdraw money. (a) ATM (b)Mobile (c) None of these Ans-</p> <p>3. ___ use computers in preparing medical reports. (a)Teachers (b) Doctors (c) Engineers Ans-</p> <p>4. There are .....Enter keys available on a keyboard. a)Three b) Twoc) Four Ans-</p>	4x0.5=2	Information																	
2	<p><b>Q.B Fill in the blanks by unscrambling the words-</b></p> <p>1.....is a blinking line on the screen</p> <table border="1" style="margin-left: 20px;"><tr><td>O</td><td>R</td><td>S</td><td>R</td><td>C</td><td>U</td></tr></table> <p>Ans.- _____</p> <p>2.Computer is used for booking tickets-</p> <table border="1" style="margin-left: 20px;"><tr><td>R</td><td>R</td><td>A</td><td>P</td><td>T</td><td>I</td><td>O</td></tr></table> <p>Ans.- _____</p> <p>3. you can with draw Money from-</p> <table border="1" style="margin-left: 20px;"><tr><td>N</td><td>A</td><td>K</td><td>B</td></tr></table> <p>Ans.- _____</p>	O	R	S	R	C	U	R	R	A	P	T	I	O	N	A	K	B	4X0.5=2	Understand ding
O	R	S	R	C	U															
R	R	A	P	T	I	O														
N	A	K	B																	

	<p>4. Computer helps a doctor to diagnose-</p> <table border="1" data-bbox="247 181 571 219"> <tr> <td>A</td> <td>S</td> <td>E</td> <td>D</td> <td>S</td> <td>I</td> <td>E</td> </tr> </table> <p>Ans.- _____</p>	A	S	E	D	S	I	E		
A	S	E	D	S	I	E				
<p><b>3.</b></p>	<p><b>Write T for true and F for false statements-</b></p> <p>1. Laptops are very big in size _____</p> <p>2. Computers cannot be used in schools. _____</p> <p>3. In banks, computers are used for playing games. _____</p> <p>4. Scientists use computers for their research work. _____</p>	<p><b>4x0.5=2</b></p>	<p><b>Understanding</b></p>							
<p><b>4.</b></p>	<p><b><u>Answer the following question</u></b></p> <p><b>a. Name the different types of computers.</b></p> <p>Ans,</p> <p>_____</p> <p>_____</p> <p>_____</p> <p>_____</p> <p><b>b. What is the use of a computer in school?</b></p> <p>Ans _____</p> <p>_____</p> <p>_____</p> <p>_____</p>	<p><b>2x2=4</b></p>	<p><b>Critical Thinking and Problem Solving</b></p>							










**ARMY PUBLIC SCHOOL GWALIOR**  
**CLASS -II**  
**ACADEMIC SESSION 2021-22**  
**WORKSHEET (SELF –ASSESSMENT)**



Subject: G.K  
Allotment Date: 15 September 2021

Assignment No. : 6

S. NO.	QUESTIONS	MARKS 20	NATURE
1.	Identify the following and write their name-  1.  _____  2.  _____  3.  _____  4.  _____  5.  _____	5x1=5	Understanding

<p><b>2.</b></p>	<p><b>Answer in one word-</b></p> <p>1 This type of fish have beaks similar to bird's beak.? Ans- .....</p> <p>2.. Which is the oldest commonly spoken language in India? Ans- .....</p> <p>3.. This type of fish has a long snout that looks like a saw , which helps it dig the ocean floor for food. Ans- .....</p> <p>4. . Who is known as ' Father of Nation' ? Ans-.....</p>	<p><b>4x1=4</b></p>	<p>Thinking skill</p>
<p><b>3</b></p>	<p><b>Fill in the blanks-</b></p> <p>1. This vehicle is used by the farmers. <u>.....</u></p> <p>2. 2. . I am duck..Guess my baby's name <u>.....</u></p> <p>3. I am largest land animal on earth.....</p> <p>4 I am the smallest bird in the world.....</p> <p>5. This is made to scare birds away from the field.....</p>	<p><b>5x1=5</b></p>	<p>Problem solving</p>
<p><b>4</b></p>	<p><b>Write the correct name of these famous places.-</b></p> <p>1. A place where aero planes land and take off from- Ans-.....</p> <p>2. Lake in Sri nagar .known for its houseboats. Ans.....</p> <p>3. A road that goes over another road- Ans.....</p> <p>4. National Park in Assam known for its one-horned Rhino. Ans.....</p>	<p><b>4x1=4</b></p>	<p>Critical thinking</p>





**ARMY PUBLIC SCHOOL GWALIOR**  
**CLASS -II**  
**ACADEMIC SESSION 2021-22**  
**WORKSHEET (SELF –ASSESSMENT)**



**Subject: Work Education**  
**Allotment Date: 15 September 2021**

**Assignment No. : 6**

S.N	QUESTIONS	MARKS	NATURE
1.	_____is the another name of string puppet? A. Marionette B. Bear C. Human D. Dog	1X1=1	Information
2.	I am the tallest animal in the world. I am a_____. A.Lion B.Giraffe C.Elephant D.None of these	1X1=1	Understanding
3.	____ angle paper plate makes the face of Bunny. (A) 45 degree (B) 90 degree (C) 100 degree	1X1=1	Information
4.	Birds fly with the help of their wings. A. True B. False	1X1=1	Creativity

5.	The shape of bird's wings are similar to circular. A. True B. False	1X1=1	Creativity
6.	We use puppets for Painting. A. True B. False	1X1=1	Creativity
7.	How many white paper plates are used in video Bunny Mask? A. 5 B.3 C.6 D.2	1X1=1	Creativity
8.	Which material we have not used while making House (Cut & Paste) video? A. Scissor B. Coloured papers C. Fevicol D. Thread	1X1=1	Creativity
9.	Which color paper is used to make bunny's ear? A.black Bwhite C.pink	1X1=1	Creativity
10.	How many oval shapes are used to make giraffe. A. 2 B. 4 C. 6 D. 5	1X1=1	Creativity



**ARMY PUBLIC SCHOOL GWALIOR**  
**CLASS -II**  
**ACADEMIC SESSION 2021-22**  
**WORKSHEET (SELF –ASSESSMENT)**




**Subject: Art Education**  
**Allotment Date: 15 September 2021**

**Assignment No. : 6**

S.N	QUESTIONS	MARKS	NATURE
1.	Warli painting is a _____. A. White paint on red background B. Simple shapes and lines C. People dancing	1X1=1	Information
2.	_____ are the basic Shapes A. Triangle, oval, square B. Square, rectangle, Circle C. Circle, oval, triangle D. Square, Triangle, Circle	1X1=1	Creativity
3.	The lighter the value, the lead in the pencil is _____. A. Hard B. Soft C. Dark D. Wide	1X1=1	Creativity
4.	Yellow, red and orange are warm colours. A. True D. False	1X1=1	Creativity
5.	White, green and cream are cool colours. A. True B. False	1X1=1	Creativity
6.	Is this a warli art?	1X1=1	Creativity



- A. Yes
- B. No

7	<p>Which state is known for its Warli paintings?</p> <ul style="list-style-type: none"> <li>A. Gujarat</li> <li>B. Rajasthan</li> <li>C. Maharashtra</li> </ul>	1X1=1	Creativity
8	<p>What is pictured here?</p>  <ul style="list-style-type: none"> <li>A. A wedding scene</li> <li>B. Dancers and a tarpa instrument player.</li> <li>C. Dancers and a bagpipe player</li> <li>A. D. Warli villagers celebrating a religious holiday</li> </ul>	1X1=1	Creativity
9	<p>How many sides triangle have?</p> <ul style="list-style-type: none"> <li>A. 4</li> <li>B. 5</li> <li>C. 3</li> <li>D. 2</li> </ul>	1X1=1	Creativity
10	<p>Which pencil is capable of making the darkest values?</p> <ul style="list-style-type: none"> <li>A. HB</li> <li>B. B</li> <li>C. 2B</li> <li>D. 4B</li> </ul>	1X1=1	Creativity



**ARMY PUBLIC SCHOOL GWALIOR**  
**CLASS -II**  
**ACADEMIC SESSION 2021-22**  
**WORKSHEET (SELF –ASSESSMENT)**



**Subject: Health and Physical Education**  
**Allotment Date: 15 September 2021**

**Assignment No. : 6**

S.no	Question	Nature	Marks
1.	<p><b>Fill in the blanks</b></p> <p>Food come from _____ and _____.</p> <p>a) Stores and shops b) Plants and animals c) Both A and B d) None of the above</p>	Informative	MM-10 3 x 1 = 3
2.	<p>Food is prepared in _____ at home.</p> <p>a) Bedroom b) Drawing room c) Kitchen d) None of the above</p>	Analytic Skill	
3.	<p>_____ substance that stimulate receptors on our taste buds.</p> <p>a) Chemical b) Biological c) Colour d) None of the above</p>	Informative	
4.	<p><b>True/False</b></p> <p>Does walking improve your concentration.</p>	Understanding	3 x 1 = 3
5.	<p>We have to use both feet while running.</p>	Understanding	
6.	<p>The shape of football ground is rectangular.</p>	Informative	
7.	<p><b>MCQs</b></p> <p>Write down the names of equipment of calling the number game.</p>	Analytic skill	4 x 1 = 4



<p>8.</p>	<p>a) Lime powder b) Markers c) Different size of balls d) Stick</p> <p>How many players can be in one team in calling the number game?</p> <p>a) 5 b) 8 c) 9 d) 10</p>	<p>Informative</p>	
<p>9.</p>	<p>Where do we buy food from?</p> <p>a) Grocery store b) convenience stores c) farmers markets d) All of the above</p>	<p>Informative</p>	
<p>10.</p>	<p>How do we get food?</p> <p>a) By growing b) By rearing c) By catching d) All of the above</p>	<p>Understanding</p>	



**ARMY PUBLIC SCHOOL GWALIOR**  
**CLASS -II**  
**ACADEMIC SESSION 2021-22**  
**WORKSHEET (SELF –ASSESSMENT)**




**Subject: Discipline**  
**Allotment Date: 15 September 2021**

**Assignment No. : 6**

S. No	Questions	Marks	Nature
1.	<p><b>Fill in the blanks-</b></p> <p>i. Being responsible is a good_____</p> <p>ii. Responsible children grow _____.</p> <p>iii. Responsibility is being _____.</p> <p>iv. If you are responsible people can _____ on you.</p> <p>v. Steven, Robert and Tim had a _____ project.</p> <p>vi. Carly never let her friends _____.</p> <p>vii. The three boys got the project done they were_____.</p> <p>viii. Carly was very _____.</p> <p>ix. Change your_____ Change your _____</p> <p>x. Gertrude was just an _____kid with an average _____.</p>	05	Knowledge & Understanding
2.	<p><b>Choose the correct answer-</b></p> <p>A voice spoke in the dream: “The present is nothing more than the outcome of the choices made in the past. The future will only be the results of the choices we make today.”</p> <p>i. Whatever we are doing today, will make our future.</p> <p>ii. We can waste as much time as we want.</p> <p>iii. The future is unpredictable</p> <p>iv. The present can be made beautiful</p>	02	

3.	<p><b>How do you show your responsibility.</b></p> <p>i. _____</p> <p>ii. _____</p> <p>iii. _____</p> <p>iv. _____</p> <p>v. _____</p> <p>vi. _____</p>	03	Thinking and Writing Skills




**ARMY PUBLIC SCHOOL GWALIOR**  
**CLASS -II**  
**ACADEMIC SESSION 2021-22**  
**WORKSHEET (SELF –ASSESSMENT)**

**Subject: Dance**

**Assignment No. : 6**

**Allotment Date: 15 September 2021**

S. No.	Answer the following questions:	Nature	Marks
<b>A.</b>	<b>Fill in the blanks:</b>		10
1.	In Bharatanatyam dancers have to express the song with____. a. Sadness b. Emotions c. Happiness	Informative	1
2.	Expressions in dance is known as____ a. Bhaav b. Jathi c. Taal	Informative	1
3.	The first volume(matra) of taal is called____ a. Sam b. Khali c. vibhag	Informative	1
<b>B.</b>	<b>True/ False:</b>		
4.	We represent rhythm with the clap. a. True b. False	Informative	1
5.	'Lakdikikathi' song is all about a horse? a. True b. False	Informative	1
6.	Music plays important role in dance a. True b. False	Informative	1
<b>C.</b>	<b>Multiple Choice Questions</b>		
7.	During rainy season what do we see in sky which has seven colours. a. Rainbow b. Clouds c. Birds	Informative	1
8.	Wood in dance is used as a. Stick b. Door c. Floor	Informative	1
9.	What is the symbol for sam in taal? a. X b. 0 c. #	Perceptual	1
10.	What is the symbol for khali in rhythm? a. 1 b. 2 c. 0	Perceptual	1



**ARMY PUBLIC SCHOOL GWALIOR**  
**CLASS -II**  
**ACADEMIC SESSION 2021-22**  
**WORKSHEET (SELF –ASSESSMENT)**

**Subject: Library**  
**Allotment Date: 15 September 2021**

**Assignment No. : 6**

S.N O	QUESTIONS	MARKS	NATURE
	<b>Answer the following questions on the basis of the story ‘ The elves and the shoemaker’ given in the notes.</b>		
1	Why did the shoemaker become very poor ? ..... ..... .....	01	Comprehen sion
2	What was all he had left ? ..... ..... .....	01	Understand ing
3	What did he do before going to bed ? ..... ..... .....	01	Comprehen sion
4	What did he find in the morning ? ..... ..... .....	01	Analysis
5	What did he do on the next evening ? ..... ..... .....	01	Analysis
6	What was the name of the story ? ..... ..... .....	01	Analysis
7	What did he find In the morning ? ..... ..... .....	01	Comprehen sion
8	What did the shoemaker say to his wife ? ..... ..... .....	01	Comprehen sion
9	How did they show their thanks ?	01	Comprehen

	..... ..... ..... .....		sion
10	What did they see when they sat up to watch ? ..... ..... ..... .....	01	Comprehen sion