

ARMY PUBLIC SCHOOL GWALIOR
CLASS -I



ACADEMIC SESSION 2021-22
WORKSHEET (SELF –ASSESSMENT)

Subject: English

Assignment No. : 6

Allotment Date: 15 September 2021

S.N	QUESTIONS	MARKS	NATURE
1	Fill in the blanks with correct word : 1. The wheat plant grew up yellow and(juicy/ripe) 2. The bird had hurt her..... (beak/wing)	2X1=2	Information
2	Match the following to make pairs. 1. uncle woman 2. man queen 3. king aunty	3X1=3	Understanding
3	Write the plurals for the following words. 1. Bat _____ 2. Cow _____ 3. Kitten _____	3X1=3	Interdisciplinary
4	Circle the pronoun in each of the following sentences. 1. This is a flower. It smells nice. 2. She is my cousin. 3. It is an alligator.	4X0.5=2	Analytical Skill

	4. They are my parents.		
5	<p>Frame sentences using the following words.</p> <p>1. Is - _____ .</p> <p>2. Am - _____ .</p> <p>3. This is - _____ .</p>	3X1=3	Critical Thinking and Problem Solving
6	<p>Write any two words from the poem "A Box of crayons" that rhyme with the following words.</p> <p>1. New - _____</p> <p>2. Fine - _____</p>	1X2 =2	HOT
7	<p>Answer the following questions.</p> <p>a. What happened to the crayon ?</p> <p>_____</p> <p>_____</p> <p>b. Where did the Little Red Hen live ?</p> <p>_____</p> <p>_____</p>	2X1=2	Evaluation
8	<p>Write down the meanings of the following words :</p> <p>1. gently _____</p> <p>2. hatch _____</p> <p>3. straight _____</p>	3X1=3	Communication Skills



ARMY PUBLIC SCHOOL GWALIOR
CLASS -I



ACADEMIC SESSION 2021-22
WORKSHEET (SELF –ASSESSMENT)

Subject: Hindi

Assignment No. : 6

Allotment Date: 15 September 2021

सं ख्या	प्रश्नउत्तर	अंक	प्रकृति
प्र.1	सही वाक्यों के सामने सही (√) व गलत के सामने गलत (×) का निशान लगाएं । नखिल का इनाम निकला था । () बादल धरती पर छा गया । () डाकिया साइकिल पर आया । () .निखिल झटपट मिठाई लाया । () झुमरी तीन गिलास शरबत पी गयी । () मुनिया बड़ी उदास हुई । () झुमरी का बटुआ सुनहरा था । () झुमरी शादी पर उपहार लेकर न आई । ()	8x.5= 4	बोधात्मक
प्र 2	'इ' की मात्रा लगाकर सही शब्द बनाओ क. ----सतार ख. ----कताब ग. त----कया घ. बा----रश	1x4=4	सूचनापरक

<p>प्र-3</p>	<p>1.भालू का क्या नाम था ?</p> <hr/> <p>—</p> <p>2. कालू दुकान पर क्या पहन कर जाता था ?</p> <hr/> <p>—</p> <p>3. डाकिया क्या लाया था ?</p> <hr/> <p>—</p> <p>4.कालू ने कैसी चाट बनाई ?</p> <hr/> <p>—</p>	<p>4x.5=2</p>	<p>अंतःविषयात्मक</p>
<p>प्र-4</p>	<p>1.मामा जी की बिटिया का क्या नाम था ?</p> <hr/> <p>—</p> <p>2.मीरा कैसी लडकी थी ?</p> <hr/> <p>—</p> <p>3.मीरा क्या कह कर भागी ?</p> <hr/> <p>—</p> <p>4. झुमरी मुनिया की शादी में क्या उपहार लाई?</p> <hr/> <p>—</p>	<p>4x.5=2</p>	<p>गहन सोच और समाधान</p>
<p>प्र-5</p>	<p>निम्नलिखित अधूरे शब्दों में उचित विकल्प को जोड़कर सही शब्द बनाओ</p> <p>(कृ , मृ) :</p> <p>..... दा</p> <p>..... पाण</p>	<p>2x1=2</p>	<p>उच्चस्तरीय चिंतन</p>

 तक पा		
प्र-6	<p>हिंदी वर्णमाला में कितने स्वर होते हैं ?</p> <p>-----</p> <p>हिंदी वर्णमाला में कितने व्यंजन होते हैं ?</p> <p>-----</p> <p>स्वर और व्यंजन को मिलाकर क्या कहते हैं ?</p> <p>-----</p> <p>विशेष ध्वनि अनुस्वार से कोई भी एक शब्द बनाकर लिखो</p> <p>-----</p>	4x1=4	विश्लेषणात्मक
प्र-7	<p>निम्नलिखित शब्दों के अर्थ लिखो –</p> <p>समाचार –</p> <p>झटपट –</p> <p>नृप –</p> <p>तृण –</p>	1x2=2	भाषाई कौशल



ARMY PUBLIC SCHOOL GWALIOR
CLASS - I



ACADEMIC SESSION 2021-22
WORKSHEET (SELF –ASSESSMENT)

Subject: Mathematics

Assignment No. : 6

Allotment Date: 15 September 2021

S. NO.	QUESTIONS	MARKS	NATURE												
1	Write the number names of the following : (i) 30 = _____ (ii) 25 = _____	2x1=2	Information												
2	(i) Arrange the given numbers in Ascending Order 7,9,3,5,8,6 <table border="1" data-bbox="181 1585 818 1688"><tr><td> </td><td> </td><td> </td><td> </td><td> </td><td> </td></tr></table> (ii) Arrange the given numbers in Ascending Order 2,1,4,5,6,7 <table border="1" data-bbox="181 1957 818 2060"><tr><td> </td><td> </td><td> </td><td> </td><td> </td><td> </td></tr></table>													2x1=2	Understanding
3	Arrange the numbers from the board in descending Order	2x1=2	Interdisciplinary												

2,6,8,9,7,3,4,5

--	--	--	--	--	--	--	--

Analytical Skill

5

Problem solving sums-

- (i) David has 6 chickens. 3 of them die. How many chickens has he now?

Solution-

- (ii) There are 3 birds in one cage. 6 birds in the other cage. Find the total number of birds in the cages.



Solution-

$2 \times 2 = 4$



Critical Thinking
and Problem
Solving

6

Fill in the placeholders

(i)  = 

=

(ii)  = 

=

$2 \times 1 = 2$

HOT

7

Write the numbers that comes before:

• _____ 13

• _____ 15

2x1=2


Evaluation

8

i. The aeroplane is **below/above** the mountains .



ii. The cat is **on/under** the wall .



iii. The bird is **inside /outside** the cage.




VectorStock.com • 2781008

4x1=4

Communication Skills

The giraffe is **taller/ shorter** than tiger





ARMY PUBLIC SCHOOL GWALIOR
CLASS -I



ACADEMIC SESSION 2021-22
WORKSHEET (SELF –ASSESSMENT)

Subject: EVS

Assignment No. : 6

Allotment Date: 15 September 2021

S.N	QUESTIONS	MARKS	NATURE
1	<p>Tick (✓) the correct options :</p> <p>i. I _____ with my hands. a. clap b. run c. see</p> <p>ii. Our uncle's son is known as _____. a. cousin b. sister c. brother</p> <p>iii. _____ let fresh air into a house. a. doors b. windows c. walls</p> <p>iv. A dog's house is called a _____. a. shed b. stable c. kennel</p> <p>v. Our special school dress is known as _____. a. unicorn b. uniball c. uniform</p> <p>vi. A nurse works in a _____. a. market b. hospital c. jail</p>	6x0.5=3	Information
2	<p>Write 'T' for True or 'F' for False :</p> <p>i) Teachers do not tell stories -----</p> <p>ii) A plumber mends a broken shoe -----</p> <p>iii) Sick students go to the medical room. -----</p> <p>iv) A hive is where bees live. -----</p> <p>v) We use a kitchen to wash clothes -----</p> <p>vi) A joint family has many members -----</p>	6X0.5=3	Understanding
3	<p>Answer the following questions</p> <p>i).What do you do in your school playground?</p>	6X1=6	Interdisciplinary

Ans . _____

ii).Who takes care of the people in a hospital?

Ans . _____

.iii) What is healthy food?

Ans . _____

iv).What do you mean by relatives?

Ans . _____

v).How many sense organs do we have?

Ans . _____

vi) Why do animals need home?

Ans . _____

4


Identify the following pictures and write the name of that place/area of the house.



4X0.5=2

Analytical Skill

<p>5</p>	<p>Choose the correct options: (junk , breakfast, plants)</p> <p>i).Avoid eating food.</p> <p>iii).Most of our food comes from</p>	<p>2X1=2</p>	<p>Critical Thinking and Problem Solving</p>
<p>6</p>	<p>Name two fruits which have one seed and two fruits which have many seeds.</p> <p>i) _____</p> <p>ii) _____</p> <p>iii) _____</p> <p>iv) _____</p>	<p>2X1=2</p>	<p>HOT</p>
<p>7</p>	<p>Define the following words.</p> <p>i) Nuclear family - _____ _____</p> <p>ii) Neighbours - _____ _____</p>	<p>2x1=2</p>	<p>Communication Skills</p>



ARMY PUBLIC SCHOOL GWALIOR
CLASS -I



ACADEMIC SESSION 2021-22
WORKSHEET (SELF –ASSESSMENT)

Subject: Computer

Assignment No. : 6

Allotment Date: 15 September 2021

S. NO	QUESTIONS	MARKS	NATURE
1	<p><u>Tick the correct answer</u></p> <p>1. Machines make our work Boring Easy Difficult</p> <p>2. Is a smart machine. Computer Cloud Human</p> <p>3. We can play.....on a computer Games Machines Flowers</p> <p>4. Computer can solve..... for you Sums Paint Drawing</p>	4X1=4	Information

2	<p><u>Identify the following pictures.</u></p> <p>1. _____</p> <div data-bbox="523 257 801 465" data-label="Image"> </div> <hr/> <p>2. _____</p> <div data-bbox="343 828 654 996" data-label="Image"> </div>	2X2=4	Understanding																									
4	<p>Fill in the blanks in the following:-</p> <p>1. A computer is a</p> <table border="1" data-bbox="309 1413 1037 1462"> <tr> <td>M</td> <td></td> <td>C</td> <td></td> <td>I</td> <td></td> <td>E</td> </tr> </table> <p>2. Computer can tell you a</p> <table border="1" data-bbox="301 1525 841 1574"> <tr> <td>S</td> <td></td> <td>O</td> <td></td> <td>Y</td> </tr> </table> <p>3. A computer never makes</p> <table border="1" data-bbox="338 1648 938 1697"> <tr> <td>M</td> <td></td> <td>S</td> <td>T</td> <td></td> <td>K</td> <td>E</td> <td></td> </tr> </table> <p>4. A computer can show you a</p> <table border="1" data-bbox="306 1771 820 1821"> <tr> <td>M</td> <td></td> <td>V</td> <td></td> <td>E</td> </tr> </table>	M		C		I		E	S		O		Y	M		S	T		K	E		M		V		E	4X0.5=2	Analytical Skill
M		C		I		E																						
S		O		Y																								
M		S	T		K	E																						
M		V		E																								



ARMY PUBLIC SCHOOL GWALIOR

CLASS -I

ACADEMIC SESSION 2021-22

WORKSHEET (SELF –ASSESSMENT)





Subject: G.K

Assignment No. : 6

Allotment Date: 15 September 2021

S. NO.	QUESTIONS	MARKS	NATURE
1.	<p>Tick the correct answer:</p> <p>1)Who help in catching thieves and keeping your neighbourhood safe?</p> <p>a) A policeman b) A superman c) A doctor</p> <p>2) Who grow lovely flowers and take care of plants?</p> <p>a) A doctor b) A policeman c) A gardener</p>	2*1=2	Information
2.	<p>Fill in the blanks:</p> <p>1). The National Anthem of India is</p> <p>2) The national emblem of India consists oflions.</p> <p>3) is the national capital of India .</p> <p>4).----- is the symbol for the rupee ,the currency of India .</p>	4*1=4	Understanding

<p>3.</p>	<p>Match the following with their opposites</p> <p>A</p> <ol style="list-style-type: none">1 soft2 . day3. sweet4 .loud5. heavy6. hot <p>B</p> <ol style="list-style-type: none">sourquiethardnightcoldlight	<p>6*.5=3</p>	<p>Interdisciplinary</p>
<p>4.</p>	<p>Find one word in each box that does not fit in each group. Circle it .</p> <p><u>A</u></p> <ul style="list-style-type: none">• Tamil• Bihar• Punjabi• Marathi <p><u>B</u></p> <ul style="list-style-type: none">• morning• afternoon• dark• Night <p><u>C</u></p> <ul style="list-style-type: none">• eyes• nails• lips• ear	<p>3*1=3</p>	<p>Analytical Skill</p>

<p>5.</p>	<p>Draw a green circle around domestic animals and red circle around wild animals:</p> 	<p>2*1=2</p>	<p>HOT</p>
<p>6.</p>	<p>Look at these pictures of stories .Select the correct name of the story and write . (The Hare and Tortoise , The Blue Jackal)</p>  <p>.....</p>	<p>2*1=2</p>	<p>Critical Thinking and Problem Solving</p>



.....

7. Choose the correct word / words from the help box .
- (Please , sorry , thank you , excuse me)
1. When you are asking for something , you should say ----- .
 2. When someone gives you something , you should say ----- .
 3. When you drop something or break something by mistake ,you should say ----- .
 - 4.
 5. When you want someone ,s attention , you should say ----- .

2*1= 2

Evaluation

8. Match the names of the fruits with their pictures



Orange Pear apple banana

2*1=2

Communication Skills



ARMY PUBLIC SCHOOL GWALIOR
CLASS - I




ACADEMIC SESSION 2021-22
WORKSHEET (SELF –ASSESSMENT)


Subject: Work Education

Assignment No. : 6

Allotment Date: 15 September 2021

S.N	QUESTIONS	MARKS	NATURE
1.	_____ is the another name of string puppet? A. Marionette B. Bear C. Human D. Dog	1X1=1	Information
2.	_____ State is famous for Kathputli Dance of puppets? A. Madhya Pradesh B. Rajasthan C. Bihar	1X1=1	Understandi ng
3.	_____ is the colour of grapes? A. Red B. Green C. Blue D. Orange	1X1=1	Information

4.	In fruit basket the colour of apple is Red. A. True B. False	1X1=1	Creativity
5.	The colour of watermelon is black. A. True B. False	1X1=1	Creativity
6.	We use puppets for Painting. A. True B. False	1X1=1	Creativity
7.	Why do we use puppets? A. For teaching only B. for good visual representation to use while singing, dancing and C. Storytelling. D. Just for story telling	1X1=1	Creativity
8.	Count the fingers and tell the number showing in the picture?  A. 5 B. 7 C. 9	1X1=1	Creativity
9.	What is the other name of Hand Puppet? A. Marionette (String Puppet) B. Toy puppet C. Khilona	1X1=1	Creativity
10. Is a primary colour. A. Orange B. Red-Violet C. Yellow	1X1=1	Creativity



ARMY PUBLIC SCHOOL GWALIOR

CLASS - I

ACADEMIC SESSION 2021-22

WORKSHEET (SELF -ASSESSMENT)






Subject: Art Education

Assignment No. : 6

Allotment Date: 15 September 2021

S.N	QUESTIONS	MARKS	NATURE
1.	Warli painting is a _____. A. White paint on red background B. Simple shapes and lines C. People dancing	1X1=1	Information
2.	_____ are the basic Shapes A. Triangle, oval, square B. Square, rectangle, Circle C. Circle, oval, triangle D. Square, Triangle, Circle	1X1=1	Creativity
3.	The lighter the value, the lead in the pencil is _____. A. Hard B. Soft C. Dark D. Wide	1X1=1	Creativity
4.	Yellow, red and orange are warm colours. A. True D. False	1X1=1	Creativity
5.	White, green and cream are cool colours. A. True B. False	1X1=1	Creativity

6.	<p>Is this a warli art?</p>  <p>A. Yes B. No</p>	1X1=1	Creativity
7	<p>Which state is known for its Warli paintings?</p> <p>A. Gujarat B. Rajasthan C. Maharashtra</p>	1X1=1	Creativity
8	<p>What is pictured here?</p>  <p>A. A wedding scene B. Dancers and a tarpa instrument player. C. Dancers and a bagpipe player A. D. Warli villagers celebrating a religious holiday</p>	1X1=1	Creativity
9	<p>How many sides triangle have?</p> <p>A. 4 B. 5 C. 3 D. 2</p>	1X1=1	Creativity
10	<p>Which pencil is capable of making the darkest values?</p> <p>A. HB B. B C. 2B D. 4B</p>	1X1=1	Creativity



ARMY PUBLIC SCHOOL GWALIOR
CLASS - I



ACADEMIC SESSION 2021-22
WORKSHEET (SELF –ASSESSMENT)

Subject: Health and Physical Education

Assignment No. : 6

Allotment Date: 15 September 2021

S.No	Question	Nature	Marks
	Fill in the blanks		MM-10 3 x 1 = 3
1.	Dhanraj Pillay is a player of _____. a) Hockey b) Cricket c) Football d) Basketball	Informative	
2.	_____ player plays cricket. a) Cristiano ronaldo b) Geeta phogat c) Sachin tendulkar d) Saniya nehwal	Informative	
3.	_____ is the method of travelling on land. a) Walking b) Sprinting c) Jumping d) Running	Understanding	
	True and False		3 x 1 = 3
4.	Football is played with foot and head ()	Understanding	
5.	Shuttlecock is used in cricket ()	Analytic skill	
6.	Carrot is healthy food ()	Informative	
	MCQs		4 x 1 = 4
7.	Knees are used in which exercise?	Analytic skill	

	<ul style="list-style-type: none"> a) Cross Crawls b) Jumping Jacks c) Run in Place d) None of the above 		
8.	<p>In which game Palm is used?</p> <ul style="list-style-type: none"> a) Cross Crawls b) Jumping Jacks c) Run in Place d) None of the above 	Understanding	
9.	<p>Which food good for health</p> <ul style="list-style-type: none"> a) Carrot b) Broccoli c) Asparagus d) All of the above 	Informative	
10.	<p>What things food provide us?</p> <ul style="list-style-type: none"> a) Nutrients b) Energy for activity c) Growth d) None of the above 	informative	



ARMY PUBLIC SCHOOL GWALIOR
CLASS - I







ACADEMIC SESSION 2021-22
WORKSHEET (SELF -ASSESSMENT)

Subject: Discipline

Assignment No. : 6

Allotment Date: 15 September 2021

S. No	Question	Marks	Nature
1.	<p>Match The Following-</p>  <p>Watering Plants</p>  <p>Folding clothes</p>  <p>Throwing Garbage</p>  <p>Arranging bed</p>	02	Knowledge & Understanding

2.	<p>Write Y for Yes and N for No-</p> <ul style="list-style-type: none"> i. Do you take care of your things. ii. Do you do your HW on your own iii. The swallow helped prince iv. The swallow was kind. 	02	Thinking Skills
3.	<p>Tick the correct answer-</p> <p>a. Being Responsible is -</p> <ul style="list-style-type: none"> i. A good quality ii. Happiness <p>b. Story ' The Happy Prince' is about-</p> <ul style="list-style-type: none"> i. Kindness ii. Happiness 	02	Thinking Skills
4.	<p>Fill in the blanks-</p> <ul style="list-style-type: none"> i. The _____ Prince.(Happy, Sad) ii. His eyes were made of _____(beautiful, ugly) blue sapphire _____. iii. His statue was covered with beautiful _____ (gold/silver)leaves. iv. There was a _____ (poor/rich) writer . 	04	



ARMY PUBLIC SCHOOL GWALIOR

CLASS - I



ACADEMIC SESSION 2021-22

WORKSHEET (SELF –ASSESSMENT)


Subject: Music

Assignment No. : 6

Allotment Date: 15 September 2021

S. No	Answer the following questions:	Nature	Marks 10
A.	Fill in the blanks:		
1.	Traditional Indian Dances have _____ type of music. a. Classical b. Jazz c. Western	Informative	1
2.	There are types _____ of Indian Classical Dances. a. 7 b. 8 c. 9	Informative	1
3.	There are _____ counting in teen taal. a. 16 b. 14 c. 13	Informative	1
B.	True/ False:		
4.	The tabla has four parts. a. True b. False	Informative	1
5.	Clap is used to indicate the rhythm. a. True b. False	Informative	1
6.	Indian classical dancer show our Indian Clothing. a. True b. False	Informative	1
C.	Multiple Choice Question:		
7.	Who is the goddess of knowledge? a. Saraswati	Informative	1

	b. Lakshmi c. Durga		
8.	Solo dance has how many members? a. 1 b. 3 c. 5	Perceptual	1
9.	How many times dugun is done in teen taal? a. 2 b. 3 c. 4	Perceptual	1
10.	We play tabla with? a. Hands b. Stick c. None of the above	Informative	1



ARMY PUBLIC SCHOOL GWALIOR

CLASS -I



ACADEMIC SESSION 2021-22

WORKSHEET (SELF –ASSESSMENT)

Subject: Library

Assignment No. : 6

Allotment Date: 15 September 2021

S.N O	QUESTIONS	MARK S	NATURE
	Answer the following questions on the basis of the story "Who Has Made Us ?" given in the notes.	Max. Marks- 10	
1	Who gives us flowers and fruits?	01	Comprehension
2	On which planet do you live ?	01	Analysis
3	At which time stars twinkle in the sky ?	01	Analysis
4	Who is the maker of all plants and animals?	01	Understanding
5	The sun rises in the morning/ evening every day ?	01	Analysis
6	Which is your favourite pet Animal ?	01	Understanding
7	Make a picture of your favourite fruits ?	01	Understanding
8	Name any two animals those are found in water ?	01	Analysis
9	Name any two of your favourite vegetables ?	01	Analysis

10	Name any two of your favourite birds ?	01	Analysis
----	---	----	----------