



**ARMY PUBLIC SCHOOL GWALIOR**  
**CLASS -VI**



**ACADEMIC SESSION 2021-22**  
**WORKSHEET (SELF –ASSESSMENT)**

**Subject: English**

**Assignment No. : 5**

**Allotment Date: 15 August 2021**

<b>S. NO.</b>	<b>QUESTIONS</b>	<b>MARKS</b>	<b>NATURE</b>
<b>1</b>	Write a short paragraph on “ <b>Education is the key to Success.</b> ” in about 100 words.	<b>4m</b>	Information
<b>2</b>	<b>Read the following extract and answer the questions given below:</b> "And do they pick their noses The same as you and me? Do they live with other people Have they mums and dads? And were they ever children And were they ever bad?" <b>Questions:</b> 1. What was difficult to believe for teachers? 2. Why did the poet mention 'pick their noses'? 3. Find the antonym of the word 'drop' from the extract.	<b>3m</b>	Understanding
<b>3</b>	Do you think ‘ <b>Nature is a perfect teacher for a child.</b> ’? Answer in about 100 words.	<b>4m</b>	HOT
<b>4</b>	<b>Grammar</b> <b>Fill in the blanks with correct article (a, an, the)</b>  1. I got my dream job on _____ 10th of May. 2. She eats _____ apple every day. 3. I want to ask _____ question now.	<b>3m</b>	Interdisciplinary
<b>5</b>	<b>Read the following sentences and state whether the verbs are transitive or intransitive.</b>  1. You have never helped me. 2. My mother works at a bank. 3. I heard them talk.	<b>3m</b>	Analytical Skill
<b>6</b>	What should be the aim of education in schools? Answer in 100 words.	<b>4m</b>	Critical Thinking and Problem Solving

<b>7</b>	<b>Answer the following questions in about 20-30 words.</b> 1. What did the author see in the playground? 2. Why does the poet wonder if teachers also do things that other people do? 3. What trap was laid by the jealous courtiers?	<b>3x2=6m</b>	Evaluation
<b>8</b>	As a Head Boy/ Girl draft a notice for your school notice board about an inter-house poetry recitation competition to be held in school. You are Parag/ Priyanka. ( Write in 100-120 words)	<b>3m</b>	Communication Skills



ARMY PUBLIC SCHOOL GWALIOR

CLASS -VI

ACADEMIC SESSION 2021-22

WORKSHEET (SELF –ASSESSMENT)



Subject: Hindi

Assignment No. : 5

Allotment Date: 15 August 2021

क्रमसंख्या	प्रश्न	अंक	प्रकृति
1	कहानी के अनुसार मंगल ग्रह पर कभी आम जन-जीवन था। वह सब नष्ट कैसे हो गया? इसे लिखो-	5	INFORMATIVE
2	‘सागर ने रस्ता छोड़ा, परबत ने सीस झुकाया’-साहिर ने ऐसा क्यों कहा है? लिखो।	1x4=4	UNDERSTANDING
3	अनेक शब्दों के लिए एक शब्द लिखो।  (i) जिसका जन्म पहले हुआ हो _____  (ii) जिसका मूल्य न हो _____  (iii) जो अर्थशास्त्र का विद्वान् हो _____  (iv) कम अक्लवाला _____  (v) जो परीक्षा में पास हो _____	5	HOT

4	<p>प्रश्न - निम्नलिखित शब्दों के समरूपी भिन्नार्थक रूप लिखे -</p> <p>1. अनल , अनिल _____ - _____</p> <p>2. अलि , अली _____ _____</p> <p>3. अंबा अंबु _____ _____</p> <p>4. परिणाम , परिमाण _____ _____</p> <p>5. अपकार , उपकार _____ _____</p>	5	INTERDISCIPLINARY
5.	<p>कहानी में अंतरिक्ष यान को किसने भेजा था और क्यों?</p>	5	<p>CRITICAL</p> <p>THINKING AND</p> <p>PROBLEM SOLVING</p>
6	<p>निम्नलिखित प्रश्नों के उत्तर दीजिए -</p> <p>1. गीत में सीने और बाँहों को फ़ौलादी क्यों कहा गया है?</p>	3x2=6	EVALUATION

	<p>2. छोटू का परिवार कहाँ रहता था?</p> <p>3. छोटू को सुरंग में जाने की इजाज़त क्यों नहीं थी? पाठ के आधार पर लिखो।</p>		
--	---	--	--



**ARMY PUBLIC SCHOOL GWALIOR**

**CLASS -VI**

**ACADEMIC SESSION 2021-22**

**WORKSHEET (SELF –ASSESSMENT)**



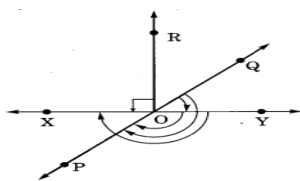
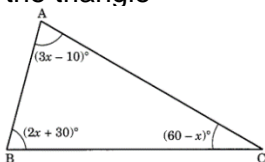
**Subject: Mathematics**

**Assignment No. : 5**

**Allotment Date: 15 August 2021**

S. NO.	QUESTIONS	MARKS	NATURE
1	How many line segments are used in making a triangle?	1	Informative
2	What is complete angle?	1	Informative
3	What is the measure of straight angle?	1	Understanding
4	Find the number of right angle turned through by the hour hand of a clock when it goes from 3 to 6.	1	Application
5	How many faces a tetrahedron have?	1	Understanding
6	What part of a revolution have you turned through, if you stand facing north and turn clockwise to face east?	1	Reasoning
7	What part of a revolution have you turned through if you stand facing north and turn clockwise to face west?	1	Analytical skills
8	A quadrilateral having a pair of unequal opposite sides is called_____	1	Informative
9	What fraction of a clockwise revolution does the hour hand of a clock turn through, when it goes from 12 to 3?	1	Informative
10	What fraction of a clockwise revolution does the hour hand of a clock turn through, when it goes from 12 to 3?	1	Understanding

11	Draw the rough sketch of the following: (a) Acute angle (b) Obtuse angle (c) Reflex angle	2	Problem solving
12	What are the degree measures of the following angles? (a) Right angle (b) A complete angle (c) Straight angle.	2	Evaluation
13	State True or False (a) The opposite sides of a trapezium are parallel. (b) All the sides of a parallelogram are of equal in length. (c) The diagonals of a square are perpendicular to each other. (d) All the angles of a rectangle are not equal.	2	Evaluation
14	Draw a hexagon and write its sides and diagonals?	2	Evaluation
15	If B is the mid point of AC and C is the point of BD where A, B, C, D lie on a straight line, say why AB = CD?	2	Understanding
16	All equilateral triangle are isosceles, but all isosceles triangle are not equilateral. Justify the statement.	2	Problem solving
17	Draw a rough sketch of a regular octagon. Draw a rectangle by joining exactly four of the vertices of the octagon.	2	Problem solving
18	What fraction of a clockwise revolution does the hour hand of a clock turn through, when it goes from 12 to 3 in anti-clock wise direction?	3	Logical thinking
19	Find the value of x from the given figure and hence find the measure of each angle of the triangle	3	Problem solving
20	?In the given figure, name the following angles as acute, obtuse, right, straight or reflex.	5	Application



<b>21</b>	Complete each of the following, so as to make a true statement: (a) A ..... is a rectangle with a pair of adjacent sides equal. (b) A parallelogram with a pair of adjacent sides equal is called a ..... . (c) A quadrilateral having exactly one pair of parallel sides is called a ..... . (d) A quadrilateral having both pairs of opposite sides parallel, is called a ..... . (e) A parallelogram whose each angle is a right angle is called a ..... .	<b>5</b>	HOTS





**ARMY PUBLIC SCHOOL GWALIOR**  
**CLASS -VI**



**ACADEMIC SESSION 2021-22**  
**WORKSHEET (SELF –ASSESSMENT)**

**Subject: Science**

**Assignment No. : 5**

**Allotment Date: 15 August 2021**

S. NO.	QUESTIONS	MARKS	NATURE
Q1	Answer the following questions. i. Name any two natural fibres. ii. Name any one animal fibre obtained, without harm to the animal?	1x2=2	Information
Q2	i. What is spinning? ii. What do you understand by the word 'fibre'?	2X2=4	Understanding
Q3	i. Name the fibres obtained from the leaves of the plant and give any one use of it. ii. Coir fibres are obtained from which plant and write any two uses of it?	2x2=4	HOT
Q4	i. Gunny bags and ropes are generally produced near coastal region. Why? ii. What is the use of transparent materials in grocery shop? iii. Write any two differences between weaving and knitting.	2x3=6	Interdisciplinary
Q5	i. How will you separate husk or dirt particles from a given sample of pulses before cooking?	3x3=9	Analytical Skill

	ii. Why did Gandhi ji use to operate charkha for spinning?		Critical Thinking and Problem Solving
	iii. Name any three objects, which could be made from more than one material.		Evaluation
Q 6.	Explain the process of making fabric from fibres.	5x1=5	Communication Skills



**ARMY PUBLIC SCHOOL GWALIOR**  
**CLASS -VI**



**ACADEMIC SESSION 2021-22**  
**WORKSHEET (SELF –ASSESSMENT)**

**Subject: Social Science**

**Assignment No. : 5**

**Allotment Date: 15 August 2021**

S. NO.	QUESTIONS	MARKS	NATURE
1.	Fill in the blanks :  a) Brown colour is used to show .....on the map. b) The site of Harappa is located in ..... c) Agni is the God of ..... d) The minimum voting age in India is .....years.	4	Understanding, Information
2.	Write True / False:  a) The rich people makes law in the country. .... b) Dholavira is divided into two parts. .... c) The hymns were composed by rajas. .... d) The plan is a drawing of a small area on a large scale. ....	4	Information, Problem solving
3.	Tick ( v ) the correct answer:  a) For what purpose magnetic compass is used? (i) for measuring distance (ii) for showing symbols (iii) for finding directions (iv) for all of these  b) What do government do for their people? (i) builds roads and school (ii) supply the electricity (iii) take action on social issues (iv) All of these	2	Information ,critical thinking, Analytical skills

4.	How old are the Harappa cities believed to be ?	<b>2</b>	Interdisciplinary
5.	What are the limitations of a globe?	<b>2</b>	Information Problem solving
6.	At which level does a government work??	<b>2</b>	Understanding
7.	Why are some rules to be made?	<b>2</b>	HOT
8.	Who performed various rituals ?	<b>2</b>	Understanding,
9.	What were the items generally found in burials?	<b>2</b>	information
10.	What was the citadel?	<b>2</b>	Interdisciplinary
11.	How do symbols helps in reading maps ?	<b>2</b>	Analytical skills
12.	Name the book written by Charaka.	<b>2</b>	Information
13.	Which type of government is chosen by the people?	<b>2</b>	interdisciplinary



ARMY PUBLIC SCHOOL GWALIOR

CLASS -VI

ACADEMIC SESSION 2021-22

WORKSHEET (SELF -ASSESSMENT)



Subject: Sanskrit


Assignment No. : 5

Allotment Date: 15 August 2021

S. NO.	QUESTIONS	Marks	NATURE
1	अर्थान् लिखत- अतीव, दीर्घतमः, प्रतीकारम्, तुष्यन्ति, पिकः, मनीषिणः।	1x6=6	Information
2	उचितकथनानां समक्षम् 'आम्' अनुचितकथनानां समक्षं- 'न' इति लिखत- (क) काकः कृष्णः न भवति। (ख) अस्माभिः प्रियं वक्तव्यम्। (ग) वसन्तसमये पिककाकयोः भेदः भवति। (घ) वैनतेयः पशुः अस्ति। (ङ) वचने दरिद्रता कर्तव्या।	1x5=5	Analytical Skill
3	अधोलिखितानां प्रश्नानाम् उत्तरं लिखत- (क) शृगालस्य मित्रं कः आसीत्? (ख) स्थालीतः कः भोजनं न अखादत्? (ग) बकः शृगालाय भोजने किम् अयच्छत्?	4	Understanding

	(घ) शृगालस्य स्वभावः कीदृशः भवति?							
4	<p>मञ्जूषातः उचितम् अव्ययपदं चित्वा रिक्तस्थानानि पूरयत-</p> <table border="1" style="margin-left: auto; margin-right: auto;"> <tr> <td>अपि</td> <td>प्रातः</td> <td>कदा</td> <td>सर्वदा</td> <td>अधुना</td> </tr> </table> <p>(क) ..... भ्रमणं स्वास्थ्याय भवति।</p> <p>(ख) ..... सत्यं वद।</p> <p>(ग) त्वं ..... मातुलगृहं गमिष्यसि?</p> <p>(घ) दिनेशः विद्यालयं गच्छति, अहम् ..... तेन सह गच्छामि।</p> <p>(ङ) ..... विज्ञानस्य युगः अस्ति।</p>	अपि	प्रातः	कदा	सर्वदा	अधुना	1x5=5	Thinking skill
अपि	प्रातः	कदा	सर्वदा	अधुना				
5	<p>तत्समशब्दान् लिखत-</p> <p>सियार      _____</p> <p>कौआ      _____</p> <p>मक्खी      _____</p> <p>बन्दर      _____</p> <p>बगुला      _____</p>	1x5=5	Critical Thinking					

6	मञ्जूषातः समानार्थकानि पदानि चित्वा लिखत-	1x5=5	Analytical Skill
	ग्रन्थे ,कोकिलः , गरुडः, परिश्रमेण , कथने		
	क) वचने ख) पिकः ग) वैनतेयः घ) पुस्तके ङ) उद्यमेन		



# ARMY PUBLIC SCHOOL GWALIOR

## CLASS -VI

### ACADEMIC SESSION 2021-22

### WORKSHEET (SELF -ASSESSMENT)




Subject: Computer

Assignment No. : 5

Allotment Date: 15 August 2021

S. No.	Questions	Marks	Nature
1	Tick The Correct Answer	5x 1/2=2.5	Information
	A) BASIC language was developed in the year. a) 1963    b) 1968    c) 1975		
	B) A data value that does not change during the execution of a program a) Variables    b) Constants    c) Characters		
	C) The statement used to display the output on the screen a) INPUT    b) LET    c) PRINT		
	D) In PRINT command, the message is closed in a) Double quotes    b) Semicolons    c) Single quotes		
E) Running a program to get the output is called a) Execution    b) Run    c) Debug			
2	Fill in the blanks a) BASIC was developed by _____ and _____ in 1963. b) QBASIC stands for _____. c) _____ is a non-executable statement. d) QBASIC was released by _____ in 1991. e) _____ stands for Remarks.	5 x 1/2=2.5	Understanding
3	Answer the following question i) Name the parts of QBASIC window. ii) What is the use of CLS command in BASIC?	2 x 2.5 =5	HOT





# ARMY PUBLIC SCHOOL GWALIOR

## CLASS -VI

### ACADEMIC SESSION 2021-22

#### WORKSHEET (SELF –ASSESSMENT)



Subject: G.K

Assignment No. : 5

Allotment Date: 15 August 2021

S. NO.	QUESTIONS	MARKS	NATURE
1.	Fill in the blanks:  (a) Dracula Benedictii is found in ..... (b) .....is the only home to Asiatic lions . (c) .....is the first cloned pashmina goat in the world.	3	Understanding
2.	State True or False:  (a) The average life span of tortoise is 150 years. ( ) (b) Dudhwa National Park is famous for one horned rhinoceros. ( ) (c) Bobcat is hunted for its fur.. ( )	3	Information
3.	Tick the correct answer:  (a) Which is the national animal of both India and Bangladesh ? (i) Lion (ii) Leopard (iii) The Bengal tiger (b) Name the flower known for its white petals that turn transparent with rain and revert to white again when dry. (i) Darth Vader flower (ii) Black Bat flower (iii) Skeleton flower	2	Information
4.	Why is it important to save water?	1	Critical thinking
5.	What do you mean by 'Green Good Deeds'?	1	Interdisciplinary



ARMY PUBLIC SCHOOL GWALIOR

CLASS -VI

ACADEMIC SESSION 2021-22


WORKSHEET (SELF –ASSESSMENT)



Subject: Art Education


Assignment No. : 5

Allotment Date: 15 August 2021

S.N	QUESTIONS	MARKS	NATURE
1.	<p>What is pictured here?</p> 	1X1=1	Information
2.	<p>The ritual dance of the “Warli” tribe, danced in rows or circles, holding hands at the waist-is called</p> <p>A. Dhimsa B. Tarpa C. Dhemse D. Chhau</p>	2X1=2	Understanding

3.	<p>How can you identify a Warli painting?</p> <ul style="list-style-type: none"> <li>A. White paint on red background</li> <li>B. Simple shapes and lines</li> <li>C. People dancing</li> <li>D. Colourful borders</li> </ul>	1X1=1	
4.	<p>Which geometric shapes we don't used in Warli Art?</p> <ul style="list-style-type: none"> <li>A. Circles</li> <li>B. Triangles</li> <li>C. Squares</li> <li>D. Rhombus</li> </ul>	1X1=1	Creativity
5.	<p>How is the white paint created in Warli Art?</p> <ul style="list-style-type: none"> <li>A. Grounding rice into powder</li> <li>B. Mixing flour and salt</li> <li>C. Using acrylic or tempera</li> <li>D. Using chalk and water</li> </ul>	1X1=1	Creativity

6.	<p>What is Warli art?</p> <p>A. Art from war</p> <p>B. Just a simple art</p> <p>C. None</p> <p>D. Style of tribal art mostly created by the tribal people from the North Sahyadri Range in India.</p>	1X1=1	Creativity
7.	<p>Warli painting is indigenous to which State?</p> <p>A. Gujarat</p> <p>B. Rajasthan</p> <p>C. Odisha</p> <p>D. Maharashtra</p>	1X1=1	Creativity
8.	<p>Warli is the name for what?</p> <p>A. A plant found in India</p> <p>B. A large tribe in India</p> <p>C. A lake in Western India</p> <p>D. A new hairstyle</p>	1X1=1	Creativity

9.	<p>Where in India are the Warli people located?</p> <ul style="list-style-type: none"><li>A. East</li><li>B. North</li><li>C. South</li><li>D. West</li></ul>	1X1=1	Creativity
10.	<p>Is this a warli art ?</p>  <ul style="list-style-type: none"><li>A. Yes</li><li>B. No</li></ul>	1X1=1	Creativity



**ARMY PUBLIC SCHOOL GWALIOR**

**CLASS -VI**

**ACADEMIC SESSION 2021-22**

**WORKSHEET (SELF –ASSESSMENT)**



**Subject: Work Education**

**Assignment No. : 5**

**Allotment Date: 15 August 2021**

<b>S.N</b>	<b>QUESTIONS</b>	<b>MARKS</b>	<b>NATURE</b>
1.	Blue pottery art is-  a) Ceramic craft  b) Needle craft  c) Textile craft  d) None	2X1=2	Creativity
2.	Origami is-  a) Paper craft  b) Textile craft  c) Flower craft  d) None	2X1=2	Creativity

3.	<p><b>What is the Meaning of Paper Mache?</b></p> <p>a) chewed or crushed paper</p> <p>b) Coloured paper</p> <p>c) Sheets</p> <p>d) Stencils</p>	2X1=2	Creativity
4.	<p>Tie and dye is-</p> <p>a) Textile Craft</p> <p>b) Fibre craft</p> <p>c) Needle craft</p> <p>d) None</p>	1X1=1	Creativity
5.	<p>'Wooden rose wood scoop' is a craft under which category-</p> <p>a) House ware</p> <p>b) Leather work</p> <p>c) Fashion</p> <p>d) None</p>	1X1=1	Creativity

6.	Fashion is the self expression of- a)Clothing b) Features c) Hairstyle d) All	1X1=1	Creativity
7.	A trend or look that is spread across a population at a specific time and place is- a) Fashion b) Fashion trend c) Adorning d) None	1X1=1	Creativity
8.	Clay modelling is a craft which comes under- a) House ware b) Fashion c) Ceramics d) All	1X1=1	Creativity



9.	The example of ceramic is-  a) Earthenware  b) Bricks  c) Porcelain  d) All	1X1=1	Creativity
10.	Studio pottery involves-  a) Tableware  b) Cookware  c) Sculpture  d) All	1X1=1	Creativity



**ARMY PUBLIC SCHOOL GWALIOR**

**CLASS -VI**

**ACADEMIC SESSION 2021-22**

**WORKSHEET (SELF –ASSESSMENT)**



**Subject: Library**

**Assignment No. : 5**

**Allotment Date: 15 August 2021**

<b>S.NO</b>	<b>QUESTIONS</b>	<b>MARKS</b>	<b>NATURE</b>
1	Who is the father of library science ?	01	Understanding
2	Where was S.R Ranganathan born ?	01	comprehension
3	Who was the teacher of S. R Ranganathan?	01	comprehension
4	What is the full name of Ranganathan ?	01	comprehension
5	How many books and Articles written by Dr.S..R. Ranganathan ?	01	Comprehension
6	How many years experience of librarian ?	01	Analysis
7	Where were librarians first appointed ?	01	Analysis
8	What was the name of Ranganathan father ?	01	Comprehension
9	What was the name of Ranganathan mother ?	01	Comprehension
10	Which day is celebrated as national library day ?	01	Comprehension



**ARMY PUBLIC SCHOOL GWALIOR**

**CLASS -VI**

**ACADEMIC SESSION 2021-22**

**WORKSHEET (SELF –ASSESSMENT)**



**Subject: Health and Physical Education**

**Assignment No. : 5**

**Allotment Date: 15 August 2021**

<b>S.NO</b>	<b>MULTIPAL CHOICE QUESTIONS (1 to 4)</b>	<b>NATURE</b>	<b>MARKS 1X10</b>
1.	<p>_____ is something that has the potential to cause harm.</p> <p>A. Hazard</p> <p>B. Food borne</p> <p>C. Water borne</p> <p>D. Damage</p>	Informatory	1
2	<p>_____ arises from substances that do not belong in food, but can contaminate it through carelessness or malicious intent or simply by contact with the food.</p> <p>A. Biological illness</p> <p>B. Chemical illness</p> <p>C. Physical food borne illness</p> <p>D. Physiological illness</p>	Analytical	1

3	<p>_____ affects will only effect stomach and intestines.</p> <p>A. Biological causes B. Chemical causes C. Foreign objects D. Psychological causes</p>	Informatory	1
4	<p>A long term symptom resulting from some E. coli O157:H7 infections cause kidney damage called _____</p> <p>A. hemolytic-uremic syndrome B. Micro deletion syndrome C. 4d syndrome D. Aase syndrome</p>	Understanding	1
5	<p><b>Fill in the blanks ( question 5 to 7 )</b></p> <p>_____ results from foreign objects in food like wood splinters, glass and metal fragments, pebbles or bone fragments. [ physical food borne illness, chemical illness]</p>	Informatory	1
6	<p>_____ types of hazards are there. [3, 6]</p>	Understanding	1
7	<p>Nausea, vomiting and cramps are symptoms of _____ cause of illness . [chemical, biological]</p>	Understanding	1
8	<p><b>True and False ( question 8 to 10)</b></p> <p>Testing of water which you drink is not important.</p>	Informatory	1
9	<p>Foodborne disease has the potential to be caused by all three of these categories of hazards.</p>	Informatory	1

10	Full form of PSP is paralytic selfish poisoning.	Critical thinking	1
----	--	-------------------	---



**ARMY PUBLIC SCHOOL GWALIOR**  
**CLASS -VI**  
**ACADEMIC SESSION 2021-22**  
**WORKSHEET (SELF –ASSESSMENT)**



**Subject: Music**

**Assignment No. : 5**

**Allotment Date: 15 August 2021**

S. NO.	प्रश्न	अंक	प्रकृति
1.	तानसेन संगीत समारोह कब मनाया जाता है? अ) दिसंबर के महीने में मध्य प्रदेश के ग्वालियर जिले में ब) फरवरी के महीने में असम जिले में स) अप्रैल के महीने में ग्वालियर जिले में	2 marks	बोधोत्प्रेरक
2.	तानसेन अकबर के दरबार में कौन थे? अ) अनमोल नवरत्नों में एक ब) अनमोल रत्न में एक स) कुछ नहीं	2 marks	
3.	तानसेन कौन थे? अ) भारतीय संगीतकार गायक ब) भारतीय संगीतकार लेखक स) भारतीय संगीतकार रचनाकार	2 marks	सूचनापरक
4.	तानसेन के गुरु कौन थे? अ) सूफी संत मोहम्मद गौस ब) बहादुर शाह जफर स) अकबर	2 marks	
5.	संगीत सम्राट तानसेन कौन सा राग गाते थे जिससे बरसात होने	2 marks	अंतःविषयात्मक

	<p><b>लगती थी?</b></p> <p>अ) मेघ मल्हार राग  ब) राग बसंत  स) भैरवी राग</p>		
6.	<p><b>तानसेन संगीतकार के अलावा और क्या थे?</b></p> <p>अ) एक कवि  ब) एक लेखक  स) शायर</p>	2 marks	
7.	<p><b>दीपक राग किसके द्वारा गाया गया?</b></p> <p>अ) तानसेन  ब) रविदास  स) विक्रम माहौर</p>	2 marks	गहनसोचऔर समस्यासमाधान
8.	<p><b>तानसेन कौन सा वाद्य यंत्र बजाते थे?</b></p> <p>अ) तानपुरा वाद्य यंत्र  ब) सारंगी वाद्य यंत्र  स) संतूर वाद्य यंत्र</p>	2 marks	
9.	<p><b>गायक धुपद शैली का आरंभ किसने किया?</b></p> <p>अ) ग्वालियर के राजा मानसिंह तोमर ने इसकी रचना की थी  ब) संगीत सम्राट तानसेन के द्वारा  स) शिवाजी के द्वारा</p>	2 marks	उच्चस्तरीय चिंतन
10.	<p><b>मेघ मल्हार राग का क्या मतलब है?</b></p> <p>अ) बारिश का होना  ब) हवा का चलना  स) नदी का बहना</p>	2 marks	



**ARMY PUBLIC SCHOOL GWALIOR**  
**CLASS -VI**  
**ACADEMIC SESSION 2021-22**  
**WORKSHEET (SELF –ASSESSMENT)**



**Subject: Discipline**

**Assignment No. : 5**

**Allotment Date: 15 August 2021**

S.No	Questions	Marks	Nature
1.	<p><b>Fill in the blanks-</b></p> <p>i. Being a teenager can be _____ at times.</p> <p>ii. You might feel like you have the _____ of the world is on your shoulders.</p> <p>iii. Instead of seeing these as stressors, consider all the opportunities you have _____.</p> <p>iv. Keep your room clean and organized.</p> <p>v. Take care of _____ and clean up yourself.</p> <p>vi. Carly never let her friends _____.</p> <p>vii. The three boys got the project done they were _____.</p> <p>viii. Carly was very _____.</p>	08	Knowledge & Understanding
2.	<p><b>How do you show your responsibility.</b></p> <p>i. _____</p> <p>ii. _____</p> <p>iii. _____</p> <p>iv. _____</p>	02	Thinking and Writing Skills