



ARMY PUBLIC SCHOOL GWALIOR
CLASS -IV



ACADEMIC SESSION 2021-22
WORKSHEET (SELF –ASSESSMENT)


Subject: English

Assignment No. : 5

Allotment Date: 15 August 2021

S. NO.	QUESTIONS	MARKS	NATURE
1	What happened to the 'Antelope'? _____ -----	2	Information
2	What are things which are required to bring a smile on your grandparents' face ? ----- -----	2	Understanding
3	Name any one island that you have read about and write four and five lines about it.	2	Interdisciplinary

4	Write any four adjectives from the story along with the nouns they describe.	2	Analytical skill
5	How do grandparents play an important role in grooming their grandchildren's personality?	2	Critical Thinking and Problem Solving
6	What had happened to rest of the five sailors who were there in the lifeboat?	3	HOT
7	Answer the following questions briefly. 1. Why did Dr Gulliver sign up as a ship's doctor? Ans. 2. How do our grandparents wipe our tears? Ans.	4	Evaluation
8	Write a paragraph on 'Grandparents are a gift sent by God'	3	Communication Skills



ARMY PUBLIC SCHOOL GWALIOR
CLASS -IV



ACADEMIC SESSION 2021-22
WORKSHEET (SELF –ASSESSMENT)


Subject: Hindi

Assignment No. : 5

Allotment Date: 15 August 2021

क्र०	प्रश्न	अंक	प्रश्नकाप्रकार
1.	<p>प्र०1. निम्नलिखित प्रश्नों के सही उत्तर के सामने सही का निशान लगाओ :</p> <p>1. महक कहाँ रहती है ?</p> <p>क. अल्मोड़ा <input type="checkbox"/></p> <p>ख. कानपुर <input type="checkbox"/></p> <p>2. हमें बाज़ार से सामान लाने के लिए किन थैलों का प्रयोग करना चाहिए ?</p> <p>क. प्लास्टिक के <input type="checkbox"/></p> <p>ख. कपड़े या कागज़ के <input type="checkbox"/></p> <p>3. प्लास्टिक को जलाने पर क्या होता है ?</p> <p>क. हानिकारक गैसों निकलती है । <input type="checkbox"/></p> <p>ख. स्वास्थ्यवर्धक गैसों निकलती है । <input type="checkbox"/></p>	3	बोधार्थक
2.	<p>प्र०2. निम्न शब्दों के अर्थ लिखो :</p> <p>1. प्रयोग - _____</p> <p>2. पर्यावरण - _____</p> <p>3. अत्यधिक - _____</p>	3	ज्ञानार्थक

3.	<p>प्र०3. सही शब्द चुनकर वाक्य पूरे करो -</p> <div style="border: 1px solid black; padding: 5px; text-align: center; margin: 10px auto; width: fit-content;"> समस्याएँ स्थिति उपहार सुरक्षित </div> <p>(क.) पर्यावरण को _____ रखने के लिए अधिक से अधिक पेड़ लगाने चाहिए ।</p> <p>(ख.) जलते प्लास्टिक से निकलने वाली गैसों स्वास्थ्य की _____ पैदा करती हैं ।</p> <p>(ग.) हमें एक - दूसरे को _____ में पौधे देने चाहिए ।</p> <p>(घ.) गलियों में नालियाँ रुकने से बाढ़ जैसी _____ आ जाती है ।</p>	4	रचनात्मक																
4.	<p>प्र०4. नीचे लिखे शब्द के सही विपरीतार्थक शब्द पर गोला <input type="radio"/> लगाओ -</p> <table style="width: 100%; border-collapse: collapse;"> <tr> <td style="width: 25%;">1. कठिन -</td> <td style="width: 25%; text-align: center;"><input type="radio"/></td> <td style="width: 25%; text-align: center;">मुश्किल</td> <td style="width: 25%; text-align: center;"><input type="radio"/> सरल</td> </tr> <tr> <td>2. जन्म -</td> <td style="text-align: center;">मरना</td> <td style="text-align: center;"><input type="radio"/></td> <td style="text-align: center;">मौत</td> </tr> <tr> <td>3. हानि -</td> <td style="text-align: center;">फ़ायदा</td> <td style="text-align: center;">मुनाफ़ा</td> <td style="text-align: center;"><input type="radio"/></td> </tr> <tr> <td>4. बदबू -</td> <td style="text-align: center;"><input type="radio"/></td> <td style="text-align: center;">सुगंध</td> <td style="text-align: center;">महक</td> </tr> </table>	1. कठिन -	<input type="radio"/>	मुश्किल	<input type="radio"/> सरल	2. जन्म -	मरना	<input type="radio"/>	मौत	3. हानि -	फ़ायदा	मुनाफ़ा	<input type="radio"/>	4. बदबू -	<input type="radio"/>	सुगंध	महक	4	सूचनात्मक
1. कठिन -	<input type="radio"/>	मुश्किल	<input type="radio"/> सरल																
2. जन्म -	मरना	<input type="radio"/>	मौत																
3. हानि -	फ़ायदा	मुनाफ़ा	<input type="radio"/>																
4. बदबू -	<input type="radio"/>	सुगंध	महक																
5.	<p>प्र०5. निम्नलिखित प्रश्नों के उत्तर लिखो -</p> <p>प्र०1. प्लास्टिक पर्यावरण को कैसे नुकसान पहुँचाता है ?</p> <p>उ०1. _____</p> <p>_____</p> <p>प्र०2. हमें कागज या कपड़े के थैलों का प्रयोग क्यों करना चाहिए ?</p> <p>उ०2. _____</p> <p>_____</p> <p>प्र०3 प्लास्टिक की थैलियों के अत्यधिक प्रयोग से क्या होता है ?</p> <p>उ०3. _____</p> <p>_____</p>	3	विश्लेषणात्मक																
6.	<p>प्र०6. सही जोड़े बनाकर लिखो -</p> <div style="border: 1px solid black; padding: 10px; text-align: center; margin: 10px auto; width: fit-content;"> <table style="width: 100%; border-collapse: collapse;"> <tr> <td style="width: 33%;">गन्दा</td> <td style="width: 33%;">नालियाँ</td> <td style="width: 33%;">बीमारी</td> </tr> <tr> <td style="width: 33%;">पानी</td> <td style="width: 33%;">खुली</td> <td style="width: 33%;"></td> </tr> </table> </div> <p>1. _____</p> <p>2. _____</p> <p>3. _____</p>	गन्दा	नालियाँ	बीमारी	पानी	खुली		3	उच्चस्तरीय चिंतन										
गन्दा	नालियाँ	बीमारी																	
पानी	खुली																		



ARMY PUBLIC SCHOOL GWALIOR

CLASS -IV

ACADEMIC SESSION 2021-22

WORKSHEET (SELF -ASSESSMENT)



Subject: Mathematics

Assignment No. : 5

Allotment Date: 15 August 2021

S. NO.	QUESTIONS	MARKS	NATURE
1	Fill in the blanks: (i) Dividend = Divisor x _____ + Remainder (ii) Numbers which are divisible by 2 are called _____ Numbers.	2x1=2	Understanding
2	Write 'True' or 'False': (i) Every multiplication fact with two distinct numbers gives us two distinct division facts () (ii) 9 is a factor of 1089. ()	2x1=2	HOTS
3	Tick the correct answer from the given options: (i) $18906 \div 8 =$ _____ (a) 2363,2 (b) 2364,2 (c) 2361,2 (ii) $2852 \div 23 =$ _____ (a) 120,0 (b) 123,0 (c) 124,0 (iii) $7604 \div 17 =$ _____	5x1=5	Critical thinking

	<p>(a) 447,5 (b) 448,5 (c) 449,5</p> <p>(i) $75319 \div 3 = \underline{\hspace{2cm}}$</p> <p>(a) 24106,1 (b) 26106,1 (c) 25106,1</p> <p>(ii) $8709 \div 16 = \underline{\hspace{2cm}}$</p> <p>(a) 543,5 (b) 544,5 (c) 545,5</p>		
4	<p>Solve the following questions: -</p> <p>Solve the following:</p> <p>(i) Write two numbers which are prime as well as odd,</p> <p>(ii) Find the seventh multiple of 23.</p> <p>(iii) Write all the prime numbers less than 30.</p> <p>(iv) Write first five multiples of 17.</p> <p>(v) List all factors of 72.</p>	5x1=5	Interdisciplinary
5	<p>Solve the following questions: -</p> <p>(i) 35 students can sit in a room. How many rooms will accommodate 455 students?</p> <p>(ii) Write the greatest number of five digits. Find the quotient and the remainder if its is divided by 35.</p> <p>(iii) Raju has a collection of 18 stamps. He wants to paste them in his album. In how many different rows, having same number of stamps, can he do that?</p>	2x3 =6	Problem Solving



ARMY PUBLIC SCHOOL GWALIOR

CLASS -IV

ACADEMIC SESSION 2021-22

WORKSHEET (SELF –ASSESSMENT)



Subject: EVS

Assignment No. : 5

Allotment Date: 15 August 2021

S. NO.	QUESTIONS	MARKS	NATURE
1	Name two natural living things ----- protect our brain	2	Information
2	What does a seed require to grow into seedling?	2	Understanding
3	Why do birds sit on their eggs?	2	Interdisciplinary
4	Define the terms: 1.Nutrients 2.Spinning	4	Analytical Skill

5	Why is water and roughage important for us?	3	HOT
6	How should we store woollen clothes?	2	Critical Thinking and Problem Solving
7	How do plants show movements?	2	Evaluation
8	Which gas does our body absorb and which gas does it throw out?	3	Communication Skills



ARMY PUBLIC SCHOOL GWALIOR
CLASS -IV




ACADEMIC SESSION 2021-22
WORKSHEET (SELF –ASSESSMENT)

Subject: Computer

Assignment No. : 5

Allotment Date: 15 August 2021

S. NO.	QUESTIONS	MARKS	
1.	Fill in the blanks: a. _____ memory stores data and information permanently. b. _____ is a non-volatile memory.	2x1=2	Information
2.	Write True or False: a. One terabyte is approximately equal to one book. () b. Bit is the smallest unit of a computer. ()	2x1=2	Understanding
3.	Choose the correct answer: - a. Process of copying data from RAM to hard disk is known as Saving Deleting Both a. and b. b. is known as primary memory.	2x1=2	HOT



ARMY PUBLIC SCHOOL GWALIOR

CLASS -IV

ACADEMIC SESSION 2021-22

WORKSHEET (SELF –ASSESSMENT)




Subject: G.K

Assignment No. : 5

Allotment Date: 15 August 2021

S. NO.	QUESTIONS	MARKS	NATURE
1.	Tick the correct answer: a) Who was the first president of Independent South Africa? b) Which lake is known as 'Srinagar's jewel'?	2*1=2	Information
2.	Fill in the blank: 1. founded the Green Belt Movement. 2. was the first emperor of Rome	2*1=2	Understanding
3.	Who was the Missile Man of India?	1*1=1	Interdisciplinary

4.	True or False: 1. Chilka Lake is the second largest artificial lake in Asia	1*1=1	Analytical Skill
5.	The land of Thousand Lakes	1*1=1	HOT
6.	Which district in Uttarakhand is known as the lake district of India?	1*1=1	Critical Thinking and Problem Solving
7.	Who is the father of Indian Constitution?	1*1= 1	Evaluation
8.	Who is the last important emperor of the Mauryan rule in India?	1*1=1	Communication Skills



ARMY PUBLIC SCHOOL GWALIOR

CLASS -IV

ACADEMIC SESSION 2021-22

WORKSHEET (SELF –ASSESSMENT)



Subject: Work Education

Assignment No. : 5

Allotment Date: 15 August 2021

S.N	QUESTIONS	MARKS	NATURE
1.	.Blue pottery art is- a) Ceramic craft b) Needle craft c) Textile craft d) None	1X1=1	Information
2.	. Origami is- a) Paper craft b) Textile craft c) Flower craft d) None	1X1=1	Understanding

3.	What is the Meaning of Paper Mache? a) chewed or crushed paper b) Coloured paper c) Sheets d) Stencils	1X1=1	
4.	Tie and dye is- a) Textile Craft b) Fibre craft c) Needle craft d) None	1X1=1	Creativity
5.	'Wooden rose wood scoop' is a craft under which category- a) House ware b) Leather work c) Fashion d) None	1X1=1	Creativity

6.	Fashion is the self expression of- a)Clothing b) Features c) Hairstyle d) All	1X1=1	Creativity
7.	A trend or look that is spread across a population at a specific time and place is- a) Fashion b) Fashion trend c) Adorning d) None	1X1=1	Creativity
8.	.Clay modelling is a craft which comes under- a) House ware b) Fashion c) Ceramics d) All	1X1=1	Creativity

9.	The example of ceramic is- a) Earthenware b) Bricks c) Porcelain d) All	1X1=1	Creativity
10.	Studio pottery involves- a) Tableware b) Cookware c) Sculpture d) All	1X1=1	Creativity



ARMY PUBLIC SCHOOL GWALIOR

CLASS -IV

ACADEMIC SESSION 2021-22


WORKSHEET (SELF –ASSESSMENT)



Subject: Art Education


Assignment No. : 5

Allotment Date: 15 August 2021

S.N	QUESTIONS	MARKS	NATURE
1.	<p>What is pictured here?</p>  <p>A. A wedding scene B. Dancers and a tarpa instrument player. C. Dancers and a bagpipe player D. Warli villagers celebrating a religious holiday</p>	1X1=1	Information
2.	<p>The ritual dance of the “Warli” tribe, danced in rows or circles, holding hands at the waist-is called</p> <p>A. Dhimsa B. Tarpa C. Dhemse D. Chhau</p>	1X1=1	Understanding

3.	How can you identify a Warli painting? A. White paint on red background B. Simple shapes and lines C. People dancing D. Colourful borders	1X1=1	
4.	Which geometric shapes we don't used in Warli Art? A. Circles B. Triangles C. Squares D. Rhombus	1X1=1	Creativity
5.	How is the white paint created in Warli Art? A. Grounding rice into powder B. Mixing flour and salt C. Using acrylic or tempera D. Using chalk and water	1X1=1	Creativity

6.	<p>What is Warli art?</p> <p>A. Art from war</p> <p>B. Just a simple art</p> <p>C. None</p> <p>D. Style of tribal art mostly created by the tribal people from the North Sahyadri Range in India.</p>	1X1=1	Creativity
7.	<p>Warli painting is indigenous to which State?</p> <p>A. Gujarat</p> <p>B. Rajasthan</p> <p>C. Odisha</p> <p>D. Maharashtra</p>	1X1=1	Creativity
8.	<p>Warli is the name for what?</p> <p>A. A plant found in India</p> <p>B. A large tribe in India</p> <p>C. A lake in Western India</p> <p>D. A new hairstyle</p>	1X1=1	Creativity

9.	Where in India are the Warli people located? A. East B. North C. South D. West	1X1=1	Creativity
10.	Is this a warli art ? 	1X1=1	Creativity

- A. Yes
- B. No



ARMY PUBLIC SCHOOL GWALIOR

CLASS -IV

ACADEMIC SESSION 2021-22

WORKSHEET (SELF –ASSESSMENT)



Subject: Health and Physical Education

Assignment No. : 5

Allotment Date: 15 August 2021

S.NO	Answer the following questions	NATURE	Marks 1X10=10
1.	Which of the following is a objective of physical exercise? (a) Improve bone health (b) Improve cardiorespiratory and muscular fitness. (C) Decrease levels of body fat. (d) All the above	Informative	1
2.	What do we do before playing a game? (a) Warming-up (b) Cool down (c) Rest (d) None of these	Informative	1
3	What do we improve from physical exercise? (a) Better mood (b) Better sleep (c) Health of bone (d) All the above	Informative	1
4	Which activity improves blood flow to your muscles? (a) Warming-up (b) Cool down (c) Rest	Analytical	1

	(d) None of these		
5	Fill in the blanks (question 5 to 7) _____ Can Boost Your Immune System. (Sleep, Without sleep)	Interdisciplinary	1
6	You can improve your posture with _____. (Exercise, Without exercise)	Interdisciplinary	1
7.	_____Decrease levels of body fat. (Exercise, Rest)	Informative	1
8.	True and False (question 8 to 10) Exercise improves ability to concentrate and pay attention.	Informative	1
9.	Exercise promotes better sleep.	Informative	1
10	Exercise boosts energy.	Analytical	1



ARMY PUBLIC SCHOOL GWALIOR

CLASS -IV

ACADEMIC SESSION 2021-22

WORKSHEET (SELF –ASSESSMENT)




Subject: Library

Assignment No. : 5

Allotment Date: 15 August 2021

S.NO	QUESTIONS	MARKS	NATURE
	Answer the following questions on the basis of the story ' the bell of atri ' given in the notes.		
1	Where did the story take place?	01	Comprehension
2	What was in the tower ?	01	Comprehension
3	What was the title of the story ?	01	Comprehension
4	Why was the king loved by all the people ?	01	Comprehension
5	How did the keeper repair ?	01	Analysis
6	What did the king tell the people ?	01	Comprehension
7	What was the old horse's name?	01	Understanding
8	Who heard the bell ?	01	Understanding
9	What did the horse's master do ?	01	Analysis
10	How did the old horse spend the rest of his days ?	01	Comprehension



ARMY PUBLIC SCHOOL GWALIOR
CLASS -IV



ACADEMIC SESSION 2021-22
WORKSHEET (SELF –ASSESSMENT)




Subject: Music

Assignment No. : 5

Allotment Date: 15 August 2021

S. NO.	प्रश्न	अंक	प्रकृति
1.	कथक नृत्य में ततकार की आवाज किस स्टेप के द्वारा आती है? अ) पैरों के द्वारा ब) मुंह के द्वारा स) हाथों के द्वारा	1marks	बोधात्मक
2.	पैरों से स्टेप करने पर किस धुन व बोल की आवाज आती है? अ) ता थई थई तत आ थई थई तत ब) सरगम स) तरंग	1 marks	
3.	पढन्त की आवाज किसके द्वारा निकलती है? अ) मुख के द्वारा ततकार द्वारा हस्तक द्वारा	1 marks	सूचनापरक
4.	पढन्त को किसके द्वारा बजाया जाता है? अ) हाथों से ताली देकर ब) पैरों को बजाकर स) कमर के द्वारा	1 marks	
5.	नृत्य करते समय पैरों से किस धुन की आवाज आती है? अ) घुंघरू की आवाज ब) चूड़ी की आवाज स) पायल की आवाज	1 marks	अंतःविषयात्मक

<p>6.</p>	<p>वाद्य यंत्र कितने प्रकार के होते हैं कितनी श्रेणियों में बाँटा गया है</p> <p>अ) चार श्रेणियों में बाँटा गया</p> <p>ब) पाँच श्रेणियों में बाँटा गया</p> <p>स) दो श्रेणियों में बाँटा गया</p>	<p>1 marks</p>	
<p>7.</p>	<p>तत् वाद्य यंत्र कौन से है?</p>  <p>The first image shows a veena, a stringed instrument with a long neck and two pear-shaped bodies. The second image shows a mridangam, a barrel-shaped drum with a white head and a purple body. The third image shows a harmonium, a keyboard instrument with a red and green body and a brass bellows.</p>	<p>1 marks</p>	<p>गहनसोचऔर समस्यासमाधान</p>

	<p>अ) तानपुरा, सारंगी, सरोद ब) ढोलक, तबला, पखावज स) हारमोनियम, शहनाई, बीन</p>		
8.	<p>सुषिर वाद्य यंत्र कौन से है?</p>  <p>Sarangi</p>   <p>अ) बासुरी, शहनाई, हारमोनियम ब) गिटार, सरोद, तानपुरा स) ढोल, नगाड़ा, मृदंग</p>	1 marks	
9.	<p>अवनद्ध वाद्य यंत्र कौन से है?</p>	1 marks	उच्चस्तरीय चिंतन



- अ) तबला, पखावज, ढोलक, नगाड़ा
ब) गिटार, सरोज, तानपुरा
स) मंजीरा, झांझ, घंटा

10.

धन् वाद्य यंत्र कौन-कौन से हैं?

1 marks



- अ) सारंगी, तानपुरा, रूद्र वीणा
ब) करताल, झांझ, मंजीरा, घंटा
स) ढोल, नगाड़ा, मृदंग

अ) ब) स)



ARMY PUBLIC SCHOOL GWALIOR
CLASS -IV



ACADEMIC SESSION 2021-22
WORKSHEET (SELF –ASSESSMENT)

Subject: Discipline

Assignment No. : 5

Allotment Date: 15 August 2021

Character Stories

Responsibility

Story by Andrew Frinkle

Responsibility is being dependable. Responsibility is getting things done and letting people know that they can count on you. There are many ways to be responsible.



Steven, Robert, and Tim had a group project due on Friday. They didn't have enough time in class, so they each took part of the project home to finish. Each of them brought their completed parts back to class Friday morning. The three boys got their project done. They were responsible.

Carly never let her friends down. If she said she'd be somewhere, she was there. If she said she'd do something, she did it. That's why the teacher had her help with the class calendar. Carly was very dependable.

How do you show responsibility?

S.No	Questions	Marks	Nature
1.	<p>Fill in the blanks-</p> <p>i. Being responsible is a good _____ .</p> <p>ii. Responsible children grow _____.</p> <p>iii. Responsibility is being _____.</p> <p>iv. If you are responsible people can _____ on you.</p> <p>v. Steven, Robert and Tim had a _____ project.</p> <p>vi. Carly never let her friends _____.</p> <p>vii. The three boys got the project done they were_____.</p> <p>viii. Carly was very _____.</p>	08	Knowledge & Understanding
2.	<p>How do you show your responsibility.</p> <p>i. _____</p> <p>ii. _____</p> <p>iii. _____</p> <p>iv. _____</p>	02	Thinking and Writing Skills