



ARMY PUBLIC SCHOOL GWALIOR

CLASS -III

ACADEMIC SESSION 2021-22

WORKSHEET (SELF –ASSESSMENT)



Subject: English


Assignment No. : 5

Allotment Date: 15 August 2021

S.N	QUESTIONS	MARKS	NATURE
1.	<p>Fill in the blanks with the right option:</p> <p>i) is the poetess of the poem named 'Palanquin Bearers'. (Sarojini Naidu/Mahadevi Verma)</p> <p>(i) The name of the Jack's cow was (Cinderella/daisy)</p>	2X1=2	Information
2.	<p>Tick the correct interjections in the following sentences:</p> <p>(i) Hurray! We won the quiz.</p> <p>(ii) Wao! What a trendy hair style it is.</p> <p>(iii) Bravo! Keep it up.</p>	3X1=3	Understanding

<p>3.</p>	<p>Write down the meanings of the following words:</p> <p>(i) giant</p> <p>(ii) eager</p> <p>(iii) belongings</p>	<p>3X1=3</p>	<p>Interdisciplinary</p>
<p>4.</p>	<p>Write the opposite of the following words-</p> <p>i) narrow</p> <p>ii) untidy</p> <p>iii) heavy</p>	<p>3X1=3</p>	<p>Analytical Skill</p>
<p>5.</p>	<p>Fill in the blanks by choosing the correct adjectives-</p> <p>i) The road was wet and (dry/slippery)</p> <p>ii) Milk is (good/bad) for our health.</p>	<p>2X1=2</p>	<p>Critical Thinking and Problem Solving</p>
<p>6.</p>	<p>Fill in the blanks with correct option:</p> <p>(i) Gold is a metal. (costly/costlier)</p> <p>(ii) Your handwriting is the in our class. (neater/neatest)</p>	<p>2X1=2</p>	<p>HOT</p>
<p>7.</p>	<p>Write the plural forms of these words:</p> <p>(i) goose</p>	<p>2X1=2</p>	<p>Evaluation</p>

7	(ii) mouse		
8.	<p>Answer the following questions:</p> <p>(i) Where did Jack and his mother live?</p> <p>.....</p> <p>.....</p> <p>(ii) What are the palanquin bearers doing along with carrying the palanquin ?</p> <p>.....</p> <p>.....</p> <p>(iii) What surprised Jack the next morning?</p> <p>.....</p> <p>.....</p>	3X1=3	Communication Skills



ARMY PUBLIC SCHOOL GWALIOR
CLASS -III



ACADEMIC SESSION 2021-22
WORKSHEET (SELF -ASSESSMENT)

Subject: Hindi

Assignment No. : 5

Allotment Date: 15 August 2021

संख्या	प्रश्नउत्तर	अंक	प्रकृति
प्र.1	सही वाक्यों के सामने सही (V) व गलत के सामने गलत (X)का निशान लगाएं। क. जंगल के पास वाले गाँव में सलोनी अपनी माँ के साथ रहती थी () ख. सलोनी की माँ हर रोज मूर्तियाँ लेकर शहर जात थी। () ग. धीरे-धीरे लोगों ने भूत के डर से जंगल में जाना बंद कर दिया। () घ . घंटे वाले भूत बंदर थे। ()	4	बोधार्थक
प्र.2	निम्नलिखित शब्दों के विपरीत अर्थ वाले शब्द लिखो:- क. कठिनाई ख. थोड़ा ग. अगला घ. निडर	4	सूचनापरक
प्र.3	इन्हे क्या कहते हैं? लिखो: क. हाथ से काम करनेवाला _____ _____ ख. मिट्टी के बरतन बनाने वाला _____ _____	2	अंतः विषयात्मक
प्र.4	लोगो ने जंगल में जाना क्यों बंद कर दिया?	2	गहनसोचऔरसमस्यासमाधान

प्र.5	सलोनी के बारे में दो वाक्य लिखो: 	2	उच्चस्तरीय चिंतन
प्र.6	निम्नलिखित शब्दों के अर्थ लिखो:- क. आनंद ख. स्पष्ट ग. विश्वास घ. ठान लेना	4	विश्लेषणात्मक
प्र.7	निम्नलिखित प्रश्नों का उत्तर दो:- गाँव के लोग जंगल के रास्ते से शहर क्यों जाते थे? 	2	भाषायीकौशल



ARMY PUBLIC SCHOOL GWALIOR

CLASS -III

ACADEMIC SESSION 2021-22


WORKSHEET (SELF -ASSESSMENT)



Subject: Mathematics

Assignment No. : 5

Allotment Date: 15 August 2021

S. NO.	QUESTIONS	MARKS	NATURE
1.	<p>Fill in the blanks by choosing the correct options –</p> <p>i) Even numbers are those numbers which are exactly divisible by</p> <p>ii) 3, 6, 9, 12,,,</p>	2X1=2	Information
2.	<p>Complete the following patterns -</p> 	3x1=3	Understanding
3.	<p>Make any pattern and colour it.</p>	2x1=2	Interdisciplinary

4.	<p>State whether the following statements are True or False:</p> <p>i) The sum of two even numbers is an odd number</p> <p>ii) The sum of two odd numbers is an even number.....</p> <p>iii) The sum of an even number and an odd number is an odd number.....</p>	3x1=3	Analytical Skill
5.	<p>Encircle the even numbers in the following –</p> <p>i) 67, 42, 53, 71, 300</p> <p>ii) 88, 66, 35, 67, 73</p>	2x1=2	Critical Thinking and Problem Solving
6.	<p>Fill in the boxes-</p> <p>i) $35+18= \dots\dots\dots$(Odd)</p> <p>ii) $113+3= \dots\dots\dots$(Even)</p>	2x1=2	HOT

7.	<p>Complete the following statements-</p> <p>i) Patterns are used tothe floors or walls of the rooms. (decorate/destroy)</p> <p>ii) Patterns are also used in borders. (saree/light)</p> <p>iii) numbers are not divisible by 2. (Odd/Even)</p>	3x1=3	Evaluation
8.	<p>Complete the number patterns-</p> <p>i) 72 69 63 60</p> <p>ii) 110 120 130 140 </p> <p>iii) 7 14 21 28 </p> <p>iv) 16 24 32 </p>	4x1=4	Communication Skills



ARMY PUBLIC SCHOOL GWALIOR

CLASS -III



ACADEMIC SESSION 2021-22

WORKSHEET (SELF –ASSESSMENT)

Subject: EVS

Assignment No. : 5

Allotment Date: 15 August 2021

S.NO.	QUESTIONS	MARKS	NATURE
1.	<p>Answer the following questions:</p> <p>a) What is first-aid?</p> <p>b) How does water change its form in nature?</p> <p>c) Which are the three forms of water? Name them and give examples.</p>	3 x 2 =6	Information
2.	<p>Fill in the blanks with the help of given words. (Stop, blue, working, zebra, plants and animals)</p> <p>(a) Our earth is also called a planet.</p> <p>(b) We should cross the road at the ----- crossing.</p> <p>(c) Water is found in</p> <p>(d) The process by which a liquid change into vapour is known as</p> <p>(e) Red colour in traffic signal means -----.</p>	5x 1=5	Understanding

<p>3</p>	<p>State whether the following statements are 'True' or 'False':</p> <p>(a) We should not touch electric switches with our wet hands. -----</p> <p>(b) The cycle of change of water in nature is called water cycle. -----</p> <p>(c) The amount of rainfall can be measured with a help of a -----.</p> <p>(d) Cleanliness is necessary to maintain health. -----</p>	<p>4x1=4</p>	<p>Knowledge</p>
<p>4</p>	<p>Choose the correct option:</p> <p>(a) Which of these should be used by children only in the presence of an adult -----.</p> <p>i) Matchbox ii) Knife iii) All of these</p> <p>(b) Only % of fresh water is available on our earth.</p> <p>i) 72 ii) 3 iii) 69</p> <p>(c) Which of these colours on the traffic signal signals you to go?</p> <p>i) Green ii) Red iii) Amber</p> <p>(d) Why should you not fly kites on the terrace?</p> <p>i) You may get burnt ii) You may fall ill iii) You may fall off</p> <p>(e) Examples of junk food are-</p> <p>i) apple and banana ii) chocolate and pizza iii) tomato and spinach</p>	<p>5 x1=5</p>	<p>Interdisciplinary & Critical thinking</p>



ARMY PUBLIC SCHOOL GWALIOR

CLASS -III

ACADEMIC SESSION 2021-22

WORKSHEET (SELF -ASSESSMENT)




Subject: Computer

Assignment No. : 5

Allotment Date: 15 August 2021

S. NO.	QUESTIONS	MARKS	NATURE
1.	<p><u>Tick the correct answer</u></p> <p>1. The small pictures present on the desktop are called Icons Documents Pointer</p> <p>2. The bar at the bottom of desktop is known as Taskbar Title bar Scroll bar</p> <p>3. is a popular operating system. Windows IBM HCL</p> <p>4. controls the working of a computer. MS-Paint Windows 7 Calculator</p>	0.5X4=2	Information
2.	<p><u>Fill in the blanks</u></p> <p>1.Windows 7 is an Operating System developed by _____.</p> <p>2._____ helps us to point, click or double- click the various items on the desktop.</p> <p>_____ is turned on.</p> <p>3.Date & Time are present on the _____.</p> <p>4._____ menu lists all the installed programs in the</p>	1X4=4	Understandi ng

	computer.		
5	<u>Answer the following questions</u> a) What does a Taskbar show? Ans.- b) What does a start button contain? Ans.-	2X2=4	Critical Thinking and Problem Solving



ARMY PUBLIC SCHOOL GWALIOR

CLASS -III

ACADEMIC SESSION 2021-22

WORKSHEET (SELF -ASSESSMENT)



Subject: G.K

Assignment No. : 5

Allotment Date: 15 August 2021

S. No.	Questions	Marks	Nature
1.	Fill in the blanks- i) The leaves of are used to add flavour to food. ii) Malgudi Days is a collection of short stories by iii) The Wright Brothers,and Wilbur,were two American brothers. iv) The first Olympics were held in more than 3000 years ago, at a place called Olympia. v) The is the currency of UK.	5x0.5 =2.5	Information
2.	Match the following- i) baht ii) 2020 Olympics iii) Stephan Farfler iv) Lionel Messi v) Mary Kom a) Tokyo b) Thailand c) boxing d) a three-wheeledchair e) kabaddi	5x0.5=2.5	Problem solving
3.	Who invented the steam engine?	1x1=1	Understanding
4.	Answer the following questions- i) Name the plant whose leaves are used as a cure for	4x1=4	HOT

	<p>various skin diseases.</p> <p>.....</p> <p>ii) Name the person in Jonathan Swift's novel who reaches a strange island after his ship sinks at sea.</p> <p>.....</p> <p>iii) Name the folk dance of Maharashtra.</p> <p>.....</p> <p>iv) Name the currency of Indonesia.</p> <p>.....</p>		
--	---	--	--



ARMY PUBLIC SCHOOL GWALIOR

CLASS -III

ACADEMIC SESSION 2021-22


WORKSHEET (SELF -ASSESSMENT)



Subject: Art Education

Assignment No. : 5

Allotment Date: 15 August 2021

S. No	QUESTIONS	MARKS	NATURE
1.	<p>Identify the following art?</p>  <p>A. A wedding scene B. Dancers and a tarpa instrument player. C. Warli villagers celebrating a religious holiday</p>	3X1=3	Information
2.	<p>Warli painting is a -</p> <p>A. White paint on red background B. Simple shapes and lines C. People dancing</p>		Critical thinking
3.	<p>The ritual dance of the "Warli" tribe, danced in rows or circles, holding hands at the waist-is called -</p> <p>A. Dhimsa B. Tarpa C. Dhemse</p>		

4.	How does the white paint create for Warli Art? A. Grounding rice into powder B. Mixing flour and salt C. Using acrylic or tempera	3X1=3	Understanding
5.	What is Warli art? A. Art from war B. Just a simple art C. Style of tribal art mostly created by the tribal people from the North Sahyadri Range in India.		
6.	Which state is known for its Warli paintings? A. Gujarat B. Rajasthan C. Maharashtra		
7.	Warli is the name for - A. A new hairstyle B. A large tribe in India C. A lake in Western India	2X1=2	Analytical Skill
8.	Warli art did not come from a tribe. A. True B. False		Knowledge

9.	The language spoken by Warli tribe is - A. Varli language B. Bangla C. Bodo	2X1=2	Knowledge
10.	Which geometrical shape we don't use in Warli Art? A. Circles B. Triangles C. Rhombus		



ARMY PUBLIC SCHOOL GWALIOR

CLASS -III

ACADEMIC SESSION 2021-22

WORKSHEET (SELF –ASSESSMENT)



Subject: Work Education

Assignment No. : 5

Allotment Date: 15 August 2021

S.NO.	QUESTIONS	MARKS	NATURE
1.	<p>Fill in the blanks by using the clues:</p> <p>(Ornamental, form dominant, Indian)</p> <p>a) Rangoli is an traditional art.</p> <p>b) is a type of rangoli art.</p> <p>c) Circles, cones and lines are type of rangoli.</p>	3X1=3	Information
2.	<p>Multiple Choice Questions:</p> <p>a) How many types of rangolis are there?</p> <p>i) three</p> <p>ii) five</p> <p>iii) two</p> <p>b) Ornamental rangoli consists of images of –</p> <p>i)birds, animals, trees, petals, flower</p> <p>ii) Circles, cones and lines</p> <p>iii) None of these</p>	2X1=2	Understanding

<p>3.</p>	<p>State True or False for the following sentences -</p> <p>i) Rangoli is a Japanese traditional art. </p> <p>ii) There are two types of rangolis. </p> <p>iii) In Rangoli art, patterns are created on the floor or the ground using quartz powder. </p>	<p>3 x1=3</p>	<p>Critical thinking</p>
<p>4.</p>	<p>What is a rangoli art? </p>	<p>2X1=2</p>	<p>Analytical Skill</p>



ARMY PUBLIC SCHOOL GWALIOR

CLASS -III

ACADEMIC SESSION 2021-22

WORKSHEET (SELF –ASSESSMENT)




Subject: Health and Physical Education

Assignment No. : 5

Allotment Date: 15 August 2021

S.no	Question	Nature	Marks
	Fill in the blanks		10 x 1 = 10
1.	We should brush our teeth _____ a day. a) Twice b) Thrice c) Once d) None of the above	Informative	
2.	We should keep our nails _____. a) Clean b) Dirty c) Big d) None of the above	Informative	
3.	We should eat _____. a) Junk food b) Healthy fruits and vegetables c) Both A and B d) None of the above	Informative	
	True / false		
4.	We should eat junk food.	Understanding	
5.	Always flush toilet after use	Informative	
6.	We should not take bath regularly.	Understanding	
	MCQs	Informative	

7.	<p>Which types of cloth we should wear?</p> <ul style="list-style-type: none"> a) Dirty and untidy b) Clean and tidy c) Big size d) Small size 	Analytic skill	
8.	<p>Which thing we should do regularly?</p> <ul style="list-style-type: none"> a) Not taking bath b) Taking bath c) Not brushing teeth d) None of the above 	Informative	
9.	<p>Which thing we should do always?</p> <ul style="list-style-type: none"> a) Play b) Rest c) Both A and B d) None of the above 	understanding	
10.	<p>Which thing provide a hygiene barrier?</p> <ul style="list-style-type: none"> a) Clothing b) Shoes c) Clothing and shoes d) None of the above 		



ARMY PUBLIC SCHOOL GWALIOR

CLASS -III

ACADEMIC SESSION 2021-22

WORKSHEET (SELF –ASSESSMENT)



Subject: Library

Assignment No. : 5

Allotment Date: 15 August 2021

S.NO	QUESTIONS	MARKS	NATURE
1	<p>Answer the following questions on the basis of the story 'Pinocchio the puppet' given in the notes.</p> <p>What was the name of the joiner?</p>	01	Comprehension
2	<p>Who asked him for a bit of wood?</p>	01	Comprehension
3	<p>Why did he want the piece of wood?</p>	01	Analysis
4	<p>Why did Geppetto become very angry?</p>	01	Understanding
5	<p>What was the title of the story?</p>	01	Understanding
6	<p>What did Geppetto use to carve the puppet?</p>	01	Comprehension
7	<p>What was strange about the puppet's nose?</p>	01	Analysis
8	<p>Where did Geppetto live?</p>	01	Comprehension

		
9	Where did the puppet go?	01	Understanding
10	What happened when he finished the feet?	01	Comprehension



ARMY PUBLIC SCHOOL GWALIOR

CLASS -III

ACADEMIC SESSION 2021-22

WORKSHEET (SELF -ASSESSMENT)




Subject: Music

Assignment No. : 5

Allotment Date: 15 August 2021

S. NO.	प्रश्न	अंक	प्रकृति
1	गरबा लोक नृत्य कला शैली कहाँ प्रचलित है? अ) गुजरात ब) तमिलनाडु स) केरल	1	बोधोत्सुक
2	तमाशा नृत्य किस राज्य की प्रमुख लोक नृत्य कला शैली है? अ) महाराष्ट्र ब) कश्मीर स) बनारस	1	
3	राऊफ किस राज्य की प्रमुख लोक नृत्य शैली है? अ) जम्मू कश्मीर ब) राजस्थान स) पंजाब	1	सूचनापरक
4	केली गोपाल किस राज्य का लोक नृत्य है? अ) असम ब) आंध्र प्रदेश स) सागर	1	
5	भांगड़ा कहाँ का लोकप्रिय लोक नृत्य है? अ) पंजाब ब) लखनऊ स) जयपुर	1	अंतःविषयात्मक
6	पणिहारी लोक नृत्य कहाँ प्रचलित है? अ) गुजरात ब) कश्मीर स) बनारस	1	

7	यक्षगान नामक लोक नृत्य किस राज्य से संबंधित है? अ) कर्नाटक ब) तमिलनाडु स) केरल	1	गहनसोचऔर समस्यासमाधान
8	गोतिपुआ कहाँ का लोक नृत्य है? अ) ओडिशा स) उड़ीसा	1	ब) बिहार
9	झूमर कहाँ का लोक नृत्य है? अ) झारखंड ब) उत्तराखंड स) श्रीलंका	1	उच्चस्तरीय चिंतन
10	बांस नृत्य (चंगी नृत्य) कहाँ का है? अ) नागालैंड ब) महाराष्ट्र स) गुजरात	1	



ARMY PUBLIC SCHOOL GWALIOR

CLASS -III

ACADEMIC SESSION 2021-22





WORKSHEET (SELF –ASSESSMENT)






Subject: Discipline

Assignment No. : 5

Allotment Date: 15 August 2021

S.No	Question	Marks	Nature
1.	<p>Match The Following-</p> <p>a.</p>  <p>Watering Plants</p> <p>b.</p>  <p>Using Dustbin to throw garbage</p> <p>c.</p>  <p>Arranging Bed</p> <p>d.</p>  <p>Folding Clothes</p>	08	Knowledge & Understanding

	<p>e.</p>  <p>Cleaning room</p> <p>f.</p>  <p>Arranging Toys after play</p> <p>g.</p>  <p>Cleaning Floor</p>		
2.	<p>Write Y for Yes and N for No-</p> <p>i. Do you take care of your things?</p> <p>ii. Do you do your HW on your own?</p>	01	Thinking Skills
3.	<p>Tick the correct answer-</p> <p>Being Responsible is -</p> <p>i. A good quality</p> <p>ii. Happiness</p>	01	Thinking Skills