



ARMY PUBLIC SCHOOL GWALIOR

CLASS - I

ACADEMIC SESSION 2021-22

WORKSHEET (SELF -ASSESSMENT)



Subject: English

Assignment No. : 5

Allotment Date: 15 August 2021

S.N	QUESTIONS	MARKS	NATURE
1	<p>Fill in the blanks with correct word :</p> <p>The wheat plant grew up yellow and</p> <p>2. Little Red Hen cut the wheat plant with her</p>	2X1=2	Information
2	<p>Match the following to make pairs.</p> <p>1.prince daughter</p> <p>2.son queen</p> <p>3.king princess</p>	3X1=3	Understanding
3	<p>Write the plurals for the following words.</p> <p>1.Dog _____</p> <p>2.Chair _____</p> <p>3.Kitten _____</p>	3X1=3	Interdisciplinary
4	<p>Match the animals to the words that describe them correctly as in the</p>	2X1=2	Analytical Skill


story.




sleepy



lazy



noisy



hardworking

5	<p>Write down the meanings of the following words :</p> <p>1.noisy _____</p> <p>2.buried _____</p> <p>3.ripe _____</p>	3X1=3	Critical Thinking and Problem Solving
6	<p>What do you think friends are for?</p> <p>_____</p>	1X2 =2	HOT
7	<p>Answer the following questions.</p> <p>Where did the Little Red Hen live?</p> <p>_____</p> <p>_____</p> <p>Who ate the bread?</p> <p>_____</p> <p>_____</p>	2X1=2	Evaluation
8	<p>Answer the following questions :</p> <p>What did the Little Red Hen find ?</p> <p>.....</p> <p>.....</p>	3X1=3	Communication Skills

Why did the Little Red Hen take wheat to the mill ?


.....

.....

Who planted, cut and threshed ?.

.....

.....



ARMY PUBLIC SCHOOL GWALIOR

CLASS - I

ACADEMIC SESSION 2021-22



WORKSHEET (SELF -ASSESSMENT)



Subject: Hindi

Assignment No. : 5

Allotment Date: 15 August 2021

संख्या	प्रश्नउत्तर	अंक	प्रकृति
प्र.1	सहीवाक्यों के सामनेसही(V) व गलत के सामने गलत(X)का निशान लगाएं। क. मुर्गी रानी सजकर आई थी। () ख. भालू का नाम कालू था। () ग. मुरगे की बारात दुखी होकर चली। () घ . नृप हवेली का गृह पतिथा। ()	1x4=4	बोधोत्प्रेरक
प्र.2	निम्नलिखित शब्दों को सही मात्रा लगाकर पूरा करो (ऋ , ऊ , ई की मात्राएँ)। खरबजा..... गदड़..... अमरद..... वहद.....	1x4=4	गहन सोच और समस्या समाधान
प्र.3	निम्नलिखित चित्रों को पहचानकर उनके नाम लिखो—  	2x1=2	अंतः विषयात्मक
प्र.4	निम्नलिखित शब्दों के उलटे अर्थ वाले शब्द लिखो: क. गरीब— ख.जागना—	2x1=2	सूचना परक

<p>प्र.5</p>	<p>निम्नलिखित अधूरे शब्दों में उचित विकल्प को जोड़कर सही शब्द बनाओ</p> <p>(कृ , मृ):</p> <p>.....दा</p> <p>.....पाण</p> <p>.....तक</p> <p>.....पा</p>	<p>2x1=2</p>	<p>उच्चस्तरीय चिंतन</p>
<p>प्र.6</p>	<p>निम्नलिखित प्रश्नों के उत्तर दीजिए:</p> <p>क. बाग का रखवाला क्या कर रह था ?</p> <p>.....</p> <p>ख. कालू क्या पहनकर दुकान पर जाता था ?</p> <p>.....</p>	<p>2x2=4</p>	<p>विश्लेषणात्मक</p>
<p>प्र.7</p>	<p>निम्नलिखित शब्दों के अर्थ लिखो:</p> <p>वृहद—</p> <p>बढ़िया —</p> <p>नृप—</p> <p>धीमी—</p>	<p>2x1=2</p>	<p>भाषायी कौशल</p>



ARMY PUBLIC SCHOOL GWALIOR

CLASS -I

ACADEMIC SESSION 2021-22

WORKSHEET (SELF –ASSESSMENT)







Subject: Mathematics

Assignment No. : 5

Allotment Date: 15 August 2021

S. NO.	QUESTIONS	MARKS	NATURE
1	Write the number names of the following : (i) 20 = _____ (ii) 12= _____	2x1=2	Information
2	Choose the correct answer : (i) Which one is wider – a river or a drain near your house? _____ (ii) Who is taller – you or your father? _____	2x1=2	Understanding
3	Do as directed in the following pictures:	3x1=3	Interdisciplinary

	<p>(i)  (circle the lighter one).</p> <p>(ii)  (circle the wider stairs).</p> <p>(iii)  (circle the smaller one).</p>		
4	<p>Observe and write the correct word (heavy, heavier, heaviest) :</p> 	3X1=3	Analytical Skill
5	<p>Write the expanded form of the following numbers:</p> <p>(i) 15 = ___ ten ___ ones</p> <p>(ii) 10 = ___ ten ___ ones</p>	2X1=2	Critical Thinking and Problem Solving
6	<p>Answer the following questions:-</p> <p>(i) A candle or a wooden bat (which is longer)</p> <p>(ii) A bus or an airplane (which is longer)</p>	2X1=2	HOT
7	<p>Look at the following picture and Circle the WIDEST, Cross the</p>	4x1=4	Evaluation

LIGHTEST, Tick RIGHT the heavier:



8

Answer the following saying YES or NO:-

(i) Can you measure a book by a handspan?

_____.

(ii) Can we measure a carpet with finger?

_____.

2x1=2

Communication
Skills



ARMY PUBLIC SCHOOL GWALIOR

CLASS - I



ACADEMIC SESSION 2021-22





WORKSHEET (SELF –ASSESSMENT)

Subject: EVS

Assignment No. : 5

Allotment Date: 15 August 2021

S.N	QUESTIONS	MARKS	NATURE
1	<p>A Tick (✓) the correct options :</p> <p>i).We learn at school.</p> <p>a. driving b. reading c. farming</p> <p>ii).Our teach us in the classroom.</p> <p>a. Principal b. teachers c. gardener</p> <p>iii).In a school, besides the Principal and teachers, there arealso.</p> <p>a. firemen b. sweepers c. mothers</p> <p>iv).Our special school dress is known as</p> <p>a. uniform b. unicorn c. uniball</p>	3X1=3	Information
2	<p>B. Write 'T' for True or 'F' for False :</p> <p>i)A pilot flies an aeroplane -----</p> <p>ii)A plumber mends a broken shoe -----</p> <p>iii)Sick students go to the medical room. -----</p> <p>iv)A fireman puts out a fire -----</p> <p>v)A writer directs a movie. -----</p> <p>vi) Children learn many new things in school. -----</p>	6X0.5=3	Understanding
3	<p>Answer the following questions</p>	6X1=6	Interdisciplinary

	<p>i).What do you do in your school library? Ans . _____</p> <p>ii).Who takes care of the people in an aeroplane ? Ans . _____</p> <p>.iii) Why do we need food? Ans . _____</p> <p>iv).What is healthy food? Ans . _____</p> <p>v).Why is pizza considered as junk food? Ans . _____</p> <p>vi).How many glasses of water should you drink in a day? Ans . _____</p>		
<p>4</p>	<p>B. Write 'P' for plant food and 'A' for animal food in the given :</p> <div style="display: flex; justify-content: space-around; align-items: flex-start;"> <div style="text-align: center;">  <p>-----</p> </div> <div style="text-align: center;">  <p>-----</p> </div> </div> <div style="display: flex; justify-content: space-around; align-items: flex-start; margin-top: 20px;"> <div style="text-align: center;">  <p>-----</p> </div> <div style="text-align: center;">  <p>-----</p> </div> </div>	<p>4X0.5=2</p>	<p>Analytical Skill</p>

5	<p>Choose the correct options: (junk , breakfast, plants)</p> <p>i).Avoid eating food.</p> <p>iii).Most of our food comes from</p>	2X1=2	Critical Thinking and Problem Solving
6	<p>Q . What kind of behaviour do you need to follow to make your class a better class?</p> <p>Ans.....</p> <p>Q.Who is a photographer?</p> <p>Ans.....</p>	2X1=2	HOT
8	<p>Underline the correct options :</p> <p>i) A postman delivers letters from home to the post office/post office to homes.</p> <p>ii)A nurse works in a hospital/jail.</p> <p>iii)A fruit seller sells vegetables/fruits.</p> <p>iv).An actor acts/directs a movie.</p>	4X0.5=2	Communication Skills



ARMY PUBLIC SCHOOL GWALIOR
CLASS -I



ACADEMIC SESSION 2021-22
WORKSHEET (SELF –ASSESSMENT)


Subject: Computer

Assignment No. : 5

Allotment Date: 15 August 2021

S. NO.	QUESTIONS	MARKS	NATURE
1	<p><u>Tick the correct answer</u></p> <p>i) At shop, a computer helps in Bills.</p> <ul style="list-style-type: none">a. Playingb. Drawingc. Recording <p>ii). At, computers are used for preparing exam results.</p> <ul style="list-style-type: none">a. Schoolb. Officec. Bank	2X1=2	Information

<p>2</p>	<p>Guess the place where computers are used, in these statements.</p> <p>i).Helps to keep records in library. S H L</p> <p>ii). Helps in typing letters. O F C</p> <p>iii). Helps in booking tickets. A I P T</p> <p>iv). Helps in preparing medical reports. H I L</p>	<p>4X1=4</p>	<p>Understanding</p>
<p>5</p>	<p><u>Write 'T' for True and 'F' for False statements:-</u></p> <p>i).Computers can keep the record of fee at school. T</p> <p>ii). Computers are helpful in offices. T</p> <p>iii). Computers help at railway stations. F</p> <p>iv). Computers are used for teaching. F</p>	<p>1X4=4</p>	<p>Critical</p> <p>Thinking and</p> <p>Problem</p> <p>Solving</p>



ARMY PUBLIC SCHOOL GWALIOR

CLASS - I

ACADEMIC SESSION 2021-22

WORKSHEET (SELF -ASSESSMENT)



Subject: G.K


Assignment No. : 5

Allotment Date: 15 August 2021

S.N	QUESTIONS	MARKS	NATURE
1	<p>Choose the correct word for the following :</p> <p>(i) A _____ is a large boat for travelling on water. A) truck B) ship C) car</p> <p>(ii) The animals caught by the predator are the _____. A) lion B) elephant C) prey</p>	2X1=2	Information
2	<p>Write TRUE or FALSE for the following statements.</p> <p>(i) Crocodile is a herbivores animal. ()</p> <p>(ii) Sheep is a carnivores animal. ()</p> <p>(iii) A bike has two wheels and a motor. ()</p>	3X1=3	Understanding

3	<p>Write any three means of transport which you see on roads:</p> <p>(i)</p> <p>(ii)</p> <p>(iii)</p>	3X1=3	Interdisciplinary
4	<p>Complete the following words by using the hints given below:</p> <p>(i) A carnivore as well as an aquatic animal. B _ U _ W _ _ _ E</p> <p>(ii) A herbivore animal which gives us milk also . _ O A _</p> <p>(iii) It has a number of bogies which are pulled by an engine. _ R _ _ N</p>	3X1=3	Analytical Skill
5	<p>Find the odd one out of the following word groups.</p> <p>(i) Morning, afternoon, dark.</p> <p>(ii) Eyes, lips, nails.</p>	2X1=2	Critical Thinking and Problem Solving
6	<p>Write down which means of transport will be used to cover the following distances . (aero plane, car, bus, ship)</p> <p>(i) Your city to nearby city. _____</p> <p>(ii) Kolkata to Andaman. _____</p>	2X1=2	HOT

7	Answer the following questions : (i) What is the another name for tram? _____ (ii) Which means of transport is made of metal and flies in the sky? _____	2X1=2	Evaluation
8	Write the following: (i) Name any two carnivore animals. _____, _____ (ii) Name any two herbivore animals. _____, _____ (iii) A shark is a predator or prey? _____	3X1=3	Communication Skills



ARMY PUBLIC SCHOOL GWALIOR

CLASS -I

ACADEMIC SESSION 2021-22

WORKSHEET (SELF -ASSESSMENT)



Subject: Work Education

Assignment No. : 5

Allotment Date: 15 August 2021

S. NO.	QUESTIONS	MARKS	NATURE
1	<p><u>Tick the correct answer</u></p> <p>What is the colour of orange ? Ans -----</p> <p>What is the colour of apple ? Ans -----</p> <p>What is the colour of watermelon? Ans -----</p> <p>What is the colour of grapes ? Ans -----</p>	4X1=4	Information
2	<p>I)..... is a tertiary colour</p> <p>a. Orange b. Red-Violet c. Yellow</p> <p>ii) is a primary colour.</p> <p>a. Orange b. Red-Violet c. Yellow</p> <p>iii) is a secondary colour.</p> <p>a. Orange b. Red-Violet c. Yellow</p>	3X1=3	Understanding

5	<u>Write 'T' for True and 'F' for False statements:-</u> I. Green colour is a primary colour. _____ II. Yellow colour is a secondary colors _____ III. Red-Orange colour is a Tertiary Colors colour _____	3X1=3	Critical Thinking and Problem Solving
----------	--	--------------	--



ARMY PUBLIC SCHOOL GWALIOR

CLASS -I

ACADEMIC SESSION 2021-22

WORKSHEET (SELF –ASSESSMENT)




Subject: Art Education

Assignment No. : 5

Allotment Date: 15 August 2021

S.N	QUESTIONS	MARKS	NATURE
1	<p><u>Tick the correct answer</u></p> <p>i)Which colour symbolizes peace purity and Innocence? a. Purple b. Red c. White</p> <p>ii)What is the colour of a sunflower? a. Yellow b. Purple c. Red</p> <p>iii)What is the combination of colours in the Indian national flag? a. Orange, white, green. b. Purple,red, yellow c. White, green,purple</p>	3X1=3	Information
2	<p><u>Write 'T' for True and 'F' for False statements:-</u></p> <p>i)2B pencil is darker than HB . _____</p> <p>ii)The pencils used for drawing are a HB,2B, 4B. _____</p> <p>iii)Blue is the first colour in rainbow. _____</p> <p>iv)Orange, Violet and Green are secondary colours. _____</p>	4X1=4	Information
3	<p><u>Fill in the blanks</u></p> <p>i). Pencils are made up of graphite iron gold</p> <p>ii)..... is the first colour in rainbow?</p>	3X1=3	

	<p>red yellow blue</p> <p>iii)..... is the colour of brinjal?</p> <p>purple red yellow</p>		
--	--	--	--



ARMY PUBLIC SCHOOL GWALIOR

CLASS - I

ACADEMIC SESSION 2021-22

WORKSHEET (SELF -ASSESSMENT)




Subject: Health and Physical Education

Assignment No. : 5

Allotment Date: 15 August 2021

S.NO	QUESTIONS	MARKS	NATURE
1.	Fill in the blanks Badminton is a _____ sport. a) Racquet b) Bat c) Running d) None of the above	10 x 1 = 10	Informative
2.	Basketball is a game played between _____ team. a) Four b) Two c) Five d) Ten		Analytic skill
3.	Cricket is usually played by _____. a) Leg b) Hand c) Head d) Arm		Understanding
	True/False		
4.	Football is played with foot and head		Understanding
5.	Shuttlecock is used in cricket		Informative
6.	Basketball is played in outdoor		Informative
	MCQs		
7.	What we use to hit shuttlecock?		Understanding

8.	<p>a) Hand b) Bat c) Racket d) Foot</p> <p>We play basketball using.</p> <p>a) Foot and hand b) Foot c) Hand d) None of the above</p>		Analytic skill
9.	<p>How many players are there in one cricket team?</p> <p>a) 11 b) 12 c) 14 d) 18</p>		Informative
10.	<p>What is another name of football?</p> <p>a) Soccer b) Basket ball c) Dodge ball d) Volley ball</p>		informative



ARMY PUBLIC SCHOOL GWALIOR

CLASS - I

ACADEMIC SESSION 2021-22





WORKSHEET (SELF -ASSESSMENT)



Subject: Discipline

Assignment No. : 5

Allotment Date: 15 August 2021

S.NO	QUESTION	MARKS	NATURE
1.	<p>Match The Following-</p> <p>a.</p>  <p>Watering Plants</p> <p>b.</p>  <p>Using Dustbin to throw garbage</p> <p>c.</p>  <p>Arranging Bed</p> <p>d.</p>  <p>Folding Clothes</p> <p>e.</p>	08	Knowledge & Understanding



Cleaning room

f.



Arranging Toys after play

g.



Cleaning Floor

2.	Write Y for Yes and N for No- i. Do you take care of your things? ii. Do you do your HW on your own?	01	Thinking Skills
3.	Tick the correct answer- Being Responsible is - i. A good quality ii. Happiness	01	Thinking Skills



ARMY PUBLIC SCHOOL GWALIOR

CLASS - I

ACADEMIC SESSION 2021-22

WORKSHEET (SELF -ASSESSMENT)



Subject: Music

Assignment No. : 5

Allotment Date: 15 August 2021

S. NO.	प्रश्न	अंक	प्रकृति
1.	कोरियो ग्राफी क्या है? अ) कला, डिजाइन ब) विज्ञान स) ज्ञान	1 अंक	बोधात्मक
2.	कोरिया ग्राफी को किन-किन नामों से जाना जाता है? अ) नृत्य रचना, ब) नृत्य उदाहरण स) नृत्य अर्थ	1अंक	
3.	एकल नृत्य में नृत्यकारों की संख्या कितनी होती है ? अ) एक हीनृत्यकार ब) एकलनृत्यकार स) समूहनृत्य कार	1अंक	सूचनापरक
4.	समूहनृत्य में कितनी नृत्यकारों की संख्या होती है? अ) एक सेअधिकनृत्यकार ब) एक नृत्य कार स) कोईनहीं	1 अंक	
5.	सर्पव्युहमें किसप्रकारकीरचना की जातीहै? अ) सर्प की तरहलहराती ब) एक पंक्तियोंमेंलहराती	1 अंक	अंतःविषयात्मक

	स) सीधीरेखामेंलहराती		
6.	अर्द्ध चन्द्रव्यूह किसे कहते है ? अ) अर्द्धचंद्राकारगिनतीमें ब) सीधीलंबीसरलरेखामें स) त्रिकोण की आकृतिमें	1 अंक	
7.	वाणव्यूह किसे कहते है ? अ) सीधीसरलरेखा ब)तिरछीरेखा स)लंबीरेखा	1 अंक	गहनसोचऔर समस्यासमाधान
8.	त्रिकोणव्यूह रचना में किस समूह का निर्माण किया जाता है? अ) त्रिकोण की आकृती ब) चतुर्भुज की आकृति स)गोलाकार आकृति	1 अंक	
9.	कूपव्यूह को किस प्रकार दिखाया जाताहै ? अ) गोलाकार आकृति ब) सीधी सरल रेखा स) त्रिकोण आकृति	1 अंक	उच्चस्तरीय चिंतन
10.	सेपान व्यूह की रचना किस प्रकार से दिखाया जाता है? अ) एक के बाद एक पंक्तियों में ब) गोलाकार पंक्तियों में स) त्रिकोण पंक्तियों में	1 अंक	



ARMY PUBLIC SCHOOL GWALIOR

CLASS - I

ACADEMIC SESSION 2021-22

WORKSHEET (SELF -ASSESSMENT)



Subject: Library

Assignment No. : 5

Allotment Date: 15 August 2021

S.NO	QUESTIONS	MARKS	NATURE
1	<p>Answer the following questions on the basis of the story ' A new way to fish ' given in the notes.</p> <p>Who met each other ?</p> <p>.....</p> <p>....</p> <p>.....</p> <p>.</p>	01	Comprehension
2	<p>What kind of day was it ?</p> <p>.....</p> <p>.....</p>	01	Analysis
3	<p>What was the fox carrying ?</p> <p>.....</p> <p>.....</p>	01	Comprehension
4	<p>What was the name of the story ?</p> <p>.....</p> <p>.....</p>	01	Comprehension
5	<p>Why was the fox lucky ?</p> <p>.....</p> <p>.....</p>	01	Understanding
6	<p>When did the bear go to fish ?</p> <p>.....</p> <p>.....</p>	01	Analysis
7	<p>How did the bear catch fish ?</p> <p>.....</p> <p>.....</p>	01	Understanding
8	<p>Where did the fox say that he caught them ?</p> <p>.....</p> <p>.....</p>	01	Analysis
9	<p>What happened to it ?</p> <p>.....</p> <p>.....</p>	01	Comprehension
10	<p>When did he pull up his tail ?</p> <p>.....</p>	01	Analysis