

ARMY PUBLIC SCHOOL GWALIOR
CLASS -II
ACADEMIC SESSION 2021-22
WORKSHEET (SELF –ASSESSMENT)



Subject: English
Allotment Date: 18 July 2021

Assignment No. : 4

S. NO.	QUESTIONS	MARKS 20	NATURE
1	<p>I. Fill in the blanks with (was, were):</p> <p>1. Yesterday, it raining heavily.</p> <p>2. Nitin and Shadabenjoying the movie last night..</p> <p>II. Fill in the blanks with suitable verbs.</p> <p>1. My granny me stories.</p> <p>2. A baker cakes.</p>	(4x1=4)	Information
2	<p>(a) Write the rhyming words used in the poem</p> <p>(The Magic Words).</p> <p>dear - ease -</p> <p>right - you -</p>	(4x0.5=2)	Understanding
3	<p>Answer the following questions.</p>		Interdisciplinary

	<p>(a). Name three little magic words.</p> <p>.....</p> <p>.....</p> <p>(b). What can be saved by saying ‘Sorry’?</p> <p>.....</p> <p>.....</p> <p>(c) What were the things required for baking a cake?</p> <p>.....</p> <p>.....</p>	(3x2=6)	
4	<p>Fill in the blanks.</p> <p>(a). The magic words work like a..... for me and you.</p> <p>(b). ‘Thanks’ shows you are</p> <p>(c) ‘Sorry’ changes ato a smile.</p> <p>(d) The magic words can open any door with</p>	(4x1=4)	Analytical Skill
5	<p>Match the following words with their meanings:</p> <p>COLUMN A. COLUMN B</p> <p>(a)ease thankful</p> <p>(b)grateful no difficulty</p>	(4x1=4)	Critical Thinking and Problem Solving

	(c) followed	tasty		
	(d) delicious	acted according to		



ARMY PUBLIC SCHOOL GWALIOR
CLASS -II
ACADEMIC SESSION 2021-22
WORKSHEET (SELF -ASSESSMENT)



Subject: Hindi
Allotment Date: 18 July 2021

Assignment No. : 4

सं या	प्रश्न	अंक	प्रकृति
प्र.1	म्नलिखित शब्दों के शब्दार्थ लिखो १ बगिया- २ खयाल- ३ सजधज - ४ उपहार -	4	बोधोत्क
प्र.2	सही उत्तर के सामने <input type="checkbox"/> लगाओ। १ बैंगन का क्या नाम था? (1) लालू <input type="checkbox"/> (2) गोलू (3) पीलू २ किसकी खाल छिल गई थी? (1) लौकी की (2) लालू की (3) गोलू की। <input type="checkbox"/> ३ उन्हें किसके आने की आहट सुनाई दी? (1) माली की <input type="checkbox"/> (2) किसान (3) मालिक की।	4	सूचक
प्र.3	कोष्ठक में से सही शब्द चुनकर वाक्य पूरे करो। ((क) रिमझिम सुबह से ही चहकतीरू ण्ण्ण रही है। (घूमध टहल) (ख) उसने गुलाबी घाघरा - चुनरी और रंग बिरंगी चूड़ियाँरू ण्ण्ण (डालीध पहनी) हैं। (ग) रिमझिम ने भैया को मिठाई ण्ण्ण 'घ' (खिलाईध पिलाई) (घ) गुड़िया लेकर रिमझिम बाहर भाग ण्ण्ण है (आतीध जाती)	3	अंतः विशयात्मक



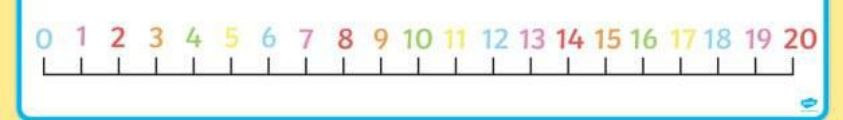
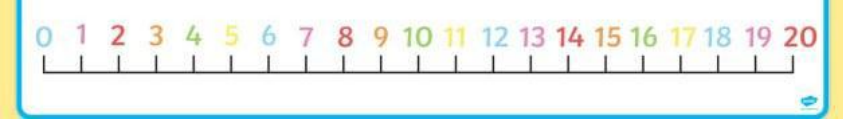
ARMY PUBLIC SCHOOL GWALIOR
CLASS -II
ACADEMIC SESSION 2021-22
WORKSHEET (SELF -ASSESSMENT)



Subject: Mathematics
Allotment Date: 18 July 2021

Assignment No. : 4

S. NO.	QUESTIONS	MARKS	NATURE
		20	
1	<p>Fill in the blanks:-</p> <ul style="list-style-type: none">• 3 tens - 1 ten = ___tens• 4 tens - ___tens = 1 tens• 7 tens - 2 tens = ___tens	3×1=3	Understanding
2	<p>Subtract:</p> <p>(a) $\begin{array}{r} 756 \\ - 432 \\ \hline \hline \end{array}$</p> <p>(b) $\begin{array}{r} 859 \\ - 301 \\ \hline \hline \end{array}$</p>	4×1=4	problem solving

	<p>(c) 5 8 3 (d) 9 4 2</p> <p>- 4 4 5 - 4 1 9</p> <p>_____ _____</p>		
3	<p>Match the correct answer:</p> <p>(a) 7+7+7 5×6</p> <p>(b) 4+4 3×7</p> <p>(c) 6+6+6+6+6 2×4</p>	3X1=3	Understanding
4	<p>Use number line to find:</p> <p>(a) 6X 3 = _____</p>  <p>(b) 4X4= _____</p> 	2X1=2	HOTS
5	<p>(A) There are 6 cars. Each car has 4 wheels. How many wheels are there altogether? Solve-</p> <p>(b) There are 62 fish in the store in the morning. Mr. Victor counted only 39 fish in the evening. How many were sold out? Solve-</p>	2X2.5=5	HOTS

6.	Fill in the blanks:- 1. 2 groups of 3 butterflies= 2 × _____ ----- 2. 3 groups of 5 flowers = _____×5 3. 4+4+4+4+4 = 5 × _____	3×1=3	information
----	---	-------	-------------



ARMY PUBLIC SCHOOL GWALIOR
CLASS -II
ACADEMIC SESSION 2021-22
WORKSHEET (SELF –ASSESSMENT)



Subject: EVS
Allotment Date: 18 July 2021


Assignment No. : 4

S. No.	QUESTIONS	MARKS	NATURE
		20	
1	<p>Fill in the blanks</p> <p>(i) We find shopkeepers in a _____ .</p> <p>(ii) We keep our money safe in a _____ .</p> <p>(iii) _____ is place of worship for Hindus.</p> <p>(iv) The _____ maintains law and order in the society.</p>	4x1=4	Information
2	<p>Tick the correct answer-</p> <p>1. _____ is not a place of worship.</p> <p>(a) temple (b) Mosque (c) Churches (d) hospital</p> <p>2. _____ is a crowded place.</p> <p>(a) market (b) bus stand (c) hospital (d) Temple</p>	2x1=2	Understanding

3	<p>Write True or False:</p> <p>(a) A green grocer sells vegetable.</p> <p>(b) Muslims pray in a temple.</p> <p>(c) The holy book of Muslims is the Bible.</p> <p>(d) We call 100 for the police.</p>	4x1=4	Understanding
---	---	-------	---------------

4	<p>Draw any two places of worship-</p> <p>1.</p> <p>2.</p>	2x2=4	Interdisciplinary
---	---	-------	-------------------

<p>5</p>	<p>Answer the questions in one sentence</p> <p>(i) Where do we keep our money safe?</p> <p>Ans. _____</p> <hr/> <p>(ii) Who do the Christian worship?</p> <p>Ans. _____</p> <hr/> <hr/>	<p>2x1=2</p>	<p>Analytical Skill</p>
<p>6</p>	<p>Answer the following questions</p> <p>(i) How many holy books do the Hindus have? Name them..</p> <p>Ans. _____</p> <hr/> <p>(ii) Who is a postman?</p> <p>Ans- _____</p> <hr/> <hr/>	<p>2x2=4</p>	<p>HOTS</p>



ARMY PUBLIC SCHOOL GWALIOR
CLASS -II
ACADEMIC SESSION 2021-22
WORKSHEET (SELF –ASSESSMENT)




Subject: Computer
Allotment Date: 18 July 2021

Assignment No. : 4

S. NO.	QUESTIONS	MARKS	NATURE
1	<p>A. Tick <input type="checkbox"/> <input type="checkbox"/> the statements that are applicable for computers or human beings or both.</p> <p style="text-align: center;">HUMAN COMPUTER</p> <p>1. I can work tirelessly.</p> <p>2 . I can take decision on my own.</p> <p>3. I need electricity to work.</p> <p>4. I never forget anything.</p>	4x1=4	Information
2	<p>B. Write 'T' for True and 'F' for False statements:-</p> <p>1. A computer does not make any mistake ()</p> <p>2. A man gets tired after doing some work. ()</p> <p>3. A computer has feelings. ()</p> <p>4. A man cannot take decisions on his own. ()</p>	4x1=4	Understanding

3	<p>Identify who performs the following tasks:- 3.</p> <p>1. Taking decisions on its own.</p> <p>Ans- _____</p> <p>2. Working non-stop without getting tired.</p> <p>Ans-</p> <p>3. 5. Can work without electricity.</p> <p>Ans-</p> <p>4. Storing information for longer time .</p> <p>Ans-</p>	2X2=4	<p>Critical</p> <p>Thinking</p> <p>and</p> <p>Problem</p> <p>Solving</p>																								
4	<p>. Write any four differences between a Man and a Computer in the space given below.</p> <p>Ans-</p>	5X1=5	<p>understandi</p> <p>ng</p>																								
5.	<p>Fill in the blanks after unscrambling the words.</p> <p>1. A computer never gets</p> <table border="1" data-bbox="236 1216 1142 1256"> <tr> <td>D</td> <td>R</td> <td>I</td> <td>E</td> <td>T</td> </tr> </table> <p>Ans-_____</p> <p>2. A man can take his own</p> <table border="1" data-bbox="236 1458 1142 1498"> <tr> <td>C</td> <td>I</td> <td>D</td> <td>S</td> <td>N</td> <td>E</td> <td>I</td> <td>O</td> </tr> </table> <p>Ans-</p> <p>3. A computer cannot work without</p> <table border="1" data-bbox="236 1666 1142 1706"> <tr> <td>R</td> <td>L</td> <td>C</td> <td>E</td> <td>I</td> <td>T</td> <td>E</td> <td>I</td> <td>Y</td> <td>C</td> <td>T</td> </tr> </table> <p>Ans-</p>	D	R	I	E	T	C	I	D	S	N	E	I	O	R	L	C	E	I	T	E	I	Y	C	T	3x1=3	HOTS
D	R	I	E	T																							
C	I	D	S	N	E	I	O																				
R	L	C	E	I	T	E	I	Y	C	T																	







ARMY PUBLIC SCHOOL GWALIOR
CLASS -II
ACADEMIC SESSION 2021-22
WORKSHEET (SELF -ASSESSMENT)



Subject: G.K
Allotment Date: 18 July 2021

Assignment No. : 4

S. NO.	QUESTIONS	MARKS 20	NATURE
1	<p>Match the following-</p> <p>1. Sania Mirza - Shooting</p> <p>2. Abhinav Bindra Tennis</p> <p>3. Sushil Kumar cricket</p> <p>4. Virat Kohli Wrestling</p>	4x1=4	Information
2.	<p>Identify the following fish and write their name-</p> <p>1.  _____</p> <p>2.  _____</p> <p>3.  _____</p> <p>4.  _____</p>	4x1=4	Understanding

<p>3.</p>	<p>Answer in one word-(Fishy facts)</p> <p>1. This type of fish have beaks similar to bird's beak</p> <p>Ans-</p> <p>2. They have the ability to stun animals, by delivering electric shocks.</p> <p>Ans-</p> <p>3. This type of fish has a long snout that looks like a saw , which helps it dig the ocean floor for food.</p> <p>Ans-</p> <p>4.This type of fish can glide through the air for long distances with the help of its wing like fins.</p> <p>Ans-</p>	<p>4x1=4</p>	<p>Thinking skill</p>
<p>4</p>	<p>Fill in the blanks-</p> <p>1. I am a lamb . I when I call out to my friends.</p> <p>2. . I am duck..Guess my baby's name</p> <p>3. I am largest land animal on earth.....</p> <p>4 I am the smallest bird in the world.....</p> <p>5. I live in the deep sea. I have 8 arms. I am an</p>	<p>5x1=5</p>	<p>Problem solving</p>
<p>5</p>	<p>Identify the fish organs that</p> <p>1 helps them swim-</p> <p>2 help them breathing-</p> <p>3. provide them protection-</p>	<p>3x1=3</p>	<p>Critical thinking</p>



ARMY PUBLIC SCHOOL GWALIOR
CLASS -II
ACADEMIC SESSION 2021-22
WORKSHEET (SELF –ASSESSMENT)



Subject: Work Education
Allotment Date: 18 July 2021

Assignment No. : 4

S.N	QUESTIONS	MARKS	NATURE
1	How many semicircles are used in this video/ A. 5 B.3 C.6 D.2	1	Informative
2	How many animals are made in this video A.3 B4 C5 D6	1	Informative
3	How many oval shapes are used to make giraffe. A. 2 B4 C6 D5	1	Critical thinking
4	I croak. My baby is called a- A.Tadpole B. Larva C. calf D. None of these	1	understanding
5	I am the tallest animal in the world. I am a- A.Lion B.Giraffe C.Elephant D.None of these	1	Analytical
6	- I am duck..Guess my baby's name A.Duckling B.Cub C.Piglet D. None of these	1	informative
7	I am the smallest bird in the world_ A. <u>Humming bird</u> B. <u>Sparrow</u> C. <u>Parrot</u> D. None of these	1	understanding

8	.I flutter among flowers and feed on nectar. I was a caterpillar before I became a- A.Housefly B Dragonfly C Butterfly D None of these	1	Problem solving
9	I live in the deep sea. I have 8 arms. I am an <u>Octopus</u> . A. TRUE B FALSE	1	Critical thinking
10	.i hiss and coil and can be very long. Who am i? A. Snake B.Lizard C Crocodile D. None of these	1	understanding



ARMY PUBLIC SCHOOL GWALIOR
CLASS -II
ACADEMIC SESSION 2021-22
WORKSHEET (SELF –ASSESSMENT)



Subject: Art Education
Allotment Date: 18 July 2021

Assignment No. : 4

S.N	QUESTIONS	MARKS	NATURE
1	. _____ are obtained by mixing two primary colours. A. Neutrals B. Tints C. Secondary colours D. Shades	1	Information
2	Colours that go with all colour plans white, black, gray and brown are called _____. A. Neutrals B. Tints C. Secondary colours D. Shades	1	Information
3	What words are used to describe colour temperature? A. Light and Dark B. Hot and Cold C. Black and White D. Warm and Cool	1	Understanding
4	Secondary colours are created by mixing two _____. A. neutral colours B. complementary colours C. primary colours D. intermediate or Tertiary colours	1	Observation

5	<p>Colour is _____.</p> <p>A. a design principle</p> <p>B. an element of art</p> <p>C. a value</p> <p>D. none of the above</p>	1	Information
6	<p>Colours that are across from each other on the colour wheel are called _____.</p> <p>A. intermediate or tertiary colours</p> <p>B. analogous colours</p> <p>C. colour triad</p> <p>D. complementary colours</p>	1	Critical thinking
7	<p>All colours are made from red, blue, and yellow.</p> <p>A. True</p> <p>B. False</p>	1	Understanding
8	<p>Blue, green and purple are cool colours.</p> <p>A. True</p> <p>B. False</p>	1	Understanding
9	<p>What colour is the result of mixing red + yellow + blue?</p> <p>A. Violet (Purple)</p> <p>B. Orange</p> <p>C. Brown</p> <p>D. Green</p>	1	Analytical skill
10	<p>Purple is an example of a primary colour.</p> <p>A. True</p> <p>B. False</p>	1	Information

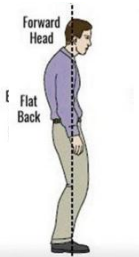


ARMY PUBLIC SCHOOL GWALIOR
CLASS -II
ACADEMIC SESSION 2021-22
WORKSHEET (SELF –ASSESSMENT)



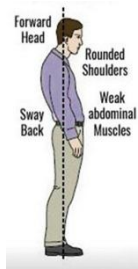
Subject: Health and Physical Education
Allotment Date: 18 July 2021

Assignment No. : 4

S.no	Questions	Nature	Marks	
1.	Fill in the blanks _____ exercise make you happier. a) Walking b) Running c) Jumping d) Sprinting	Informative	10 x 1 = 10	
2.	_____ is the method of travelling on land. a) Walking b) Sprinting c) Jumping d) Running	Informative		
3.	Jumping helps in improving of _____. a) Sense of balance b) Thinking power c) Mental health d) None of the above	Understanding		
True False				
4.	Does walking improves your concentration.	Analytic skill		
5.	We have to use both feet while running.	Understanding		
6.	Jumping helps to stimulate metabolism.	Informative		
MCQs				
7.	Which is the best posture of standing. a) 	Analytic skill		

b)

c)



8. Which is the best sitting position?

- a) Straight leg and backbone sitting
- b) Backbone folded sitting
- c) Leg folded sitting
- d) All of the above

9. Which exercise helps in increasing oxygen capacity.

- a) Jumping
- b) Running
- c) Sprinting
- d) Walking

10. Which exercise help you feel calmer?

- a) Running
- b) Jumping
- c) Skipping
- d) Walking

Analytic skill

Understanding

Informative



ARMY PUBLIC SCHOOL GWALIOR
CLASS -II
ACADEMIC SESSION 2021-22
WORKSHEET (SELF –ASSESSMENT)



Subject: Discipline
Allotment Date: 18 July 2021

Assignment No. : 4

S.No	Question	Marks	Nature
1.	<p>Fill in the blanks-</p> <p>i. The _____ Prince.(Happy, Sad)</p> <p>ii. His eyes were made of _____(beautiful, ugly) blue sapphire_____.</p> <p>iii.His statue was covered with beautiful_____ (gold/silver)leaves.</p> <p>iv. One day a little swallow flew over the_____ (city/town).</p> <p>v. Real happiness is found in making others_____ (happy/sad).</p> <p>vi. Swallow flew in freezing _____ (cold/hot) winter.</p> <p>vii. There was a _____ (poor/rich) writer .</p>	07	Knowledge & Understanding
2.	<p>Write T for true and F for false-</p> <p>i. The prince was always happy.</p> <p>ii. The people made a big statue of the happy prince.</p> <p>iii. The swallow helped prince</p> <p>iv. The swallow was kind.</p>	02	Thinking Skills
3.	<p>Tick the correct answer-</p> <p>This story is about-</p> <p>i. Kindness</p> <p>ii. Happiness</p>	01	Thinking Skills



ARMY PUBLIC SCHOOL GWALIOR
CLASS -II
ACADEMIC SESSION 2021-22
WORKSHEET (SELF –ASSESSMENT)



Subject: Music
Allotment Date: 18 July 2021

Assignment No. : 4

S. NO.	प्रश्न	अंक	प्रकृति
1	ऋतु कितने प्रकार की होती है? (अ) 4 (ब) 2 (स) 6	2 marks	बोधात्मक
2	करमा नृत्य कब किया जाता है? (अ) वर्षा ऋतु को छोड़कर सभी ऋतुओं में (ब) बसंत ऋतु को छोड़कर सभी ऋतुओं में (स) शरद ऋतु को छोड़कर सभी ऋतुओं में	2 marks	उच्चस्तरीय चिंतन
3	रतबाई नृत्य किस ऋतु में किया जाता है? (अ) बसंत ऋतु (ब) वर्षा ऋतु (स) शरद ऋतु	2 marks	सूचनापरक
4	बाना नृत्य कब किया जाता है? (अ) बसंत ऋतु (ब) वर्षा ऋतु (स) ग्रीष्म ऋतु	2 marks	उच्चस्तरीय चिंतन
5	जादुर नृत्य किस ऋतु के दौरान किया जाता है? (अ) बसंत ऋतु (ब) वर्षा ऋतु (स) शरद ऋतु	2 marks	अंतःविषयात्मक
6	दलखाई नृत्य किस ऋतु में किया जाता है? (अ) बसंत ऋतु की विदाई शरद ऋतु के	2 marks	उच्चस्तरीय चिंतन

	<p>स्वागत पर</p> <p>(ब) शरद ऋतु की विदाई बसंत ऋतु के स्वागत पर</p> <p>(स) ग्रीष्म ऋतु की विदाई बसंत ऋतु के स्वागत पर</p>		
7	<p>डफ नृत्य किस ऋतु के दौरान किया जाता है?</p> <p>(अ) बसंत ऋतु</p> <p>(ब) शरद ऋतु</p> <p>(स) वर्षा ऋतु</p>	2 marks	गहनसोचऔर समस्यासमाधान
8	<p>सैला नृत्य किस ऋतु में किया जाता है?</p> <p>(अ) शरद ऋतु</p> <p>(ब) ग्रीष्म ऋतु</p> <p>(स) बसंत ऋतु</p>	2 marks	उच्चस्तरीय चिंतन
9	<p>सर्वश्रेष्ठ ऋतु का राजा कौन है?</p> <p>(अ) ग्रीष्म ऋतु</p> <p>(ब) बसंत ऋतु</p> <p>(स) वर्षा ऋतु</p>	2 marks	उच्चस्तरीय चिंतन
10	<p>बिहू नृत्य किस ऋतु में किया जाता है?</p> <p>(अ) ग्रीष्म ऋतु में अप्रैल के महीने में</p> <p>(ब) बसंत ऋतु में अप्रैल के महीने में</p> <p>(स) वर्षा ऋतु में अप्रैल के महीने में</p>	2 marks	गहनसोचऔर समस्यासमाधान



ARMY PUBLIC SCHOOL GWALIOR
CLASS -II
ACADEMIC SESSION 2021-22
WORKSHEET (SELF –ASSESSMENT)



Subject: Library
Allotment Date: 18 July 2021

Assignment No. : 4

S.NO	QUESTIONS	MARKS	NATURE
1	<p>Answer the following questions on the basis of the story 'What a Fright !' given in the notes.</p> <p>Where was Tom on holiday?</p> <p>Ans-.....</p> <p>.....</p>	01	Understandi ng
2	<p>Why did he sit on the chair?</p> <p>Ans-.....</p> <p>.....</p>	01	Analysis
3	<p>What kind of ship did he see?</p> <p>Ans-.....</p> <p>.....</p>	01	Information
4	<p>How many pirates came ashore?</p> <p>Ans-.....</p> <p>.....</p>	01	Comprehen sion
5	<p>What did they do to Tom?</p> <p>Ans-.....</p> <p>.....</p>	01	Analysis
6	<p>What kind of man was the pirate chief?</p> <p>Ans-.....</p> <p>.....</p>	01	Comprehen sion
7	<p>What orders did he give ?</p>	01	Information

		
8	Where did Tom wake up ? Ans-.....	01	Understandi ng
9	What had really happened? Ans-.....	01	Analysis
10	What was the name of the story? Ans-.....	01	Comprehen sion

