



ARMY PUBLIC SCHOOL GWALIOR

CLASS - I

ACADEMIC SESSION 2021-22

WORKSHEET (SELF –ASSESSMENT)




Subject: English

Assignment No. : 4

Allotment Date: 18 July 2021

S.N	QUESTIONS	MARKS	NATURE
1	Write two words from the poem that rhyme with (i) new -- (ii) fine—	2X1=2	Information
2	Write True or False for the given statements. 1.The child had a box of chocolates. () 2.The child's friend said, "It is fine." () 3.Now they can share the crayon.() 4.The child's friend broke the crayon in two pieces. ()	4X1=4	Understanding
3	Write any three sentences about your friend . (i) (ii) (iii)	1x3=3	Interdisciplinary
4	What do you think friends are for? Discuss with your partner Two things that friends should do together	1x3=3	Analytical Skill

<p>5</p>	<p>Correct the following spellings :</p> <p>(i) beacuse _____</p> <p>(ii) hlfa _____</p>	<p>2X1=2</p>	<p>Critical Thinking and Problem Solving</p>
<p>6</p>	<p>Make the sentences by using the following words :</p> <p>(i) Share : _____</p> <p>(ii) Half : _____</p>	<p>2X1=2</p>	<p>HOT</p>
<p>7</p>	<p>Write word meanings of given words</p> <p>1. straight:</p> <p>2. lent:</p>	<p>2X1=2</p>	<p>Evaluation</p>
<p>8</p>	<p>Answer the questions in a complete sentence.</p> <p>1.What did the child lend? Ans.....</p> <p>2.Was the child happy or sad? Ans.....</p>	<p>2X1=2</p>	<p>Communication Skills</p>



ARMY PUBLIC SCHOOL GWALIOR
CLASS - I









ACADEMIC SESSION 2021-22
WORKSHEET (SELF -ASSESSMENT)

Subject: Hindi

Assignment No. : 4

Allotment Date: 18 July 2021

संख्या	प्रश्नउत्तर	अंक	प्रकृति
प्र.1	<p>सही वाक्यों के सामने सही (v) व गलत के सामने गलत (x) का निशान लगाएं।</p> <p>क. एक दिन मीरा और दीपा खेलने गईं।()</p> <p>ख. दीपा भागकर घर आ गईं।()</p> <p>ग. तुमरी दुल्हन बड़ी चुलबुली थी।()</p> <p>घ. झुमरी बिलकुल साफ-सुथरी नहीं रहती थी।()</p>	1x4=4	बोधार्थक
प्र.2	<p>आ,इ,ई तथा उ की मात्रा लगाकर निम्नलिखित के शब्द बनाओ।</p> <p></p> <p></p> <p></p> <p></p>	1x4=4	गहन सोच और समस्या समाधान

<p>प्र.3</p>	<p>खाने-पीने की ऐसी किन्हीं चार चीजों के नाम लिखो जिनमे आ, इ, ई तथा उ की मात्रा हो</p> <p>.....</p> <p>.....</p> <p>.....</p> <p>.....</p>	<p>2x1=2</p>	<p>अंतःविषयात्मक</p>
<p>प्र.4</p>	<p>निम्नलिखित प्रश्नों के उत्तर लिखो:</p> <p>क.जिन शब्दों से उनके स्त्री या पुरुष जाति के होने का पता लगे उन्हें..... कहत हैं।</p> <p>ख.शब्द के जिस रूप से उसकी संख्या का बोध हो उसे.....कहते हैं।</p>	<p>2x1=2</p>	<p>सूचनापरक</p>
<p>प्र.5</p>	<p>निम्नलिखित चित्रों को पहचानकर उनका वचन लिखो (एकवचन अथवा बहुवचन):</p> <p></p> <p></p>	<p>2x1=2</p>	<p>उच्चस्तरीयचिंतन</p>
<p>प्र.6</p>	<p>निम्नलिखित प्रश्नों के उत्तर दीजिए:</p> <p>क.झुमरी तीन गिलास क्या पी गई?</p> <p>.....</p> <p>ख.मीरा कैसी लड़की थी?</p> <p>.....</p>	<p>2x2=4</p>	<p>विश्लेषणात्मक</p>

प्र.7	निम्नलिखित को जोड़कर शब्द बनाओ: मक जाड़ी जक ताली	2x1=2	भाषायीकौशल
-------	--	-------	------------



ARMY PUBLIC SCHOOL GWALIOR

CLASS - I

ACADEMIC SESSION 2021-22

WORKSHEET (SELF -ASSESSMENT)

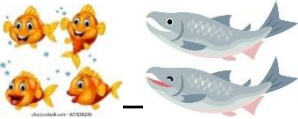








Subject: Mathematics

Assignment No. : 4


Allotment Date: 18 July 2021

S.NO.	QUESTIONS	MARKS	NATURE
1	Write the number names of the following: 18= _____ 15= _____	2x1=2	Information
2	Fill in the placeholders: 5-0=____ __-0=8	2x1=2	Understanding

<p>3</p>	<p>Subtract the objects and fill in the space provided:</p>  <p>___ - ___ = 2</p>  <p>___ - 3 = ___</p>   <p>6 - ___ = ___</p>	<p>3x1=3</p>	<p>Interdisciplinary</p>
<p>4</p>	<p>Do solve the following:</p>   <p>___ - 0 = ___</p>  <p>0 + ___ = ___</p>	<p>3X1=3</p>	<p>Analytical Skill</p>

<p>5</p>	<p>Write the expanded form of the following numbers:</p> <p>17= ___ten___ones</p> <p>20= ___ten___ones</p>	<p>2X1=2</p>	<p>Critical Thinking and Problem Solving</p>
<p>6</p>	<p>Answer the following questions:-</p> <p>Circle all the numbers which came between 9 and 20.</p> <p>3,5,6,10,16,14,17,19,6,20,21,11</p> <p>How many doors and windows are there in your house?</p> <p>Count and write the total number of the mal together.</p> <p>Doors ___</p> <p>+Windows ___</p> <p>_____</p> <p>_____</p>	<p>2X1=2</p>	<p>HOT</p>

<p>7</p>	<p>Solve the following:</p> <p>15(iii)13 +4+3 _____ _____</p> <p>16(iv)12 -6-6 _____ _____</p>	<p>4x1=4</p>	<p>Evaluation</p>
<p>8</p>	<p>Solve the following word problems:-</p> <p>There are 9 birds sitting on one branch of a tree. 6 birds are sitting on another branch. Find the total number of birds sitting on the tree.</p> <p>+ _____ <input type="text"/> <input type="text"/></p> <p>Simran needs 7 books. She has 3 books. How many books should she buy more?</p> <p>- <input type="text"/> <input type="text"/> _____</p>	<p>2x1=2</p>	<p>Communication Skills</p>



ARMY PUBLIC SCHOOL GWALIOR

CLASS - I

ACADEMIC SESSION 2021-22

WORKSHEET (SELF -ASSESSMENT)



Subject: EVS

Assignment No. : 4

Allotment Date: 18 July 2021

S.N	QUESTIONS	MARKS	NATURE
1	Fill in the blanks by choosing the correct options : 1.A monkey lives on a_____. 2.A hive is where_____live.	2X1=2	Information
2	Q.1.Where do we cook food ? Ans..... Q.2.How does a house protects us? Ans..... Q.3.Which room do we use to relax in our house. Ans.....	3X1=3	Understanding
3	Q. Where does Firoze keep her fishes? Ans.....	1X1=1	Interdisciplinary

<p>4</p>	<p>Match the following:</p> <p>1. Rabbit Stable 2.Horse Coop 3 Hen Burrow</p>	<p>3X1=3</p>	<p>Analytical Skill</p>
<p>5</p>	<p>Tick(√) the correct options:</p> <p>A cat's baby in called a_____.</p> <p>a. Puppy b. calf c. kitten</p> <p>A dog's house is called a_____.</p> <p>a. Shed b. kennel c. stable</p> <p>A shed is where a _____lives.</p> <p>a. Cow b. hen c. horse</p>	<p>3X1=3</p>	<p>Critical Thinking and Problem Solving</p>
<p>6</p>	<p>Q.1.Where do we cook food? Ans.....</p> <p>Q.2.How does a house protects us? Ans.....</p> <p>Q.3.Which room do we use to relax in our house. Ans.....</p> <p>Q.4. Name two animals which cannot be kept as pets. Ans.....</p>	<p>3X2=2</p>	<p>HOT</p>

8	Fill in the blanks .Choose the words from the given box. {Puppy, bread, tail, dog, master, milk} I am a..... My baby is called a..... I drink..... I eat..... When I am happy, I wag my..... I love my.....a lot.	6X1=6	Communication Skills
----------	--	-------	-----------------------------



ARMY PUBLIC SCHOOL GWALIOR

CLASS - I

ACADEMIC SESSION 2021-22

WORKSHEET (SELF –ASSESSMENT)



Subject: Computer

Assignment No. : 4

Allotment Date: 18 July 2021

S. NO.	QUESTIONS	MARKS	NATURE
1	<p>A. <u>Tick the correct answer</u></p> <p>1. Computer can solve for you. Sums Paint Drawing</p> <p>2. You can listen to songs with the help of attached to the computer. Keyboard Speakers Mouse</p> <p>3. Computer can type for you. Music Words Games</p> <p>4. Computers help to send and receive around the world. Games Speakers Messages</p>	0.5X4=2	Information
2	<p><u>Fill in the blanks</u></p> <p>1. You can play many _____ on a computer.</p> <p>2. You can type words and numbers on a computer using _____:</p> <p>3. You can _____ and paint objects using mouse.</p> <p>4. You can listen to _____ on a computer.</p>	1X4=4	Understanding

5	<p><u>Write 'T' for True and 'F' for False statements:-</u></p> <ol style="list-style-type: none">1. Computers can walk from one place to another. ()2. Computers cannot draw pictures. ()3. Computers can type words and sentences. ()4. Computers can show movies ()	1X4=4	Critical Thinking and Problem Solving



ARMY PUBLIC SCHOOL GWALIOR

CLASS -I



ACADEMIC SESSION 2021-22

WORKSHEET (SELF -ASSESSMENT)

Subject: G.K

Assignment No. : 4

Allotment Date: 18 July 2021

S.N	QUESTIONS	MARKS	NATURE
1	<p>Choose the correct word for the following:</p> <p>When you are asking for something, you should say_____.</p> <p>A)Sorry B) please C) thank you</p> <p>When you want someone's attention, you should say_____.</p> <p>A)Excuse me B) thank you C)sorry</p>	2X1=2	Information

<p>2</p>	<p>Complete the following facts:</p> <p>The national anthem of India is</p> <p>_____</p> <p>(ii)The national emblem of India consists of _____ lions.</p> <p>_____</p> <p>The national capital of India is</p> <p>_____</p>	<p>3X1=3</p>	<p>Understanding</p>
<p>3</p>	<p>Write any three animals name who can live both on land and in water</p> <p>also:</p> <p>.....</p> <p>.....</p> <p>.....</p>	<p>3X1=3</p>	<p>Interdisciplinary</p>

<p>4</p>	<p>Complete the following words by using the hints given below:</p> <p>The largest animals on the Earth</p> <p>B _ U _ W _ _ E</p> <p>A _____ has a numbrella like body.</p> <p>J _ LL _ F _ H</p> <p>The _____ makes its nest by stitching large leaves with silk thread, plant fibres or stolen household thread.</p> <p>T _ IL _ B _ D</p>	<p>3X1=3</p>	<p>Analytical</p> <p>Skill</p>
<p>5</p>	<p>Which animals are called domestic animals? Name any four domestic animals.</p> <p>_____</p> <p>_____</p> <p>_____</p> <p>_____</p>	<p>2X1=2</p>	<p>Critical</p> <p>Thinking and</p> <p>Problem</p> <p>Solving</p>

<p>6</p>	<p>Have you seen any bird's nest? Write the names of the birds whose nests you have seen.</p> <p>_____</p> <p>_____</p> <p>_____</p> <p>_____</p>	<p>2X1=2</p>	<p>HOT</p>
<p>7</p>	<p>Answer the following questions:</p> <p>Which bird build sits nest on the highest branch of a tree?</p> <p>_____</p> <p>Which means of transportism a deof metal and flies in the sky?</p> <p>_____</p>	<p>2X1=2</p>	<p>Evaluation</p>
<p>8</p>	<p>Write the following:</p> <p>Name of any two aquatic animals</p> <p>_____, _____</p> <p>Name of any two birds</p> <p>_____, _____</p> <p>Name of any two means of transport</p> <p>_____, _____</p>	<p>3X1=3</p>	<p>Communication Skills</p>



ARMY PUBLIC SCHOOL GWALIOR

CLASS -I

ACADEMIC SESSION 2021-22


WORKSHEET (SELF -ASSESSMENT)



Subject: Work Education

Assignment No. : 4

Allotment Date: 18 July 2021

S.no	Questions	Marks
1.	<p>Count the fingers and tell the number showing in the picture?</p>  <p>5</p> <p>7</p> <p>9</p>	3 x 2 = 6
2.	<p>Finger puppets can be used for ?</p> <p>To tease others</p> <p>To learn counting using fingers</p> <p>Just for playing in playground</p>	

3. Why do we use puppets?

For teaching only

for good visual representation to use while singing, dancing and story telling.

Just for story telling

4. Write any four materials names which are required to make hand puppets.

4x1=4

--	--	--



ARMY PUBLIC SCHOOL GWALIOR

CLASS - I

ACADEMIC SESSION 2021-22

WORKSHEET (SELF -ASSESSMENT)



Subject: Art Education

Assignment No. : 4

Allotment Date: 18 July 2021

S.N	QUESTIONS	MARKS	NATURE
1	Difference between Primary, Secondary & Tertiary Colours?	2X1=2	Information
2	What are Cool & Warm Colours?	2X1=2	Information
3	Yellow, red, and _____ are Warm colours. <ul style="list-style-type: none">• white• orange	2X1=2	

	<p>blue Colour is an element of _____</p> <ul style="list-style-type: none"> • art • book • study 		
4	<p>LADY BIRD- Draw & Colour (Draw hands, legs, eyes & mouth & colour it)</p>	1X4=4	<p>Drawing & colouring skill</p>



ARMY PUBLIC SCHOOL GWALIOR



CLASS -I

ACADEMIC SESSION 2021-22

WORKSHEET (SELF –ASSESSMENT)

Subject: Health and Physical Education

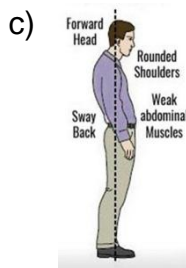
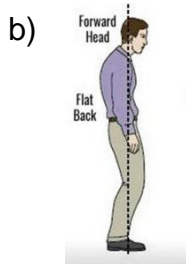
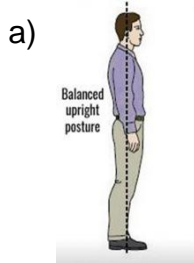
Assignment No. : 4

Allotment Date: 18 July 2021

S.no	Questions	Nature	Marks
1.	Fill in the blanks _____exercise make you happier. a) Walking b) Running c) Jumping d) Sprinting	Informative	10 x 1 = 10
2.	_____ is the method of travelling on land. a) Walking b) Sprinting c) Jumping d) Running	Informative	
3.	Jumping helps in improving of _____. a) Sense of balance b) Thinking power c) Mental health d) None of the above	Understanding	
4.	True False Does walking improves your concentration.	Analytic skill	
5.	We have to use both feet while running.	Understanding	
6.	Jumping helps to stimulate metabolism.	Informative	

MCQs

7. Which is the best posture of standing.



Analytic skill

8. Which is the best sitting position?

- a) Straight leg and backbone sitting
- b) Backbone folded sitting
- c) Leg folded sitting
- d) All of the above

Analytic skill

9. Which exercise helps in increasing oxygen capacity.

- a) Jumping
- b) Running
- c) Sprinting
- d) Walking

Understanding

10. Which exercise help you feel calmer?

- a) Running
- b) Jumping
- c) Skipping

informative

d) Walking



ARMY PUBLIC SCHOOL GWALIOR

CLASS - I



ACADEMIC SESSION 2021-22

WORKSHEET (SELF -ASSESSMENT)


Subject: Discipline

Assignment No. : 4

Allotment Date: 18 July 2021

S. No	Question	Marks	Nature
1.	<p>Fill in the blanks-</p> <p>i. The _____ Prince.(Happy, Sad)</p> <p>ii. His eyes were made of _____(beautiful, ugly) blue sapphire_____.</p> <p>iii.His statue was covered with beautiful_____ (gold/silver)leaves.</p> <p>iv. One day a little swallow flew over the_____ (city/town).</p> <p>v. Real happiness is found in making others_____ (happy/sad).</p> <p>vi. Swallow flew in freezing _____ (cold/hot) winter.</p> <p>vii. There was a _____ (poor/rich) writer .</p>	07	Knowledge & Understanding
2.	<p>Write T for true and F for false-</p> <p>i. The prince was always happy.</p> <p>ii. The people made a big statue of the happy prince.</p> <p>iii. The swallow helped prince</p>		Thinking Skills

	iv. The swallow was kind.	02	
3.	Tick the correct answer- This story is about- i. Kindness ii. Happiness	01	Thinking Skills



ARMY PUBLIC SCHOOL GWALIOR

CLASS - I



ACADEMIC SESSION 2021-22

WORKSHEET (SELF -ASSESSMENT)

Subject: Music

Assignment No. : 4

Allotment Date: 18 July 2021

S. NO.	प्रश्न	अंक	प्रकृति
1.	कथक नृत्य में तीन ताल का पूर्ण परिचय क्या है ? (अ) मात्रा- 16 विभाग 4खाली-1ताली-3 (ब) मात्रा- 8 विभाग-2खाली-1ताली-1 (स) मात्रा- 5विभाग-4खाली-6ताली-7	2 marks	बोधार्थक
2.	कहरवा ताल पूर्ण परिचय क्या है? (अ) मात्रा- 7विभाग-4खाली-5 ताली-9 (ब) मात्रा- 8 विभाग-2खाली-1ताली-1 (स) मात्रा- 5 विभाग-4 खाली-3ताली-7	2 marks	
3.	दादरा ताल का पूर्ण परिचय क्या है ? (अ) मात्रा- 8 विभाग-2खाली-1 ताली-1 (ब) मात्रा- 6विभाग-2 ताली-1खाली-1 (स) मात्रा- 0 विभाग-7 ताली-5खाली-0	2 marks	सूचनापरक
4.	झपताल में कितनी मात्रा होती है ? (अ) मात्रा-12 (ब) मात्रा-13 (स) मात्रा-10	2 marks	
5.	झपताल का पूर्ण परिचय क्या है ? (अ) मात्रा-10 विभाग- 4 खाली-1 ताली-3(ब) मात्रा -16 विभाग- 3 खाली-1 ताली-0(स) मात्रा- 2 विभाग- 4 खाली-1 ताली-3	2 marks	अंतःविषयात्मक

6	<p>दादरा ताल के गिनती के साथ बोल को क्या कहते हैं ?</p> <p>(अ) -धाधीना धातीना 1 2 3 4 5 6</p> <p>(ब) -धागेनाती नाकधिन 1 2 3 4 5 6 7 8</p> <p>(स) -तीतीना धीना धीना 1 2 3 4 5 6 7</p>	2 marks	
7.	<p>8 मात्रा वाली ताल को क्या कहते हैं ?</p> <p>(अ) -धागेनाती नाकधिन 1 2 3 4 5 6 7 8</p> <p>(ब) -धाधीना धातीना 1 2 3 4 5 6</p> <p>(स)-धागे नाती नाकाधिन 1 2 3 4 5 6 7 8</p>	2 marks	गहनसोचऔर समस्यासमाधान
8.	<p>तीन ताल में 1 से 16 तक मात्रा लिखने का तरीका क्या है ?</p> <p>(अ) -1 2 3 4 5 6 7 8 9 10 11 12 13 14 15 16</p> <p>(ब) -1 2 3 4 5 6 7 8 9 10 11 12 13 14 15 16</p> <p>(स) -1 2 3 4 5 6 7 8 9 10 11 12 13 14 15 16</p>	2 marks	
9.	<p>दादरा ताल में खाली किस मात्रा पर आती है ?</p> <p>(अ) मात्रा-4</p> <p>(स) मात्रा-5</p> <p>(ब) मात्रा- 6</p>	2 marks	उच्चस्तरीय चिंतन
10.	<p>तीन ताल में ताली किस मात्रा पर आती है ?</p> <p>(अ) मात्रा-4, 6, 7</p>	2 marks	

	(ब) मात्रा-1, 3, 5 (स) मात्रा-1, 5, 13		
--	---	--	--



ARMY PUBLIC SCHOOL GWALIOR

CLASS -I

ACADEMIC SESSION 2021-22

WORKSHEET (SELF –ASSESSMENT)



Subject: Library

Assignment No. : 4

Allotment Date: 18 July 2021

S.N O	QUESTIONS	MARK S	NATURE
1	<p>Answer the following questions on the basis of the story ‘ The Miser’s Gold ‘ given in the notes.</p> <p>What was the name of the story ?</p> <p>.....</p> <p>.....</p> <p>.....</p> <p>.....</p>	01	Comprehensi on
2	<p>Where did the old man live?</p> <p>.....</p> <p>.....</p>	01	Analysis
3	<p>What did he do every night?</p> <p>.....</p> <p>.....</p>	01	Comprehensi on
4	<p>Who happened to pass the cottage?</p> <p>.....</p> <p>.....</p>	01	Analysis

5	What did he see through the window?	01	Understandin g
6	What did the robber do?	01	Comprehensi on
7	What caused the gold to fall out of the bag?	01	Understandin g
8	Why could he not find the lost money?	01	Analysis
9	When did the fairy visit the forest?	01	Comprehensi on
10	What did she do to the gold coins?	01	Analysis