

**ARMY PUBLIC SCHOOL GWALIOR**  
**CLASS -V**  
**ACADEMIC SESSION 2021-22**  
**WORKSHEET (SELF –ASSESSMENT)**



**Subject: English**  
**Allotment Date: 15 June 2021**

**Assignment No. : 3**

S. NO.	QUESTIONS	MARKS	NATURE
1	What changes do we experience on arrival of rainy season?	2	Information
2	Mohit was rewarded and not punished by the teacher on not attending the assembly. Why?	2	Understanding
3	Cleanliness is next to Godliness? Explain.	2	Interdisciplinary
4	Fill in the blanks by forming abstract nouns of the words give in the bracket: 1) Modern _____(invent) have made life easy. 2) Our _____(happy) knew no bounds when India won the match.	2	Analytical Skill
5	How can we stand against the global trash problem in order to keep our planet clean and healthy?	2	Critical Thinking and Problem Solving
6	Why keeping our surrounding clean is important.? Write any 2 ways by which we can keep our surrounding clean.	3	HOT
7	Answer the following questions briefly. i) Why does the rain seem beautiful to the poet? ii) How did the teacher appreciate Mohit?	4	Evaluation
8	Most people like the rainy season but some do not. Explain it by giving examples.	3	Communication Skills



**ARMY PUBLIC SCHOOL GWALIOR**  
**CLASS -V**  
**ACADEMIC SESSION 2021-22**  
**WORKSHEET (SELF -ASSESSMENT)**




**Subject: Hindi**  
**Allotment Date: 15 June 2021**

**Assignment No. : 3**

क्र०	प्रश्न	अंक	प्रश्न का प्रकार
1.	<p>प्र०1. निम्नलिखित प्रश्नों के सही उत्तर के सामने सही का निशान लगाओ :</p> <p>1. ' घटा घिरी झूम के ' का अर्थ है -</p> <p>क. काली - काली घटाएँ आ रही हैं । <input type="checkbox"/></p> <p>ख. घटाएँ मस्ती में डूबी चली आ रही हैं । <input type="checkbox"/></p> <p>ग. तेज गति से घनी घटाएँ इधर - उधर लहराती आ रही हैं । <input type="checkbox"/></p> <p>2. ' बूदों में पल रही ढेरों खुशहालियाँ ' का अर्थ है -</p> <p>क. बूदों में खुशहालियाँ पल रही हैं । <input type="checkbox"/></p> <p>ख. बूदें खुशहालियाँ लाएँगी । <input type="checkbox"/></p> <p>ग. घटा में बूदें छिपी हुई हैं । <input type="checkbox"/></p> <p>3.. ' पीपल के पत्ते भी बजा रहे तालियाँ ' का अर्थ है -</p> <p>क. पीपल के पत्ते हवा के कारण हिल - हिल रहे हैं और आवाज़ पैदा कर रहे हैं । <input type="checkbox"/></p> <p>ख. पीपल के पत्ते तालियाँ बजा रहे हैं । <input type="checkbox"/></p> <p>ग. पीपल के पत्ते तालियाँ बजाकर घटा का स्वागत कर रहे हैं । <input type="checkbox"/></p>	3	बोधात्मक
2.	<p>प्र०2. निम्न शब्दों के अर्थ लिखो :</p> <p>1. घनघोर - _____</p> <p>2. पर्वत - _____</p> <p>3. अधिकार - _____</p>	3	ज्ञानात्मक
3.	<p>प्र०3. निम्नलिखित शब्दों के दो - दो पर्यायवाची शब्द लिखो :</p> <p>1. तालाब - _____ , _____</p> <p>2. बिजली - _____ , _____</p> <p>3. घटा - _____ , _____</p> <p>4. पेड़ - _____ , _____</p>	4	सूचनात्मक

4.	प्र०4. निम्नलिखित संज्ञा शब्दों के सही भेद लिखो : 1. शोर - _____ 2. हिमालय - _____ 3. खुशहाली - _____ 4. पीपल - _____	4	रचनात्मक
5.	प्र०5. उचित शब्द से रिक्त स्थान भरो - 1. _____ पानी पी रहे हैं । ( बच्चा / बच्चे ) 2. मैंने _____ खाया । ( केले / केला ) 3. पेड़ों की _____ नीचे झुक रही है । ( शाखाएँ / शाखा )	3	विश्लेषणात्मक
6.	प्र०6. नीचे लिखे शब्दों का दो भिन्न अर्थों में वाक्य में प्रयोग करो - 1. घटा - 2. पर - 3. जान -	3	उच्चस्तरीय चिंतन



**ARMY PUBLIC SCHOOL GWALIOR**  
**CLASS -V**  
**ACADEMIC SESSION 2021-22**  
**WORKSHEET (SELF –ASSESSMENT)**



**Subject: Mathematics**  
**Allotment Date: 15 June 2021**

**Assignment No. : 3**

S. NO.	QUESTIONS	MARKS	NATURE
1	<b>Fill in the blanks:</b>  (i) $8703364 \div 10 =$ _____  (ii) $6582110 \times$ _____ $= 6582110$	<b>2x1=2</b>	Understanding
2	<b>Write 'True' or 'False':</b>  (i) $3800452 \times (0 \times 883245) = 0$ ( )  (ii) $7433925 \div 7433925 = 10$ ( )	<b>2x1=2</b>	HOTS
3	<b>Tick the correct answer from the given options:</b>  (a) When a number is divided by 1, the quotient is _____ (i) Number itself (ii) 1 (iii) 0 (iv) None of these  (b) Estimate the product of $6915 \times 410$ (i) 2700000 (ii) 2800000 (iii) 2900000 (iv) 2400000  (c) Estimate the quotient: $1825 \div 195$ (i) 30 (ii) 40 (iii) 10 (iv) 20  (d) Estimate the quotient: $84 \div 18$  (i) 2 (ii) 3	<b>5x1=5</b>	Critical thinking

	<p>(iii) 4 (iv) 4</p> <p>(e) Estimate the quotient: <math>694 \div 56</math></p> <p>(i) 13 (ii) 10 (iii) 11 (iv) 12</p>		
<b>4</b>	<p><b>Solve the following:</b></p> <p>(a) Multiply 6285 by 289. (b) Multiply 73162453 by 2435. (c) Divide 11682000 by 125 (d) Divide 6017635 by 580 (e) Divide 7654981 by 53</p>	<b>5x1=5</b>	Interdisciplinary
<b>5</b>	<p><b>Solve the following questions:</b></p> <p>(a) A tyre factory produces 6348 tyres a day. How many tyres will the factory produce in 460 days?</p> <p>(b) The cost of a flat is \$4218000. If there are 36 similar flats in a building, how much money will be collected by selling all the flats?</p> <p>(c) 470988 books are to be arranged equally in shelves. If 378 books are arranged in each shelf, how many shelves will be needed?</p>	<b>2x3 =6</b>	Problem Solving



**ARMY PUBLIC SCHOOL GWALIOR**  
**CLASS -V**  
**ACADEMIC SESSION 2021-22**  
**WORKSHEET (SELF –ASSESSMENT)**




**Subject: EVS**

**Assignment No. : 3**

**Allotment Date: 15 June 2021**

<b>S. NO.</b>	<b>QUESTIONS</b>	<b>MARKS</b>	<b>NATURE</b>
<b>1</b>	Netherland is known as the country of -----  There is no ----- force in the space.	2	Information
<b>2</b>	Give two methods to conserve energy.	2	Understanding
<b>3</b>	Name the organizations that help at the time of disaster.	2	Interdisciplinary
<b>4</b>	Define the terms:  1.Epicenter	4	Analytical Skill

	2. Friction		
5	Why are we able to walk on Earth?	3	HOT
6	How does Red Cross Society provide help at the time of a disaster?	2	Critical Thinking and Problem Solving
7	What is energy?	2	Evaluation
8	What are the steps we should take during an earthquake?	3	Communication Skills



**ARMY PUBLIC SCHOOL GWALIOR**  
**CLASS -V**  
**ACADEMIC SESSION 2021-22**  
**WORKSHEET (SELF –ASSESSMENT)**



**Subject: Computer**  
**Allotment Date: 15 June 2021**

**Assignment No. : 3**

S. NO.	QUESTIONS	MARKS	NATURE
1.	<p><b>Fill in the blanks:</b></p> <p>a. _____ language is also known as the low-level language.</p> <p>b. _____ converts the Assembly language program into machine language.</p>	2x1=2	Information
2.	<p><b>Write True or False:</b></p> <p>a. The people who write computer program are called users. ( )</p> <p>b. Machine language uses binary digits 0 and 1. ( )</p>	2x1=2	Understanding



3.	<p><b>Choose the correct answer: -</b></p> <p>a. The set of instructions given to a computer to perform a task</p> <p>Computer language</p> <p>Program</p> <p>Mnemonic quotes</p> <p>b. A language directly understood by computer is</p> <p>Machine language</p> <p>HLL</p> <p>Assembly language</p>	2x1=2	HOT
4.	<p><b>Answer the following question: -</b></p> <p>(i) Define Computer Language?</p> <p>.....</p> <p>.....</p> <p>.....</p> <p>(ii) Define Assembler.</p> <p>.....</p> <p>.....</p> <p>.....</p> <p>.....</p> <hr/>	4x1=4	Communic ation Skills

(iii) What is a program?

.....  
.....  
.....

---

(iv) Write the full form of the following terms:

1. BASIC-
2. LOGO-

.....  
.....  
.....

---




**ARMY PUBLIC SCHOOL GWALIOR**  
**CLASS -V**  
**ACADEMIC SESSION 2021-22**  
**WORKSHEET (SELF –ASSESSMENT)**



**Subject: G.K**

**Assignment No. : 3**

**Allotment Date: 15 June 2021**

S. NO	QUESTIONS	MARKS	NATURE
1	What is the full form of NASA ? Where is NASA located in the world? ----- -- -----	2 marks	Understanding , Information, interdisciplinary
2	Write the name of given table tennis player .Which country does he  play for? ----- --	2 marks	Information, Identification
3	In which language was the Ramayana first written? ----- --	1 marks	Information
4	On which continent will you find the rare black spider monkey? ----- --	1 marks	Information, Understanding

5	Who wrote the epic 'Mahabharata'?	1 marks	Information
	----- -		
6	Who was Karna's mother in Mahabharata?	1 marks	Information, Understanding , interdisciplinary
	----- -		

7.	Which is the smallest country in the world?	1 marks	Information, Understanding, interdisciplinary
	-----		
8.	With which sport is the Durand Cup associated?	1 marks	Information, Understanding, interdisciplinary
	-----		



**ARMY PUBLIC SCHOOL GWALIOR**  
**CLASS -V**  
**ACADEMIC SESSION 2021-22**  
**WORKSHEET (SELF –ASSESSMENT)**




**Subject: Art Education**  
**Allotment Date: 15 June 2021**


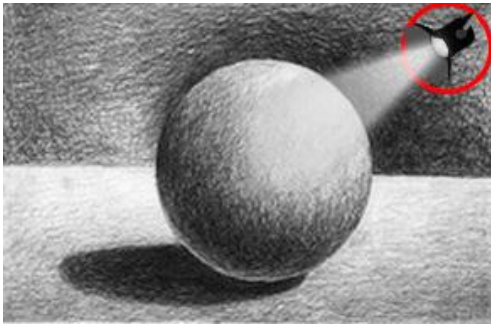
**Assignment No. : 3**



<b>S. NO.</b>	<b>QUESTIONS</b>	<b>MARKS</b>	<b>NATURE</b>
1	This technique creates a gradation from light to dark A. Burnishing B. Shading C. Hatching D. Scumbling	1 mark	Shading
2	The area on a surface which reflects the lightest is called: A. Shadow B. Highlight C. Value D. Hue	1 mark	Shading
3	Pencils today are made of what? A. Lead B. Graphite C. Charcoal D. Ink	1 mark	Shading
4	This drawing is called a:	1 mark	Shading



- A. Still life
- B. Landscape
- C. Gesture drawing
- D. Contour drawing

5	The softer the lead, the _____ the mark will be. <ul style="list-style-type: none"><li>A. Darker</li><li>B. Lighter</li><li>C. Wider</li><li>D. Softer</li></ul>	1 mark	Shading
6	Which pencil is capable of making the darkest values? <ul style="list-style-type: none"><li>A. HB</li><li>B. B</li><li>C. 2B</li><li>D. 4B</li></ul>	1 mark	Shading
7	What is the name of this shading technique?  <ul style="list-style-type: none"><li>A. Blending</li><li>B. Hatching</li><li>C. Cross-Hatching</li><li>D. Stippling</li></ul>	1 mark	Shading

8	<p>What type of scale shows the range of values from black to white and light to dark?</p>  <p>A. Monetary scale B. Proportion scale C. Pentatonic scale D. Value scale</p>	1 mark	Shading
9	<p>This is the</p>  <p>A. Highlight B. Core Shadow C. Cast Shadow D. Light Source</p>	1 mark	Shading
10	<p>The lighter the value, the lead in the pencil is ____.</p> <p>A. Hard B. Soft C. Dark D. Wide</p>	1 mark	Shading

11	<p>This is the</p>  <p>A. Light Source B. Highlight C. Core Shadow D. Cast Shadow</p>	1 mark	Shading
12	<p>This is the</p>  <p>A. Light Source B. Core Shadow C. Cast Shadow D. Highlight</p>	1 mark	Shading






**ARMY PUBLIC SCHOOL GWALIOR**  
**CLASS -V**  
**ACADEMIC SESSION 2021-22**  
**WORKSHEET (SELF –ASSESSMENT)**

**Subject: Work Education**  
**Allotment Date: 15 June 2021**  
**Tick the correct answer**

**Assignment No. : 3**

S. NO.	QUESTIONS	MARKS	NATURE
1	What is a puppet? A. The background, such as houses, trees, and flowers. B. A figure whose movements are controlled by someone through strings, rods, or hand movements. C. A place you can go to watch a play. D. The words spoken by characters.	1 Mark	Creativity
2	What are puppets generally called in India? A. Puipead B. Kathputli C. Puppet D. Kugutsu	1 Mark	Creativity
3	Which town hosts the largest puppet festival in every two years? A. Jaipur, Rajasthan, India B. Monkstown, Dublin, Ireland C. Charleville-Mezieres, France D. Osaka, Honsu Island, Japan	1 Mark	Creativity
4	Hand puppets are easier to operate, cheaper to make, and: A. More mobile B. Colourful C. Lightweight D. Small	1 Mark	Creativity

5	<p>A _____ is a figure with a head and a body of cloth which fits over the puppeteer's hand.</p> <p>A. Shadow puppet B. Hand puppet C. Marionette D. Stick puppet</p>	1 Mark	Creativity
6	<p>Which country made puppets from dried sheep skin?</p> <p>A. Ireland B. Brazil C. France D. China</p>	1 Mark	Creativity
7	<p>Which is not an external Body Part?</p> <p>A. Heart B. Leg C. Hand D. Head</p>	1 Mark	Creativity
8	<p>Which body part is not shown in the below puppet picture?</p>  <p>E. Eyes F. Ears G. Hands H. Nose</p>	1 Mark	Creativity
9	<p>What is the another name of string puppet?</p> <p>A. Marionette B. Bear C. Human D. Dog</p>	1 Mark	Creativity

10	Who is the most famous puppeteer? A. Leonardo B. Jim Henson C. Vincent D. Paul	1 Mark	Creativity
----	--	--------	------------



**ARMY PUBLIC SCHOOL GWALIOR**  
**CLASS -V**  
**ACADEMIC SESSION 2021-22**  
**WORKSHEET (SELF -ASSESSMENT)**



**Subject: Health and Physical Education**

**Assignment No. : 3**

**Allotment Date: 15 June 2021**

**TOPIC:- NATURAL DISASTER**

1.	Which of the following is not wind related natural disaster? (a) Storms (b) Cyclones (c) Tornadoes (d) Drought	Informative	1
2	Which of the following is not water related natural disaster? (a) Storms (b) Cyclones (c) Tornadoes (d) Drought	Informative	1
3	Which of the following is not earth related natural disaster? (a) Earthquakes (b) Tsunami (c) storms (d) None of these	Understanding	1
4	Avalanche is what kind of natural disaster? (a) Wind related (b) Water related (c) Earth related (d) None of these	Informative	1
5	➤ <b>Fill in the blanks. ( question 5 to 7 )</b> A _____ is a series of waves caused by earthquake or undersea volcanic eruption. ( Tsunami / Cyclone )	Analytical	1
6.	Movement of mass of rock and debris is called _____. ( Landslide/ Volcano )	Understanding	1
7.	Shaking of earth is called _____. ( Earthquake / Landslide)	Analytical	1
8.	<b>(True and False) ( question 8 to 10)</b> We should not use elevator during natural disaster. (true/false)	Informative	1
9.	We should stay away from walls , window and glass during natural disaster	Informative	1
10.	Tornado is not natural disaster.	Informative	1



**ARMY PUBLIC SCHOOL GWALIOR**  
**CLASS -V**  
**ACADEMIC SESSION 2021-22**  
**WORKSHEET (SELF -ASSESSMENT)**



**Subject: Music**

**Assignment No. : 3**

**Allotment Date: 15 June 2021**

S. NO.	प्रश्न	अंक	प्रकृति
1.	तीन ताल में कितने विभाग होते हैं? (अ) 4 (ब) 5 (स) 6	1marks	बोधात्मक
2.	8 माता वाली ताल को क्या कहते हैं? (अ) तीन ताल (ब) कहरवा ताल (स) दादरा ताल	1marks	
3.	तीन ताल में कितनी खाली होती है ? (अ) 6 (ब) 4 (स) 1	1 marks	सूचनापरक
4.	कहरवा ताल में कितनी मात्रा होती है ? (अ) 3 (ब) 7 (स) 8	1 marks	
5.	कहरवा ताल में कितनी खाली होती है? (अ) 7 (ब) 4 (स) 1	1marks	अंतःविषयात्मक
6.	दादरा ताल में कितनी मात्रा होती है ? (अ) 9 (ब) 8	1 marks	

	(स) 6		
7.	दादरा ताल में कितने विभाग होते हैं? (अ) 2 (ब) 4 (स) 7	1marks	गहनसोचऔर समस्यासमाधान
8.	तीन ताल में कितनी मात्रा होती है ? (अ) 16 (ब) 12 (स) 15	1 marks	
9.	कहरवा ताल में कितने विभाग होते हैं? (अ) 2 (ब) 4 (स) 8	1 marks	उच्चस्तरीय चिंतन
10.	तीन ताल में कितनी ताली होती है? (अ) 6 (ब) 4 (स) 3	1 marks	



**ARMY PUBLIC SCHOOL GWALIOR**  
**CLASS -V**  
**ACADEMIC SESSION 2021-22**  
**WORKSHEET (SELF -ASSESSMENT)**



**Subject: Library**

**Assignment No. : 3**

**Allotment Date: 15 June 2021**

S.NO	QUESTIONS	MARKS	NATURE
1	What was the title of the story?	1	Comprehension
2	What words did lucky put on his sword ?	1	Analysis
3	What did he take with him on his journey ?	1	Comprehension
4	Where did he put it when he went to sleep ?	1	Comprehension
5	Who chanced to pass while he was sleeping ?	1	Comprehension
6	What did they ask lucky to show them ?	1	Understanding
7	What did he do to impress them ?	1	Comprehension
8	Where did lucky hide ?	1	Comprehension
9	Who came to attack the giants ?	1	Comprehension
10	Where did lucky decide to stay for a few weeks ?	1	Comprehension



**ARMY PUBLIC SCHOOL GWALIOR**  
**CLASS -V**  
**ACADEMIC SESSION 2021-22**  
**WORKSHEET (SELF –ASSESSMENT)**

**Subject: Discipline**  
**Allotment Date: 15 June 2021**  
**Skills for 21<sup>st</sup> century-**

**Assignment No. : 3**

**1. Fill in the blanks**

- (i) Discipline is a \_\_\_\_\_ (quality, ability)
- (ii) To be disciplined is a \_\_\_\_\_ (habit, practice)
- (iii) All natural things follow \_\_\_\_\_ (discipline, order)

**2. Tick ✓ true or false ×**

- (i) It is ok to get up on late every morning \_\_\_\_
- (ii) We should listen to Mom, dad and elders \_\_\_\_\_
- (iii) We should finish our work on time \_\_\_\_\_
- (iv) We should spend our time wisely with mobile, tablets or online games.

**3. Write a good habit you have –**

---

---

---

---

---

**4. Read the given story and write what you learnt from it.**

---

---

---

---

---



1

In the woods, there lived a family of early-to-rise morning glories and a rabbit who always woke up late and so, missed buying fresh carrots at the vegetable market.

**Sleepy Rabbit:** Waa! I'm always tired and sleepy. How can I be energetic like you?

**Active Glories:** We became energetic by activating our 'internal clock'! You can do it, too!



2

We might wish to watch TV or play a little longer at night but the later we go to sleep, the harder it is to wake up the next day. And you'll be tired all day.




3

Rabbit wakes up late and rushes to the market, panting all the way. When it finally arrives, he's greeted with a signboard that says, 'CARROTS SOLD OUT!'


*Sleepy Rabbit:* I want some carrots, Sir. Please wait!

*Punctual Beaver:* Sorry son, you're much too late.



4

The rabbit learnt its lesson. That night, it slept on time, woke up fresh and early the next morning, and was the first to reach the carrot farm



We are energetic day after day! It's how we create a victorious year!



Colour & complete your comic!