



**ARMY PUBLIC SCHOOL GWALIOR**  
**CLASS -IV**  
**ACADEMIC SESSION 2021-22**  
**WORKSHEET (SELF –ASSESSMENT)**

**Subject: English**

**Assignment No. : 3**

**Allotment Date: 15 June 2021**

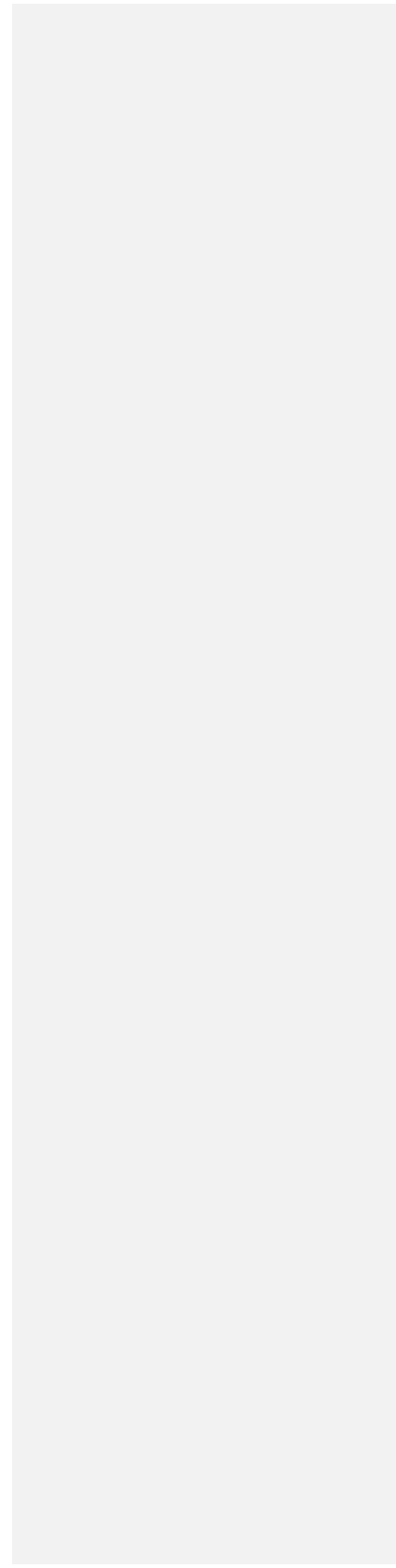
S. NO.	QUESTIONS	MARKS	NATURE
1	Who had brought the elephant to the village? What was the elephant's name?  <hr/> <hr/> <hr/> <hr/> <hr/>	2	Information
2	Use apostrophe and rewrite the following sentences. '  (i) I have done homework.  -----  (ii) The trunk of the elephant is very long.  -----	2	Understanding

Formatted Table

<b>3</b>	<p>A child with visual impairment has been admitted in your class .Will you like to be his friend? How will you cooperate with him?</p> <p>Ans -----</p> <p>-----</p> <p>-----</p> <p>-----</p> <p>-----</p> <p>-----</p> <p>-----</p> <p>-----</p> <p>-----</p>	<b>2</b>	<b>Interdisciplinary</b>
<b>4</b>	<p>Write the synonyms for the underlined words in the given sentences.</p> <p>(i) I am a sincere <u>pupil</u> at school.</p> <p>(ii) The cat quietly <u>pounced</u> on the rat.</p>	<b>2</b>	<b>Analytical Skill</b>
<b>5</b>	<p>Write the moral that you have learnt from the chapter in your own words.</p> <p>:</p>	<b>2</b>	<b>Critical Thinking and Problem Solving</b>

<b>6</b>	Is it a good thing to be rigid in our thinking? Why/ Why not .	<b>3</b>	<b>HOT</b>
<b>7</b>	Answer the following questions briefly.  (i) What did the wise man tell the four friends?            (ii) What was different about the four friends?	<b>4</b>	<b>Evaluation</b>
<b>8.</b>	Do you agree that the four friends represent people who are inflexible in their thinking? Explain	<b>3</b>	<b>Communication skills</b>

--	--	--	--





**ARMY PUBLIC SCHOOL GWALIOR**  
**CLASS -IV**  
**ACADEMIC SESSION 2021-22**  
**WORKSHEET (SELF -ASSESSMENT)**

**Subject: Hindi**

**Assignment No. : 3**

**Allotment Date: 15 June 2021**

क्र०	प्रश्न	अंक	प्रश्नकाप्रकार
1.	प्र०1. निम्नलिखित प्रश्नों के सही उत्तर के सामने सही का निशान लगाओ : 1. जीटो ने टीना को जगाया क्योंकि -- क. वह टीना से मदद चाहता था। <input type="checkbox"/> ख. वह टीना की मदद करना चाहता था। <input type="checkbox"/> 2. लोगों को पानी का उपयोग सोच - समझकर करना चाहिए क्योंकि -- क. शुद्ध पानी दिनोंदिन कम होता जा रहा है। <input type="checkbox"/> ख. पानी के बिना कोई जीवित नहीं रह सकता। <input type="checkbox"/> 3. जीटो अंटार्कटिका क्यों गया ? क. साफ पानी लेने <input type="checkbox"/> ख. घूमने <input type="checkbox"/>	3	बोधात्मक
2.	प्र०2. निम्न शब्दों के अर्थ लिखो : 1. कार्यालय - _____ 2. रॉकेट - _____ 3. भोर - _____	3	ज्ञानात्मक
3.	प्र०3. निम्नलिखित संज्ञा शब्दों से विशेषण बनाओ : 1. ज़हर - _____ 2. चमक - _____ 3. रंग - _____ 4. खर्च - _____	4	रचनात्मक

4.	<p>प्र०4 . निम्नलिखित शब्दों के सामान अर्थ वाले शब्द लिखो :</p> <p>1. जिंदा - _____</p> <p>2. साफ - _____</p> <p>3. विषैला - _____</p> <p>4. तरीका - _____</p>	4	सूचनात्मक
5.	<p>निम्नलिखित प्रश्नों के उत्तर लिखो -</p> <p>प्र०1. ज़ीटो के लिए झील का जल किसी काम का क्यों नहीं था ?</p> <p>उ०1. _____</p> <p>_____</p> <p>प्र०2. नदी का पानी ज़हरीला क्यों हो रहा था ?</p> <p>उ०2. _____</p> <p>_____</p> <p>प्र०3. ज़ीटो जाते - जाते टीना को क्या चेतावनी दे गया ?</p> <p>उ०3. _____</p> <p>_____</p>	3	विश्लेषणात्मक
6.	<p>प्र०6. व्यक्तिवाचक , जातिवाचाक और भाववाचक संज्ञा के दो - दो उदाहरण लिखो -</p> <p>1. व्यक्तिवाचक संज्ञा - _____ , _____</p> <p>2. जातिवाचाक संज्ञा - _____ , _____</p> <p>3. भाववाचक संज्ञा - _____ , _____</p>	3	उच्चस्तरीयचिंतन



**ARMY PUBLIC SCHOOL GWALIOR**  
**CLASS -IV**  
**ACADEMIC SESSION 2021-22**  
**WORKSHEET (SELF –ASSESSMENT)**

**Subject: Mathematics**

**Assignment No. : 3**

**Allotment Date: 15 June 2021**

S. NO.	QUESTIONS	MARKS	NATURE
1	<b>Fill in the blanks:</b> (i) The numbers that are added together are called _____ (ii) The number which is subtracted is called _____	<b>2*1=2</b>	Understanding
2	<b>Write 'True' or 'False':</b> (i) $3435 + 1092 = 4627$ ( ) (ii) $9803 - 2346 = 7457$ ( )	<b>2*1=2</b>	HOTS
3	<b>Tick the correct answer from the given options:</b>  (i) Estimated value of 13605 to the nearest thousand is (a) 13000      (b) 12000      (c) 14000  (ii) Estimated value of 53809 to the nearest ten thousands is (a) 60000      (b) 50000      (c) 40000  (iii) Estimated value of 7415 to the nearest thousand is (a) 6000      (b) 7000      (c) 8000  (iv) Estimated value of 450 to the nearest hundreds is (a) 400      (b) 500      (c) 600  (v) Estimated value of 315 to the nearest hundreds is (a) 200      (b) 300      (c) 400	<b>5*1=5</b>	Critical thinking
4	<b>Solve the following questions: -</b>		

	<p>Write in columns and add:</p> <p>(i) 198765, 500321 and 4056</p> <p>(ii) 310572 and 576296</p> <p>(iii) 50072, 12350 and 57023</p> <p>Write in columns and subtract the following:</p> <p>(iv) 5 7 3 2 - 1 8 1 3</p> <p>(v) 1 7 7 4 3 - 7 5 0 2</p>	<b>5*1=5</b>	Interdisciplinary
<b>5</b>	<p><b>Solve the following questions:</b></p> <p>(i) In a school there are the following numbers of students: 127 in grade one, 120 in grade two, 110 in grade three, 100 in grade four and 93 in grade five. Find the total number of students in the school.</p> <p>(ii) In an examination, 75,236 students passed and 14,892 students failed. Find how many students appeared for the examination.</p> <p>(iii) A milk-dairy produces 25,545 litres of milk every day. It supplies 15,625 litres of milk to a milk-depot and the rest to the market. How much milk is supplied to the market?</p>	<b>2*3=6</b>	Problem Solving





**ARMY PUBLIC SCHOOL GWALIOR**  
**CLASS -IV**  
**ACADEMIC SESSION 2021-22**  
**WORKSHEET (SELF –ASSESSMENT)**

**Subject: EVS**

**Assignment No. : 3**

**Allotment Date: 15 June 2021**

<b>S. NO.</b>	<b>QUESTIONS</b>	<b>MARKS</b>	<b>NATURE</b>
1	Name any two nutrients.	2*1=2	Information
2	a) -----nutrients help us to grow.  b) ----- remove the waste water from the house.	1x2=2	Understanding
3	Name two diseases caused due to stagnant dirty water.	2x1=2	Interdisciplinary

4	Define the terms:  Sanitation:   Balanced diet:	2x2=4	Analytical Skill
5	Why is water and roughage important for us?	3x1=3	HOT
6	What will happen if the sewage waste water gets collected near your house?	2x1=2	Critical Thinking and Problem Solving
7	How can we preserve and store food?	2x1=2	Evaluation
8	Explain three ways to keep your house clean.	3x1=3	Communication Skills



**ARMY PUBLIC SCHOOL GWALIOR**  
**CLASS -IV**  
**ACADEMIC SESSION 2021-22**  
**WORKSHEET (SELF –ASSESSMENT)**

**Subject: Computer**  
**Allotment Date: 15 June 2021**

**Assignment No. : 3**

S. NO.	QUESTIONS	MARKS	
1.	<p><b>Fill in the blanks:</b></p> <p>1. In _____, all calculations are represented through 0 and 1.</p> <p>2. _____ computers are the combination of both analog and digital computers.</p>	2x1=2	Information
2.	<p><b>Write True or False:</b></p> <p>1. Super computers are used in schools and offices. ( )</p> <p>2. Many users can work simultaneously on a Mainframe computer. ( )</p>	2x1=2	Understanding

3.	<p><b>Choose the correct answer: -</b></p> <p>1. A notebook computer is also called a</p> <p>a. Smartphone b. Tablet PC c. Laptop</p> <p>2. The electronic version of a printed book</p> <p>a. Facebook b. passbook c. E-book</p>	2x1=2	HOT
4.	<p><b>Answer the following question: -</b></p> <p>(i) What do you mean by Microcomputer? Give one example.</p> <p>.....</p> <p>.....</p> <p>.....</p> <p>(ii) Name the computers Classified on the basis of their size.</p> <p>.....</p> <p>.....</p> <p>.....</p> <p>.....</p> <hr/> <p>(iii) Write a short note on mobile devices.</p> <p>.....</p> <p>.....</p> <p>.....</p>	4x1=4	Communication  Skills

(iv) Write a short note on  
**Analog computer**

.....

.....

.....

---




**ARMY PUBLIC SCHOOL GWALIOR**  
**CLASS -IV**  
**ACADEMIC SESSION 2021-22**  
**WORKSHEET (SELF –ASSESSMENT)**

Subject: G.K

Assignment No. : 3

Allotment Date: 15 June 2021

S. NO	QUESTIONS	MARKS	NATURE
1.	Tick the correct answer:  1) Which instrument is known as fiddle?  a) Trumpet b) Violin c) Harmonica	1*1=1	Information
2.	Fill in the blank:  1. ----- was the first human to go into Moon.  2----- team won the women's world T20 in 2016.	2*1=2	Understanding

3.	Who was the first president of India?	1*1=1	Interdisciplinary y
4.	True or False:  1. Sania Mirza was the first Indian- born woman to go into space.	1*1=1	Analytical Skill
5.	Which is the first artificial satellite to go around the earth?	1*1=1	HOT
6.	Identify the given pictures:  a.  	2*1=2	Critical Thinking and Problem Solving



b.

7.	Which country won the first Football World Cup?	1*1= 1	Evaluation
8.	Which was the first interplanetary mission of India, launching satellite in Mars?	1*1=1	Communication Skills






**ARMY PUBLIC SCHOOL GWALIOR**  
**CLASS -IV**  
**ACADEMIC SESSION 2021-22**  
**WORKSHEET (SELF –ASSESSMENT)**



**Subject: Art Education**  
**Allotment Date: 15 June 2021**

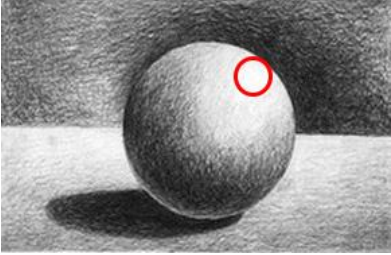
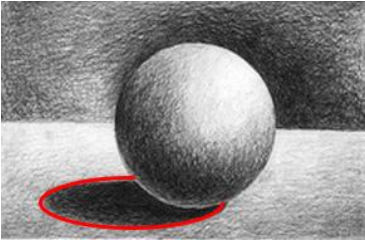
**Assignment No. : 3**

<b>S. NO.</b>	<b>QUESTIONS</b>	<b>MARKS</b>	<b>NATURE</b>
<b>1</b>	This technique creates a gradation from light to dark A. Burnishing B. Shading C. Hatching D. Scumbling	<b>1 Mark</b>	<b>Creativity</b>
<b>2.</b>	The area on a surface which reflects the lightest is called: A. Shadow B. Highlight C. Value D Hue	<b>1 Mark</b>	<b>Creativity</b>
<b>3.</b>	Pencils today are made of what? A. Lead B. Graphite C. Charcoal D Ink	<b>1 Mark</b>	<b>Creativity</b>
<b>4.</b>	This drawing is called a:	<b>1 Mark</b>	<b>Creativity</b>



	<p>A. Still life          B. Landscape          C. Gesture drawing          D Contour drawing</p>		
5	<p>The softer the lead, the _____ the mark will be.          A. Darker          B. Lighter          C. Wider          D Softer</p>	1 Mark	Creativity
6	<p>Which pencil is capable of making the darkest values?          A. HB          B. B          C. 2B          D 4B</p>	1 Mark	Creativity
7.	<p>What is the name of this shading technique?</p>  <p>A. Blending          B. Hatching          C. Cross-Hatching          D. Stippling</p>	1 Mark	Creativity

8.	<p>What type of scale shows the range of values from black to white and light to dark?</p> 	<b>1 Mark</b>	<b>Creativity</b>
	<p>A. Monetary scale          B. Proportion scale          C. Pentatonic scale          Value scale</p>		
9.	<p>This is the</p>  <p>A. Highlight          B. Core Shadow          C. Cast Shadow          Light Source</p>	<b>1 Mark</b>	<b>Creativity</b>
10.	<p>The lighter the value, the lead in the pencil is ____.</p> <p>A. Hard          B. Soft          C. Dark          D. Wide</p>	<b>1 Mark</b>	<b>Creativity</b>

11.	<p>This is the</p>  <p>A. Light Source B. Highlight C. Core Shadow D. Cast Shadow</p>	<b>1 Mark</b>	<b>Creativity</b>
12.	<p>This is the</p>  <p>A. Light Source B. Core Shadow C. Cast Shadow Highlight</p>	<b>1 Mark</b>	<b>Creativity</b>



**ARMY PUBLIC SCHOOL GWALIOR**  
**CLASS -IV**  
**ACADEMIC SESSION 2021-22**  
**WORKSHEET (SELF –ASSESSMENT)**

**Subject: Work Education**  
**Allotment Date: 15 June 2021**

**Assignment No. : 3**


<b>S.</b>	<b>QUESTIONS</b>	<b>MARKS</b>	<b>NATURE</b>
<b>NO.</b>			
<b>1</b>	What is a puppet? A. The background, such as houses, trees, and flowers. B. A figure whose movements are controlled by someone through strings, rods, or hand movements. C. A place you can go to watch a play. D. The words spoken by characters.	<b>1 Mark</b>	<b>Creativity</b>
<b>2.</b>	What are puppets generally called in India? A. Puipead B. Kathputli C. Puppet D. Kugutsu	<b>1 Mark</b>	<b>Creativity</b>
<b>3.</b>	Which town hosts the largest puppet festival in every two years? A. Jaipur, Rajasthan, India B. Monkstown, Dublin, Ireland C. Charleville-Mezieres, France D. Osaka, Honsu Island, Japan	<b>1 Mark</b>	<b>Creativity</b>
<b>4.</b>	Which body part is not shown in the below puppet picture?	<b>1 Mark</b>	<b>Creativity</b>



- D. Eyes
- E. Ears
- F. Hands
- G. Nose

<b>5</b>	Hand puppets are easier to operate, cheaper to make, and: A. More mobile B. Colourful C. Lightweight D. Small	<b>1 Mark</b>	<b>Creativity</b>
<b>6</b>	A _____ is a figure with a head and a body of cloth which fits over the puppeteer's hand. A. Shadow puppet B. Hand puppet C. Marionette D. Stick puppet	<b>1 Mark</b>	<b>Creativity</b>
<b>7</b>	Which country made puppets from dried sheep skin? A. Ireland B. Brazil C. France D. China	<b>1 Mark</b>	<b>Creativity</b>
<b>8.</b>	Which is not an external Body Part? A. Heart B. Leg C. Hand D. Head	<b>1 Mark</b>	<b>Creativity</b>
<b>9</b>	What is the another name of string puppet? A. Marionette B. Bear C. Human D. Dog	<b>1 Mark</b>	<b>Creativity</b>

10	What is the another name of string puppet? E. Marionette F. Bear G. Human H. Dog	<b>1 Mark</b>	<b>Creativity</b>
----	--	---------------	-------------------





**ARMY PUBLIC SCHOOL GWALIOR  
CLASS -IV  
ACADEMIC SESSION 2021-22  
WORKSHEET (SELF –ASSESSMENT)**

**Subject: Health and Physical Education  
Allotment Date: 15 June 2021**

**Assignment No. : 3**

<b>S.NO</b>	<b>Answer the following questions</b>	<b>MARKS 2X5=10</b>
1.	What is balance diet?	2
2	Write down the two benefits of balance diet.	2
3	What do you know about Major Dhyan Chand? Write a short note.	2
4	What do you know about Milkha Singh? Write a short note.	2
5	What do you know about Mary Kom? Write a short note.	2





**ARMY PUBLIC SCHOOL GWALIOR**  
**CLASS -IV**  
**ACADEMIC SESSION 2021-22**  
**WORKSHEET (SELF –ASSESSMENT)**

**Subject: Music**

**Assignment No. : 3**

**Allotment Date: 15 June 2021**

S. NO.	प्रश्न	अंक	प्रकृति
1.	तीन ताल में कितने विभाग होते हैं? (अ) 4 (ब) 5 (स) 6	1marks	बोधात्मक
2.	8 माता वाली ताल को क्या कहते हैं? (अ) तीन ताल (ब) कहरवा ताल (स) दादरा ताल	1marks	
3.	तीन ताल में कितनी खाली होती है ? (अ) 6 (ब) 4 (स) 1	1 marks	सूचनापरक
4.	कहरवा ताल में कितनी मात्रा होती है ? (अ) 3 (ब) 7 (स) 8	1 marks	
5.	कहरवा ताल में कितनी खाली होती है? (अ) 7 (ब) 4 (स) 1	1marks	अंतःविषयात्मक

6.	दादरा ताल में कितनी मात्रा होती है ? (अ) 9 (ब) 8 (स) 6	1 marks	
7.	दादरा ताल में कितने विभाग होते हैं? (अ) 2 (ब) 4 (स) 7	1marks	गहनसोचऔर समस्यासमाधान
8.	तीन ताल में कितनी मात्रा होती है ? (अ) 16 (ब) 12 (स) 15	1 marks	
9.	कहरवा ताल में कितने विभाग होते हैं? (अ) 2 (ब) 4 (स) 8	1 marks	उच्चस्तरीय चिंतन
10.	तीन ताल में कितनी ताली होती है? (अ) 6 (ब) 4 (स) 3	1 marks	



**ARMY PUBLIC SCHOOL GWALIOR**  
**CLASS -IV**  
**ACADEMIC SESSION 2021-22**  
**WORKSHEET (SELF –ASSESSMENT)**


**Subject: Library**

**Assignment No. : 3**

**Allotment Date: 15 June 2021**

S.NO	QUESTIONS	MARKS	NATURE
1	What was the title of the story?	1	Comprehension
2	What was the father's name?	1	Comprehension
3	What did he own?	1	Understanding
4	How many sons had he?	1	Comprehension
5	What kind of sons were they?	1	Analysis
6	What happened to him?	1	Understanding
7	What did he say in his will?	1	Comprehension
8	How did old John look after his orchard?	1	Understanding
9	Why were his sons so joyful?	1	Understanding

10	What treasure did they find?	1	Comprehension
----	------------------------------	---	---------------





**ARMY PUBLIC SCHOOL GWALIOR**  
**CLASS -IV**  
**ACADEMIC SESSION 2021-22**  
**WORKSHEET (SELF –ASSESSMENT)**

**Subject: Discipline**

**Assignment No. : 3**

**Allotment Date: 15 June 2021**

**Skills for 21<sup>st</sup> century-**

<b>S.N O</b>	<b>QUESTIONS</b>	<b>MARK S</b>	<b>NATURE</b>
<b>1.</b>	<b>Fill in the blanks</b> (i) Discipline is a _____ (quality, ability) (ii) To be disciplined is a _____ (habit, practice) (iii) All natural things follow _____ (discipline, order)	<b>3</b>	<b>UNDERSTANDING</b>
<b>2.</b>	<b>Tick <math>\checkmark</math> true or false <math>\times</math></b> (i) It is ok to get up on late every morning _____ (ii) We should listen to Mom, dad and elders _____ (iii) We should finish our work on time _____ (iv) We should spend our time wisely with mobile, tablets or online games.	<b>4</b>	<b>THINKING</b>
<b>3.</b>	<b>Write a good habit you have.</b> _____ _____ _____ _____	<b>2</b>	<b>UNDERSTANDING</b>
<b>4.</b>	<b>Please mention a bad habit you want to change</b> _____ _____ _____ _____	<b>1</b>	<b>AWARENESS</b>