



ARMY PUBLIC SCHOOL GWALIOR



CLASS -III

ACADEMIC SESSION 2021-22

WORKSHEET (SELF –ASSESSMENT)

Subject: English

Assignment No. : 3

Allotment Date: 15 June 2021

| S.N | QUESTIONS | MARKS | NATURE |
|-----|---|-------|---------------|
| 1. | <p>Fill in the blanks with the right option:</p> <p>(i) A noun is the name given to a material or substance of which things are made.(material/proper)</p> <p>(ii) Synonyms are words that have meanings. (different/similar)</p> | 2X1=2 | Information |
| 2. | <p>Complete the spellings given below:</p> <p>(i) de...ect...d</p> <p>(ii) pro...re...sed</p> <p>(iii) ...aw...er</p> | 3X1=3 | Understanding |

| | | | |
|----|--|-------|---|
| 3. | <p>Write down the meanings of the following words:</p> <p>(i) neighbouring</p> <p>(ii) freed</p> <p>(iii) abruptly</p> | 3X1=3 | Interdisciplinary |
| 4. | <p>Put a/an/the before the following words:</p> <p>i) Unicorn</p> <p>ii) engineer</p> <p>iii) Geeta</p> | 3X1=3 | Analytical Skill |
| 5. | <p>What did the mouse do to save the turtle?</p> <p>.....</p> <p>.....</p> <p>.....</p> | 2X1=2 | <p>Critical</p> <p>Thinking and</p> <p>Problem</p> <p>Solving</p> |
| 6. | <p>Encircle the words which are spelt correctly:</p> <p>(i) trooly truly</p> <p>(ii) fortunate fourtunate</p> | 2X1=2 | HOT |
| 7. | <p>Cross the wrong articles in the following sentences:</p> <p>(i) The/A Ganga is a long river.</p> <p>(ii) She lives in a/the village.</p> | 2X1=2 | Evaluation |

| | | | |
|-----------|--|-------|----------------------|
| 8. | Answer the following questions: (i) Who were the four friends? (ii) Why was the turtle caught by the hunter? (iii) Why was the hunter happy on seeing the dead deer? | 3X1=3 | Communication Skills |
|-----------|--|-------|----------------------|



ARMY PUBLIC SCHOOL GWALIOR

CLASS -III

ACADEMIC SESSION 2021-22

WORKSHEET (SELF -ASSESSMENT)



Subject: Hindi


Assignment No. : 3

Allotment Date: 15 June 2021

| संख्या | प्रश्न / उत्तर | अंक | प्रकृति |
|--------|---|-----|----------------|
| प्र.1 | सही वाक्यों के सामने सही (V) व गलत के सामने गलत (X) का निशान लगाएँ - क. एक गीदड़ – गीदड़ी जंगल में अपने नन्हे बच्चों के साथ भटक रहे थे। () ख. गीदड़ – गीदड़ी को एक घर दिखाई दिया । () ग गुफा एक शेर की थी । () घ गीदड़ी ने शेर को डरा कर भगा दिया था । () | 4 | बोधार्थक |
| प्र.2 | निम्नलिखित शब्दों के पर्यायवाची शब्द लिखो – क.) आकाश – ख) मनुष्य – ग) माता – घ) पुत्री – | 4 | सूचनापरक |
| प्र.3 | अपने शब्दों में लिखो – i) शेर उलटे पाँव लौट गया । ii) शेर सिर पर पाँव रखकर भागा । | 2 | अंतः विषयात्मक |

| | | | |
|--------------|---|----------|--------------------------------|
| <p>प्र.4</p> | <p>नीचे लिखे संज्ञा शब्दों को सही जगह पर लिखो –</p> <p>(नाच , खेल सोना , ताजमहल)</p> <p>i) श्याम ----- रहा है</p> <p>ii) राधा ----- रही है</p> <p>iii) मुझे ----- बहुत अच्छा लगता है</p> <p>iv) ----- आगरा में है ।</p> | <p>2</p> | <p>गहनसोच और समस्या समाधान</p> |
| <p>प्र.5</p> | <p>नीचे लिखे शब्दों के समान अर्थ वाले शब्द लिखो –</p> <p>i) भरोसा – -----</p> <p>ii) जान – -----</p> <p>iii) भयानक – -----</p> <p>iv)जवाब – -----</p> | <p>2</p> | <p>उच्चस्तरीय चिंतन</p> |
| <p>प्र.6</p> | <p>निम्नलिखित प्रश्नों के उत्तर दो:-</p> <p>i) गीदड़ी ने यह क्यों कहा कि यह तो शेर की गुफा है ?</p> <hr/> <hr/> <p>ii) इस कहानी का नाम चतुर गीदड़ क्यों रखा गया है ?</p> <hr/> <hr/> | <p>4</p> | <p>विश्लेषणात्मक</p> |

| | | | |
|-------|--|---|-------------|
| प्र.7 | गीदड़ ने गीदड़ी को क्या योजना बताई होगी ? <hr/> <hr/> | 2 | भाषायी कौशल |
|-------|--|---|-------------|



ARMY PUBLIC SCHOOL GWALIOR

CLASS -III

ACADEMIC SESSION 2021-22

WORKSHEET (SELF -ASSESSMENT)




Subject: Mathematics

Assignment No. : 3

Allotment Date: 15 June 2021

| S. NO. | QUESTIONS | MARKS | NATURE |
|--------|---|-------|---------------|
| 1. | <p>Fill in the blanks:</p> <p>(I) A number multiplied by 0 is always _____.</p> <p>(II) $616 \times 6 =$ _____</p> <p>(III) $___ \times 48 \times 173 = 173 \times 25 \times 48$</p> <p>(IV) $149 \times 45 =$ _____</p> <p>(V) $9568 \times 1 =$ _____</p> | 5*1=5 | Understanding |
| 2. | <p>Write 'True' or 'False':</p> <p>(I) $28 \times 10 = 280$ ()</p> <p>(II) $89 + 89 + 89 = 3 \times 89$ ()</p> | 4*1=4 | HOTS |

| | | | |
|------------------|--|---|---------------------------------|
| | <p>(III) $150 \times 5 = 550$ ()</p> <p>(IV) The product of all digits from 0 to 9 is 90. ()</p> | | |
| <p>3.</p> | <p>Tick the correct answer from the given options:</p> <p>(I) In $37 \times 150 = 5550$, the number 5550 is</p> <p>(a) multiplier (b) product (c) multiplicand</p> <p>(II) Number of socks are there in 42 pairs of socks -</p> <p>(a) 88 (b) 48 (c) 84</p> <p>(III) The product of 37×11 -</p> <p>(a) 407 (b) 477 (c) 470</p> <p>(IV) $56 \times 6 \times 2 = ?$</p> <p>(a) 672 (b) 662 (c) 652</p> <p>(V) A table costs ₹ 170. The cost of 4 tables is -</p> <p>(a) 650 (b) 680 (c) 780</p> | <p>$5 \times 1 = 5$</p> | <p>Critical thinking</p> |



ARMY PUBLIC SCHOOL GWALIOR



CLASS -III

ACADEMIC SESSION 2021-22

WORKSHEET (SELF -ASSESSMENT)

Subject: EVS

Assignment No. : 3


Allotment Date: 15 June 2021

| S.NO. | QUESTIONS | MARKS | NATURE |
|-------|--|---------------------|-------------|
| 1. | <p>Answer the following questions:</p> <p>a) What is germination? Explain with the help of a diagram.</p> <p>.....</p> <p>.....</p> <p>.....</p> <p>.....</p> <p>.....</p> <p>Diagram -</p> <p>b) How do insects acquire their food?</p> <p>.....</p> | <p>3 x 2 =6</p> | Information |

| | | | |
|------------------|--|---------------|----------------------|
| | <p>.....</p> <p>.....</p> <p>.....</p> <p>.....</p> <p>.....</p> <p>.....</p> <p>.....</p> <p>c) Describe the kind of teeth carnivores have.</p> <p>.....</p> <p>.....</p> <p>.....</p> <p>.....</p> | | |
| <p>2.</p> | <p>Fill in the blanks:</p> <p>(a) has a long sticky tongue to catch insects.</p> <p>(b) The flat part of the leaf is called</p> <p>(c) The lungs of the planet are</p> <p>(d) Animals that eat only flesh of other animals are called</p> <p>(e) Is an important part of the shoot.</p> | <p>5x 1=5</p> | <p>Understanding</p> |
| <p>3.</p> | <p>State whether the following statements are 'True' or 'False':</p> <p>(a) Flowers are the most beautiful part of the plant.</p> <p>_____</p> <p>(b) Cows do not have upper front teeth.</p> | <p>4x1=4</p> | <p>Knowledge</p> |

| | | | |
|--|--|---------------|--|
| | <p>_____</p> <p>(c) Animals can make their food. _____</p> <p>(d) The stem acts as a pipe and supports the branches.</p> <p>_____</p> | | |
| <p>4.</p> <p>i)</p> <p>ii)</p> <p>iii)</p> <p>iv)</p> <p>v)</p> | <p>Answer the following questions -</p> <p>Name two different types of roots.</p> <p>.....</p> <p>.....</p> <p>Name two omnivores' animals.</p> <p>.....</p> <p>.....</p> <p>Where do animals get their foods?</p> <p>.....</p> <p>.....</p> <p>Name the two main parts of the plant.</p> <p>.....</p> <p>.....</p> <p>Give two examples of herbivores.</p> | <p>5 ×1=5</p> | <p>Interdisciplinary</p> <p>&</p> <p>Critical thinking</p> |

| | | | |
|--|---------------------------|--|--|
| | <p>.....</p> <p>.....</p> | | |
|--|---------------------------|--|--|



ARMY PUBLIC SCHOOL GWALIOR



CLASS -III

ACADEMIC SESSION 2021-22

WORKSHEET (SELF –ASSESSMENT)

Subject: Computer


Assignment No. : 3

Allotment Date: 15 June 2021

| S. NO. | QUESTIONS | MARKS | |
|--------|--|-------|---------------|
| 1. | <p>Fill in the blanks:</p> <p>(i) _____ is also called processor or microprocessor.</p> <p>(ii) The _____ is the device that is used to print on paper.</p> | 2x1=2 | Information |
| 2. | <p>Write True or False:</p> <p>(i) All the physical parts that we can touch are called software. ()</p> <p>(ii) DVD stands for Digital Video Disc. ()</p> | 2x1=2 | Understanding |
| 3. | <p>Choose the correct answer.</p> <p>(i) Mouse is an device.</p> <p>a) output <input type="checkbox"/></p> | 2x1=2 | HOT |

| | | | |
|-----------|---|--------------|----------------------------------|
| | <p>b) input <input type="checkbox"/></p> <p>c) None of these <input type="checkbox"/></p> <p>(ii) is used to transfer data from one device to another.</p> <p>a) Pen Drive <input type="checkbox"/></p> <p>b) CPU <input type="checkbox"/></p> <p>c) Both a and b <input type="checkbox"/></p> | | |
| <p>4.</p> | <p>Answer the following questions.</p> <p>(i) What is a hardware? Give examples.</p> <p>.....</p> <hr/> <p>.....</p> <p>.....</p> <p>...</p> <p>(iii) What do you mean by storage device?</p> <p>.....</p> <p>.....</p> <p>....</p> <p>.....</p> <p>(iv) What is the use of a system unit?</p> <p>.....</p> <p>.....</p> <p>...</p> <p>.....</p> <hr/> <p>iv) Name any three input devices and output devices.</p> | <p>4x1=4</p> | <p>Communicatio n Skills</p> |

| | Input devices | Output devices | | |
|--|---------------|----------------|--|--|
| | | | | |
| | | | | |
| | | | | |
| | | | | |



ARMY PUBLIC SCHOOL GWALIOR



CLASS -III

ACADEMIC SESSION 2021-22

WORKSHEET (SELF –ASSESSMENT)

Subject: G.K

Assignment No. : 3

Allotment Date: 15 June 2021

| S. No. | Questions | Marks | Nature |
|--------|--|---------------|-----------------|
| 1. | Fill in the blanks- i) Football is played between teams. ii) Referee shows a card for warning. iii) Zlatan Ibrahimovic plays for iv) is the short form for association football. v) The help the plant to breathe. | 5x0.5 =2.5 | Information |
| 2. | Match the following- i) I Ussain Bolt ii) Sania Mirza and Serena Williams iii) A B de Villers iv) Lionel Messi v) Vijendra Singh a) lawn tennis b) cricket c) boxing d) football e) athlete | 5x0.5=2 .5 | Problem solving |
| 3. | Which is the only country that has won gold medals in all the Kabaddi World Cups? | 1x1=1 | Understanding |

| | | | |
|-----------|--|--------------|------------|
| 4. | Answer the following questions- i) Name the part of the plant which contains its seeds. ii) Name the part of the plant which absorbs water and nutrients. iii) Name the part of the plant which carries its food to other parts of the plant. iv) Name the part of the flowering plant which helps it grows a new plant. | 4x1=4 | HOT |
|-----------|--|--------------|------------|



ARMY PUBLIC SCHOOL GWALIOR



CLASS -III

ACADEMIC SESSION 2021-22

WORKSHEET (SELF –ASSESSMENT)

Subject: Art Education

Assignment No. : 3

Allotment Date: 15 June 2021

| S.No | QUESTIONS | MARKS | NATURE |
|------|--|-------|-------------------|
| 1. | How many types of Primary shapes are there? a) two b) three c) four | 3X1=3 | Information |
| 2. | I have four sides and all sides are equal, who am I? a) Square b) Triangle c) Rectangle | | Critical thinking |
| 3. | I am unique, I'm round, no corners, Who am I? a) Square b) Triangle c) Circle | | |

| | | | |
|----|---|-------|---------------|
| | | | |
| 4. | <p>Which basic shape has three equal sides and angles?</p> <p>a) Square</p> <p>b) Triangle</p> <p>c) Circle</p> | 3X1=3 | Understanding |
| 5. | <p>A wheel is shaped like a -</p> <p>a) Circle</p> <p>b) Triangle</p> <p>c) Square</p> | | |
| 6. | <p>How many corners does a circle have?</p> <p>a) 2</p> <p>b) 4</p> <p>c) 0</p> | | |

| | | | |
|----|--|-------|------------------|
| 7. | The real example of circle is - a) CD b) Samosa c) bicycle wheel | 2X1=2 | Analytical Skill |
| 8. | What are basic primary shapes? a) Primary is the first category of basic shapes. b) Primary is the second category of basic shapes. c) Primary is the third category of basic shapes. | | Knowledge |
| 9. | Draw a house or any one scenery by using basic shapes. | 2X1=2 | Knowledge |



ARMY PUBLIC SCHOOL GWALIOR

CLASS -III

ACADEMIC SESSION 2021-22

WORKSHEET (SELF –ASSESSMENT)



Subject: Work Education

Assignment No. : 3

Allotment Date: 15 June 2021

| S.No | QUESTIONS | MARKS | NATURE |
|------|--|---------|---|
| 1. | True/False a) Hand puppets are controlled by feet. True False b) Can we use puppets in education? True False | 10x1=10 | Information Critical thinking |
| 2. | Fill in the blanks by using the help box- (Tamilnadu, Artificial eyes, String puppet) a) is the name of Hand puppet. | | Knowledge |
| 3. | b) is famous for puppets. Multiple Choice Questions – a) Which state is famous for puppets? Rajasthan, Odisha Madhya Pradesh Punjab | | |

| | | | |
|----|--|--|--------------------------------|
| 4. | <p>b) Which state is famous for Kathputli (Dance) puppet?</p> <p>Tamilnadu</p> <p>Maharashtra</p> <p>Rajasthan</p> <p>Match the following-</p> <p>d) Marionette famous for puppets</p> <p>e) Karnataka, Odisha String Puppet</p> <p>f) Puppets Rajasthan</p> <p>g) Kathputli (Dance) story telling & dance</p> | | <p>Analytical</p> <p>Skill</p> |
|----|--|--|--------------------------------|



ARMY PUBLIC SCHOOL GWALIOR

CLASS -III

ACADEMIC SESSION 2021-22

WORKSHEET (SELF –ASSESSMENT)



Subject: Health and Physical Education

Assignment No. : 3

Allotment Date: 15 June 2021

| S.no | Questions | Nature | Marks |
|------|--|---------------|-----------|
| 1. | Fill in the banks: | | |
| a) | Right service court in badminton is _____m wide. a) 3.56 b) 2.53 c) 2.56 d) 3.53 | Informative | 10x1 = 10 |
| b) | In hockey the distance of shooting circle is _____ m far from goal post. a) 5.0 b) 8.0 c) 6.0 d) 9.0 | Analytics | |
| c) | The center line in football ground is known as _____. a) Penalty box arc b) Center circle c) Halfway line d) Side line | Analytics | |
| 2. | True/False | | |
| a) | There are 3 stumps in cricket pitch. | Analytics | |
| b) | Short service line is 1.95m long. | Informative | |
| c) | Cristiano Ronaldo is a football player. | Understanding | |

| | | | |
|------------------|--|----------------------|--|
| <p>3.</p> | <p>Multiple Choice Questions-</p> | | |
| <p>a)</p> | <p>What is the length of badminton court?</p> <p>a) 13.400m b) 14.500m c) 13.500m d) 14.400m</p> | <p>Informative</p> | |
| <p>b)</p> | <p>What is the length of basketball court?</p> <p>a) 94ft b) 56ft c) 84ft d) 80ft</p> | <p>Informative</p> | |
| <p>c)</p> | <p>What is the width of basketball court?</p> <p>a) 57ft b) 60ft c) 50ft d) 77ft</p> | <p>Understanding</p> | |
| <p>d)</p> | <p>What is the width of hockey goal post?</p> <p>a) 3.65m b) 2.56m c) 4.76m d) 3.66m</p> | <p>Informative</p> | |



ARMY PUBLIC SCHOOL GWALIOR

CLASS -III

ACADEMIC SESSION 2021-22

WORKSHEET (SELF –ASSESSMENT)




Subject: Music

Assignment No. : 3

Allotment Date: 15 June 2021

| क्र. | प्रश्न | अंक | प्रकृति |
|------|---|-----|--------------|
| 1 | कथक नृत्य में भाव किस अंग से किया जाता है? (अ) चेहरे के द्वारा (ब) हाथों के द्वारा (स) गर्दन के द्वारा | 1 | बोधोत्प्रेरक |
| 2 | कथक नृत्य में मुद्राओं को किस अंग के द्वारा दर्शाया जाता है? (अ) हाथों की उंगलियों के द्वारा (ब) आँखों के द्वारा (स) हस्तक के द्वारा | 1 | |
| 3 | दृष्टि भेद किस अंग के द्वारा किया जाता है ? (अ) उंगलियों के द्वारा (ब) पैरों के द्वारा (स) आँखों के द्वारा | 1 | सूचनापरक |
| 4 | नृत्य करते समय किस अंग के द्वारा ततकार किया जाता है? (अ) उंगलियों के द्वारा | 1 | |

| | | | |
|----|--|---|--------------------------|
| | (ब) हाथों के द्वारा (स) पैरों के द्वारा | | |
| 5 | कथक नृत्य में खाली को किस शरीर के अंग से दर्शाया जाता है ? (अ) हाथों की उंगलियों के द्वारा (ब) आँखों के द्वारा (स) हाथों को घुमा कर | 1 | अंयात्मकतःविष |
| 6 | शिखर हस्त चक्र हस्त तल हस्त किस अंग के द्वारा किया जाता है? (अ) आँखों के द्वारा (ब) हाथों के द्वारा (स) गर्दन के द्वारा | 1 | |
| 7 | भृकुटी भेद किस अंग के द्वारा किया जाता है? (अ) भौंरे के द्वारा (ब) हस्तक के द्वारा (स) ततकार के द्वारा | 1 | गहनसोचऔर समस्यासमाधान |
| 8 | ग्रीवा भेद किस अंग से किया जाता है ? (अ) गर्दन के द्वारा (ब) भौंरे के द्वारा (स) हस्तक के द्वारा | 1 | |
| 9 | कथक नृत्य में हस्तक किस अंग से किया जाता है? (अ) हाथों के द्वारा (ब) पैरों के द्वारा (स) ततकार के द्वारा | 1 | |
| 10 | नृत्य में मुद्राएँ किस अंग से बनाई जाती हैं (अ) हाथों की उंगलियों के द्वारा (ब) आंखों के द्वारा (स) गर्दन के द्वारा | 1 | उच्चस्तरीय चिंतन |



ARMY PUBLIC SCHOOL GWALIOR

CLASS -III

ACADEMIC SESSION 2021-22

WORKSHEET (SELF –ASSESSMENT)




Subject: Library

Assignment No. : 3

Allotment Date: 15 June 2021

| S.N O | QUESTIONS | MARKS | NATURE |
|----------|--|-------|---------------|
| 1. | <p>Answer the following questions on the basis of the story 'The Fairy Cave' given in the notes.</p> <p>What were the names of the two brothers?</p> <p>.....</p> <p>.....</p> | 1 | Comprehension |
| 2. | <p>Why did the boys go into the hills?</p> <p>.....</p> <p>.....</p> | 1 | Analysis |
| 3. | <p>What were the boys doing?</p> <p>.....</p> <p>.....</p> <p>.....</p> | 1 | Comprehension |
| 4. | <p>What did the fairies give to the boys?</p> <p>.....</p> <p>.....</p> <p>.....</p> | 1 | Comprehension |
| 5. | <p>What did the fairies tell to the two brothers?</p> <p>.....</p> <p>.....</p> <p>.....</p> | 1 | Understanding |
| 6. | <p>What did the white – haired men tell to the boys?</p> <p>.....</p> | 1 | Understanding |

| | | | |
|-----|---|---|----------------------|
| | | | |
| 7. | What did the people of the village do to the boys? | 1 | Comprehension |
| 8. | What did the two brothers see at the cave? | 1 | Comprehension |
| 9. | What were the two boys finally appointed as? | 1 | Analysis |
| 10. | What happened when the white hare sprang up and down? | 1 | Analysis |



ARMY PUBLIC SCHOOL GWALIOR

CLASS -III

ACADEMIC SESSION 2021-22

WORKSHEET (SELF –ASSESSMENT)

Subject: Discipline

Assignment No. : 3

Allotment Date: 15 June 2021

Skills for 21st century-

1. Fill in the blanks

- (i) Discipline is a _____ (quality, ability)
- (ii) To be disciplined is a _____ (habit, practice)
- (iii) All-natural things follow _____ (discipline, order)

2. Tick ✓ true or false ×

- (i) It is ok to get up on late every morning. _____
- (ii) We should listen to Mom, dad and elders. _____
- (iii) We should finish our work on time. _____
- (iv) We should spend our time wisely with mobile, tablets or online games.

3. Write a good habit you have.

4. Read the given story and write what you learnt from it.

1

In the woods, there lived a family of early-to-rise morning glories and a rabbit who always woke up late and so, missed buying fresh carrots at the vegetable market.

Sleepy Rabbit: Waa! I'm always tired and sleepy. How can I be energetic like you?

Active Glories: We became energetic by activating our 'internal clock'!
You can do it, too!




2



We might wish to watch TV or play a little longer at night but the later we go to sleep, the harder it is to wake up the next day. And you'll be tired all day.



3 Rabbit wakes up late and rushes to the market, panting all the way. When it finally arrives, he's greeted with a signboard that says, 'CARROTS SOLD OUT!'
Sleepy Rabbit: I want some carrots, Sir. Please wait!
Punctual Beaver: Sorry son, you're much too late.



4 The rabbit learnt its lesson. That night, it slept on time, woke up fresh and early the next morning, and was the first to reach the carrot farm



Colour & complete your comic!