

ARMY PUBLIC SCHOOL GWALIOR
CLASS -II
ACADEMIC SESSION 2021-22
WORKSHEET (SELF –ASSESSMENT)

Subject: English
Allotment Date: 15 June 2021

Assignment No. : 3

S. NO.	QUESTIONS	MARKS 20	NATURE
1	I. Fill in the blanks with (is, am, are): 1. My mother.....a home maker. 2. Iproud of you. 3. Children.....innocent. 4. These cars... .. eco-friendly.	(4x1=4)	Information
2	Write true or false 1. The king of Scotland had a large army. _____ 2. King Bruce won the war seventh times. _____ 3. The spider was trying to win the war. _____ 4. Robert Bruce was very brave and wise. _____	(4x1=4)	Understanding
3	Answer the following questions.		Interdisciplinary

	(c) Marched- (d). Brave--	without fear came together in a group		
--	----------------------------------	--	--	--







ARMY PUBLIC SCHOOL GWALIOR
CLASS -II
ACADEMIC SESSION 2021-22
WORKSHEET (SELF –ASSESSMENT)

Subject: Hindi
Allotment Date: 15 June 2021

Assignment No. : 3

क्रमांक	प्रश्न	अंक	प्रकृति
प्रश्न १	शब्दार्थ – १. हलचल – २. डेर – ३. खूब – ४. मनमौजी –	४	बोधोत्प्रेरक
प्रश्न २	१. कविता की पंक्तियाँ पूरी करो वृ (क) गुब्बारों का _____ देखो आया _____ (ख)– मुट्ठी में लो _____ इन्हें घुमाओ _____ (ग) –हाथों से _____ लेकिन छूना _____	३	सूचनात्मक
प्रश्न ३	निम्न लिखित प्रश्नों के उत्तर लिखो १. शमशेर कौन है? उत्तर – २. गुब्बारों का आकार क्या था ? उत्तर – ३. जंगल में हलचल क्यों हो रही थी? उत्तर –	६	अंतःविषयात्मक

<p>प्रश्न ४</p>	<p>चित्रों के नाम लिखो —</p> <div style="text-align: center;">  <p>_____</p> </div> <div style="text-align: center;">  <p>_____</p> </div> <div style="text-align: center;">  <p>_____</p> </div>	<p>३</p>	<p>सूचनात्मक</p>		
<p>प्रश्न ५</p>	<p>निम्न लिखित शब्दों के वचन बदलो—</p> <ol style="list-style-type: none"> १ लड़का दृ २ पत्ता— ३ चूहा— ४ रुपया— 	<p>२</p>	<p>समस्या समाधान गहन सोच</p>		
<p>प्रश्न ६</p>	<p>उलटे अर्थ वाले शब्दों को रेखा खींचकर मिलाओ</p> <table style="width: 100%; border: none;"> <tr> <td style="width: 50%;"> <ol style="list-style-type: none"> १ आग २ पास ३ उत्तर ४ बंद </td> <td style="width: 50%; text-align: right;"> <p>प्रश्न</p> <p>खुला</p> <p>पीछे</p> <p>दूर प्रश्न</p> </td> </tr> </table>	<ol style="list-style-type: none"> १ आग २ पास ३ उत्तर ४ बंद 	<p>प्रश्न</p> <p>खुला</p> <p>पीछे</p> <p>दूर प्रश्न</p>	<p>२</p>	<p>उच्च स्तरीय</p>
<ol style="list-style-type: none"> १ आग २ पास ३ उत्तर ४ बंद 	<p>प्रश्न</p> <p>खुला</p> <p>पीछे</p> <p>दूर प्रश्न</p>				



ARMY PUBLIC SCHOOL GWALIOR
CLASS -II
ACADEMIC SESSION 2021-22
WORKSHEET (SELF –ASSESSMENT)

Subject: Mathematics
Allotment Date: 15 June 2021

Assignment No. : 3

S. NO.	QUESTIONS	MARK 20	NATURE
1	<p>Fill in the blanks:-</p> <p>234 = 2 ____ + 3 tens + 4 ____</p> <p>425 = 4 hundreds + 2 ____ + ____ones</p> <p>623 = 6 _____ + 2 ____ +3 ones</p>	3×1=3	Understanding
2	<p>Addition: (without regrouping)</p> <p>(a) $\begin{array}{r} 324 \\ + 223 \\ \hline \\ \hline \end{array}$ (b) $\begin{array}{r} 568 \\ + 321 \\ \hline \\ \hline \end{array}$</p>	4×1=4	Problem solving

	<p>(c) 533 (d) 842</p> <p>+ 457 + 136</p> <p>----- -----</p>		
3.	<p>Add the numbers using expanded form-</p> <p>(a) Add 653 and 345</p> <p>653= ___ hundreds + ___ tens + ___ ones + 345= ___ hundreds + ___ tens + ___ ones</p> <p>_____</p> <p>_____</p> <p>(b) Add 253 and 324</p> <p>253= ___ hundreds + ___ tens + ___ ones + 324= ___ hundreds + ___ tens + ___ ones</p> <p>_____</p> <p>_____</p>	$2 \times 2 = 4$	Critical thinking
4.	<p>Addition : (carry over)</p> <p>(a) 858 (b) 583 + 479 + 839</p> <p>----- -----</p> <p>_____ _____</p> <p>(c) 538 (d) 764 + 724 + 939</p> <p>----- -----</p> <p>(e) 739 + 576</p> <p>_____</p> <p>_____</p>	$5 \times 1 = 5$	Problem solving
5.	<p>Solve the word problems-</p> <p>1. One necklace has 325 beads. Another necklace has 240 beads. Find the total number of beads?</p> <p>Solve:</p> <p>2. A shopkeeper sold 847 pencils and 743 sharpeners . How many total things did he sell?</p> <p>Solve:</p>	$2 \times 2 = 4$	Interdisciplinary



ARMY PUBLIC SCHOOL GWALIOR
CLASS -II
ACADEMIC SESSION 2021-22
WORKSHEET (SELF –ASSESSMENT)


Subject: EVS
Allotment Date: 15 June 2021

Assignment No. : 3

S. No.	QUESTIONS	MARKS 20	NATURE
1	Fill in the blanks (i) Pucca house is _____ house (ii) Silk is obtained from _____. (iii) Houses on hills have _____ roofs.. (iv) We get wool from _____.	4x1=4	Information
2	Write True or False: (a) We should wear dirty clothes. _____	4x1=4	Understanding

	<p>(b) Raincoat is needed in the rainy season. _____</p> <p>(c) A Tent is made of canvas. _____</p> <p>(d) A Kutcha house is a strong house. _____</p>		
3	<p>Answer the questions in one sentence</p> <p>(i) What are the different kinds of roofs?</p> <p>Ans. _____</p> <p>(ii) What is an igloo?</p> <p>Ans. _____</p>	2x1=2	Interdisciplinary
4.	<p>Answer the following questions</p> <p>(i) Explain why we need houses.</p> <p>Ans. _____</p> <p>_____</p> <p>(ii) What is uniform?</p> <p>Ans. _____</p> <p>_____</p> <p>(iii) Should we wear leather clothes? Why?</p> <p>Ans. _____</p> <p>_____</p>	2x3=6	HOTS

5.	Draw any 2 types of houses and color them.	$2 \times 2 = 4$	Creative thinking



ARMY PUBLIC SCHOOL GWALIOR
CLASS -II
ACADEMIC SESSION 2021-22
WORKSHEET (SELF –ASSESSMENT)

Subject: Computer
Allotment Date: 15 June 2021

Assignment No. : 3

S. NO.	QUESTIONS	MARKS	NATURE
1	<p>Q. A Tick the correct answer-</p> <p>1. Computers are used in ____ for preparing results. (a) Hospitals (b) banks (c) Schools Ans-</p> <p>2. An__ is used to withdraw money. (a) ATM (b) Mobile (c) None of these Ans-</p> <p>3. ____ use computers in preparing medical reports. (a) Teachers (b) Doctors (c) Engineers Ans-</p> <p>4. __ use computers for making design of buildings. (a) Doctors (b) Architects (c) Scientists Ans-</p>	4x0.5=2	Information
2	<p>Q. B Fill in the blanks by unscrambling the words –</p> <p>1. In schools computer is used for preparing – E L S R T U Ans.- _____</p> <p>2. Computer is used for booking tickets- R R A P T I O Ans.- _____</p> <p>3. you can withdraw money from- N A K B Ans.- _____</p>	4X0.5=2	Understanding

	<p>4. Computer helps a doctor to diagnose-</p> <table border="1" data-bbox="240 197 571 232"> <tr> <td>A</td> <td>S</td> <td>E</td> <td>D</td> <td>S</td> <td>I</td> <td>E</td> </tr> </table> <p>Ans.- _____</p>	A	S	E	D	S	I	E		
A	S	E	D	S	I	E				
<p>3.</p>	<p>Write T for true and F for false statements-</p> <p>1. Computers can do only one type of work. _____</p> <p>2. Computers cannot be used in schools. _____</p> <p>3. In banks, computers are used for playing games. _____</p> <p>4. Scientists use computers for their research work. _____</p>	<p>4x0.5=2</p>	<p>Understanding</p>							
<p>4.</p>	<p><u>Answer the following questions</u></p> <p>a. What is the use of computers in banks?</p> <p>Ans,</p> <p>_____</p> <p>_____</p> <p>_____</p> <p>b. What is the use of a computer in school?</p> <p>Ans _____</p> <p>_____</p> <p>_____</p>	<p>2x2=4</p>	<p>Critical Thinking and Problem Solving</p>							

	4. Buzz light year Finding Dory		
4	Fill in the blanks- 1. Counting the trunk rings of a tree helps you find out the _____ of the tree. 2. Is the tomato a vegetable or a fruit? _____ 3. Fruits come from the _____ of the plants. 4. During the day, plants give out _____.	$4 \times 0.5 = 2$	Interdisciplinary



ARMY PUBLIC SCHOOL GWALIOR
CLASS -II
ACADEMIC SESSION 2021-22
WORKSHEET (SELF –ASSESSMENT)

Subject: Work Education

Assignment No. : 3


Allotment Date: 15 June 2021

Tick the correct answer - Watch this video for reference

<https://youtu.be/rVsqjORPz9E>

S.NO.	QUESTIONS	MARKS	NATURE
2	How many triangles we have used in House (Cut & Paste) video? A. 4 B. 3 C. 2 D. 1	1	Understanding
3	Which shape we used while making sun in House (cut & paste) video? A. Triangle B. Circle C. Square D. Rhombus	1	Problem solving
4	Which one is not a type of House in chapter house we live in? A. Kuccha house B. Tent C. Houseboat D. Tower	1	information
5	In which surface houseboat is set generally? A. In the soil B. In the sky C. In the water D. In the building	1	Creative thinking

6	Which material we have not used while making House (Cut & Paste) video? A. Scissor B. Coloured papers C. Fevicol	1	Critical thinking
7	Tent houses are generally used by _____. A. Campers B. Business man C. Engineers D. Pets	1	Understanding
8	Caravan is a type of _____. A. Movable house B. Castle C. Bungalow D. Apartment	1	Information
9	Igloo house is made up of _____. A. Wood B. Plastic C. Ice & snow D. mud	1	understanding
10	Kuccha house in generally found in _____. A. Town B. City C. Village D. Water	1	interdiscipliner y



ARMY PUBLIC SCHOOL GWALIOR
CLASS -II
ACADEMIC SESSION 2021-22
WORKSHEET (SELF –ASSESSMENT)

Subject: Art Education
Allotment Date: 15 June 2021

Assignment No. : 3

S.NO.	QUESTIONS	MARKS	NATURE
1	. _____ are obtained by mixing two primary colours. A. Neutrals B. Tints C. Secondary colours D. Shades	1	Information
2	Colours that go with all colour plans white, black, gray and brown are called _____. A. Neutrals B. Tints C. Secondary colours D. Shades	1	Understanding
3	What words are used to describe colour temperature? A. Light and Dark B. Hot and Cold C. Black and White D. Warm and Cool	1	Problem solving
4	Secondary colours are created by mixing two _____. A. neutral colours B. complementary colours C. primary colours D. intermediate or Tertiary colours	1	Critical thinking
5	What colour is the result of mixing -red + yellow + blue? A. Violet (Purple) B. Orange C. Brown D. Green	1	Creative thinking

6	Yellow, red, and orange are cool colours. A. True B. False	1	information
7	Purple is an example of a primary colour. A. True B. False	1	Understanding
8	All colours are made from red, blue, and yellow. A. True B. False	1	information
9	Blue, green and purple are cool colours. A. True B. False	1	understanding
10	Colours that are across from each other on the colour wheel are called _____. A. intermediate or tertiary colours B. analogous colours C. colour triad D. complementary colours	1	interdisciplinary
11	How many colours are on the basic colour wheel? A. Three primary and three secondary colours B. Three cool and three warm colours C. Three pairs of complementary colours D. All of the above	1	understanding
12	Colour is _____. A. a design principle B. an element of art C. a value D. none of the above	1	information


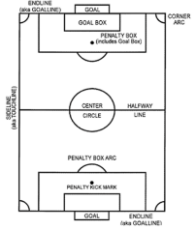


ARMY PUBLIC SCHOOL GWALIOR
CLASS -II
ACADEMIC SESSION 2021-22
WORKSHEET (SELF -ASSESSMENT)

Subject: Health and Physical Education
Allotment Date: 15 June 2021

Assignment No. : 3

S.no	Questions	Nature	Marks
	Fill in the Blanks		10 x 1 = 10
1.	Half way line is present in _____ of football ground. a) Border b) Center c) Top right d) None of the above	Understanding	
2.	Side line is also known as _____. a) Touchline b) Penalty post c) Border line d) Goal post	Analytic skill	
3.	There are _____ goal post in football ground. a) 2 b) 4 c) 6 d) 8	Informative	
	True/false		
4.	Football ground has one center circle.	Understanding	
5.	The shape of football ground is rectangular.	Analytic skill	
6.	In cricket the space between tow stumps is knows as pitch.	Informative	
	Multiple coice questions.		

7.	<p>Name the body part.</p>  <p>a) Ankle b) Knee c) Elbow d) Wrist</p>	Informative	
8.	<p>What is the shape of center circle in football ground?</p> <p>a) Circle b) Semi-circle c) Rectangle d) Oval</p>	Understanding	
9.	<p>How many stumps are there in cricket pitch?</p> <p>a) 6 b) 8 c) 9 d) 3</p>	Informative	
10.	<p>Which Ground is this?</p>  <p>a) Cricket Ground b) Basketball Ground c) Hockey Ground d) Football Ground</p>	Analytic skill	



**ARMY PUBLIC SCHOOL GWALIOR
CLASS -II
ACADEMIC SESSION 2021-22
WORKSHEET (SELF -ASSESSMENT)**

**Subject: Discipline
Allotment Date: 15 June 2021**

Assignment No. : 3

1. Fill in the blanks


- (i) Discipline is a _____ (quality, ability)
- (ii) To be disciplined is a _____ (habit, practice)
- (iii) All natural things follow _____ (discipline, order)



2. Tick ✓ true or false ✗

- (i) It is ok to get up on late every morning _____
- (ii) We should listen to Mom, dad and elders _____
- (iii) We should finish our work on time _____
- (iv) We should spend our time wisely with mobile, tablets or online games.

3. Write a good habit you have –

4. Read the given story and write what you learnt from it.







ARMY PUBLIC SCHOOL GWALIOR
CLASS -II
ACADEMIC SESSION 2021-22
WORKSHEET (SELF –ASSESSMENT)

Subject: Music
Allotment Date: 15 June 2021

Assignment No. : 3

S. NO.	प्रश्न	अंक	प्रकृति
1	कथकनृत्य में भाव किस अंग से किया जाता है? (अ) चेहरे के द्वारा (ब) हाथों के द्वारा (स) गर्दन के द्वारा	2 marks	बोधोत्प्रेरक
2	कथकनृत्य में मुद्राओं को किस अंग के द्वारा दर्शाया जाता है? (अ) हाथों की उंगलियों के द्वारा (ब) आँखों के द्वारा (स) हस्तक के द्वारा	2 marks	बोधोत्प्रेरक
3	दृष्टिभेद किस अंग के द्वारा किया जाता है ? (अ) उंगलियों के द्वारा (ब) पैरों के द्वारा (स) आँखों के द्वारा	2 marks	सूचनापरक
4	दृष्टिभेद किस अंग के द्वारा किया जाता है ? (अ) उंगलियों के द्वारा (ब) पैरों के द्वारा	2 marks	अंशोत्प्रेरक:विष
5	कथकनृत्य में खाली को किस शरीर के अंग से दर्शाया जाता है ? (अ) हाथों की उंगलियों के द्वारा (ब) आँखों के द्वारा (स) हाथों को घुमाकर	2 marks	अंशोत्प्रेरक:विष
6	शिखरहस्त, चक्रहस्त, तलहस्त किस अंग के द्वारा किया जाता है?	2 marks	समस्या समाधान

	(अ) आँखों के द्वारा (ब) हाथों के द्वारा (स) गर्दन के द्वारा		
7	भृकुटीभेदकिस अंग के द्वाराकियाजाताहै? (अ) भौँऐ के द्वारा (ब) हस्तक के द्वारा (स) ततकार के द्वारा	2 marks	गहनसोचऔर
8	ग्रीवाभेदकिस अंग से कियाजाताहै ? (अ) गर्दन के द्वारा (ब) भौँऐ के द्वारा (स) हस्तक के द्वारा	2 marks	उच्चस्तरीय चिंतन
S9	कथकनृत्य मेंहस्तककिस अंग से कियाजाताहै? (अ) हाथों के द्वारा (ब) पैरों के द्वारा (स) ततकार के द्वारा	2 marks	उच्चस्तरीय चिंतन
10	नृत्य में मुद्राएं किस अंग से बनाई जाती हैं (अ) हाथों की उंगलियों के द्वारा (ब) आँखों के द्वारा (स) गर्दन के द्वारा	2 marks	उच्चस्तरीय चिंतन



ARMY PUBLIC SCHOOL GWALIOR
CLASS -II
ACADEMIC SESSION 2021-22
WORKSHEET (SELF –ASSESSMENT)

Subject: Library
Allotment Date: 15 June 2021

Assignment No. : 3

S.NO	QUESTIONS	MARKS	NATURE
1	What was the name of the story? Ans-_____.	1	Comprehension
2	Who lived in a hut near a forest? Ans-_____.	1	Comprehension
3	Why did the woodcutter go out with his axe? Ans-_____ _____	1	Understanding
4	Who was caught among the thorn bushes? Ans-_____.	1	Comprehension
5	What did the little man say when he was free ? Ans-_____ _____	1	Analysis
6	What did they talk about at dinner?	1	Comprehension

	Ans- _____ _____ _____		
7	Why did the sausage appear on the table ? Ans _____ _____	1	Understanding
8	What did woodcutter's wife say? Ans _____ _____	1	Comprehension
9	What happened next? Ans- _____ _____	1	Comprehension
10	What did the woodcutter say? Ans- _____ _____	1	Understanding