



**ARMY PUBLIC SCHOOL GWALIOR**  
**CLASS -IV**  
**ACADEMIC SESSION 2021-22**  
**SELF ASSESSMENT**



**Subject: English**  
**Allotment Date: 18 April 2021**

**Assignment No. : 1**

S. NO.	QUESTIONS	MARKS	NATURE
1	What did the animals of the forest decide to do?  <hr/> <hr/> <hr/> <hr/> <hr/> <hr/>	2	Information
2	Complete the following sentences using words from the poem, 'The Wind '  (i)The child poet watches the -----tossed in the sky,  the-----flying in the sky.  (ii)He asks the wind if it is a -----from the jungle  or just a -----stronger than him.	2	Understanding
3	What are the functions of wind or how it is helpful to us?  What will happen if there will be no wind?	2	Interdisciplinary

<b>4</b>	<p>Find words from the story that have similar meanings as the following:</p> <p>(i) unwillingly :</p> <p>(ii) amazement :</p>	<b>2</b>	<b>Analytical Skill</b>
<b>5</b>	<p>Write the qualities of the following animals as they have been described in the story:</p> <p>(i) lion:</p> <p>(ii) owl:</p>	<b>2</b>	<b>Critical Thinking and Problem Solving</b>
<b>6</b>	<p>Write any three morals that you have learned from , 'Mayur–The Peacock'.</p>	<b>3</b>	<b>HOT</b>
<b>7</b>	<p>Answer the following questions briefly.</p> <p>(i)What did Hansa ask Mayur to do ?</p> <p>(ii) What did the Jackal do when it was his turn?</p>	<b>4</b>	<b>Evaluation</b>
<b>8.</b>	<p>Describe any wild animal that you have read or heard about, in your own words. You can write about its colour, size, where it lives, what it eats , etc</p>	<b>3</b>	<b>Communication skills</b>

<b>9</b>	<p><b>With the help of the clues given below, write a story in your own words. Give a suitable title to the story as well.</b></p> <p><b>A hungry fox _____ a crow with a piece of bread in its beak _____ the fox flatters the crow _____ the crow begins to sign _____ the fox grabs the piece of bread.</b></p>	<b>3</b>	<b>Communication Skills</b>
----------	--	----------	-----------------------------



**ARMY PUBLIC SCHOOL GWALIOR**  
**CLASS -IV**  
**ACADEMIC SESSION 2021-22**  
**SELF ASSESSMENT**




**Subject: Hindi**  
**Allotment Date: 18 April 2021**

**Assignment No. : 1**

क्र०	प्रश्न	अंक	प्रश्न का प्रकार
1.	<p><b>प्र०1. सही उत्तर के सामने (✓) लगाओ –</b></p> <p><b>क. गणेश शंकर उच्च शिक्षा क्यों न प्राप्त कर सके ?</b></p> <p>(i) पढ़ाई में उनकी रुचि न होने के कारण <input type="checkbox"/></p> <p>(ii) गरीब परिवार में जन्म लेने के कारण <input type="checkbox"/></p> <p>(iii) पास में कोई कालेज न होने के कारण <input type="checkbox"/></p> <p><b>ख. ' इस्लाम की निगाह में सब बराबर है - ' का अर्थ है –</b></p> <p>(i) इस्लाम जाति – पाँति नहीं मानता । <input type="checkbox"/></p> <p>(ii) इस्लाम की दृष्टि में सभी लोग एक दूसरे के मित्र हैं । <input type="checkbox"/></p> <p>(iii) इस्लाम इनसान- इनसान में भेद नहीं करता । <input type="checkbox"/></p> <p><b>ग. अमीना हामिद के साथ क्यों न गई ?</b></p> <p>(i) अमीना से बुढ़ापे के कारण चला न जाता था । <input type="checkbox"/></p> <p>(ii) घर में सेवइयाँ पकाने वाला और कोई न था । <input type="checkbox"/></p> <p>(iii) अमीना के पास पैसे नहीं थे । <input type="checkbox"/></p>	3	बोधात्मक

2.	<p><b>प्र०2. निम्न शब्दों के अर्थ लिखो :</b></p> <p>1. स्वतंत्र - _____</p> <p>2. जाजिम - _____</p> <p>3. समर्पित - _____</p>	3	ज्ञानात्मक
3.	<p><b>प्र०3. समानार्थी शब्दों को रेखा खींचकर मिलाओ -</b></p> <p>1. जंगल टहनी</p> <p>2. नभ पंछी</p> <p>3. चिड़िया वन</p> <p>4. डाली आकाश</p>	4	रचनात्मक
4.	<p><b>प्र०4. सही शब्द चुनकर वाक्य पूरे करो -</b></p> <div style="border: 1px solid black; padding: 5px; margin: 10px auto; width: fit-content;"> <p>कट्टर , सुविधा , संघर्ष , संकेत</p> </div> <p>1. <u>संकेत</u> मिलते ही सैनिकों ने गोलाबारी शुरू कर दी ।</p> <p>2. कई स्कूलों में पेयजल की <u>सुविधा</u> नहीं है ।</p> <p>3. गाँधी जी छुआछूत के <u>कट्टर</u> विरोधी थे ।</p> <p>4. भारतीयों को स्वतंत्रता प्राप्त करने के लिए लम्बे समय तक <u>संघर्ष</u> करना पड़ा ।</p>	4	सूचनात्मक
5.	<p><b>प्र०5. निम्नलिखित प्रश्नों के उत्तर लिखो -</b></p> <p><b>प्र०1. कवि चिड़िया का जीवन क्यों चाहते हैं ?</b></p> <p>उ०1. _____</p> <p>_____</p> <p><b>प्र०2. अमीना को हामिद की चिंता क्यों हो रही थी ?</b></p> <p>उ०2. _____</p> <p>_____</p> <p><b>प्र०3. गणेश शंकर विद्यार्थी ने राष्ट्रीय आंदोलन में क्या योगदान दिया ?</b></p> <p>उ०3. _____</p> <p>_____</p>	3	विश्लेषणात्मक

6.	<p>प्र०6. नीचे दिए गए वाक्यों में रेखांकित संज्ञा शब्दों के भेद बताओ -</p> <ol style="list-style-type: none"><li>1. बच्चे हैरानी से सब देखते हैं । _____</li><li>2. महमूद सिपाही लेता है । _____</li><li>3. हामिद ने अपराधी भाव से कहा । _____</li></ol>	3	उच्चस्तरीयचिंतन
----	--	---	-----------------



**ARMY PUBLIC SCHOOL GWALIOR**  
**CLASS -IV**  
**ACADEMIC SESSION 2021-22**  
**SELF ASSESSMENT**




**Subject: Mathematics**  
**Allotment Date: 18 April 2021**

**Assignment No. : 1**

S. NO.	QUESTIONS	MARKS	NATURE
1	<b>Fill in the blanks:</b> (i) The place value for 4 in 34521 is ..... (ii) The roman numeral 13 is.....	<b>2*1=2</b>	Understanding
2	<b>Write 'True' or 'False':</b> (i) The place value of 7 in 67894 is 7000 (    ) (ii) $XVX = 25$ (    )	<b>2*1=2</b>	HOTS
3	<b>Tick the correct answer from the given options:</b>  (i) $10000 + 8000 + 20 + 3$ is the expanded form of - (a) 1823 (b) 18023 (c) 10823  (II) The Roman numeral for 26 is (a) VIXX (b) XVI (c) XXVI  (III) The correct break up for 60606 is (a) $6000+600+6$ (b) $60000+600+6$ (c) $60000+6000+6$  (iv) Eight thousand nine hundred thirty-six in figures is (a) 8396 (b) 8639 (c) 8936  (v) The correct Roman numeral is (a) IIXV (b) XXIV (c) IXIV	<b>5*1=5</b>	Critical thinking
4	<b>Solve the following questions: -</b>		

	<p>(i) Write 734102 in expanded form</p> <p>(ii) Rearrange the following numbers in ascending order: 3001,432,14032,41231,42103</p> <p>(iii) Write the greatest and smallest 4-digit numbers using all digits 8,5,6,3</p> <p>(iv) Write the Hindu Arabic numeral for XXXVI</p> <p>(v) Write the following in Roman numerals: (a) 39 (b) 13</p>	<b>5*1=5</b>	Interdisciplinary
<b>5</b>	<p><b>Solve the following questions:</b></p> <p>(i) Write the smallest 5-digit number using all different digits</p> <p>(ii) Find the sum of the place values of the coloured digits</p> <p style="text-align: center;"><b>8 6 8 4 8</b></p> <p style="text-align: center;"><b>3 5 5 2 5</b></p> <p>(iii) Counting by hundreds write five numbers starting from : (a) 43410 (b) 47235</p>	<b>2*3=6</b>	Problem Solving





**ARMY PUBLIC SCHOOL GWALIOR**  
**CLASS -IV**  
**ACADEMIC SESSION 2021-22**  
**SELF ASSESSMENT**


**Subject: EVS**

**Assignment No. : 1**

**Allotment Date: 18 April 2021**

<b>S. NO.</b>	<b>QUESTIONS</b>	<b>MARKS</b>	<b>NATURE</b>
<b>1</b>	Name two living things.	2*1=2	Information
<b>2</b>	a) Which organ is used by insect to breathe?  b) How many bones in an adult human body?	1x2=2	Understanding
<b>3</b>	Which gas does our body absorb and which gas does it throw out?	2x1=2	Interdisciplinary

<b>4</b>	<p>Define the terms:</p> <p>1.Digest</p> <p>2.Chlorophyll:</p>	$2 \times 2 = 4$	Analytical Skill
<b>5</b>	Why do birds sit on their eggs?	$3 \times 1 = 3$	HOT
<b>6</b>	How do living things depend on non-living things?	$2 \times 1 = 2$	Critical Thinking and Problem Solving
<b>7</b>	What does a seed require to grow into a seedling?	$2 \times 1 = 2$	Evaluation
<b>8</b>	How do mammals take care of their young ones?	$3 \times 1 = 3$	Communication Skills



**ARMY PUBLIC SCHOOL GWALIOR**  
**CLASS -IV**  
**ACADEMIC SESSION 2021-22**  
**SELF ASSESSMENT**




**Subject: Computer**  
**Allotment Date: 18 April 2021**

**Assignment No. : 1**

<b>S. NO.</b>	<b>QUESTIONS</b>	<b>MARK S</b>	
<b>1</b>	<b>Fill in the blanks:</b>  (i) I was the first counting machine  _____	2x1=2	Information
<b>2</b>	<b>Write True or False:</b>  (i) Mark I was the first electro mechanical computer.  ( )  (ii) Personal computer was developed by IBM in 1994.  ( )	2x1=2	Understanding

<p><b>3.</b></p>	<p><b>Choose the correct answer.</b></p> <p>(i) ..... is known as the "Father of computer."</p> <p>a. Charles Babbage <input type="checkbox"/></p> <p>b. Herman Hollerith <input type="checkbox"/></p> <p>c. Blaise Pascal <input type="checkbox"/></p> <p>(ii) The first electro-mechanical computer was</p> <p>a. ENIAC <input type="checkbox"/></p> <p>b. UNIVAC <input type="checkbox"/></p> <p>c. Mark I <input type="checkbox"/></p>	<p>2x1=2</p>	<p>HOT</p>
<p><b>4.</b></p>	<p><b>Answer the following questions.</b></p> <p>(i) When and by whom was the first PC developed?</p> <p>(ii) What was the use of Herman Hollerith's Tabulating machine?</p> <p>(iii) Who is known as the father of the computer?</p>	<p>4x1=4</p>	<p>Communication</p> <p>Skills</p>

	<p>(iv) How did early man count?</p> <hr data-bbox="327 398 1129 405"/>		
--	---	--	--



**ARMY PUBLIC SCHOOL GWALIOR**  
**CLASS -IV**  
**ACADEMIC SESSION 2021-22**  
**SELF ASSESSMENT**




**Subject: G.K**

**Assignment No. : 1**

**Allotment Date: 18 April 2021**

<b>S. NO</b>	<b>QUESTIONS</b>	<b>MARKS</b>	<b>NATURE</b>
1.	Tick the correct answer:  1) Which number of the ' big cat ' family has species called the Indian and Siberian?  a) Cat b)Dog c)Horse	1*1=1	Information
2.	Fill in the blank:  1. ----- animals are called vacuum cleaners of the sea.  2.----- tower is located in Italy and has 294 steps.	2*1=2	Understanding


3.	Which is the deepest point in the ocean?	1*1=1	Interdisciplinary
4.	True or False:  1. The Alps is the longest mountain range in the world.	1*1=1	Analytical  Skill
5.	What makes bees and mosquitoes create a loud buzzing noise?	1*1=1	HOT
6.	Identify the given pictures:  	2*1=2	Critical Thinking and Problem Solving



b.

7.	1) Which device is used to check patient's blood pressure?	1*1= 1	Evaluation
8.	1) Which mountain range marks the traditional boundary between Asia and Europe?	1*1=1	Communication Skills





**ARMY PUBLIC SCHOOL GWALIOR**  
**CLASS -IV**  
**ACADEMIC SESSION 2021-22**  
**SELF ASSESSMENT**



**Subject: Art Education**  
**Allotment Date: 18 April 2021**

**Assignment No. : 1**

S.no	Questions	Marks
1.	A path between two points is a? <ul style="list-style-type: none"><li>• Texture</li><li>• Shape</li><li>• Pattern</li><li>• Line</li></ul>	5 x 2 = 10
2.	Circle is a ___Shape <ul style="list-style-type: none"><li>• Tertiary Shape</li><li>• Basic Primary</li><li>• Basic Secondary</li><li>• Not any</li></ul>	
3.	Square is a ____shape <ul style="list-style-type: none"><li>• 2D</li><li>• 3D</li><li>• 5D</li><li>• Not any</li></ul>	

4.

A Triangle has \_\_\_sides

- 4
- 5
- 3
- 2

5


\_\_\_ are the basic Shapes

- Triangle, oval, square
- Square, rectangle, Circle
- Circle, oval, triangle
- Square, Triangle, Circle

6

Rectangle is a basic Shape

- True
- False



**ARMY PUBLIC SCHOOL GWALIOR**  
**CLASS -IV**  
**ACADEMIC SESSION 2021-22**  
**SELF ASSESSMENT**




**Subject: Health and Physical Education**

**Assignment No. : 1**

**Allotment Date: 18 April 2021**

<b>S.NO</b>	<b>GIVE SHORT ANSWER</b>	<b>MARKS 2X5</b>
1.	Write down the any four type of “pranayama.	2
2	What is the meaning of “Pranayama”?	2
3	Write down the any four effect of “Pranayama” in our body.	2
4	What is “rechaka” in Pranayama?	2
5	What is “Puraka’ in pranayama.	2



**ARMY PUBLIC SCHOOL GWALIOR**  
**CLASS -IV**  
**ACADEMIC SESSION 2021-22**  
**SELF ASSESSMENT**



**Subject: Work Education**  
**Allotment Date: 18 April 2021**

**Assignment No. : 1**

S.no	MCQ's	Marks 10
1.	<b>Which state is famous for puppets?</b> <b>a punjab</b> <b>b Rajasthan, Orisa</b> <b>c Madhya Pradesh</b>	5x2=10
2	<b><u>Which state is famous for Kathputli ( Dance) puppet?</u></b> <b><u>a. Rajasthan</u></b> <b><u>b. Maharashtra</u></b> <b><u>c. Tamil Nadu</u></b>	
3	<b><u>Why do we use puppets?</u></b> <b><u>a. Story telling,Singing,dancing</u></b> <b><u>b. Game,</u></b> <b><u>c. Painting</u></b>	
4	<b>Puppets stimulate imagination encourage creative Play.</b> <b>a. False</b> <b>b. True</b>	
5.	<b>Finger puppets are hand puppets?</b> <b>a.True</b> <b>b.False</b>	

6

**What materials are used to make puppets?**

**a. water colour, pen, card board, wodden.**

b. Colour paper, hair, eyes, fabric clothes, scissor, needle, fe



ARMY PUBLIC SCHOOL GWALIOR  
CLASS -IV  
ACADEMIC SESSION 2021-22  
SELF ASSESSMENT




Subject: Dance  
Allotment Date: 18 April 2021

Assignment No. : 1

क्र.	सही विकल्प चुनकर लिखिए।	अंक	प्रकृति
1.	तीन ताल में कितनी मात्रा होती है? (अ) 12 (ब) 16 (स) 20	1x2=2	बोधात्मक
2.	दादरा ताल में कितनी मात्रा होती है? (अ) 6 (ब) 7 (स) 4	1x2=2	सूचनापरक
3.	कहरवा ताल में कितनी मात्रा होती है? (अ) 8 (ब) 7 (स) 6	1x2=2	अंतःविषयात्मक
4.	तीन ताल में कितनी खाली होती है? (अ) 1 (ब) 4	1x2=2	गहनसोच और समस्या समाधान

	(स) 3		
5.	कहरवा ताल में कितनी खाली होती है? (अ) 5 (ब) 4 (स) 1	1x2=2	उच्चस्तरीय चिंतन



**ARMY PUBLIC SCHOOL GWALIOR**  
**CLASS -IV**  
**ACADEMIC SESSION 2021-22**  
**SELF ASSESSMENT**




**Subject: Library**

**Assignment No. : 1**

**Allotment Date: 18 April 2021**

<b>S.NO</b>	<b>SHORT ANSWER</b>	<b>MARKS</b>
1	What is library	2
2	How many types of library	2
3	What is academic library	2
4	What is library objectives	2
5	What is categories of book	2





**ARMY PUBLIC SCHOOL GWALIOR**  
**CLASS -IV**  
**ACADEMIC SESSION 2021-22**  
**SELF ASSESSMENT**

**Subject: Discipline**  
**Allotment Date: 18 April 2021**

**Assignment No. : 1**

**NETIQUETTE**

**<sup>1</sup>Before you start---**

**Sit in a quiet place**

**Be SMART do on your own**

**Submit on TIME**

**Q:1 What is Netiquette, Choose the correct option/s,**

- a. How to misbehave**
- b. How to become smart**
- c. Online behaviour for e- classes and social media**
- d. Ability to handle Social Media Communication- WhatsApp, Facebook, Email, Instagram etc**

**Q:2 Correct the given sentence-**

- a. When attending online classes it is ok not to dress up properly-**

---

---

---

---

- b. I can stay unmuted while teacher is teaching on Zoom/meet/teams-**

---

---

---

---

---


**Q:3 Match the following symbols-**



At the rate



Email/ Gmail



Wikipedia the free encyclopedia



Twitter



Instagram

**Q: 4 Draw a neat and colourful picture of any one (1)**

a. Your Online class

- b. WhatsApp Logo/Facebook logo
- c. Poster for class display about Online Class Rules

**STAY HOME!!!! STAY SAFE!!!**  
**LET'S DEFEAT CORONAVIRUS TOGETHER !!!**