



ARMY PUBLIC SCHOOL GWALIOR

CLASS- III

ACADEMIC SESSION 2020-2021

WORKSHEET (SELF -ASSESSMENT TEST)



Subject: English

Assignment No. : 11

Allotment Date: 12 February 2021

S.NO.	QUESTIONS	MARKS	NATURE
1.	<p>Fill in the blanks with the correct words from the brackets:</p> <p>(i) Look at the calendar _____ the wall. (under/on)</p> <p>(ii) Most people _____ with their _____ hands. (right/write)</p> <p>(iii) We _____ doing our homework tomorrow. (will do/will be)</p> <p>(iv) The guard is sitting _____ the gate. (after/in front)</p>	4X0.5=2	Information
2.	<p>Fill in the blanks:</p> <p>(i) The _____ of musicians performed well. (team/band)</p> <p>(ii) Arrange all the _____ (book/books) on the shelf.</p> <p>(iii) Sam is a _____ boy. (smarter/smart)</p>	3X1=3	Understanding

<p>3.</p>	<p>Write the correct past form of given verbs:</p> <p>(i) fight -</p> <p>(ii) leave -</p> <p>(iii) sing -</p>	<p>3X1=3</p>	<p>Interdisciplinary</p>
<p>4.</p>	<p>Underline the adverbs in the following sentences:</p> <p>i) I chew my food properly.</p> <p>ii) Radhika is studying upstairs.</p>	<p>2X1=2</p>	<p>Analytical Skill</p>
<p>5.</p>	<p>Write down the meanings of the following words:</p> <p>(i) rapid - _____</p> <p>(ii) gaze - _____</p> <p>(iii) conqueror- _____</p> <p>(iv) stoops- _____</p>	<p>4X0.5=2</p>	<p>Critical Thinking and Problem Solving</p>
<p>6.</p>	<p>Choose the correct options:</p> <p>i) She doesn't _____ sweets</p> <p>a) like b) likes c) liked</p> <p>ii) _____! There is a fly in the milk.</p> <p>a) Ouch b) Yuck c) Hello</p>	<p>2X1=2</p>	<p>HOT</p>
<p>7.</p>	<p>Write the following sentences using ' - or 's:</p> <p>(i) Nandini sells <u>the purses of the ladies.</u></p> <p>.....</p> <p>(ii) The teacher is checking <u>notebooks of the students.</u></p> <p>.....</p> <p>(iii) <u>The ears of rabbits</u> are large.</p>	<p>2X1=2</p>	<p>Evaluation</p>

	<p>.....</p> <p>(iv) <u>The neck of a giraffe is very long.</u></p> <p>.....</p>		
<p>8.</p>	<p>Answer the following questions:</p> <p>(i) How did Mihir Sen set a world record?</p> <p>.....</p> <p>.....</p> <p>iii) Who comes to look after the stars in the poem 'Mother Moon' ?</p> <p>.....</p> <p>.....</p> <p>.....</p> <p>iv) What is the Solar System made up of?</p> <p>.....</p> <p>.....</p> <p>.....</p> <p>.....</p> <p>.....</p> <p>(iv) How did the crab save himself?</p> <p>.....</p> <p>.....</p> <p>.....</p> <p>.....</p>	<p>4X1=4</p>	<p>Communication Skills</p>



ARMY PUBLIC SCHOOL GWALIOR

CLASS- III

ACADEMIC SESSION 2020-2021

WORKSHEET (SELF -ASSESSMENT TEST)



Subject: Hindi

Assignment No. : 11

Allotment Date: 12 February 2021

संख्या	प्रश्न/उत्तर	अंक	प्रकृति
प्र.1	सही वाक्यों के सामने सही (V) व गलत के सामने गलत (X)का निशान लगाएँ। क. एंटीनेटो एक धनी व मतलबी व्यक्ति था। () ख. फूल पेड़ के अंदर से ही आते हैं। () ग. डाकू का नाम महात्मा बुद्ध था। () घ. फूल खिलकर चारो ओर मधु फैलाते हैं। ()	4X1=4	बोधार्थक
प्र.2	जोड़े मिलाओ क. असत्य (i)साडियॉ ख. साड़ी (ii)धोबिन ग धोबी (iii)पत्ते घ . पत्ता (iv)सत्य	4X1=4	सूचना परक
प्र.3	क. चौकीदार ने घास की रस्सी क्यों बाँधी ? _____ _____	2X1=2	अंतः विषयात्मक

	<p>ख. वचन के कितने भेद हैं ?</p> <hr/> <hr/>																	
प्र.4	<p>(क) 'फूल' नामक कविता में माली प्रश्न का क्या उत्तर देता है ?</p> <hr/> <hr/> <p>(ख) 'आप जंगल से होकर यात्रा न करें।' यह वाक्य किसने और किससे कहा ?</p> <hr/> <hr/>	2X1=2	गहनसोचऔरसमस्यासमाधान															
प्र.5	<p>(क) डाकू का नाम अंगुलिमाल क्यों पड़ा होगा ?</p> <hr/> <hr/> <p>(ख) 'फूल' नामक कविता के कवि का नाम बताओ।</p> <hr/> <hr/>	2X1=2	उच्चस्तरीय चिंतन															
प्र.6	<p>शब्द लिखो</p> <table style="width: 100%; border: none;"> <thead> <tr> <th style="width: 30%;"></th> <th style="width: 35%; text-align: center;">विशेषण</th> <th style="width: 35%; text-align: center;">संज्ञा</th> </tr> </thead> <tbody> <tr> <td>क. रंगदार</td> <td style="text-align: center;">.....</td> <td style="text-align: center;">.....</td> </tr> <tr> <td>ख. चूड़ीदार</td> <td style="text-align: center;">.....</td> <td style="text-align: center;">.....</td> </tr> <tr> <td>ग. वफादार</td> <td style="text-align: center;">.....</td> <td style="text-align: center;">.....</td> </tr> <tr> <td>घ. शानदार</td> <td style="text-align: center;">.....</td> <td style="text-align: center;">.....</td> </tr> </tbody> </table>		विशेषण	संज्ञा	क. रंगदार	ख. चूड़ीदार	ग. वफादार	घ. शानदार	4X1=4	विश्लेषणात्मक
	विशेषण	संज्ञा																
क. रंगदार																
ख. चूड़ीदार																
ग. वफादार																
घ. शानदार																

प्र.7	निम्न लिखित प्रश्न का उत्तर दो:- (क) राजा ने घोड़े की क्या मदद की? _____ _____ (ख) 'उजाला' का विलोम शब्द बताएँ। _____ _____	2x1=2	भाषायीकौशल
-------	---	-------	------------



ARMY PUBLIC SCHOOL GWALIOR
CLASS- III





ACADEMIC SESSION 2020-2021

WORKSHEET (SELF -ASSESSMENT TEST)

Subject: Mathematics

Assignment No. : 11

Allotment Date: 12 February 2021

S. NO.	QUESTIONS	MARKS	NATURE
1.	Fill in the placeholders: (i) and are the visual forms of representation of the data. (ii) In which month do we get Christmas holiday?	2X1=2	Information
2.	Read the time and write in the blanks given below: - i)  ii) 	2x1=2	Understanding
3.	Answer the following questions - * How many one – third are in a whole?.....	2x1=2	

	<p>*The numerator of a fraction is 13 and the denominator is 19. What is the fraction?</p>		Interdisciplinary
4.	<p>Convert the following:</p> <p>* 8 km 758 m into metres</p> <p>* 5434 paise into rupees</p> <p>* 5 kg 200 g into grams</p>	3x1=3	Analytical Skill
5.	<p>Simplify the following:</p> <p>I. $(5 \times 300) + (60 \times 1)$</p> <p>_____</p> <p>_____</p> <p>_____</p> <p>_____</p> <p>ii. Write 37 rupees 50 paise in short form:</p> <p>-----</p> <p>-----</p>	2x1=2	Critical Thinking and Problem Solving

6.	Find the quotient and remainder and verify the answer: $2019 \div 8$	2x1=2	HOT
7	Word Problems – i. A school bag of a boy weighs 8 kg 900 g. If the books in the bag weigh 6 kg 500 g, what is the weight of other items? 	3x1=3	Evaluation

i) Two bottles contain 3 litres 500 mL and 2 litres 485 mL milk.



Find the total quantity of milk.

.....
.....
.....
.....
.....

ii) The product of two numbers is 2455. If one of them is 5, find the other.

.....
.....
.....
.....
.....

8.

Lion	
Monkey	

$4 \times 1 = 4$

Communication Skills

Giraffe



Turtle



Read the pictograph and answer the questions:

(a) What did Sanya see?

Ans.-

.....

(b) How many giraffes did she see?

Ans.-

.....

(c) How many monkeys did she see?

Ans.-

.....

(d) How many turtles and lions did she see altogether?

Ans. -

.....



ARMY PUBLIC SCHOOL GWALIOR

CLASS- III

ACADEMIC SESSION 2020-2021

WORKSHEET (SELF -ASSESSMENT TEST)



Subject: EVS

Assignment No. : 11

Allotment Date: 12 February 2021

S.N	QUESTIONS	MARKS	NATURE
1.	Fill in the blanks by choosing the correct options: a) There are certain signs and on the road that helps us to stay safe. (Marks / Directions) b) Early man lived in (Huts / Caves)	2X1=2	Information
2.	Define the following terms- a) communication b) Compass	3x1=3	Understanding

c)	<p>Project Tiger</p> <p>.....</p> <p>.....</p> <p>.....</p> <p>.....</p> <p>.....</p> <hr/>		
	<p>.....</p> <hr/>		
3.	<p>Answer the following-</p> <p>a) Why is the earth called a special planet?</p> <p>.....</p> <hr/> <p>b) Why are national symbols important?</p> <p>.....</p> <p>.....</p> <p>.....</p> <p>.....</p>	2x1=2	Interdisciplinary
4.	<p>Write true (T) or false (F) against the following statements:</p>	3X1=3	Analytical Skill



	<p>i) Our railway station tea is sold in cups.</p> <p>ii) Rafts were used to load things. <input type="checkbox"/></p> <p>(i) We watch live match, on radio. <input type="checkbox"/></p>		
<p>5.</p>	<p>Choose the correct option:</p> <p>(i) If we need to listen to old speeches, we use a</p> <p>a) magazine <input type="checkbox"/> b)radio <input type="checkbox"/> c) newspaper <input type="checkbox"/></p> <p>(ii) Number of main directions</p> <p>a) two <input type="checkbox"/> b) three <input type="checkbox"/> four <input type="checkbox"/></p>	<p>2X1=2</p>	<p>Critical Thinking and Problem Solving</p>
<p>6.</p>	<p>Name four landmarks you see on your way to school.</p> <p>_____</p> <p>_____</p> <p>_____</p>	<p>2x1=2</p>	<p>HOT</p>
<p>7.</p>	<p>Answer the following questions:</p> <p>(ii) Why did early man move from place to place?</p> <p>.....</p>	<p>3X1=3</p>	<p>Evaluation</p>

	<p style="text-align: center;">_____</p> <p>(iii) What are satellites? How are they different from the stars?</p> <p>_____</p> <p>.....</p> <p>_____</p> <p>.....</p> <p>.....</p> <p>.....</p> <p>.....</p> <p>.....</p> <p>.....</p> <p>(iv) How do people in South India decorate their houses during festivals ?</p> <p>_____</p> <p>.....</p> <p>_____</p> <p>.....</p>		
8	<p>Answer the following questions :</p> <p>(i) Draw the national flag of Panama.</p>	3x1=3	Communication Skills

	<p>(ii) Name two neighbouring states of Delhi.</p> <hr/>		
--	--	--	--

(iii) What is the old name of Kolkata in early time ?



ARMY PUBLIC SCHOOL GWALIOR

CLASS- III

ACADEMIC SESSION 2020-2021

WORKSHEET (SELF -ASSESSMENT TEST)








Subject: Computer

Assignment No. : 10

Allotment Date: 12 February 2021

S. NO.	QUESTIONS	MARK S	
1	<p>Fill in the blanks:</p> <p>(i) Windows is the most popular _____.</p> <p>(ii) You must _____ your image for future use.</p> <p>(iii) Word file is saved with _____ extension.</p> <p>(iv) You can draw shapes with the help of different _____ in a tool box.</p>	4x1=4	Informatio n
2	<p>Write True or False:</p> <p>(i) Windows 7 is a GUI-based software. ()</p> <p>(ii) Formatting means making any changes to the document. ()</p> <p>(iii) You can rub the drawing by using Eraser tool. ()</p>	4x1=4	Understand ing

	(iv) Windows is an Application System Software. ()		
3	<p>Match the following:</p> <p>(i)  a) Eraser Tool</p> <p>(ii)  b) Brush Tool</p> <p>(iii)  c) Polygon Tool</p> <p>(iv)  d) Oval Tool</p> <p>(v)  e) Text Tool</p>	5x1=5	Interdisciplinary
4	<p>Choose the correct answer.</p> <p>(i) The bar at the bottom of desktop is known as</p> <p>a) Scroll bar <input type="checkbox"/> b) Title bar <input type="checkbox"/> c) Task bar <input type="checkbox"/></p> <p>(ii) This tool is used to delete a part of any drawing</p> <p>a) Eraser tool <input type="checkbox"/> b) New tool <input type="checkbox"/> c) Line tool <input type="checkbox"/></p> <p>(iii) We can use double-click to select a</p> <p>a) Paragraph <input type="checkbox"/> b) Word <input type="checkbox"/> c) Line <input type="checkbox"/></p> <p>(iv) It is a program used to draw pictures</p> <p>a) MS-Word <input type="checkbox"/> b) Notepad <input type="checkbox"/> c) MS-Paint <input type="checkbox"/></p>	4x1=4	HOT

5	Answer the following questions. (i) What is Crop tool used for? <hr/> (ii) What is the use of a Mouse Pointer? <hr/> <hr/> (iii) What is formatting? <hr/> <hr/>	3x1=3	Communic ation Skills
----------	---	-------	------------------------------



ARMY PUBLIC SCHOOL GWALIOR

CLASS- III

ACADEMIC SESSION 2020-2021

WORKSHEET (SELF -ASSESSMENT TEST)



Subject: G.K

Assignment No. : 2

Allotment Date: 12 February 2021

S. NO	QUESTIONS	MARKS	NATURE
1	<p><u>Tick the correct answer</u></p> <ol style="list-style-type: none">Which vehicle can travel over both land and water? hovercraft seaplane airplaneWhich is the largest internal organ in the human body? Liver Stomach LungsWhere was first Cricket World Cup held? India England AustraliaWhat is the shortcut key to create a new document? Shift+ ctrl + n Ctrl + n Ctrl + vIn which year was WhatsApp launched? 2009 200 2010	5X1=5	Information

<p>2</p>	<p>Fill in the blanks :</p> <ol style="list-style-type: none"> 1. A mural is a _____ . 2. _____ created the slogan ‘ Dilli Chalo ‘. 3. _____ is the hottest planet of the solar system. 4. We celebrate Earth Day on _____. 5. _____ leads are made of graphite. 	<p>5X1=5</p>	<p>Understanding</p>
<p>3</p>	<p>True and False:</p> <ol style="list-style-type: none"> 1. The adult frog lays egg in water. 2. Bihar is the home of Dalai Lama in India. 3. Euro is the currency of South Africa. 4. Pratibha Patil was the twelfth president of India. 5. Eye muscles are the busiest muscles in the body. 	<p>5x1=5</p>	<p>Analytical Skill</p>

Match the following:

1. Polo - Assam

5x1=5

2. ATM - Japan

3. Protein - Iran

4. Yen - Automated Teller Machine

5. Bihu - Milk



ARMY PUBLIC SCHOOL GWALIOR
CLASS- III



ACADEMIC SESSION 2020-2021

WORKSHEET (SELF -ASSESSMENT TEST)

Subject: Art and Work Education

Assignment No. : 10

Allotment Date: 12 February 2021

Tick the correct answer

Q1. How many types of rangoli are there?

- a.) 3
- b.) 2
- c.) 4

Q2. From which items below we can make rangoli?

- a.) Rice Floor
- b.) Turmeric
- c.) Chemical colours
- d.) All of the above

Q3. What is another name of Madhubani art?

- a.) Tanjore art
- b.) Kalamkari art
- c.) Mithila art

Q4. White Rangoli powder is made up of Rock powder.

- d.) True
- e.) False

Q5. Which state is famous for block painting?

- a.) Madhya Pradesh
- b.) Rajasthan
- c.) Maharashtra

Q6. In video which material is used for spray painting?

- a.) Graphite
- b.) Clay
- c.) Water

Q7. Which paint is used for glass bottle painting art?

- f.) Sketch colour
- g.) Water colour
- h.) Acrylic colour

Q8. Which thread is used (in video) for Rakhi Making at home?

- a.) Resham
- b.) Kalava
- c.) All of these

Q9. Newspaper is used to make Coaster art.

- a.) True
- b.) False

Q10. _____ Fabric is considered as best for block painting.

- a.) Cotton fabric
- b.) Nylon fabric

Q11. Block painting by hand is a _____ process.

- a.) Fast
- b.) Slow

Q12. _____ block is used in block painting.

- a.) Wooden
- b.) Stone
- c.) Plastic

Q13. In the video of Pen holder making we use square shape of paper.

- a.) True
- b.) False

Q14. In video _____ is used to make coaster art.

- a.) Coloured paper
- b.) Newspaper

Q15. Which city of India is famous of murals?

- a.) Agra
- b.) Kerala
- c.) Chennai

Q16. A mural art is a _____.

- a.) Wall painting
- b.) Ground painting

Q17. How natural colours can be used in Gond art?

- a.) Plant sap colour
- b.) Leaves colour
- c.) Soil Colour
- d.) All of the above

Q18. Rangoli is an Indian traditional or folk art, usually created on the floor on festival occasions.

- a.) True
- b.) False

Q19. Which one is the source for the colours that are generally used in Madhubani painting?

- a.) Acrylic
- b.) Colours derived from natural dyes
- c.) Oil colours
- d.) All of these


Q20. Which one is the type of Rangoli?

- a.) Dotted rangoli
- b.) Free hand rangoli
- c.) Flower petal rangoli
- d.) All of them

Q21. Which pen is used for Madhubani painting?

- a.) Nip pen
- b.) Sketch pen
- c.) Both a & b
- d.) None of these

--



ARMY PUBLIC SCHOOL GWALIOR

CLASS- III

ACADEMIC SESSION 2020-2021

WORKSHEET (SELF -ASSESSMENT TEST)



Subject: Physical Education

Assignment No. : 10

Allotment Date: 12 February 2021

S.NO	QUESTIONS	MARKS
	Fill in the Blanks:	5 x 1 = 5
1.	_____ is the equipment used in Making Shapes. a) markers to show playing area and home bases. b) markers to show throw lines. c) Lime powder d) A and B	
2.	“Be careful when collecting and chasing after balls” is the Safety Measure of_____. a) Shooting and scoring games b) Making Shapes c) Jumping and hoping d) None of the above	
3.	“Use more complex shapes or figures.” is the variation of _____ game. a) Making Shapes b) Shooting and scoring game c) Both A and B d) None of the above	
4.	Ropes and cones are required in _____ game. a) Jumping for height b) Catch up c) Jump up d) All of the above	
5.	“Keep alert and watch out for the ball.” is the safety measure of _____ game. a) jumping for height b) catch up c) hoping d) None of the above	

	True / False	
6.	We can play catch up at home. a) True b) False	5 x 1 = 5
7.	Jumping helps in growth of height. a) True b) False	
8.	Avoid pulling or tugging each other when making the shapes is the safety measure of Catch up. a) True b) False	
9.	“We should be careful during collection and chasing of balls” is the safety measure of Standing Kho. a) True b) False	
10.	Playing individually and with others is the variation of jumping for height. a) True b) False	
	MCQs	
11.	Choose the equipment which come under Using Equipment - a) Ball b) Skipping rope c) Hockey stick d) All of the above	10 x 1 = 10
12.	Of what we have to take care while using Equipment? a) Keep within the playing area b) Be careful when retrieving stray balls c) Use soft, light balls d) All of the above	
13.	How many players are there in one team in Making Shapes? a) 15 b) 14 c) 13 d) 12	

14.	<p>Name the equipment used in jumping for height -</p> <ul style="list-style-type: none"> a) Different sized boils or other objects for throwing and catching. b) Ropes and cones. c) Marker and measuring lope to measure height of upward jumps d) All of the above 	
15.	<p>“Keep alert and watch out for the ball” is the safety measure of which game?</p> <ul style="list-style-type: none"> e) Jumping for height. f) Catch up. g) Hoping. h) None of the above. 	
16.	<p>What is the variation of jumping for heights?</p> <ul style="list-style-type: none"> a) Increase the distance between players. b) Use different sized balls, bean bags and rings. c) Use different passes: chest pass, underarm throw, bounce pass and overhead pass. d) Make the activities competitive. How high can you reach, how quickly can you jump over the cones? 	
17.	<p>In which game do we require Ropes and cones?</p> <ul style="list-style-type: none"> e) Jumping for height f) Catch up g) Jump up h) All of the above 	
18.	<p>“Avoid pulling or tugging each other when making the shapes.” is the Safety Measure of-</p> <ul style="list-style-type: none"> a) Making Shapes b) Shooting and scoring game c) Jumping for height d) None of the above 	
19.	<p>What is the variation used in Shooting and scoring game?</p> <ul style="list-style-type: none"> a) Use smaller balls. b) Reduce the size of the targets. c) Increase the height of the target. d) All of the above 	
20.	<p>“Increase the distance over which children must run to return to their home corners.” is the variation of which game?</p> <ul style="list-style-type: none"> a) Making Shapes b) Shooting and scoring game c) Jumping for height d) None of the above 	

--	--	--

--	--	--



ARMY PUBLIC SCHOOL GWALIOR

CLASS- III

ACADEMIC SESSION 2020-2021

WORKSHEET (SELF -ASSESSMENT TEST)



Subject: Music

Assignment No. : 10

Allotment Date: 12 February 2021

रिक्त स्थान में सही उत्तर भरे -

प्र1. संगीत में स्वर होते है ।

- 1)6
- 2)7
- 3)9
- 4) 10

प्र2. दादरा ताल मेंमात्रा होती है।

- 1) 10
- 2) 8
- 3) 6
- 4) 7

प्र3. इस प्रार्थना को पूरा करे --

तुम ही हो माता तुम ही हो ।

- 1) जान
- 2) पिता
- 3) गुरु
- 4) भगवान

सही या गलत पहचानिए --

प्र 4 . गिटार में 4 तार होती है ।

- 1) सही

2) गलत

प्र5. हारमोनियम एक ताल वाद्य है ।

- 1) सही
- 2) गलत

प्र6. ताल तबले पर बजाई जाती है ।

- 1) सही
- 2) गलत

सही विकल्प चुनकर लिखिए

प्र7. तानसेन कौन थे ?

- 1) गायक
- 2) नृतक
- 3) कवि
- 4) लेखक

प्र8. इस ताल वाद्य को



पहचानिए ?

- 1) ड्रम
- 2) ढोलक
- 3) सितार
- 4) तबला

प्र9. ताल दादरा के बोल है -

- 1) धा धी ना धा ती ना
- 2) धा धिं धीं धा
- 3) धा धा दिन ता तिट कत गदी गन
- 4) क धित धिट धा का तीट टित ता

प्र10. उस्ताद ज़ाकिर हुसैन कोनसा वाद्य बजाते है ?

- 1) गिटार
- 2) सितार
- 3) तबला
- 4) हारमोनियम



ARMY PUBLIC SCHOOL GWALIOR

CLASS- III

ACADEMIC SESSION 2020-2021

WORKSHEET (SELF -ASSESSMENT TEST)



Subject: Dance

Assignment No. : 10

Allotment Date: 12 February 2021

रिक्त स्थान:-

प्रश्न 1. गिद्धा नृत्य _____ के द्वारा किया जाता है।

- a). स्त्रियां
- b). पुरुषों
- c). कोई नहीं

प्रश्न 2. कृष्णा के बाँसुरी बजते ही _____ नृत्य करने लगते थे।

- a). गोकुल वासी
- b). अयोध्या वासी
- c). द्वारिका वासी

प्रश्न 3. बिहू _____ का प्रसिद्ध लोक नृत्य है।

- a). असम
- b). केरल
- c). उड़ीसा

प्रश्न 4. भांगड़ा नृत्य के वाद्य यन्त्र को _____ कहते हैं।

- a). ढोल
- b). तबला
- c). गिटार

प्रश्न 5. गैर नृत्य _____ के द्वारा किया जाता है।

- a). पुरुषो
- b). महिलाओ
- c). भीलों के द्वारा

प्रश्न 6. लावणी नृत्य _____ की थाप पर किया जाता है।

- a). ढोलक
- b). तबला
- c). मंजीरा

प्रश्न 7. गुजरात का प्रसिद्ध नृत्य _____ है।

- a). डांडिया
- b). कत्थक
- c). झूमर

हाँ या नहीं :-

प्रश्न 1. नृत्य करते समय पैरो में कड़े पहने जाते हैं।

- a). हाँ
- b). नहीं

प्रश्न 2. क्या पंजाब का लोकप्रिया नृत्य भांगड़ा है।

- a). हाँ
- b). नहीं

प्रश्न 3. गैर नृत्य करने वाले को गैरिया कहते हैं।

- a). हाँ
- b). नहीं

प्रश्न 4. क्या घूमर नृत्य में नगाड़ा या शेहनाई का उपयोग किया जाता है।

- a). हाँ
- b). नहीं

प्रश्न 5. क्या असम का लोक नृत्य भांगड़ा है।

- a). हाँ
- b). नहीं

प्रश्न 6. कहरवा ताल में आठ मात्रा होती है।

- a). हाँ
- b). नहीं

प्रश्न 7. क्या विष्णु भगवान् के हाथ में चक्र है।

- a). हाँ
- b). नहीं

बहुवैकल्पिक प्रश्न:-

प्रश्न 1. भांगड़ा नृत्य का मुख्या वाद्य यन्त्र कौन सा है।

- a). ढोल
- b). परवावज
- c). मृदंग

प्रश्न 2. राजस्थान का राज्य नृत्य कौन सा है।

- a). गिधदा नृत्य
- b). गरवा नृत्य
- c). घूमर नृत्य

प्रश्न 3. सपेरा जाति का नृत्य कौन सा है।

- a). कठपुतली
- b). कालवेलियां
- c). चारी

प्रश्न 4. झपताल में कितनी मात्रा होती है।

- a). 10
- b). 12
- c). 14

प्रश्न 5. लावणी नृत्य कितने प्रकार की होती है।

- a). 2
- b). 4
- c). 8

प्रश्न 6. महाराष्ट्र का प्रसिद्ध लोक नृत्य कौन सा है।

- a). गरवा
- b). झूमर
- c). लावणी

प्रश्न 7. बिहू नृत्य में किस वाद्य यन्त्र का उपयोग किया जाता है।

- a). ढोल या बासुरी
- b). मंजीरा
- c). बीन

प्रश्न 8. असम का बिहू नृत्य किस गति से आरम्भ होता है।

- a). धीमी गति से तेज
- b). तेज से धीमी गति
- c). मध्य गति से धीमी गति

प्रश्न 9. कृष्ण के बासुरी बजते ही कोन लोग नृत्य करने लगते हैं।

- a). गोकुल वासी
- b). अयोध्या वासी
- c). द्वारिका वासी