



ARMY PUBLIC SCHOOL GWALIOR



CLASS -I

ACADEMIC SESSION 2021-22

WORKSHEET (SELF –ASSESSMENT)

Subject: English

Assignment No. : 3

Allotment Date: 15 June 2021

S.N	QUESTIONS	MARKS	NATURE
1	Fill in the blanks by choosing the correct words from the brackets (i) We use 'he' for a boy or(woman/man). (ii) We use 'it' for a place ,....., (animal/ boy) or thing.	2X1=2	Information
2	Complete the following sentences with He/She/It/They: (i)is my mother. (ii)are my parents. (iii).....is an alligator.	3X1=3	Understanding
3	Write any three sentences about your school. (i) (ii) (iii)	3X1=3	Interdisciplinary
4	Use the capital letter and full stop wherever necessary.	3X1=3	Analytical Skill

	<p>1.meena goes to the airport</p> <p>2.i like to eat apple</p> <p>3.ria is a pretty girl</p>		
5	<p>Correct the following spellings :</p> <p>(i) T Y S O _____</p> <p>(ii) B A E H C _____</p>	2X1=2	Critical Thinking and Problem Solving
6	<p>Make the sentences by using the following words :</p> <p>(i) Friends : _____</p> <p>(ii) Swings : _____</p>	2X1=2	HOT
7	<p>1. Jaya's mother cleaned the wing of the bird.</p> <p>2. The little bird had made a on a tree.</p> <p>3. Jaya wondered when would the eggs</p> <p>4. The bird's wing slowly.</p>	2X1=2	Evaluation
8	<p>Complete the following word chains. Make a new word with the last letter of each word</p> <p>(i) Sharp-pond- -</p> <p>(ii) Dream- men- -</p> <p>(iii) Egg – goat - -</p>	3X1=3	Communication Skills



ARMY PUBLIC SCHOOL GWALIOR

CLASS -I

ACADEMIC SESSION 2021-22

WORKSHEET (SELF –ASSESSMENT)




Subject: Hindi

Assignment No. : 3

Allotment Date: 15 June 2021

संख्या	प्रश्नउत्तर	अंक	प्रकृति
प्र.1	सहीवाक्यों के सामनेसही(V) व गलत के सामनेगलत(X)कानिशानलगाएं। क. अक्षरों के उस मेल को शब्द कहते हैं जिसका कोई अर्थ हो। () ख. अक्षरों के किसी भी प्रकार के मेल को शब्द कहा जा सकता है। () ग. दुनिया की हर चीज का नाम होता है। () घ . नाम को ही क्रिया कहते हैं। ()	1X4=4	बोधात्मक
प्र.2	आ की मात्रा लगाकरसही शब्दबनाओ। क. क.....न ख. थैल..... ग नहान..... घ . लिखन.....	1X4=4	सूचनापरक
प्र.3	क. अंग्रेजी वर्णमाला में कितने अक्षर होते हैं ? ख. अंग्रेजी वर्णमाला में स्वर और व्यंजन अक्षरों की संख्या कितनी है	2x1=2	अंत: विषयात्मक
प्र.4	निम्नलिखित अक्षरों से 'इ'की मात्रा वाले २-२ शब्द लिखिए : नि दि	2x1=2	गहनसोचऔरसमस्यासमाधान

<p>प्र.5</p>	<p>व्यंजन वर्णों की लड़ियाँ पूरी करो:</p> <p>ट " " " " " "</p> <p>प " " " " " "</p>	<p>2x1=2</p>	<p>उच्चस्तरीय चिंतन</p>
<p>प्र.6</p>	<p>निम्नलिखित प्रश्नों के उत्तर दीजिए:</p> <p>क. बच्चे बादल से क्या करने को कह रहे हैं ?</p> <p>ख. डाकिया क्या लाया था ?</p>	<p>2x2=4</p>	<p>विश्लेषणात्मक</p>
<p>प्र.7</p>	<p>निम्नलिखित में 'इ' की मात्रा लगाकर शब्द पूरा करो एवं उस शब्द से एक वाक्य बनाकर लिखो:</p> <p>क. त " " क या.... ..</p> <p>ख. " " क र ण.... ..</p>	<p>2x1=2</p>	<p>भाषायी कौशल</p>



ARMY PUBLIC SCHOOL GWALIOR



CLASS -I

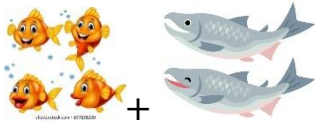
ACADEMIC SESSION 2021-22

WORKSHEET (SELF -ASSESSMENT)

Subject: Mathematics


Assignment No. : 3

Allotment Date: 15 June 2021

S. NO.	QUESTIONS	MARKS	NATURE
1	Write the number names of the following : (i) 8 = _____ (ii) 7 = _____	2x1=2	Information
2	Fill in the placeholders : (i) 5 = ____ (ii) 8 ____8	2x1=2	Understanding
3	Add the objects and fill in the space provided : (i)  +	3x1=3	Interdisciplinary

$$\underline{\quad} + \underline{\quad} = 6$$

(ii)



$$\underline{\quad} + 4 = \underline{\quad}$$

(iii)



$$4 + \underline{\quad} = \underline{\quad}$$

4

Do solve the following :

3X1=3

Analytical Skill

(i)



(ii)



(iii)



5

Count the object and encircle the correct number :

2X1=2

Critical Thinking

(iii)



4 6 10 8



(iv)



and Problem

Solving

	3 4 5 6						
6	<p>Answer the following questions:-</p> <p>(i) Circle all the numbers which comes before 5. 5, 7, 6, 3, 1, 2, 4</p> <p>(ii) How many brothers and sisters do you have ? Add and write. Brothers ____ +Sisters ____ _____ _____</p>	2X1=2	HOT				
7	<p>Add :</p> <table style="width: 100%; border: none;"> <tr> <td style="width: 50%; vertical-align: top;"> <p>(i) 5 +4 _____ _____</p> </td> <td style="width: 50%; vertical-align: top;"> <p>(iii) 3 + 3 _____ _____</p> </td> </tr> <tr> <td style="vertical-align: top;"> <p>(ii) 5 +0 _____ _____</p> </td> <td style="vertical-align: top;"> <p>(iv) 2 +6 _____ _____</p> </td> </tr> </table>	<p>(i) 5 +4 _____ _____</p>	<p>(iii) 3 + 3 _____ _____</p>	<p>(ii) 5 +0 _____ _____</p>	<p>(iv) 2 +6 _____ _____</p>	4x1=4	Evaluation
<p>(i) 5 +4 _____ _____</p>	<p>(iii) 3 + 3 _____ _____</p>						
<p>(ii) 5 +0 _____ _____</p>	<p>(iv) 2 +6 _____ _____</p>						

8	<p>Solve the following word problems:-</p> <p>(i) There are 3 birds in one cage. 6 birds are in another cage. Find the total number of birds in the cages .</p> <p>+  + _____</p> <p>(ii) Harsh brings 2 apples. Neha brings 4 apples. How many apples altogether do they bring?</p> <p>+  _____ _____</p>	2x1=2	Communication Skills
----------	--	-------	-----------------------------



ARMY PUBLIC SCHOOL GWALIOR

CLASS -I

ACADEMIC SESSION 2021-22

WORKSHEET (SELF –ASSESSMENT)



Subject: EVS


Assignment No. : 3

Allotment Date: 15 June 2021

S.N	QUESTIONS	MARKS	NATURE
1	Fill in the blanks by choosing the correct options : a) All members of a family have a common(first name / surname) b) Uncle's son is known as.....(brother/ cousin)	2X1=2	Information
2	a) What do you mean by relatives? b) What is nuclear family ? c)	3X1=3	Understanding

	<p>What is joint family ?</p> <p>-----</p>		
3	<p>Q.4 What do you understand by family?</p> <hr/> <hr/>	1X2=2	Interdisciplinary
4	<p>Write true (T) or false (F) against the following statements:</p> <p>1. We support our family members. <input type="checkbox"/></p> <p>2. A family is very important to all of us.. <input type="checkbox"/></p> <p>3. We all live in a family . <input type="checkbox"/></p>	3X1=3	Analytical Skill
5	<p>Choose the correct option:</p> <p>(i) Father's grandfather is called _____.</p> <p>a) father b) grandfather c) mother</p> <p>(ii) Mother's brother is called _____.</p> <p>a) uncle b) aunt c) nana</p>	2X1=2	Critical Thinking and Problem Solving
6	<p>Q 1. Write two duties your father performs for the family.</p>	1X2=2	HOT

	<p>Ans----- .</p> <p>Q2. Write two duties you performs for your family.</p> <p>Ans----- .</p>		
<p>8</p>	<p>This is my family. Let me introduce the members of my family.</p> <p>My mother's name is _____.</p> <p>She is a _____.</p> <p>My father's name is _____.</p> <p>He is a _____.</p> <p>I have _____ sister/s and _____ brother/s.</p>	<p>6X1=6</p>	<p>Communicatio n Skills</p>



ARMY PUBLIC SCHOOL GWALIOR



CLASS -I

ACADEMIC SESSION 2021-22





WORKSHEET (SELF –ASSESSMENT)





Subject: Computer


Assignment No. : 3

Allotment Date: 15 June 2021

S. NO.	QUESTIONS	MARKS	NATURE																				
1	<p><u>Tick the correct answer</u></p> <p>A monitor looks like ascreen.</p> <ol style="list-style-type: none">1.CPU2.Paint3.Tv <p>The buttons on a keyboard are known as.....</p> <ol style="list-style-type: none">1.Keys2.Cursor3.Pointer	2X1=2	Information																				
2	<p><u>A. Who am I?</u></p> <p>I have many buttons on me which are used to type numbers or words.</p> <table border="1" style="width: 100%;"><tr><td> </td><td> </td><td> </td><td> </td><td> </td><td> </td><td> </td><td> </td></tr></table> <p>I help you to draw lines, sketches and to play games.</p> <table border="1" style="width: 100%;"><tr><td> </td><td> </td><td> </td><td> </td><td> </td></tr></table> <p>I look like a television screen.</p> <table border="1" style="width: 100%;"><tr><td> </td><td> </td><td> </td><td> </td><td> </td><td> </td><td> </td></tr></table>																					4X1=4	Understanding

	<p>I am the brain of a computer.</p> <div style="border: 1px solid black; width: 280px; height: 25px; margin: 10px auto;"></div>		
<p>3</p>	<p>State whether the following statements are TRUE or FALSE</p> <p>A mouse is used to move the mouse pointer on the screen. ----</p> <p>A monitor is used to see cartoons. ----</p> <p>A monitor is the brain of a computer. ----</p> <p>A computer mouse has four buttons. -----</p>	<p>4X1=4</p>	<p>Critical</p> <p>Thinking and</p> <p>Problem</p> <p>Solving</p>
<p>4</p>	<p>Match the following</p> <div style="display: flex; flex-direction: column; align-items: center;"> <div style="display: flex; align-items: center; margin-bottom: 20px;">  <div style="margin-left: 100px;">CPU</div> </div> <div style="display: flex; align-items: center; margin-bottom: 20px;">  <div style="margin-left: 100px;">keyboard</div> </div> <div style="display: flex; align-items: center; margin-bottom: 20px;">  <div style="margin-left: 100px;">mouse</div> </div> <div style="display: flex; align-items: center;">  <div style="margin-left: 100px;">monitor</div> </div> </div>	<p>4X1=4</p>	<p>Analytical</p> <p>Skill</p>

	<p>Your father wants to reach office quickly. He should go buy_____?</p> <p>1.Cycle 2.Car 3.walk</p> <p>Your brother wants to go to the 6th floor of the mall quickly. he should use_____ .</p> <p>1.Stairs 2.Escalator 3.Rope</p>	2X1=2	HOT
	<p>A. Write 'M' against the man-made things and 'N' against the natural things in the boxes given below:-</p> <div style="display: flex; justify-content: space-around; align-items: center;"> <div style="text-align: center;">  </div> <div style="text-align: center;"> <input style="width: 50px; height: 30px; border: 1px solid black;" type="text"/> </div> </div> <div style="display: flex; justify-content: space-around; align-items: center; margin-top: 20px;"> <div style="text-align: center;">  </div> <div style="text-align: center;"> <input style="width: 50px; height: 30px; border: 1px solid black;" type="text"/> </div> </div> <div style="display: flex; justify-content: space-around; align-items: center; margin-top: 20px;"> <div style="text-align: center;">  </div> <div style="text-align: center;"> <input style="width: 50px; height: 30px; border: 1px solid black;" type="text"/> </div> </div> <div style="display: flex; justify-content: space-around; align-items: center; margin-top: 20px;"> <div style="text-align: center;">  </div> <div style="text-align: center;"> <input style="width: 50px; height: 30px; border: 1px solid black;" type="text"/> </div> </div>	4X1=4	Analytical Skill



ARMY PUBLIC SCHOOL GWALIOR

CLASS -I

ACADEMIC SESSION 2021-22





WORKSHEET (SELF –ASSESSMENT)



Subject: G.K

Assignment No. : 3

Allotment Date: 15 June 2021

S. NO.	QUESTIONS	MARKS	NATURE
1	<p>Match the food items with their test</p>  <p><u>BITTER</u></p>  <p><u>SWEET</u></p>  <p><u>SALTY</u></p>  <p><u>SOUR</u></p>	4X1=4 marks	informative ,critical thinking and Interdisciplinary,
2	<p>Write the name of the body parts with the activities we do with them.</p> <p>a) Writing - _____</p> <p>b) Walking - _____</p> <p>c) Smelling - _____</p>	6x1=6 marks	Critical Thinking, Problem Solving and Interdisciplinary

- d) To taste dishes - _____
- e) To hear different voices - _____
- f) To see - _____

3

Look at these pictures of stories .Select the correct name of the story and write using the help box given below.

(The Ant and The Grasshopper, The Boy Who Cried Wolf, Tenali Raman And Two Thieves, The Blue Jackal, The Turtle That Fell Off The Stick, The Hare And The Tortoise)



4X1=4
marks

Informative and
Communication
Skill




4

Match the names of these famous films with their characters

- | | |
|-----------------------------|----------|
| 1. How to Train Your Dragon | Nemo |
| 2. Monsters University | Elsa |
| 3. The Lion King | Po |
| 4. Kung Fu Panda | Simba |
| 5. Frozen | Sulley |
| 6. Tangled | Gru |
| 7. Despicable Me | Rapunzel |
| 8. Finding Dory | Hiccup |

8x1=8
marks

HOTS,
Informative,
Critical thinking,
Analytical skill



ARMY PUBLIC SCHOOL GWALIOR

CLASS -I

ACADEMIC SESSION 2021-22

WORKSHEET (SELF –ASSESSMENT)



Subject: Work Education

Assignment No. : 3

Allotment Date: 15 June 2021

S.no	Questions	Marks
1.	Which state is famous for Kathputli Dance of puppets? <ul style="list-style-type: none">• Madhya Pradesh• Rajasthan• Bihar	3 x 2 = 6
2.	What is the other name of Hand Puppet? <ul style="list-style-type: none">• Marionette (String Puppet)• Toy puppet• Khilona	
3.	Why do we use puppets? <ul style="list-style-type: none">• For teaching only• for good visual representation to use while singing, dancing and storytelling.• Just for story telling	

4.




4x1=4

Look at the picture of these hand puppets. Count and write the number of colours you can see here. Also write the name of those colours.

Number of colours - _____

Name of the colours - _____



ARMY PUBLIC SCHOOL GWALIOR



CLASS -I

ACADEMIC SESSION 2021-22

WORKSHEET (SELF –ASSESSMENT)

Subject: Art Education

Assignment No. : 3

Allotment Date: 15 June 2021

S.no	Questions	Marks
1.	<p>Violet (Purple) colour is the result of mixing -</p> <ul style="list-style-type: none">• red + yellow + blue• red + blue + green• green + yellow + red	5 x 2 = 10
2.	<p>Yellow, red, and _____ are Warm colours.</p> <ul style="list-style-type: none">• white• orange• blue	
3.	<p>Secondary colours are obtained by mixing two _____ .</p> <ul style="list-style-type: none">• All colours• Secondary colours• Primary colours	

4. Colour is an element of _____

- art
- book
- study

5. Blue, green and purple are _____ colours.

- hot
- cool
- bad



ARMY PUBLIC SCHOOL GWALIOR



CLASS -I

ACADEMIC SESSION 2021-22

WORKSHEET (SELF –ASSESSMENT)

Subject: Health and Physical Education

Assignment No. : 3

Allotment Date: 15 June 2021

S.no	Question	Marks	Nature
	Fill in the blanks	10 x 1 = 10	
1.	Dhanraj pilla is a player of _____. a) Hockey b) Cricket c) Football d) Basketball		Informative
2.	_____ player plays cricket. a) Cristiano ronaldo b) Geeta phogat c) Sachin tendulkar d) Saniya nehwal		Understanding
3.	Geeta phogat is the player of _____. a) Wrestling b) Football c) Basketball d) boxing		Informative
	True/False		
4.	Sachin Tendulkar is the player of cricket		Informative
5.	Cristiano Ronaldo plays basketball		Understanding
6.	Geeta Phogat is a wrestler		Informative

Multiple choice question.

7. Name the body part



- a) Ankle
- b) Knee
- c) Elbow
- d) Wrist

Understanding

8. Name the body part



- a) Ankle
- b) Knee
- c) Elbow
- d) Wrist

Understanding

9. Name the boxing player :-



- a) Mary Kom
- b) Sachin Tendulkar
- c) Dhanraj Pillay
- d) Geeta phogat


Analytical skill

10. Name the badminton player :-

Analytical skill



- a) Mary Kom
- b) Sachin Tendulkar
- c) Geeta phogat
- d) Saniya nehwal



ARMY PUBLIC SCHOOL GWALIOR



CLASS -I

ACADEMIC SESSION 2021-22

WORKSHEET (SELF -ASSESSMENT)

Subject: Discipline

Assignment No. : 3

Allotment Date: 15 June 2021

Skills for 21st century-

S.N O	QUESTIONS	MARK S	NATURE
1.	Fill in the blanks (i) Discipline is a _____ (quality, ability) (ii) To be disciplined is a _____ (habit, practice) (iii) All natural things follow _____ (discipline, order)	3	UNDERSTANDIN G
2.	Tick \sqrt true or false \times (i) It is ok to get up on late every morning ____ (ii) We should listen to Mom, dad and elders_____ (iii) We should finish our work on time _____ (iv) We should spend our time wisely with mobile, tablets or online games.	4	THINKING
3.	Write a good habit you have. _____ _____ _____ _____	2	UNDERSTANDIN G
4.	Please mention a bad habit you want to change _____ _____ _____ _____	1	AWARENESS



ARMY PUBLIC SCHOOL GWALIOR



CLASS -I

ACADEMIC SESSION 2021-22

WORKSHEET (SELF –ASSESSMENT)

Subject: Music


Assignment No. : 3

Allotment Date: 15 June 2021

S. NO.	प्रश्न	अंक	प्रकृति
1.	तीन ताल में कितने विभाग होते हैं? (अ) 4 (ब) 5 (स) 6	1 marks	बोधात्मक
2.	8 माता वाली ताल को क्या कहते हैं? (अ) तीन ताल (ब) कहरवा ताल (स) दादरा ताल	1 marks	बोधात्मक
3.	तीन ताल में कितनी खाली होती है ? (अ) 6 (ब) 4	1 marks	सूचनापरक

	(स) 1		
4.	कहरवा ताल में कितनी मात्रा होती है ? (अ) 3 (ब) 7 (स) 8	1 marks	गहनसोच
5.	कहरवा ताल में कितनी खाली होती है? (अ) 7 (ब) 4 (स) 1	1 marks	अंतःविषयात्मक
6.	दादरा ताल में कितनी मात्रा होती है ? (अ) 9 (ब) 8 (स) 6	1 marks	समस्यासमाधान
7.	दादरा ताल में कितने विभाग होते हैं? (अ) 2 (ब) 4 (स) 7	1 marks	गहनसोचऔर समस्यासमाधान
8.	तीन ताल में कितनी मात्रा होती है ? (अ) 16 (ब) 12 (स) 15	1 marks	गहनसोच
9.	कहरवा ताल में कितने विभाग होते हैं? (अ) 2	1 marks	उच्चस्तरीय चिंतन

	(ब) 4 (स) 8		
10.	तीन ताल में कितनी ताली होती है? (अ) 6 (ब) 4 (स) 3	1 marks	उच्चस्तरीय



ARMY PUBLIC SCHOOL GWALIOR



CLASS -I

ACADEMIC SESSION 2021-22

WORKSHEET (SELF –ASSESSMENT)

Subject: Library

Assignment No. : 3

Allotment Date: 15 June 2021

S.NO	QUESTIONS	MARKS	NATURE
1	What was the name of the given story ? _____	01	Comprehension
2	Where did they search for food ? _____	01	Understanding
3	Who came to live there ? _____	01	Analysis
4	What bad habits did she have? _____	01	Logical reasoning
5	How did she clean herself? _____	01	Comprehension
6	Why did the mice begin to get worried? _____	01	Analysis
7	What did they make up their minds to do ? _____	01	Understanding
8	What was the young mouse's plan ? _____	01	Comprehension

9	What did the wise old mouse ask ? _____	01	Comprehen sion
10	Why would the plan not work? _____	01	Understand ing